

**Delhi Police
Head Constable**

**Previous Year Paper
(Ministerial) 12 Oct 2022
Shift 2**

Head Constable Ministerial in Delhi Police Examination 2022

Roll Number	
Candidate Name	
Venue Name	
Exam Date	12/10/2022
Exam Time	1:00 PM - 2:30 PM
Subject	Head Constable Ministerial in Delhi Police Examination 2022

Section : **Part-A-General Awareness**

Q.1 _____rejected the superstitious beliefs in Hinduism and gave the slogan ‘Go back to Vedas’.

- Ans**
- ☒ 1. Swami Sahajanand
 - ☒ 2. Atma Ram Pandurang
 - ☒ 3. Ishwar Chandra Vidyasagar
 - ☒ 4. Swami Dayanand Sarasvati

Question ID : **26433054299**
Status : **Answered**
Chosen Option : **4**

Q.2 Who among the following is the constitutional head of the Union executive?

- Ans**
- ☒ 1. The President
 - ☒ 2. The Prime Minister
 - ☒ 3. The Vice President
 - ☒ 4. The Chief Justice

Question ID : **26433055536**
Status : **Not Attempted and Marked For Review**
Chosen Option : **--**

Q.3 Lavani is a popular dance of which state?

- Ans**
- ☒ 1. Maharashtra
 - ☒ 2. Odisha
 - ☒ 3. Haryana
 - ☒ 4. Uttar Pradesh

Question ID : **26433064380**
Status : **Answered**
Chosen Option : **1**

Q.4 Profits and dividends accrued from public sector enterprises are a part of ____.

- Ans ☒ 1. non-tax revenue
- ☒ 2. capital revenue
- ☒ 3. tax revenue
- ☒ 4. gross revenue

Question ID : 26433059236
Status : Not Answered
Chosen Option : --

Q.5 Who among the following kings founded the Nalanda Mahavihara?

- Ans ☒ 1. Samudragupta
- ☒ 2. Kumargupta I
- ☒ 3. Chandragupta I
- ☒ 4. Kumargupta II

Question ID : 26433064344
Status : Not Answered
Chosen Option : --

Q.6 Which is the the first State in the country to embark on Beyond Visual Line of Sight (BVLoS) flights to deliver a payload comprising vaccines, with the launch of "Medicine from the Sky" project in September 2022?

- Ans ☒ 1. Karnataka
- ☒ 2. Telangana
- ☒ 3. Andhra Pradesh
- ☒ 4. Kerala

Question ID : 26433095286
Status : Not Answered
Chosen Option : --

Q.7 The Wangala festival is mainly celebrated by which tribe?

- Ans ☒ 1. Tharu
- ☒ 2. Munda
- ☒ 3. Garo
- ☒ 4. Bheel

Question ID : 26433064389
Status : Not Answered
Chosen Option : --

Q.8 In 2022, in which of the following states did the government announce a scheme to set up four science parks and 14 district skill parks for young entrepreneurs to start ventures?

- Ans ☒ 1. Kerala
- ☐ 2. Assam
- ☐ 3. Andhra Pradesh
- ☐ 4. Odisha

Question ID : 26433054830
Status : Not Answered
Chosen Option : --

Q.9 The _____Five-Year Plan was terminated by the new Janata Party government one year before its completion.

- Ans ☐ 1. seventh
- ☒ 2. fifth
- ☐ 3. fourth
- ☐ 4. sixth

Question ID : 26433064109
Status : Not Answered
Chosen Option : --

Q.10 As per 2011 census, which of the following States/Union Territories has the highest density of population?

- Ans ☐ 1. Maharashtra
- ☒ 2. National capital territory of Delhi
- ☐ 3. Uttar Pradesh
- ☐ 4. Chandigarh

Question ID : 26433055333
Status : Answered
Chosen Option : 2

Q.11 What is the full form of NFWP, launched by Central Government of India on 14 November 2004?

- Ans ☐ 1. National Food and Wheat Processing
- ☒ 2. National Food for Work Programme
- ☐ 3. National Forest for Wildlife Protection
- ☐ 4. National Federation for Work and Progress

Question ID : 26433081927
Status : Not Attempted and Marked For Review
Chosen Option : --

Q.12 What is the distance between the rail tracks in a broad gauge?

- Ans
- ☒ 1. 1.76 m
 - ☒ 2. 1.59 m
 - ☒ 3. 1.79 m
 - ☒ 4. 1.67 m

Question ID : 26433054979
Status : Not Answered
Chosen Option : --

Q.13 Elephantiasis is also known as lymphatic filariasis, it's caused by parasitic worms, and can spread from person to person through _____

- Ans
- ☒ 1. Reptiles
 - ☒ 2. Virus
 - ☒ 3. Mosquitoes
 - ☒ 4. Protozoa

Question ID : 26433095252
Status : Answered
Chosen Option : 4

Q.14 Rajya Sabha passed _____ on 2 December 2021, which provides for surveillance, inspection, operation and maintenance of dams, for prevention of dam failure related disaster, and also makes provision for institutional mechanisms to ensure their safe functioning.

- Ans
- ☒ 1. National Dam Safety Bill (2020)
 - ☒ 2. Dams Bill (2021)
 - ☒ 3. National Dam Bill (2020)
 - ☒ 4. Dam Safety Bill (2019)

Question ID : 26433055034
Status : Not Attempted and Marked For Review
Chosen Option : --

Q.15 Who among the following travellers to India was a Portuguese?

- Ans
- ☒ 1. Duarte Barbosa
 - ☒ 2. Francois Bernier
 - ☒ 3. Nicolo de Conti
 - ☒ 4. Marco Polo

Question ID : 26433064281
Status : Not Answered
Chosen Option : --

Q.16 From which of the following Viceroys of India did Hume obtain permission for the first session of the Indian National Congress?

- Ans
- ☒ 1. Lord Curzon
 - ☒ 2. Lord Ripon
 - ☒ 3. Lord Dufferin
 - ☒ 4. Lord Elgin

Question ID : 26433064609
Status : Answered
Chosen Option : 1

Q.17 Speculative demand for money and interest rate have _____.

- Ans
- ☒ 1. direct relation
 - ☒ 2. constant relation
 - ☒ 3. no relation
 - ☒ 4. inverse relation

Question ID : 26433059102
Status : Not Answered
Chosen Option : --

Q.18 The 2022 elections in Manipur were held in _____ phases.

- Ans
- ☒ 1. two
 - ☒ 2. five
 - ☒ 3. four
 - ☒ 4. three

Question ID : 26433061825
Status : Not Answered
Chosen Option : --

Q.19 The transition season from hot rainy season to dry winter conditions in India takes place in _____ with the monsoons withdrawing from the Northern Plains and entering the south part of the country.

- Ans
- ☒ 1. March-May
 - ☒ 2. June-July
 - ☒ 3. October-November
 - ☒ 4. January-February

Question ID : 26433064097
Status : Answered
Chosen Option : 3

Q.20 Which state launched the Khel Nursery Scheme 2022-23 to establish sports nurseries in government, private educational institutions, and private sports institutions?

- Ans ☒ 1. Haryana
☐ 2. Punjab
☐ 3. Manipur
☐ 4. Rajasthan

Question ID : 26433061812
Status : Answered
Chosen Option : 1

Section : Part-B-Quantitative Aptitude

Q.1 During a journey of 100 km, a driver drives the first 50 km at a speed of 50 km/h, the next 25 km at 50 km/h and the remaining 25 km at a speed of 25 km/h. Determine the average speed.

- Ans ☐ 1. 50 km/h
☐ 2. 43 km/h
☒ 3. 40 km/h
☐ 4. 33.33 km/h

Question ID : 26433071300
Status : Answered
Chosen Option : 3

Q.2 If $\sin \theta + \cos \theta = K$ and $\sec \theta + \operatorname{cosec} \theta = m$, find the value of $m(K^2 - 1)$.





- Ans ☐ 1. M
☐ 2. 2M
☐ 3. K
☒ 4. 2K

Question ID : 26433061767
Status : Answered
Chosen Option : 4

Q.3 The following table shows the percentage of marks obtained by five students - V, W, X, Y and Z - in five subjects.





Subjects →	Maths	Physics	Chemistry	Botany	Hindi
Maximum Marks →	300	300	200	100	100
Students ↓					
V	60	80	90	100	95
W	90	70	80	70	40
X	70	90	95	80	75
Y	80	60	70	95	80
Z	90	50	80	85	85

The Chemistry marks of obtained by student W is how much more/less than Chemistry marks of obtained by student Y?

- Ans  1. 20 more
-  2. 25 less
-  3. 30 less
-  4. 15 more

Question ID : 26433066153
Status : Not Attempted and Marked For Review
Chosen Option : --

Q.4 Find the least number which is exactly divisible by 42, 56, 62 and 70.

- Ans  1. 27010
-  2. 26040
-  3. 26082
-  4. 26096





Question ID : 26433063663
Status : Answered
Chosen Option : 2

Q.5 Find the simplest value of $\frac{6.25-1.96}{1.1}$.

- Ans  1. 3.8
-  2. 4
-  3. 2.9
-  4. 3.9

Question ID : 26433063441
Status : Answered
Chosen Option : 4

Q.6 At a workplace, one man alone can complete a work in 32 days. If the entire staff, i.e. 6 women and 4 men can complete the work in 6 days, how many days will one woman alone take to complete the entire work?

- Ans  1. 244
-  2. 86
-  3. 154
-  4. 144

Question ID : 26433058245
Status : Answered
Chosen Option : 4

Q.7 What is the total surface area of a cone having a height of 12 cm and a slant height of 13 cm?
(Take $\pi = 3.14$)

- Ans
- ☒ 1. 264.71 cm²
 - ☒ 2. 282.6 cm²
 - ☒ 3. 292.4 cm²
 - ☒ 4. 136.36 cm²

Question ID : 26433058809
Status : Answered
Chosen Option : 2

Q.8 A can complete a task in 24 days and B can complete the same task in 36 days. They start working together but A works only for 4 days. The remaining work is completed by B. If the contract to complete the work is for ₹4,800, then what is B's share (in ₹)?

- Ans
- ☒ 1. 4,400
 - ☒ 2. 2,400
 - ☒ 3. 4,000
 - ☒ 4. 3,600

Question ID : 26433061912
Status : Not Attempted and Marked For Review
Chosen Option : --

Q.9 The sum of the coefficients of $x^4 y^2$ and $x^2 y^4$ in the product of $(-3xy^2 + 1)$ and $7x^3 - 5x^2 y - 2y^3 + 3xy^2 + 2x - 5$ is _____.

- Ans
- ☒ 1. 30
 - ☒ 2. 28
 - ☒ 3. -30
 - ☒ 4. -28

Question ID : 26433061342
Status : Answered
Chosen Option : 3

Q.10 Shyamal takes a loan from Shubham for 2 years at the rate of 8% per annum on simple interest and after 2 years he gave back Rs.41,296 to Shubham and completed the payment of his loan. Find the interest paid by Shyamal.

- Ans
- ☒ 1. Rs.5,680
 - ☒ 2. Rs.5,696
 - ☒ 3. Rs.5,690
 - ☒ 4. Rs.5,699

Question ID : 26433074932
Status : Answered
Chosen Option : 2

Q.11 A man increases his speed to $\frac{11}{6}$ times of his original speed. By doing this he reaches his office 20 minutes before the usual time. Find the time he usually takes.

- Ans
- ☒ 1. 40 minutes
 - ☒ 2. 44 minutes
 - ☒ 3. 25 minutes
 - ☒ 4. 42 minutes

Question ID : 26433061161
Status : Answered
Chosen Option : 2

Q.12 The area of a sector of a circle of radius 18 cm is $54\pi \text{ cm}^2$. Find the length of the corresponding arc of the sector.

- Ans
- ☒ 1. $8\pi \text{ cm}$
 - ☒ 2. $5\pi \text{ cm}$
 - ☒ 3. $7\pi \text{ cm}$
 - ☒ 4. $6\pi \text{ cm}$

Question ID : 26433066335
Status : Answered
Chosen Option : 4

Q.13 Which of the following is the smallest fraction?

- Ans
- ☒ 1. $\frac{12}{15}$
 - ☒ 2. $\frac{7}{12}$
 - ☒ 3. $\frac{4}{7}$
 - ☒ 4. $\frac{11}{16}$

Question ID : 26433058792
Status : Answered
Chosen Option : 3

Q.14 In an election contested by two candidates, one candidate got 26% of the total votes casted and lost by 2280 votes. Find the total number of votes casted.

- Ans
- ☒ 1. 4780
 - ☒ 2. 4250
 - ☒ 3. 4750
 - ☒ 4. 4080

Question ID : 26433063685
Status : Not Answered
Chosen Option : --

Q.15 What will be the simple to compound interest (compounded annually) ratio on two identical funds put in a bank at an interest rate of 8% (per annum) for three years?

- Ans ☒ 1. 3 : 4
- ☒ 2. 1875 : 2029
- ☒ 3. 3 : 5
- ☒ 4. 243 : 342

Question ID : 26433057136
Status : Answered
Chosen Option : 3

Q.16 If the sum of all the prime numbers is 'x' and that of all the odd prime numbers is 'y', then what is the value of x - y?

- Ans ☒ 1. 1
- ☒ 2. 0
- ☒ 3. 2
- ☒ 4. ∞

Question ID : 26433079838
Status : Answered
Chosen Option : 3

Q.17 If $\frac{2x}{5x^2 + 10x - 5} = 1$, then find the value of $(x - \frac{1}{x})$

- Ans ☒ 1. $-\frac{8}{5}$
- ☒ 2. 0
- ☒ 3. $\frac{5}{2}$
- ☒ 4. -1

Question ID : 26433061435
Status : Not Answered
Chosen Option : --

Q.18 A cone has base radius 8 cm and vertical height 15 cm. What is its total surface area (in cm^2 , rounded off to the nearest integer)? (Take $\pi = \frac{22}{7}$)

- Ans ☒ 1. 578
- ☒ 2. 629
- ☒ 3. 721
- ☒ 4. 427

Question ID : 26433063265
Status : Answered
Chosen Option : 2

Q.19 Gita bought two dresses for ₹2,800 each. If she sells one at a profit of 10%, then at what profit percentage she should sell the other dress to make a profit of 15% on the whole?

- Ans ☒ 1. 5%
- ☒ 2. 20%
- ☒ 3. 10%
- ☒ 4. 15%

Question ID : 26433058906
Status : Answered
Chosen Option : 2


Q.20 Kalpana receives 25% discount on the purchase of an oven marked for Rs.3,600. She receives an additional 2% discount for paying cash. How much does she pay for the oven?

- Ans ☒ 1. Rs.2,708
- ☒ 2. Rs.2,646
- ☒ 3. Rs.2,520
- ☒ 4. Rs.2,545

Question ID : 26433065278
Status : Answered
Chosen Option : 2

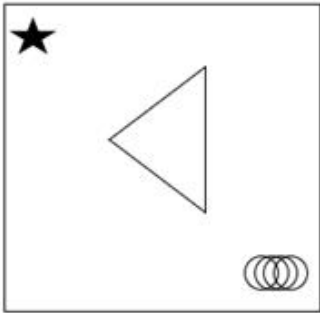
Section : Part-C-General Intelligence

Q.1 Select the figure that will come next in the following figure series.

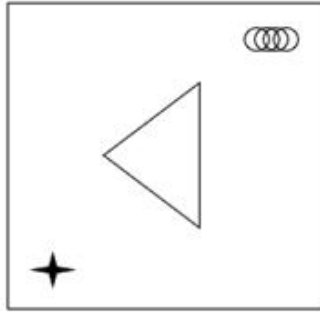


Ans

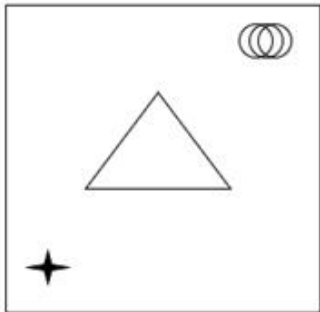
✗ 1.



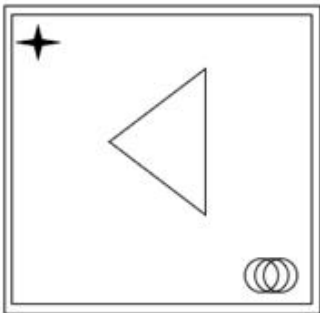
✓ 2.



✗ 3.

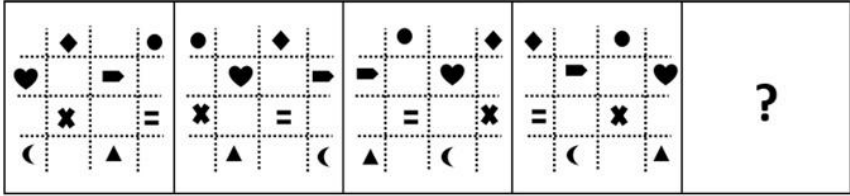


✗ 4.




Question ID : 26433057527
Status : Answered
Chosen Option : 2

Q.2 Select the figure that will replace the question mark (?) in the following figure series.




Ans


✗ 1.




✗ 2.



✓ 3.

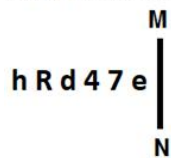


✗ 4.



Question ID : 26433056097
Status : Answered
Chosen Option : 3

Q.3 Select the correct mirror image of the given figure when the mirror is placed at MN as shown below.



- Ans
- ✓ 1. e 7 4 b R h
 - ✗ 2. e 7 4 b R h
 - ✗ 3. e 7 4 b R h
 - ✗ 4. e 7 4 b R h

Question ID : 26433056982
Status : Answered
Chosen Option : 1

Q.4 Select the option that is related to the fourth number in the same way as the first number is related to the second number and the fifth number is related to the sixth number.
74 : 37 :: ? : 26 :: 148 : 74

- Ans
- ✗ 1. 74
 - ✗ 2. 68
 - ✗ 3. 84
 - ✓ 4. 52

Question ID : 26433056488
Status : Answered
Chosen Option : 4

Q.5 Select the option that is related to the fifth letter-cluster in the same way as the second letter-cluster is related to the first letter-cluster and the fourth letter-cluster is related to the third letter-cluster.
GARNISH : RAGHSIN :: DOLEFUL : LODLUFE :: ABOLISH : ?

- Ans
- ✗ 1. BOLISHA
 - ✗ 2. HSILOBA
 - ✓ 3. OBAHSIL
 - ✗ 4. LOBAHSIL

Question ID : 26433056400
Status : Answered
Chosen Option : 3

Q.6 Select the combination of letters that when sequentially placed in the blanks of the given series, will complete the series.
WXYZ _ WXY _ Z _ XX _ ZWW

- Ans
- ✗ 1. WYWZ
 - ✓ 2. ZYWY
 - ✗ 3. ZYYZ
 - ✗ 4. WZZW

Question ID : 26433057739
Status : Answered
Chosen Option : 2

Q.7 A is the mother of C. D and E are the brothers of G. G is the father of C. H is the son of E.
How is H related to A?

- Ans ☒ 1. Husband's brother's son
- ☐ 2. Brother
- ☐ 3. Son
- ☐ 4. Father

Question ID : 26433074718
Status : Answered
Chosen Option : 1

Q.8 Select the number from among the given options that can replace the question mark (?) in the following series.
25, 36, 48, 61, 75, ?

- Ans ☐ 1. 86
- ☐ 2. 94
- ☐ 3. 81
- ☒ 4. 90

Question ID : 26433057782
Status : Answered
Chosen Option : 4

Q.9 Select the set in which the numbers are related in the same way as are the numbers of the following sets.
(NOTE: Operations should be performed on the whole numbers, without breaking down the numbers into its constituent digits. E.g. 13 – Operations on 13 such as adding/deleting/multiplying etc. to 13 can be performed. Breaking down 13 into 1 and 3 and then performing mathematical operations on 1 and 3 is not allowed.)
(8, 32, 68)
(5, 20, 44)

- Ans ☐ 1. (11, 42, 164)
- ☒ 2. (4, 16, 36)
- ☐ 3. (9, 20, 44)
- ☐ 4. (7, 28, 58)

Question ID : 26433057609
Status : Answered
Chosen Option : 2

Q.10 Select the correct combination of mathematical signs to sequentially replace the * signs and to balance the given equation.
 $255 * 376 * 94 * 502 * 388 = 638 * 268$

- Ans ☐ 1. $\times, \div, +, -, +$
- ☐ 2. $+, \div, \times, +, -$
- ☐ 3. $\div, \times, +, -, -$
- ☒ 4. $\times, \div, -, +, +$

Question ID : 26433056517
Status : Not Answered
Chosen Option : --

Q.11 'A @ B' means 'A is the husband of B'.
'A & B' means 'A is the parent of B'.
'A # B' means 'A is the brother of B'.
'A % B' means 'A is the wife of B'.

If G @ H & N # K % Y, then how is G related to Y?

- Ans ☒ 1. Father-in-law
☐ 2. Father
☐ 3. Mother's Brother
☐ 4. Father's father

Question ID : 26433055304
Status : Answered
Chosen Option : 1

Q.12 Select the numbers from among the given options that can replace the question marks (?) in the following series.
76, 55, 97, 99, 118, 143, ?, ?

- Ans ☐ 1. 140, 187
☐ 2. 139, 180
☐ 3. 141, 165
☒ 4. 139, 187

Question ID : 26433057049
Status : Answered
Chosen Option : 1

Q.13 Seven people A, B, C, D, E, F and G are sitting in a straight row facing north. Only two people sit to the left of E. Only three people sit between E and C. B sits second to the right of A. B is not an immediate neighbour of C. D sits to the immediate right of G. Who sits at the middle of the row?

- Ans ☒ 1. B
☐ 2. D
☐ 3. C
☐ 4. E

Question ID : 26433068641
Status : Not Answered
Chosen Option : --

Q.14 Select the option that is related to the fifth term in the same way as the second term is related to the first term and the fourth term is related to the third term.
GRAB : JVFH :: BUST : EYZX :: DIPS : ?

- Ans ☐ 1. HNUY
☐ 2. GMTZ
☒ 3. GMUY
☐ 4. GNVZ

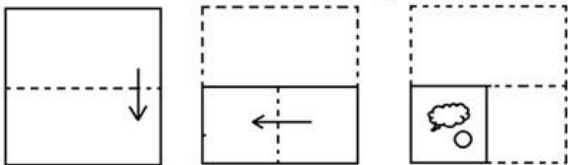
Question ID : 26433058012
Status : Answered
Chosen Option : 3

Q.15 In a code language, 'close the window' is coded as 'ja pa la', 'window is opened' is coded as 'ma du la', 'door is strong' is coded as 'na ta ma'. What is the code for the word 'opened'?

- Ans
- ☒ 1. la
 - ☒ 2. pa
 - ☒ 3. ma
 - ☒ 4. du

Question ID : 26433057286
Status : Answered
Chosen Option : 4

Q.16 The sequence of folding a piece of paper and the manner in which the folded paper has been cut is shown below. Choose the figure that would most closely resemble the unfolded form of the paper.



Ans

- ☒ 1.
- ☒ 2.
- ☒ 3.
- ☒ 4.

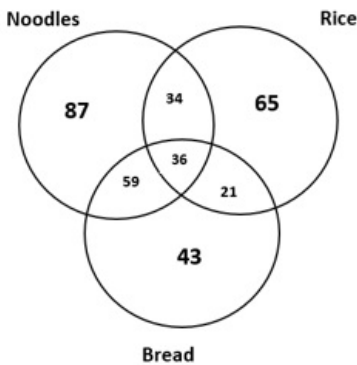
Question ID : 26433067440
Status : Answered
Chosen Option : 3

Q.17 Which of the following options represents the correct order of the given words as they would appear in the English dictionary?
1. Insolent
2. Insert
3. Insect
4. Inscribe
5. Inshore

- Ans ☒ 1. 2,3,5,1,4
☒ 2. 4,2,3,5,1
☒ 3. 4,3,2,5,1
☒ 4. 3,2,4,5,1

Question ID : 26433068765
Status : Answered
Chosen Option : 3

Q.18 Study the given diagram carefully and answer the questions. The numbers in different sections indicate the number of people who like different food items.
How many people do NOT prefer bread?



- Ans ☒ 1. 43
☒ 2. 36
☒ 3. 151
☒ 4. 186

Question ID : 26433069372
Status : Answered
Chosen Option : 4

Q.19 In a certain code language, 'VITAL' is coded as K49W and 'WOMAN' is coded as M51X. How will 'POWER' be coded in that language?

- Ans ☒ 1. Q72M
☒ 2. Q62Q
☒ 3. M78S
☒ 4. M60S

Question ID : 26433074712
Status : Not Attempted and Marked For Review
Chosen Option : --

Q.20 Three statements are given followed by three conclusions numbered I, II and III. Assuming the statements to be true, even if they seem to be at variance with commonly known facts, decide which of the conclusions logically follow(s) from the statements.

Statements:

All capsicums are chilies.

All chilies are cucumbers.

All cucumbers are gourds.

Conclusions:

I. Some cucumbers are capsicums.

II. All gourds are capsicums.

III. All chilies are gourds.

- Ans ☒ 1. All the conclusions follow
- ☒ 2. Only conclusions I and II follow
- ☒ 3. Only conclusions II and III follow
- ☒ 4. Only conclusions I and III follow

Question ID : 26433076531
Status : Answered
Chosen Option : 4

Q.21 Which two signs should be interchanged to make the given equation correct?
 $36 \times 4 \div 2 + 20 - 54 = 22$

- Ans ☒ 1. \times and $-$
- ☒ 2. $+$ and \times
- ☒ 3. \div and \times
- ☒ 4. $-$ and \div

Question ID : 26433056853
Status : Answered
Chosen Option : 2

Q.22 Based on the position in the English alphabetical order, three of the following letter-clusters are alike in some manner and one is different. Select the odd letter-cluster.

- Ans ☒ 1. LTPR
- ☒ 2. SBWY
- ☒ 3. VDZB
- ☒ 4. FNJL

Question ID : 26433095716
Status : Answered
Chosen Option : 2

Q.23 Which letter cluster will replace the question mark (?) to complete the given series?
DINS , GLQV, JOTY, ?, PUZE

- Ans ☒ 1. RWMB
- ☒ 2. WBMR
- ☒ 3. WBPQ
- ☒ 4. MRWB

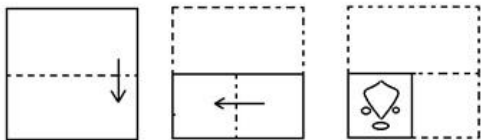
Question ID : 26433065593
Status : Answered
Chosen Option : 4

Q.24 A, B, C, D, E, F, G and H are sitting around a square table, facing towards the centre of the table. Some of them are sitting at the corners while some are sitting at the exact centre of the sides. G is sitting at a corner. B is second to the left of G. D is an immediate neighbour of B and G. H is third to the left of B. Exactly two people are sitting between E and B. C doesn't sit at any of the corners. A is to the immediate right of E. What is the position of F?

- Ans
- ✗ 1. Third to the right of D
 - ✗ 2. Immediate left of H
 - ✗ 3. Fourth to the left of E
 - ✓ 4. Third to the left of D

Question ID : 26433068816
Status : Answered
Chosen Option : 4

Q.25 The sequence of folding a piece of paper and the manner in which the folded paper has been cut is shown below. Choose a figure which would most closely resemble the unfolded form of the paper.



Ans

- ✗ 1.
- ✗ 2.
- ✗ 3.
- ✓ 4.

Question ID : 26433057415
Status : Answered
Chosen Option : 4

Q.1 Select the most appropriate ANTONYM of the underlined word.

Competence is such a thing that is developed by hard work only.

- Ans
- ☒ 1. Ability
 - ☒ 2. Non-competent
 - ☒ 3. Incompetence
 - ☒ 4. Potential

Question ID : 26433072093
Status : Answered
Chosen Option : 3

Q.2 Select the most appropriate ANTONYM of the given word.
General

- Ans
- ☒ 1. Limited
 - ☒ 2. Particular
 - ☒ 3. Famous
 - ☒ 4. Widespread

Question ID : 26433063110
Status : Answered
Chosen Option : 2

Q.3 Select the most appropriate option that can substitute the underlined segment in the given sentence. If there is no need to substitute it, select 'No substitution required'.

Could you tell me what time is it now?

- Ans
- ☒ 1. what time it is now?
 - ☒ 2. No substitution required
 - ☒ 3. how much time now?
 - ☒ 4. what time was it now?

Question ID : 26433063627
Status : Answered
Chosen Option : 1

Q.4 The following sentence has been divided into parts. One of them may contain an error. Select the part that contains the error from the given options. If you don't find any error, mark 'No error' as your answer.
Whoever is the bravest / shall claimed the throne / and become the ruler.

- Ans
- ☒ 1. and become the ruler
 - ☒ 2. Whoever is the bravest
 - ☒ 3. shall claimed the throne
 - ☒ 4. No error

Question ID : 26433059061
Status : Answered
Chosen Option : 3

Q.5 Select the most appropriate idiom or phrase to complete the given sentence.

It is easier to learn how a machine works from pictures rather than descriptions, since _____.

- Ans
- ☐ 1. its face is a picture
 - ☐ 2. it is pretty as a picture
 - ☐ 3. it takes a picture
 - ☒ 4. a picture paints a thousand words

Question ID : 26433056016
Status : Answered
Chosen Option : 4

Q.6 The following sentence has been split into four segments. Identify the segment that contains an INCORRECTLY spelt word.
The heinous crime committed in broad daylight / shocked everyone in the visinity and intimidated / the elderly people, particularly those who were / in the habit of going for evening walks to the community park.

- Ans
- ☐ 1. in the habit of going for evening walks to the community park
 - ☐ 2. The heinous crime committed in broad daylight
 - ☐ 3. the elderly people particularly those who were
 - ☒ 4. shocked everyone in the visinity and intimidated

Question ID : 26433058265
Status : Answered
Chosen Option : 4





Q.7 The following sentence has been split into four segments. Identify the segment that contains a grammatical error.

Ria is / the most / intelligent between / all of us.

- Ans
- ☐ 1. the most
 - ☐ 2. Ria is
 - ☒ 3. intelligent between
 - ☐ 4. all of us

Question ID : 26433061478
Status : Answered
Chosen Option : 3

Q.8 Sentences of a paragraph are given below. While the first and the last sentences (S1 and S6) are in the correct order, the sentences in between are jumbled up. Arrange the sentences in the correct order to form a meaningful and coherent paragraph.
S1. He charged three pies per question
A. till the other had spoken
B. and never opened his mouth
C. for at least ten minutes
D. which provided him enough stuff
S6. for a dozen answers and advices.

- Ans  1. DACB
 2. ABCD
 3. BACD
 4. ADCB

Question ID : 26433063578
Status : Answered
Chosen Option : 1




Q.9 Select the INCORRECTLY spelt word.

- Ans  1. Tangible
 2. Wholesome
 3. Novice
 4. Colum

Question ID : 26433066136
Status : Answered
Chosen Option : 4

Q.10 Select the idiom that can substitute the underlined group of words.

My old phone finally stopped working.

- Ans  1. Hit the hay
 2. Came up swinging
 3. Broke a leg
 4. Gave up the ghost

Question ID : 26433063653
Status : Answered
Chosen Option : 1

Q.11 Select the most appropriate synonym of the underlined word in the given sentence.
He felt awkward when the teacher asked him a question.

- Ans  1. uncomfortable
 2. easy
 3. relaxed
 4. convenient

Question ID : 26433055503
Status : Answered
Chosen Option : 1

Q.12 Select the most appropriate ANTONYM of the given word.

Strident

- Ans ☒ 1. Noiseless
- ☐ 2. Monumental
- ☐ 3. Clamorous
- ☐ 4. Notorious

Question ID : 26433063634
Status : Not Answered
Chosen Option : --

Q.13 Select the most appropriate ANTONYM of the underlined word.

Being humane with enemies is a rare quality.

- Ans ☐ 1. Womanish
- ☒ 2. Barbaric
- ☐ 3. Interesting
- ☐ 4. Manly

Question ID : 26433063640
Status : Answered
Chosen Option : 2

Q.14 Select the most appropriate ANTONYM of the underlined word.

Though for many the artifact did not fetch any value, it was precious for the artist.

- Ans ☐ 1. Rare
- ☒ 2. Worthless
- ☐ 3. Modern
- ☐ 4. Costly

Question ID : 26433073191
Status : Answered
Chosen Option : 2

Q.15 Select the most appropriate option that can substitute the underlined segment in the given sentence. If there is no need to substitute it, select 'No substitution'.

I could not find him nowhere.

- Ans ☐ 1. find him somewhere
- ☒ 2. find him anywhere
- ☐ 3. find him everywhere
- ☐ 4. No substitution

Question ID : 26433073252
Status : Answered
Chosen Option : 2

Q.16 Select the option that can be used as a one-word substitute for the given group of words.
Changing frequently

- Ans ☒ 1. Contiguous
☒ 2. Fickle
☒ 3. Flake
☒ 4. Certain

Question ID : 26433060741
Status : Answered
Chosen Option : 1

Q.17 Select the most appropriate option that can substitute the underlined segment in the given sentence.

No sooner the villagers saw the tiger, than they ran away.

- Ans ☒ 1. No sooner did the villagers see
☒ 2. No sooner did the villagers saw
☒ 3. As soon as the villagers saw
☒ 4. No sooner had the villagers seen

Question ID : 26433065177
Status : Answered
Chosen Option : 2

Q.18 Select the most appropriate option to fill in the blank.

These words of comfort, uttered with cheering tones, and accompanied with a look of inexpressible tenderness and _____, brought back peace for a while to her troubled spirit. They communicated together, and on parting, the magnanimous woman once more embraced her young friend; then stretching her hand toward heaven, said, "Be tranquil, Maria! by tomorrow morning we are there, and all our sorrows stay here behind us."

- Ans ☒ 1. anxiety
☒ 2. serenity
☒ 3. disruption
☒ 4. agitation

Question ID : 26433069769
Status : Answered
Chosen Option : 1

Q.19 Select the most appropriate option to fill in the blank.

The boy was _____ to work as a printer's apprentice at a young age

- Ans ☒ 1. impelled
☒ 2. compelled
☒ 3. deprived
☒ 4. justified

Question ID : 26433063763
Status : Answered
Chosen Option : 4

Q.20 Select the option that can be used as a one-word substitute for the given group of words.
Not quite coinciding with a central position

- Ans  1. Off-break
 2. Off-chance
 3. Off-centre
 4. Off-beat

Question ID : **26433060494**
Status : **Not Answered**
Chosen Option : --

Comprehension:

In the following passage, some words have been deleted. Read the passage carefully and select the most appropriate option to fill in each blank.

Each one of us is naturally a (1) _____ of a family that includes father, mother, brothers and sisters. Then there are other (2) _____ such as grand-parents, aunts, uncles, cousins, nephews, nieces etc. These relationships are a reality of our life for each one of us. Then we also have friends and colleagues (3) _____ whom we frequently interact. We have teachers (4) _____ enable us to learn and understand various things in life. We have recognised and identified these individuals, that we feel, understand us, have (5) _____ interests or tastes and we have an affinity for them.

SubQuestion No : 21

Q.21 Select the most appropriate option to fill in blank number 1.

- Ans  1. part
 2. segment
 3. division
 4. category

Question ID : **26433072487**
Status : **Answered**
Chosen Option : 1

Comprehension:

In the following passage, some words have been deleted. Read the passage carefully and select the most appropriate option to fill in each blank.

Each one of us is naturally a (1) _____ of a family that includes father, mother, brothers and sisters. Then there are other (2) _____ such as grand-parents, aunts, uncles, cousins, nephews, nieces etc. These relationships are a reality of our life for each one of us. Then we also have friends and colleagues (3) _____ whom we frequently interact. We have teachers (4) _____ enable us to learn and understand various things in life. We have recognised and identified these individuals, that we feel, understand us, have (5) _____ interests or tastes and we have an affinity for them.

SubQuestion No : 22

Q.22 Select the most appropriate option to fill in blank number 2.

- Ans  1. affiliations
 2. groups
 3. associations
 4. relations

Question ID : **26433072488**
Status : **Answered**
Chosen Option : 4

Comprehension:

In the following passage, some words have been deleted. Read the passage carefully and select the most appropriate option to fill in each blank.

Each one of us is naturally a (1) _____ of a family that includes father, mother, brothers and sisters. Then there are other (2) _____ such as grand-parents, aunts, uncles, cousins, nephews, nieces etc. These relationships are a reality of our life for each one of us. Then we also have friends and colleagues (3) _____ whom we frequently interact. We have teachers (4) _____ enable us to learn and understand various things in life. We have recognised and identified these individuals, that we feel, understand us, have (5) _____ interests or tastes and we have an affinity for them.

SubQuestion No : 23

Q.23 Select the most appropriate option to fill in blank number 3.

- Ans  1. of
 2. from
 3. out of
 4. with

Question ID : **26433072489**
Status : **Answered**
Chosen Option : **4**

Comprehension:

In the following passage, some words have been deleted. Read the passage carefully and select the most appropriate option to fill in each blank.

Each one of us is naturally a (1) _____ of a family that includes father, mother, brothers and sisters. Then there are other (2) _____ such as grand-parents, aunts, uncles, cousins, nephews, nieces etc. These relationships are a reality of our life for each one of us. Then we also have friends and colleagues (3) _____ whom we frequently interact. We have teachers (4) _____ enable us to learn and understand various things in life. We have recognised and identified these individuals, that we feel, understand us, have (5) _____ interests or tastes and we have an affinity for them.

SubQuestion No : 24

Q.24 Select the most appropriate option to fill in blank number 4.

- Ans  1. who
 2. whose
 3. whichever
 4. whom

Question ID : **26433072490**
Status : **Answered**
Chosen Option : **1**





Comprehension:

In the following passage, some words have been deleted. Read the passage carefully and select the most appropriate option to fill in each blank.

Each one of us is naturally a (1) _____ of a family that includes father, mother, brothers and sisters. Then there are other (2) _____ such as grand-parents, aunts, uncles, cousins, nephews, nieces etc. These relationships are a reality of our life for each one of us. Then we also have friends and colleagues (3) _____ whom we frequently interact. We have teachers (4) _____ enable us to learn and understand various things in life. We have recognised and identified these individuals, that we feel, understand us, have (5) _____ interests or tastes and we have an affinity for them.

SubQuestion No : 25

Q.25 Select the most appropriate option to fill in blank number 5.

- Ans  1. parallel
 2. adjacent
 3. same
 4. similar

Question ID : **26433072491**
Status : **Answered**
Chosen Option : **4**

Section : **Part-E- Computer Fundamentals**

Q.1 Which of the following features in MS-Word 2010 can be used to draw a straight line across the selected texts in a document?

- Ans  1. Strikethrough
 2. Eraser
 3. Format Painter
 4. Replace

Question ID : **26433095311**
Status : **Answered**
Chosen Option : **1**

Q.2 Which of the following shortcut key is used in MS-Word 2010 to apply double spacing to the paragraph?

- Ans  1. Ctrl + 1
 2. Ctrl + 2
 3. Ctrl + 5
 4. Ctrl + 4

Question ID : **26433095544**
Status : **Not Answered**
Chosen Option : **--**

Q.3 Unhide option is present in _____ tab in MS-Excel 2010 ribbon bar.

Ans ☒ 1. View

☒ 2. File

☒ 3. Data

☒ 4. Insert

Question ID : 26433095439
Status : Answered
Chosen Option : 1

Q.4 In MS-Word 2010, if you press the Tab key within a table, the cursor moves to the next _____ of the table.

Ans ☒ 1. Row

☒ 2. Line

☒ 3. Cell

☒ 4. Data

Question ID : 26433095371
Status : Answered
Chosen Option : 1

Q.5 Which of the following is a valid email address?

Ans ☒ 1. John123@.net

☒ 2. mySchool@gmail.com

☒ 3. abc@def@gmail.com

☒ 4. @domainname.com

Question ID : 26433095385
Status : Answered
Chosen Option : 2

Q.6 Which of the following effects is not available in the MS-Word 2010 font dialog box?

Ans ☒ 1. Subscript

☒ 2. Italic

☒ 3. Fancy

☒ 4. Bold

Question ID : 26433095543
Status : Answered
Chosen Option : 1

Q.7 _____ shortcut key is used to move to the previous sheet in MS-Excel 2010.

Ans ☒ 1. Alt+PageUp

☒ 2. Ctrl + PageDown

☒ 3. Ctrl + PageUp

☒ 4. Alt+ PageDown

Question ID : 26433095429
Status : Not Answered
Chosen Option : --

Q.8 Which of the following keyboard shortcuts is used to display non-editable HTML source code for the current page in Chrome browser?

- Ans ☒ 1. ALT + U
- ☒ 2. ALT + S
- ☒ 3. CTRL + U
- ☒ 4. CTRL + S

Question ID : 26433095317
Status : Not Answered
Chosen Option : --

Q.9 Consider the following statement about EXACT() function of MS-Excel 2010:
P: It compares two text strings and returns TRUE if they are exactly the same.
Q: It compares two text strings and returns 1 if they are not exactly the same.
R: It compares two text strings and returns FALSE if they are not exactly the same.
Which of the following statement(s) is/are true

- Ans ☒ 1. All P, Q, R
- ☒ 2. Only P
- ☒ 3. Only P and R
- ☒ 4. Only P and Q

Question ID : 26433095530
Status : Not Answered
Chosen Option : --

Q.10 Which of the following type of Internet service does not require cable or phone lines?

- Ans ☒ 1. DSL
- ☒ 2. Satellite
- ☒ 3. Dial up
- ☒ 4. Cable

Question ID : 26433095386
Status : Answered
Chosen Option : 2