

Head Constable Ministerial in Delhi Police Examination 2022

Roll Number	
Candidate Name	
Venue Name	
Exam Date	19/10/2022
Exam Time	1:00 PM - 2:30 PM
Subject	Head Constable Ministerial in Delhi Police Examination 2022

Section : Part-A-General Awareness

Q.1 Which Viceroy introduced a Vernacular Press Act in 1878?

- Ans
- ☒ 1. Viceroy Lord Ripon
 - ☒ 2. Viceroy Marquess of Wellesley
 - ☒ 3. Viceroy Lord Lytton
 - ☒ 4. Viceroy Lord Curzon

Question ID : 26433064731
Status : Answered
Chosen Option : 3

Q.2 In the given statements, which is NOT correct about migration in India?

- Ans
- ☒ 1. Migration does not depend on economic factors.
 - ☒ 2. Migration may be from urban to rural areas.
 - ☒ 3. Migration may be from rural to urban areas.
 - ☒ 4. Migration has pull and push factors.

Question ID : 26433071628
Status : Answered
Chosen Option : 1

Q.3 The famous Hornbill Festival of Nagaland begins every year on which day?

- Ans
- ☒ 1. 1 January
 - ☒ 2. 1 November
 - ☒ 3. 1 December
 - ☒ 4. 1 February

Question ID : 26433064388
Status : Answered
Chosen Option : 3

Q.4 The Delhi Special Police Establishment (Amendment) Bill, 2021, permits the extension of tenure of the Director of the Delhi Special Police Establishment by up to _____ at a time, till the completion of five years from the initial date of appointment.

- Ans
- ☒ 1. six months
 - ☒ 2. two years
 - ☒ 3. one year
 - ☒ 4. three months

Question ID : 26433061836

Status : Not Attempted and Marked For Review

Chosen Option : --

Q.5 Who was the Hindu ruler when Alauddin Khilji attacked Ranthambore in 1301?

- Ans
- ☒ 1. Karna
 - ☒ 2. Hammir Dev
 - ☒ 3. Ramdev
 - ☒ 4. Pratap Rudra Dev

Question ID : 26433095244

Status : Not Attempted and Marked For Review

Chosen Option : --

Q.6 Which section of the Indian Factory's Act states that creches should be maintained if more than 30 women are employed in an industry of factory?

- Ans
- ☒ 1. Section 38
 - ☒ 2. Section 48
 - ☒ 3. Section 37
 - ☒ 4. Section 52

Question ID : 26433066605

Status : Not Attempted and Marked For Review

Chosen Option : --

Q.7 Development in irrigation technology of India resulted in _____ in the net irrigated area.

- Ans
- ☒ 1. no change
 - ☒ 2. sudden decline
 - ☒ 3. decrease
 - ☒ 4. increase

Question ID : 26433069784

Status : Answered

Chosen Option : 4

Q.8 The Shore temple at Mahabalipuram is an example of the _____ school of temple architecture.

- Ans
- ☒ 1. Nayaka
 - ☒ 2. Hoysala
 - ☒ 3. Nagara
 - ☒ 4. Dravidian

Question ID : 26433064370
Status : Not Attempted and Marked For Review
Chosen Option : --

Q.9 Who was inducted as a full-time member in the Economic Advisory Council to the Prime Minister (EAC-PM) in February 2022?

- Ans
- ☒ 1. Sanjeev Sanyal
 - ☒ 2. Bibek Debroy
 - ☒ 3. V Anantha Nageswaran
 - ☒ 4. Krishnamurthy Subramanian

Question ID : 26433055046
Status : Not Attempted and Marked For Review
Chosen Option : --

Q.10 Toothbrush, cycle, bread are examples of which types of goods?

- Ans
- ☒ 1. Inferior goods
 - ☒ 2. Consumer goods
 - ☒ 3. Capital goods
 - ☒ 4. Intermediate goods

Question ID : 26433059253
Status : Answered
Chosen Option : 4

Q.11 Which mountain range is bound by the Satpura range on the south and the Aravalli on the northwest from the following?

- Ans
- ☒ 1. Malwa
 - ☒ 2. Bagelkhand
 - ☒ 3. Vindhyan
 - ☒ 4. Maikal

Question ID : 26433071593
Status : Answered
Chosen Option : 2

Q.12 'Fugdi' is a folk dance primarily performed in:

- Ans
- ☐ 1. Uttarakhand
 - ☐ 2. Sikkim
 - ☐ 3. Tamil Nadu
 - ☒ 4. Goa

Question ID : 26433064296
Status : Not Answered
Chosen Option : --

Q.13 How many oxygen molecules are there in Carbon Monoxide gas?

- Ans
- ☐ 1. Two
 - ☐ 2. Three
 - ☒ 3. One
 - ☐ 4. Four

Question ID : 26433095253
Status : Answered
Chosen Option : 3

Q.14 In the situation of a liquidity trap, what is the value of elasticity for speculative demand for money?

- Ans
- ☐ 1. Inelastic
 - ☐ 2. Unitary elastic
 - ☒ 3. Perfectly elastic
 - ☐ 4. Elastic

Question ID : 26433059250
Status : Not Answered
Chosen Option : --

Q.15 Which of the following is NOT a focus of the New India Literacy Programme Scheme launched by the Government of India in February 2022?

- Ans
- ☐ 1. Commercial skills
 - ☒ 2. Scholarship for higher studies
 - ☐ 3. Digital literacy
 - ☐ 4. Family welfare

Question ID : 26433061845
Status : Answered
Chosen Option : 4

Q.16 Who among the following has written the book 'Poverty and un-British Rule in India'?

- Ans
- ☒ 1. Bal Gangadhar Tilak
 - ☒ 2. Bankim Chandra Chattopadhyay
 - ☒ 3. Dadabhai Naoroji
 - ☒ 4. Mahatma Gandhi

Question ID : 26433055643
Status : Answered
Chosen Option : 3

Q.17 _____ claimed the women's singles title at the 2022 Odisha Open badminton tournament in 2022.

- Ans
- ☒ 1. Kiran George
 - ☒ 2. Priyanshu Rajawat
 - ☒ 3. Unnati Hooda
 - ☒ 4. Smit Toshniwal

Question ID : 26433071495
Status : Answered
Chosen Option : 1

Q.18 In the context of chemical fertilisers, the term NPK is a composition, where symbol 'N' represents _____.

- Ans
- ☒ 1. Niobium
 - ☒ 2. nitrogen
 - ☒ 3. Nobelium
 - ☒ 4. Nickel

Question ID : 26433059288
Status : Answered
Chosen Option : 2

Q.19 Which of the following IITs had created an online game to spread Coronavirus awareness in Nov 2020?

- Ans
- ☒ 1. IIT Madras
 - ☒ 2. IIT Delhi
 - ☒ 3. IIT Kharagpur
 - ☒ 4. IIT Guwahali

Question ID : 26433095266
Status : Answered
Chosen Option : 1

Q.20 In the Preamble, _____ assures the dignity of an individual and the unity and integrity of the Nation.

- Ans
- ☐ 1. justice
 - ☐ 2. liberty
 - ☐ 3. equality
 - ☒ 4. fraternity

Question ID : 26433055538
Status : Answered
Chosen Option : 4

Section : Part-B-Quantitative Aptitude

Q.1 In a triangle ABC, D and E are points on AB and AC such that

$AD = \frac{1}{3} AB$, and $AE = \frac{1}{3} AC$. If $BC = 18$ cm, then the length of DE is:

- Ans
- ☒ 1. 6 cm
 - ☐ 2. 3 cm
 - ☐ 3. 12 cm
 - ☐ 4. 18 cm

Question ID : 26433075016
Status : Answered
Chosen Option : 1

Q.2 A sphere with inner radius 7 cm is fully filled with a chemical costing Rs.24 per cm^3 . What will be the cost of the chemical (in Rs.), if 50% is taken from the sphere?

- Ans
- ☒ 1. 17248
 - ☐ 2. 16248
 - ☐ 3. 34496
 - ☐ 4. 34248

Question ID : 26433056341
Status : Answered
Chosen Option : 1

Q.3 Find the simple interest on Rs.420 for 3 years at $4\frac{1}{2}\%$ per annum.

- Ans
- ☐ 1. Rs.57.70
 - ☐ 2. Rs.54.70
 - ☒ 3. Rs.56.70
 - ☐ 4. Rs.55.70

Question ID : 26433063878
Status : Answered
Chosen Option : 3

Q.4

The vulgar fraction of the number $1.\overline{0123}$ is _____.

Ans

✓ 1. $\frac{10122}{9999}$

✗ 2. $\frac{10111}{9990}$

✗ 3. $\frac{10122}{9990}$

✗ 4. $\frac{10222}{9999}$

Question ID : 26433066168

Status : Answered

Chosen Option : 1

Q.5

The value of $\sin^2 5^\circ + \sin^2 10^\circ + \sin^2 15^\circ + \dots + \sin^2 85^\circ + \sin^2 90^\circ$ is equal to:

Ans

✗ 1. $8\frac{1}{2}$

✗ 2. 8

✓ 3. $9\frac{1}{2}$

✗ 4. 9

Question ID : 26433058933

Status : Answered

Chosen Option : 3

Q.6

There are five papers in an examination. Marks obtained by three students have been tabulated in the following table.

Who has scored the least marks and in which paper?

Student Name	Maths	Physics	Chemistry	English	Computer
Neha	85	88	78	75	89
Ankit	89	75	80	72	80
Keval	78	71	81	73	83

Ans

✗ 1. Neha, English

✗ 2. Ankit, English

✗ 3. Keval, English

✓ 4. Keval, Physics

Question ID : 26433074316

Status : Answered

Chosen Option : 4

Q.7 The mean proportional between 7 and 63 is:

- Ans
- ☐ 1. 52
 - ☐ 2. 441
 - ☐ 3. 17
 - ☒ 4. 21

Question ID : 26433058408

Status : Answered

Chosen Option : 4

Q.8 A motor boat can travel 40 km downstream and 30 kmupstream in 10 hours. It can travel 80 km downstream and 40 km upstream in 15 hours. Find the speed of the boat in still water.

- Ans
- ☐ 1. 4 km/h
 - ☒ 2. 10 km/h
 - ☐ 3. 16 km/h
 - ☐ 4. 8 km/h

Question ID : 26433061439

Status : Not Attempted and Marked For Review

Chosen Option : --

Q.9 A solid hemisphere of radius 12 cm is melted into 'n' identical cones, whose radius is 6 cm and height is 8cm. What is the value of 'n'?

- Ans
- ☐ 1. 14
 - ☐ 2. 13
 - ☐ 3. 15
 - ☒ 4. 12

Question ID : 26433061424

Status : Answered

Chosen Option : 4

Q.10 A and B can paint the walls of a building in 25 days. 'A' alone can do $\frac{1}{3}$ of this job in 15 days. In how many days can 'B' alone paint the walls of the building?

- Ans
- ☐ 1. 56 days
 - ☐ 2. $56\frac{3}{4}$ days
 - ☒ 3. $56\frac{1}{4}$ days
 - ☐ 4. $56\frac{1}{2}$ days

Question ID : 26433061223

Status : Answered

Chosen Option : 3

Q.11 The population of a city increases at the rate of 10% per annum. If its population in 2005 was 2 crore, the population of the city in the year 2007 would be:

- Ans
- ☒ 1. 2.22 crore
 - ☒ 2. 2.42 crore
 - ☒ 3. 2.20 crore
 - ☒ 4. 2.40 crore

Question ID : 26433058148
Status : Answered
Chosen Option : 2

Q.12 If 3 is added to two numbers, the ratio is 4 : 5 and if the same number is subtracted from the two numbers, the ratio is 1 : 2. The numbers are:

- Ans
- ☒ 1. 5 and 7
 - ☒ 2. 7 and 5
 - ☒ 3. 1 and 2
 - ☒ 4. 4 and 5

Question ID : 26433061628
Status : Answered
Chosen Option : 1

Q.13 Express $0.1\overline{65}$ as a vulgar fraction.

- Ans
- ☒ 1. $\frac{165}{99}$
 - ☒ 2. $\frac{165}{990}$
 - ☒ 3. $\frac{164}{990}$
 - ☒ 4. $\frac{164}{99}$

Question ID : 26433065043
Status : Answered
Chosen Option : 3

Q.14 In an examination, the marks obtained by 6 students are 76, 68, 79, 84, 88 and 85. The average score of the group is:

- Ans
- ☒ 1. 60
 - ☒ 2. 80
 - ☒ 3. 85
 - ☒ 4. 90

Question ID : 26433071296
Status : Answered
Chosen Option : 2

Q.15 The marked price of a TV set is Rs.12,500. It sells with two successive discounts of 16% and 12%. An additional 5% discount is given on cash payment. What is the selling price of the TV set on cash payment?

- Ans
- ☐ 1. Rs.8,578
 - ☐ 2. Rs.9,760
 - ☐ 3. Rs.7,750
 - ☒ 4. Rs.8,778

Question ID : 26433064909
Status : Answered
Chosen Option : 4

Q.16 Which of the following is a pair of co-prime numbers?

- Ans
- ☐ 1. 68, 85
 - ☐ 2. 143, 169
 - ☒ 3. 91, 141
 - ☐ 4. 15, 312

Question ID : 26433079836
Status : Not Answered
Chosen Option : --

Q.17 A tradesman marks his goods 32% above the cost price and allows his customers 10% reduction on their bills. What percentage profit does he make?

- Ans
- ☐ 1. 19%
 - ☐ 2. 18.6%
 - ☒ 3. 18.8%
 - ☐ 4. 19.2%

Question ID : 26433056310
Status : Answered
Chosen Option : 3

Q.18 If $a^4 + b^4 = -a^2 b^2$, then $a^6 - b^6 = ?$

- Ans
- ☐ 1. 1
 - ☒ 2. 0
 - ☐ 3. -1
 - ☐ 4. 2

Question ID : 26433061377
Status : Not Answered
Chosen Option : --

Q.19 Seema can finish a work in 7 days, while Kartik can finish the work in 12 days. The manager asked them to do the work together so that the work can be completed earlier. How many days will they take to complete the work together?

- Ans ☒ 1. 4.42 days
- ☐ 2. 4.89 days
- ☐ 3. 5.12 days
- ☐ 4. 3.42 days

Question ID : 26433058803
Status : Answered
Chosen Option : 1

Q.20 In a village, if the ratio of men to women is 3 : 2, then the percentage of men in the village is:

- Ans ☐ 1. 80%
- ☒ 2. 60%
- ☐ 3. 90%
- ☐ 4. 70%

Question ID : 26433056873
Status : Not Answered
Chosen Option : --

Section : Part-C-General Intelligence

Q.1 Select the option that represents the correct order of the given words as they would appear in an English dictionary.

1. Synthetic
2. Sympathy
3. Syrup
4. Synopsis
5. System
6. Symphony

- Ans ☒ 1. 2, 6, 4, 1, 3, 5
- ☐ 2. 2, 6, 4, 1, 5, 3
- ☐ 3. 2, 6, 1, 4, 3, 5
- ☐ 4. 6, 2, 4, 1, 3, 5

Question ID : 26433056726
Status : Answered
Chosen Option : 1

Q.2 Which of the following numbers will replace the question mark (?) in the given series?
435, 429, 417, 393, ?

- Ans ☒ 1. 345
- ☐ 2. 351
- ☐ 3. 347
- ☐ 4. 335

Question ID : 26433057540
Status : Answered
Chosen Option : 1

Q.3 Select the option that is related to the third term in the same way as the second term is related to the first term and the sixth term is related to the fifth term.
129 : 95 :: 87 : ? :: 118 : 84

- Ans
- ☒ 1. 49
 - ☒ 2. 51
 - ☒ 3. 53
 - ☒ 4. 55

Question ID : 26433057059
Status : Answered
Chosen Option : 3

Q.4 Select the correct combination of mathematical signs to sequentially replace the * signs and to balance the given equation.
 $63 * 7 * 32 * 98 * 36 * 350$

- Ans
- ☒ 1. +, -, x, ÷, =
 - ☒ 2. ÷, x, +, -, =
 - ☒ 3. +, x, -, ÷, =
 - ☒ 4. x, +, -, ÷, =

Question ID : 26433056456
Status : Answered
Chosen Option : 2

Q.5 Four letter-clusters have been given out of which three are alike in some manner and one is different. Select the one that is different.

- Ans
- ☒ 1. HJL
 - ☒ 2. NPR
 - ☒ 3. SUX
 - ☒ 4. BDF

Question ID : 26433068499
Status : Answered
Chosen Option : 3

Q.6 Which two groups of numbers should be interchanged to balance the given equation?
 $509 + 346 \div 2 \times 45 - 197 \times 11 = 10 \times 3 + 791$

- Ans
- ☒ 1. (45 and 11), and (2 and 197)
 - ☒ 2. (346 and 197), and (2 and 11)
 - ☒ 3. (509 and 197), and (45 and 11)
 - ☒ 4. (509 and 197), and (10 and 791)

Question ID : 26433056519
Status : Not Attempted and Marked For Review
Chosen Option : --

Q.7 Select the combination of letters that when sequentially placed in the blanks of the given series, will complete the series.
MNO _ NOM _ NOM _ M _ OMNOM

- Ans
- ☐ 1. NMMN
 - ☐ 2. MNMN
 - ☒ 3. MMNN
 - ☐ 4. NNOO

Question ID : 26433057711

Status : Not Attempted and Marked For Review

Chosen Option : --

Q.8 Select the option that is related to the fifth letter cluster in the same way as the second letter cluster is related to the first letter cluster and the fourth letter cluster is related to the third letter cluster.
GNJCS : XBAQJ :: ANDHX : RBUVU :: BDXLT : ?

- Ans
- ☐ 1. SORKZ
 - ☐ 2. ROZKS
 - ☒ 3. SROZK
 - ☐ 4. ROSKZ

Question ID : 26433074705

Status : Not Attempted and Marked For Review

Chosen Option : --

Q.9 In a code language, 'RATIO' is coded as P78Q and 'QUIET' is coded as U87P. How will 'CLEAN' be coded in the same language?

- Ans
- ☐ 1. B68M
 - ☒ 2. O50B
 - ☐ 3. O68B
 - ☐ 4. B70M

Question ID : 26433057826

Status : Answered

Chosen Option : 2

Q.10 Select the option that is related to the fourth number in the same way as the first number is related to the second number and the fifth number is related to the sixth number.
1681 : 328 :: ? : 248 :: 729 : 216

- Ans
- ☐ 1. 841
 - ☐ 2. 784
 - ☐ 3. 900
 - ☒ 4. 961

Question ID : 26433056485

Status : Answered

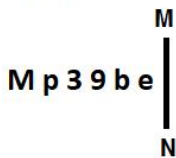
Chosen Option : 4

Q.11 Select the option that is related to the fifth letter-cluster in the same way as the second letter-cluster is related to the first letter-cluster and the fourth letter-cluster is related to the third letter-cluster.
PAT : WFW :: TIN : ANQ :: MUG : ?

- Ans
- ✗ 1. TYJ
 - ✗ 2. TZH
 - ✓ 3. TZJ
 - ✗ 4. TZI

Question ID : 26433056670
Status : Answered
Chosen Option : 3

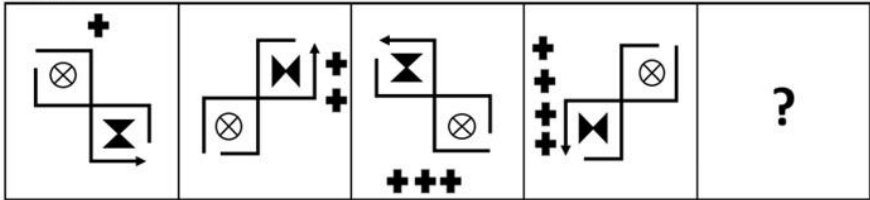
Q.12 Select the correct mirror image of the given figure when the mirror is placed at MN as shown below.



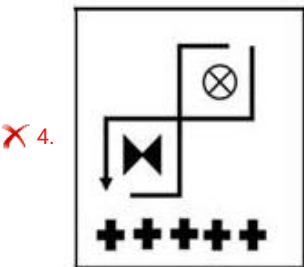
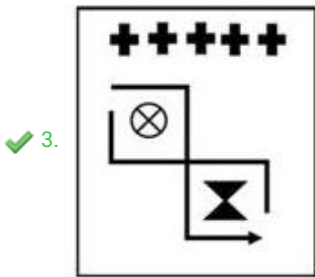
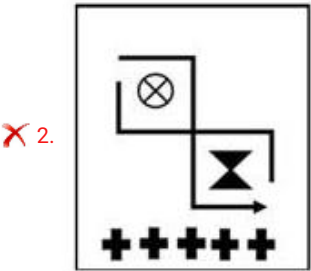
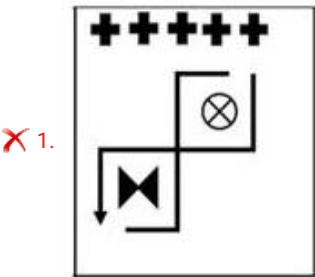
- Ans
- ✓ 1. e d e ε q M
 - ✗ 2. e d 6 ε q W
 - ✗ 3. e q e ε d M
 - ✗ 4. e d e 3 p M

Question ID : 26433056973
Status : Answered
Chosen Option : 1

Q.13 Select the figure that will replace the question mark (?) in the following figure series.



Ans



Question ID : 26433056098
Status : Answered
Chosen Option : 3

Q.14 Three statements are given, followed by three conclusions numbered I, II and III. Assuming the statements to be true, even if they seem to be at variance with commonly known facts, decide which of the conclusions logically follow(s) from the statements.

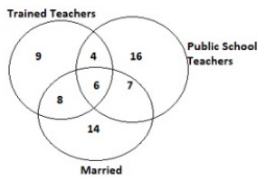
Statements:
All potatoes are onions.
All onions are tomatoes.
All carrots are onions.

Conclusions:
I. All tomatoes are potatoes.
II. Some tomatoes are onions.
III. All carrots are tomatoes.

- Ans
- ☐ 1. All the conclusions follow
 - ☐ 2. Only conclusions I and II follow
 - ☐ 3. Only conclusions I and III follow
 - ☒ 4. Only conclusions II and III follow

Question ID : 26433076530
Status : Answered
Chosen Option : 4

Q.15 Study the given diagram carefully and answer the question. The numbers in different sections indicate the number of persons.



Which of the following numbers represents married trained teachers who are public school teachers?

- Ans
- ☐ 1. 8
 - ☒ 2. 6
 - ☐ 3. 7
 - ☐ 4. 4

Question ID : 26433070413
Status : Answered
Chosen Option : 2

Q.16 Select the numbers from among the given options that can replace the question marks (?) in the following series.
75, 93.4, 111.8, 130.2, ?, ?

- Ans
- ☒ 1. 148.6, 167
 - ☐ 2. 148, 166.8
 - ☐ 3. 147.2, 166.2
 - ☐ 4. 148.6, 164.8

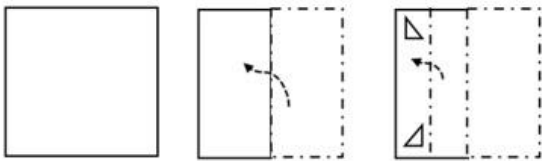
Question ID : 26433057055
Status : Answered
Chosen Option : 1

Q.17 Six students are sitting around a circular table facing the centre. Fatima is an immediate neighbour of both Chandan and Bala. Dinesh is sitting second to the left of Bala. Esha is sitting third to the left of Chandan. Anuj is an immediate neighbour of both Dinesh and Chandan. Who is sitting between Anuj and Fatima?

- Ans
- ☒ 1. Dinesh
 - ☒ 2. Esha
 - ☒ 3. Bala
 - ☒ 4. Chandan

Question ID : 26433076511
Status : Answered
Chosen Option : 4

Q.18 A paper is folded and cut as shown below. How will it appear when unfolded?



- Ans
- ☒ 1.
 - ☒ 2.
 - ☒ 3.
 - ☒ 4.

Question ID : 26433056118
Status : Answered
Chosen Option : 3

Q.19 'A + B' means 'A is the brother of B'.
'A - B' means 'A is the father of B'.
'A × B' means 'A is the husband of B'.
'A ÷ B' means 'A is the mother of B'.

If $P \div Q - S + K - T \times R$, then which of the following statements is NOT correct?

- Ans
- ☒ 1. K is the father-in-law of R.
 - ☒ 2. P is K's mother's mother.
 - ☒ 3. Q is T's father's father.
 - ☒ 4. S is T's father's brother.

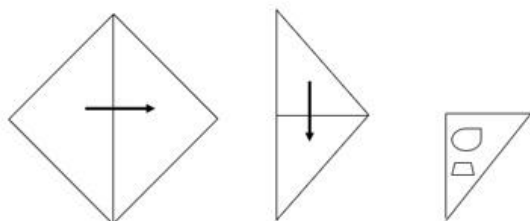
Question ID : 26433056921
Status : Answered
Chosen Option : 2

Q.20 J, K, M, P, S, T, Y and Z are sitting around a square table facing the centre of the table. Some of them are sitting at the corners, while some are sitting at the exact centre of the sides. M sits at the centre of one of the sides. Only two people sit between M and P. J sits second to the right of P. Only three people sit between J and K. S sits to the immediate right of Y. Only three people sit between S and Z. Who sits to the immediate right of Z?

- Ans
- ☒ 1. J
 - ☒ 2. Y
 - ☒ 3. T
 - ☒ 4. P

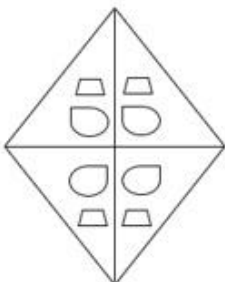
Question ID : 26433058032
Status : Answered
Chosen Option : 1

Q.21 A paper is folded and cut as shown below. How will it appear when unfolded?

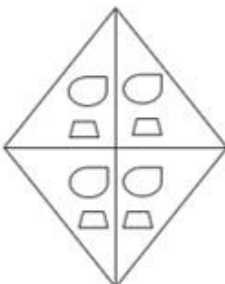


Ans

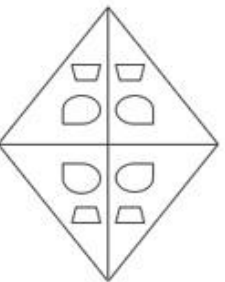
✗ 1.



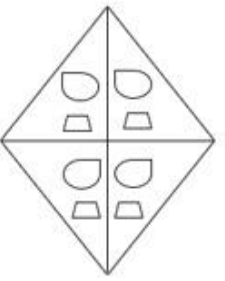
✗ 2.



✓ 3.



✗ 4.



Question ID : 26433056543
Status : Answered
Chosen Option : 3

Q.22 Select the figure from among the given options that can replace the question mark (?) in the following series.



Ans

- ✗ 1.
- ✓ 2.
- ✗ 3.
- ✗ 4.

Question ID : 26433080535
Status : Answered
Chosen Option : 2

Q.23 In a code language, 'FROST' is coded as 63 and 'HOPE' is coded as 32. How will 'SLATE' be coded in the same language?

- ✗ 1. 46
- ✗ 2. 40
- ✓ 3. 42
- ✗ 4. 36

Question ID : 26433057819
Status : Answered
Chosen Option : 4

Q.24 Which letter cluster will replace the question mark (?) to complete the given series?
KJFC, MNLK, ?, QVXA, SZDI

- ✗ 1. NQPT
- ✓ 2. ORRS
- ✗ 3. PQRT
- ✗ 4. PRQS

Question ID : 26433057427
Status : Answered
Chosen Option : 2

Q.25 My father's sister's son's son is my _____.

- Ans
- ☒ 1. father
 - ☒ 2. brother
 - ☒ 3. uncle
 - ☒ 4. nephew

Question ID : 26433067257
Status : Answered
Chosen Option : 4

Section : Part-D- English Language

Q.1 Select the most appropriate option that can substitute the italicised words in the given sentence.

I have a diploma in computer science *and application*.

- Ans
- ☒ 1. technology
 - ☒ 2. tools
 - ☒ 3. equipment
 - ☒ 4. apparatus

Question ID : 26433060504
Status : Answered
Chosen Option : 1

Q.2 The following sentence has been divided into parts. One of them may contain an error. Select the part that contains the error from the given options. If you don't find any error, mark 'No error' as your answer.

The museum urgency needs / a curator for the proper maintenance / and documentation of all the collections.

- Ans
- ☒ 1. a curator for the proper maintenance
 - ☒ 2. The museum urgency needs
 - ☒ 3. and documentation of all the collections
 - ☒ 4. No error

Question ID : 26433058617
Status : Answered
Chosen Option : 2

Q.3 Select the most appropriate meaning of the given idiom.
Pull someone's leg

- Ans
- ☒ 1. To joke with someone
 - ☒ 2. To refrain from humour
 - ☒ 3. To pull the trigger
 - ☒ 4. To tightly cling on to someone

Question ID : 26433066122
Status : Answered
Chosen Option : 1

Q.4 Select the most appropriate option that can substitute the underlined words in the given sentence.
People who live abroad have a sentimental longing for their native country.

- Ans
- ☒ 1. celia
 - ☒ 2. disconnect
 - ☒ 3. memorabilia
 - ☒ 4. nostalgia

Question ID : 26433059724
Status : Answered
Chosen Option : 4

Q.5 Select the INCORRECTLY spelt word in the following sentence.
In my village, I was astonished to witness the events in the fair remaining indistinguishable.

- Ans
- ☒ 1. astonished
 - ☒ 2. witness
 - ☒ 3. indistinguishable
 - ☒ 4. ago

Question ID : 26433058602
Status : Answered
Chosen Option : 3

Q.6 Select the most appropriate meaning of the underlined idiom in the given sentence.
I take a dim view of that law.

- Ans
- ☒ 1. approve of
 - ☒ 2. disapprove of
 - ☒ 3. see off
 - ☒ 4. view

Question ID : 26433055457
Status : Answered
Chosen Option : 3

Q.7 Select the INCORRECTLY spelt word.

- Ans
- ☒ 1. Wierd
 - ☒ 2. Entrepreneur
 - ☒ 3. Heretic
 - ☒ 4. Psychology

Question ID : 26433066147
Status : Answered
Chosen Option : 4

Q.8 Select the most appropriate synonym of the given word.

Calamity

- Ans ☒ 1. Disaster
☒ 2. Fortune
☒ 3. Prosperity
☒ 4. Tranquillity

Question ID : 26433073270
Status : Answered
Chosen Option : 4

Q.9 Select the option that can be used as a one-word substitute for the given group of words.
A range of different things

- Ans ☒ 1. Similarity
☒ 2. Homogeneity
☒ 3. Diversity
☒ 4. Uniformity

Question ID : 26433060739
Status : Answered
Chosen Option : 3

Q.10 Select the most appropriate synonym of the given word.
Venerate

- Ans ☒ 1. Respect
☒ 2. Condemn
☒ 3. Abuse
☒ 4. Insult

Question ID : 26433063581
Status : Not Answered
Chosen Option : --

Q.11 Select the most appropriate option to fill in the blanks.

We tap our shoes. We sway in our seats. We groove to the beat. This engages many parts of the brain that process speech and _____. Therefore, some people believe that our sense of rhythm is related to our communication _____.

- Ans ☒ 1. gesture; aptitude
☒ 2. sign; talent
☒ 3. movement; skills
☒ 4. activity; gift

Question ID : 26433070746
Status : Answered
Chosen Option : 3

Q.12 Select the most appropriate option to substitute the underlined segment in the given sentence.

My roommates don't feel like cooking tonight, so we had planned to eat out.

- Ans
- ☒ 1. we had planned to eat from out
 - ☒ 2. we planned to eat from out
 - ☒ 3. we plan to eat out
 - ☒ 4. we planned to eat out

Question ID : 26433058285
Status : Answered
Chosen Option : 4

Q.13 Select the most appropriate ANTONYM of the underlined word.

The police expressed doubts about the veracity of her story.

- Ans
- ☒ 1. Myth
 - ☒ 2. Viciousness
 - ☒ 3. Passion
 - ☒ 4. Events

Question ID : 26433055850
Status : Answered
Chosen Option : 2

Q.14 Select the most appropriate option to fill in the blank.

Ferdinand Magellan_____ the first circum-navigational voyage in the 16th century, an era of excellent terrestrial and marine investigations.

- Ans
- ☒ 1. complete
 - ☒ 2. performed
 - ☒ 3. led
 - ☒ 4. has done

Question ID : 26433070600
Status : Answered
Chosen Option : 3

Q.15 Select the most appropriate synonym of the highlighted word.
This decree was passed by the court of law.

- Ans
- ☒ 1. Rule
 - ☒ 2. Reply
 - ☒ 3. Query
 - ☒ 4. verdict

Question ID : 26433058290
Status : Answered
Chosen Option : 4

Q.16 Select the most appropriate synonym of the underlined word in the given sentence.
Seeing such traffic jam, I am afraid of the fact that today I may miss the train for Mumbai.

- Ans
- ☐ 1. allergic
 - ☐ 2. agitated
 - ☐ 3. aghast
 - ☒ 4. scared

Question ID : 26433058541
Status : Answered
Chosen Option : 4

Q.17 Select the most appropriate meaning of the underlined word in a sentence.

Despite her earnest efforts, she could not find a job.

- Ans
- ☐ 1. valiant
 - ☐ 2. stupendous
 - ☐ 3. careless
 - ☒ 4. serious

Question ID : 26433055990
Status : Answered
Chosen Option : 4

Q.18 The following sentence has been divided into parts. One of them may contain an error.
Select the part that contains the error from the given options. If you don't find any error, mark 'No error' as your answer.

The monkey sat up on / the branch of a tree / and stared at us.

- Ans
- ☒ 1. The monkey sat up on
 - ☐ 2. and stared at us
 - ☐ 3. No error
 - ☐ 4. the branch of a tree





Question ID : 26433061479
Status : Answered
Chosen Option : 1

Q.19 Select the option that can be used as a one-word substitute for the given group of words.
A place of burial

- Ans
- ☐ 1. Womb
 - ☐ 2. Cathedral
 - ☐ 3. Church
 - ☒ 4. Sepulchre

Question ID : 26433060737
Status : Answered
Chosen Option : 2

Q.20 Select the option that will improve the underlined part of the given sentence. In case no improvement is needed, select 'No improvement required'.
The water is overflowing from the rim of the cup.

- Ans  1. overflown
-  2. No improvement required
-  3. overflowed
-  4. overflow





Question ID : 26433060752
Status : Answered
Chosen Option : 2

Comprehension:

In the following passage some words have been deleted. Read the passage carefully and select the most appropriate option to fill in each blank.
Maintaining good health doesn't happen by (1)____. It requires work and smart lifestyle choices. A healthy diet is rich in fibre, whole grains, fresh fruits, and vegetables, 'good' or unsaturated fats, and omega-3 fatty acids. Going easy on processed foods is another element of healthy eating. Physical activity is also necessary for good health. It can greatly (2)____ your risk of heart disease, stroke, type 2 diabetes, breast and colon cancer, depression, and falls. Physical activity (3)____ sleep, endurance, and even sex. Finding ways to reduce stress is another strategy that can help you stay healthy, given the connection between stress and a variety of (4)____. Try meditation, mindfulness, yoga, (5)____ on weekends, and taking vacations.

SubQuestion No : 21

Q.21 Select the most appropriate word to fill in blank 1.

- Ans  1. choice
-  2. diet
-  3. work
-  4. accident





Question ID : 26433059479
Status : Answered
Chosen Option : 2

Comprehension:

In the following passage some words have been deleted. Read the passage carefully and select the most appropriate option to fill in each blank.
Maintaining good health doesn't happen by (1)____. It requires work and smart lifestyle choices. A healthy diet is rich in fibre, whole grains, fresh fruits, and vegetables, 'good' or unsaturated fats, and omega-3 fatty acids. Going easy on processed foods is another element of healthy eating. Physical activity is also necessary for good health. It can greatly (2)____ your risk of heart disease, stroke, type 2 diabetes, breast and colon cancer, depression, and falls. Physical activity (3)____ sleep, endurance, and even sex. Finding ways to reduce stress is another strategy that can help you stay healthy, given the connection between stress and a variety of (4)____. Try meditation, mindfulness, yoga, (5)____ on weekends, and taking vacations.

SubQuestion No : 22

Q.22 Select the most appropriate word to fill in blank 2.

- Ans  1. increase
-  2. manage
-  3. compensate
-  4. reduce

Question ID : 26433059480
Status : Answered
Chosen Option : 4

Comprehension:

In the following passage some words have been deleted. Read the passage carefully and select the most appropriate option to fill in each blank.
Maintaining good health doesn't happen by (1)____. It requires work and smart lifestyle choices. A healthy diet is rich in fibre, whole grains, fresh fruits, and vegetables, 'good' or unsaturated fats, and omega-3 fatty acids. Going easy on processed foods is another element of healthy eating. Physical activity is also necessary for good health. It can greatly (2)____ your risk of heart disease, stroke, type 2 diabetes, breast and colon cancer, depression, and falls. Physical activity (3)____ sleep, endurance, and even sex. Finding ways to reduce stress is another strategy that can help you stay healthy, given the connection between stress and a variety of (4)____. Try meditation, mindfulness, yoga, (5)____ on weekends, and taking vacations.

SubQuestion No : 23

Q.23 Select the most appropriate word to fill in blank 3.

- Ans  1. reduces
  2. encourages
  3. disrupts
  4. improves





Question ID : 26433059481
Status : Answered
Chosen Option : 4

Comprehension:

In the following passage some words have been deleted. Read the passage carefully and select the most appropriate option to fill in each blank.
Maintaining good health doesn't happen by (1)____. It requires work and smart lifestyle choices. A healthy diet is rich in fibre, whole grains, fresh fruits, and vegetables, 'good' or unsaturated fats, and omega-3 fatty acids. Going easy on processed foods is another element of healthy eating. Physical activity is also necessary for good health. It can greatly (2)____ your risk of heart disease, stroke, type 2 diabetes, breast and colon cancer, depression, and falls. Physical activity (3)____ sleep, endurance, and even sex. Finding ways to reduce stress is another strategy that can help you stay healthy, given the connection between stress and a variety of (4)____. Try meditation, mindfulness, yoga, (5)____ on weekends, and taking vacations.

SubQuestion No : 24

Q.24 Select the most appropriate word to fill in blank 4.

- Ans  1. benefits
  2. skills
  3. disorders
  4. exercises

Question ID : 26433059482
Status : Answered
Chosen Option : 4

Comprehension:

In the following passage some words have been deleted. Read the passage carefully and select the most appropriate option to fill in each blank.
Maintaining good health doesn't happen by (1)____. It requires work and smart lifestyle choices. A healthy diet is rich in fibre, whole grains, fresh fruits, and vegetables, 'good' or unsaturated fats, and omega-3 fatty acids. Going easy on processed foods is another element of healthy eating. Physical activity is also necessary for good health. It can greatly (2)____ your risk of heart disease, stroke, type 2 diabetes, breast and colon cancer, depression, and falls. Physical activity (3)____ sleep, endurance, and even sex. Finding ways to reduce stress is another strategy that can help you stay healthy, given the connection between stress and a variety of (4)____. Try meditation, mindfulness, yoga, (5)____ on weekends, and taking vacations.

SubQuestion No : 25

Q.25 Select the most appropriate word to fill in blank 5.

- Ans
- ☐ 1. working
 - ☐ 2. sleeping
 - ☐ 3. eating
 - ☒ 4. playing

Question ID : 26433059483
Status : Answered
Chosen Option : 4

Section : Part-E- Computer Fundamentals

Q.1 The _____ tab in MS-Word 2010 is the default tab which appears when you open the document.

- Ans
- ☒ 1. Home
 - ☐ 2. Review
 - ☐ 3. Insert
 - ☐ 4. Layout

Question ID : 26433095341
Status : Answered
Chosen Option : 3

Q.2 Which of the following is not present in the Quick Access Toolbar by default in MS-Word 2010?

- Ans
- ☐ 1. Save
 - ☐ 2. Redo
 - ☐ 3. Undo
 - ☒ 4. Cut

Question ID : 26433095542
Status : Answered
Chosen Option : 4

Q.3 The development of World Wide Web was begun in which of the following year?

- Ans ☒ 1. 1959
☒ 2. 1989
☒ 3. 1969
☒ 4. 1979

Question ID : 26433095387
Status : Not Answered
Chosen Option : --

Q.4 _____ icon is used to represent attachment in email.

- Ans ☒ 1. Paper clip
☒ 2. Smiley
☒ 3. Phone
☒ 4. Emoji

Question ID : 26433095405
Status : Answered
Chosen Option : 1

Q.5 In MS-Word 2010, which of the following statement is incorrect about Ruler?

- Ans ☒ 1. It helps to change a line's indentation
☒ 2. It helps to control the margins of document pages.
☒ 3. It helps to set tabs
☒ 4. It helps to change font styles

Question ID : 26433095534
Status : Answered
Chosen Option : 4

Q.6 MS-Word 2010, opens a new document with the temporary name as _____.

- Ans ☒ 1. Book 1
☒ 2. Book
☒ 3. Document1
☒ 4. Document

Question ID : 26433095312
Status : Answered
Chosen Option : 3

Q.7 In MS-Excel 2010 ribbon _____ contains tools for inserting functions, defining names and controlling the calculation options.

- Ans ☒ 1. FORMULA
☒ 2. DATA
☒ 3. REVIEW
☒ 4. FILE

Question ID : 26433095398
Status : Not Answered
Chosen Option : --

Q.8 A collection of associated web pages is called _____.

- Ans ☒ 1. Website
☒ 2. Html
☒ 3. Xml
☒ 4. Webserver

Question ID : 26433095396
Status : Answered
Chosen Option : 1

Q.9 In MS-Excel 2010, what will be the value of the following expression?
 $= 656 / 4^2$

- Ans ☒ 1. 21
☒ 2. 41
☒ 3. 61
☒ 4. 81

Question ID : 26433095320
Status : Answered
Chosen Option : 2

Q.10 In MS-Excel 2010 _____ is used in hiding rows within the sheet.

- Ans ☒ 1. Alt+0
☒ 2. Ctrl+0
☒ 3. Ctrl+9
☒ 4. Alt+9

Question ID : 26433095473
Status : Answered
Chosen Option : 4