

Head Constable Ministerial in Delhi Police Examination 2022

Roll Number	
Candidate Name	
Venue Name	
Exam Date	18/10/2022
Exam Time	5:00 PM - 6:30 PM
Subject	Head Constable Ministerial in Delhi Police Examination 2022

Section : Part -A-General Awareness

Q.1 Which of the following was NOT one of the major components of the Green Revolution in India?

- Ans
- ☒ 1. Pesticides
 - ☒ 2. Irrigation facilities
 - ☒ 3. Banking services
 - ☒ 4. HYV seeds

Question ID : 26433059289
Status : Answered
Chosen Option : 3

Q.2 Which of the following is an example of a stock variable?

- Ans
- ☒ 1. Amount of food grains available in all warehouses of the country on the first day of its financial year
 - ☒ 2. Annual production of food grains in a country
 - ☒ 3. Export of food grains in a particular financial year
 - ☒ 4. Import of food grains in a particular financial year

Question ID : 26433064508
Status : Answered
Chosen Option : 2

Q.3 Who among the following has received the prestigious Abhinandan Saroja National Award 2021 by the National Institute of Indian Classical Dance?

- Ans
- ☒ 1. Ishira Parikh
 - ☒ 2. Aparna Satheesan
 - ☒ 3. Surupa Sen
 - ☒ 4. Akham Lakshmi Devi

Question ID : 26433064641
Status : Not Attempted and Marked For Review
Chosen Option : --

Q.4 In February 2022, which of the following state governments launched the Indira Gandhi Urban Employment Guarantee Scheme with an aim to provide hundred days of employment in urban areas?

- Ans
- ☐ 1. Chhattisgarh
 - ☐ 2. Tamil Nadu
 - ☒ 3. Rajasthan
 - ☐ 4. Maharashtra

Question ID : 26433072870
Status : Answered
Chosen Option : 1

Q.5 Which are the major rivers originating from Amarkantak?

- Ans
- ☐ 1. Chambal and Betwa
 - ☐ 2. Son and Chambal
 - ☒ 3. Narmada and Son
 - ☐ 4. Mahanadi and Son

Question ID : 26433054987
Status : Answered
Chosen Option : 3

Q.6 Which of the following is a characteristic of a compound?

- Ans
- ☐ 1. The constituent elements are heterogeneous.
 - ☒ 2. The properties of the resulting substance are different from the properties of its constituents.
 - ☐ 3. There is no generation or absorption of heat or light in the formation.
 - ☐ 4. Constituents are present can be separated by simple physical processes.

Question ID : 26433095248
Status : Answered
Chosen Option : 2

Q.7 As per Economic Survey 2022 what is the total number of telephone subscribers in March 2021 in India?

- Ans
- ☐ 1. 1 billion
 - ☐ 2. 0.5 billion
 - ☒ 3. More than 1.2 billion
 - ☐ 4. 0.2 billion

Question ID : 26433071578
Status : Answered
Chosen Option : 3

Q.8 In May 2021, Himanta Biswa Sarma was sworn in as the _____ Chief Minister of Assam.

- Ans
- ☐ 1. 16th
 - ☐ 2. 13th
 - ☒ 3. 15th
 - ☐ 4. 14th

Question ID : 26433061787
Status : Answered
Chosen Option : 2

Q.9 According to the census of India 2011, the literacy rate is given. Choose the correct option.

List-1		List-2	
1	Females	a	82.14%
2	Male's	b	65.46%
3	Kerala	c	94.0%

- Ans
- ☐ 1. 1-c, 2-b, 3-a
 - ☐ 2. 1-a, 2-b, 3-c
 - ☐ 3. 1-a, 2-c, 3-b
 - ☒ 4. 1-b, 2-a, 3-c

Question ID : 26433082198
Status : Answered
Chosen Option : 4

Q.10 Which of the following years commemorated the 150th birth anniversary of Mahatma Gandhi?

- Ans
- ☐ 1. 2020
 - ☒ 2. 2019
 - ☐ 3. 2021
 - ☐ 4. 2018

Question ID : 26433054874
Status : Not Attempted and Marked For Review
Chosen Option : --

Q.11 Who among the following was the founder of Shantiniketan in 1901 which was originally named as Brahmacharya Ashram?

- Ans
- ☐ 1. Satyendranath Bose
 - ☐ 2. Keshub Chand Sen
 - ☐ 3. Debendranath Tagore
 - ☒ 4. Rabindranath Tagore

Question ID : 26433065551
Status : Answered
Chosen Option : 4

Q.12 Singalila National Park is located in which of the following states?

- Ans ☒ 1. West Bengal
- ☐ 2. Chhattisgarh
- ☐ 3. Kerala
- ☐ 4. Karnataka

Question ID : 26433095250
Status : Answered
Chosen Option : 4

Q.13 The 'Dancing Girl' found at Mohenjo-Daro is made of _____.

- Ans ☐ 1. copper
- ☐ 2. terracotta
- ☒ 3. bronze
- ☐ 4. gold

Question ID : 26433064352
Status : Answered
Chosen Option : 3

Q.14 Which state/Union Territory of India ranks first for having the highest male and female literacy rate in the 2011 Census?

- Ans ☐ 1. Tripura
- ☒ 2. Kerala
- ☐ 3. Goa
- ☐ 4. Mizoram

Question ID : 26433067216
Status : Answered
Chosen Option : 2

Q.15 The Indian government launched a scheme called _____ Portal Scheme in August 2021 to help the unorganised sector.

- Ans ☐ 1. e-Haat
- ☐ 2. PM-Daksh
- ☒ 3. e-SHRAM
- ☐ 4. Yuktdhara

Question ID : 26433061789
Status : Answered
Chosen Option : 3

Q.16 When money does NOT have intrinsic value, this type of money is called_____.

- Ans
- ☒ 1. reserve money
 - ☒ 2. metallic money
 - ☒ 3. fiat money
 - ☒ 4. commodity money

Question ID : 26433059246
Status : Not Attempted and Marked For Review
Chosen Option : --

Q.17 Who among the following has written the book 'The Other Side of Silence'?

- Ans
- ☒ 1. Amitav Ghosh
 - ☒ 2. Amrita Pritam
 - ☒ 3. Khuswant Singh
 - ☒ 4. Urvashi Butalia

Question ID : 26433055645
Status : Answered
Chosen Option : 4

Q.18 Who among the following Rajput rulers was defeated by Babur in Khanwa in 1527?

- Ans
- ☒ 1. Rana Hammir Singh
 - ☒ 2. Rana Kumbha
 - ☒ 3. Rana Sanga
 - ☒ 4. Maharana Pratap

Question ID : 26433071500
Status : Answered
Chosen Option : 3

Q.19 How many Fundamental Rights were originally provided in the Constitution of India?

- Ans
- ☒ 1. Seven
 - ☒ 2. Five
 - ☒ 3. Eight
 - ☒ 4. Six

Question ID : 26433064703
Status : Answered
Chosen Option : 1

Q.20 Neeraj Chopra became the first Indian sportsman to bag an Olympic gold medal in athletics for India, post-Independence when he won the men's javelin throw event in Tokyo 2020 Olympics with a throw of _____.

- Ans ☒ 1. 87.58 m
- ☐ 2. 85.47 m
- ☐ 3. 88.23 m
- ☐ 4. 84.56 m

Question ID : 26433061805
Status : Answered
Chosen Option : 1

Section : Part-B-Quantitative Aptitude

Q.1 The following table shows the data of different colleges whose students participated in the Olympiad.

Subjects	College A	College B	College C	College D	College E
Hindi	110	100	125	103	112
English	98	120	80	122	105
Maths	130	110	250	160	180
Science	100	100	150	200	80
GK	182	200	120	130	183

Find the ratio of the number of students who participated in the English Olympiad to those who participated in the Maths Olympiad from all colleges.

- Ans ☐ 1. 166 : 102
- ☐ 2. 166 : 105
- ☒ 3. 105 : 166
- ☐ 4. 102 : 166

Question ID : 26433073154
Status : Answered
Chosen Option : 3

Q.2 If $x = \sin 130^\circ \cos 80^\circ$, $y = \sin 80^\circ \cos 130^\circ$, and $z = 1 + xy$, then which of the following is true?

- Ans ☒ 1. $x > 0$, $y < 0$ and $0 < z < 1$
- ☐ 2. $x > 0$, $y < 0$ and $z > 1$
- ☐ 3. $x < 0$, $y < 0$ and $0 < z < 1$
- ☐ 4. $x > 0$, $y > 0$ and $z > 0$

Question ID : 26433058935
Status : Answered
Chosen Option : 2

Q.3 Three smaller cubes with sides of 3, 4, and 5 cm are melted together to form a large cube. What is the ratio of the total surface areas of the smaller cubes and the large cube?

- Ans
- ☐ 1. 5 : 3
 - ☐ 2. 4 : 1
 - ☒ 3. 25 : 18
 - ☐ 4. 7 : 3

Question ID : 26433057149
Status : Answered
Chosen Option : 3

Q.4 The area of a square plot is 6561 m^2 . The length of the diagonal of the square plot is:

- Ans
- ☐ 1. $27\sqrt{2} \text{ m}$
 - ☐ 2. $27\sqrt{3} \text{ m}$
 - ☐ 3. $81\sqrt{3} \text{ m}$
 - ☒ 4. $81\sqrt{2} \text{ m}$

Question ID : 26433058189
Status : Answered
Chosen Option : 4

Q.5 A person invested a total of ₹57,500 at 4%, 5% and 8% per annum simple interest. At the end of the year, he received equal interest in all the three cases. The amount invested at 5% was:

- Ans
- ☒ 1. ₹20,000
 - ☐ 2. ₹25,000
 - ☐ 3. ₹37,500
 - ☐ 4. ₹20,750

Question ID : 26433062643
Status : Answered
Chosen Option : 1

Q.6 4 men or 5 women can construct a wall in 123 days. How long will it take for 5 men and 4 women to do the same?

- Ans
- ☒ 1. 60 days
 - ☐ 2. 122 days
 - ☐ 3. 61 days
 - ☐ 4. 123 days

Question ID : 26433058155
Status : Answered
Chosen Option : 1

Q.7 Simplify.

$$963 + 306 \times 102 \div 6 - 86 + (218 - 15)$$

Ans ☒ 1. 6282

☐ 2. 6682

☐ 3. 6454

☐ 4. 6654

Question ID : 26433056292

Status : Answered

Chosen Option : 1

Q.8 At an election, a candidate who gets 35% of the total votes is defeated by a majority of 150 votes. Find the total number of votes recorded.

Ans ☐ 1. 800

☒ 2. 500

☐ 3. 600

☐ 4. 700

Question ID : 26433063854

Status : Answered

Chosen Option : 2

Q.9 Find the value of 172.2896×10^{-5} .

Ans ☐ 1. 0.01722896

☐ 2. 0.1722896

☒ 3. 0.001722896

☐ 4. 1722896


Question ID : 26433063672


Status : Answered


Chosen Option : 3


Q.10 The value of $7.1\bar{5}$ is:

Ans

 1. $6\frac{7}{45}$

 2. $9\frac{7}{45}$

 3. $7\frac{7}{45}$

 4. $8\frac{9}{45}$


Question ID : 26433063368


Status : Answered


Chosen Option : 3

Q.11 A and B can finish a work in 20 days and 10 days, respectively. A started the work alone, and then after 5 days, B joined A. They both finished the remaining work. How long did the work last?

Ans

 1. $5\frac{2}{3}$ days

 2. $10\frac{1}{3}$ days

 3. 10 days

 4. 5 days

Question ID : 26433062649

Status : Answered

Chosen Option : 3

Q.12 The simple interest on Rs.17,000 at a certain rate of interest in four years is Rs.5,440. Find the compound interest on the same amount for four years at the same rate of interest.

Ans

 1. Rs.6,128.31

 2. Rs.6,052.30

 3. Rs.6,175.32

 4. Rs.6,234.33

Question ID : 26433056325

Status : Answered

Chosen Option : 4

Q.13 If $x + \frac{1}{x} = 8$, find $x^2 - \frac{1}{x^2}$.

- Ans
- ☐ 1. 62
 - ☒ 2. $16\sqrt{15}$
 - ☐ 3. $10\sqrt{15}$
 - ☐ 4. $15\sqrt{15}$

Question ID : 26433061777
Status : Answered
Chosen Option : 2

Q.14 The cost price of 19 items is equal to the selling price of 21 items. The loss percentage is:

- Ans
- ☐ 1. $8\frac{9}{21}\%$
 - ☒ 2. $9\frac{11}{21}\%$
 - ☐ 3. $7\frac{10}{21}\%$
 - ☐ 4. $11\frac{1}{21}\%$

Question ID : 26433061067
Status : Answered
Chosen Option : 2

Q.15 In $\triangle ABC$, $AB = BC$ and D, E, F are mid-points of the sides AB, BC and AC, respectively. If $DF = 5$ cm, then EF is equal to:

- Ans
- ☐ 1. 3 cm
 - ☒ 2. 5 cm
 - ☐ 3. 4 cm
 - ☐ 4. 2 cm

Question ID : 26433058422
Status : Answered
Chosen Option : 2

Q.16 A robbery was done by a thief at a jewellery shop and he took 2 kg gold. The shop is 1125 m away from a policeman. The thief starts running at x km/h and the policeman starts chasing at 11 km/h at the same time. The policeman caught the thief in 810 sec. What is the distance run by the thief?

- Ans
- ☐ 1. 2350 m
 - ☐ 2. 1276 m
 - ☐ 3. 1375 m
 - ☒ 4. 1350 m

Question ID : 26433058238
Status : Answered
Chosen Option : 4

Q.17 The fuel consumption (mpg) of a vehicle varies inversely with its weight. A car that weighs 3800 pounds gets 25 mpg on the highway. Find the fuel consumption of a car (in mpg), that weighs 4750 pounds.

- Ans ☒ 1. 20
☐ 2. 23.75
☐ 3. 18
☐ 4. 25

Question ID : 26433058913
Status : Answered
Chosen Option : 1

Q.18 A milkman has a 15 litres drum with 9 litres milk. He filled the drum with water and now takes out $\frac{1}{2}$ litre of the mixture. What is the quantity of milk (in millilitres) in the mixture taken out?

- Ans ☐ 1. 250
☐ 2. 266
☒ 3. 300
☐ 4. 333

Question ID : 26433071243
Status : Answered
Chosen Option : 3

Q.19 Sarita paid Rs.4,400 for two pieces of the same shirt. Sarita got a discount of 20% on the purchase. What was the marked price of one shirt?

- Ans ☐ 1. Rs.5,500
☐ 2. Rs.2,200
☒ 3. Rs.2,750
☐ 4. Rs.5,400

Question ID : 26433075061
Status : Answered
Chosen Option : 3

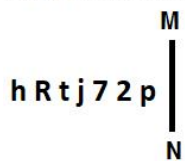
Q.20 The diameter of the base of a conical tent is 28 feet and the slant height of the cone is 18 feet. Find the area (in ft^2) of the canvas that is required for making this tent. Ignore the wastage of canvas.

(Use $\pi = \frac{22}{7}$)

- Ans ☒ 1. 792
☐ 2. 791
☐ 3. 790
☐ 4. 793

Question ID : 26433061426
Status : Answered
Chosen Option : 1

Q.1 Select the correct mirror image of the given figure when the mirror is placed at MN as shown below.



- Ans
- ☒ 1. p 2 Z 7 j t R h
 - ☒ 2. p 2 Z 7 j t R 4
 - ☒ 3. b 5 7 j t R 4
 - ☒ 4. q 5 7 j t R h

Question ID : 26433056991
Status : Answered
Chosen Option : 4

Q.2 7 people - A,B,C,D,E,F and G - are seated in a row, facing north. Only three people sit to the right of F. C is second to the left of F. A is third to the right of F. D is an immediate neighbour of A and E. If G is not a neighbour of F, where is B seated?

- Ans
- ☒ 1. Third to the right of G
 - ☒ 2. Fourth to the left of D
 - ☒ 3. Fourth to the left of A
 - ☒ 4. Second to the left of F

Question ID : 26433068821
Status : Answered
Chosen Option : 3

Q.3 Read the given statements and conclusions carefully. Assuming that the information given in the statements is true, even if it appears to be at variance with commonly known facts, decide which of the given conclusions logically follow(s) from the statements.

Statements:
All parrots are racks.
Some racks are cots.
All cots are docks.
Conclusions:
I. Some docks are parrots.
II. Some cots are parrots.

- Ans
- ☒ 1. Either conclusion (I) or (II) follows
 - ☒ 2. Only Conclusion (II) follows
 - ☒ 3. Neither conclusion (I) nor (II) follows
 - ☒ 4. Only Conclusion (I) follows

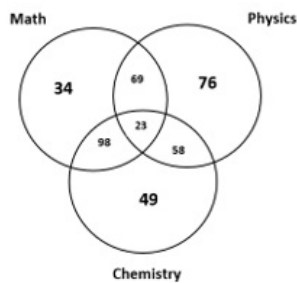
Question ID : 26433079071
Status : Answered
Chosen Option : 3

Q.4 Which letter cluster will replace the question mark (?) to complete the given series?
UQMI, VOPE, WMSA,?, YIYS

- Ans
- ☒ 1. XKWV
 - ☒ 2. XVWK
 - ☒ 3. KXWV
 - ☒ 4. XKVW

Question ID : 26433065588
Status : Answered
Chosen Option : 4

Q.5 Study the given diagram carefully and answer the questions. The numbers in different sections indicate the number of students who passed in different subjects.
How many students passed in chemistry but failed in physics?



- Ans
- ☒ 1. 107
 - ☒ 2. 147
 - ☒ 3. 157
 - ☒ 4. 228

Question ID : 26433069368
Status : Answered
Chosen Option : 2

Q.6 Which two groups of numbers should be interchanged to balance the given equation?
 $396 \div 4 + 772 - 257 \times 5 + 944 = 16 \times 2 + 60 \times 8$

- Ans
- ☒ 1. (4 and 5), and (2 and 8)
 - ☒ 2. (396 and 772), and (16 and 60)
 - ☒ 3. (396 and 772), and (16 and 8)
 - ☒ 4. (257 and 772), and (396 and 944)

Question ID : 26433056518
Status : Answered
Chosen Option : 2

Q.7 Pointing to a person in a picture, Rohan said, "He is my father's only brother's nephew." How is the person related to Rohan?

- Ans
- ☒ 1. Grandfather
 - ☒ 2. Brother
 - ☒ 3. Father
 - ☒ 4. Paternal uncle

Question ID : 26433057684
Status : Answered
Chosen Option : 2

Q.8 Which of the following numbers will replace the question mark (?) in the given series?
7, 26, 63, ?, 215

- Ans
- ☒ 1. 128
 - ☒ 2. 124
 - ☒ 3. 135
 - ☒ 4. 210

Question ID : 26433056443
Status : Answered
Chosen Option : 2

Q.9 Select the option that is related to the third word in the same way as the second word is related to the first word.
(The words must be considered as meaningful English words and must NOT be related to each other based on the number of letters/number of consonants/vowels in the word)
Dermatology : Skin :: Nephrology : ?

- Ans
- ☒ 1. Brain
 - ☒ 2. Liver
 - ☒ 3. Kidney
 - ☒ 4. Heart

Question ID : 26433078891
Status : Answered
Chosen Option : 3

Q.10 Select the option that is related to the fifth term in the same way as the second term is related to the first term and the fourth term is related to the third term.
ADVERTISE: VTSRIEEDA :: BEHAVIOUR : VUROIHEBA :: BEAUTIFUL: ?

- Ans
- ☒ 1. UUFEBAT LI
 - ☒ 2. UUILTABFE
 - ☒ 3. UUT LIFEBA
 - ☒ 4. UULIT FEBA

Question ID : 26433056384
Status : Answered
Chosen Option : 3

Q.11 Select the combination of letters that when sequentially placed in the blanks of the given series, will complete the series.
L_ST_OSTN_STOO_T

- Ans ☒ 1. OMOS
- ☐ 2. OMLP
- ☐ 3. ONLO
- ☐ 4. OLRS

Question ID : 26433057815
Status : Answered
Chosen Option : 1

Q.12 'A ÷ B' means 'A is the father of B'
'A * B' means 'A is the brother of B'
'A + B' means 'A is the mother of B'
'A - B' means 'A is the sister of B'

If $P + Q + R - S \div T * U$, then how is T related to P?

- Ans ☐ 1. Brother's son
- ☒ 2. Daughter's son's son
- ☐ 3. Sister
- ☐ 4. Sister's son

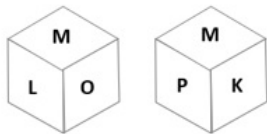
Question ID : 26433056417
Status : Answered
Chosen Option : 2

Q.13 In a code language, 'where are you now' is coded as 'jo no pa mo', 'you are very far' is coded as 'ho jo do pa', 'now not very far' is coded as 'do ho no he'. What is the code for the word 'where'?

- Ans ☐ 1. no
- ☒ 2. mo
- ☐ 3. pa
- ☐ 4. jo

Question ID : 26433057278
Status : Answered
Chosen Option : 2

Q.14 Six letters K, L, M, O, P and Q are written on different faces of a dice. Two positions of this dice are shown in the figure. Find the letter on the face opposite to K.



- Ans ☒ 1. O
☒ 2. P
☒ 3. Q
☒ 4. L

Question ID : 26433057798
Status : Answered
Chosen Option : 1

Q.15 Six students are sitting around a circular table facing the centre. Sahil is an immediate neighbour of both Soma and Deshad. Dhaval is sitting second to the right of Deshad. Nisha is sitting third to the right of Soma. Chaitali is an immediate neighbour of both Dhaval and Soma. Who is sitting between Sahil and Nisha?

- Ans ☒ 1. Dhaval
☒ 2. Soma
☒ 3. Deshad
☒ 4. Chaitali

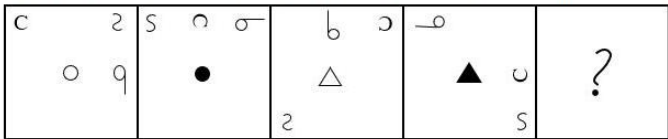
Question ID : 26433076518
Status : Answered
Chosen Option : 3

Q.16 Select the set in which the numbers are related in the same way as are the numbers of the following sets.
(NOTE: Operations should be performed on the whole numbers, without breaking down the numbers into its constituent digits. E.g. 13 – Operations on 13 such as adding/deleting/multiplying etc. to 13 can be performed. Breaking down 13 into 1 and 3 and then performing mathematical operations on 1 and 3 is not allowed)
(5, 82, 97)
(7, 39, 60)

- Ans ☒ 1. (18, 48, 107)
☒ 2. (18, 49, 102)
☒ 3. (18, 48, 102)
☒ 4. (18, 48, 101)

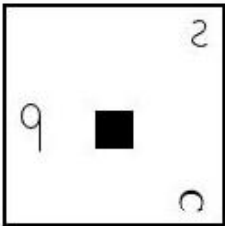
Question ID : 26433068661
Status : Answered
Chosen Option : 3

Q.17 Select the figure from among the given options that can replace the question mark (?) in the following series.

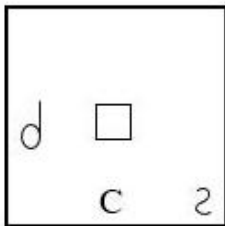


Ans

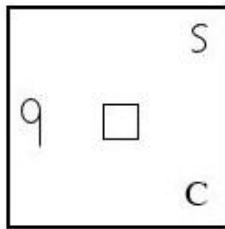
✗ 1.



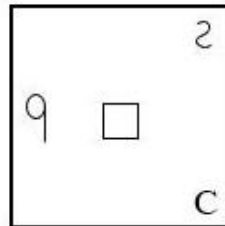
✗ 2.



✗ 3.



✓ 4.



Question ID : 26433058074
Status : Answered
Chosen Option : 4

Q.18 Which two signs should be interchanged to make the given equation correct?
 $84 - 12 + 72 \div 8 \times 7 = 23$

Ans

✗ 1. \times and \div

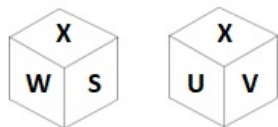
✗ 2. $+$ and \times

✓ 3. \div and $-$

✗ 4. $+$ and $-$

Question ID : 26433056862
Status : Answered
Chosen Option : 3

Q.19 Six letters S, T, U, V, W and X are written on different faces of a dice. Two positions of this dice are shown in the given figures. Find the letter on the face opposite to S.



- Ans
- ☒ 1. U
 - ☒ 2. V
 - ☒ 3. W
 - ☒ 4. X

Question ID : 26433067534
Status : Answered
Chosen Option : 2

Q.20 Based on the position in the English alphabetical order, three of the following letter-clusters are alike in some manner and one is different . Select the odd letter-cluster.

- Ans
- ☒ 1. NUQS
 - ☒ 2. SZVX
 - ☒ 3. KRNQ
 - ☒ 4. PWSU

Question ID : 26433095711
Status : Answered
Chosen Option : 3




Q.21 Which option represents the correct order of the given words as they would appear in an English dictionary?

- 1. Break
- 2. Breeze
- 3. Bribe
- 4. Bridge
- 5. Breath

- Ans
- ☒ 1. 1, 2, 5, 3, 4
 - ☒ 2. 1, 5, 2, 3, 4
 - ☒ 3. 1, 5, 3, 2, 4
 - ☒ 4. 5, 1, 3, 2, 4

Question ID : 26433057206
Status : Answered
Chosen Option : 2

Q.22 Select the set in which the numbers are related in the same way as are the numbers of the following sets.
(NOTE: Operations should be performed on the whole numbers, without breaking down the numbers into its constituent digits. E.g. 13 – Operations on 13 such as adding/deleting/multiplying etc. to 13 can be performed. Breaking down 13 into 1 and 3 and then performing mathematical operations on 1 and 3 is not allowed.)
(17, 51, 79)
(23, 57, 85)

- Ans  1. (11, 45, 73)
 2. (19, 48, 76)
 3. (32, 66, 80)
 4. (21, 54, 89)

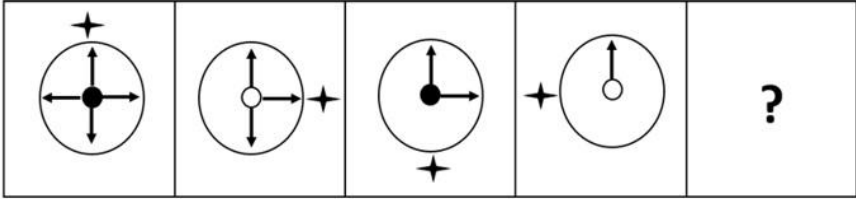
Question ID : 26433057595
Status : Not Attempted and Marked For Review
Chosen Option : --

Q.23 In a certain code language, 'EATING' is written as '41' and 'STREET' is written as '77'. How will 'AUGUST' be written in that language?

- Ans  1. 46
 2. 34
 3. 52
 4. 40

Question ID : 26433056409
Status : Answered
Chosen Option : 1

Q.24 Select the figure that will replace the question mark (?) in the following figure series.



Ans

- ✓ 1.
- ✗ 2.
- ✗ 3.
- ✗ 4.

Question ID : 26433056095

Status : Answered

Chosen Option : 1

Q.25 Which of the following numbers will replace the question mark (?) in the given series?
24.8, 37, 50.2, ?, 79.6, 95.8

- Ans ☒ 1. 64.4
- ☐ 2. 61.2
- ☐ 3. 60.8
- ☐ 4. 62.6

Question ID : 26433057550
Status : Answered
Chosen Option : 1

Section : Part-D- English Language

Q.1 Select the most appropriate meaning of the underlined word in a sentence.

She was trying to mystify her opponent .

- Ans ☒ 1. bewilder
- ☐ 2. convince
- ☐ 3. anger
- ☐ 4. pursue

Question ID : 26433055991
Status : Answered
Chosen Option : 1

Q.2 Identify the error in tense and choose the correct form of the verbs in present tense from the following options.
Sachin is passing the ball to Vivek. Vivek is moving inside, but Tom won it back for the club.

- Ans ☒ 1. passes the ball, moves inside, wins it back
- ☐ 2. was passing the ball, was moving inside, was winning it back
- ☐ 3. pass the ball, move inside, win it back
- ☐ 4. has been passing the ball, has been moving inside, has been winning it back

Question ID : 26433059191
Status : Answered
Chosen Option : 1

Q.3 Parts of a sentence are given below in jumbled order. Arrange the parts in the correct order to form a meaningful sentence.

Clean water supplies / in the home / are essential / good health and cleanliness / for

- Ans ☐ 1. Good health and cleanliness are essential for clean water supplies in the home
- ☒ 2. Clean water supplies are essential for good health and cleanliness in the home.
- ☐ 3. For clean water supplies, good health and cleanliness are essential in the home
- ☐ 4. Clean water supplies for good health and cleanliness are essential in the home.

Question ID : 26433059616
Status : Answered
Chosen Option : 2

Q.4 Parts of a sentence are given below in jumbled order. Arrange the parts in the correct order to form a meaningful sentence.

We / are proud / live / to call ourselves civilised / who / in the present-day world

- Ans
- ☒ 1. We are proud to live in the present-day world who call ourselves civilised.
 - ☒ 2. We who live in the present-day world are proud to call ourselves civilised.
 - ☒ 3. We live in the present-day world who are proud to call ourselves civilised.
 - ☒ 4. We are proud in the present-day world who live to call ourselves civilised.

Question ID : 26433059615
Status : Answered
Chosen Option : 2

Q.5 Select the most appropriate option that can substitute the underlined segment in the given sentence. If there is no need to substitute it, select 'No substitution'.

He killed the dog by a stick.

- Ans
- ☒ 1. with a stick
 - ☒ 2. No substitution
 - ☒ 3. from a stick
 - ☒ 4. through a stick

Question ID : 26433073254
Status : Answered
Chosen Option : 1

Q.6 Select the most appropriate synonym of the underlined word in the given sentence. Sabuj is seeking his doctoral research from a reputed university.

- Ans
- ☒ 1. running after
 - ☒ 2. getting
 - ☒ 3. pursuing
 - ☒ 4. fulfilling

Question ID : 26433058587
Status : Answered
Chosen Option : 3

Q.7 Select the most appropriate meaning of the given idiom. The best of both worlds

- Ans
- ☒ 1. An ideal situation
 - ☒ 2. Worldly success
 - ☒ 3. Trying times
 - ☒ 4. An inescapable situation

Question ID : 26433066123
Status : Answered
Chosen Option : 1

Q.8 The following sentence has been split into four segments. Identify the segment that contains a grammatical error.

The yellow pair of scissors / you have searching for / since yesterday, / is on the dining table.

- Ans
- ☒ 1. is on the dining table
 - ☒ 2. The yellow pair of scissors
 - ☒ 3. since yesterday
 - ☒ 4. you have searching for

Question ID : 26433055597
Status : Answered
Chosen Option : 4

Q.9 Select the INCORRECTLY spelt word.

- Ans
- ☒ 1. Animated
 - ☒ 2. Designeted
 - ☒ 3. Narrated
 - ☒ 4. Separated

Question ID : 26433055474
Status : Answered
Chosen Option : 2

Q.10 Select the most appropriate idiom or phrase to complete the given sentence.

They indeed live _____ as they always dream about making a huge fortune overnight

- Ans
- ☒ 1. to eat my hat
 - ☒ 2. in a fool's paradise
 - ☒ 3. on a bed of thorns
 - ☒ 4. to pull someone's leg

Question ID : 26433056018
Status : Answered
Chosen Option : 2

Q.11 Parts of a sentence/paragraph are given below. While the first and the last parts (A and F) are in the correct order, the parts in between are jumbled up. Arrange the parts in the correct order to form a meaningful and coherent sentence/paragraph.

- A. Throughout your life, you have the option of mastering a variety of abilities.
B. Some will be useful in very particular scenarios,
C. while others will be useful in a wider range of situations.
D. Certain talents, on the other hand, have such a broad impact on your life
E. that it would be almost irresponsible not to master them.
F. One of them is writing.

- Ans
- ☒ 1. C, B, D, E
 - ☒ 2. D, E, B, C
 - ☒ 3. E, D, C, B
 - ☒ 4. B, C, D, E

Question ID : 26433072506
Status : Answered
Chosen Option : 2

Q.12 Select the most appropriate option to fill in the blanks.

The young police officer acted with _____ and took the robbers into _____.

- Ans
- ☒ 1. anomaly; captivity
 - ☒ 2. anonymity; preservation
 - ☒ 3. agility; custody
 - ☒ 4. ability; protection

Question ID : 26433065181
Status : Answered
Chosen Option : 3

Q.13 Select the most appropriate synonym of the underlined word.

He is known for his opulent life style.

- Ans
- ☒ 1. Penurious
 - ☒ 2. Laudable
 - ☒ 3. Lamentable
 - ☒ 4. Lavish

Question ID : 26433073277
Status : Answered
Chosen Option : 4

Q.14 Select the most appropriate option to fill in the blank.

The consciousness of a human_____when committing something unethical.

- Ans
- ☒ 1. licks
 - ☒ 2. bricks
 - ☒ 3. pricks
 - ☒ 4. tricks

Question ID : 26433058380
Status : Answered
Chosen Option : 1

Q.15 Select the option that can be used as a one-word substitute for the given group of words.
Of, concerning or consisting of money

- Ans
- ☒ 1. Pecuniary
 - ☒ 2. Peculiarly
 - ☒ 3. Pectoral
 - ☒ 4. Peculate

Question ID : 26433060495
Status : Answered
Chosen Option : 1

Q.16 Select the INCORRECTLY spelt word.

- Ans
- ☒ 1. Chronic
 - ☒ 2. Vehical
 - ☒ 3. Handling
 - ☒ 4. Lunacy

Question ID : 26433066143
Status : Answered
Chosen Option : 2

Q.17 Select the most appropriate option to fill in the blank.

Often in our country the _____ forces of communalism and casteism severally impact the nation's unity.

- Ans
- ☒ 1. substantive
 - ☒ 2. constructive
 - ☒ 3. vigilant
 - ☒ 4. disruptive

Question ID : 26433072414
Status : Answered
Chosen Option : 4

Q.18 Select the most appropriate ANTONYM of the given word.
Praise

- Ans
- ☒ 1. Command
 - ☒ 2. Condemn
 - ☒ 3. Improve
 - ☒ 4. Appreciate

Question ID : 26433063111
Status : Answered
Chosen Option : 2

Q.19 Parts of sentences are given below in jumbled order. Arrange the parts in the correct order to form meaningful sentences.

- a) this is a powerful means by which many who have wielded
- b) writing can instil a number of emotions
- c) a pen has been able to connect with readers and trigger massive changes
- d) within a reader; joy, grief, love, anger, jealousy, etc.

- Ans
- ☒ 1. b, a, c, d
 - ☒ 2. c, d, a, b
 - ☒ 3. b, d, a, c
 - ☒ 4. a, b, c, d

Question ID : 26433058272
Status : Answered
Chosen Option : 3

Q.20 Select the most appropriate ANTONYM of the underlined word.

The way she behaves enticed the guests.

- Ans ☒ 1. Repulsed
- ☐ 2. Invited
- ☐ 3. Scolded
- ☐ 4. Persuaded

Question ID : 26433063642
Status : Answered
Chosen Option : 1

Comprehension:

Read the given passage and answer the questions that follow.

Advertising, without a doubt, aims to persuade customers to 1. _____ their items. However, it is now a serious worry that advertising only promotes the product's positive 2. _____ and pushes customers to follow the latest fashion 3. _____. As a result, advertising develops unnatural and needless 4. _____ and demands. The important point is that advertising only promotes the positive aspects of their products in order to 5. _____ customers to purchase them. As a result, consumers are given an incomplete picture of the product. As a result, customers will want to acquire the products because they have no flaws.

SubQuestion No : 21

Q.21 Select the most appropriate option to fill in blank number 1.

- Ans ☒ 1. buy
- ☐ 2. enclose
- ☐ 3. deceive
- ☐ 4. fix

Question ID : 26433060659
Status : Answered
Chosen Option : 1

Comprehension:

Read the given passage and answer the questions that follow.

Advertising, without a doubt, aims to persuade customers to 1. _____ their items. However, it is now a serious worry that advertising only promotes the product's positive 2. _____ and pushes customers to follow the latest fashion 3. _____. As a result, advertising develops unnatural and needless 4. _____ and demands. The important point is that advertising only promotes the positive aspects of their products in order to 5. _____ customers to purchase them. As a result, consumers are given an incomplete picture of the product. As a result, customers will want to acquire the products because they have no flaws.

SubQuestion No : 22

Q.22 Select the most appropriate option to fill in blank number 2.

- Ans ☒ 1. aspects
- ☐ 2. limitations
- ☐ 3. criticises
- ☐ 4. glances

Question ID : 26433060660
Status : Answered
Chosen Option : 1





Comprehension:

Read the given passage and answer the questions that follow.

Advertising, without a doubt, aims to persuade customers to 1. _____ their items. However, it is now a serious worry that advertising only promotes the product's positive 2. _____ and pushes customers to follow the latest fashion 3. _____. As a result, advertising develops unnatural and needless 4. _____ and demands. The important point is that advertising only promotes the positive aspects of their products in order to 5. _____ customers to purchase them. As a result, consumers are given an incomplete picture of the product. As a result, customers will want to acquire the products because they have no flaws.

SubQuestion No : 23

Q.23 Select the most appropriate option to fill in blank number 3.

- Ans  1. modes
  2. gifts
  3. enlists
  4. trends

Question ID : **26433060661**
Status : **Answered**
Chosen Option : **4**

Comprehension:

Read the given passage and answer the questions that follow.

Advertising, without a doubt, aims to persuade customers to 1. _____ their items. However, it is now a serious worry that advertising only promotes the product's positive 2. _____ and pushes customers to follow the latest fashion 3. _____. As a result, advertising develops unnatural and needless 4. _____ and demands. The important point is that advertising only promotes the positive aspects of their products in order to 5. _____ customers to purchase them. As a result, consumers are given an incomplete picture of the product. As a result, customers will want to acquire the products because they have no flaws.

SubQuestion No : 24

Q.24 Select the most appropriate option to fill in blank number 4.

- Ans  1. passions
  2. addictions
  3. appetite
  4. cravings

Question ID : **26433060662**
Status : **Answered**
Chosen Option : **4**

Comprehension:

Read the given passage and answer the questions that follow.

Advertising, without a doubt, aims to persuade customers to 1. _____ their items. However, it is now a serious worry that advertising only promotes the product's positive 2. _____ and pushes customers to follow the latest fashion 3. _____. As a result, advertising develops unnatural and needless 4. _____ and demands. The important point is that advertising only promotes the positive aspects of their products in order to 5. _____ customers to purchase them. As a result, consumers are given an incomplete picture of the product. As a result, customers will want to acquire the products because they have no flaws.

SubQuestion No : 25

Q.25 Select the most appropriate option to fill in blank number 5.

- Ans ☒ 1. appeal
☒ 2. increase
☒ 3. entice
☒ 4. converge

Question ID : 26433060663
Status : Answered
Chosen Option : 3

Section : Part-E- Computer Fundamentals

Q.1 A _____ is a tool used in MS-Excel 2010 to calculate, summarize and analyze data and lets you see comparisons, patterns and trends in your data.

- Ans ☒ 1. lookup table
☒ 2. pivot table
☒ 3. reference table
☒ 4. conditional table

Question ID : 26433095330
Status : Answered
Chosen Option : 2

Q.2 Which of the following is the slowest type of Internet service?

- Ans ☒ 1. 3G and 4G
☒ 2. Digital subscriber line
☒ 3. Satellite
☒ 4. Dial up

Question ID : 26433095376
Status : Answered
Chosen Option : 4

Q.3 The deleted mails can be found in the _____ folder.

- Ans
- ☒ 1. draft
 - ☒ 2. trash
 - ☒ 3. inbox
 - ☒ 4. sent

Question ID : **26433095425**
Status : **Answered**
Chosen Option : **2**

Q.4 What will the function given below return in MS-Excel 2010?
`=EXACT("Word", "word")`

- Ans
- ☒ 1. FALSE
 - ☒ 2. TRUE
 - ☒ 3. 1
 - ☒ 4. 0

Question ID : **26433095540**
Status : **Answered**
Chosen Option : **4**

Q.5 _____ refers to the topmost area of the application that contains menu items and toolbars available in MS-Excel 2010.

- Ans
- ☒ 1. Task bar
 - ☒ 2. Title bar
 - ☒ 3. Ruler bar
 - ☒ 4. Ribbon

Question ID : **26433095388**
Status : **Answered**
Chosen Option : **1**

Q.6 In paragraph formatting of MS-Word 2010, the keyboard short cut Ctrl + Q is used for which of the following purpose?

- Ans
- ☒ 1. Open Apply Style task pane
 - ☒ 2. Remove paragraph formatting from highlighted paragraph.
 - ☒ 3. Change the paragraph spacing to double line
 - ☒ 4. Remove paragraph indentation

Question ID : **26433095333**
Status : **Answered**
Chosen Option : **4**

Q.7 In _____ in MS-Word 2010, all the lines other than the first line are indented.

- Ans
- ☐ 1. left indent
 - ☒ 2. hanging indent
 - ☐ 3. second line indent
 - ☐ 4. right indent

Question ID : 26433095324
Status : Answered
Chosen Option : 2

Q.8 A _____ is a telecommunication technology, which permits two or more people in different locations to interact via mutual video or audio transmission simultaneously

- Ans
- ☐ 1. EMAIL
 - ☒ 2. Videoconferencing
 - ☐ 3. Payment gateway
 - ☐ 4. BLOG

Question ID : 26433095417
Status : Answered
Chosen Option : 2

Q.9 What is the default font face in an MS-Word 2010 document?

- Ans
- ☐ 1. Italic
 - ☒ 2. Calibri
 - ☐ 3. Arial
 - ☐ 4. Times New Roman

Question ID : 26433095303
Status : Answered
Chosen Option : 2

Q.10 The _____ displays the application name of the document in MS-Word 2010.

- Ans
- ☐ 1. Quick Access toolbar
 - ☐ 2. Ribbon
 - ☒ 3. Title bar
 - ☐ 4. File tab

Question ID : 26433095342
Status : Answered
Chosen Option : 3