

# Head Constable Ministerial in Delhi Police Examination 2022

Roll Number	
Candidate Name	
Venue Name	iON Digital Zone iDZ - 2 Mandi Samiti Road
Exam Date	17/10/2022
Exam Time	5:00 PM - 6:30 PM
Subject	Head Constable Ministerial in Delhi Police Examination 2022

Section : **Part-A-General Awareness**

**Q.1 In 2021, who among the following became the first Indian female athlete to win two Olympic medals?**

- Ans ☒ 1. Saikhom Mirabai Chanu  
☒ 2. Saina Nehwal  
☒ 3. MC Mary Kom  
☒ 4. PV Sindhu

Question ID : **26433061806**  
Status : **Answered**  
Chosen Option : **4**

**Q.2 In March 2022, which state government announced a fellowship programme aimed at harnessing the talent of young professionals from diverse academic backgrounds in the implementation of various schemes in the state to be implemented between 2022 and 2024?**

- Ans ☒ 1. Tamil Nadu  
☒ 2. Maharashtra  
☒ 3. Telangana  
☒ 4. Odisha

Question ID : **26433072871**  
Status : **Not Answered**  
Chosen Option : **--**

**Q.3 Who was the last Deputy Chairman of the Planning Commission of India?**

- Ans ☒ 1. Pranab Mukherjee  
☒ 2. Jaswant Singh  
☒ 3. Montek Singh Ahluwalia  
☒ 4. KC Pant

Question ID : **26433059262**  
Status : **Not Answered**  
Chosen Option : **--**

**Q.4 What was Swami Vivekananda's birth name?**

- Ans ☒ 1. Narendranath Datta  
☒ 2. Debendranath Datta  
☒ 3. Surendranath Datta  
☒ 4. Nagendranath Datta

Question ID : **26433066652**  
Status : **Answered**  
Chosen Option : **1**

Q.5 Which of the following will NOT be classified as revenue receipt in the budget of the union government in India?

- Ans ☒ 1. Tax receipts
- ☒ 2. Receipts from sale of shares in Public Sector Undertakings
- ☒ 3. Dividends and profits on investments made by the Central Government
- ☒ 4. Interest receipts on account of loans by the Central Government

Question ID : 26433064483  
Status : Not Answered  
Chosen Option : --

Q.6 The Supreme Court of India, in a significant verdict, on \_\_\_\_\_, announced that the daughters of a male Hindu, dying intestate, will be entitled to inherit the self-acquired as well as other properties obtained in the partition by the father.

- Ans ☒ 1. 20 March 2022
- ☒ 2. 20 December 2021
- ☒ 3. 20 January 2022
- ☒ 4. 20 February 2022

Question ID : 26433055036  
Status : Answered  
Chosen Option : 1

Q.7 In India, the literacy rate is determined by calculating it based on which age group?

- Ans ☒ 1. Above 10 years
- ☒ 2. Above 7 years
- ☒ 3. Above 15 years
- ☒ 4. Above 6 years

Question ID : 26433055340  
Status : Answered  
Chosen Option : 2

Q.8 Rangeen Mahal, built in the 16<sup>th</sup> century CE is situated in which of the following cities of Karnataka?

- Ans ☒ 1. Udupi
- ☒ 2. Kolar
- ☒ 3. Bidar
- ☒ 4. Hubli

Question ID : 26433064355  
Status : Not Answered  
Chosen Option : --

Q.9 The Government approved the setting up of the \_\_\_\_\_ to monetise surplus land and building assets of Central Public Sector Enterprises (CPSEs) and other agencies linked to the Government on 9 March 2022.

- Ans ☒ 1. Land and Building Monetisation Corporation
- ☒ 2. National Land Monetisation Corporation
- ☒ 3. Central Monetisation Enterprise
- ☒ 4. National Monetisation Company Ltd

Question ID : 26433055027  
Status : Not Answered  
Chosen Option : --

Q.10 In which year was the Congress Socialist party established?

Ans ☒ 1. 1934

☒ 2. 1933

☒ 3. 1935

☒ 4. 1932

Question ID : 26433064735

Status : Not Answered

Chosen Option : --

Q.11 Mahavira Jayanti marks the birth anniversary of the \_\_\_\_\_ tirthankara of Jainism.

Ans ☒ 1. twenty-second

☒ 2. second

☒ 3. first

☒ 4. twenty-fourth

Question ID : 26433064324

Status : Answered

Chosen Option : 4

Q.12 According to Koeppen's Scheme, there are many types of climatic regions in India. Which type of climate is denoted by the letter code 'As'?

Ans ☒ 1. Monsoon with dry summer

☒ 2. Polar type

☒ 3. Tropical savannah

☒ 4. Hot desert

Question ID : 26433064098

Status : Not Answered

Chosen Option : --

Q.13 The Vikramshila University was built during the rule of which of the following dynasties?

Ans ☒ 1. Pallava

☒ 2. Pala

☒ 3. Chola

☒ 4. Chalukya

Question ID : 26433055606

Status : Not Answered

Chosen Option : --

Q.14 One fiscal year covers how many quarters of a year?

Ans ☒ 1. Two

☒ 2. Four

☒ 3. Three

☒ 4. One

Question ID : 26433059233

Status : Not Answered

Chosen Option : --

Q.15 Which state has the highest proportion of people who are multidimensionally poor?

- Ans ☒ 1. Bihar
- ☐ 2. Chhattisgarh
- ☐ 3. Jharkhand
- ☐ 4. Uttar Pradesh

Question ID : 26433055343  
Status : Answered  
Chosen Option : 1

Q.16 The Commonwealth of India Bill, 1925, demanded how many Fundamental Rights for Indians?

- Ans ☐ 1. 11
- ☐ 2. 6
- ☐ 3. 5
- ☒ 4. 7

Question ID : 26433055178  
Status : Not Answered  
Chosen Option : --

Q.17 In which year was the Central Rural Sanitation Programme launched in India?

- Ans ☐ 1. 1984
- ☐ 2. 1987
- ☒ 3. 1986
- ☐ 4. 1988

Question ID : 26433071579  
Status : Not Answered  
Chosen Option : --

Q.18 India's first AC double-decker electric bus named 'Switch Eiv 22' is developed by which company?

- Ans ☐ 1. Tata Motors
- ☐ 2. Mahindra Electric
- ☐ 3. Olectra Greentech
- ☒ 4. Ashok Leyland

Question ID : 26433095285  
Status : Answered  
Chosen Option : 2

Q.19 Padma Bhushan awardee, Alarmel Valli is a \_\_\_\_\_ dancer of India.

- Ans ☐ 1. Kathak
- ☐ 2. Mohiniyattam
- ☐ 3. Kathakali
- ☒ 4. Bharatanatyam

Question ID : 26433064310  
Status : Answered  
Chosen Option : 4

Q.20 What is the biggest flower in the world which produces the largest single bloom?

- Ans ☒ 1. Corpse Flower  
☒ 2. Talipot Palm  
☒ 3. Rafflesia Arnoldii  
☒ 4. Queen of Andes

Question ID : 26433095243  
Status : Answered  
Chosen Option : 3

Section : Part-B-Quantitative Aptitude

Q.1 The following table shows the loan disbursed by banks during the period of 5 years (₹ in crores).

Bank	1982	1983	1984	1985	1986
A	18	23	45	30	70
B	27	33	18	41	37
C	29	29	22	17	11
D	31	16	28	32	43
E	13	19	27	34	42
Total	118	120	140	154	203

In which year did the bank C disburse the minimum amount of loan over the years 1982 to 1986?

- Ans ☒ 1. 1986  
☒ 2. 1983  
☒ 3. 1984  
☒ 4. 1982

Question ID : 26433066383  
Status : Answered  
Chosen Option : 1

Q.2 If  $\sin^2 x + \sin^4 x = 1$ , then  $\cot^2 x + \cot^4 x =$  \_\_\_\_\_.

- Ans ☒ 1. 1  
☒ 2. 0  
☒ 3. -1  
☒ 4. 2

Question ID : 26433061392  
Status : Answered  
Chosen Option : 1

Q.3 Which of the following statements is correct?

- Ans ☒ 1. The smallest common multiple of the given numbers is called LCM.  
☒ 2. LCM of prime numbers is the aggregate of the prime numbers.  
☒ 3. LCM of the given numbers cannot be greater than the given numbers.  
☒ 4. LCM stands for the Largest Common Multiplier.

Question ID : 26433063277  
Status : Answered  
Chosen Option : 1

Q.4 Find the value of  $0.\overline{77}$ .

- Ans
- ☒ 1.  $\frac{9}{7}$
  - ☒ 2.  $\frac{7}{9}$
  - ☒ 3.  $\frac{8}{9}$
  - ☒ 4.  $\frac{5}{9}$

Question ID : 2643308309  
Status : Answered  
Chosen Option : 2

Q.5 What will be the ratio of the simple interest earned by a certain amount at the same rate of interest for 5 years and that for 8 years?

- Ans
- ☒ 1. 6 : 7
  - ☒ 2. 5 : 8
  - ☒ 3. 4 : 5
  - ☒ 4. 3 : 4

Question ID : 26433073025  
Status : Answered  
Chosen Option : 2

Q.6 If the sum of all the edges of a cube is 48 cm, then the volume (in  $\text{cm}^3$ ) of that cube is:

- Ans
- ☒ 1. 216
  - ☒ 2. 64
  - ☒ 3. 27
  - ☒ 4. 125

Question ID : 26433058916  
Status : Answered  
Chosen Option : 2

Q.7 What is the value of x if 3, 7, x and 21 are in proportion?

- Ans
- ☒ 1. 11
  - ☒ 2. 10
  - ☒ 3. 12
  - ☒ 4. 9

Question ID : 26433058793  
Status : Answered  
Chosen Option : 4

Q.8 Amelia saves 68% of her monthly income. If her monthly expenditure is Rs.25,720 then her monthly saving is:

- Ans ☒ 1. Rs.54,655  
☐ 2. Rs.35,720  
☐ 3. Rs.64,655  
☐ 4. Rs.80,375

Question ID : 26433063686  
Status : Answered  
Chosen Option : 1

Q.9 How much should you invest today at 10% compound interest annually, to accumulate ₹1,61,051 in 5 years?

- Ans ☒ 1. ₹100000  
☐ 2. ₹111000  
☐ 3. ₹110000  
☐ 4. ₹111100

Question ID : 26433061411  
Status : Answered  
Chosen Option : 1

Q.10 If  $x + y + z = 10$  and  $x^2 + y^2 + z^2 = 30$ , then the value of  $x^3 + y^3 + z^3 - 3xyz$  is:

- Ans ☐ 1. 50  
☒ 2. -50  
☐ 3. -40  
☐ 4. -60

Question ID : 26433061380  
Status : Answered  
Chosen Option : 2

Q.11 If  $\left(x - \frac{1}{x}\right) = 2\sqrt{3}$ , what is the value of  $\left(x^3 + \frac{1}{x^3}\right)$ , given that  $x$  is a positive number?

- Ans ☐ 1. 64  
☐ 2. 81  
☒ 3. 52  
☐ 4. 49

Question ID : 26433061948  
Status : Not Answered  
Chosen Option : --

Q.12 What is the volume (in  $\text{cm}^3$ , rounded off to the nearest integer) of a frustum of a cone with diameters 70 cm and 42 cm of its two ends and a depth of 50 cm? (Take  $\pi = \frac{22}{7}$ )

- Ans ☐ 1. 1,27,560  
☒ 2. 1,25,767  
☐ 3. 1,64,265  
☐ 4. 1,56,810

Question ID : 26433063266  
Status : Not Answered  
Chosen Option : --

Q.13 Ram does the work in 30 days while Raju does it in 20 days. If they work alternatively with Ram beginning the work, in how many days will the work be finished?

- Ans ☒ 1. 20  
☒ 2. 12  
☒ 3. 24  
☒ 4. 25

Question ID : 26433063494  
Status : Answered  
Chosen Option : 2

Q.14 Anurag has 10 hours to get to Kolkata, which is at a distance of 500 km. His starting speed was 60 km/h for the first 3 hours. For the next 200 km, his speed was 50 km/h. What speed must he travel at now in order to arrive in Kolkata in the allotted 10 hours?

- Ans ☒ 1. 44 km/h  
☒ 2. 42.5 km/h  
☒ 3. 35 km/h  
☒ 4. 40 km/h

Question ID : 26433057137  
Status : Answered  
Chosen Option : 4

Q.15 Applied to a bill of Rs.25,000, the difference between a discount of 30% and two successive discounts of 25% and 5% is \_\_\_\_\_.

- Ans ☒ 1. Rs.375  
☒ 2. Rs.312.5  
☒ 3. Rs.325.75  
☒ 4. Rs.350.5

Question ID : 26433063934  
Status : Answered  
Chosen Option : 2

Q.16 The average weight of 10 students is increased by half a kg when one of the students weighing 45 kg is replaced by a new student. Find the weight of the new student.

- Ans ☒ 1. 40 kg  
☒ 2. 50 kg  
☒ 3. 55 kg  
☒ 4. 45 kg

Question ID : 26433063846  
Status : Answered  
Chosen Option : 1



Q.17  $\frac{2^3}{3^2} \div \frac{3}{2} + (2^3 - 3^2) = \underline{\hspace{2cm}}.$

- Ans
- ✓ 1.  $-\frac{11}{27}$
  - ✗ 2.  $\frac{27}{11}$
  - ✗ 3.  $\frac{2^2}{3^3}$
  - ✗ 4.  $\frac{11}{27}$

Question ID : 26433058119  
Status : Answered  
Chosen Option : 1

Q.18 A and B undertake a contract of a task for Rs.10,800. A and B can complete the task in 45 days and 60 days, respectively. However, to finish the work early, they take C's help and complete the entire work in 20 days. What is the value (in Rs.) of  $(a - b + 2c)$ , where a, b and c are the shares of A, B and C, respectively, for their contribution to complete the task?

- Ans
- ✓ 1. 6000
  - ✗ 2. 3000
  - ✗ 3. 8000
  - ✗ 4. 4000

Question ID : 26433063247  
Status : Answered  
Chosen Option : 1

Q.19 A merchant buys 'a' number of goods for ₹b and sells 'b' number of goods for ₹a. If  $b < a$ , then in the whole outlay, he makes:

- Ans
- ✓ 1.  $100 \frac{(a^2 - b^2)}{b^2} \% \text{ gain}$
  - ✗ 2.  $100 \frac{(a^2 - b^2)}{b^2} \% \text{ loss}$
  - ✗ 3.  $100 \frac{(b^2 - a^2)}{b^2} \% \text{ loss}$
  - ✗ 4.  $100 \frac{(b^2 - a^2)}{b^2} \% \text{ gain}$

Question ID : 26433058907  
Status : Not Answered  
Chosen Option : --

Q.20 In an equilateral triangle of side 8 cm, a circle is inscribed touching its side. Find the area of the portion of the triangle NOT included in the circle ( $\sqrt{3} = 1.732$  and  $\pi = 3.14$ ) correct to two places of decimal.

- Ans
- ✗ 1.  $11.34 \text{ cm}^2$
  - ✗ 2.  $10.44 \text{ cm}^2$
  - ✗ 3.  $12.97 \text{ cm}^2$
  - ✓ 4.  $10.97 \text{ cm}^2$

Question ID : 26433061755  
Status : Answered  
Chosen Option : 4

Q.1 In a certain code language, 'COACH' is written as 'LXZSX' and 'AWARD' is written as 'DZZWI'. How will 'AGENT' be written in that language?

- Ans ☒ 1. TAVGM
- ☒ 2. TZVGM
- ☒ 3. ZTVMG
- ☒ 4. TZVMG

Question ID : 26433057268  
Status : Not Answered  
Chosen Option : --

Q.2 Which letter cluster will replace the question mark (?) to complete the given series?  
FGHI, GEKE,?, IAQW, JYTS

- Ans ☒ 1. HANB
- ☒ 2. HCBA
- ☒ 3. HCNA
- ☒ 4. HNCA

Question ID : 26433065587  
Status : Answered  
Chosen Option : 3

Q.3 Which number will replace the question mark (?) in the following series?  
12, 30, 66, 138, ?, 570

- Ans ☒ 1. 314
- ☒ 2. 256
- ☒ 3. 408
- ☒ 4. 282

Question ID : 26433055287  
Status : Answered  
Chosen Option : 4

Q.4 A is the father of B. C and D are the brothers of B. E is the wife of D and F is the daughter of E. How is E related to A?

- Ans ☒ 1. Sister
- ☒ 2. Wife
- ☒ 3. Daughter
- ☒ 4. Son's wife

Question ID : 26433074716  
Status : Answered  
Chosen Option : 4

**Q.5** Select the set in which the numbers are related in the same way as are the numbers of the following sets.  
(NOTE : Operations should be performed on the whole numbers, without breaking down the numbers into its constituent digits. E.g. 13 – Operations on 13 such as adding/deleting/multiplying etc. to 13 can be performed. Breaking down 13 into 1 and 3 and then performing mathematical operations on 1 and 3 is not allowed.)  
(7, 24, 319)  
(5, 33, 92)

- Ans ☒ 1. (11, 97, 734)  
☒ 2. (6, 45, 170)  
☒ 3. (8, 77, 339)  
☒ 4. (9, 58, 671)

Question ID : 26433057522  
Status : Not Answered  
Chosen Option : --

**Q.6** Select the option that is related to the fourth number in the same way as the first number is related to the second number and the fifth number is related to the sixth number.  
512 : 24 :: ? : 48 :: 2197 : 39

- Ans ☒ 1. 2378  
☒ 2. 9261  
☒ 3. 4096  
☒ 4. 4438

Question ID : 26433056484  
Status : Answered  
Chosen Option : 1

**Q.7** P, Q, R, S, T, U and V are sitting around a square table, facing towards the centre of the table. Some of them are sitting at the corners while some are sitting at the exact centre of the sides. One seat is left vacant.  
P is sitting at the middle of one of the sides of the table. V is third to the left of P. U and T are the immediate neighbours of V. Q is second to the right of P. The seats second to the left and right of V are occupied. If S is third to the left of T, where is the vacant seat?

- Ans ☒ 1. Second to the left of U  
☒ 2. Second to the right of R  
☒ 3. Immediate left of R  
☒ 4. Third to the left of V





Question ID : 26433068819  
Status : Answered  
Chosen Option : 2

**Q.8** Based on the position in the English alphabetical order, three of the following letter-clusters are alike in some manner and one is different. Select the odd letter-cluster.

- Ans ☒ 1. MPNK  
☒ 2. TWGD  
☒ 3. JMQN  
☒ 4. PSKI




Question ID : 26433095719  
Status : Answered  
Chosen Option : 3

**Q.9** Select the option that is related to the fifth letter cluster in the same way as the second letter cluster is related to the first letter cluster and the fourth letter cluster is related to the third letter cluster.  
BF~~S~~OQ : WV~~N~~EL :: NZJRT : IPEHO :: YBFSR : ?

- Ans  1. TRIME  
 2. RKLDA  
 3. TRAIM  
 4. RMAID





Question ID : 26433074703  
Status : Answered  
Chosen Option : 3

**Q.10** Select the option that is related to the third word in the same way as the second word is related to the first word.  
(The words must be considered as meaningful English words and must NOT be related to each other based on the number of letters/number of consonants/vowels in the word)  
Assam : Dispur :: Jharkhand : ?

- Ans  1. Gaya  
 2. Ranchi  
 3. Dhanbad  
 4. Bokaro

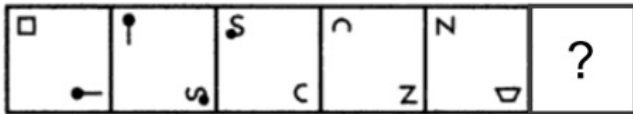
Question ID : 26433078890  
Status : Answered  
Chosen Option : 2

**Q.11** Select the number from among the given options that can replace the question mark (?) in the following series.  
93, 88, 78, 63, 43, ?

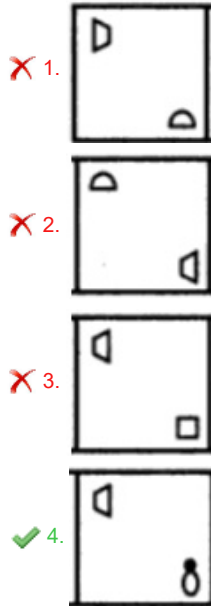
- Ans  1. 28  
 2. 18  
 3. 13  
 4. 33

Question ID : 26433057780  
Status : Answered  
Chosen Option : 2

Q.12 Select the figure from among the given options that can replace the question mark (?) in the following series.



Ans

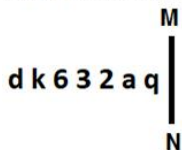


Question ID : 26433080529

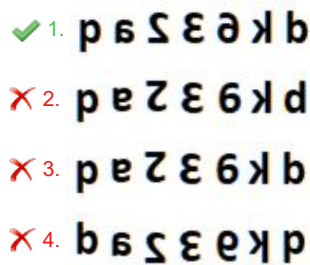
Status : Answered

Chosen Option : 4

Q.13 Select the correct mirror image of the given figure when the mirror is placed at MN as shown below.



Ans



Question ID : 26433056990

Status : Answered

Chosen Option : 1

Q.14 Six friends - A,B,C,D,E and F - are sitting around a circular table, facing towards the centre. B is an immediate neighbour of C and D. E is second to the right of B. If F is an immediate neighbour of A, and third to the right of C, then where is A sitting?

Ans

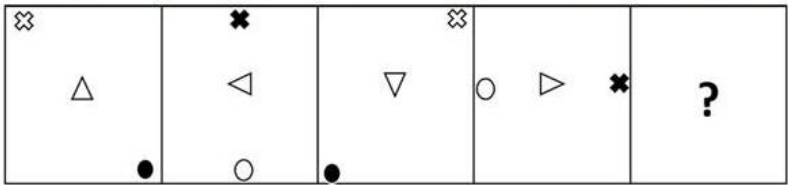
- 1. Immediate left of E
- 2. Second to the right of B
- 3. Second to the right of C
- 4. Immediate left of D

Question ID : 26433068815

Status : Answered


Chosen Option : 3

Q.15 Select the figure that will replace the question mark (?) in the following figure series.



Ans

✗ 1.



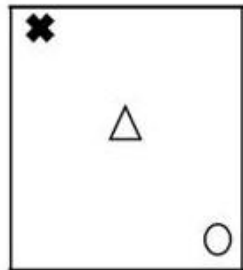
✓ 2.



✗ 3.



✗ 4.



Question ID : 26433056104

Status : Answered

Chosen Option : 2

Q.16 Select the correct combination of mathematical signs to sequentially replace the \* signs and to balance the given equation.  
 $676 * 13 * 169 * 15 * 497 * 3 = 137 * 8$

Ans ✗ 1. -, +, +, x, +, -

✓ 2. +, +, x, -, x, x

✗ 3. +, x, +, -, +, x

✗ 4. x, +, ÷, -, x, +

Question ID : 26433056532

Status : Not Answered

Chosen Option : --

Q.17 Select the option that represents the correct order of the given words as they would appear in an English dictionary.

1. Network
2. Nervous
3. Neutral
4. Neighbour
5. Nestle
6. Negotiate

Ans ☒ 1. 6, 4, 5, 2, 1, 3  
☒ 2. 6, 4, 2, 5, 1, 3  
☒ 3. 6, 2, 5, 4, 1, 3  
☒ 4. 4, 2, 6, 5, 1, 3

Question ID : 26433056730

Status : Answered

Chosen Option : 2

Q.18 In this question, three statements are given, followed by two conclusions numbered I and II. Assuming the statements to be true, even if they seem to be at variance with commonly known facts, decide which of the conclusion(s) logically follow(s) from the statements.

Statements:

All doors are windows.

Some windows are curtains.

All curtains are chairs.

Conclusions:

I. All doors are curtains.

II. Some chairs are windows.

Ans ☒ 1. Only conclusion II follows.  
☒ 2. Neither conclusion I nor II follows.  
☒ 3. Both conclusions I and II follow.  
☒ 4. Only conclusion I follows.

Question ID : 26433057920

Status : Answered

Chosen Option : 1

Q.19 Which two numbers, from amongst the given options, should be interchanged to make the given equation correct?

$$56 \div 8 + 7 - 4 \times 3 = 4$$

Ans ☒ 1. 3 and 7  
☒ 2. 56 and 3  
☒ 3. 4 and 8  
☒ 4. 8 and 7

Question ID : 26433055973

Status : Answered

Chosen Option : 4

Q.20 Six numbers 4, 5, 6, 7, 8 and 9 are written on different faces of a dice. Two positions of this dice are shown in the figure. Find the number on the face opposite to 7.



Ans ☒ 1. 6  
☒ 2. 8  
☒ 3. 4  
☒ 4. 5

Question ID : 26433057941

Status : Answered

Chosen Option : 2

Q.21 Select the combination of letters that when sequentially placed in the blanks of the given series, will complete the series.  
ANFYH\_NFYHC\_FYH\_NF\_H

- Ans
- ☒ 1. ADYY
  - ☒ 2. AYDY
  - ☒ 3. BNDY
  - ☒ 4. FDYB

Question ID : 26433057809  
Status : Answered  
Chosen Option : 2

Q.22 In a certain code language, 'LADDER' is written as '122441018' and 'MARBLE' is written as '1321821210'. How will 'HOUSE' be written in that language?

- Ans
- ☒ 1. 830421910
  - ☒ 2. 161521385
  - ☒ 3. 81521195
  - ☒ 4. 1630213810

Question ID : 26433068011  
Status : Answered  
Chosen Option : 1

Q.23 Six letters U, V, W, X, Y and Z are written on different faces of a dice. Two positions of this dice are shown in the figure. Find the letter on the face opposite to V.



- Ans
- ☒ 1. Y
  - ☒ 2. U
  - ☒ 3. Z
  - ☒ 4. W

Question ID : 26433057866  
Status : Answered  
Chosen Option : 3

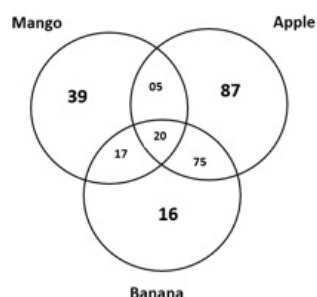
Q.24 एक आदमी की ओर इशारा करते हुए, राहुल कहता है कि, "वह मेरी माँ के भाई के पिता का इकलौता दामाद है।" इस आदमी का राहुल से क्या सम्बन्ध है?

- Ans
- ☒ 1. पिता
  - ☒ 2. चाचा
  - ☒ 3. दादा
  - ☒ 4. भाई

Question ID : 26433057697  
Status : Answered  
Chosen Option : 1



**Q.25** Study the given diagram carefully and answer the questions. The numbers in different sections indicate the number of people who like different fruits. How many people like bananas but NOT apples?



- Ans
- ☒ 1. 87
  - ☒ 2. 95
  - ☒ 3. 33
  - ☒ 4. 37

Question ID : 26433069377  
Status : Answered  
Chosen Option : 3

Section : Part-D- English Language

**Q.1** Select the most appropriate homonym to fill in the blank.

Sometimes, when a speaker changes his pitch of voice, it conveys a different \_\_\_\_\_ to the listeners.

- Ans
- ☒ 1. cents
  - ☒ 2. scents
  - ☒ 3. sense
  - ☒ 4. cense

Question ID : 26433058386  
Status : Answered  
Chosen Option : 3

**Q.2** Select the most appropriate option to fill in the blanks.

Shigeru Miyamoto is a famous game designer from Japan. His biggest \_\_\_\_\_ include Donkey Kong, Super Mario Bros, The legend of Zelda and Mario Kart, among others. He is called the Steven Spielberg of video games. His characters are a \_\_\_\_\_ of pleasant and charming personalities.

- Ans
- ☒ 1. creations; combination
  - ☒ 2. models; cooperation
  - ☒ 3. fabrics; collaboration
  - ☒ 4. designs; competition

Question ID : 26433070748  
Status : Answered  
Chosen Option : 1

**Q.3** Select the most appropriate meaning of the given idiom.

**Neck and crop**

- Ans** ☒ 1. In and out  
☒ 2. To and for  
☒ 3. Forward and backward  
☒ 4. Totally and completely

Question ID : 26433072431

Status : **Not Attempted and Marked For Review**

Chosen Option : --

**Q.4** Select the most appropriate option to fill in the blanks.

The \_\_\_\_\_ met every Sunday morning in the church and \_\_\_\_\_ on their ideas on religion.

- Ans** ☒ 1. formation; discovered  
☒ 2. congregation; deliberated  
☒ 3. convoy; debated  
☒ 4. consternation; dominated

Question ID : 26433065184

Status : **Answered**

Chosen Option : 3

**Q.5** Parts of the given sentence have been given as options. One of them contains a spelling error. Select the option that rectifies the error.

A chamelelon changes its colour to regulate its body temperature according to the environment.

- Ans** ☒ 1. environment  
☒ 2. chameleon  
☒ 3. regulate  
☒ 4. temperature

Question ID : 26433059581

Status : **Answered**

Chosen Option : 2

**Q.6** Identify the error in tense and choose the correct sentence from the following options.  
Sunlight is providing you energy.

- Ans** ☒ 1. Sunlight has been providing you energy.  
☒ 2. Sunlight provides you energy.  
☒ 3. Sunlight were providing you energy.  
☒ 4. Sunlight was providing you energy.

Question ID : 26433059188

Status : **Answered**

Chosen Option : 2

**Q.7** Select the most appropriate synonym of the given word.  
**Adore**

- Ans ☒ 1. Admit  
☒ 2. Criticise  
☒ 3. Deprecate  
☒ 4. Admire

Question ID : 26433063582  
Status : Answered  
Chosen Option : 4

**Q.8** Select the most appropriate ANTONYM of the underlined word in a sentence.

He had been Director of the project since its inception.

- Ans ☒ 1. Finalisation  
☒ 2. Calculation  
☒ 3. Estimation  
☒ 4. Conclusion

Question ID : 26433056006  
Status : Answered  
Chosen Option : 1

**Q.9** Select the most appropriate meaning of the underlined word given in a sentence.

The Charlie family are forced to subsist on bread and margarine for breakfast and cabbage soup for supper.

- Ans ☒ 1. prepare  
☒ 2. argue  
☒ 3. survive  
☒ 4. scrutinise

Question ID : 26433055994  
Status : Answered  
Chosen Option : 3

**Q.10** Select the most appropriate option to fill in the blank.

The newspaper as a public \_\_\_\_\_ plays a vital role in maintaining democracy.

- Ans ☒ 1. movement  
☒ 2. policy  
☒ 3. forum  
☒ 4. agenda

Question ID : 26433072415  
Status : Answered  
Chosen Option : 1

Q.11 Select the most appropriate option to fill in the blank.

Anticipation of threats to the sustainability of human civilisation needs to encompass time periods that span not just decades but millennia. All existential risks need to be jointly assessed, as opposed to addressing risks such as climate change and pandemics separately. Exploring the potential events that are likely to cause the biggest risks as well as asking why we should even desire to thrive into the distant future, this work looks at the 'biggest picture possible' in order to argue that futures-oriented decision-making \_\_\_\_\_ be a permanent aspect of human society and futures-oriented policy making must take precedent over the day-to-day policy making of current generations in times of great peril.

- Ans
- ☒ 1. may to
  - ☒ 2. ought out
  - ☒ 3. might to
  - ☒ 4. ought to

Question ID : 26433069772

Status : Answered

Chosen Option : 4

Q.12 Select the most appropriate option to substitute the underlined segment in the given sentence.

Robin also gives reference of Sadhya Tara, a poem written by an unknown author.

- Ans
- ☒ 1. nameless
  - ☒ 2. anonymous
  - ☒ 3. faceless
  - ☒ 4. unspecified

Question ID : 26433060848

Status : Answered

Chosen Option : 4

Q.13 The following sentence has been divided into parts. One of them may contain an error. Select the part that contains the error from the given options. If you don't find any error, mark 'No error' as your answer.

As we lay on the couch, / she lied to me / about her trip.

- Ans
- ☒ 1. about her trip
  - ☒ 2. she lied to me
  - ☒ 3. As we lay on the couch
  - ☒ 4. No error

Question ID : 26433061498

Status : Answered

Chosen Option : 2

Q.14 Select the most appropriate meaning of the highlighted idiom.  
The condition of the Russian economy is in dire straits.

- Ans
- ☒ 1. Very optimistic
  - ☒ 2. In a very bad or difficult situation
  - ☒ 3. Hard to comprehend
  - ☒ 4. Unduly harsh

Question ID : 26433058300

Status : Not Answered

Chosen Option : --

Q.15 Select the option that can be used as a one-word substitute for the underlined group of words.

The wild honey collectors lived as a community that is smaller than a village.

- Ans ☒ 1. Hamlet  
☒ 2. Gang  
☒ 3. Organisation  
☒ 4. Group

Question ID : 26433060396  
Status : Answered  
Chosen Option : 1

Q.16 Select the INCORRECTLY spelt word.

- Ans ☒ 1. Loude  
☒ 2. Lucid  
☒ 3. Lose  
☒ 4. Loot

Question ID : 26433071853  
Status : Answered  
Chosen Option : 1

Q.17 Select the option that can be used as a one-word substitute for the given group of words.

The quality of being new and original

- Ans ☒ 1. Nuance  
☒ 2. Novelty  
☒ 3. Neophyte  
☒ 4. Novice

Question ID : 26433070713  
Status : Answered  
Chosen Option : 2

Q.18 Select the most appropriate synonym of the given word.

Zenith

- Ans ☒ 1. Height  
☒ 2. Depth  
☒ 3. Summit  
☒ 4. Surface

Question ID : 26433055855  
Status : Answered  
Chosen Option : 1

Q.19 Select the most appropriate ANTONYM of the underlined word.

I don't consider him as my foe.

- Ans ☒ 1. Companion  
☒ 2. Neighbour  
☒ 3. Boss  
☒ 4. Antagonist

Question ID : 26433063637  
Status : Answered  
Chosen Option : 1

**Q.20** Select the option that can be used as a one-word substitute for the given group of words.

One who walks in sleep

- Ans ☒ 1. Noctambulist  
☒ 2. Ventriloquist  
☒ 3. Somnambulist  
☒ 4. Somniloquist

Question ID : 26433060830

Status : Answered

Chosen Option : 4

**Comprehension:**

In the following passage, some words have been deleted. Read the passage carefully and select the most appropriate option to fill in each blank.

Dolphins are regarded as the 1.\_\_\_\_\_ creatures in the sea and stories of them helping 2.\_\_\_\_\_ sailors have been common since Roman times. The more we learn about dolphins, the more we realise that their society is more complex than people previously imagined. They look after other dolphins when they are ill, care for pregnant mothers and protect the 3.\_\_\_\_\_ in the community, as we do. Some scientists have 4.\_\_\_\_\_ that dolphins have a language but it is much more probable that they communicate with each other without needing words. Could any of these mammals be more intelligent than man? Certainly, the most common argument in favour of man's superiority over them that we can kill them more easily than they can kill us is the least satisfactory. On the 5.\_\_\_\_\_, the more we discover about these remarkable creatures, the less we appear superior when we destroy them.

**SubQuestion No : 21**

**Q.21** Select the most appropriate option to fill in blank no. 1.

- Ans ☒ 1. most dangerous  
☒ 2. most ferocious  
☒ 3. trickiest  
☒ 4. friendliest

Question ID : 26433059022

Status : Answered

Chosen Option : 4

**Comprehension:**

In the following passage, some words have been deleted. Read the passage carefully and select the most appropriate option to fill in each blank.

Dolphins are regarded as the 1.\_\_\_\_\_ creatures in the sea and stories of them helping 2.\_\_\_\_\_ sailors have been common since Roman times. The more we learn about dolphins, the more we realise that their society is more complex than people previously imagined. They look after other dolphins when they are ill, care for pregnant mothers and protect the 3.\_\_\_\_\_ in the community, as we do. Some scientists have 4.\_\_\_\_\_ that dolphins have a language but it is much more probable that they communicate with each other without needing words. Could any of these mammals be more intelligent than man? Certainly, the most common argument in favour of man's superiority over them that we can kill them more easily than they can kill us is the least satisfactory. On the 5.\_\_\_\_\_, the more we discover about these remarkable creatures, the less we appear superior when we destroy them.

**SubQuestion No : 22**

**Q.22** Select the most appropriate option to fill in blank no. 2.

- Ans ☒ 1. swimming  
☒ 2. sailing  
☒ 3. drowning  
☒ 4. laughing

Question ID : 26433059023

Status : Answered

Chosen Option : 3

**Comprehension:**

In the following passage, some words have been deleted. Read the passage carefully and select the most appropriate option to fill in each blank.

Dolphins are regarded as the 1. \_\_\_\_\_ creatures in the sea and stories of them helping 2. \_\_\_\_\_ sailors have been common since Roman times. The more we learn about dolphins, the more we realise that their society is more complex than people previously imagined. They look after other dolphins when they are ill, care for pregnant mothers and protect the 3. \_\_\_\_\_ in the community, as we do. Some scientists have 4. \_\_\_\_\_ that dolphins have a language but it is much more probable that they communicate with each other without needing words. Could any of these mammals be more intelligent than man? Certainly, the most common argument in favour of man's superiority over them that we can kill them more easily than they can kill us is the least satisfactory. On the 5. \_\_\_\_\_, the more we discover about these remarkable creatures, the less we appear superior when we destroy them.

**SubQuestion No : 23**

**Q.23** Select the most appropriate option to fill in blank no. 3.

- Ans  1. healthiest  
 2. strangest  
 3. weakest  
 4. strongest

Question ID : 26433059024  
Status : Answered  
Chosen Option : 3

**Comprehension:**

In the following passage, some words have been deleted. Read the passage carefully and select the most appropriate option to fill in each blank.

Dolphins are regarded as the 1. \_\_\_\_\_ creatures in the sea and stories of them helping 2. \_\_\_\_\_ sailors have been common since Roman times. The more we learn about dolphins, the more we realise that their society is more complex than people previously imagined. They look after other dolphins when they are ill, care for pregnant mothers and protect the 3. \_\_\_\_\_ in the community, as we do. Some scientists have 4. \_\_\_\_\_ that dolphins have a language but it is much more probable that they communicate with each other without needing words. Could any of these mammals be more intelligent than man? Certainly, the most common argument in favour of man's superiority over them that we can kill them more easily than they can kill us is the least satisfactory. On the 5. \_\_\_\_\_, the more we discover about these remarkable creatures, the less we appear superior when we destroy them.

**SubQuestion No : 24**

**Q.24** Select the most appropriate option to fill in blank no. 4.

- Ans  1. believing  
 2. suggesting  
 3. suggested  
 4. telling

Question ID : 26433059025  
Status : Answered  
Chosen Option : 3

**Comprehension:**

In the following passage, some words have been deleted. Read the passage carefully and select the most appropriate option to fill in each blank.

Dolphins are regarded as the 1. \_\_\_\_\_ creatures in the sea and stories of them helping 2. \_\_\_\_\_ sailors have been common since Roman times. The more we learn about dolphins, the more we realise that their society is more complex than people previously imagined. They look after other dolphins when they are ill, care for pregnant mothers and protect the 3. \_\_\_\_\_ in the community, as we do. Some scientists have 4. \_\_\_\_\_ that dolphins have a language but it is much more probable that they communicate with each other without needing words. Could any of these mammals be more intelligent than man? Certainly, the most common argument in favour of man's superiority over them that we can kill them more easily than they can kill us is the least satisfactory. On the 5. \_\_\_\_\_, the more we discover about these remarkable creatures, the less we appear superior when we destroy them.

**SubQuestion No : 25**

**Q.25** Select the most appropriate option to fill in blank no. 5.

- Ans ☒ 1. besides  
☒ 2. side  
☒ 3. contrary  
☒ 4. opposite

Question ID : 26433059026  
Status : Answered  
Chosen Option : 1

Section : **Part-E- Computer Fundamentals**

**Q.1** \_\_\_\_\_ is used in MS-Excel 2010 to open an already existing file.

- Ans ☒ 1. SAVE  
☒ 2. SAVE AS  
☒ 3. NEW  
☒ 4. OPEN

Question ID : 26433095401  
Status : Answered  
Chosen Option : 4

**Q.2** A table in MS-Word 2010 can have unlimited rows and a maximum of \_\_\_\_\_ columns.

- Ans ☒ 1. 62  
☒ 2. 61  
☒ 3. 64  
☒ 4. 63

Question ID : 26433095362  
Status : Answered  
Chosen Option : 3

**Q.3** In MS Word, the function key F12 is used to \_\_\_\_\_.

- Ans ☒ 1. Open the Save As dialog box.  
☒ 2. Open next working window.  
☒ 3. Open the File Menu.  
☒ 4. Close the working window.

Question ID : 26433095503  
Status : Answered  
Chosen Option : 1



Q.4 Bing is a/an\_\_\_\_\_

- Ans ☒ 1. Internet service provider
- ☒ 2. Search engine
- ☒ 3. Social network site
- ☒ 4. Browser

Question ID : 26433095466  
Status : Answered  
Chosen Option : 2

Q.5 Match the following list of domain names with their meanings

Domain Name Meaning

P. .net 1. Non-profit organizations

Q. .edu 2. Commercial organizations

R. .org 3. Educational organizations

S. .com 4. Indicates state and national government agencies.

5. Department of Defense

6. Network organization

@Qmaths

- Ans ☒ 1. P-1, Q-3, R-4, S-2
- ☒ 2. P-6, Q-3, R-1, S-2
- ☒ 3. P-6, Q-2, R-4, S-2
- ☒ 4. P-5, Q-1, R-2, S-4

Question ID : 26433095537  
Status : Answered  
Chosen Option : 2

Q.6 Which of the following is not a word processor?

- Ans ☒ 1. Microsoft Word
- ☒ 2. Chrome
- ☒ 3. Notepad
- ☒ 4. LibreOffice Writer

Question ID : 26433095504  
Status : Answered  
Chosen Option : 2

Q.7 Header and Footer option is present in \_\_\_\_\_ tab in MS-Excel 2010 ribbon bar.

- Ans ☒ 1. Data
- ☒ 2. Insert
- ☒ 3. File
- ☒ 4. View

Question ID : 26433095459  
Status : Answered  
Chosen Option : 4

Q.8 What is the minimum Zoom Percentage in MS-Word 2010 application?

- Ans ☒ 1. 5%
- ☒ 2. 25%
- ☒ 3. 15%
- ☒ 4. 10%

Question ID : 26433095531  
Status : Not Answered  
Chosen Option : --

Q.9 You can choose to create a \_\_\_\_\_ that will appear at the end of every email we send.

- Ans
- ☒ 1. Subject
  - ☒ 2. Signature
  - ☒ 3. Formatting options
  - ☒ 4. Attachments

Question ID : 26433095345  
Status : Answered  
Chosen Option : 4

Q.10 What is the value of the following expression in MS-Excel 2010?  
= 22 – 12 / 3 / 2 + 4

- Ans
- ☒ 1. 26
  - ☒ 2. 8
  - ☒ 3. 20
  - ☒ 4. 24

@Qmaths

Question ID : 26433095380  
Status : Answered  
Chosen Option : 3