

Head Constable Ministerial in Delhi Police Examination 2022

Roll Number	
Candidate Name	
Venue Name	TCS Gito Bitan
Exam Date	17/10/2022
Exam Time	1:00 PM - 2:30 PM
Subject	Head Constable Ministerial in Delhi Police Examination 2022

Section : **Part-A-General Awareness**

Q.1 According to NITI Aayog Multidimensional Poverty Index Report, 2021 which of the following states is the poorest state in India?

- Ans ☒ 1. Jharkhand
- ☒ 2. Goa
- ☒ 3. Tamil Nadu
- ☒ 4. Sikkim

Question ID : **26433067220**
Status : **Answered**
Chosen Option : **1**

Q.2 On 4th June 2021, India's first CAR-T cell therapy which was done at Mumbai's Tata Memorial Centre, is for which of the following ailments?

- Ans ☒ 1. Bone Marrow Transplant
- ☒ 2. AIDS
- ☒ 3. Blood Cancer
- ☒ 4. Lung Transplant

Question ID : **26433095275**
Status : **Answered**
Chosen Option : **3**

Q.3 Loans upto what amount can be issued under the MUDRA Shishu Loan?

- Ans ☒ 1. RS.50000
- ☒ 2. RS.60000
- ☒ 3. RS.30000
- ☒ 4. RS.10000

Question ID : **26433059239**
Status : **Not Answered**
Chosen Option : **--**

Q.4 Daimabad, a Harappan site is presently located in which of the following places in India?

- Ans ☒ 1. Rajasthan
- ☒ 2. Gujarat
- ☒ 3. Haryana
- ☒ 4. Maharashtra

Question ID : **26433064349**
Status : **Answered**
Chosen Option : **2**

Q.5 PM Umeed scheme was launched in April 2021, with the aim to provide skill training to around three lakh youth to become entrepreneurs by _____.

- Ans ☒ 1. 2026-27
- ☒ 2. 2025-26
- ☒ 3. 2027-28
- ☒ 4. 2023-24

Question ID : 26433072872
Status : Answered
Chosen Option : 4

Q.6 Select the option representing the given communities and their total population in correct percentage, according to Census of India 2011.

- Ans ☒ 1. Hindu - 79.8%, Muslim - 14.2%, Christian - 2.3%
- ☒ 2. Hindu - 79.8%, Muslim - 14.2%, Christian - 6.3%
- ☒ 3. Hindu - 79.8%, Muslim - 16.2%, Christian - 2.3%
- ☒ 4. Hindu - 89.8%, Muslim - 14.2%, Christian - 2.3%

Question ID : 26433071627
Status : Answered
Chosen Option : 1

Q.7 Guidelines on the Strengthening of Pharmaceutical Industry (SPI) scheme were released in March 2022. The scheme was implemented by which Ministry?

- Ans ☒ 1. Ministry of Labour and Employment
- ☒ 2. Ministry of Health and Family Welfare
- ☒ 3. Ministry of Chemicals and Fertilizers
- ☒ 4. Ministry of MSME

Question ID : 26433081800
Status : Answered
Chosen Option : 3

Q.8 When did the extensive use of fertilisers, high yielding varieties of seeds and exploitation of irrigation potential start in India?

- Ans ☒ 1. During the third Five-Year Plan
- ☒ 2. During the second Five-Year Plan
- ☒ 3. During the fourth Five-Year Plan
- ☒ 4. During the three annual plans

Question ID : 26433059108
Status : Not Answered
Chosen Option : --

Q.9 India beat which country to win the 2022 Cricket U19 World Cup trophy?

- Ans ☒ 1. England
- ☒ 2. Australia
- ☒ 3. West Indies
- ☒ 4. Pakistan

Question ID : 26433055579
Status : Answered
Chosen Option : 3

Q.10 Haryali is a watershed development project sponsored by the Central Government. Which of the following is NOT the aim of this project?

- Ans ☒ 1. Providing water to produce hydro power
- ☒ 2. Providing water for agriculture
- ☒ 3. Conserving water for drinking
- ☒ 4. Providing water for fisheries and afforestation

Question ID : 26433055652
Status : Answered
Chosen Option : 1

Q.11 What was the period of reign of Babur?

- Ans ☒ 1. 1526-1530 AD
- ☒ 2. 1530-1535 AD
- ☒ 3. 1520-1530 AD
- ☒ 4. 1515-1525 AD

Question ID : 26433095241
Status : Answered
Chosen Option : 3

Q.12 A microfinance loan is a loan which is _____-free.

- Ans ☒ 1. Return
- ☒ 2. Risk
- ☒ 3. interest
- ☒ 4. collateral

Question ID : 26433059243
Status : Answered
Chosen Option : 2

Q.13 Which Article of the Constitution of India guarantees equality of opportunity in matters of public employment?

- Ans ☒ 1. Article 14
- ☒ 2. Article 16
- ☒ 3. Article 23
- ☒ 4. Article 21

Question ID : 26433069848
Status : Answered
Chosen Option : 1

Q.14 Who was the Prime Minister of United Kingdom when the 'Indian Independence Act' was passed?

- Ans ☒ 1. Clement Attlee
- ☒ 2. Ramsay MacDonald
- ☒ 3. Winston Churchill
- ☒ 4. Stanley Baldwin

Question ID : 26433055622
Status : Answered
Chosen Option : 1

Q.15 Which of the following Kathak dancer was awarded the Padma Shri for the year 2020?

- Ans
- ☒ 1. Vijay Shanker
 - ☒ 2. Brijmohan Mishra
 - ☒ 3. Ramlal Bareth
 - ☒ 4. Purushottam Dadheech

Question ID : 26433064373
Status : Not Answered
Chosen Option : --

Q.16 What is the name of the India's first saline water lantern launched on August 14, 2022?

- Ans
- ☒ 1. Vidyut
 - ☒ 2. Chamak
 - ☒ 3. Roshani
 - ☒ 4. Ujala

Question ID : 26433095240
Status : Not Answered
Chosen Option : --

Q.17 The Nanda Devi Biosphere Reserve is situated in:

- Ans
- ☒ 1. Sikkim
 - ☒ 2. Uttar Pradesh
 - ☒ 3. Uttarakhand
 - ☒ 4. Himachal Pradesh

Question ID : 26433054991
Status : Answered
Chosen Option : 3

Q.18 In January 2022, who among the following was appointed as the new Chief Economic Advisor of the Government of India?

- Ans
- ☒ 1. Dr. Krishnamurthy Subramanian
 - ☒ 2. Bibek Debroy
 - ☒ 3. Surjit Bhalla
 - ☒ 4. Anantha Nageswaran

Question ID : 26433055565
Status : Answered
Chosen Option : 1

Q.19 Which of the following is NOT celebrated during the same time of the year?

- Ans
- ☒ 1. Bonalu
 - ☒ 2. Lohri
 - ☒ 3. Makar Sankranti
 - ☒ 4. Uttarayan

Question ID : 26433066547
Status : Answered
Chosen Option : 1

Q.20 Who among the following was hanged till death by the British Government in 1915 for his involvement in the Ghadar Conspiracy?

- Ans ☒ 1. Bhagwan Singh Gyanee
☒ 2. Sohan Singh Bhakhna
☒ 3. Tarak Nath Das
☒ 4. Kartar Singh Sarabha

Question ID : 26433065557
Status : Answered
Chosen Option : 2

Section : Part-B-Quantitative Aptitude

Q.1

If $\frac{334}{0.334} = \frac{33.4}{K}$, what is the value of K?

- Ans ☒ 1. 3.34
☒ 2. 0.00334
☒ 3. 0.334
☒ 4. 0.0334

Question ID : 26433063364
Status : Answered
Chosen Option : 4

Q.2

Find the diameter of a sphere whose surface area is 154 cm^2 . (Take $\pi = \frac{22}{7}$)

- Ans ☒ 1. 4 cm
☒ 2. 7 cm
☒ 3. 8 cm
☒ 4. 3.5 cm

Question ID : 26433057147
Status : Answered
Chosen Option : 2

Q.3

What would be the simple interest (in Rs.) of the principal amount of Rs.10,000 for 3 months at a rate of 16% per annum?

- Ans ☒ 1. 200
☒ 2. 800
☒ 3. 1600
☒ 4. 400

Question ID : 26433071326
Status : Answered
Chosen Option : 4

- Q.4 Refer to the following table. Read the table and answer the question.
Food grain Production in a country in 1999. (in lakh tons)

State	Rice	Wheat	Jowar	Pulses	Other
P	55	113	---	37	39
Q	58	96	83	29	25
R	69	42	77	24	41
S	51	47	69	31	25
T	47	32	51	23	21
U	78	25	22	---	28
V	67	18	17	22	20
W	48	38	41	32	55

Which State had the highest grain production?

- Ans ☒ 1. R
☒ 2. S
☒ 3. Q
☒ 4. P

Question ID : 26433074231
Status : Answered
Chosen Option : 3

- Q.5 Tom can do a piece of work in 5 days and Jerry in 8 days. They work together but 3 days before the completion of the work, Tom leaves. In how many days was the work completed?

- Ans ☒ 1. $3\frac{12}{13}$ days
☒ 2. $4\frac{11}{13}$ days
☒ 3. $1\frac{12}{13}$ days
☒ 4. $4\frac{12}{13}$ days

Question ID : 26433063725
Status : Answered
Chosen Option : 4

- Q.6 In a triangle PQR, S is a point on the side PQ and T is a point on the side PR such that STRQ is a trapezium. Given that ST : QR = 4 : 5, what is the ratio of the area of trapezium STRQ to the area of the triangle PST?

- Ans ☒ 1. 16 : 25
☒ 2. 25 : 16
☒ 3. 9 : 16
☒ 4. 16 : 9

Question ID : 26433073106
Status : Answered
Chosen Option : 3

Q.7 X and Y have their monthly incomes in the ratio 9 : 7 while their monthly expenditures are in the ratio 5 : 3. If they have saved ₹16,000 and ₹14,000 monthly, respectively, then the difference in their monthly incomes is:

- Ans ☒ 1. ₹5,500
☐ 2. ₹7,500
☐ 3. ₹8,000
☐ 4. ₹6,000

Question ID : 26433058911
Status : Answered
Chosen Option : 1

Q.8 $(4.5 \times 4.5 + 22.5 + 2.5 \times 2.5)$ is equal to:

- Ans ☐ 1. 4.9
☐ 2. 36
☐ 3. 4
☒ 4. 49

Question ID : 26433063443
Status : Answered
Chosen Option : 4

Q.9 If $\sin A + \cos A = \sqrt{7}$, then $\tan A + \cot A$ is equal to:

- Ans ☐ 1. 1
☐ 2. 3
☐ 3. 0
☒ 4. $\frac{1}{3}$

Question ID : 26433061101
Status : Answered
Chosen Option : 4

Q.10 The average age of 40 girls of a class is 15 years. When the age of the science teacher is included, the average becomes 16 years. Find the age of the science teacher.

- Ans ☐ 1. 46 years
☒ 2. 56 years
☐ 3. 45 years
☐ 4. 55 years

Question ID : 26433065050
Status : Answered
Chosen Option : 2

Q.11 In which set of numbers every pair is coprime to each other?

- Ans ☐ 1. 42, 55, 69
☒ 2. 21, 32, 43
☐ 3. 35, 48, 55
☐ 4. 24, 35, 49

Question ID : 26433066171
Status : Answered
Chosen Option : 2

Q.12 A company's workforce shrank from 40 to 29 people. What is the staffing reduction percentage?

- Ans
- ☒ 1. 30%
 - ☒ 2. 20%
 - ☒ 3. 27.5%
 - ☒ 4. 29.3%

Question ID : 26433057121
Status : Answered
Chosen Option : 3

Q.13 If $x^2 - \sqrt{8}x + 1 = 0$, then the value of $\left(x^4 - \frac{1}{x^4}\right)$ is:

- Ans
- ☒ 1. $24\sqrt{6}$
 - ☒ 2. $24\sqrt{2}$
 - ☒ 3. $20\sqrt{2}$
 - ☒ 4. $20\sqrt{6}$

Question ID : 26433061951
Status : Answered
Chosen Option : 2

Q.14 If a shopkeeper marks up his price by 20% and then allows a 20% discount, what is his percentage profit or loss?

- Ans
- ☒ 1. 4% profit
 - ☒ 2. 4% loss
 - ☒ 3. 5% loss
 - ☒ 4. 5% profit

Question ID : 26433056309
Status : Answered
Chosen Option : 2

Q.15 A person gives 5% and 15% two successive discount on a watch. If the selling price of the watch is ₹323, then its marked price is:

- Ans
- ☒ 1. ₹400
 - ☒ 2. ₹658
 - ☒ 3. ₹524
 - ☒ 4. ₹500

Question ID : 26433074457
Status : Answered
Chosen Option : 1

Q.16 Nita travelled a distance of 57 km in 11 hours. She travelled partly on foot at 3 km/h and partly on bicycle at 11 km/h. What is the distance travelled on bicycle?

- Ans
- ☒ 1. 38 km
 - ☒ 2. 33 km
 - ☒ 3. 24 km
 - ☒ 4. 29 km

Question ID : 26433056329
Status : Answered
Chosen Option : 2

Q.17 A can complete a work in 15 days and B in 20 days. If they work on it together for 4 days, then the fraction of work that is left will be_____.

- Ans
- ☒ 1. 4
 - ☒ 2. $\frac{1}{4}$
 - ☒ 3. $\frac{15}{8}$
 - ☒ 4. $\frac{8}{15}$

Question ID : 26433061224
Status : Answered
Chosen Option : 4

Q.18 Rita invested ₹50,000 in a bank. In two years how much compound interest will she get, if the first-year rate of interest was 10% and in the second year it was 4% more than the first year?

- Ans
- ☒ 1. ₹12720
 - ☒ 2. ₹12710
 - ☒ 3. ₹12690
 - ☒ 4. ₹12700

Question ID : 26433061412
Status : Answered
Chosen Option : 4

Q.19 If $p + q + r = 0$, the value of $\frac{p^2}{qr} + \frac{q^2}{rp} + \frac{r^2}{pq} = ?$

- Ans
- ☒ 1. 3 pqr
 - ☒ 2. 1
 - ☒ 3. 3
 - ☒ 4. 2

Question ID : 26433061114
Status : Answered
Chosen Option : 3

Q.20 If a closed cylindrical tank of radius 1.5m and height 3m is to be made from a sheet of metal, then how much sheet of metal is required to do it to ignore the wastage?

- Ans ☒ 1. 42.42 m²
☒ 2. 42.24 m²
☒ 3. 24.24 m²
☒ 4. 24.42 m²

Question ID : 26433061229
Status : Answered
Chosen Option : 1

Section : Part-C-General Intelligence

Q.1 Select the option that represents the correct order of the given words as they would appear in an English dictionary.

1. Trigger
2. Triple
3. Triangle
4. Trifle
5. Trivial
6. Tripod

- Ans ☒ 1. 3, 5, 4, 1, 2, 6
☒ 2. 3, 4, 1, 6, 2, 5
☒ 3. 3, 4, 1, 2, 6, 5
☒ 4. 3, 1, 4, 2, 6, 5

Question ID : 26433056725
Status : Answered
Chosen Option : 3

Q.2 'P @ Q' means 'P is the father of Q'
'P & Q' means 'P is the daughter of Q'
'P # Q' means 'P is the brother of Q'

If 'A @ B # C # D & E', then how is A related to E?

- Ans ☒ 1. Husband
☒ 2. Mother
☒ 3. Father
☒ 4. Son

Question ID : 26433056803
Status : Answered
Chosen Option : 1

Q.3 Select the number from among the given options that can replace the question mark (?) in the following series.
7, 21, 12, 36, 24, 72, 57, ?

- Ans ☒ 1. 170
☒ 2. 166
☒ 3. 174
☒ 4. 171

Question ID : 26433057056
Status : Answered
Chosen Option : 4

Q.4 Select the option that is related to the third term in the same way as the second term is related to the first term and the sixth term is related to the fifth term.
82 : 98 :: 47 : ? :: 59 : 75

- Ans ☒ 1. 60
☒ 2. 63
☒ 3. 68
☒ 4. 67

Question ID : 26433057058
Status : Answered
Chosen Option : 2

Q.5 Select the combination of letters that when sequentially placed in the blanks of the given series, will complete the series.
QRST _ Q _ SS _ QR _ STQQ

- Ans ☒ 1. QTTQ
☒ 2. QRQT
☒ 3. TRTR
☒ 4. RTTS

Question ID : 26433057738
Status : Answered
Chosen Option : 3

Q.6 In a code language, 'BRING' is coded as H65A and 'FINAL' is coded as M57E. How will 'CRATE' be coded in the same language?

- Ans ☒ 1. D62F
☒ 2. B58F
☒ 3. F62B
☒ 4. F58D

Question ID : 26433057822
Status : Answered
Chosen Option : 3

Q.7 'Brave' is related to 'Courageous' in the same way as 'Calm' is related to '_____'.
(The words must be considered as meaningful English words and must NOT be related to each other based on the number of letters/number of consonants/vowels in the word)

- Ans ☒ 1. Excite
☒ 2. Stormy
☒ 3. Upset
☒ 4. Quiet

Question ID : 26433078886
Status : Answered
Chosen Option : 4

Q.8 Study the given diagram carefully and answer the question. The numbers in different sections indicate the number of persons.



How many such insurance agents are there who are drivers but NOT healthy?

- Ans ☒ 1. 9
- ☐ 2. 25
- ☐ 3. 19
- ☐ 4. 13

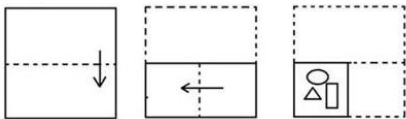
Question ID : 26433070411
Status : Answered
Chosen Option : 1

Q.9 Seven friends - A, B, C, D, E, F and G - are seated in a row, facing north. Exactly three people are seated to the left of A. F is seated second to the left of A. E is an immediate neighbour of G and D. F is fourth to the left of E. Neither G nor C is seated at the extreme ends. If B is not a neighbour of A, where is C seated?

- Ans ☐ 1. Immediate right of A
- ☐ 2. Third to the right of B
- ☒ 3. Second to the left of G
- ☐ 4. Second to the left of E

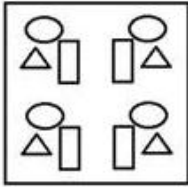
Question ID : 26433068823
Status : Answered
Chosen Option : 3

Q.10 The sequence of folding a piece of paper and the manner in which the folded paper has been cut is shown below.
Select the figure which would most closely resemble the unfolded form of the paper.

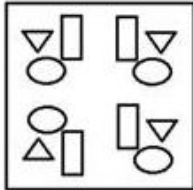


Ans

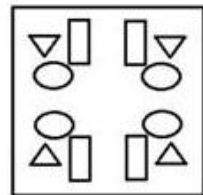
☒ 1.



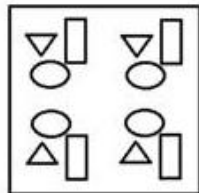
☒ 2.



☒ 3.



☒ 4.



Question ID : 26433056687

Status : Answered

Chosen Option : 3

Q.11 Select the correct combination of mathematical signs to sequentially replace the * signs and to balance the given equation.
 $5 * 4 * 20 * 4 * 6 = 19$

Ans

☒ 1. $\times \div + -$

☒ 2. $+ \times \div -$

☒ 3. $- \div + \times$

☒ 4. $\div - \times +$

Question ID : 26433057472

Status : Answered

Chosen Option : 2

Q.12 Select the set in which the numbers are related in the same way as are the numbers of the following sets.
(NOTE : Operations should be performed on the whole numbers, without breaking down the numbers into its constituent digits. E.g. 13 – Operations on 13 such as adding/deleting/multiplying etc. to 13 can be performed. Breaking down 13 into 1 and 3 and then performing mathematical operations on 1 and 3 is not allowed.)
(79, 64, 94)
(48, 33, 63)

- Ans ☒ 1. (57, 42, 72)
☒ 2. (65, 50, 95)
☒ 3. (93, 78, 118)
☒ 4. (63, 48, 83)

Question ID : 26433057521
Status : Answered
Chosen Option : 1

Q.13 Select the figure from among the given options that can replace the question mark (?) in the following series.

A3
iii△

Z3
iii△

Y2
ii=

X2
ii=

?

Ans

- ☒ 1.

4W
iiii□
- ☒ 2.

Wiiii
□4
- ☒ 3.

W4
iiii□
- ☒ 4.

Wiiii
4□

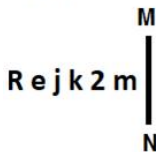
Question ID : 26433068714
Status : Answered
Chosen Option : 3

Q.14 Select the number from among the given options that can replace the question mark (?) in the following series.
41, 48, 59, 72, 89, ?

- Ans
- ☐ 1. 106
 - ☐ 2. 96
 - ☐ 3. 112
 - ☒ 4. 108

Question ID : 26433057779
Status : Answered
Chosen Option : 4

Q.15 Select the correct mirror image of the given figure when the mirror is placed at MN as shown below.



- Ans
- ☐ 1. Rejk2m
 - ☒ 2. Rejk2m
 - ☐ 3. Rejk2m
 - ☐ 4. Rejk2m

Question ID : 26433056983
Status : Answered
Chosen Option : 2

Q.16 Select the option that is related to the fifth letter-cluster in the same way as the second letter-cluster is related to the first letter-cluster and the fourth letter-cluster is related to the third letter-cluster.
SERIOUS : FTJSVPT :: UNKNOWN : OVOLXPO :: WARNING : ?

- Ans
- ☒ 1. BXOSOJH
 - ☐ 2. XBSOJOH
 - ☐ 3. BXSOJOH
 - ☐ 4. BXSOOJH

Question ID : 26433057255
Status : Answered
Chosen Option : 1

Q.17 Which of the following terms will replace the question mark (?) in the given series?
DGA, FKE, ?, JSO, LWU

- Ans
- ☒ 1. HOI
 - ☐ 2. HOT
 - ☐ 3. HTI
 - ☐ 4. HII

Question ID : 26433085323
Status : Answered
Chosen Option : 1

Q.18 A, B, C, D, E, F, G and H are sitting around a square table facing the centre of the table. Some of them are sitting at the corners, while some are sitting at the exact centre of the sides.

A sits at the centre of one of the sides. C sits third to the left of A. Only three people sit between D and C. Only three people sit between E and F. G sits to the immediate right of E. B sits third to the right of F.

Who sits to the immediate left of H?

- Ans
- ☐ 1. G
 - ☐ 2. B
 - ☐ 3. A
 - ☒ 4. C

Question ID : 26433058027

Status : Answered

Chosen Option : 4

Q.19 Which two signs and two numbers should be interchanged in the following equation to make it correct?

$$48 \times 35 + 55 \div 5 - 25 = 168$$

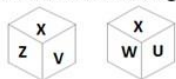
- Ans
- ☐ 1. 35 and 5; - and +
 - ☒ 2. 55 and 25; \times and +
 - ☐ 3. 48 and 55; - and \times
 - ☐ 4. 35 and 25; \times and \div

Question ID : 26433056461

Status : Answered

Chosen Option : 2

Q.20 Six letters U, V, W, X, Y and Z are written on different faces of a dice. Two positions of this dice are shown in the figure. Find the letter on the face opposite to V.



- Ans
- ☐ 1. Y
 - ☐ 2. W
 - ☒ 3. U
 - ☐ 4. Z

Question ID : 26433057865

Status : Answered

Chosen Option : 3

Q.21 Pointing to the boy, Shrishti said, "He is the son of the only daughter of the father of my paternal uncle." How is the boy related to Shrishti?

- Ans
- ☐ 1. Father
 - ☐ 2. Grandfather
 - ☐ 3. Maternal uncle
 - ☒ 4. Father's Sister's Son

Question ID : 26433057699

Status : Answered

Chosen Option : 4

Q.22 Read the given statements and conclusions carefully. Assuming that the information given in the statements is true, even if it appears to be at variance with commonly known facts, decide which of the given conclusions logically follow(s) from the statements.

Statements:

Some markets are frocks.

All frocks are combs.

No comb is a stove.

Conclusions:

I. All markets being stove is a possibility.

II. Some combs are markets.

- Ans
- ☒ 1. Only conclusion I follows
 - ☒ 2. Both conclusions I and II follow
 - ☒ 3. Neither conclusion I nor II follows
 - ☒ 4. Only conclusion II follows

Question ID : 26433079077

Status : Answered

Chosen Option : 4

Q.23 In a certain code language, 'ABSOLUTE' is written as 'ZCTNMTUD' and 'CREATION' is written as 'DSDZUHNO'. How will 'APPARENT' be written in that language?

- Ans
- ☒ 1. ZQRZSDOU
 - ☒ 2. ZQQASDOU
 - ☒ 3. ZQQZSFOU
 - ☒ 4. ZQQZSDOU

Question ID : 26433057288

Status : Answered

Chosen Option : 4

Q.24 Based on the position in the English alphabetical order, three of the following letter-clusters are alike in some manner and one is different. Select the odd letter-cluster.

- Ans
- ☒ 1. ORVA
 - ☒ 2. ADHM
 - ☒ 3. FIMS
 - ☒ 4. PSWB

Question ID : 26433095715

Status : Answered

Chosen Option : 3

Q.25 Select the figure from among the given options that can replace the question mark (?) in the following series.



Ans

✗ 1.



✗ 2.



✓ 3.



✗ 4.



Question ID : 26433080530

Status : Answered

Chosen Option : 3

Section : Part-D- English Language

Q.1 Select the most appropriate **ANTONYM** of the given word.

Eccentric

Ans ✓ 1. Customary

✗ 2. Zealous

✗ 3. Approachable

✗ 4. Abnormal

Question ID : 26433063636

Status : Answered

Chosen Option : 3

Q.2 Select the option that can be used as a one-word substitute for the given group of words.

Study of the various aspects of aging

Ans ✗ 1. Philology

✗ 2. Theology

✓ 3. Gerontology

✗ 4. Entomology

Question ID : 26433055982

Status : Answered

Chosen Option : 2

Q.3 Select the most appropriate option to fill in the blank.
Edgar Allan Poe's fiction spans multiple genres, including horror, fiction, adventure, science fiction and detective fiction, a genre he is _____ with inventing.

- Ans
- ☒ 1. debited
 - ☒ 2. regarded
 - ☒ 3. rewarded
 - ☒ 4. credited

Question ID : 26433060768
Status : Not Answered
Chosen Option : --

Q.4 Select the most appropriate option that can substitute the underlined segment in the given sentence.

Tuhin knew the art or practice of garden cultivation and management so well that he got a job in this area very easily.

- Ans
- ☒ 1. cultivation
 - ☒ 2. horticulture
 - ☒ 3. zoology
 - ☒ 4. planetology

Question ID : 26433072398
Status : Answered
Chosen Option : 2

Q.5 Select the most appropriate ANTONYM of the underlined word.

One should not worry too much about trivial matters in routine.

- Ans
- ☒ 1. Bashful
 - ☒ 2. Civil
 - ☒ 3. Important
 - ☒ 4. Naughty

Question ID : 26433073200
Status : Answered
Chosen Option : 3

Q.6 Select the idiom that can substitute the underlined group of words.

Shyam is a very small part of a big organisation.

- Ans
- ☒ 1. Zero in on
 - ☒ 2. Swan song
 - ☒ 3. A cog in the machine
 - ☒ 4. Bad egg

Question ID : 26433063654
Status : Answered
Chosen Option : 3

Q.7 Select the most appropriate ANTONYM of the underlined word.

Despite his sincere apology, his mother was obdurate and punished him.

- Ans ☒ 1. Corpulent
☒ 2. Compassionate
☒ 3. Crass
☒ 4. Calm

Question ID : 26433058335
Status : Answered
Chosen Option : 1

Q.8 Sentences of a paragraph are given below in jumbled order. Arrange the sentences in the correct order to form a meaningful and coherent paragraph.

- A. Questions like 'How many girls finish school?' and 'What percentage of the world's population is poor?'
B. In Factfulness, Professor Hans Rosling, along with two collaborators, asks simple questions about the world.
C. Factfulness sets out to explain why, showing that there are several instincts humans have that distort our perspective.
D. It turns out the majority of us get the answers to these questions completely wrong.

- Ans ☒ 1. ADBC
☒ 2. BADC
☒ 3. BDAC
☒ 4. BDCA

Question ID : 26433060644
Status : Answered
Chosen Option : 2

Q.9 Select the most appropriate synonym of the given word.
Impetuous

- Ans ☒ 1. Impulsive
☒ 2. Composed
☒ 3. Spontaneous
☒ 4. Content

Question ID : 26433059134
Status : Answered
Chosen Option : 1

Q.10 Select the most appropriate synonym of the highlighted word in the following sentence.

His statement was equivocal and so, the board of directors could not come to a decision about the project.

- Ans ☒ 1. Ambiguous
☒ 2. Disrespectful
☒ 3. Determined
☒ 4. Revolutionary

Question ID : 26433065217
Status : Answered
Chosen Option : 1

Q.11 Select the most appropriate option to fill in the blank.

When _____ manuscripts to book publishing houses, extreme caution should be taken.

- Ans
- ☒ 1. evaluating
 - ☒ 2. proof reading
 - ☒ 3. submitting
 - ☒ 4. editing

Question ID : 26433070603
Status : Answered
Chosen Option : 3

Q.12 Select the most appropriate option that can substitute the underlined segment in the given sentence.

The sudden demise of Pushpa's parents has made her a person who is indifferent to the pains and pleasures of life.

- Ans
- ☒ 1. secluded
 - ☒ 2. stoic
 - ☒ 3. passive
 - ☒ 4. pessimistic

Question ID : 26433072396
Status : Answered
Chosen Option : 2

Q.13 Select the most appropriate synonym of the underlined word in the given sentence.
I need to know the timetable of your upcoming foreign trip.

- Ans
- ☒ 1. data
 - ☒ 2. catalogue
 - ☒ 3. record
 - ☒ 4. schedule

Question ID : 26433058539
Status : Answered
Chosen Option : 4

Q.14 The following sentence has been split into four segments. Identify the segment that contains a grammatical error.

After a long discussion / over a period of ten hours, / the management / finally agreed to the agitating workers' demands.

- Ans
- ☒ 1. finally agreed to the agitating workers' demands
 - ☒ 2. over a period of ten hours
 - ☒ 3. After a long discussion
 - ☒ 4. the management

Question ID : 26433055590
Status : Answered
Chosen Option : 1

Q.15 Select the INCORRECTLY spelt word.

- Ans ☒ 1. Audience
☒ 2. Delicate
☒ 3. Assembly
☒ 4. Assert

Question ID : 26433055472
Status : Answered
Chosen Option : 3

Q.16 Select the option that can be used as a one-word substitute for the given group of words.

Having or showing the ability to speak fluently and coherently

- Ans ☒ 1. Hesitant
☒ 2. Articulate
☒ 3. Inarticulate
☒ 4. Incoherent

Question ID : 26433060738
Status : Answered
Chosen Option : 2

Q.17 Select the INCORRECTLY spelt word in the following sentence.

A newspaper assuredly makes a man familier with diversified news on different segments of the society from every corner of the world.

- Ans ☒ 1. assuredly
☒ 2. familier
☒ 3. diversified
☒ 4. segments

Question ID : 26433058603
Status : Answered
Chosen Option : 2

Q.18 The following sentence has been divided into parts. One of them may contain an error.

Select the part that contains the error from the given options. If you don't find any error, mark 'No error' as your answer.

Tom eventually found success, / although he / failed intermittent.

- Ans ☒ 1. although he
☒ 2. No error
☒ 3. Tom eventually found success
☒ 4. failed intermittent

Question ID : 26433061467
Status : Answered
Chosen Option : 4

Q.19 Select the most appropriate option that can substitute the underlined words.
Lack of order in a country due to the absence of a centralised power and authority

- Ans ☒ 1. Disorder
☒ 2. Indiscipline
☒ 3. Anarchy
☒ 4. Apathy

Question ID : 26433059726
Status : Answered
Chosen Option : 3

Q.20 Select the most appropriate meaning of the given idiom.

ABC of something

- Ans ☒ 1. Human instinct
☒ 2. Simply natural
☒ 3. Chief support
☒ 4. Essential fact

Question ID : 26433072424
Status : Answered
Chosen Option : 4

Comprehension:

In the following passage, some words have been deleted. Read the passage carefully and select the most appropriate option to fill in each blank.

Many people are unfamiliar with bats made (1)_____ traditional Kashmiri willow mills. Interestingly, the willow utilised in the (2)_____ of professional cricket bats comes from two significant locations in the world: England and Kashmir. Willow from England is of the highest quality, (3)_____ willow bats from Kashmir are less expensive than those from England and are heavier due to the raw material's weight. Many experts believe that Kashmiri willow bats lack the punch of their English counterparts when playing the shot, making them (4)_____ for beginners. However, because they are inexpensive, they make a good (5)_____.

SubQuestion No : 21

Q.21 Select the most appropriate answer to fill in blank number 1.

- Ans ☒ 1. of
☒ 2. through
☒ 3. in
☒ 4. from

Question ID : 26433063175
Status : Answered
Chosen Option : 1

Comprehension:

In the following passage, some words have been deleted. Read the passage carefully and select the most appropriate option to fill in each blank.

Many people are unfamiliar with bats made (1)_____ traditional Kashmiri willow mills. Interestingly, the willow utilised in the (2)_____ of professional cricket bats comes from two significant locations in the world: England and Kashmir. Willow from England is of the highest quality, (3)_____ willow bats from Kashmir are less expensive than those from England and are heavier due to the raw material's weight. Many experts believe that Kashmiri willow bats lack the punch of their English counterparts when playing the shot, making them (4)_____ for beginners. However, because they are inexpensive, they make a good (5)_____.

SubQuestion No : 22

Q.22 Select the most appropriate answer to fill in blank number 2.

- Ans  1. build
-  2. manufacture
-  3. construct
-  4. process

Question ID : 26433063176
Status : Answered
Chosen Option : 2





Comprehension:

In the following passage, some words have been deleted. Read the passage carefully and select the most appropriate option to fill in each blank.

Many people are unfamiliar with bats made (1)_____ traditional Kashmiri willow mills. Interestingly, the willow utilised in the (2)_____ of professional cricket bats comes from two significant locations in the world: England and Kashmir. Willow from England is of the highest quality, (3)_____ willow bats from Kashmir are less expensive than those from England and are heavier due to the raw material's weight. Many experts believe that Kashmiri willow bats lack the punch of their English counterparts when playing the shot, making them (4)_____ for beginners. However, because they are inexpensive, they make a good (5)_____.

SubQuestion No : 23

Q.23 Select the most appropriate answer to fill in blank number 3.

- Ans  1. so
-  2. subsequently
-  3. hence
-  4. however

Question ID : 26433063177
Status : Answered
Chosen Option : 1





Comprehension:

In the following passage, some words have been deleted. Read the passage carefully and select the most appropriate option to fill in each blank.

Many people are unfamiliar with bats made (1)_____ traditional Kashmiri willow mills. Interestingly, the willow utilised in the (2)_____ of professional cricket bats comes from two significant locations in the world: England and Kashmir. Willow from England is of the highest quality, (3)_____ willow bats from Kashmir are less expensive than those from England and are heavier due to the raw material's weight. Many experts believe that Kashmiri willow bats lack the punch of their English counterparts when playing the shot, making them (4)_____ for beginners. However, because they are inexpensive, they make a good (5)_____.

SubQuestion No : 24

Q.24 Select the most appropriate answer to fill in blank number 4.

- Ans  1. careful
-  2. ideal
-  3. ambitious
-  4. calm

Question ID : 26433063178

Status : Answered

Chosen Option : 2





Comprehension:

In the following passage, some words have been deleted. Read the passage carefully and select the most appropriate option to fill in each blank.

Many people are unfamiliar with bats made (1)_____ traditional Kashmiri willow mills. Interestingly, the willow utilised in the (2)_____ of professional cricket bats comes from two significant locations in the world: England and Kashmir. Willow from England is of the highest quality, (3)_____ willow bats from Kashmir are less expensive than those from England and are heavier due to the raw material's weight. Many experts believe that Kashmiri willow bats lack the punch of their English counterparts when playing the shot, making them (4)_____ for beginners. However, because they are inexpensive, they make a good (5)_____.

SubQuestion No : 25

Q.25 Select the most appropriate answer to fill in blank number 5.

- Ans  1. substitute
-  2. game
-  3. equipment
-  4. strategy





Question ID : 26433063179

Status : Answered

Chosen Option : 1

Section : Part-E- Computer Fundamentals

Q.1 In MS-Word 2010, the Page Down key is used to:

- Ans  1. move the cursor in the last page when the document contains multiple pages.
-  2. move the cursor one paragraph down.
-  3. move the cursor one line down.
-  4. move the cursor one screen down.

Question ID : 26433095514

Status : Answered

Chosen Option : 3

Q.2 Unsolicited and unwanted junk email sent out in bulk to an indiscriminate recipient list is stored in _____ folder.

- Ans
- ☒ 1. inbox
 - ☒ 2. draft
 - ☒ 3. spam
 - ☒ 4. trash

Question ID : 26433095435
Status : Answered
Chosen Option : 3

Q.3 Which of the following is a function in MS-Excel 2010?

- Ans
- ☒ 1. ADD
 - ☒ 2. RANGE
 - ☒ 3. FORMULA
 - ☒ 4. SUM

Question ID : 26433095340
Status : Answered
Chosen Option : 2

Q.4 Which one of the following is a wrong declaration in MS-Excel 2010?

- Ans
- ☒ 1. =TIMEVALUE("2:24 AM")
 - ☒ 2. =TIMEVALUE("Wednesday, September 7,2022 6:35 AM")
 - ☒ 3. =TIMEVALUE("9/7/2022 6:35 AM")
 - ☒ 4. =TIMEVALUE("22-Aug-2011 6:35 AM")

Question ID : 26433095520
Status : Answered
Chosen Option : 1

Q.5 Consider the following statements about HTML

P: HTML was designed to store and transport data

Q: All HTML documents must start with a document type declaration: <!DOCTYPE html>

R: HTML is the standard markup language for Web pages.

Which of these statement(s) is/are correct?

- Ans
- ☒ 1. Only Q
 - ☒ 2. All P, Q, R
 - ☒ 3. Only Q and R
 - ☒ 4. Only P and Q

Question ID : 26433095497
Status : Answered
Chosen Option : 2

Q.6 Instead of retyping the same text in MS-Word 2010, we can use _____ to reduce time and effort.

- Ans
- ☒ 1. copy + undo
 - ☒ 2. paste + undo
 - ☒ 3. copy + paste
 - ☒ 4. cut + copy

Question ID : 26433095393
Status : Answered
Chosen Option : 3

Q.7 In MS-Word 2010, creating a large capital letter used as a decorative element at the beginning of a paragraph or section refers to _____.

- Ans
- ☒ 1. Header
 - ☒ 2. Smart Art
 - ☒ 3. Drop Cap
 - ☒ 4. Watermark

Question ID : 26433095293
Status : Answered
Chosen Option : 1

Q.8 _____ command in Web browser that helps to move to the previous page from the current page.

- Ans
- ☒ 1. Back
 - ☒ 2. Create
 - ☒ 3. Save
 - ☒ 4. Forward

Question ID : 26433095416
Status : Answered
Chosen Option : 1

Q.9 When contents of a cell in a worksheet of MS-Excel 2010 are being edited, the cell number is displayed in _____.

- Ans
- ☒ 1. status bar
 - ☒ 2. ribbon
 - ☒ 3. formula bar
 - ☒ 4. name box

Question ID : 26433095539
Status : Answered
Chosen Option : 1

Q.10 What is the address of the cell at the intersection of fifth row and fifth column in MS-Excel 2010?

- Ans
- ☒ 1. \$E\$5
 - ☒ 2. \$E\$5
 - ☒ 3. 5E
 - ☒ 4. E5

Question ID : 26433095308
Status : Answered
Chosen Option : 4