

Head Constable Ministerial in Delhi Police Examination 2022

Roll Number	
Candidate Name	
Venue Name	
Exam Date	14/10/2022
Exam Time	5:00 PM - 6:30 PM
Subject	Head Constable Ministerial in Delhi Police Examination 2022

Section : **Part-A-General Awareness**

Q.1 In which of the following sessions of the Indian National Congress, was it split into two factions namely the Extremists and Moderates?

- Ans  1. Lucknow Session, 1916
-  2. Calcutta Session, 1896
-  3. Nagpur Session, 1891
-  4. Surat Session, 1907

Question ID : **26433065542**
Status : **Answered**
Chosen Option : **4**

Q.2 Who among the following was the founder of Bahmani sultanate?

- Ans  1. Mughal Shah
-  2. Dawood Shah
-  3. Feroze Shah
-  4. Hasan Gangu

Question ID : **26433080984**
Status : **Not Answered**
Chosen Option : **--**

Q.3 In which year was the MUDRA Yojana for providing loan up to ₹10 lakh started?

- Ans  1. 2017
-  2. 2015
-  3. 2014
-  4. 2016

Question ID : **26433059096**
Status : **Not Attempted and Marked For Review**
Chosen Option : **--**

Q.4 How many schemes have been proposed to be launched by the Government of India under 'Nari Shakti' in order to provide integrated development of women and children, as per the Union Budget 2022-23?

- Ans ☒ 1. Three
- ☒ 2. Five
- ☒ 3. Four
- ☒ 4. Two

Question ID : 26433054823
Status : Not Answered
Chosen Option : --

Q.5 The Kisan Drone Yatra, an initiative by Garuda Aerospace Private Ltd., was inaugurated by _____ in February 2022.

- Ans ☒ 1. Narendra Modi
- ☒ 2. Bhupendrabhai Patel
- ☒ 3. Bhagwant Mann
- ☒ 4. Jyotiraditya Scindia

Question ID : 26433061842
Status : Not Attempted and Marked For Review
Chosen Option : --

Q.6 Which of the following Indian monuments of the medieval period was declared as a UNESCO World Heritage site in 1993?

- Ans ☒ 1. Humayun's Tomb
- ☒ 2. Taj Mahal
- ☒ 3. Buland Darwaza
- ☒ 4. Jahangir's Tomb

Question ID : 26433064356
Status : Answered
Chosen Option : 2

Q.7 The highest poverty ratio of 64.75% is in the _____ district of Bihar.

- Ans ☒ 1. Kishanganj
- ☒ 2. Madhepura
- ☒ 3. Supaul
- ☒ 4. Araria

Question ID : 26433066694
Status : Not Answered
Chosen Option : --

Q.8 Which day was declared as the 'Direct Action Day' by the Muslim League as a means to achieve its demand for Pakistan?

- Ans ☒ 1. 16 August 1946
- ☐ 2. 15 August 1945
- ☐ 3. 14 August 1946
- ☐ 4. 16 August 1945

Question ID : 26433066650
Status : Answered
Chosen Option : 3

Q.9 Khajuraho dance festival is famously celebrated in which state of India?

- Ans ☐ 1. Uttarakhand
- ☒ 2. Madhya Pradesh
- ☐ 3. Rajasthan
- ☐ 4. Gujarat

Question ID : 26433066536
Status : Answered
Chosen Option : 2

Q.10 Indigenously developed Laser-Guided Anti-Tank Guided Missiles (ATGM) were successfully test-fired by Defence Research and Development Organisation (DRDO) and Indian Army in which of the following state in Aug 2022?

- Ans ☐ 1. Kerela
- ☐ 2. Tamil Nadu
- ☒ 3. Maharashtra
- ☐ 4. Karnataka

Question ID : 26433095273
Status : Not Attempted and Marked For Review
Chosen Option : --

Q.11 Approximately, what percentage of the world's mangrove forests does India possess?

- Ans ☒ 1. 7%
- ☐ 2. 20%
- ☐ 3. Not more than 1%
- ☐ 4. 10%

Question ID : 26433055315
Status : Not Answered
Chosen Option : --

Q.12 Which state in India has the lowest male literacy rate as per the 2011 data?

- Ans
- ☒ 1. Andhra Pradesh
 - ☒ 2. Jharkhand
 - ☒ 3. Meghalaya
 - ☒ 4. Bihar

Question ID : 26433067217
Status : Answered
Chosen Option : 4

Q.13 ____ is the headquarters of the North Eastern Railways of India.

- Ans
- ☒ 1. Mumbai CST
 - ☒ 2. Chennai
 - ☒ 3. Allahabad
 - ☒ 4. Gorakhpur

Question ID : 26433066591
Status : Not Answered
Chosen Option : --

Q.14 ____ was restructured into the Swachh Bharat Mission (Gramin) and was launched on 2nd October 2014 to ensure cleanliness in India and make it Open Defecation Free (ODF) in Five Years.

- Ans
- ☒ 1. The Total Sanitation Campaign (TSC)
 - ☒ 2. The Central Rural Sanitation Programme
 - ☒ 3. The Nirmal Bharat Abhiyan
 - ☒ 4. Ek kadam Swachhata ki Aur

Question ID : 26433095268
Status : Not Attempted and Marked For Review
Chosen Option : --

Q.15 Which of the following names is NOT associated with the green revolution?

- Ans
- ☒ 1. PC Mahalanobis
 - ☒ 2. Norman Borlaug
 - ☒ 3. MS Swaminathan
 - ☒ 4. William Gaud

Question ID : 26433059112
Status : Not Answered
Chosen Option : --

Q.16 Which of the following is NOT an example of factor payments?

- Ans
- ☒ 1. Wages
 - ☐ 2. Investment
 - ☒ 3. Rent
 - ☒ 4. Interest

Question ID : 26433059258
Status : Answered
Chosen Option : 3

Q.17 In the 15th century AD, the Sattriya dance form was introduced as a powerful medium for the propagation of Vaishnavism by _____.

- Ans
- ☐ 1. Sankaradeva
 - ☒ 2. Kalamandalam
 - ☒ 3. Sivanandam
 - ☒ 4. Rama Varma

Question ID : 26433072622
Status : Not Answered
Chosen Option : --

Q.18 In 2021, the Supreme Court in Kirti vs _____ recognised the gendered nature of housework, and said that it has economic value.

- Ans
- ☒ 1. New India Assurance Company
 - ☐ 2. Oriental Insurance
 - ☒ 3. Life Insurance Corporation of India
 - ☒ 4. United Insurance Company

Question ID : 26433061802
Status : Not Answered
Chosen Option : --

Q.19 Which of the following players was awarded the Param Vishisht Seva Medal on the eve of Republic Day by the honourable President of India, Shri Ram Nath Kovind?

- Ans
- ☐ 1. Neeraj Chopra
 - ☒ 2. Lovelina Borgohain
 - ☒ 3. Mirabai Chanu
 - ☒ 4. Ravi Dahiya

Question ID : 26433061864
Status : Answered
Chosen Option : 1

Q.20 Under which Amendment Act to the Constitution was the reservation for Economically Weaker Sections in educational institutions added?

- Ans
- ☐ 1. 102nd Amendment
 - ☐ 2. 105th Amendment
 - ☐ 3. 101st Amendment
 - ☒ 4. 103rd Amendment

Question ID : 26433069857
Status : Answered
Chosen Option : 4

Section : Part-B-Quantitative Aptitude

Q.1 Find the average of all prime numbers between 10 and 20.

- Ans
- ☐ 1. 17
 - ☐ 2. 13
 - ☐ 3. 20
 - ☒ 4. 15

Question ID : 26433063999
Status : Answered
Chosen Option : 4

Q.2 A and B undertake a contract of a task for ₹7,500. A can do complete the task all alone in 50 days and B can complete the same task all by himself in 60 days. However, to finish the work early, they take C's help and complete the entire work in 20 days. What is the difference (in ₹) between B's and C's share for their contribution in completing the task?

- Ans
- ☐ 1. 250
 - ☒ 2. 500
 - ☐ 3. 2,000
 - ☐ 4. 1,500

Question ID : 26433061913
Status : Answered
Chosen Option : 2

Q.3 The radii of the internal and external surfaces of a metallic spherical shell are 3cm and 5cm. If this is melted and recast into a solid right circular cylinder of height, $10\frac{2}{3}$ cm, then the diameter of the base of the cylinder is _____.

- Ans
- ☒ 1. 7 cm
 - ☐ 2. $\frac{7}{2}$ cm
 - ☐ 3. $\frac{2}{7}$ cm
 - ☐ 4. $\frac{1}{7}$ cm

Question ID : 26433061226
Status : Answered
Chosen Option : 1

Q.4 The sum of two numbers is 15 and the difference between their squares is also 15. Which of the following is the larger number?

- Ans ☒ 1. 9
☒ 2. 7
☒ 3. 8
☒ 4. 3

Question ID : 26433058830
Status : Answered
Chosen Option : 3

Q.5 The price of oil has increased by 35%. By what percentage should the increased price of oil be reduced so that the price of oil remains the same?

- Ans ☒ 1. 33.33%
☒ 2. 25.93%
☒ 3. 27.92%
☒ 4. 35%

Question ID : 26433058398
Status : Answered
Chosen Option : 2

Q.6 Two trains 250 m and 300 m long are running on parallel rails in the same direction at speeds of 80 km/h and 65 km/h, respectively. Time taken by the faster train to cross the slower train will be:

- Ans ☒ 1. 132 s
☒ 2. 232 s
☒ 3. 322 s
☒ 4. 130 s

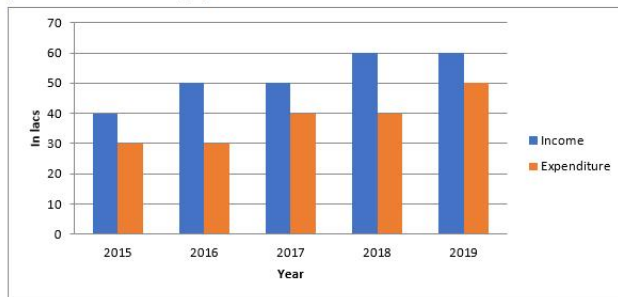
Question ID : 26433061274
Status : Answered
Chosen Option : 1

Q.7 A cylindrical pillar has a curved surface area of 264 m^2 and a volume of 924 m^3 . What is the ratio of the diameter and height?

- Ans ☒ 1. 7 : 3
☒ 2. 3 : 7
☒ 3. 3 : 2
☒ 4. 2 : 3

Question ID : 26433057148
Status : Answered
Chosen Option : 1

Q.8 The following graph shows the income and expenditure of a company. Study the graph carefully and answer the question based on the graph.



The income in 2016 was equal to the expenditure in which year?

- Ans**
- ☒ 1. 2017
 - ☒ 2. 2015
 - ☒ 3. 2019
 - ☒ 4. 2018

Question ID : 26433074216
Status : Answered
Chosen Option : 3

Q.9 Express $0.4\bar{1}$ as a vulgar fraction.

- Ans**
- ☒ 1. $\frac{41}{90}$
 - ☒ 2. $\frac{47}{90}$
 - ☒ 3. $\frac{31}{90}$
 - ☒ 4. $\frac{37}{90}$

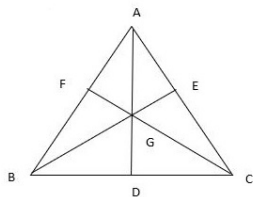
Question ID : 26433080092
Status : Answered
Chosen Option : 4

Q.10 $(\sin\theta + \operatorname{cosec}\theta)^2 + (\cos\theta + \sec\theta)^2 - 1 = \underline{\hspace{2cm}}$.

- Ans**
- ☒ 1. $6 + \tan^2\theta + \cot^2\theta$
 - ☒ 2. $\sin^2\theta - \cos^2\theta$
 - ☒ 3. $\tan^2\theta - \cot^2\theta$
 - ☒ 4. $6 - \sin^2\theta + \cos^2\theta$

Question ID : 26433058173
Status : Answered
Chosen Option : 1

Q.11 In the following figure, $\triangle ABC$ is an equilateral triangle of side 12 cm. If AD, BE and CF are medians of $\triangle ABC$, then AD + BE + CF = ?



Ans ☒ 1. $18\sqrt{3}$ cm

☒ 2. $12\sqrt{3}$ cm

☒ 3. $25\sqrt{3}$ cm

☒ 4. $16\sqrt{3}$ cm

Question ID : 26433074480

Status : Answered

Chosen Option : 1

Q.12 Rama spent $\frac{5}{8}$ of her weekly salary on rent and $\frac{1}{3}$ of the remaining on food, leaving ₹40/- available for other expenses. Rama's weekly salary (in ₹) is:

Ans ☒ 1. 160

☒ 2. 140

☒ 3. 150

☒ 4. 170

Question ID : 26433058274

Status : Answered

Chosen Option : 1

Q.13 The LCM of $\frac{1}{6}, \frac{7}{27}, \frac{5}{9}, \frac{4}{15}$ and $\frac{8}{3}$ is:

Ans ☒ 1. $\frac{280}{3}$

☒ 2. $\frac{3}{280}$

☒ 3. $\frac{15}{280}$

☒ 4. $\frac{280}{15}$

Question ID : 26433063357

Status : Answered

Chosen Option : 1

Q.14 The value of a machine increased by 10% for two years and then depreciated by 8% in the third year. If the value of the machine three years ago was ₹2,50,000, then what is the value of the machine now?

- Ans ☒ 1. ₹2,78,300
- ☐ 2. ₹2,78,780
- ☐ 3. ₹2,85,000
- ☐ 4. ₹2,77,300

Question ID : 26433058797
Status : Answered
Chosen Option : 1

Q.15 What is the difference between the largest and the smallest two digit prime numbers?

- Ans ☒ 1. 86
- ☐ 2. 81
- ☐ 3. 91
- ☐ 4. 84

Question ID : 26433079840
Status : Answered
Chosen Option : 1

Q.16 A takes twice as long as B and C together take to complete a work, and B takes twice as long as A and C together. However, A, B and C together can complete the work in 30 days. How long would C alone take to complete the work?

- Ans ☐ 1. 50 days
- ☐ 2. 72 days
- ☐ 3. 63 days
- ☒ 4. 90 days

Question ID : 26433063899
Status : Not Answered
Chosen Option : --

Q.17 By selling an ornament for Rs.720, Chaitra loses 10%. At what price should she sell it in order to gain 15%?

- Ans ☐ 1. Rs.720.00
- ☐ 2. Rs.800.00
- ☒ 3. Rs.920.00
- ☐ 4. Rs.745.20

Question ID : 26433058134
Status : Answered
Chosen Option : 3

Q.18

If $\left(a + \frac{1}{a}\right)^2 = 3$, find the value of $a^{218} + a^{212} + a^{24} + a^{18}$

- Ans
- ☐ 1. 4
 - ☒ 2. 0
 - ☐ 3. $\sqrt{3}$
 - ☐ 4. $3\sqrt{3}$

Question ID : 26433061781
Status : Not Answered
Chosen Option : --

Q.19 The simple interest on Rs.7,300 at 15% p.a. from 28 April to 4 November, approximately is:

- Ans
- ☐ 1. Rs.750.00
 - ☒ 2. Rs.570.00
 - ☐ 3. Rs.1,095.00
 - ☐ 4. Rs.547.50

Question ID : 26433058144
Status : Answered
Chosen Option : 2

Q.20 A shopkeeper sold calculators at Rs.1,081 each after 6% discount on the labelled price. Had he not given the discount, he would have earned a profit of 15% on the cost price. What was the cost price of each calculator?

- Ans
- ☐ 1. Rs.985
 - ☐ 2. Rs.975
 - ☐ 3. Rs.945
 - ☒ 4. Rs.1,000

Question ID : 26433066313
Status : Not Answered
Chosen Option : --

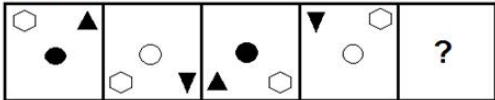
Section : Part-C-General Intelligence

Q.1 In a code language, 'RICE' is coded as TFEB, and 'MEAT' is coded as OBCQ. How will 'FOOD' be coded in the same language?

- Ans
- ☒ 1. HLQA
 - ☐ 2. IMQB
 - ☐ 3. IMRB
 - ☐ 4. HLRA

Question ID : 26433057764
Status : Answered
Chosen Option : 1

Q.2 Select the figure from among the given options that can replace the question mark (?) in the following series.



Ans

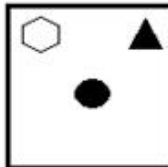
✗ 1.



✗ 2.



✓ 3.



✗ 4.



Question ID : 26433055949

Status : Answered

Chosen Option : 3

Q.3 A, B, C, D, E, F and G are sitting around a square table, facing towards the centre of the table. Some of them are sitting at the corners while some are sitting at the exact centre of the sides. One seat is left vacant. C is sitting at a corner, third to the right of F. There are exactly two people sitting between F and E. D is third to the right of C. B is an immediate neighbour of G and C. If A is sitting at a corner, where is the vacant seat?

Ans

✗ 1. Third to the right of B

✗ 2. Third to the right of A

✗ 3. Second to the right of D

✓ 4. Second to the left of D

Question ID : 26433068820

Status : Answered

Chosen Option : 2

Q.4 Three of the following letter-clusters are alike in some manner and hence form a group.
Which letter-cluster does not belong to that group?

- Ans ☒ 1. DWGZ
☐ 2. CXFB
☐ 3. FUIY
☐ 4. AZDD

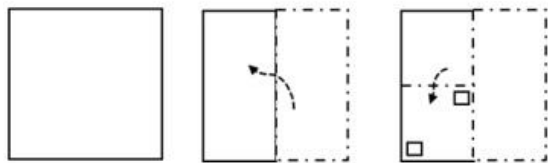
Question ID : 26433056163
Status : Marked For Review
Chosen Option : 4

Q.5 Select the option that is related to the fifth term in the same way as the second term is related to the first term and the fourth term is related to the third term.
MOAT : QCLO :: RUBY : VDRT :: DESK : ?

- Ans ☒ 1. HUBF
☐ 2. GVBF
☐ 3. HUCE
☐ 4. GUCF

Question ID : 26433058013
Status : Not Answered
Chosen Option : --

Q.6 A paper is folded and cut as shown below. How will it appear when unfolded?



Ans

- ✖ 1.
- ✔ 2.
- ✖ 3.
- ✖ 4.

Question ID : 26433056119
Status : Answered
Chosen Option : 2

Q.7 Which of the following numbers will replace the question mark (?) in the given series?
47, 50, 54, 57, 66, 69, ?

- ✖ 1.

89
- ✖ 2.

88
- ✖ 3.

82
- ✔ 4.

85

Question ID : 26433057551
Status : Answered
Chosen Option : 2

Q.8 Select the option that is related to the fourth number in the same way as the first number is related to the second number and the fifth number is related to the sixth number.
56 : 9 :: ? : 16 :: 704 : 27

- Ans ☒ 1. 231
☒ 2. 256
☒ 3. 128
☒ 4. 250

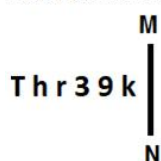
Question ID : 26433056480
Status : Not Answered
Chosen Option : --

Q.9 Select the option that is related to the fourth number in the same way as the first number is related to the second number and the fifth number is related to the sixth number.
663 : 28 :: ? : 15 :: 1104 : 35

- Ans ☒ 1. 104
☒ 2. 118
☒ 3. 125
☒ 4. 216

Question ID : 26433056489
Status : Not Answered
Chosen Option : --

Q.10 Select the correct mirror image of the given figure when the mirror is placed at MN as shown below.



- Ans ☒ 1. k e 3 1 h T
☒ 2. k e 3 1 h T
☒ 3. k 9 3 1 h T
☒ 4. k e 3 1 h T





Question ID : 26433056988
Status : Answered
Chosen Option : 2

Q.11 Which two signs should be interchanged to make the given equation correct?
 $50 - 60 \div 5 \times 4 + 16 = 82$

- Ans ☒ 1. \div and \times
☒ 2. $-$ and \div
☒ 3. $+$ and $-$
☒ 4. $+$ and \times

Question ID : 26433056856
Status : Answered
Chosen Option : 3





Q.12 In this question, three statements are given, followed by two conclusions numbered I and II.
Assuming the statements to be true, even if they seem to be at variance with commonly known facts, decide which of the conclusion(s) logically follow(s) from the statements.
Statements:
All oranges are fruits.
Some fruits are vegetables.
All vegetables are apples.
Conclusions:
I. All oranges are vegetables.
II. Some apples are fruits.

- Ans  1. Neither conclusion I nor II follows.
 2. Only conclusion I follows.
 3. Only conclusion II follows.
 4. Both conclusions I and II follow.

Question ID : 26433057914
Status : Answered
Chosen Option : 3





Q.13 'P @ Q' means 'P is the sister of Q'
'P & Q' means 'P is the mother of Q'
'P # Q' means 'P is the husband of Q'

If 'A @ B # C & D @ E', then how is A related to E?

- Ans  1. Brother's son
 2. Mother's sister
 3. Father's sister
 4. Brother's daughter

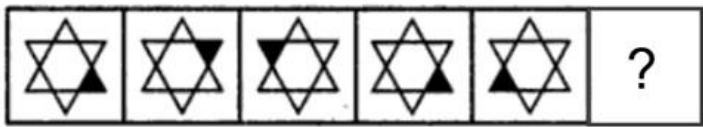
Question ID : 26433056801
Status : Answered
Chosen Option : 3

Q.14 Which of the following numbers will replace the question mark (?) in the given series?
457, 480, 509, ?, 577

- Ans  1. 545
 2. 539
 3. 540
 4. 512

Question ID : 26433056471
Status : Answered
Chosen Option : 3

Q.15 Select the figure from among the given options that can replace the question mark (?) in the following series.



Ans

- ✖ 1.
- ✖ 2.
- ✖ 3.
- ✔ 4.

Question ID : 26433080523
Status : Answered
Chosen Option : 4

Q.16 Which of the following options represents the correct order of the given words as they would appear in the English dictionary?

- 1. Middling
- 2. Midget
- 3. Midday
- 4. Midst
- 5. Midge

- Ans

✖ 1. 5,3,1,2,4
- ✖ 2. 1,3,5,2,4
- ✔ 3. 3,1,5,2,4
- ✖ 4. 3,1,2,5,4

Question ID : 26433068767
Status : Answered
Chosen Option : 3

Q.17 In a code language, 'TURTLE' is coded as SVUFMU and 'SPIDER' is coded as JQTSFE. How will 'PIGEON' be coded in the same language?

- Ans
- 1. QJQPOF
 - 2. HKROPF
 - 3. HTQPPF
 - 4. HJQOPF

Question ID : 26433078902

Status : Not Answered

Chosen Option : --

Q.18 A, B, C, D, E, F, G and H are sitting around a square table facing the centre of the table. Some of them are sitting at the corners, while some are sitting at the exact centre of the sides. Only three people sit between C and D. Both C and D sit at corners of the table. A sits second to the right of D. B sits to the immediate right of F. B is not an immediate neighbour of D. G is not an immediate neighbour of A. Only one person sits between G and H. Who sits second to the right of E?

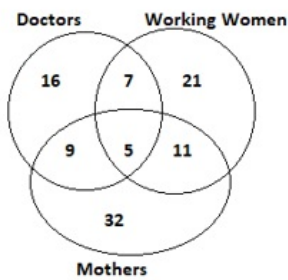
- Ans
- 1. F
 - 2. C
 - 3. H
 - 4. D

Question ID : 26433058028

Status : Not Answered

Chosen Option : --

Q.19 Study the given diagram carefully and answer the question. The numbers in different sections indicate the number of persons.



How many such mothers are there who are working women but NOT doctors?

- Ans
- 1. 11
 - 2. 14
 - 3. 5
 - 4. 16

Question ID : 26433070407

Status : Answered

Chosen Option : 1

Q.20 Which letter cluster will replace the question mark (?) to complete the given series?
AFKP, BGLQ, CHMR,?,EJOT

- Ans
- ☒ 1. DEGF
 - ☒ 2. FGHI
 - ☒ 3. DINS
 - ☒ 4. CDEF

Question ID : 26433068004
Status : Answered
Chosen Option : 3

Q.21 Select the option that represents the letters that, when sequentially placed from left to right in the blanks below, will complete the letter series.
P _ G _ _ N P _ G _ O N _ I _ _ O N P I _ _ _ N

- Ans
- ☒ 1. IEIOIEPGEGEO
 - ☒ 2. PGOIEOGEGEI
 - ☒ 3. IEOPIEGEGEO
 - ☒ 4. PGONEIEGEOI

Question ID : 26433056391
Status : Answered
Chosen Option : 1

Q.22 Which two groups of numbers should be interchanged to balance the given equation?
 $1425 \div 5 + 678 \times 15 - 267 \times 3 = 51 \times 4 + 569 \times 8$

- Ans
- ☒ 1. (5 and 15), and (4 and 569)
 - ☒ 2. (1425 and 267), and (5 and 3)
 - ☒ 3. (5 and 15), and (51 and 569)
 - ☒ 4. (678 and 267), and (4 and 8)

Question ID : 26433056526
Status : Not Answered
Chosen Option : --

Q.23 Select the option that is related to the fifth letter cluster in the same way as the second letter cluster is related to the first letter cluster and the fourth letter cluster is related to the third letter cluster.
FLE : ZFY :: LXD : FRX :: SLA : ?

- Ans
- ☒ 1. OEF
 - ☒ 2. ZHW
 - ☒ 3. MFU
 - ☒ 4. AKE

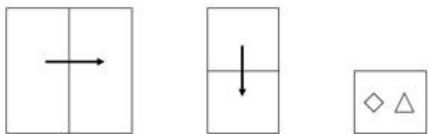
Question ID : 26433074684
Status : Answered
Chosen Option : 3

Q.24 Pointing to a photo of an old man, Kalyani said, "He is the husband of the sister of my mother." How is the old man related to Kalyani?

- Ans
- ✓ 1. Uncle
 - ✗ 2. Son
 - ✗ 3. Father
 - ✗ 4. Brother

Question ID : 26433067258
Status : Answered
Chosen Option : 1

Q.25 A paper is folded and cut as shown below. How will it appear when unfolded?



- Ans
- ✗ 1.
 - ✓ 2.
 - ✗ 3.
 - ✗ 4.

Question ID : 26433056544
Status : Answered
Chosen Option : 2

Q.1 Select the most appropriate option that can substitute the underlined segment in the given sentence.

I helped Siben monetarily even though I knew that he is unable to pay his debts.

- Ans
- ☒ 1. insolvent
 - ☐ 2. incapable
 - ☐ 3. insolent
 - ☐ 4. innate

Question ID : 26433072395
Status : Answered
Chosen Option : 1

Q.2 Select the option that can be used as a one-word substitute for the underlined part of the given sentence.

We are organising a ceremony to formally congratulate our colleague on his grand success.

- Ans
- ☐ 1. facilitating
 - ☒ 2. felicitating
 - ☐ 3. solemnising
 - ☐ 4. celebrating

Question ID : 26433072482
Status : Answered
Chosen Option : 2

Q.3 Select the INCORRECTLY spelt word.

- Ans
- ☒ 1. Orignal
 - ☐ 2. Plausible
 - ☐ 3. Opulent
 - ☐ 4. Pester

Question ID : 26433066139
Status : Answered
Chosen Option : 1

Q.4 Sentences of a paragraph are given below in jumbled order. Arrange the sentences in the correct order to form a meaningful and coherent paragraph.

- A.The English language can be divided into three main periods – Old English, Middle English and Modern English.
B.As a result of this remarkable flexibility, English is today's international language.
C.Today, English is a thriving, vigorous language spoken by nearly one-fourth of the population of the world.
D.English has achieved its global status because of an unusual and amazing ability to respond and change according to the needs of its users.

- Ans
- ☐ 1. BDAC
 - ☐ 2. ACDB
 - ☒ 3. CDBA
 - ☐ 4. CABD

Question ID : 26433072386
Status : Answered
Chosen Option : 3

Q.5 Select the most appropriate meaning of the given idiom.

Between Scylla and Charybdis

- Ans
- ☐ 1. Choice between two pleasant alternatives
 - ☐ 2. Choice between two unavoidable alternatives
 - ☐ 3. Choice between two avoidable alternatives
 - ☒ 4. Choice between two unpleasant alternatives

Question ID : 26433072432
Status : Answered
Chosen Option : 4

Q.6 In the given sentence, a word is given in brackets. Select the most appropriate ANTONYM of the word to fill in the blank.
He is a good man and he always works for a _____ (mean) cause.

- Ans
- ☐ 1. renowned
 - ☐ 2. gigantic
 - ☐ 3. grand
 - ☒ 4. noble

Question ID : 26433058369
Status : Answered
Chosen Option : 4

Q.7 Select the most appropriate ANTONYM of the underlined word.

The natural light was too murky to continue reading.

- Ans
- ☒ 1. Bright
 - ☐ 2. Whispering
 - ☐ 3. Foggy
 - ☐ 4. Loud

Question ID : 26433055846
Status : Answered
Chosen Option : 1

Q.8 Select the option that can be used as a one-word substitute for the given group of words/phrase.

Any organisation's involvement with or influence in the community; especially in the context of social welfare

- Ans
- ☒ 1. Outreach
 - ☐ 2. Outrigger
 - ☐ 3. Outride
 - ☐ 4. Outright

Question ID : 26433059781
Status : Not Answered
Chosen Option : --

Q.9 Select the most appropriate option to fill in the blank.
He speaks like a born _____.

- Ans
- ☒ 1. director
 - ☒ 2. operator
 - ☒ 3. predator
 - ☒ 4. orator

Question ID : 26433059696
Status : Answered
Chosen Option : 4

Q.10 Select the most appropriate option to fill in the blanks.

Dogs bark and horses _____.

- Ans
- ☒ 1. neigh
 - ☒ 2. buzz
 - ☒ 3. howl
 - ☒ 4. purr

Question ID : 26433073262
Status : Answered
Chosen Option : 1

Q.11 Select the most appropriate homonym to fill in the blank.
The ____ pierced through the skin.

- Ans
- ☒ 1. nail
 - ☒ 2. teeth
 - ☒ 3. stone
 - ☒ 4. stick

Question ID : 26433055494
Status : Not Answered
Chosen Option : --

Q.12 Select the most appropriate ANTONYM of the underlined word in the following sentence.

Fill in the blank with the most appropriate word.

- Ans
- ☒ 1. Befitting
 - ☒ 2. Congenial
 - ☒ 3. Irrelevant
 - ☒ 4. Suitable

Question ID : 26433072508
Status : Answered
Chosen Option : 3

Q.13 Select the most appropriate meaning of the underlined idiom in the following sentence.

If you think you can buy everything with money, you are still in a fool's paradise.

- Ans
- ☒ 1. A real world
 - ☒ 2. In another planet
 - ☒ 3. A state of imaginary happiness
 - ☒ 4. In a village of fools

Question ID : 26433072512
Status : Answered
Chosen Option : 3

Q.14 Sentences of a paragraph are given below in jumbled order. Arrange the sentences in the correct order to form a meaningful and coherent paragraph.

- A.Poverty is a phenomenon which is objective as well as subjective.
- B.A large section of the Indian society is suffering from poverty.
- C.Subjectively, poverty stands for perceived deprivation.
- D.Objectively, poverty implies a dehumanising condition in which people are unable to look after their basic needs.

- Ans
- ☒ 1. ABDC
 - ☒ 2. ACDB
 - ☒ 3. BADC
 - ☒ 4. BDCA

Question ID : 26433058358
Status : Answered
Chosen Option : 3

Q.15 Select the most appropriate option to fill in the blank.

Her actual knowledge of the Misses Bordereau was _____ larger than mine, and indeed I had brought with me from England some definite facts which were new to her.

- Ans
- ☒ 1. frequently
 - ☒ 2. scarcely
 - ☒ 3. sufficiently
 - ☒ 4. adequately

Question ID : 26433058287
Status : Answered
Chosen Option : 4

Q.16 The following sentence has been divided into parts. One of them may contain an error. Select the part that contains the error from the given options. If you don't find any error, mark 'No error' as your answer.
The pretty maiden sat singing / in the forest near her father's cottage, / when the young prince saw her.

- Ans
- ☒ 1. when the young prince saw her
 - ☒ 2. No error
 - ☒ 3. The pretty maiden sat singing
 - ☒ 4. in the forest near her father's cottage

Question ID : 26433059549
Status : Answered
Chosen Option : 3

Q.17 Select the correct homonym from the given options to fill in the blank.
Do any of the students still ____ letters to their families?

- Ans
- ☒ 1. writ
 - ☒ 2. right
 - ☒ 3. rite
 - ☒ 4. write

Question ID : 26433058303
Status : Answered
Chosen Option : 4

Q.18 Select the INCORRECTLY spelt word.

- Ans
- ☒ 1. Memento
 - ☒ 2. Maintenance
 - ☒ 3. Jewellery
 - ☒ 4. Acknowledge

Question ID : 26433055603
Status : Answered
Chosen Option : 1

Q.19 Select the most appropriate ANTONYM of the given word.

Optimist

- Ans
- ☒ 1. Pessimist
 - ☒ 2. Separatist
 - ☒ 3. Anarchist
 - ☒ 4. Nihilist

Question ID : 26433055881
Status : Answered
Chosen Option : 1

Q.20 The following sentence has been divided into parts. One of them may contain an error.
Select the part that contains the error from the given options. If you don't find any error,
mark 'No error' as your answer.

He confidently dived / in the deeper end / of the pool.

- Ans
- ☒ 1. No error
 - ☒ 2. He confidently dived
 - ☒ 3. of the pool
 - ☒ 4. in the deeper end

Question ID : 26433061476
Status : Answered
Chosen Option : 4

Comprehension:

In the following passage, some words have been deleted. Read the passage carefully and select the most appropriate option to fill in each blank.

Delhi is one of India's most popular tourist destinations, not only because it is the country's capital, but also because it has a rich history (1)_____ the walls that surround it. When it comes to tourists (2)_____, the Akshardham Temple is one of the most popular in Delhi. This temple is both an (3)_____ wonder and an important part of Hindu (4)_____. Nobody who lives in Delhi or visits Delhi hasn't been to the Akshardham Temple. Its beauty is beyond our ability to (5)_____. For one thing, the beauty of Akshardham, as well as the level of precision with which it is created, has always enthralled me.

SubQuestion No : 21

Q.21 Select the most appropriate option to fill in blank no. 1.

- Ans  1. in
-  2. above
-  3. within
-  4. on

Question ID : 26433058739
Status : Answered
Chosen Option : 3





Comprehension:

In the following passage, some words have been deleted. Read the passage carefully and select the most appropriate option to fill in each blank.

Delhi is one of India's most popular tourist destinations, not only because it is the country's capital, but also because it has a rich history (1)_____ the walls that surround it. When it comes to tourists (2)_____, the Akshardham Temple is one of the most popular in Delhi. This temple is both an (3)_____ wonder and an important part of Hindu (4)_____. Nobody who lives in Delhi or visits Delhi hasn't been to the Akshardham Temple. Its beauty is beyond our ability to (5)_____. For one thing, the beauty of Akshardham, as well as the level of precision with which it is created, has always enthralled me.

SubQuestion No : 22

Q.22 Select the most appropriate option to fill in blank no. 2.

- Ans  1. inclinations
-  2. destinations
-  3. attractions
-  4. diversion

Question ID : 26433058740
Status : Answered
Chosen Option : 3

Comprehension:

In the following passage, some words have been deleted. Read the passage carefully and select the most appropriate option to fill in each blank.

Delhi is one of India's most popular tourist destinations, not only because it is the country's capital, but also because it has a rich history (1)_____ the walls that surround it. When it comes to tourists (2)_____, the Akshardham Temple is one of the most popular in Delhi. This temple is both an (3)_____ wonder and an important part of Hindu (4)_____. Nobody who lives in Delhi or visits Delhi hasn't been to the Akshardham Temple. Its beauty is beyond our ability to (5)_____. For one thing, the beauty of Akshardham, as well as the level of precision with which it is created, has always enthralled me.

SubQuestion No : 23

Q.23 Select the most appropriate option to fill in blank no. 3.

- Ans
- ☒ 1. configurational
 - ☒ 2. framework
 - ☒ 3. structural
 - ☒ 4. architectural

Question ID : 26433058741
Status : Answered
Chosen Option : 4

Comprehension:

In the following passage, some words have been deleted. Read the passage carefully and select the most appropriate option to fill in each blank.

Delhi is one of India's most popular tourist destinations, not only because it is the country's capital, but also because it has a rich history (1)_____ the walls that surround it. When it comes to tourists (2)_____, the Akshardham Temple is one of the most popular in Delhi. This temple is both an (3)_____ wonder and an important part of Hindu (4)_____. Nobody who lives in Delhi or visits Delhi hasn't been to the Akshardham Temple. Its beauty is beyond our ability to (5)_____. For one thing, the beauty of Akshardham, as well as the level of precision with which it is created, has always enthralled me.

SubQuestion No : 24

Q.24 Select the most appropriate option to fill in blank no. 4.

- Ans
- ☒ 1. chronology
 - ☒ 2. pedagogy
 - ☒ 3. astrology
 - ☒ 4. mythology

Question ID : 26433058742
Status : Answered
Chosen Option : 4



Comprehension:

In the following passage, some words have been deleted. Read the passage carefully and select the most appropriate option to fill in each blank.

Delhi is one of India's most popular tourist destinations, not only because it is the country's capital, but also because it has a rich history (1)_____ the walls that surround it. When it comes to tourists (2)_____, the Akshardham Temple is one of the most popular in Delhi. This temple is both an (3)_____ wonder and an important part of Hindu (4)_____. Nobody who lives in Delhi or visits Delhi hasn't been to the Akshardham Temple. Its beauty is beyond our ability to (5)_____. For one thing, the beauty of Akshardham, as well as the level of precision with which it is created, has always enthralled me.

SubQuestion No : 25





Q.25 Select the most appropriate option to fill in blank no. 5.

- Ans  1. prelude
-  2. comprehend
-  3. eliminate
-  4. misperceive

Question ID : 26433058743
Status : Answered
Chosen Option : 2

Section : Part-E- Computer Fundamentals

Q.1 In MS-Excel 2010, _____ are used to make a graphical representation of any set of data.

- Ans  1. Rows
-  2. Table
-  3. Charts
-  4. Columns

Question ID : 26433095433
Status : Answered
Chosen Option : 2

Q.2 Which of the following feature in MS-Word 2010 is used to type very letters or numbers smaller than the normal line of type and set slightly above the line of text?

- Ans  1. Formal Painter
-  2. Superscript
-  3. Subscript
-  4. Strikethrough

Question ID : 26433095344
Status : Answered
Chosen Option : 2

Q.3 Which of the following allows the user to send files along with e-mail?

- Ans
- ☒ 1. Messenger
 - ☒ 2. Spam
 - ☒ 3. Attachment
 - ☒ 4. Snoozed

Question ID : 26433095515
Status : Answered
Chosen Option : 3

Q.4 Which of the following refers to a huge database of Internet resources such as webpages, newsgroups, programs, images etc. and helps to locate information on World Wide Web?

- Ans
- ☒ 1. Web server
 - ☒ 2. Domain
 - ☒ 3. Search engine
 - ☒ 4. Protocols

Question ID : 26433095357
Status : Not Answered
Chosen Option : --

Q.5 _____ shortcut key is used in MS-Excel 2010 to select a column.

- Ans
- ☒ 1. Ctrl + Spacebar
 - ☒ 2. Ctrl + Enter
 - ☒ 3. Alt + Enter
 - ☒ 4. Shift + Spacebar

Question ID : 26433095472
Status : Marked For Review
Chosen Option : 1

Q.6 Consider the following word written in a MS-Word 2010 document:
~~Prestige~~
Which of the following is correct regarding the given word?

- Ans
- ☒ 1. The word is italic and has a strikethrough.
 - ☒ 2. The word is bold as well as italic.
 - ☒ 3. The word is italic.
 - ☒ 4. The word has a strikethrough.

Question ID : 26433095502
Status : Answered
Chosen Option : 4

Q.7 Which of the following font effects is not available in the MS-Excel 2010 font dialog box?

- Ans
- ☒ 1. Italic
 - ☒ 2. Super Italic
 - ☒ 3. Underline
 - ☒ 4. Bold

Question ID : 26433095499
Status : Answered
Chosen Option : 2

Q.8 _____ tab in MS-Excel 2010 ribbon bar contains tools for inserting functions, defining names and controlling the calculation options.

- Ans
- ☒ 1. REVIEW
 - ☒ 2. PAGE Layout
 - ☒ 3. FORMULA
 - ☒ 4. FILE

Question ID : 26433095438
Status : Answered
Chosen Option : 3

Q.9 Secure communication is required when two parties are communicating through internet, and they do not want any third party to intercept between them. Which of the following is a property of secure communication?

P: Confidentiality
Q: Accuracy

- Ans
- ☒ 1. Both P and Q
 - ☒ 2. Only Q
 - ☒ 3. Neither P nor Q
 - ☒ 4. Only P

Question ID : 26433095516
Status : Marked For Review
Chosen Option : 1

Q.10 Which of the following shortcut key is used to increase the font size to the next larger point size available in the Font Size list box of MS-Word 2010?

- Ans
- ☒ 1. Ctr I+ Shift + F3
 - ☒ 2. Ctrl + Shift + >
 - ☒ 3. Ctrl + Shift + <
 - ☒ 4. Ctrl + Shift + F4

Question ID : 26433095533
Status : Answered
Chosen Option : 2