

Head Constable Ministerial in Delhi Police Examination 2022

Roll Number	
Candidate Name	
Venue Name	iON Digital Zone iDZ Jalalpur
Exam Date	14/10/2022
Exam Time	1:00 PM - 2:30 PM
Subject	Head Constable Ministerial in Delhi Police Examination 2022

Section : **Part-A-General Awareness**

Q.1 'Kitab-ul-Hind', a book written in Arabic by Al-Biruni, is divided into _____ chapters.

Ans  1. 60

 2. 100

 3. 40

 4. 80

Question ID : **26433066648**

Status : **Not Answered**

Chosen Option : --

Q.2 Which is a popular dance form of the Bharia tribe?

Ans  1. Bhadam

 2. Sahariya

 3. Thapti

 4. Atari

Question ID : **26433064379**

Status : **Not Answered**

Chosen Option : --

Q.3 The Central Sector Scheme of National Overseas Scholarship is NOT to facilitate the low-income students belonging to _____.

Ans  1. Semi-Nomadic Tribes

 2. Scheduled Castes

 3. General Category

 4. Traditional Artisans

Question ID : **26433061857**

Status : **Not Answered**

Chosen Option : --

Q.4 On the eve of Independence, the direction of Indian foreign trade was largely _____.

Ans  1. restricted to Britain

 2. not restricted

 3. restricted to the US

 4. restricted to China

Question ID : **26433059110**

Status : **Not Answered**

Chosen Option : --

Q.5 Which of the following Union Territories has zero percentage forest area?

- Ans
- ☒ 1. Puducherry
 - ☒ 2. Andaman and Nicobar
 - ☒ 3. Lakshadweep
 - ☒ 4. Chandigarh

Question ID : 26433055323
Status : Answered
Chosen Option : 3

Q.6 There are many cotton spinning mills located in Telangana. Which of the following is NOT a centre of cotton textile industry in Telangana?

- Ans
- ☒ 1. Guntur
 - ☒ 2. Warangal
 - ☒ 3. Secunderabad
 - ☒ 4. Hyderabad

Question ID : 26433055656
Status : Answered
Chosen Option : 1

Q.7 The doctrine of severability, which protects the Fundamental Rights enshrined in the Constitution, is also known as the:

- Ans
- ☒ 1. doctrine of power
 - ☒ 2. doctrine of lapse
 - ☒ 3. doctrine of separability
 - ☒ 4. doctrine of ultra vires

Question ID : 26433069849
Status : Not Attempted and Marked For Review
Chosen Option : --

Q.8 Which of the following states showed the highest percentage drop in the decadal growth rate of 2001-2011?

- Ans
- ☒ 1. Andhra Pradesh
 - ☒ 2. Uttar Pradesh
 - ☒ 3. Maharashtra
 - ☒ 4. Kerala

Question ID : 26433055331
Status : Not Answered
Chosen Option : --

Q.9 When was the first time that Mahatma Gandhi appeared on a Congress platform?

- Ans
- ☒ 1. 1901 Calcutta Session
 - ☒ 2. 1899 Lucknow Session
 - ☒ 3. 1904 Bombay Session
 - ☒ 4. 1915 Bombay Session

Question ID : 26433064610
Status : Answered
Chosen Option : 4

Q.10 Who was appointed by the Central Government as the Director on the Central Board of the Reserve Bank of India, effective from 16 February 2022?

- Ans ☒ 1. Sanjay Malhotra
- ☐ 2. T Rabi Sankar
- ☐ 3. Mahesh Kumar Jain
- ☐ 4. Debasish Panda

Question ID : 26433055047
Status : Not Answered
Chosen Option : --

Q.11 The statue of 'Priest-King' has been found in which of the following sites of the Indus Valley Civilisation?

- Ans ☐ 1. Lothal
- ☐ 2. Harappa
- ☐ 3. Kalibangan
- ☒ 4. Mohenjo-Daro

Question ID : 26433064350
Status : Not Answered
Chosen Option : --

Q.12 In which year was 'Hind Swaraj' published?

- Ans ☒ 1. 1909
- ☐ 2. 1920
- ☐ 3. 1908
- ☐ 4. 1911

Question ID : 26433055534
Status : Answered
Chosen Option : 3

Q.13 In which year was the Unorganised Workers' Social Security Act, which intended to the welfare of the people in the similar sector, enacted in India?

- Ans ☐ 1. 2009
- ☒ 2. 2008
- ☐ 3. 2011
- ☐ 4. 2012

Question ID : 26433081930
Status : Not Answered
Chosen Option : --

Q.14 PR Sreejesh who won the World Games Athlete of the Year Award 2021, is associated with which sport?

- Ans ☐ 1. Archery
- ☐ 2. Powerlifting
- ☒ 3. Hockey
- ☐ 4. Karate

Question ID : 26433061863
Status : Answered
Chosen Option : 3

Q.15 Which of the following is NOT correct?

- Ans ☒ 1. Private Income = Factor income from net domestic product accruing to the private sector + National debt interest + Net factor income from abroad + Current transfers from government + Other net transfers from the rest of the world
- ☒ 2. Net National Product at factor cost \equiv Net National Product at market prices – Net indirect taxes (Net indirect taxes \equiv Indirect taxes + Subsidies)
- ☒ 3. National Disposable Income = Net National Product at market prices + Other current transfers from the rest of the world
- ☒ 4. Personal Disposable Income (PDI) \equiv Personal Income – Personal tax payments – Non-tax payments

Question ID : 26433064507
Status : Not Answered
Chosen Option : --

Q.16 Which of the following is NOT a problem with the barter system of trade?

- Ans ☒ 1. Difficulty in exchanging indivisible goods
- ☒ 2. Difficulty in storing wealth
- ☒ 3. Difficult to form a measure of value which is accepted by all
- ☒ 4. Development of personal relationships in trade

@Qmaths

Question ID : 26433059245
Status : Not Answered
Chosen Option : --

Q.17 In December 2021, which State Government launched an emergency care scheme through which the State Government will bear the expenses of emergency care for accident victims for the first 48 hours?

- Ans ☒ 1. West Bengal
- ☒ 2. Telangana
- ☒ 3. Tamil Nadu
- ☒ 4. Kerala

Question ID : 26433055560
Status : Not Answered
Chosen Option : --

Q.18 Scientists from which of the following institutes have developed a highly reliable, High Electron Mobility Transistor (HEMTs)?

- Ans ☒ 1. IIT Delhi
- ☒ 2. DRDO
- ☒ 3. IISc Bangalore
- ☒ 4. IIT Madras

Question ID : 26433095260
Status : Not Answered
Chosen Option : --

Q.19 Hornbill festival is associated with which state of India?

- Ans ☒ 1. Assam
- ☒ 2. Nagaland
- ☒ 3. Manipur
- ☒ 4. Sikkim

Question ID : 26433066539
Status : Answered
Chosen Option : 2

Q.20 Which of the following Online Market Place feature was launched in the “MatsyaSetu” mobile app in August 2022?

Ans ☒ 1. Aqua Bazar

☒ 2. Aqua Outlet

☒ 3. Aqua Haat

☒ 4. Aqua Market

Question ID : 26433095283

Status : Not Answered

Chosen Option : --

Section : Part-B-Quantitative Aptitude

Q.1 Two numbers are, respectively, 25% and 60% more than a third number. What is the ratio of the first two numbers?

Ans ☒ 1. 25 : 32

☒ 2. 5 : 8

☒ 3. 33 : 25

☒ 4. 12 : 19

Question ID : 26433061732

Status : Answered

Chosen Option : 1

Q.2 The value of $(a - b)^3 + (b - c)^3 + (c - a)^3$ is:

Ans ☒ 1. $3abc$

☒ 2. $3(a + b)(b + c)(c + a)$

☒ 3. 0

☒ 4. $3(a - b)(b - c)(c - a)$

Question ID : 26433061378

Status : Answered

Chosen Option : 4

Q.3 Find the volume of the cylinder circumscribing a sphere with the base diameter 28 cm (use $\pi = \frac{22}{7}$).

Ans ☒ 1. 17248 cm^3

☒ 2. 17250 cm^3

☒ 3. 17244 cm^3

☒ 4. 17246 cm^3

Question ID : 26433058699

Status : Answered

Chosen Option : 1

Q.4 Express $6.00\overline{893}$ as a vulgar fraction.

- Ans
- ☒ 1. $6\frac{893}{9900}$
 - ☒ 2. $\frac{6893}{99900}$
 - ☒ 3. $6\frac{893}{999}$
 - ☒ 4. $6\frac{893}{99900}$

Question ID : 26433065044
Status : Not Answered
Chosen Option : --

Q.5 If a person walks at 6 km/h instead of 5 km/h, he would have walked 5 km more. What is the distance travelled by him at the speed of 5 km/h?

- Ans
- ☒ 1. 15 km
 - ☒ 2. 25 km
 - ☒ 3. 18 km
 - ☒ 4. 24 km

Question ID : 26433076232
Status : Answered
Chosen Option : 2

Q.6 A sum of Rs.16,340 is lent at a simple interest of 13% per annum. If the interest is Rs. X after 5 years, then the sum of the digits of X is _____.

- Ans
- ☒ 1. 19
 - ☒ 2. 10
 - ☒ 3. 15
 - ☒ 4. 18

Question ID : 26433061312
Status : Answered
Chosen Option : 2

Q.7 If $\frac{1}{a} + \frac{1}{b} + \frac{1}{c} = 0$, then:

- Ans
- ☒ 1. $\frac{1}{a^2} + \frac{1}{b^2} + \frac{1}{c^2} = a^2 + b^2 + c^2$
 - ☒ 2. $\frac{1}{a^2-bc} + \frac{1}{b^2-ac} + \frac{1}{c^2-ab} = 1$
 - ☒ 3. $a^2 + b^2 + c^2 = (a + b + c)^2$
 - ☒ 4. $ab + bc + ca = 1$

Question ID : 26433061629
Status : Answered
Chosen Option : 3

Q.8 If a solid cuboid of dimensions $10 \times 5 \times 6$ is melted so as to make cubes of unit length, what will be the cost of all such cubes formed, if the cost of one cube is Rs.20?

- Ans
- ☒ 1. Rs.5,000
 - ☒ 2. Rs.8,000
 - ☒ 3. Rs.3,000
 - ☒ 4. Rs.6,000

Question ID : 26433056344
Status : Answered
Chosen Option : 4

Q.9 Find the average of the first five prime numbers.

- Ans
- ☒ 1. 7.8
 - ☒ 2. 6.5
 - ☒ 3. 8.7
 - ☒ 4. 5.6

Question ID : 26433073072
Status : Answered
Chosen Option : 4

Q.10 A vegetable seller sells potatoes at ₹22/kg which he purchased at ₹18/kg. But he gives only 850 grams of potatoes instead of 1 kg while selling. What is the actual percentage profit earned by the seller?

- Ans
- ☒ 1. 30.45%
 - ☒ 2. 42.79%
 - ☒ 3. 45.29%
 - ☒ 4. 43.79%

Question ID : 26433058789
Status : Answered
Chosen Option : 4

Q.11 Shiva borrowed a sum of Rs.12,000 from a finance company at the rate of 20% p.a. compound interest, compounded annually. What is the CI for a period of 2 years?

- Ans
- ☒ 1. Rs.5,280
 - ☒ 2. Rs.4,800
 - ☒ 3. Rs.4,280
 - ☒ 4. Rs.2,400

Question ID : 26433058149
Status : Answered
Chosen Option : 1

Q.12 The following table shows the loans disbursed by banks during the period of 5 years (₹ in crores).

Bank	1982	1983	1984	1985	1986
A	18	23	45	30	70
B	27	33	18	41	37
C	29	29	22	17	11
D	31	16	28	32	43
E	13	19	27	34	42
Total	118	120	140	154	203

In which of the following banks did the disbursement of loan continuously increase over the years?

- Ans ☒ 1. A
☒ 2. B
☒ 3. D
☒ 4. E

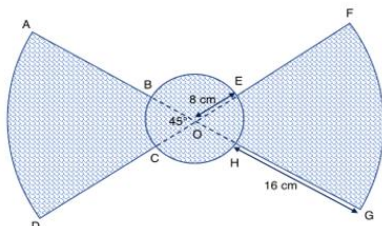
Question ID : 26433066382

Status : Answered

Chosen Option : 4

Q.13 The following diagram shows part of a fan. OAD and OFG are sectors of a circle with centre O, having radius 24 cm. The central angle of the sectors is 45° as shown in the figure. B, C, H and E lie on a circle with centre O and radius 8 cm. What is the shaded area (in cm^2)?

Take $\pi = 3.14$



- Ans ☒ 1. 602.88
☒ 2. 620.88
☒ 3. 452.16
☒ 4. 425.16

Question ID : 26433075778

Status : Answered

Chosen Option : 1

Q.14 The value of $2019 \div 3 + \left[\frac{1}{27} \text{ of } 729 \right]$ is:

- Ans ☒ 1. 701
☒ 2. 1402
☒ 3. 700
☒ 4. 1400

Question ID : 26433056866

Status : Answered

Chosen Option : 3

Q.15 A can do a piece of work in 120 days and B can do it in 150 days. They work together for 20 days. Then, B leaves and A alone continues the work. 12 days after that C joins A and the work is completed in 48 days more. In how many days can C do it, if he works alone?

- Ans
- ☐ 1. 280 days
 - ☐ 2. 320 days
 - ☒ 3. 240 days
 - ☐ 4. 270 days

Question ID : 26433063726
Status : Answered
Chosen Option : 3

Q.16 A certain number of workers agree to finish a work in 30 days. 10 workers do not come to work, the rest finished the work in 50 days. Find the number of workers who originally agreed to work.

- Ans
- ☐ 1. 20
 - ☒ 2. 25
 - ☐ 3. 15
 - ☐ 4. 22

Question ID : 26433061174
Status : Answered
Chosen Option : 2

Q.17 A company recorded growth of 10% and 15% in two successive years in its production. How many units did the company manufacture 2 years ago if the current production is 101200 units?

- Ans
- ☐ 1. 70000
 - ☒ 2. 80000
 - ☐ 3. 85000
 - ☐ 4. 90000

Question ID : 26433063302
Status : Answered
Chosen Option : 2

Q.18 What is the value of $\frac{5}{2} \left\{ \frac{\cos 37^\circ}{\sin 53^\circ} \right\} - \frac{1}{2} (\sin^2 39^\circ + \sin^2 51^\circ)$?

- Ans
- ☐ 1. $\sin^2 51^\circ - \sin 53^\circ$
 - ☐ 2. $\sin 53^\circ + \tan 51^\circ$
 - ☒ 3. 2
 - ☐ 4. 1

Question ID : 26433058821
Status : Answered
Chosen Option : 3

Q.19

Let $a = \frac{11}{100}$, and $b = 1.\overline{01}$, then $a - b$ is :

Ans

☐ 1. $-\frac{8911}{9090}$

☐ 2. $\frac{8911}{9900}$

☐ 3. $\frac{8911}{9090}$

☒ 4. $-\frac{8911}{9900}$

Question ID : 26433066170

Status : Answered

Chosen Option : 4

Q.20 In a showroom, the price of a vehicle is Rs.85,000. The customer gets a cash discount of Rs.5,000 and gets a scratch card promising a percentage discount of 12.5% to 20%. Determine the difference between the least and maximum selling price(in Rs.) of the vehicle.

Ans

☒ 1. 6000

☐ 2. 8000

☐ 3. 5000

☐ 4. 7000

Question ID : 26433071317

Status : Answered

Chosen Option : 1

Section : Part-C-General Intelligence

Q.1 Which of the following numbers will replace the question mark (?) in the given series?

96, 83, 72, 65, ?, 57

Ans

☐ 1. 55

☐ 2. 63

☒ 3. 60

☐ 4. 53

Question ID : 26433056444

Status : Answered

Chosen Option : 3

Q.2 Select the correct combination of mathematical signs to sequentially replace the * signs and to balance the given equation.

$11 * 9 * 69 * 6 * 2 * 165$

Ans

☐ 1. +, -, x, +, =

☐ 2. +, x, -, =, +

☐ 3. +, x, -, +, =

☒ 4. x, +, -, ÷, =

Question ID : 26433056453

Status : Answered

Chosen Option : 4

Q.3 Select the option that is related to the fifth letter cluster in the same way as the second letter cluster is related to the first letter cluster and the fourth letter cluster is related to the third letter cluster.
GTDNE : YGVAW :: IPDHC : ACVUU :: JSRXK : ?

- Ans ☒ 1. BJFCK
☒ 2. BFJKC
☒ 3. KJVFC
☒ 4. KFBKC

Question ID : 26433074701
Status : Answered
Chosen Option : 2

Q.4 Select the option that is related to the fourth number in the same way as the first number is related to the second number and the fifth number is related to the sixth number.
128 : 4 :: ? : 11 :: 2592 : 18

- Ans ☒ 1. 847
☒ 2. 1089
☒ 3. 968
☒ 4. 1331

Question ID : 26433056496
Status : Answered
Chosen Option : 3

Q.5 Select the option that represents the letters that, when sequentially placed from left to right in the blanks below, will complete the letter series.
C _ I _ K E _ _ R I _ _ E T _ _ I C _ E T C R _ C K _ _

- Ans ☒ 1. TICKETRCIRKE
☒ 2. RCTCKCKRKIET
☒ 3. IKTECKERRCIT
☒ 4. TRICKCKIEEIE

Question ID : 26433056389
Status : Answered
Chosen Option : 2

Q.6 In a code language, 'HEAD' is coded as JHCG, and 'NOSE' is coded as PRUH. How will 'HAND' be coded in the same language?

- Ans ☒ 1. JDQG
☒ 2. KCQF
☒ 3. JDPG
☒ 4. KDQG

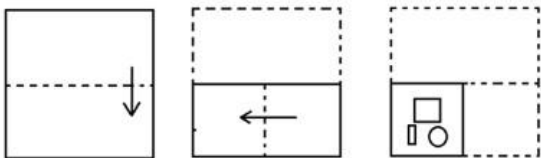
Question ID : 26433057768
Status : Answered
Chosen Option : 3

Q.7 Select the option that is related to the fifth letter cluster in the same way as the second letter cluster is related to the first letter cluster and the fourth letter cluster is related to the third letter cluster.
UFZ : NYS :: FBW : YUP :: DKS : ?

- Ans
- ☒ 1. SDL
 - ☒ 2. WDL
 - ☒ 3. POF
 - ☒ 4. BKE

Question ID : 26433074680
Status : Answered
Chosen Option : 2

Q.8 The sequence of folding a piece of paper and the manner in which the folded paper has been cut is shown below. Select the figure which would most closely resemble the unfolded form of the paper.



Ans

- ☒ 1.
- ☒ 2.
- ☒ 3.
- ☒ 4.

Question ID : 26433056681
Status : Answered
Chosen Option : 1

Q.9 Pointing to a person in a photograph, a lady, Kusum, said, “She is the mother of my father’s mother’s daughter-in-law’s daughter.” If Kusum’s father is the only child of his parents, how is the person related to Kusum?

- Ans
- ☒ 1. Daughter
 - ☒ 2. Sister
 - ☒ 3. Mother
 - ☒ 4. Mother-in-law

Question ID : 26433055667
Status : Answered
Chosen Option : 3

Q.10 Select the option that is related to the third term in the same way as the second term is related to the first term and the sixth term is related to the fifth term.
8 : 44 :: 5 : ? :: 11 : 92

- Ans
- ☒ 1. 25
 - ☒ 2. 9
 - ☒ 3. 14
 - ☒ 4. 20

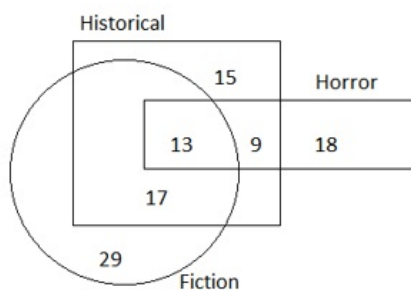
Question ID : 26433057060
Status : Answered
Chosen Option : 3

Q.11 Read the given statements and conclusions carefully. Assuming that the information given in the statements is true, even if it appears to be at variance with commonly known facts, decide which of the given conclusions logically follow(s) from the statements.
Statements:
Only a few labs are watches.
Some labs are vans.
All vans are cans.
Conclusions:
I. Some cans are labs.
II. All watches being cans is a possibility.
III. No vans can be watches.

- Ans
- ☒ 1. Both I and III follow.
 - ☒ 2. Both I and II follow.
 - ☒ 3. Both II and III follow.
 - ☒ 4. I, II and III follow.

Question ID : 26433079072
Status : Answered
Chosen Option : 2

Q.12 Study the given diagram carefully and answer the question. The numbers in different sections indicate the number of persons who like different types of novels.

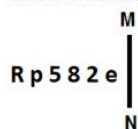


How many persons are there who like both historical and horror novels but NOT fiction novels?

- Ans ☒ 1. 22
☒ 2. 9
☒ 3. 27
☒ 4. 13

Question ID : 26433070414
 Status : Answered
 Chosen Option : 2

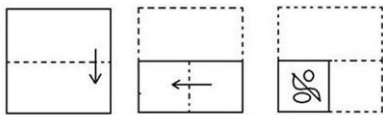
Q.13 Select the correct mirror image of the given figure when the mirror is placed at MN as shown below.



- Ans ☒ 1. e 2 8 5 p R
☒ 2. e 5 8 2 p R
☒ 3. e 2 8 5 p R
☒ 4. e 2 8 2 p R


Question ID : 26433056980
 Status : Answered
 Chosen Option : 3

Q.14 The sequence of folding a piece of paper and the manner in which the folded paper has been cut is shown below. Select the figure which would most closely resemble the unfolded form of the paper.

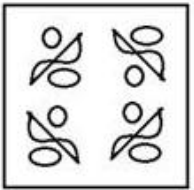


Ans

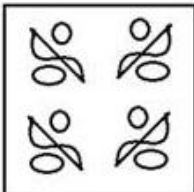
✗ 1.



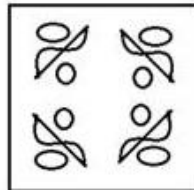
✗ 2.



✗ 3.



✓ 4.



Question ID : 26433056688
Status : Answered
Chosen Option : 4

Q.15 In a certain code language, 'WATER' is written as '46140536' and 'TORCH' is written as '401536616'. How will 'COFFEE' be written in that language?

Ans ✗ 1. 6151255

✗ 2. 3306610

✓ 3. 615121255

✗ 4. 330661010

Question ID : 26433068010
Status : Answered
Chosen Option : 3

Q.16 Which of the following terms will replace the question mark (?) in the given series?

?, YST, YTU, YUV, YVW

Ans ✗ 1. YRZ

✗ 2. YES

✗ 3. YUS

✓ 4. YRS

Question ID : 26433085324
Status : Answered
Chosen Option : 4

Q.17 While introducing Meera to a group of people, Rajiv said, “She is the sister of the son of my brother’s wife.” How is Meera related to Rajiv?

- Ans
- ☒ 1. Daughter
 - ☒ 2. Sister
 - ☒ 3. Niece
 - ☒ 4. Cousin

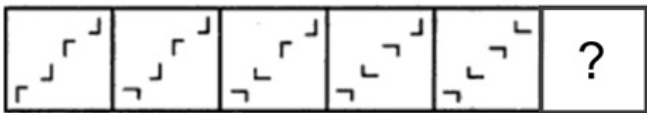
Question ID : 26433067259
Status : Answered
Chosen Option : 3

Q.18 Seven people M, N, O, P, Q, R and S, are sitting in a straight row, facing the north. Only four people sit to the left of N. Only three people sit between Q and N. M sits second to the left of R. S is an immediate neighbour of P and N. Who sits second to the left of N?

- Ans
- ☒ 1. O
 - ☒ 2. R
 - ☒ 3. M
 - ☒ 4. P

Question ID : 26433076520
Status : Answered
Chosen Option : 3

Q.19 Select the figure from among the given options that can replace the question mark (?) in the following series.



Ans

- ☒ 1.
- ☒ 2.
- ☒ 3.
- ☒ 4.

Question ID : 26433080527
Status : Answered
Chosen Option : 2

Q.20 Six students J, K, L, M, N and O are sitting around a circular table facing the centre. J is an immediate neighbour of both N and M. K is sitting third to the right of N. N is an immediate neighbour of both O and J. O is sitting second to the left of K. Who is sitting to the immediate right of O?

- Ans ☒ 1. J
☒ 2. N
☒ 3. M
☒ 4. L

Question ID : 26433055173
Status : Answered
Chosen Option : 4

Q.21 Which of the following numbers will replace the question mark (?) in the given series?
38, 47, 31, 56, 20, 69, ?

- Ans ☒ 1. 9
☒ 2. 8
☒ 3. 5
☒ 4. 12

Question ID : 26433057558
Status : Answered
Chosen Option : 3

Q.22 Select the correct combination of mathematical signs to sequentially replace the * signs and to balance the given equation.

$$23 * 15 * 5 * 12 * 6 * 92$$

- Ans ☒ 1. +, x, ÷, -, =
☒ 2. ÷, -, +, x, =
☒ 3. -, ÷, +, x, =
☒ 4. x, -, ÷, +, =

Question ID : 26433056939
Status : Answered
Chosen Option : 3

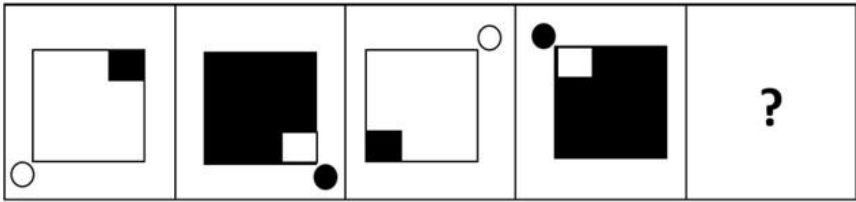
Q.23 Which option represents the correct order of the given words as they would appear in an English dictionary?

1. Literate
2. Literature
3. Literacy
4. Literary
5. Literal

- Ans ☒ 1. 5, 3, 4, 1, 2
☒ 2. 3, 5, 4, 1, 2
☒ 3. 3, 5, 1, 4, 2
☒ 4. 3, 5, 4, 2, 1

Question ID : 26433057210
Status : Answered
Chosen Option : 2

Q.24 Select the figure that will replace the question mark (?) in the following figure series.



Ans

- ✗ 1.
- ✗ 2.
- ✓ 3.
- ✗ 4.

Question ID : 26433056094
Status : Answered
Chosen Option : 3

Q.25 Four letter-clusters have been given out of which three are alike in some manner and one is different. Select the one that is different.

- ✓ 1. VXZ
- ✗ 2. CEH
- ✗ 3. PRU
- ✗ 4. JLO

Question ID : 26433068498
Status : Answered
Chosen Option : 1

Q.1 Parts of a sentence are given below in jumbled order. Arrange the parts in the correct order to form a meaningful sentence.

People / their duties and responsibilities / become aware of / only through education / rights and obligations

- Ans** ☒ 1. People become aware of their duties and responsibilities, rights, and obligations only through education.
- ☐ 2. People become aware of only through education rights and obligations, their duties, and responsibilities.
- ☐ 3. People only through education, rights and obligations become aware of their duties and responsibilities.
- ☐ 4. Their duties and responsibilities become aware of people only through education rights and obligations.

Question ID : **26433059613**
Status : **Answered**
Chosen Option : **1**

Q.2 Select the most appropriate **ANTONYM** of the underlined word.

Being generous is a noble virtue.

- Ans** ☐ 1. Affluent
- ☒ 2. Miserly
- ☐ 3. Rich
- ☐ 4. Wealthy

Question ID : **26433073194**
Status : **Answered**
Chosen Option : **2**

Q.3 Select the most appropriate option to fill in the blank.

Ratna has the capacity to remain _____ and humble in all situations.

- Ans** ☐ 1. silent
- ☐ 2. violent
- ☐ 3. rooted
- ☒ 4. grounded

Question ID : **26433072405**
Status : **Answered**
Chosen Option : **1**

Q.4 Select the most appropriate homonym to fill in the blank.

_____ worship is a predominant part of some religions.

- Ans** ☐ 1. Idyll
- ☒ 2. Idol
- ☐ 3. Idyl
- ☐ 4. Idle

Question ID : **26433058387**
Status : **Answered**
Chosen Option : **2**

Q.5 Select the **INCORRECTLY** spelt word in the following sentence.
A newspaper must be progmatic, impartial and provide reliable information to the public so that they are not misled by prejudiced opinions.

- Ans
- ☒ 1. reliable
 - ☒ 2. progmatic
 - ☒ 3. impartial
 - ☒ 4. misled

Question ID : 26433058604
Status : Answered
Chosen Option : 2

Q.6 Select the most appropriate meaning of the given idiom.

By and by

- Ans
- ☒ 1. Altogether
 - ☒ 2. One after the other
 - ☒ 3. On the whole
 - ☒ 4. Gradually

Question ID : 26433070664
Status : Answered
Chosen Option : 2

Q.7 Select the option that can be used as a one-word substitute for the given group of words.
Performed or occurring as a result of a sudden impulse

- Ans
- ☒ 1. Spontaneous
 - ☒ 2. Refined
 - ☒ 3. Volitional
 - ☒ 4. Cultivated

Question ID : 26433060740
Status : Answered
Chosen Option : 1

Q.8 Select the **INCORRECTLY** spelt word.

- Ans
- ☒ 1. Congregation
 - ☒ 2. Department
 - ☒ 3. Government
 - ☒ 4. Committee

Question ID : 26433055475
Status : Answered
Chosen Option : 1

Q.9 For the four-sentence (S1 to S4) paragraph below, sentences S1 and S4 are given. From the options P, Q, R and S, select the appropriate sentences for S2 and S3, respectively.

- (S1) When the men had gone, I looked around for a place where I could sit.
(S2)
(S3)
(S4) From under it a second path took off and ran across the face of the mountain skirting the upper edge of the broken ground.
(P) The pine was not easy to climb, for there were no branches for twenty feet, but once having reached the lowest branch, the rest was easy.
(Q) The only tree on the whole of this part of the mountain was a solitary pine.
(R) When the men had tied my rifle to one end of it, I drew it up and climbed to the top of the tree.
(S) It was growing on the ridge close to the path down which the men had gone.

- Ans ☒ 1. R, Q
☒ 2. R, S
☒ 3. P, Q
☒ 4. Q, S

Question ID : 26433065212
Status : Answered
Chosen Option : 4

Q.10 Select the most appropriate meaning of the given idiom.

Stabbed in the back

- Ans ☒ 1. Betraying someone
☒ 2. Injuring someone
☒ 3. Killing someone
☒ 4. Criticising someone

Question ID : 26433072304
Status : Answered
Chosen Option : 1

Q.11 The following sentence has been divided into parts. One of them may contain an error. Select the part that contains the error from the given options. If you don't find any error, mark 'No error' as your answer.
The prophecy dictates / the end of the world / unless the wrongs are righted.

- Ans ☒ 1. unless the wrongs are righted
☒ 2. the end of the world
☒ 3. The prophecy dictates
☒ 4. No error

Question ID : 26433059063
Status : Answered
Chosen Option : 1

Q.12 Select the option that can be used as a one-word substitute for the given group of words.

Something that is modern or existing in the prevailing times

- Ans ☒ 1. Contradictory
☒ 2. Contemporary
☒ 3. Contemptuous
☒ 4. Ancient

Question ID : 26433072315
Status : Answered
Chosen Option : 2

Q.13 Parts of a sentence are given below in jumbled order. Arrange the parts in the correct order to form a meaningful sentence.

The last man / who / was / the captain / left the sinking ship

- Ans
- ☒ 1. The captain who was left the sinking ship the last man.
 - ☒ 2. The captain was the last man who left the sinking ship.
 - ☒ 3. The last man left the sinking ship who was the captain.
 - ☒ 4. The last man who was left the sinking ship the captain.

Question ID : 26433059606

Status : Answered

Chosen Option : 2

Q.14 Select the most appropriate synonym of the underlined word in the given sentence.

The opposition criticised the ruling party on several issues.

- Ans
- ☒ 1. vocalised
 - ☒ 2. shunned
 - ☒ 3. censured
 - ☒ 4. complained

Question ID : 26433055508

Status : Answered

Chosen Option : 3

Q.15 The following sentence has been split into four segments. Identify the segment that contains a grammatical error.

Tropic of Cancer / passes through / the state / of Jharkhand.

- Ans
- ☒ 1. the state
 - ☒ 2. of Jharkhand
 - ☒ 3. Tropic of Cancer
 - ☒ 4. passes through

Question ID : 26433055843

Status : Answered

Chosen Option : 3

Q.16 Select the most appropriate homonym to fill in the blank.

The old doors _____ whenever they are opened.

- Ans
- ☒ 1. creek
 - ☒ 2. crick
 - ☒ 3. creak
 - ☒ 4. cry

Question ID : 26433058371

Status : Answered

Chosen Option : 3

Q.17 Select the most appropriate homophone of the italicised word.
May god *heal* the pain of her suffering.

- Ans ☒ 1. Hail
☒ 2. Hall
☒ 3. Hale
☒ 4. Heel

Question ID : 26433055498
Status : Answered
Chosen Option : 4

Q.18 For the four-sentence (S1 to S4) paragraph below, sentences S1 and S4 are given.
From the options P, Q, R and S select the appropriate sentences for S2 and S3,
respectively.

(S1) For almost every piece of advice, you will find someone recommending just the opposite.
(S2)
(S3)
(S4) What you should certainly not do is try and please everyone.
(P) The greater danger for most of us lies in setting our aim too low and achieving our mark.
(Q) Try and understand the underlying philosophy in the advice, and choose what works well for you.
(R) The trick is to find what works for you – in your specific case – and go with it.
(S) You can achieve any goal you desire only if you help other people achieve their goals.

- Ans ☒ 1. Q, S
☒ 2. R, Q
☒ 3. S, Q
☒ 4. P, R

Question ID : 26433065210
Status : Answered
Chosen Option : 2

Q.19 Select the most appropriate option that can substitute the underlined segment in the given sentence. If there is no need to substitute it, select 'No substitution required'.

Today is more hot than yesterday.

- Ans ☒ 1. hotter than
☒ 2. most hot than
☒ 3. more hotter
☒ 4. No substitution required

Question ID : 26433063625
Status : Answered
Chosen Option : 1

Q.20 Select the most appropriate ANTONYM of the underlined word in the given sentence.

The police tried to reveal the truth.

- Ans ☒ 1. reinstate
☒ 2. flatter
☒ 3. conceal
☒ 4. ignore

Question ID : 26433055487
Status : Answered
Chosen Option : 3

Comprehension:

In the following passage, some words have been deleted. Read the passage carefully and select the most appropriate option to fill in each blank.

Even (1) _____ we find in our individual hearts, (2) _____ all the broadcast and telecast teachings of science and the discoveries of the (3) _____, that we cannot (4) _____ the Garden of Eden from our imagination and (5) _____ it is a blessing.

SubQuestion No : 21

Q.21 Select the most appropriate option to fill in blank number 1.

- Ans ☒ 1. yesterday
☒ 2. then
☒ 3. tomorrow
☒ 4. today

Question ID : 26433058878
Status : Answered
Chosen Option : 4

Comprehension:

In the following passage, some words have been deleted. Read the passage carefully and select the most appropriate option to fill in each blank.

Even (1) _____ we find in our individual hearts, (2) _____ all the broadcast and telecast teachings of science and the discoveries of the (3) _____, that we cannot (4) _____ the Garden of Eden from our imagination and (5) _____ it is a blessing.

SubQuestion No : 22

Q.22 Select the most appropriate option to fill in blank number 2.

- Ans ☒ 1. in spite of
☒ 2. nor
☒ 3. therefore
☒ 4. because

Question ID : 26433058879
Status : Answered
Chosen Option : 1

Comprehension:

In the following passage, some words have been deleted. Read the passage carefully and select the most appropriate option to fill in each blank.

Even (1) _____ we find in our individual hearts, (2) _____ all the broadcast and telecast teachings of science and the discoveries of the (3) _____, that we cannot (4) _____ the Garden of Eden from our imagination and (5) _____ it is a blessing.

SubQuestion No : 23

Q.23 Select the most appropriate option to fill in blank number 3.

- Ans ☒ 1. sycophants
☒ 2. poets
☒ 3. priests
☒ 4. anthropologists

Question ID : 26433058880
Status : Answered
Chosen Option : 4

Comprehension:

In the following passage, some words have been deleted. Read the passage carefully and select the most appropriate option to fill in each blank.

Even (1) _____ we find in our individual hearts, (2) _____ all the broadcast and telecast teachings of science and the discoveries of the (3) _____, that we cannot (4) _____ the Garden of Eden from our imagination and (5) _____ it is a blessing.

SubQuestion No : 24

Q.24 Select the most appropriate option to fill in blank number 4.

- Ans
- ☒ 1. pick
 - ☒ 2. halt
 - ☒ 3. include
 - ☒ 4. eradicate

Question ID : 26433058881
Status : Answered
Chosen Option : 4

Comprehension:

In the following passage, some words have been deleted. Read the passage carefully and select the most appropriate option to fill in each blank.

Even (1) _____ we find in our individual hearts, (2) _____ all the broadcast and telecast teachings of science and the discoveries of the (3) _____, that we cannot (4) _____ the Garden of Eden from our imagination and (5) _____ it is a blessing.

SubQuestion No : 25

Q.25 Select the most appropriate option to fill in blank number 5.

- Ans
- ☒ 1. perhaps
 - ☒ 2. may
 - ☒ 3. because
 - ☒ 4. if

Question ID : 26433058882
Status : Answered
Chosen Option : 1

Section : **Part-E- Computer Fundamentals**

Q.1 Facebook is a/an _____.

- Ans
- ☒ 1. Social network site
 - ☒ 2. Browser
 - ☒ 3. Search engine
 - ☒ 4. Internet service provider

Question ID : 26433095456
Status : Answered
Chosen Option : 1

Q.2 Choose the wrong option with respect to MS-Excel 2010.

- Ans
- ☒ 1. In MS-Excel 2010, we can save the file by using F12.
 - ☒ 2. In MS-Excel 2010, we can insert a table from insert tab.
 - ☒ 3. In MS-Excel 2010, we can insert comment to a cell.
 - ☒ 4. In MS-Excel 2010, to open a new blank file Ctrl+O is used.

Question ID : 26433095424
Status : Answered
Chosen Option : 4

Q.3 _____ tab in MS-Excel 2010 ribbon bar contains the most frequently used commands such as copying and pasting, sorting and filtering, formatting, etc.

- Ans ☒ 1. HOME
- ☐ 2. REVIEW
- ☐ 3. FORMULA
- ☐ 4. FILE

Question ID : 26433095448
Status : Answered
Chosen Option : 1

Q.4 Consider a formula =A3+B4 is typed in cell A5. If cell A5 is copied and pasted into cell E9, then what will be the formula in cell E9?

- Ans ☒ 1. =E7+F8
- ☐ 2. =E8+F7
- ☐ 3. =A3+B4
- ☐ 4. =B4+C5

Question ID : 26433095359
Status : Answered
Chosen Option : 3

Q.5 Which of the following is not a web mail provider?

- Ans ☐ 1. Outlook
- ☐ 2. Gmail
- ☐ 3. Yahoo
- ☒ 4. Baidu

Question ID : 26433095365
Status : Answered
Chosen Option : 4

Q.6 In an MS-Excel 2010 sheet, a cell with text overflow problem can be dealt with _____.

- Ans ☐ 1. Text Bumping
- ☐ 2. Text Aligining
- ☐ 3. Text Merging
- ☒ 4. Text Wrapping

Question ID : 26433095369
Status : Not Answered
Chosen Option : --

Q.7 Which of the following keyboard shortcuts is used to move through each of the open tabs going to the right in Chrome browser?

- Ans ☐ 1. Ctrl + N
- ☐ 2. Alt + N
- ☐ 3. Alt + Tab
- ☒ 4. Ctrl + Tab


Question ID : 26433095327
Status : Answered
Chosen Option : 4

Q.8 Which of the following keyboard shortcut keys can be used to insert a hyperlink in an MS-Word 2010 document?

- Ans  1. Ctrl + K
-  2. Alt + L
-  3. Ctrl + L
-  4. Alt + K

Question ID : 26433095353
Status : Not Answered
Chosen Option : --

Q.9 In MS-Excel 2010 ribbon, _____ is used for adding different objects in a worksheet such as images, charts, PivotTables, hyperlinks, special symbols, equations, headers and footers.

- Ans  1. DATA
-  2. FILE
-  3. FORMULA
-  4. INSERT

Question ID : 26433095408
Status : Answered
Chosen Option : 4

Q.10 _____ shortcut key is used in MS-Excel 2010 to select the entire worksheet.

- Ans  1. Shift+R
-  2. Ctrl+R
-  3. Ctrl+A
-  4. ALT+A

Question ID : 26433095482
Status : Answered
Chosen Option : 3