

# Head Constable Ministerial in Delhi Police Examination 2022

Roll Number	
Candidate Name	
Venue Name	iON Digital Zone iDZ 1 GT Karnal Road
Exam Date	14/10/2022
Exam Time	9:00 AM - 10:30 AM
Subject	Head Constable Ministerial in Delhi Police Examination 2022

Section : **Part-A-General Awareness**

**Q.1 When was NITI Aayog formed to replace the Planning Commission of India?**

- Ans ☒ 1. May 2014
- ☒ 2. April 2017
- ☒ 3. May 2015
- ☒ 4. January 2015

Question ID : **26433064509**  
Status : **Answered**  
Chosen Option : 4

**Q.2 The word 'budget' is derived from the word 'Bougette'. Bougette is a/an \_\_\_\_\_ word.**

- Ans ☒ 1. German
- ☒ 2. French
- ☒ 3. Spanish
- ☒ 4. Arabic

Question ID : **26433059231**  
Status : **Not Answered**  
Chosen Option : --

**Q.3 The Dhamek stupa is located in which of the following states of India?**

- Ans ☒ 1. Bihar
- ☒ 2. Madhya Pradesh
- ☒ 3. Uttar Pradesh
- ☒ 4. Punjab

Question ID : **26433064342**  
Status : **Not Answered**  
Chosen Option : --

**Q.4 Which of the following is a Fundamental Duty as listed in Article 51A of the Indian Constitution?**

- Ans ☒ 1. To promote international peace and security
- ☒ 2. To provide equal justice and free legal aid
- ☒ 3. To preserve and value the rich heritage of our composite culture
- ☒ 4. To promote cooperative societies

Question ID : **26433055177**  
Status : **Answered**  
Chosen Option : 1

Q.5 मकर संक्रांति, \_\_\_\_\_ को समर्पित एक त्योहार है।

- Ans
- ☒ 1. शनि ग्रह
  - ☒ 2. सूर्य
  - ☒ 3. तारों
  - ☒ 4. मंगल ग्रह

Question ID : 26433066544  
Status : Answered  
Chosen Option : 2

Q.6 As per the Union Budget 2022-23, 'one class, one TV' under the PM eVIDYA program is proposed to be expanded from 12 to \_\_\_\_\_ TV channels.

- Ans
- ☒ 1. 50
  - ☒ 2. 200
  - ☒ 3. 100
  - ☒ 4. 150

Question ID : 26433054822  
Status : Not Answered  
Chosen Option : --

Q.7 In December 2021, the EPFO has onboarded the employees of which of the following institutions under disinvestment?

- Ans
- ☒ 1. Central Electronics Ltd
  - ☒ 2. Allahabad Bank
  - ☒ 3. Air India
  - ☒ 4. PMC bank

Question ID : 26433055578  
Status : Answered  
Chosen Option : 3

Q.8 India's first indigenously developed quadrivalent Human Papilloma Virus (HPV) vaccine developed by Serum Institute of India in partnership with Department of Biotechnology was launched in September 2022 for the prevention of which type of cancer?

- Ans
- ☒ 1. Thyroid Cancer
  - ☒ 2. Ovarian Cancer
  - ☒ 3. Colon Cancer
  - ☒ 4. Cervical Cancer

Question ID : 26433095282  
Status : Not Answered  
Chosen Option : --

Q.9 In July 2022, where did the Ministry of life sciences successfully demonstrated 3 desalination plants based on the low temperature thermal desalination technology for conversion of sea water to potable water?

- Ans
- ☒ 1. Lakshadweep Islands
  - ☒ 2. Andaman Island
  - ☒ 3. Bhavani Island
  - ☒ 4. Nicobar Island

Question ID : 26433095281  
Status : Not Answered  
Chosen Option : --

Q.10 Who among the following later came to be known as Sher Shah Suri?

- Ans
- ☒ 1. Aadil
  - ☒ 2. Nasir
  - ☒ 3. Salim
  - ☒ 4. Farid

Question ID : 26433064605  
Status : Answered  
Chosen Option : 4

Q.11 Who among the following Viceroys of Portuguese India captured Goa in 1510?

- Ans
- ☒ 1. Afonso de Albuquerque
  - ☒ 2. Martim Alfonso de Sousa
  - ☒ 3. D Francisco de Almeida
  - ☒ 4. D Estevao da Gama

Question ID : 26433065545  
Status : Answered  
Chosen Option : 1

Q.12 In which year did the Suresh Tendulkar Committee submit its report?

- Ans
- ☒ 1. 2008
  - ☒ 2. 2010
  - ☒ 3. 2007
  - ☒ 4. 2009

Question ID : 26433054997  
Status : Not Answered  
Chosen Option : --

Q.13 In September 2021, which of the following State Governments have launched T-FACE (Fabless Accelerator through Cloud Enablement), a virtual incubation platform for supporting start-ups in the very large-scale integration (VLSI) and fabless chip designing?

- Ans
- ☒ 1. Karnataka
  - ☒ 2. Telangana
  - ☒ 3. Tamil Nadu
  - ☒ 4. Andhra Pradesh

Question ID : 26433055559  
Status : Not Answered  
Chosen Option : --

Q.14 Under the amended RBI Act, the Monetary Policy Committee should meet how many times in a year, at the minimum?

- Ans
- ☒ 1. Four times
  - ☒ 2. Six times
  - ☒ 3. Thrice
  - ☒ 4. Twice

Question ID : 26433059248  
Status : Answered  
Chosen Option : 1

Q.15 Who among the following was the Guru of Swami Vivekananda?

- Ans ☒ 1. Ramakrishna Paramahansa  
☐ 2. Mahavdev Govind Ranade  
☐ 3. Dayanand Saraswati  
☐ 4. Bal Shastri Jambhekar

Question ID : 26433055648  
Status : Answered  
Chosen Option : 1

Q.16 In 2021, the world's largest cricket stadium, Narendra Modi Stadium in Ahmedabad hosted its first international match as India played \_\_\_\_\_ in the third Test.

- Ans ☐ 1. South Africa  
☐ 2. Australia  
☐ 3. New Zealand  
☒ 4. England

Question ID : 26433061816  
Status : Answered  
Chosen Option : 1

Q.17 Which state in India has the highest percent share of maize production to that of all India (million tonnes) in 2020-21?

- Ans ☐ 1. Gujarat  
☐ 2. Himachal Pradesh  
☒ 3. Karnataka  
☐ 4. Maharashtra

Question ID : 26433067171  
Status : Answered  
Chosen Option : 4

Q.18 In which year was the Rangarajan committee formed to focus on poverty estimation activities in India?

- Ans ☐ 1. 2010  
☒ 2. 2012  
☐ 3. 2011  
☐ 4. 2008

Question ID : 26433081929  
Status : Not Answered  
Chosen Option : --

Q.19 Yamini Reddy, daughter of Raja Radha Reddy and Kaushalya Reddy is a \_\_\_\_\_ dancer.

- Ans ☐ 1. Manipuri  
☒ 2. Kuchipudi  
☐ 3. Bharatanatyam  
☐ 4. Kathak

Question ID : 26433064312  
Status : Answered  
Chosen Option : 3

Q.20 The Ganga, the Brahmaputra and their tributaries contribute in the formation of the Sundarban Delta. Which group of rivers do NOT contribute in the formation of the delta?

- Ans
- ☐ 1. Yamuna and Ghaghara
  - ☐ 2. Chambal and Betwa
  - ☐ 3. Gandak and Kosi
  - ☒ 4. Narmada and Tapi

Question ID : 26433055658  
Status : Answered  
Chosen Option : 4

Section : Part-B-Quantitative Aptitude

Q.1 What is the principal value of the amount of Rs.9,261 payable in 3 years at the rate of 5% compound annual interest?

- Ans
- ☐ 1. Rs.8,739
  - ☐ 2. Rs.9,739
  - ☒ 3. Rs.8,000
  - ☐ 4. Rs.9,000

Question ID : 26433056327  
Status : Answered  
Chosen Option : 3

Q.2 The simplified form of  $\frac{1}{6} + \frac{1}{12} + \frac{1}{20} + \frac{1}{30}$  is:

- Ans
- ☐ 1.  $\frac{1}{4}$
  - ☒ 2.  $\frac{1}{3}$
  - ☐ 3.  $\frac{1}{2}$
  - ☐ 4.  $\frac{1}{5}$

Question ID : 26433063366  
Status : Answered  
Chosen Option : 2

Q.3 The parallel sides of an isosceles trapezium are 20 cm and 34 cm. If the one of the non-parallel sides has length 25 cm, what is the area (in  $\text{cm}^2$ ) of the trapezium?

- Ans
- ☐ 1. 729
  - ☐ 2. 675
  - ☒ 3. 648
  - ☐ 4. 596

Question ID : 26433061916  
Status : Answered  
Chosen Option : 3

Q.4 Two circles touches each other externally at any point X. AB is the simple common tangent to both the circles touching the circles at point A and point B. If the radii of the circles are 16 cm and 4 cm, respectively, then the length of AB is:

- Ans ☒ 1. 16 cm  
☒ 2. 64 cm  
☒ 3. 256 cm  
☒ 4. 8 cm

Question ID : 26433062667  
Status : Not Answered  
Chosen Option : --

Q.5 The product of the two numbers is 800 and their HCF is 20. Find the LCM of the numbers.

- Ans ☒ 1. 4.0  
☒ 2. 50  
☒ 3. 30  
☒ 4. 40

Question ID : 26433063438  
Status : Answered  
Chosen Option : 4

Q.6 The square of the third proportional of 36 and 12 is \_\_\_\_\_.

- Ans ☒ 1. 3  
☒ 2. 16  
☒ 3. 4  
☒ 4. 12

Question ID : 26433061616  
Status : Answered  
Chosen Option : 2

Q.7 If  $\left(3x^2 + \frac{1}{2x^2}\right) = 2.5$ , what is the value of  $\left(27x^6 + \frac{1}{8x^6}\right)$ ?

- Ans ☒ 1. 5.125  
☒ 2. 6.275  
☒ 3. 3.325  
☒ 4. 4.375

Question ID : 26433061949  
Status : Answered  
Chosen Option : 3

Q.8 A solid sphere is cut through its centre into two equal parts. What is the total surface area of each part, if the radius of the sphere is 7 cm?

- Ans ☒ 1.  $154 \text{ cm}^2$   
☒ 2.  $231 \text{ cm}^2$   
☒ 3.  $462 \text{ cm}^2$   
☒ 4.  $308 \text{ cm}^2$

Question ID : 26433058158  
Status : Answered  
Chosen Option : 3

Q.9 A shopkeeper sold an electric fan for Rs.1,800 and gained a profit of Rs.200 at 10% discount. What would have been his profit if no discount had been given?

- Ans
- ☒ 1.  $22\frac{2}{9}\%$
  - ☒ 2. 27%
  - ☒ 3. 25%
  - ☒ 4. 20%

Question ID : 26433073108  
Status : Answered  
Chosen Option : 3

Q.10 In class 12, R has two language subjects and three science subjects. His average marks in the language subjects are 65 and his overall average marks are 72. What are his average marks in the science subjects?

- Ans
- ☒ 1. 82.5
  - ☒ 2. 76.67
  - ☒ 3. 77.67
  - ☒ 4. 79

Question ID : 26433071242  
Status : Answered  
Chosen Option : 2

Q.11 3 men and 8 women can complete a work in  $\frac{75}{8}$  days, while 9 men and 12 women can complete it in  $\frac{25}{7}$  days. In how many days will 15 women complete it?

- Ans
- ☒ 1. 18
  - ☒ 2. 24
  - ☒ 3. 20
  - ☒ 4. 22

Question ID : 26433056338  
Status : Answered  
Chosen Option : 3

Q.12 साधारण ब्याज की 4% वार्षिक दर से दो समान छमाही किश्तों में देय Rs.2,652 का वर्तमान मूल्य क्या होगा?

- Ans
- ☒ 1. Rs.2,575
  - ☒ 2. Rs.2,435
  - ☒ 3. Rs.2,875
  - ☒ 4. Rs.2,654

Question ID : 26433061385  
Status : Marked For Review  
Chosen Option : 1

Q.13 Evaluate the following expression in terms of trigonometric ratios.

$$\frac{\cot^2 A (\sec A - 1)}{1 + \sin A}$$

Ans

✗ 1.  $\frac{\cot^2 A (1 - \sin A)}{(1 - \sec A)}$

✗ 2.  $\frac{\cot^2 A (1 + \sin A)}{(1 - \sec A)}$

✓ 3.  $\frac{\sec^2 A (1 - \sin A)}{(1 + \sec A)}$

✗ 4.  $\frac{\sec^2 A (1 + \sin A)}{(1 - \sec A)}$

Question ID : 26433061934

Status : Answered

Chosen Option : 4

Q.14

The value of  $\frac{x^2 + 8x + 16}{2x - 2} \times \frac{x^2 - 1}{x^2 + 5x + 4}$ , when  $x = 2022$  is \_\_\_\_\_.

Ans ✗ 1. 1011

✓ 2. 1013

✗ 3. 1012

✗ 4. 1000

Question ID : 26433061341

Status : Answered

Chosen Option : 2

Q.15 The given table shows the production of four types of bikes by a company from the year 2011 to 2015. Study the table and answer the following question.

Year/Type	2011	2012	2013	2014	2015
A	1032	1400	789	1478	545
B	1235	1521	938	1196	654
C	1152	1356	852	1350	210
D	1045	1589	951	1100	112

Which type of bike has the minimum production in the year 2015?

Ans ✓ 1. Type-D

✗ 2. Type-C

✗ 3. Type-A

✗ 4. Type-B

Question ID : 26433073096

Status : Answered

Chosen Option : 1



Q.16 A dealer cheats by 15% at purchasing and 10% at selling. What per cent profit does he gain?

- Ans ☒ 1. 27.5% profit  
☒ 2. 26% profit  
☒ 3. 26.5% profit  
☒ 4. 25% profit

Question ID : 26433063453  
Status : Answered  
Chosen Option : 3

Q.17 A man spends 78% of his monthly income and saves Rs.1,100. What is his monthly income?

- Ans ☒ 1. Rs.11,000  
☒ 2. Rs.5,000  
☒ 3. Rs.78,000  
☒ 4. Rs.7,800

Question ID : 26433058120  
Status : Answered  
Chosen Option : 2

Q.18 Rupa sells a computer to Shilpa at 20% loss. Shilpa sells it to Neelima at 20% profit. If Neelima pays Rs.24,000 for it, then how much did Rupa pay for it?

- Ans ☒ 1. Rs.30,000  
☒ 2. Rs.25,000  
☒ 3. Rs.35,000  
☒ 4. Rs.20,000

Question ID : 26433058404  
Status : Answered  
Chosen Option : 2

Q.19 Amit and Beenu can cover a 400 m race in 44 seconds and 50 seconds, respectively. When Amit finished the race, then Beenu is at what distance from the finishing line?

- Ans ☒ 1. 50 m  
☒ 2. 52 m  
☒ 3. 48 m  
☒ 4. 45 m

Question ID : 26433061276  
Status : Answered  
Chosen Option : 3

Q.20 A is twice as good a workman as B, and together they finish a work in 14 days. In how many days can the work be done by each separately?

- Ans ☒ 1. A = 21, B = 42  
☒ 2. A = 42, B = 21  
☒ 3. A = 26, B = 52  
☒ 4. A = 52, B = 26

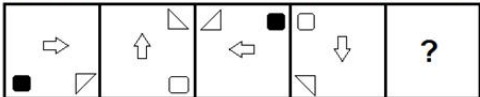
Question ID : 26433063896  
Status : Answered  
Chosen Option : 3

Q.1 Which two signs should be interchanged to make the given equation correct?  
 $160 - 32 \times 3 + 26 \div 17 = 24$

- Ans
- ☒ 1. - and +
  - ☒ 2.  $\times$  and -
  - ☒ 3. + and  $\times$
  - ☒ 4.  $\div$  and -

Question ID : 26433056847  
Status : Answered  
Chosen Option : 4

Q.2 Select the figure from among the given options that can replace the question mark (?) in the following series.

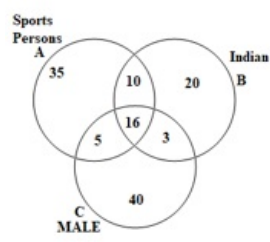


Ans

- ☒ 1.
- ☒ 2.
- ☒ 3.
- ☒ 4.

Question ID : 26433055951  
Status : Answered  
Chosen Option : 4

Q.3 Study the given diagram carefully and answer the question. The numbers in different sections indicate the number of persons.



How many Indians are there in total?

- Ans
- ☒ 1. 46
  - ☒ 2. 49
  - ☒ 3. 33
  - ☒ 4. 20

@Qmaths

Question ID : 26433069672

Status : Answered

Chosen Option : 2

Q.4 Select the option that is related to the fifth letter-cluster in the same way as the second letter-cluster is related to the first letter-cluster and the fourth letter-cluster is related to the third letter-cluster.  
JOB : RMZ :: TOM : HMO :: NOT : ?

- Ans
- ☒ 1. NMH
  - ☒ 2. NNH
  - ☒ 3. MMH
  - ☒ 4. NMG

Question ID : 26433056667

Status : Answered

Chosen Option : 1

Q.5 Which letter cluster will replace the question mark (?) to complete the given series?  
ABCD, BCDE, ?, DEFG, EFGH

- Ans
- ☒ 1. CDEF
  - ☒ 2. CBGH
  - ☒ 3. CDFE
  - ☒ 4. CBDE

Question ID : 26433065584

Status : Answered

Chosen Option : 1

Q.6 Select the option that is related to the fifth letter cluster in the same way as the second letter cluster is related to the first letter cluster and the fourth letter cluster is related to the third letter cluster.  
NRPAT : CKETI :: HENTO : WXCMD :: PODSA : ?

- Ans
- ☒ 1. EPSHE
  - ☒ 2. HSPLE
  - ☒ 3. EHSLP
  - ☒ 4. HSECH





Question ID : 26433074706

Status : Answered

Chosen Option : 3

Q.7 'A ÷ B' means 'A is the father of B'.  
'A \* B' means 'A is the brother of B'.  
'A + B' means 'A is the mother of B'.  
'A - B' means 'A is the sister of B'.

If  $P + Q + R - S \div T * U$ , the how is T related to Q?

- Ans  1. Brother  
 2. Brother's son  
 3. Son's son  
 4. Son

Question ID : 26433056416  
Status : Answered  
Chosen Option : 3



Q.8 Which option represents the correct order of the given words as they would appear in an English dictionary?

- 1 Sovereignty
- 2 Sociability
- 3 Socialistic
- 4 Soteriology
- 5 Southeaster

- Ans  1. 5, 2, 3, 1, 4  
 2. 5, 2, 4, 1, 3  
 3. 5, 2, 1, 3, 4  
 4. 2, 3, 4, 5, 1





Question ID : 26433085333  
Status : Answered  
Chosen Option : 4

Q.9 Based on the position in the English alphabetical order, three of the following letter-clusters are alike in some manner and one is different. Select the odd letter-cluster.

- Ans  1. SUZY  
 2. MPUT  
 3. PRVV  
 4. QSWX

Question ID : 26433095720  
Status : Answered  
Chosen Option : 2

Q.10 In a certain code language, 'ALLOW' is written as 'YSNPC' and 'UNION' is written as 'PSKRW'. How will 'VOICE' be written in that language?

- Ans  1. SXGKG  
 2. XSKGG  
 3. GKGYS  
 4. GSKSX

Question ID : 26433057270  
Status : Answered  
Chosen Option : 4

Q.11 Select the set in which the numbers are related in the same way as are the numbers of the following set.

(NOTE: Operations should be performed on the whole numbers, without breaking down the numbers into its constituent digits. E.g., 13 – Operations on 13 such as adding /deleting /multiplying etc. to 13 can be performed. Breaking down 13 into 1 and 3 and then performing mathematical operations on 1 and 3 is NOT allowed).

(68, 15, 204)

(20, 67, 268)

Ans ☒ 1. (38, 72, 385)

☒ 2. (41, 75, 515)

☒ 3. (65, 27, 351)

☒ 4. (54, 89, 438)

Question ID : 26433074772

Status : Not Answered

Chosen Option : --

Q.12 Which of the following numbers will replace the question mark (?) in the given series?

2, 6, 17, 53, 156, ?

Ans ☒ 1. 493

☒ 2. 466

☒ 3. 472

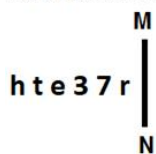
☒ 4. 480

Question ID : 26433057555

Status : Answered

Chosen Option : 3

Q.13 Select the correct mirror image of the given figure when the mirror is placed at MN as shown below.



Ans ☒ 1. r 7 3 e t h

☒ 2. l 7 3 e t h

☒ 3. r 7 3 e t h

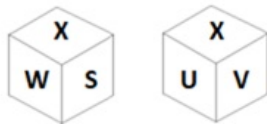
☒ 4. r 7 3 e t h

Question ID : 26433056985

Status : Answered

Chosen Option : 3

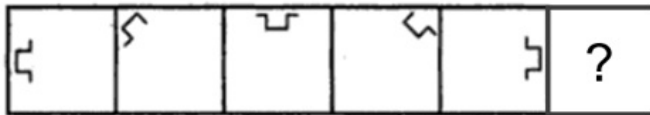
**Q.14** Six letters S, T, U, V, W and X are written on different faces of a dice. Two positions of this dice are shown in the given figures. Find the letter on the face opposite to W.



- Ans
- ☒ 1. V
  - ☒ 2. U
  - ☒ 3. X
  - ☒ 4. S

Question ID : 26433067532  
Status : Answered  
Chosen Option : 2

**Q.15** Select the figure from among the given options that can replace the question mark (?) in the following series.



- Ans
- ☒ 1.
  - ☒ 2.
  - ☒ 3.
  - ☒ 4.

Question ID : 26433080528  
Status : Marked For Review  
Chosen Option : 2

Q.16 A, B, C, D, E, F, G and H are sitting around a square table facing the centre of the table. Some of them are sitting at the corners, while some are sitting at the exact centre of the sides.  
A sits at the centre of one of the sides. B sits second to the right of A. Only three people sit between B and C. F is neither an immediate neighbour of C nor B. E sits third to the right of F. G is an immediate neighbour of A. H sits second to the right of D. Who sits third to the left of G?

- Ans ☒ 1. C  
☒ 2. H  
☒ 3. B  
☒ 4. D

Question ID : 26433058024  
Status : Answered  
Chosen Option : 1

Q.17 Eight people are sitting in two parallel rows containing four people each in such a way that there is equal distance between adjacent persons. In the first row, J, K, L and M are seated and all of them are facing the south. In the second row, E, F, G and H are seated and all of them are facing the north. Thus, each person faces another person from the other row. G is sitting third to the left of E. The one facing H is sitting to the immediate right of J. K is sitting third to the right of J. L is sitting in front of F, Who amongst the following faces E?

- Ans ☒ 1. L  
☒ 2. M  
☒ 3. K  
☒ 4. J

Question ID : 26433080712  
Status : Answered  
Chosen Option : 4

Q.18 Which two groups of numbers should be interchanged to balance the given equation?  
 $284 \div 6 + 144 \times 4 - 326 \div 163 \times 125 = 27 \times 25 + 30 \times 4$

- Ans ☒ 1. (284 and 326), and (6 and 4)  
☒ 2. (6 and 4), and (27 and 30)  
☒ 3. (284 and 144), and (25 and 30)  
☒ 4. (284 and 144), and (25 and 4)

Question ID : 26433056528  
Status : Answered  
Chosen Option : 4

Q.19 Three statements are given, followed by three conclusions numbered I, II and III. Assuming the statements to be true, even if they seem to be at variance with commonly known facts, decide which of the conclusions logically follow(s) from the statements.  
Statements:  
All buses are trucks.  
All motorbikes are trucks.  
All cars are trucks.  
Conclusions:  
I. Some trucks are motorbikes.  
II. Some cars are motorbikes.  
III. Some trucks are buses.

- Ans ☒ 1. Only conclusions II and III follow  
☒ 2. Only conclusions I and II follow  
☒ 3. Only conclusions I and III follow  
☒ 4. All the conclusions follow

Question ID : 26433076533  
Status : Answered  
Chosen Option : 3

Q.20 In a certain code language, 'THINK' is written as '208181411' and 'DECIDE' is written as '410318410'.How will 'IMPLEMENT' be written in that language?

- Ans ☒ 1. 91316121351420
- ☒ 2. 181316121013101420
- ☒ 3. 1813161213101420
- ☒ 4. 913161251351420

Question ID : 26433065604  
Status : Answered  
Chosen Option : 4

Q.21 Select the combination of letters that when sequentially placed in the blanks of the given series, will complete the series.  
TG\_WUGR\_VGR\_W\_RW

- Ans ☒ 1. RWWG
- ☒ 2. VRGW
- ☒ 3. WRVG
- ☒ 4. RWVG

Question ID : 26433057813  
Status : Answered  
Chosen Option : 1

Q.22 A % B means 'A is the son of B'.  
A # B means 'A is the daughter of B'.  
A & B means 'A is the brother of B'.  
A @ B means 'A is the sister of B'.

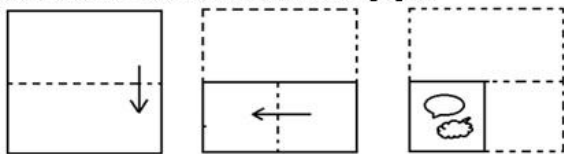
If W @ Q % R & S & T, then how is W related to T?

- Ans ☒ 1. Mother
- ☒ 2. Son's son
- ☒ 3. Brother's daughter
- ☒ 4. Aunt

Question ID : 26433067508  
Status : Answered  
Chosen Option : 3




**Q.23** The sequence of folding a piece of paper and the manner in which the folded paper has been cut is shown below. Choose the figure that would most closely resemble the unfolded form of the paper.




Ans

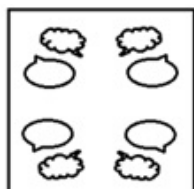
✗ 1.



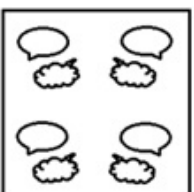
✗ 2.



✓ 3.



✗ 4.



Question ID : 26433067447

Status : Answered

Chosen Option : 3

**Q.24** Select the option that is related to the third term in the same way as the second term is related to the first term and the sixth term is related to the fifth term.

$$\left[\frac{1}{54}\right] : \left[\frac{1}{67}\right] :: \left[\frac{1}{68}\right] : ? :: \left[\frac{1}{46}\right] : \left[\frac{1}{59}\right]$$

Ans

✗ 1.

$$\left[\frac{1}{85}\right]$$

✗ 2.

$$\left[\frac{1}{77}\right]$$

✗ 3.

$$\left[\frac{1}{83}\right]$$

✓ 4.

$$\left[\frac{1}{81}\right]$$

Question ID : 26433057565

Status : Answered

Chosen Option : 4

**Q.25** Select the numbers from among the given options that can replace the question marks (?) in the following series.  
69, 73, 67, 75, ?, ?, 63, 79, 61

- Ans
- ☒ 1. 65, 79
  - ☒ 2. 65, 76
  - ☒ 3. 60, 75
  - ☒ 4. 65, 77

Question ID : 26433057048  
Status : Answered  
Chosen Option : 4

Section : Part-D- English Language

**Q.1** Select the most appropriate synonym of the highlighted word in the following sentence.

Mary's apathy towards studies is a matter of concern for her parents.

- Ans
- ☒ 1. Disgrace
  - ☒ 2. Disappointment
  - ☒ 3. Dishonesty
  - ☒ 4. Disinterest

Question ID : 26433065214  
Status : Answered  
Chosen Option : 4

**Q.2** Select the most appropriate option to fill in the blank.

Due to their recent illness, they have become\_\_\_\_\_.

- Ans
- ☒ 1. wink
  - ☒ 2. wick
  - ☒ 3. week
  - ☒ 4. weak

Question ID : 26433058304  
Status : Answered  
Chosen Option : 4

**Q.3** The following sentence has been divided into parts. One of them may contain an error. Select the part that contains the error from the given options. If you don't find any error, mark 'No error' as your answer.

Try whatever you want, / but you should never / get the job unless I allow it.

- Ans
- ☒ 1. get the job unless I allow it
  - ☒ 2. Try whatever you want
  - ☒ 3. No error
  - ☒ 4. but you should never

Question ID : 26433059065  
Status : Answered  
Chosen Option : 1

Q.4 Select the most appropriate homonym to fill in the blank.

A huge\_\_\_\_\_will be erected outdoors for the birthday celebrations.

- Ans ☒ 1. tenth
- ☒ 2. tent
- ☒ 3. dent
- ☒ 4. tend

Question ID : 26433058376  
Status : Answered  
Chosen Option : 2

Q.5 Select the most appropriate option to fill in the blank.

I began to think of my duty. Should I fight for my rights or go back \_\_\_\_\_ India?

- Ans ☒ 1. on
- ☒ 2. to
- ☒ 3. with
- ☒ 4. for

Question ID : 26433063550  
Status : Answered  
Chosen Option : 2

Q.6 Select the most appropriate option to fill in the blank.

A sanctuary can be\_\_\_\_\_ as a place where humans are passive and the rest of nature is dynamic and vibrant.

- Ans ☒ 1. demonstrated
- ☒ 2. envisioned
- ☒ 3. considered
- ☒ 4. used

Question ID : 26433070602  
Status : Answered  
Chosen Option : 3

Q.7 Select the most appropriate meaning of the given idiom.

Play devil's advocate

- Ans ☒ 1. To argue the opposite, just for the sake of argument
- ☒ 2. Influenced by the devil
- ☒ 3. Arguing in favour of the right
- ☒ 4. A good advocate

Question ID : 26433066129  
Status : Answered  
Chosen Option : 1

**Q.8** Parts of a sentence are given below in jumbled order. Arrange the parts in the correct order to form a meaningful sentence.

A good / the best / of a man / book / is / friend

- Ans ☒ 1. A good book friend is the best of a man.  
☒ 2. Friend is the best a good book of a man.  
☒ 3. A good book is the best friend of a man.  
☒ 4. The best of a man is a good friend book.

Question ID : 26433059608  
Status : Answered  
Chosen Option : 3

**Q.9** Select the INCORRECTLY spelt word.

- Ans ☒ 1. Pungent  
☒ 2. Smelly  
☒ 3. Aerosal  
☒ 4. Carbonated

Question ID : 26433055469  
Status : Not Answered  
Chosen Option : --

**Q.10** Sentences of a paragraph are given below in jumbled order. Arrange the sentences in the correct order to form a meaningful and coherent paragraph.

- A.It is very difficult to find a true and honest politician who works for the welfare of the people in the current era.  
B.As this is a service-oriented profession and those who want to make money should not enter politics.  
C.These political leaders should study the lives of true democratic leaders who left the world without possessing even a single bedroom house after holding high offices.  
D.Politics has become a profit yielding business and some millionaires are entering politics for making more and more money.

- Ans ☒ 1. CADB  
☒ 2. BCDA  
☒ 3. ACBD  
☒ 4. ABCD

Question ID : 26433072579  
Status : Answered  
Chosen Option : 1

**Q.11** Select the option that can be used as a one-word substitute for the given group of words.

A soldier who fights for the sake of money

- Ans ☒ 1. Marine  
☒ 2. Mercenary  
☒ 3. Nationalist  
☒ 4. Patriot

Question ID : 26433060786  
Status : Answered  
Chosen Option : 2

Q.12 Select the most appropriate synonym of the given word.

Peevish

- Ans ☒ 1. Shy  
☒ 2. Sleepy  
☒ 3. Mild tempered  
☒ 4. Bad tempered

Question ID : 26433055857  
Status : Not Answered  
Chosen Option : --

Q.13 Select the most appropriate synonym of the given word.

Comely

- Ans ☒ 1. Prudent  
☒ 2. Cruel  
☒ 3. Nosey  
☒ 4. Pretty

Question ID : 26433058324  
Status : Not Answered  
Chosen Option : --

Q.14 Select the most appropriate synonym of the underlined word in the given sentence.  
They fought a courageous battle.

- Ans ☒ 1. valiant  
☒ 2. timid  
☒ 3. encourage  
☒ 4. cowardly

Question ID : 26433055506  
Status : Marked For Review  
Chosen Option : 1

Q.15 Select the most appropriate option to substitute the underlined segment in the given sentence.

It's a fact that we need to preserve various plants and animals for sustaining the balance of ecosystem on this planet.

- Ans ☒ 1. species  
☒ 2. natural elements  
☒ 3. flora and fauna  
☒ 4. non-human beings

Question ID : 26433066413  
Status : Answered  
Chosen Option : 3

Q.16 Select the INCORRECTLY spelt word

- Ans ☒ 1. Humongous  
☒ 2. Sacriledge  
☒ 3. Acrimonious  
☒ 4. Reservoir

Question ID : 26433055865  
Status : Answered  
Chosen Option : 4

Q.17 The following sentence has been divided into parts. One of them may contain an error. Select the part that contains the error from the given options. If you don't find any error, mark 'No error' as your answer.

Myself baked / this cake / today.

- Ans ☒ 1. this cake  
☒ 2. No error  
☒ 3. Myself baked  
☒ 4. today

Question ID : 26433061480  
Status : Answered  
Chosen Option : 3

Q.18 In the following questions a statement has been given with highlighted text. Select the options that can replace the text with correct idiom or phrase. He is facing the consequences of his corrupt practices.

- Ans ☒ 1. Beat around the bush  
☒ 2. Facing the music  
☒ 3. Your guess is as good as mine  
☒ 4. Break new ground

Question ID : 26433058301  
Status : Answered  
Chosen Option : 2

Q.19 Select the most appropriate option that can substitute the underlined segment in the given sentence. If there is no need to substitute it, select 'No substitution required'.

Swami is looking forward to go back to college.

- Ans ☒ 1. for going back to college  
☒ 2. to going back to college  
☒ 3. No substitution required  
☒ 4. going back to college

Question ID : 26433063628  
Status : Answered  
Chosen Option : 3

Q.20 Select the option that can be used as a one-word substitute for the given group of words.

Fill up again

- Ans ☒ 1. Replenish  
☒ 2. Repot  
☒ 3. Reprehend  
☒ 4. Repine

Question ID : 26433060497  
Status : Answered  
Chosen Option : 3

**Comprehension:**

In the following passage, some words have been deleted. Read the passage carefully and select the most appropriate option to fill in each blank.

With Siya's next step she was standing (1) \_\_\_\_\_ a lake, and the candlelight shone brightly on the water. She was walking through the mountains, (2) \_\_\_\_\_ lonely crags, where the candlelight was reflected in the eyes of the creatures of the high snows. She (3) \_\_\_\_\_ a chariot being pulled. She could hear the (4) \_\_\_\_\_ of water as it splashed and sang its way into a small (5) \_\_\_\_\_.

**SubQuestion No : 21**

**Q.21** Select the most appropriate option to fill in blank number 1.

- Ans  1. before  
 2. at  
 3. along  
 4. by

Question ID : 26433058842  
Status : Answered  
Chosen Option : 4





**Comprehension:**

In the following passage, some words have been deleted. Read the passage carefully and select the most appropriate option to fill in each blank.

With Siya's next step she was standing (1) \_\_\_\_\_ a lake, and the candlelight shone brightly on the water. She was walking through the mountains, (2) \_\_\_\_\_ lonely crags, where the candlelight was reflected in the eyes of the creatures of the high snows. She (3) \_\_\_\_\_ a chariot being pulled. She could hear the (4) \_\_\_\_\_ of water as it splashed and sang its way into a small (5) \_\_\_\_\_.

**SubQuestion No : 22**

**Q.22** Select the most appropriate option to fill in blank number 2.

- Ans  1. into  
 2. upon  
 3. on  
 4. through

Question ID : 26433058843  
Status : Answered  
Chosen Option : 4





**Comprehension:**

In the following passage, some words have been deleted. Read the passage carefully and select the most appropriate option to fill in each blank.

With Siya's next step she was standing (1) \_\_\_\_\_ a lake, and the candlelight shone brightly on the water. She was walking through the mountains, (2) \_\_\_\_\_ lonely crags, where the candlelight was reflected in the eyes of the creatures of the high snows. She (3) \_\_\_\_\_ a chariot being pulled. She could hear the (4) \_\_\_\_\_ of water as it splashed and sang its way into a small (5) \_\_\_\_\_.

**SubQuestion No : 23**

**Q.23** Select the most appropriate option to fill in blank number 3.

- Ans  1. grimaced  
 2. piqued  
 3. ogled  
 4. glimpsed

Question ID : 26433058844  
Status : Not Answered  
Chosen Option : --

**Comprehension:**

In the following passage, some words have been deleted. Read the passage carefully and select the most appropriate option to fill in each blank.

With Siya's next step she was standing (1) \_\_\_\_\_ a lake, and the candlelight shone brightly on the water. She was walking through the mountains, (2) \_\_\_\_\_ lonely crags, where the candlelight was reflected in the eyes of the creatures of the high snows. She (3) \_\_\_\_\_ a chariot being pulled. She could hear the (4) \_\_\_\_\_ of water as it splashed and sang its way into a small (5) \_\_\_\_\_.

**SubQuestion No : 24**

**Q.24** Select the most appropriate option to fill in blank number 4.

- Ans  1. scream
-  2. whimper
-  3. chuckle
-  4. gust

Question ID : 26433058845  
Status : Answered  
Chosen Option : 4

**Comprehension:**

In the following passage, some words have been deleted. Read the passage carefully and select the most appropriate option to fill in each blank.

With Siya's next step she was standing (1) \_\_\_\_\_ a lake, and the candlelight shone brightly on the water. She was walking through the mountains, (2) \_\_\_\_\_ lonely crags, where the candlelight was reflected in the eyes of the creatures of the high snows. She (3) \_\_\_\_\_ a chariot being pulled. She could hear the (4) \_\_\_\_\_ of water as it splashed and sang its way into a small (5) \_\_\_\_\_.

**SubQuestion No : 25**


**Q.25** Select the most appropriate option to fill in blank number 5.

- Ans  1. utensil
-  2. well
-  3. brook
-  4. cauldron

Question ID : 26433058846  
Status : Answered  
Chosen Option : 4

Section : **Part-E- Computer Fundamentals**

**Q.1** Which of the following is not a function in MS-Excel 2010?

- Ans  1. Max()
-  2. Sum()
-  3. Average()
-  4. Avg()

Question ID : 26433095500  
Status : Answered  
Chosen Option : 4



**Q.2** In MS-Word 2010, the keyboard shortcut Ctrl + X is used to \_\_\_\_\_.

- Ans
- ☒ 1. bold the highlighted selection
  - ☒ 2. cut the selected items to the clipboard
  - ☒ 3. select all the text
  - ☒ 4. open the options

Question ID : **26433095302**  
Status : **Answered**  
Chosen Option : **2**

**Q.3** Which of the following keyboard shortcuts can be used to show or hide the Bookmarks bar in Google Chrome?

- Ans
- ☒ 1. Alt + Ctrl + K
  - ☒ 2. Ctrl + Shift + C
  - ☒ 3. Ctrl + Shift + K
  - ☒ 4. Ctrl + Shift + B

Question ID : **26433095297**  
Status : **Answered**  
Chosen Option : **3**

**Q.4** In MS-Excel 2010, \_\_\_\_\_ operation is used on data tables for displaying only the rows that meet certain conditions and the other rows gets hidden.

- Ans
- ☒ 1. CHART
  - ☒ 2. SORT
  - ☒ 3. TABLE
  - ☒ 4. FILTER

Question ID : **26433095451**  
Status : **Answered**  
Chosen Option : **4**

**Q.5** In MS-Excel 2010 \_\_\_\_\_ is used in finding text within the sheet.

- Ans
- ☒ 1. Ctrl+F
  - ☒ 2. Alt+R
  - ☒ 3. Ctrl+T
  - ☒ 4. Alt+F

Question ID : **26433095453**  
Status : **Answered**  
Chosen Option : **1**

**Q.6** In Gmail, what do you use when you receive a message and want to send the message to someone not on the To or Cc lines?

- Ans
- ☒ 1. Show original
  - ☒ 2. Report Spam
  - ☒ 3. Forward
  - ☒ 4. Print

Question ID : **26433095545**  
Status : **Answered**  
Chosen Option : **3**

**Q.7** Internet Explorer is a web browsing software developed in the year 1995 by \_\_\_\_\_.

- Ans ☒ 1. Microsoft  
☐ 2. Google  
☐ 3. Mozilla  
☐ 4. Yahoo

Question ID : **26433095436**  
Status : **Answered**  
Chosen Option : 1

**Q.8** The arrangement of data in rows and columns in MS-Word 2010 is called a \_\_\_\_\_.

- Ans ☐ 1. Cell  
☐ 2. Column  
☒ 3. table  
☐ 4. row

Question ID : **26433095361**  
Status : **Answered**  
Chosen Option : 1

**Q.9** Which of the following keyboard shortcut key in MS-Word 2010 is used to change the paragraph spacing to 1.5-line spacing?

- Ans ☐ 1. Ctrl + 3  
☐ 2. Ctrl + 2  
☒ 3. Ctrl + 5  
☐ 4. Ctrl + 1

Question ID : **26433095294**  
Status : **Not Answered**  
Chosen Option : --

**Q.10** \_\_\_\_\_ shortcut key is used in MS- Excel 2010 to go to the data tab.

- Ans ☐ 1. ALT+N  
☐ 2. ALT+F  
☐ 3. ALT+I  
☒ 4. ALT+A

Question ID : **26433095412**  
Status : **Not Answered**  
Chosen Option : --