

Head Constable Ministerial in Delhi Police Examination 2022

Roll Number	
Candidate Name	
Venue Name	
Exam Date	13/10/2022
Exam Time	5:00 PM - 6:30 PM
Subject	Head Constable Ministerial in Delhi Police Examination 2022

Section : **Part-A-General Awareness**

Q.1 'Karagam' is a folk dance of which of the following states of India?

- Ans  1. Odisha
-  2. Assam
-  3. Rajasthan
-  4. Tamil Nadu





Question ID : **26433064295**
Status : **Not Answered**
Chosen Option : --

Q.2 The largest number of MPs in the seventeenth Lok Sabha are from which of the following states of India?

- Ans  1. Uttar Pradesh
-  2. Madhya Pradesh
-  3. Odisha
-  4. Rajasthan

Question ID : **26433061820**
Status : **Not Answered**
Chosen Option : --

Q.3 According to PLFS, a person is considered unemployed if he/she does not even work for _____.

- Ans  1. 24 hours on any day during the week
-  2. 1 hour on any day during the week
-  3. 10 hours on any day during the week
-  4. 5 hours on any day during the week

Question ID : **26433055345**
Status : **Answered**
Chosen Option : **4**

Q.4 The Ministry for Labour and Employment is trying to take every state along before rolling out the labour codes and the existing social security schemes, like pension for informal sector workers, would be integrated with the unorganised sector database by 2022. How many labour codes are there?

- Ans ☒ 1. Four
- ☒ 2. Two
- ☒ 3. Three
- ☒ 4. One

Question ID : 2643305577

Status : Not Answered

Chosen Option : --

Q.5 Which of the following personalities was instrumental in introducing the Green Revolution in India?

- Ans ☒ 1. Virender Lal Chopra
- ☒ 2. Madappa Mahadevappa
- ☒ 3. MS Swaminathan
- ☒ 4. Venkatrao K Badami

Question ID : 26433059287

Status : Not Answered

Chosen Option : --

Q.6 Who among the following is associated with the formation of the 'Gadar Party'?

- Ans ☒ 1. Aurobindo Ghosh
- ☒ 2. Bipin Chandra Pal
- ☒ 3. Lala Hardayal
- ☒ 4. Lala Lajpat Rai

Question ID : 26433055636

Status : Answered

Chosen Option : 3

Q.7 Velocity of money is mostly stable in which time period?

- Ans ☒ 1. Short run
- ☒ 2. Long run
- ☒ 3. Very long run
- ☒ 4. Both, in the long and very long runs

Question ID : 26433059252

Status : Not Answered

Chosen Option : --

Q.8 The Harike barrage, from where the Indira Gandhi canal (Rajasthan canal) originates, is located in which state?

- Ans ☒ 1. Haryana
- ☒ 2. Himachal Pradesh
- ☒ 3. Punjab
- ☒ 4. Rajasthan

Question ID : 26433054972

Status : Not Answered

Chosen Option : --

Q.9

According to Census of India 2011, which group of states has the lowest female literacy rates?

Ans

1. Sikkim and Nagaland

2. Mizoram and Kerala

3. Kerala and Tamil Nadu

4. Rajasthan and Bihar

Question ID : 26433071629

Status : Answered

Chosen Option : 4

Q.10

Hair is primarily made up of which of the following proteins?

Ans

1. Dystrophin

2. Keratin

3. Myosin

4. Tubulin

Question ID : 26433095254

Status : Answered

Chosen Option : 2

Q.11

Who among the following was NOT associated with the All India Muslim League?

Ans

1. Muhammad Ali Jinnah

2. Aga Khan

3. Mian Abdul Aziz

4. Badruddin Tyabji

Question ID : 26433055637

Status : Not Answered

Chosen Option : --

Q.12

Which of the following ministries has introduced the Indian Antarctic Bill, 2022, which aims at having India's own national measures for protecting the Antarctic environment as also the dependent and associated ecosystem?

Ans

1. Ministry of Defence

2. Ministry of Earth Sciences

3. Ministry of Environment, Forest and Climate Change

4. Ministry of Science & Technology

Question ID : 26433095269

Status : Not Answered

Chosen Option : --

Q.13

In which of the following Harappan sites, is a dockyard-like structure been found?

Ans

1. Alamgirpur

2. Kalibangan

3. Dholavira

4. Lothal

Question ID : 26433064353

Status : Not Answered

Chosen Option : --

https://ssc.digialm.com/per/g27/pub/2207/touchstone/AssessmentQPHTMLMode1/2207O22213/2207O22213S12D146588/1666073783731779...

3/26

<div><div><div><div><div><div>Q.14</div><div>The Ayushman Bharat Digital Mission virtually launched by Prime Minister Narendra Modi, in September 2021 will help in empowering citizens with _____.</div></div></div><div><div>Ans</div><div><div><div><div><div><div>✖</div><div>1. ayurvedic cure systems</div></div></div><div><div><div>✖</div><div>2. free medical check-ups</div></div></div><div><div><div>✖</div><div>3. health and wellness courses</div></div></div><div><div><div>✔</div><div>4. modern healthcare systems</div></div></div></div></div></div></div></div></div></div>	<div><div>Question ID : 26433061830</div><div>Status : Answered</div><div>Chosen Option : 2</div></div>
<div><div><div><div><div><div>Q.15</div><div>Which of the following states won the 'Vijay Hazare Trophy 2021'?</div></div></div><div><div>Ans</div><div><div><div><div><div><div>✖</div><div>1. Maharashtra</div></div></div><div><div><div>✖</div><div>2. Punjab</div></div></div><div><div><div>✖</div><div>3. Tamil Nadu</div></div></div><div><div><div>✔</div><div>4. Himachal Pradesh</div></div></div></div></div></div></div></div></div></div>	<div><div>Question ID : 26433055581</div><div>Status : Not Answered</div><div>Chosen Option : --</div></div>
<div><div><div><div><div><div>Q.16</div><div>Which right provides for residing and settling in any part of India?</div></div></div><div><div>Ans</div><div><div><div><div><div><div>✖</div><div>1. Right to Equality</div></div></div><div><div><div>✔</div><div>2. Right to Freedom</div></div></div><div><div><div>✖</div><div>3. Right Against Exploitation</div></div></div><div><div><div>✖</div><div>4. Cultural and Educational Rights</div></div></div></div></div></div></div></div></div></div>	<div><div>Question ID : 26433054083</div><div>Status : Answered</div><div>Chosen Option : 2</div></div>
<div><div><div><div><div><div>Q.17</div><div>The only woman sultan, Raziyya Sultana was the daughter of who among the following Sultans of the Delhi Sultanate?</div></div></div><div><div>Ans</div><div><div><div><div><div><div>✖</div><div>1. Aram Shah</div></div></div><div><div><div>✖</div><div>2. Ruknuddin Firuz</div></div></div><div><div><div>✔</div><div>3. Iltutmish</div></div></div><div><div><div>✖</div><div>4. Muiz ud din Qaiqabad</div></div></div></div></div></div></div></div></div></div>	<div><div>Question ID : 26433065524</div><div>Status : Not Answered</div><div>Chosen Option : --</div></div>
<div><div><div><div><div><div>Q.18</div><div>Which river originates from the Brahmagiri Hills?</div></div></div><div><div>Ans</div><div><div><div><div><div><div>✖</div><div>1. Sharavati</div></div></div><div><div><div>✔</div><div>2. Kaveri</div></div></div><div><div><div>✖</div><div>3. Periyar</div></div></div><div><div><div>✖</div><div>4. Krishna</div></div></div></div></div></div></div></div></div></div>	<div><div>Question ID : 26433054988</div><div>Status : Not Answered</div><div>Chosen Option : --</div></div>

Q.19

The Phool Dei festival is primarily celebrated by the people of _____ in India.

Ans

✓

1. Uttarakhand

✗

2. Sikkim

✗

3. Karnataka

✗

4. Gujarat

Question ID : 26433064331

Status : Not Answered

Chosen Option : --

Q.20

Which of the following institutions does NOT provide MUDRA loans?

Ans

✗

1. Small-finance banks

✗

2. Commercial banks

✗

3. Regional Rural Banks

✓

4. Reserve Bank of India

Question ID : 26433059240

Status : Not Answered

Chosen Option : --

Section : Part-B-Quantitative Aptitude

Q.1

The sum of two numbers is 15 and their difference is $\frac{1}{5}$ of their sum. Find the LCM of the two numbers.

Ans

✓

1. 18

✗

2. 12

✗

3. 16

✗

4. 14

Question ID : 26433063359

Status : Answered

Chosen Option : 1

Q.2

If A (12, 21), B (3, p) and C (9, 0) are the vertices of a right-angled triangle with AC hypotenuse, then p = _____.

Ans

✗

1. 6

✗

2. 5

✓

3. 3

✗

4. 4

Question ID : 26433056372

Status : Not Answered

Chosen Option : --

Q.3 The marks (out of 150) of five students in different subjects in an exam are given in the following table.

Subject/Student	Hindi	English	Physics	Chemistry	Mathematics
Ravi	135	140	132	121	141
Deepak	120	135	139	112	136
Sarita	110	126	120	97	130
Kamal	130	125	98	102	120
Divya	136	130	101	100	115

Who scored the minimum marks in the exam?

- Ans
1. Sarita

2. Kamal

3. Divya

4. Deepak

Question ID : 26433073098

Status : Answered

Chosen Option : 2

Q.4 A dealer sells sugar at 20% profit and uses weight 10% less than the actual measure. His gain percentage is:

- Ans
1. 25%

2. $35\frac{1}{3}\%$

3. 30%

4. $33\frac{1}{3}\%$

Question ID : 26433058967

Status : Answered

Chosen Option : 3

Q.5 A sum of Rs.18,000 is lent at a compound interest of 18% compounded half-yearly. If the loan is repaid after 18 months and rounded to the nearest ten rupees, the interest paid is equal to _____.

- Ans
1. Rs.5,120

2. Rs.5,230

3. Rs.5,310

4. Rs.5,050

Question ID : 26433061313

Status : Answered

Chosen Option : 3

Q.6 If $p + q = 3$ and $p^3 + q^3 = 9$, then the value of $(p^2 + q^2)^2$ is:

- Ans
1. 25

2. 2

3. 4

4. 5

Question ID : 26433062680

Status : Answered

Chosen Option : 1

Q.7 Simplify.
 $20 \times [24 \div 105 \times \{75 \times 119 \div (15 \times 17) \}]$

- Ans ☒ 1. 160
- ☒ 2. 158
- ☒ 3. 162
- ☒ 4. 155

Question ID : 26433058646
Status : Answered
Chosen Option : 1

Q.8 If in a family, the consumption of wheat is 60 kg for 24 days, then the consumption of wheat in 18 days is:

- Ans ☒ 1. 54 kg
- ☒ 2. 27 kg
- ☒ 3. 45 kg
- ☒ 4. 72 kg

Question ID : 26433058143
Status : Answered
Chosen Option : 3

Q.9 A container has 20% milk and 80% water in it. It is mixed with another sample (in equal quantity) having 80% milk and 20% water. What would be the milk content in the final mixture?

- Ans ☒ 1. 50%
- ☒ 2. 100%
- ☒ 3. 60%
- ☒ 4. 80%

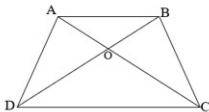
Question ID : 26433071298
Status : Answered
Chosen Option : 1

Q.10 Applied to a bill for Rs.2,00,000, the difference between a discount of 46% and two successive discounts of 35% and 8% is:

- Ans ☒ 1. Rs.11,800
- ☒ 2. Rs.11,500
- ☒ 3. Rs.11,700
- ☒ 4. Rs.11,600

Question ID : 26433064979
Status : Answered
Chosen Option : 4

Q.11 In the given figure, if $AB \parallel CD$, $AO=4$ cm; $OC= (4x - 2)$ cm; $OD=(2x+4)$ cm; $OB=(x+1)$ cm, then the value of x is:



- Ans**
- ☒ 1. 2
 - ☒ 2. 3
 - ☒ 3. 0.5
 - ☒ 4. 1

Question ID : 26433074482

Status : Answered

Chosen Option : 2

Q.12 In a 1547 m race, Arjun reaches in 78 seconds, while Karan reaches the finish point in 91 seconds. By how much distance does Arjun beat Karan?

- Ans**
- ☒ 1. 221 m
 - ☒ 2. 231 m
 - ☒ 3. 245 m
 - ☒ 4. 220 m

Question ID : 26433058240

Status : Not Answered

Chosen Option : --

Q.13 The sales of an automobile company increased by 20% in 2020 as compared to the year 2019. However in 2021, it fell by 20% as compared to the previous year. How many units did the company sell in 2021, if it sold 6000 units in the year 2019?

- Ans**
- ☒ 1. 6000
 - ☒ 2. 5600
 - ☒ 3. 5760
 - ☒ 4. 5860

Question ID : 26433063301

Status : Answered

Chosen Option : 3

Q.14 If $\cos (A - \alpha) = p$, $\sin (A - \beta) = q$, then the value of $\cos^2 (\alpha - \beta) + 2pq\sin(\alpha - \beta)$ is:

- Ans**
- ☒ 1. $p^2 - q^2$
 - ☒ 2. $4 p^2 q^2$
 - ☒ 3. $p^2 + q^2$
 - ☒ 4. $p^2 q^2$

Question ID : 26433058934

Status : Not Answered

Chosen Option : --

Q.15

A is twice as efficient as B and together they can finish a work in 16 days. In how many days can A alone do it?

Ans

✗

1. 26

✗

2. 25

✗

3. 28

✓

4. 24

Question ID : 26433063800

Status : Answered

Chosen Option : 4

Q.16

Rs.1,800 is invested for a certain number of years at 6% simple interest per annum. The interest payable on maturity is Rs.756. Find the time period for which the sum is invested.

Ans

✗

1. 6 years

✗

2. 5 years

✗

3. 8 years

✓

4. 7 years

Question ID : 26433061212

Status : Answered

Chosen Option : 4

Q.17

Find the sum $\frac{17}{10} + \frac{52}{100} + \frac{37}{1000}$ in decimal form.

Ans

✗

1. 0.257

✓

2. 2.257

✗

3. 1.537

✗

4. 1.789

Question ID : 26433063671

Status : Answered

Chosen Option : 2

Q.18

What is the difference between the total surface area and the curved surface area of a cylinder whose radius is 5 cm and height is 7 cm? (Take $\pi = 3.14$)

Ans

✗

1. 159.2 cm²

✗

2. 155.7 cm²

✗

3. 159.3 cm²

✓

4. 157 cm²

Question ID : 26433058255

Status : Answered

Chosen Option : 4

Q.19

The unequal side of an isosceles triangle is 16 cm and the perimeter is 50 cm. What is the area (in cm²) of the triangle?

Ans

✗

1. 200

✗

2. 136

✗

3. 240

✓

4. 120

Question ID : 26433061915


Status : Answered


Chosen Option : 4


https://ssc.digialm.com/per/g27/pub/2207/touchstone/AssessmentQPHTMLMode1/2207O22213/2207O22213S12D146588/1666073783731779...


9/26

Q.20 Fifteen men take 10 days to complete a house, working 12 hours a day. How many hours a day should ten men work, to complete the job in 20 days?

Ans  1. 9.5

 2. 8

 3. 6

 4. 9

Question ID : 26433058154


Status : Answered


Chosen Option : 4


Section : Part-C-General Intelligence


Q.1 'P @ Q' means 'P is the sister of Q'
'P & Q' means 'P is the father of Q'
'P # Q' means 'P is the brother of Q'

If 'A @ B # C & D @ E', then how is D related to A?

Ans  1. Brother's son

 2. Daughter

 3. Sister's daughter

 4. Brother's daughter


Question ID : 26433056806


Status : Answered


Chosen Option : 4


Q.2 In a certain code language,
A = B means 'A is the husband of B',
A + B means 'A is the brother of B',
A / B means 'A is the father of B'.

Based on the given information, how is P related to S if 'P / Q / R + S'?

Ans  1. Father

 2. Father's mother

 3. Brother


 4. Father's father


Question ID : 26433067506


Status : Answered


Chosen Option : 4

Q.3 Select the option that is related to the fifth term in the same way as the second term is related to the first term and fourth term is related to third term.
DIVERSE : VIDEESR :: ECONOMY : OCENYMO :: EDITION : ?

Ans  1. IDETNOI

 2. IDETOIN

 3. IDENTOI




 4. IDTENIO

Question ID : 26433057965

Status : Answered

Chosen Option : 1

Q.4 In a code language, 'FOUR' is coded as DKS~~N~~, and 'FIVE' is coded as DETA. How will 'NINE' be coded in the same language?

- Ans  1. KEKA
-  2. KGKC
-  3. LELA
-  4. LELB





Question ID : 26433057767

Status : Answered

Chosen Option : 3

Q.5 Read the given statement(s) and conclusions carefully. Assuming that the information given in the statements is true, even if it appears to be at variance with commonly known facts, decide which of the given conclusions logically follow(s) from the statement(s).

Statements:
All bikes are cars
Some cars are bicycles
All bicycles are trucks
Conclusions:
I. Some trucks are cars
II. All bikes are bicycles

- Ans  1. Both conclusions I and II follow.
-  2. Only conclusion II follows.
-  3. Neither conclusion I nor conclusion II follows.
-  4. Only conclusion I follows.

Question ID : 26433074722

Status : Answered

Chosen Option : 4

Q.6 Which option represents the correct order of the given words as they would appear in an English dictionary?

1. Approval
2. Appropriate
3. Approve
4. Apron
5. Appreciate

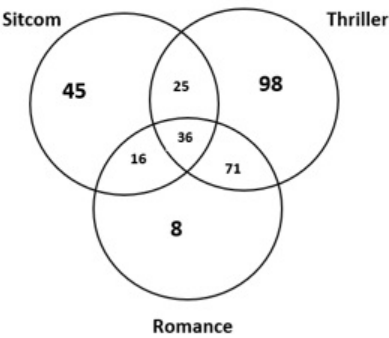
- Ans  1. 5, 2, 3, 1, 4
-  2. 5, 1, 3, 2, 4
-  3. 5, 1, 3, 4, 2
-  4. 5, 2, 1, 3, 4

Question ID : 26433069219

Status : Answered

Chosen Option : 4

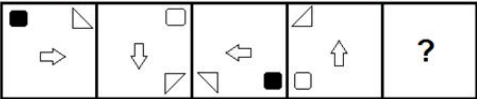
Q.7 Study the given diagram carefully and answer the questions. The numbers in different sections indicate the number of persons who watch various types of movies. What number of people watch thrillers but NOT romance?



- Ans** ☒ 1. 123
☒ 2. 98
☒ 3. 169
☒ 4. 134

Question ID : 26433069380
Status : Answered
Chosen Option : 1

Q.8 Select the figure from among the given options that can replace the question mark (?) in the following series.



- Ans**
- ☒ 1.
- ☒ 2.
- ☒ 3.
- ☒ 4.

Question ID : 26433055948
Status : Answered
Chosen Option : 4

Q.9 Select the correct combination of mathematical signs to sequentially replace the * signs and to balance the given equation.
75 * 5 * 32 * 50 * 20 * 450

- Ans ☒ 1. +, x, -, +, =
☒ 2. +, x, -, +, =
☒ 3. +, +, x, -, =
☒ 4. +, -, x, +, =

Question ID : 26433056455

Status : Answered

Chosen Option : 1

Q.10 Six letters U, V, W, X, Y and Z are written on different faces of a dice. Two positions of this dice are shown in the figure. Find the letter on the face opposite to V.



- Ans ☒ 1. X
☒ 2. U
☒ 3. W
☒ 4. Y

Question ID : 26433057862

Status : Answered

Chosen Option : 2

Q.11 Which letter-cluster will replace the question mark (?) to complete the given series?
DUMT, BZJX, ZEGB, ?

- Ans ☒ 1. XJDG
☒ 2. XJDF
☒ 3. XJEG
☒ 4. XJEF

Question ID : 26433057970

Status : Answered

Chosen Option : 2

Q.12 A, B, C, D, E, F, G and H are sitting around a square table, facing towards the centre of the table. Some of them are sitting at the corners while some are sitting at the exact centre of the sides. A is occupying a corner seat, third to the left of B. H is second to the left of A. E is an immediate neighbour of B and fourth to the right of A. F is at one of the corners. G is third to the left of F. If D is not a neighbour of A, where is C sitting?

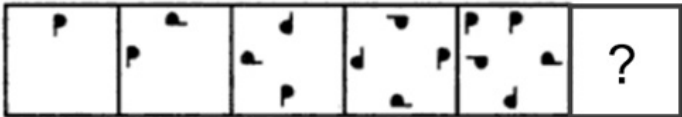
- Ans ☒ 1. Immediate left of A
☒ 2. Third to the right of E
☒ 3. Immediate left of F
☒ 4. Second to the right of B

Question ID : 26433068817

Status : Answered

Chosen Option : 3

Q.17 Select the figure from among the given options that can replace the question mark (?) in the following series.



Ans

- ✗ 1.
- ✗ 2.
- ✗ 3.
- ✓ 4.

Question ID : 26433080526

Status : Answered

Chosen Option : 4

Q.18 Three of the following letter-clusters are alike in some manner and hence form a group. Which letter-cluster does not belong to that group?

- Ans ✗ 1. IRMV
- ✓ 2. HSKW
- ✗ 3. FUJY
- ✗ 4. DWHA

Question ID : 26433056167

Status : Answered

Chosen Option : 2

Q.19 Select the set in which the numbers are related in the same way as are the numbers of the following sets.
(NOTE: Operations should be performed on the whole numbers, without breaking down the numbers into its constituent digits. E.g. 13 – Operations on 13 such as adding/deleting/multiplying etc. to 13 can be performed. Breaking down 13 into 1 and 3 and then performing mathematical operations on 1 and 3 is not allowed.)
(17, 42, 11)
(7, 24, 9)

- Ans ✓ 1. (6, 27, 12)
- ✗ 2. (13, 39, 9)
- ✗ 3. (9, 36, 17)
- ✗ 4. (11, 21, 5)

Question ID : 26433057605

Status : Not Attempted and Marked For Review

Chosen Option : --

Q.20 Which two signs and two numbers should be interchanged in the following equation to make it correct?
 $11 + 68 - 8 \times 121 \div 32 = 565$

- Ans
- ☒ 1. 8 and 32; \times and $+$
 - ☒ 2. 11 and 32; $-$ and \times
 - ☒ 3. 68 and 121; $+$ and \times
 - ☒ 4. 11 and 8; \times and $+$

Question ID : 26433056458
Status : Answered
Chosen Option : 2

Q.21 Select the combination of letters that when sequentially placed in the blanks of the given series, will complete the series.
TUVT _ UUVV _ TT _ UU _ VVT

- Ans
- ☒ 1. UTTU
 - ☒ 2. UVUV
 - ☒ 3. TVUU
 - ☒ 4. TTUV

Question ID : 26433057741
Status : Answered
Chosen Option : 2

Q.22 Select the set in which the numbers are related in the same way as are the numbers of the following sets.
(NOTE: Operations should be performed on the whole numbers, without breaking down the numbers into its constituent digits. E.g. 13 – Operations on 13 such as adding/deleting/multiplying etc. to 13 can be performed. Breaking down 13 into 1 and 3 and then performing mathematical operations on 1 and 3 is not allowed.)
(38 , 92 , 15)
(26 , 60 , 11)

- Ans
- ☒ 1. (32, 84, 19)
 - ☒ 2. (21, 28, 13)
 - ☒ 3. (28, 52, 16)
 - ☒ 4. (18, 44, 7)

Question ID : 26433057606
Status : Not Attempted and Marked For Review
Chosen Option : --

Q.23 Select the numbers from among the given options that can replace the question marks (?) in the following series.
259, 235, ?, ?, 163, 139

- Ans
- ☒ 1. 215, 184
 - ☒ 2. 211, 188
 - ☒ 3. 211, 187
 - ☒ 4. 209, 187

Question ID : 26433057040
Status : Answered
Chosen Option : 3

Q.24 Which of the following numbers will replace the question mark (?) in the given series?
229, 148, 212, 117, 195, 86, ?, 55

- Ans ☒ 1. 178
- ☐ 2. 182
- ☐ 3. 180
- ☐ 4. 172

Question ID : 26433057549
Status : Answered
Chosen Option : 1

Q.25 Select the correct mirror image of the given figure when the mirror is placed at MN as shown below.



- Ans ☐ 1. 24əЯek
- ☐ 2. 24əЯek
- ☐ 3. 5n9Яek
- ☒ 4. kєR6h2

Question ID : 26433056996
Status : Answered
Chosen Option : 4

Section : Part-D- English Language

Q.1 Select the most appropriate synonym of the underlined word in the given sentence.
Chayan exercises great influence over his pupils.

- Ans ☐ 1. attendants
- ☐ 2. experts
- ☒ 3. students
- ☐ 4. beginners

Question ID : 26433058585
Status : Answered
Chosen Option : 3

Q.2 Parts of a sentence are given below in jumbled order. Arrange the parts in the correct order to form a meaningful sentence.

A golden chain / came across / man / the poor

- Ans ☐ 1. A golden chain man came across the poor.
- ☐ 2. Man came across a golden chain the poor.
- ☐ 3. A golden chain came across the man poor.
- ☒ 4. The poor man came across a golden chain.

Question ID : 26433059605
Status : Answered
Chosen Option : 4

Q.3 Select the most appropriate option that can substitute the underlined segment in the given sentence.

For checking the patient’s status in the ICU, the doctor entered there in a quick manner.

- Ans
- ☐

1. firstly
- ☐

2. ghastly
- ☒

3. hurriedly
- ☐

4. realistically

Question ID : 26433072394

Status : Answered

Chosen Option : 3

Q.4 Select the most appropriate homonym to fill in the blank.
The institute is known for _____ discipline.

- Ans
- ☐

1. marked
- ☐

2. marshal
- ☐

3. marginal
- ☒

4. martial

Question ID : 26433058372

Status : Answered

Chosen Option : 4

Q.5 Sentences of a paragraph are given below in jumbled order. Arrange the sentences in the correct order to form a meaningful and coherent paragraph.

- A. It is monitored and organised by a peer-to-peer network known as a ‘blockchain’.
- B. Cryptocurrency is a data string that has been encrypted and represents a unit of currency.
- C. Unlike actual money, cryptocurrencies are decentralised, which means they cannot be manipulated by the government.
- D. This chain functions as a secure database of transactions such as buying, selling, and transferring

- Ans
- ☐

1. CADB
- ☐

2. BADC
- ☒

3. BCAD
- ☐

4. BCDA

Question ID : 26433058348

Status : Answered

Chosen Option : 2

Q.6 Select the option that can be used as a one-word substitute for the given group of words.

A group of things that have been hidden in some place

- Ans
- ☐

1. Clothes
- ☐

2. Treasure
- ☒

3. Cache
- ☐

4. Jewels

Question ID : 26433059699

Status : Answered

Chosen Option : 2

Q.7 Parts of the given sentence have been given as options. One of them contains a spelling error. Select the option that rectifies the error.

‘Netiquette’ is a combination of the words ‘internet’ and ‘atiquette’.

- Ans ☒ 1. etiquette
- ☒ 2. internet
- ☒ 3. combination
- ☒ 4. Netiquette

Question ID : 26433059578

Status : Answered

Chosen Option : 1

Q.8 Select the INCORRECTLY spelt word

- Ans ☒ 1. Endeavour
- ☒ 2. Pseudonym
- ☒ 3. Petriotisam
- ☒ 4. Reservoir

Question ID : 26433072578

Status : Answered

Chosen Option : 3

Q.9 Select the option that can be used as a one-word substitute for the given group of words.
Causing or affected by anxiety or stress

- Ans ☒ 1. Divested
- ☒ 2. Fraught
- ☒ 3. Devoid
- ☒ 4. Scant

Question ID : 26433060743

Status : Not Answered

Chosen Option : --

Q.10 The following sentence has been divided into parts. One of them may contain an error. Select the part that contains the error from the given options. If you don’t find any error, mark ‘No error’ as your answer.

The judicial process of our country / is so cumbersome that often / the victims lose patience and faith.

- Ans ☒ 1. No error
- ☒ 2. the victims lose patience and faith.
- ☒ 3. is so cumbersome that often
- ☒ 4. The judicial process of our country

Question ID : 26433058618

Status : Answered

Chosen Option : 4

Q.11

Select the most appropriate synonym of the underlined word.
I found the TV show to be vulgar.

Ans

✓

1. abusive

✗

2. entertaining

✗

3. refined

✗

4. defined

Question ID : 26433063588

Status : Answered

Chosen Option : 1

Q.12

Select the most appropriate homophone of the italicised word.
The boy is so thin that his *veins* are visible.

Ans

✗

1. Vanity

✗

2. Vine

✓

3. Vain

✗

4. Van

Question ID : 26433071899

Status : Answered

Chosen Option : 3

Q.13

Select the option that can be used as a one-word substitute for the underlined group of words.
Robert walked into a room filled with equipment for games and physical exercise.

Ans

✗

1. Arena

✗

2. Ring

✓

3. Gymnasium

✗

4. Sanctorum

Question ID : 26433060397

Status : Not Attempted and Marked For Review

Chosen Option : --

Q.14

Select the most appropriate synonym of the underlined word.
The production of a solar powered vehicle in 2015 was in nascent stage.

Ans

✓

1. Budding

✗

2. Grateful

✗

3. Coherent

✗

4. Endless

Question ID : 26433073189

Status : Marked For Review

Chosen Option : 2

https://ssc.digialm.com/per/g27/pub/2207/touchstone/AssessmentQPHTMLMode1/2207O22213/2207O22213S12D146588/166607378373177...

20/26

Q.15 Select the most appropriate ANTONYM of the underlined word.

He is a man of many qualities. One of the qualities is zest.

Ans

✗ 1. Crazyiness

✓ 2. Monotonousness

✗ 3. Injustice

✗ 4. Sensibility

Question ID : 26433073818

Status : Answered

Chosen Option : 2

Q.16 Identify the error in tense and choose the correct sentence from the following options.

It always rained at the weekend.

Ans

✗ 1. It always has been raining at the weekend.

✓ 2. It always rains at the weekend.

✗ 3. It always was raining at the weekend.

✗ 4. It always rain at the weekend.

Question ID : 26433059184

Status : Answered

Chosen Option : 2

Q.17 Parts of a sentence are given below in jumbled order. Arrange the parts in the correct order to form a meaningful sentence.

The finest / writers of tragedy / was / Christopher Marlowe / of the Elizabethan

Ans

✗ 1. Christopher Marlowe was writers of tragedy of the Elizabethan the finest.

✗ 2. Christopher Marlowe of the Elizabethan was writers of tragedy the finest.

✗ 3. Writers of tragedy of the Elizabethan was the finest Christopher Marlowe.

✓ 4. Christopher Marlowe was the finest of the Elizabethan writers of tragedy.

Question ID : 26433059609

Status : Answered

Chosen Option : 4

Q.18 For the four-sentence (S1 to S4) paragraph below, sentences S1 and S4 are given.

From the options P, Q, R and S, select the appropriate sentences for S2 and S3, respectively.

(S1) In order to use wealth it is not enough just to store it.

(S2)

(S3)

(S4) Commodities such as wheat and rice can be transported only with difficulty.

(P) Some forms of wealth, such as real estate, cannot be transported at all.

(Q) Money isn't a material reality – it is a psychological construct.

(R) It often needs to be transported from place to place.

(S) Without money, commercial networks and markets would have been doomed to remain very limited in size, complexity and dynamism.

Ans

✓ 1. R, P

✗ 2. P, Q

✗ 3. S, Q

✗ 4. P, S

Question ID : 26433065213

Status : Answered

Chosen Option : 1

https://ssc.digialm.com/per/g27/pub/2207/touchstone/AssessmentQPHTMLMode1/2207O22213/2207O22213S12D146588/166607378373177...

21/26

Q.19 Select the most appropriate meaning of the given idiom.

Blaze the trail

- Ans
1. To escape narrowly
2. To start a movement
3. To get into trouble
4. To burn an evidence

Question ID : 26433065226

Status : Not Attempted and Marked For Review

Chosen Option : --

Q.20 Select the most appropriate idiom based on the situation given below.

The government is keen to end the disagreement and offer peace after the death of several innocent people.
Hence, they decided to _____ to the terrorists.

- Ans
1. hit the nail on the head
2. hit the jackpot
3. have a brush with
4. hold out an olive branch

Question ID : 26433065228

Status : Answered

Chosen Option : 1

Comprehension:

In the following passage, some words have been deleted. Read the passage carefully and select the most appropriate option to fill in each blank.

We planned to visit Shimla (1)_____went to Agra. My friends and I (2)_____disappointed as I really wanted to be in the snow valleys. As they say, 'All is well that ends (3)_____'. I was mesmerised to see the beauty of the greatest (4)_____ of Indian history. It was the moment of life for me to (5)_____there.

SubQuestion No : 21

Q.21 Select the most appropriate option to fill in blank number 1.

- Ans
1. but
2. and
3. so
4. nor

Question ID : 26433058890

Status : Answered

Chosen Option : 1

Comprehension:

In the following passage, some words have been deleted. Read the passage carefully and select the most appropriate option to fill in each blank.

We planned to visit Shimla (1)_____went to Agra. My friends and I (2)_____disappointed as I really wanted to be in the snow valleys. As they say, 'All is well that ends (3)_____'. I was mesmerised to see the beauty of the greatest (4)_____ of Indian history. It was the moment of life for me to (5)_____ there.

SubQuestion No : 22

Q.22 Select the most appropriate option to fill in blank number 2.

- Ans
1. were
2. was
3. is
4. are

Question ID : 26433058891

Status : Answered

Chosen Option : 1

Comprehension:

In the following passage, some words have been deleted. Read the passage carefully and select the most appropriate option to fill in each blank.

We planned to visit Shimla (1)_____went to Agra. My friends and I (2)_____disappointed as I really wanted to be in the snow valleys. As they say, 'All is well that ends (3)_____'. I was mesmerised to see the beauty of the greatest (4)_____ of Indian history. It was the moment of life for me to (5)_____ there.

SubQuestion No : 23

Q.23 Select the most appropriate option to fill in blank number 3.

- Ans
1. well
2. good
3. very well
4. best

Question ID : 26433058892

Status : Answered

Chosen Option : 1

Comprehension:

In the following passage, some words have been deleted. Read the passage carefully and select the most appropriate option to fill in each blank.

We planned to visit Shimla (1)_____went to Agra. My friends and I (2)_____disappointed as I really wanted to be in the snow valleys. As they say, 'All is well that ends (3)_____'. I was mesmerised to see the beauty of the greatest (4)_____ of Indian history. It was the moment of life for me to (5)_____ there.

SubQuestion No : 24

Q.24 Select the most appropriate option to fill in blank number 4.

- Ans
1. building
2. palace
3. destination
4. monument

Question ID : 26433058893

Status : Answered

Chosen Option : 4

Comprehension:

In the following passage, some words have been deleted. Read the passage carefully and select the most appropriate option to fill in each blank.

We planned to visit Shimla (1)_____went to Agra. My friends and I (2)_____disappointed as I really wanted to be in the snow valleys. As they say, 'All is well that ends (3)_____'. I was mesmerised to see the beauty of the greatest (4)_____ of Indian history. It was the moment of life for me to (5)_____there.

SubQuestion No : 25

Q.25 Select the most appropriate option to fill in blank number 5.

- Ans

1. living

2. be

3. lived

4. being

Question ID : 26433058894

Status : Answered

Chosen Option : 3

Section : Part-E- Computer Fundamentals

Q.1 Which of the following is/are the services provided by Internet?

- (i) Websites
- (ii) Electronic mail
- (iii) Newsgroup
- (iv) Discussion groups

- Ans

1. (ii), (iii) and (iv) only

2. (i), (ii), (iii) and (iv)

3. (iii) and (iv) only

4. (i), (ii) and (iii) only

Question ID : 26433095296

Status : Answered

Chosen Option : 2

Q.2 In MS-Excel 2010, which shortcut key is used to bold the selected text?

- Ans

1. Shift + O

2. Shift + B

3. Ctrl + O

4. Ctrl + B

Question ID : 26433095378

Status : Answered

Chosen Option : 4

Q.3 Online conversations in which you are immediately able to send messages back and forth to one another is called _____.

- Ans

1. EMAIL

2. CHAT

3. VLOG

4. BLOG

Question ID : 26433095427

Status : Answered

Chosen Option : 2

<div><div><div>Q.4 Which of the following option is not available in 'Proofing' group of 'Review' tab in MS-Word 2010?</div><div>Ans <div><div>✔ 1. Comment</div><div>✘ 2. Thesaurus</div><div>✘ 3. Word Count</div><div>✘ 4. Editor</div></div></div></div></div>	<div><div>Question ID : 26433095314</div><div>Status : Not Attempted and Marked For Review</div><div>Chosen Option : --</div></div>
<div><div><div>Q.5 Which of the following keyboard shortcut is used to center align the selected text in MS-Word 2010?</div><div>Ans <div><div>✘ 1. Ctrl + A</div><div>✘ 2. Ctrl + C</div><div>✘ 3. Ctrl + W</div><div>✔ 4. Ctrl + E</div></div></div></div></div>	<div><div>Question ID : 26433095323</div><div>Status : Answered</div><div>Chosen Option : 4</div></div>
<div><div><div>Q.6 _____ shortcut key is used in MS-Excel 2010 to select a row.</div><div>Ans <div><div>✘ 1. Ctrl+Spacebar</div><div>✔ 2. Shift+Spacebar</div><div>✘ 3. ALT+Enter</div><div>✘ 4. Ctrl+Enter</div></div></div></div></div>	<div><div>Question ID : 26433095462</div><div>Status : Not Answered</div><div>Chosen Option : --</div></div>
<div><div><div>Q.7 _____ function is used in MS-Excel 2010 for Rounding the number down.</div><div>Ans <div><div>✘ 1. COUNTIF</div><div>✘ 2. IF</div><div>✔ 3. FLOOR</div><div>✘ 4. CEILING</div></div></div></div></div>	<div><div>Question ID : 26433095420</div><div>Status : Answered</div><div>Chosen Option : 3</div></div>
<div><div><div>Q.8 Text editors and text formatters belong to which category of computing?</div><div>Ans <div><div>✘ 1. Language Translator</div><div>✘ 2. Interpreter</div><div>✔ 3. Word Processors</div><div>✘ 4. Compiler</div></div></div></div></div>	<div><div>Question ID : 26433095513</div><div>Status : Answered</div><div>Chosen Option : 2</div></div>

Q.9 In Gmail, what do you use when you receive a message and want to send the new message to the original sender and all other recipients on the To and Cc lines?

- Ans
- ✔ 1. Reply All
 - ✗ 2. Reply
 - ✗ 3. Forward All
 - ✗ 4. Forward

Question ID : 26433095535
Status : Answered
Chosen Option : 1

Q.10 Which of the following effects is not available in the MS-Word 2010 font dialog box?

- Ans
- ✗ 1. Italic
 - ✗ 2. Strikethrough
 - ✔ 3. Equalize Character Height
 - ✗ 4. Bold

Question ID : 26433095492
Status : Answered
Chosen Option : 3