

Head Constable Ministerial in Delhi Police Examination 2022

Roll Number	
Candidate Name	
Venue Name	iON Digital Zone iDZ Bhagalpur
Exam Date	13/10/2022
Exam Time	1:00 PM - 2:30 PM
Subject	Head Constable Ministerial in Delhi Police Examination 2022

Section : Part-A-General Awareness

Q.1 The Parliamentary Form of Government has been borrowed by the Indian Constitution from the Constitution of which country?

- Ans ☒ 1. United Kingdom
- ☐ 2. Ireland
- ☐ 3. United States of America
- ☐ 4. France

Question ID : 26433071644
Status : Answered
Chosen Option : 1

Q.2 The Treaty of Srirangapatnam was signed in 1722 between Tipu Sultan of Mysore and who among the following representatives of the British East India Company?

- Ans ☒ 1. Charles Cornwallis
- ☐ 2. Warren Hastings
- ☐ 3. Robert Clive
- ☐ 4. John Cartier

Question ID : 26433065546
Status : Not Answered
Chosen Option : --

Q.3 Rourkela Iron and Steel plant was established with the technical co-operation of which of the following countries?

- Ans ☐ 1. United Kingdom
- ☐ 2. Norway
- ☐ 3. Sweden
- ☒ 4. Germany

Question ID : 26433066587
Status : Not Answered
Chosen Option : --

Q.4 In August 2021, which of the following State Governments announced the setting up of a separate wing for organic farming under the Agriculture Department in their Annual budget?

- Ans
- ☒ 1. Sikkim
 - ☒ 2. Kerala
 - ☒ 3. Tamil Nadu
 - ☒ 4. Odisha

Question ID : 26433055558
Status : Not Answered
Chosen Option : --

Q.5 Expenditure on military, infrastructure and government institutions are examples of which of the following?

- Ans
- ☒ 1. Government final consumption expenditure
 - ☒ 2. Private final consumption expenditure
 - ☒ 3. Fixed capital expenditure
 - ☒ 4. Government investment

Question ID : 26433059259
Status : Answered
Chosen Option : 4

Q.6 What was the name of the programme launched in 1960 for intensive agriculture development in India?

- Ans
- ☒ 1. Intensive Agriculture District Programme
 - ☒ 2. Intensive Agri District Programme
 - ☒ 3. Integral Agriculture District Programme
 - ☒ 4. Intensive Agriculture Development Programme

Question ID : 26433059290
Status : Answered
Chosen Option : 4

Q.7 The period _____ is referred to as a period of ‘steady population growth’.

- Ans
- ☒ 1. 1901-1911
 - ☒ 2. 1951-1981
 - ☒ 3. 1931-1941
 - ☒ 4. 1921-1951

Question ID : 26433055335
Status : Not Answered
Chosen Option : --

Q.8 Who among the following has written the book ‘Rhythmic Echoes and Reflections: Kathak’?

- Ans
- ☒ 1. Sunayana Hazarilal Agarwal
 - ☒ 2. Prerana Shrimali
 - ☒ 3. Kumidini Lakhia
 - ☒ 4. Shovana Narayan

Question ID : 26433064309
Status : Not Answered
Chosen Option : --

Q.9 How many sports persons have been honoured with Padma Awards in 2022 for their contribution to sports?

- Ans ☒ 1. Seven
☒ 2. Eleven
☒ 3. Nine
☒ 4. Five

Question ID : 26433054836
Status : Not Answered
Chosen Option : --

Q.10 Which of the following is NOT an example of a rare species?

- Ans ☒ 1. Blue sheep
☒ 2. The Himalayan brown bear
☒ 3. Wild Asiatic buffalo
☒ 4. Desert fox

Question ID : 26433055660
Status : Answered
Chosen Option : 4

Q.11 The e-waste collection targets under EPR which were revised on Oct 1 2017 stated the phase-wise collection targets for e-waste in weight shall be 10% of the quantity of waste generation and with a 10% increase every year until 2023. What was the target given post 2023 for the same?

- Ans ☒ 1. 20%
☒ 2. 40%
☒ 3. 50%
☒ 4. 70%

Question ID : 26433095270
Status : Not Answered
Chosen Option : --

Q.12 In which city, was the first Virtual Smart Grid Knowledge Centre inaugurated in March 2022?

- Ans ☒ 1. Hyderabad
☒ 2. Manesar
☒ 3. Bangalore
☒ 4. Chennai

Question ID : 26433055045
Status : Not Answered
Chosen Option : --

Q.13 Which of the following is NOT a source of revenue for the Central Government?

- Ans ☒ 1. Custom duty
☒ 2. Stamp duty
☒ 3. Excise duty
☒ 4. Income tax

Question ID : 26433059088
Status : Answered
Chosen Option : 2

Q.14 From which of the following Assembly constituencies of Uttar Pradesh did Shri Yogi Adityanath win the State election in March 2022?

- Ans ☒ 1. Nakur
- ☒ 2. Gorakhpur Urban
- ☒ 3. Saharanpur Nagar
- ☒ 4. Behat

Question ID : 26433072875
Status : Answered
Chosen Option : 2

Q.15 Which of the following is the major female hormone?

- Ans ☒ 1. Testosterone
- ☒ 2. Cortisol
- ☒ 3. Progesterone
- ☒ 4. Estrogen

Question ID : 26433095256
Status : Answered
Chosen Option : 4

Q.16 A terracotta plough has been found at _____, a Harappan site presently located in Haryana.

- Ans ☒ 1. Manda
- ☒ 2. Rakhigarhi
- ☒ 3. Kalibangan
- ☒ 4. Banawali

Question ID : 26433064351
Status : Answered
Chosen Option : 3

Q.17 Ekamra Utsav is observed in which Indian state?

- Ans ☒ 1. West Bengal
- ☒ 2. Odisha
- ☒ 3. Jharkhand
- ☒ 4. Bihar

Question ID : 26433054877
Status : Not Answered
Chosen Option : --

Q.18 The _____ were known as amara-nayakas in the Vijayanagar empire.

- Ans ☒ 1. peasants
- ☒ 2. traders
- ☒ 3. craft persons
- ☒ 4. military commanders

Question ID : 26433055612
Status : Not Answered
Chosen Option : --

Q.19 In which regiment of the British Army was Mangal Pandey a sepoy during the first war of independence?

- Ans
- ☐ 1. 6th Dragoon Guards
 - ☐ 2. 3rd Native Bihar Infantry
 - ☒ 3. 34th Bengal Native Infantry
 - ☐ 4. 11th Native Infantry

Question ID : 26433064613
Status : Not Answered
Chosen Option : --

Q.20 Which of the following is NOT a geographical factor that affects the distribution of population in India?

- Ans
- ☐ 1. Climate
 - ☐ 2. Landforms
 - ☒ 3. Industrialisation
 - ☐ 4. Availability of water

Question ID : 26433071626
Status : Answered
Chosen Option : 3

Section : Part-B-Quantitative Aptitude

Q.1 The distance between two cities is 90 km. A train takes 2 hours on its up journey and 3 hours on its down journey. Find the average speed of the train in the given whole journey.

- Ans
- ☐ 1. 45 km/h
 - ☐ 2. 40 km/h
 - ☐ 3. 30 km/h
 - ☒ 4. 36 km/h

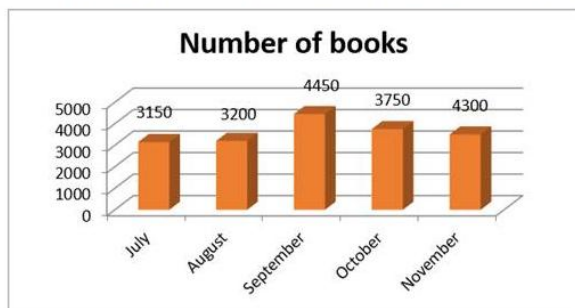
Question ID : 26433071278
Status : Answered
Chosen Option : 4

Q.2 The marked price of a wallet was Rs.840. A person bought the same for Rs.535.50 after getting two successive discounts, the first being 15%. Find the second discount.

- Ans
- ☐ 1. 22%
 - ☐ 2. 24%
 - ☐ 3. 26%
 - ☒ 4. 25%

Question ID : 26433066309
Status : Answered
Chosen Option : 4

Q.3 Number of books issued by a library for five months has been represented in the following bar graph.



In which month were the number of books issued the minimum?

- Ans
- ☒ 1. August
 - ☒ 2. November
 - ☒ 3. July
 - ☒ 4. October

Question ID : 26433074322

Status : Answered

Chosen Option : 3

Q.4 What is the greatest possible length which can be used to measure exact lengths of 360 cm, 800 cm and 1550 cm?

- Ans
- ☒ 1. 15 cm
 - ☒ 2. 9 cm
 - ☒ 3. 12 cm
 - ☒ 4. 10 cm

Question ID : 26433061236

Status : Answered

Chosen Option : 4

Q.5 A, B की तुलना में दोगुना दक्ष है, और वे एक साथ एक कार्य को करने में C और D द्वारा मिलकर इस कार्य को करने में लिए गए समय के बराबर समय लेते हैं। यदि C और D उसी कार्य को क्रमशः 15 और 20 दिनों में पूरा कर सकते हैं, तो A अकेला उस कार्य को कितने दिनों में पूरा कर सकता है?

- Ans
- ☒ 1. $\frac{65}{4}$
 - ☒ 2. $\frac{90}{7}$
 - ☒ 3. $\frac{77}{4}$
 - ☒ 4. $\frac{85}{7}$

Question ID : 26433063803

Status : Answered

Chosen Option : 2

Q.6 In an isosceles right-angled triangle, the perimeter is 49 metres. Find its area (in m²).

- Ans
- ☒ 1. 100.98
 - ☒ 2. 102.98
 - ☒ 3. 103.96
 - ☒ 4. 101.96

Question ID : 26433061419

Status : Not Answered

Chosen Option : --

Q.7 The area of a sector of a circle of radius 36 cm is $144\pi \text{ cm}^2$. What is the length of the corresponding arc of the sector?

- Ans
- ☐ 1. 5π
 - ☐ 2. 2π
 - ☐ 3. 4π
 - ☒ 4. 8π

Question ID : 26433063822

Status : Answered

Chosen Option : 4

Q.8 A boat is rowed down a river for 72 km in 9 hours and up a river for 42 km in some time. In how many hours will the boat be rowed up the river for 42 km, if the boat is running at an average speed of 7 km/h?

- Ans
- ☐ 1. 6
 - ☒ 2. 7
 - ☐ 3. 5
 - ☐ 4. 8

Question ID : 26433058239

Status : Not Answered

Chosen Option : --

Q.9 एक दुकानदार Rs.22 प्रति kg वाले अमरूद को, आनंद और साक्षी प्रत्येक को एक-एक kg Rs.25 में बेचता है। उसने आनंद को 1 kg के बजाय 950 g बेचा। उसने दोषपूर्ण वजन का उपयोग करके साक्षी को 1 kg के बजाय 'X' g बेचा। यदि वह दोनों को बेचकर कुल Rs.7.76 का वास्तविक लाभ अर्जित करता है, तो 'X' का मान क्या है?

- Ans
- ☐ 1. 980 g
 - ☒ 2. 970 g
 - ☐ 3. 960 g
 - ☐ 4. 985 g

Question ID : 26433058216

Status : Not Answered

Chosen Option : --

Q.10 What is the value of $x^3 + y^3 + z^3$ from the given information?

$$x + y + z = 14$$

$$xy + yz + xz = 44$$

$$xyz = 96$$

- Ans
- ☒ 1. 1184
 - ☐ 2. 1284
 - ☐ 3. 1376
 - ☐ 4. 1056

Question ID : 26433058833

Status : Not Answered

Chosen Option : --

Q.11 What will be the sum of the first five prime numbers?

- Ans
- ☐ 1. 29
 - ☐ 2. 26
 - ☐ 3. 18
 - ☒ 4. 28

Question ID : 26433079837

Status : Answered

Chosen Option : 4

Q.12 At what per cent is the annual compound interest rate taken such that a certain sum amounts to its 16 times in 4 years?

- Ans
- ☒ 1. 100%
 - ☐ 2. 175%
 - ☐ 3. 75%
 - ☐ 4. 200%

Question ID : 26433061075

Status : Not Answered

Chosen Option : --

Q.13 If $\frac{\cos(x+A)}{a} = \frac{\cos(x+2A)}{b} = \frac{\cos(x+3A)}{c}$ and $A = 60^\circ$, $x = 15^\circ$,

then the value of $\left(\frac{a+c}{b}\right)^2 + \left(\frac{a-c}{b}\right)^2$ is _____.

- Ans
- ☐ 1. 0
 - ☐ 2. 2
 - ☒ 3. 4
 - ☐ 4. 1

Question ID : 26433061332

Status : Not Answered

Chosen Option : --

Q.14 If the total surface area of a cube is 3456 cm^2 , then its lateral surface area is:

- Ans
- ☐ 1. 1152 cm^2
 - ☐ 2. 2525 cm^2
 - ☒ 3. 2304 cm^2
 - ☐ 4. 2012 cm^2

Question ID : 26433058417

Status : Answered

Chosen Option : 3

Q.15 What is the sum of the roots of $x^3 - 6x^2 + 11x - 6 = 0$ and $x^3 - 15x^2 + 74x - 120 = 0$?

- Ans
- ☐ 1. 20
 - ☐ 2. 19
 - ☐ 3. 18
 - ☒ 4. 21

Question ID : 26433061343

Status : Not Answered

Chosen Option : --

Q.16 A, B और C एक कार्य को क्रमशः 20 दिन, 40 दिन और 60 दिन में पूरा कर सकते हैं। B से शुरू करते हुए कार्य में A, एकांतर दिन पर, B और C की सहायता लेता है, तो कार्य को कितने दिनों में पूरा किया जाएगा?

- Ans ☒ 1. 15
- ☒ 2. 18
- ☒ 3. 12
- ☒ 4. 20

Question ID : 26433063245
Status : Not Answered
Chosen Option : --

Q.17 Find the HCF of 110, 180 and 540.

- Ans ☒ 1. 10
- ☒ 2. 1
- ☒ 3. 5
- ☒ 4. 3

Question ID : 26433063661
Status : Answered
Chosen Option : 3

Q.18 There are 160 students in a class. Out of them, 70 are girls. Find the percentage of girls in the class?

- Ans ☒ 1. 44.75%
- ☒ 2. 43.75%
- ☒ 3. 42.75%
- ☒ 4. 45.75%

Question ID : 26433058661
Status : Answered
Chosen Option : 2

Q.19 If $21 : 60 :: 7 : x$, then what is the value of x ?

- Ans ☒ 1. 20
- ☒ 2. 19
- ☒ 3. 22
- ☒ 4. 21

Question ID : 26433061352
Status : Answered
Chosen Option : 1

Q.20 A milkman borrowed a sum of ₹2,500 from two moneylenders for one loan on simple interest at the rate of 5% and 7%, respectively, for a period of 2 years. If the total interest paid by him was ₹276, then how much did he borrow at the rate of 7% p.a.?

- Ans ☒ 1. ₹700
- ☒ 2. ₹675
- ☒ 3. ₹650
- ☒ 4. ₹550

Question ID : 26433058796
Status : Not Answered
Chosen Option : --

Q.1 Select the set in which the numbers are related in the same way as are the numbers of the following sets.

(NOTE: Operations should be performed on the whole numbers, without breaking down the numbers into its constituent digits. E.g. 13 – Operations on 13 such as adding /deleting /multiplying etc. to 13 can be performed. Breaking down 13 into 1 and 3 and then performing mathematical operations on 1 and 3 is not allowed.)

(209, 155, 116)

(184, 130, 91)

- Ans ☒ 1. (177, 122, 90)
- ☒ 2. (162, 110, 81)
- ☒ 3. (147, 92, 48)
- ☒ 4. (156, 102, 63)

Question ID : 26433057597

Status : Not Answered

Chosen Option : --

Q.2 Six friends - U,V,W,X,Y and Z - are seated in a row, facing north. Exactly two people are seated to the left of W. U is second to the left of W. Exactly three people are seated between U and X. X is an immediate neighbour of Z and Y. Neither V nor Z is sitting at either of the ends. If Y and U decide to swap their seats, what is the new position of Y?

- Ans ☒ 1. Third to the left of Z
- ☒ 2. Third to the right of V
- ☒ 3. Immediate right of X
- ☒ 4. Second to the right of W

Question ID : 26433068824

Status : Not Answered

Chosen Option : --

Q.3 Three of the following letter-clusters are alike in some manner and hence form a group. Which letter-cluster does not belong to that group?

- Ans ☒ 1. XCVG
- ☒ 2. WDUH
- ☒ 3. ZAXE
- ☒ 4. TGRC

Question ID : 26433056177

Status : Answered

Chosen Option : 4

Q.4 Select the correct combination of mathematical signs to sequentially replace the * signs and to balance the given equation.

$35 * 7 * 12 * 6 * 8 * 41$

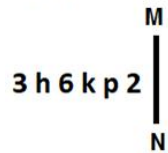
- Ans ☒ 1. +, -, +, x, =
- ☒ 2. +, -, x, +, =
- ☒ 3. x, -, +, +, =
- ☒ 4. +, x, -, +, =

Question ID : 26433056937

Status : Answered

Chosen Option : 1

Q.5 Select the correct mirror image of the given figure when the mirror is placed at MN as shown below.



- Ans
- ☒ 1. z b k a n e
 - ☒ 2. s p k g y e
 - ☒ 3. z b k a n e
 - ☒ 4. s p k g y e

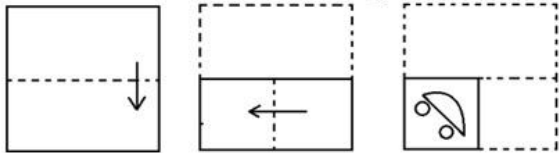
Question ID : 26433056994
Status : Answered
Chosen Option : 4

Q.6 ध्यान ने एक व्यक्ति की तस्वीर की ओर इशारा करते हुए कहा, "यह व्यक्ति मेरी बहन के इकलौते भाई की बेटी का भाई है।" ध्यान का तस्वीर में दिख रहे व्यक्ति से क्या संबंध है?

- Ans
- ☒ 1. चाचा ससुर
 - ☒ 2. पिता
 - ☒ 3. चाचा
 - ☒ 4. ससुर


Question ID : 26433057710
Status : Answered
Chosen Option : 2

Q.7 The sequence of folding a piece of paper and the manner in which the folded paper has been cut is shown below. Choose the figure that would most closely resemble the unfolded form of the paper.




Ans


✓ 1.



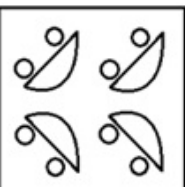
✗ 2.



✗ 3.



✗ 4.



Question ID : 26433067445

Status : Answered

Chosen Option : 1

Q.8 'P @ Q' means 'P is the sister of Q'
'P & Q' means 'P is the mother of Q'
'P # Q' means 'P is the husband of Q'

If 'A # B & C @ D # E', then how is E related to B?

Ans ✓ 1. Son's wife

✗ 2. Husband's father

✗ 3. Daughter

✗ 4. Daughter's husband

Question ID : 26433056805

Status : Answered

Chosen Option : 2

Q.9 In a certain code language, 'LUXURY' is written as 'PRARUU' and 'MANAGE' is written as 'QGQXAA'. How will 'SILENT' be written in that language?

- Ans ☒ 1. WNBOIP
☒ 2. PNBOSW
☒ 3. WNOBIP
☒ 4. PNBIOW

Question ID : 26433055917
Status : Not Answered
Chosen Option : --

Q.10 सात लोग A, B, C, D, E, F और G सीधी रेखा में उत्तर की ओर मुख करके बैठे हैं। केवल दो लोग G के दाएँ बैठे हैं। केवल तीन लोग A और G के बीच बैठे हैं। F, D के दाएँ दूसरे स्थान पर बैठा है। D बिल्कुल G के ठीक निकटस्थ नहीं है। B, C के दाएँ तीसरे स्थान पर बैठा है। रेखा के बिल्कुल दाएँ किनारे कौन बैठा है?

- Ans ☒ 1. F
☒ 2. B
☒ 3. E
☒ 4. C

Question ID : 26433076525
Status : Answered
Chosen Option : 2

Q.11 Select the number from among the given options that can replace the question mark (?) in the following series.
78, 142, 174, ?, 198, 202

- Ans ☒ 1. 190
☒ 2. 192
☒ 3. 194
☒ 4. 196

Question ID : 26433057041
Status : Answered
Chosen Option : 1

Q.12 In this question, three statements are given, followed by two conclusions numbered I and II. Assuming the statements to be true, even if they seem to be at variance with commonly known facts, decide which of the conclusion(s) logically follow(s) from the statements.

Statements:
All pistons are rubbers.
Some rubbers are nuts.
All nuts are calipers.

Conclusions:
I. Some calipers are rubbers.
II. All pistons are nuts.

- Ans ☒ 1. Only conclusion I follows.
☒ 2. Both conclusions I and II follow.
☒ 3. Only conclusion II follows.
☒ 4. Neither conclusion I nor II follows.

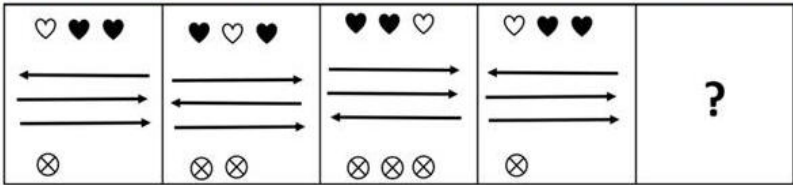
Question ID : 26433057839
Status : Answered
Chosen Option : 1

Q.13 Select the option that is related to the fifth letter-cluster in the same way as the second letter-cluster is related to the first letter-cluster and the fourth letter-cluster is related to the third letter-cluster.
TEACHERS : XHCDLHTT :: STUDENTS : WWWIQVT :: MEETINGS : ?

- Ans
- ☒ 1. QHGUNQIT
 - ☒ 2. QHGUMRIT
 - ☒ 3. QIGUNQIT
 - ☒ 4. QHGUMQIT

Question ID : 26433057253
Status : Answered
Chosen Option : 4

Q.14 Select the figure that will replace the question mark (?) in the following figure series.



Ans

- ☒ 1.
- ☒ 2.
- ☒ 3.
- ☒ 4.

Question ID : 26433056107
Status : Answered
Chosen Option : 1

Q.15 Select the option that represents the correct order of the given words as they would appear in an English dictionary.

- 1. Glamorous
- 2. Glow
- 3. Glacier
- 4. Glitter
- 5. Glaze
- 6. Gleam

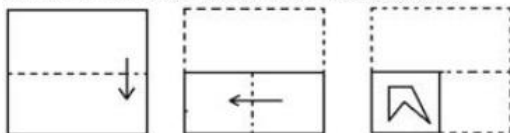
Ans ☒ 1. 3, 5, 1, 6, 4, 2
☒ 2. 3, 1, 6, 5, 4, 2
☒ 3. 3, 1, 5, 4, 6, 2
☒ 4. 3, 1, 5, 6, 4, 2

Question ID : 26433056731

Status : Answered

Chosen Option : 4

Q.16 The sequence of folding a piece of paper and the manner in which the folded paper has been cut is shown below. Choose the figure that would most closely resemble the unfolded form of the paper.



Ans

- ☒ 1.
- ☒ 2.
- ☒ 3.
- ☒ 4.

Question ID : 26433067439

Status : Answered

Chosen Option : 2

Q.17 Select the set in which the numbers are related in the same way as are the numbers of the following sets.

(NOTE: Operations should be performed on the whole numbers, without breaking down the numbers into its constituent digits. E.g. 13 – Operations on 13 such as adding/deleting/multiplying etc. to 13 can be performed. Breaking down 13 into 1 and 3 and then performing mathematical operations on 1 and 3 is not allowed.)

(31, 59, 40)

(56, 83, 39)

Ans ☒ 1. (41, 74, 45)

☐ 2. (38, 89, 42)

☐ 3. (45, 90, 47)

☐ 4. (29, 71, 42)

Question ID : 26433057602

Status : Not Answered

Chosen Option : --

Q.18 Select the option that represents the letters that, when sequentially placed from left to right in the following blanks, will complete the letter-series.

Y _ R E _ Y T _ _ Q _ T R _ Q Y T _ E _

Ans ☐ 1. TRQEYERQ

☐ 2. TTREYERR

☒ 3. TQREYERQ

☐ 4. TQYEYERQ

Question ID : 26433056148

Status : Answered

Chosen Option : 3

Q.19 Which two signs should be interchanged to make the given equation correct?

$84 - 21 + 78 \div 15 \times 3 = 37$

Ans ☒ 1. \div and $-$

☐ 2. $+$ and \times

☐ 3. $+$ and $-$

☐ 4. \times and \div

Question ID : 26433056859

Status : Answered

Chosen Option : 1

Q.20 In a certain code language, 'PLANT' is written as 'KNZPG' and 'PAPER' is written as 'KCKGI'. How will 'PRINT' be written in that language?

Ans ☐ 1. KTSPG

☐ 2. KTRMG

☐ 3. KSRPG

☒ 4. KTRPG

Question ID : 26433057276

Status : Answered

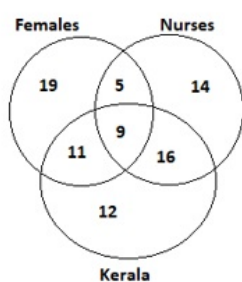
Chosen Option : 4

Q.21 Select the option that is related to the fifth term in the same way as the second term is related to the first term and the fourth term is related to the third term.
HOUSES : HRUVEV :: ACTORS : AFTRRV :: SHORTS : ?

- Ans ☒ 1. SKOUTV
☒ 2. SLOUTV
☒ 3. RKOUTV
☒ 4. SLOUVT

Question ID : 26433057984
Status : Answered
Chosen Option : 1

Q.22 Study the given diagram carefully and answer the question. The numbers in different sections indicate the number of persons.



How many such nurses are there who are from Kerala?

- Ans ☒ 1. 16
☒ 2. 9
☒ 3. 11
☒ 4. 25

Question ID : 26433070406
Status : Answered
Chosen Option : 4

Q.23 Which letter cluster will replace the question mark(?) to complete the given series?

PUCH, QTDG, RSEF, SRFE, ?.

- Ans ☒ 1. GDQT
☒ 2. TQGD
☒ 3. TQGC
☒ 4. GTCA

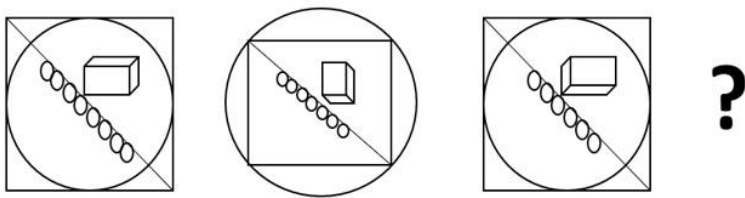
Question ID : 26433065591
Status : Answered
Chosen Option : 2

Q.24 Which of the following numbers will replace the question mark (?) in the given series?
367, 338, ?, 268, 227, 182

- Ans ☒ 1. 305
☒ 2. 308
☒ 3. 317
☒ 4. 309

Question ID : 26433057557
Status : Answered
Chosen Option : 1

Q.25 Select the figure that will come next in the following figure series.



Ans

- ☒ 1.
- ☒ 2.
- ☒ 3.
- ☒ 4.

Question ID : 26433057530
Status : Answered
Chosen Option : 2

Q.1 Select the most appropriate homonym to fill in the blank.

Leaving his friend, Ramu said, "Next time we meet, I will _____ you a drink".

- Ans
- ☒ 1. bye
 - ☒ 2. bi
 - ☒ 3. by
 - ☒ 4. buy

Question ID : 26433058384
Status : Answered
Chosen Option : 4

Q.2 Select the most appropriate option to fill in the blank.

Global warming is caused by the _____ of certain gases, called greenhouse gases, in the atmosphere.

- Ans
- ☒ 1. disintegration
 - ☒ 2. accumulation
 - ☒ 3. Progress
 - ☒ 4. development

Question ID : 26433058347
Status : Answered
Chosen Option : 2

Q.3 Select the most appropriate option that can substitute the underlined segment in the given sentence. If there is no need to substitute it, select 'No substitution'.

If you heat the ice cube, it will melt.

- Ans
- ☒ 1. would have melt
 - ☒ 2. would melt
 - ☒ 3. No substitution
 - ☒ 4. melts

Question ID : 26433072297
Status : Answered
Chosen Option : 2

Q.4 Select the most appropriate meaning of the given idiom.
A blessing in disguise

- Ans
- ☒ 1. A good thing that seemed bad at first
 - ☒ 2. To train for success
 - ☒ 3. A rare happening
 - ☒ 4. To be successful at everything

Question ID : 26433066116
Status : Answered
Chosen Option : 4

Q.5 Select the most appropriate option that can substitute the underlined segment in the given sentence. If there is no need to substitute it, select 'No substitution required'.

I wish that I will have enough support.

- Ans
- ☒ 1. I will be having enough support
 - ☒ 2. No substitution required
 - ☒ 3. I have enough support
 - ☒ 4. I had enough support

Question ID : 26433063629
Status : Answered
Chosen Option : 1

Q.6 Select the most appropriate option to fill in the blank.

During the night, the houses and trees along with the banks of the river were _____ in the silvery moonlight.

@Qmaths

- Ans
- ☒ 1. seen
 - ☒ 2. bathed
 - ☒ 3. glowed
 - ☒ 4. filled

Question ID : 26433072410
Status : Answered
Chosen Option : 3

Q.7 Select the most appropriate synonym of the underlined word in the given sentence. Gopinath exhibited his boxing skills at the World Boxing Championship.

- Ans
- ☒ 1. portrayed
 - ☒ 2. gave
 - ☒ 3. displayed
 - ☒ 4. inhibited

Question ID : 26433055504
Status : Answered
Chosen Option : 3





Q.8 Select the most appropriate ANTONYM of the underlined word.

In the village, he is known for his veracity.

- Ans
- ☒ 1. Dependability
 - ☒ 2. Honesty
 - ☒ 3. Deceit
 - ☒ 4. Sluggishness

Question ID : 26433063638
Status : Answered
Chosen Option : 2





Q.9 Select the most appropriate meaning of the given idiom.
When it rains, it pours

- Ans  1. Problems seem to happen together
-  2. Extremely poor weather
-  3. Problems are part of life
-  4. Both good and bad news conveyed at the same time

Question ID : 26433066135
Status : Answered
Chosen Option : 4

Q.10 Sentences of a paragraph are given below in jumbled order. Arrange the sentences in the correct order to form a meaningful and coherent paragraph.

- A.Once upon a time, a traditional classroom consisted of 30-40 students sitting and listening to teacher lectures for a couple of hours.
- B.Classrooms are becoming more technologically advanced through the addition of digital educational tools such as laptops, printers and LCD projectors.
- C.Nowadays, the typical learning process and the structure of classrooms are gradually shifting.
- D.Recently, over 12,000 schools in 560 districts in India have implemented smart classes.

- Ans  1. ADCB
-  2. DBAC
-  3. CDAB
-  4. ACDB

Question ID : 26433070629
Status : Answered
Chosen Option : 4

Q.11 Select the most appropriate option to fill in the blank.
The _____ mind seeks some mechanism of escape and the senses get dulled from repeated shocks.

- Ans  1. is torturing
-  2. tortures
-  3. tortured
-  4. have tortured

Question ID : 26433063556
Status : Answered
Chosen Option : 3

Q.12 Sentences of a paragraph are given below in jumbled order. Arrange the sentences in the correct order to form a meaningful and coherent paragraph.

A. Suddenly, I noticed a very obvious error in the sequence and for an instant I concentrated my attention on the lesson and tried to think without even knowing the meaning of the word 'think'.

B. Finally, Miss Sullivan touched my forehead and spelled with decided emphasis, 'Think' and then in a flash I knew the word was the name of the process that was going on in my head.

C. A day or two afterward, I was stringing beads of different sizes in symmetrical groups – two large beads, three small ones and so on.

D. I made many mistakes, and Miss Sullivan pointed them out again and again with gentle patience.

Ans ☒ 1. CDAB

☒ 2. DCBA

☒ 3. ACDB

☒ 4. BDAC

Question ID : 26433058269

Status : Answered

Chosen Option : 3

Q.13 The following sentence has been divided into parts. One of them may contain an error. Select the part that contains the error from the given options. If you don't find any error, mark 'No error' as your answer.

Tom ran across the road / and almost got run on / by a car.

Ans ☒ 1. by a car

☒ 2. No error

☒ 3. and almost got run on

☒ 4. Tom ran across the road

Question ID : 26433061477

Status : Answered

Chosen Option : 3

Q.14 Select the most appropriate option that can substitute the underlined segment in the given sentence. If there is no need to substitute it, select 'No substitution required'.

Swetha writes poems in English, does she?

Ans ☒ 1. don't she?

☒ 2. doesn't she?

☒ 3. No substitution required

☒ 4. isn't it?

Question ID : 26433063623

Status : Answered

Chosen Option : 4

Q.15 Select the most appropriate option to fill in the blank.

Whales breathe _____ blowholes; baleen whales have two and toothed whales have one.

Ans ☒ 1. via

☒ 2. by

☒ 3. throughout

☒ 4. by way of

Question ID : 26433060778

Status : Answered

Chosen Option : 2

Q.16 Select the most appropriate synonym of the underlined word.

We should never procrastinate in order to see success.

- Ans ☒ 1. Refuse
☒ 2. Accept
☒ 3. Postpone
☒ 4. Speedup

Question ID : 26433058310
Status : Answered
Chosen Option : 1

Q.17 Select the INCORRECTLY spelt word.

- Ans ☒ 1. Paramilitary
☒ 2. Contemporary
☒ 3. Necessary
☒ 4. Accessory

Question ID : 26433055468
Status : Answered
Chosen Option : 2

Q.18 Select the most appropriate option that can substitute the underlined segment in the given sentence.

We have to complet our work today.

- Ans ☒ 1. compete
☒ 2. completion
☒ 3. complement
☒ 4. complete

Question ID : 26433058311
Status : Answered
Chosen Option : 4

Q.19 Select the most appropriate homonym to fill in the blank.

The _____ of a cow is used as manure.

- Ans ☒ 1. don
☒ 2. dun
☒ 3. dunk
☒ 4. dung

Question ID : 26433058377
Status : Answered
Chosen Option : 4

Q.20 The following sentence has been divided into parts. One of them may contain an error. Select the part that contains the error from the given options. If you don't find any error, mark 'No error' as your answer.

In the dark night, / the stars could be / seen clear.

- Ans ☒ 1. No error
☒ 2. In the dark night
☒ 3. seen clear
☒ 4. the stars could be

Question ID : 26433061464

Status : Answered

Chosen Option : 2

Comprehension:

In the following passage, some words have been deleted. Read the passage carefully and select the most appropriate option to fill in each blank.

Given a 1._____ bed, I sleep like a baby. But like a baby I am inclined to wake up at midnight or at one in the morning, feeling rather hungry. And for this purpose, I keep a bar of chocolate on my bedside table.

There's 2._____ like a chunk of chocolate in the middle of the night. It helps me feel that all's right with the world, and I fall asleep again to dream of cricket bats made of chocolate and rainbows made of sugar candy. You must try it sometime, those of you who find 3._____ in sleeping.

But a few nights ago, I woke up prematurely to hear something 4._____ away on my bedside table. Katr-katr, katr-katr, came the ominous sound.

I switched on the bedside lamp, and there sat a fat rat, nibbling away at my chocolate!

Now I am generous with most things, and I am happy to share my chocolates with you, gentle reader, but I draw the line at rodents. So I flung a slipper at the rat, who dodged it and took off with some reluctance, and then I had to throw away the remains of the chocolate for 5._____ of catching rat fever or something horrible..

SubQuestion No : 21

Q.21 Select the most appropriate option to fill in blank no. 1.

- Ans ☒ 1. hot
☒ 2. cold
☒ 3. lumpy
☒ 4. warm

Question ID : 26433059010

Status : Answered

Chosen Option : 3

Comprehension:

In the following passage, some words have been deleted. Read the passage carefully and select the most appropriate option to fill in each blank.

Given a 1._____ bed, I sleep like a baby. But like a baby I am inclined to wake up at midnight or at one in the morning, feeling rather hungry. And for this purpose, I keep a bar of chocolate on my bedside table.

There's 2._____ like a chunk of chocolate in the middle of the night. It helps me feel that all's right with the world, and I fall asleep again to dream of cricket bats made of chocolate and rainbows made of sugar candy. You must try it sometime, those of you who find 3._____ in sleeping.

But a few nights ago, I woke up prematurely to hear something 4._____ away on my bedside table. Katr-katr, katr-katr, came the ominous sound.

I switched on the bedside lamp, and there sat a fat rat, nibbling away at my chocolate!

Now I am generous with most things, and I am happy to share my chocolates with you, gentle reader, but I draw the line at rodents. So I flung a slipper at the rat, who dodged it and took off with some reluctance, and then I had to throw away the remains of the chocolate for 5._____ of catching rat fever or something horrible..

SubQuestion No : 22

Q.22 Select the most appropriate option to fill in blank no. 2.

- Ans  1. nothing
-  2. anything
-  3. nobody
-  4. something

Question ID : 26433059011

Status : Answered

Chosen Option : 4

Comprehension:

In the following passage, some words have been deleted. Read the passage carefully and select the most appropriate option to fill in each blank.

Given a 1._____ bed, I sleep like a baby. But like a baby I am inclined to wake up at midnight or at one in the morning, feeling rather hungry. And for this purpose, I keep a bar of chocolate on my bedside table.

There's 2._____ like a chunk of chocolate in the middle of the night. It helps me feel that all's right with the world, and I fall asleep again to dream of cricket bats made of chocolate and rainbows made of sugar candy. You must try it sometime, those of you who find 3._____ in sleeping.





But a few nights ago, I woke up prematurely to hear something 4._____ away on my bedside table. Katr-katr, katr-katr, came the ominous sound.

I switched on the bedside lamp, and there sat a fat rat, nibbling away at my chocolate!

Now I am generous with most things, and I am happy to share my chocolates with you, gentle reader, but I draw the line at rodents. So I flung a slipper at the rat, who dodged it and took off with some reluctance, and then I had to throw away the remains of the chocolate for 5._____ of catching rat fever or something horrible..

SubQuestion No : 23

Q.23 Select the most appropriate option to fill in blank no. 3.

- Ans  1. no problems
-  2. difficulty
-  3. facility
-  4. ease

Question ID : 26433059012

Status : Answered

Chosen Option : 2

Comprehension:

In the following passage, some words have been deleted. Read the passage carefully and select the most appropriate option to fill in each blank.

Given a 1._____ bed, I sleep like a baby. But like a baby I am inclined to wake up at midnight or at one in the morning, feeling rather hungry. And for this purpose, I keep a bar of chocolate on my bedside table.

There's 2._____ like a chunk of chocolate in the middle of the night. It helps me feel that all's right with the world, and I fall asleep again to dream of cricket bats made of chocolate and rainbows made of sugar candy. You must try it sometime, those of you who find 3._____ in sleeping.





But a few nights ago, I woke up prematurely to hear something 4._____ away on my bedside table. Katr-katr, katr-katr, came the ominous sound.

I switched on the bedside lamp, and there sat a fat rat, nibbling away at my chocolate!

Now I am generous with most things, and I am happy to share my chocolates with you, gentle reader, but I draw the line at rodents. So I flung a slipper at the rat, who dodged it and took off with some reluctance, and then I had to throw away the remains of the chocolate for 5._____ of catching rat fever or something horrible..

SubQuestion No : 24

Q.24 Select the most appropriate option to fill in blank no. 4.

- Ans  1. eating
 2. gobbling
 3. nibbling
 4. munching

Question ID : 26433059013

Status : Answered

Chosen Option : 3

Comprehension:

In the following passage, some words have been deleted. Read the passage carefully and select the most appropriate option to fill in each blank.

Given a 1._____ bed, I sleep like a baby. But like a baby I am inclined to wake up at midnight or at one in the morning, feeling rather hungry. And for this purpose, I keep a bar of chocolate on my bedside table.

There's 2._____ like a chunk of chocolate in the middle of the night. It helps me feel that all's right with the world, and I fall asleep again to dream of cricket bats made of chocolate and rainbows made of sugar candy. You must try it sometime, those of you who find 3._____ in sleeping.


But a few nights ago, I woke up prematurely to hear something 4._____ away on my bedside table. Katr-katr, katr-katr, came the ominous sound.

I switched on the bedside lamp, and there sat a fat rat, nibbling away at my chocolate!

Now I am generous with most things, and I am happy to share my chocolates with you, gentle reader, but I draw the line at rodents. So I flung a slipper at the rat, who dodged it and took off with some reluctance, and then I had to throw away the remains of the chocolate for 5._____ of catching rat fever or something horrible..

SubQuestion No : 25

Q.25 Select the most appropriate option to fill in blank no. 5.

- Ans  1. revulsion
 2. disgust
 3. fear
 4. lonely

Question ID : 26433059014

Status : Answered

Chosen Option : 3

Q.1 Which of the following font style is not available in the MS-Excel 2010 font dialog box?

- Ans ☒ 1. Superbold
☒ 2. Italic
☒ 3. Bold
☒ 4. Regular

Question ID : 26433095489
Status : Answered
Chosen Option : 1

Q.2 In MS-Excel 2010 a _____ is a table of grouped values that aggregates the individual items of a more extensive table within one or more discrete categories.

- Ans ☒ 1. Bar
☒ 2. Spreadsheet
☒ 3. Line
☒ 4. Pivot table

Question ID : 26433095443
Status : Answered
Chosen Option : 4

Q.3 Which of the following alignment option will distribute your text evenly between the margins in MS-Word 2010?

- Ans ☒ 1. Align Right
☒ 2. Align Left
☒ 3. Justify
☒ 4. Center

Question ID : 26433095363
Status : Answered
Chosen Option : 4

Q.4 The _____ field of an e-mail indicates the receiver of that e-mail.

- Ans ☒ 1. From
☒ 2. Signature
☒ 3. Subject
☒ 4. To

Question ID : 26433095475
Status : Answered
Chosen Option : 4

Q.5 In MS-Word 2010, _____ cells means that the adjacent cells are thereafter treated as a single cell, even though they did not start as a single cell.

- Ans ☒ 1. Merging
☒ 2. Formatting
☒ 3. Editing
☒ 4. Splitting

Question ID : 26433095383
Status : Answered
Chosen Option : 1

Q.6 What is the output of the following expression in MS-Excel 2010?
 $= 9 / 6 * 4 + 3 - 1$

- Ans
- ☒ 1. 12
 - ☒ 2. 6
 - ☒ 3. 10
 - ☒ 4. 8

Question ID : 26433095290
Status : Answered
Chosen Option : 4

Q.7 In MS-Word 2010, the _____ is a small, customisable toolbar that displays frequently used commands like Save, Undo, Redo, etc.

- Ans
- ☒ 1. Ribbon
 - ☒ 2. Quick Access toolbar
 - ☒ 3. Title bar
 - ☒ 4. File tab

Question ID : 26433095332
Status : Answered
Chosen Option : 2

Q.8 Choose the wrong option in relation to cell:

- Ans
- ☒ 1. Any information you enter in a spreadsheet will be stored in a cell.
 - ☒ 2. Cells can contain text, such as letters, numbers but not dates.
 - ☒ 3. Cells can contain text, such as letters, numbers, and dates.
 - ☒ 4. Cells can contain formatting attributes that change the way letters, numbers, and dates are displayed

Question ID : 26433095404
Status : Answered
Chosen Option : 2

Q.9 _____ is the intercompany communication of business documents in a standard format.

- Ans
- ☒ 1. Electronic Data Instruction
 - ☒ 2. Electronic Data Interchange
 - ☒ 3. Emergency data Interchange
 - ☒ 4. Electronic Data Information

Question ID : 26433095507
Status : Answered
Chosen Option : 4

Q.10 Which of the following is not a service provided by Internet?

- Ans
- ☒ 1. Ethernet
 - ☒ 2. FTP
 - ☒ 3. World Wide Web
 - ☒ 4. Email

Question ID : 26433095366
Status : Answered
Chosen Option : 1