



Question Paper Preview

Notations :

- Options shown in green color and with  icon are correct.
- Options shown in red color and with  icon are incorrect.

Question Paper Name:	TGT SOCIAL SCIENCE FEMALE 16th Oct 2018 Shift 1
Subject Name:	TGT SOCIAL SCIENCE FEMALE
Creation Date:	2018-10-16 12:17:30
Duration:	120
Total Marks:	200
Display Marks:	Yes
Share Answer Key With Delivery Engine:	Yes
Actual Answer Key:	Yes
Calculator:	None
Magnifying Glass Required?:	No
Ruler Required?:	No
Eraser Required?:	No
Scratch Pad Required?:	No
Rough Sketch/Notepad Required?:	No
Protractor Required?:	No
Show Watermark on Console?:	No
Highlighter:	No
Auto Save on Console?:	No

Mental Ability

Group Number :	1
Group Id :	167943754
Group Maximum Duration :	0
Group Minimum Duration :	0
Revisit allowed for view? :	No
Revisit allowed for edit? :	No
Break time:	0
Group Marks:	20
Revisit allowed for group Instructions? :	Yes
Maximum Instruction Time:	0
Minimum Instruction Time:	0

Mental Ability

Section Id :	167943819
Section Number :	1
Section type :	Online
Mandatory or Optional:	Mandatory
Number of Questions:	20
Number of Questions to be attempted:	20
Section Marks:	20

Display Number Panel:

Yes

Group All Questions:

No

Sub-Section Number:

1

Sub-Section Id:

1679431261

Question Shuffling Allowed :

Yes

Question Number : 1 Question Id : 16794319791 Question Type : MCQ Option Shuffling : Yes Display Question Number : Yes
Single Line Question Option : No Option Orientation : Vertical

Correct Marks : 1 Wrong Marks : 0.25

Choose the odd word pair from the given options.

Options :

1. ✖ Anemometer : Wind
2. ✖ Seismograph : Earthquakes
3. ✖ Thermometer : Temperature
4. ✔ Hygrometer : Current

Question Number : 1 Question Id : 16794319791 Question Type : MCQ Option Shuffling : Yes Display Question Number : Yes
Single Line Question Option : No Option Orientation : Vertical

Correct Marks : 1 Wrong Marks : 0.25

दिए गए विकल्पों से विषम शब्द जोड़ी चुनें।

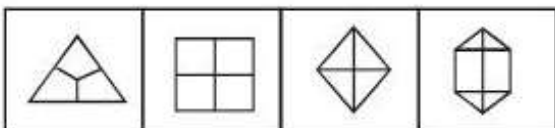
Options :

1. ✖ एनीमोमीटर : हवा
2. ✖ सिस्मोग्राफ : भूकंप
3. ✖ थर्मामीटर : तापमान
4. ✔ हाइग्रोमीटर : विद्युत धारा

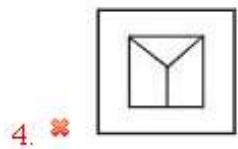
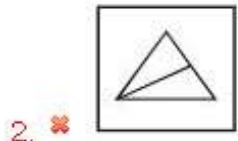
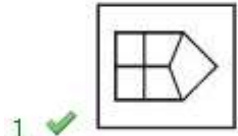
Question Number : 2 Question Id : 16794319792 Question Type : MCQ Option Shuffling : Yes Display Question Number : Yes
Single Line Question Option : No Option Orientation : Vertical

Correct Marks : 1 Wrong Marks : 0.25

Identify the option figure that is similar to the below figures.



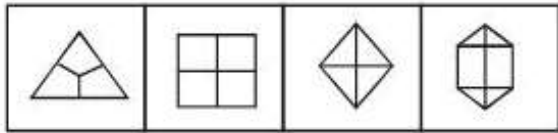
Options :



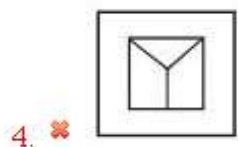

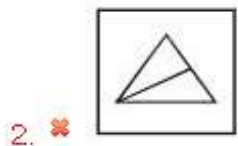
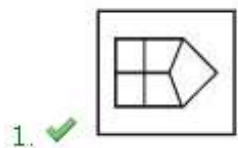
Question Number : 2 Question Id : 16794319792 Question Type : MCQ Option Shuffling : Yes Display Question Number : Yes
Single Line Question Option : No Option Orientation : Vertical

Correct Marks : 1 Wrong Marks : 0.25

नीचे दी गई आकृति के समान विकल्प आकृति की पहचान करें।



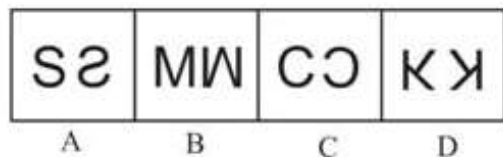
Options :



Question Number : 3 Question Id : 16794319793 Question Type : MCQ Option Shuffling : Yes Display Question Number : Yes
Single Line Question Option : No Option Orientation : Vertical

Correct Marks : 1 Wrong Marks : 0.25

Given below are a few images. Identify the different image among the options.



Options :

1. ✖ A

2. ✔ B

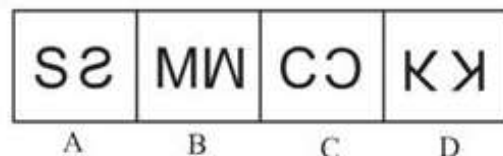
3. ✖ C

4. ✖ D

Question Number : 3 Question Id : 16794319793 Question Type : MCQ Option Shuffling : Yes Display Question Number : Yes
Single Line Question Option : No Option Orientation : Vertical

Correct Marks : 1 Wrong Marks : 0.25

नीचे दी गई कुछ छवियां दी गई हैं। विकल्पों के बीच सबसे अलग छवि की पहचान करें।



Options :

1. ✖ A

2. ✔ B

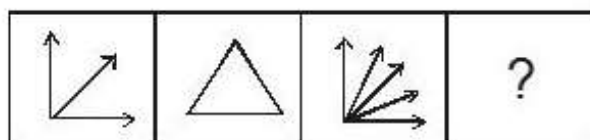
3. ✖ C

4. ✖ D


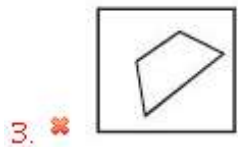
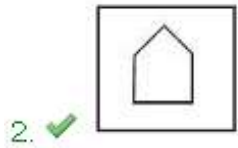
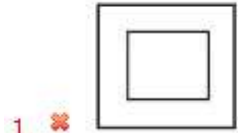
Question Number : 4 Question Id : 16794319794 Question Type : MCQ Option Shuffling : Yes Display Question Number : Yes
Single Line Question Option : No Option Orientation : Vertical

Correct Marks : 1 Wrong Marks : 0.25

What will come in the below series in place of question mark?



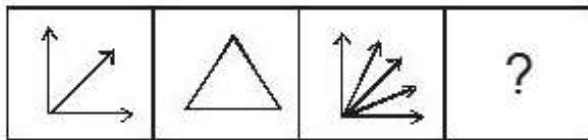
Options :



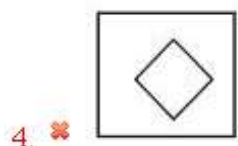
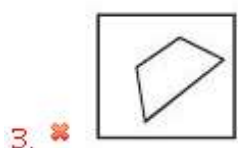
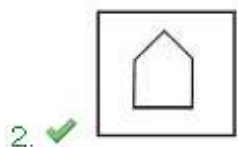
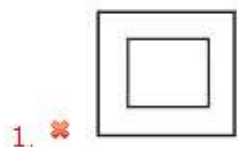
Question Number : 4 Question Id : 16794319794 Question Type : MCQ Option Shuffling : Yes Display Question Number : Yes
Single Line Question Option : No Option Orientation : Vertical

Correct Marks : 1 Wrong Marks : 0.25

नीचे दी गई श्रृंखला में प्रश्न चिह्न के स्थान पर क्या आएगा?



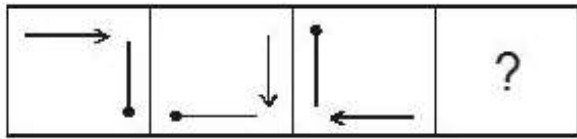
Options :




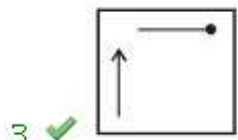
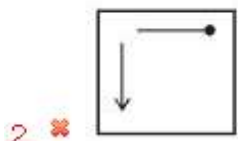
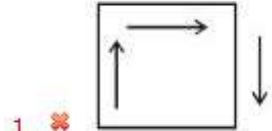
Question Number : 5 Question Id : 16794319795 Question Type : MCQ Option Shuffling : Yes Display Question Number : Yes
Single Line Question Option : No Option Orientation : Vertical

Correct Marks : 1 Wrong Marks : 0.25

What will come in the below series in place of question mark?



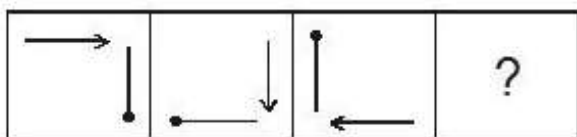
Options :



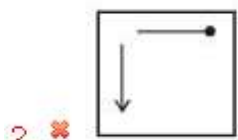
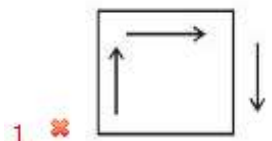
Question Number : 5 Question Id : 16794319795 Question Type : MCQ Option Shuffling : Yes Display Question Number : Yes
Single Line Question Option : No Option Orientation : Vertical

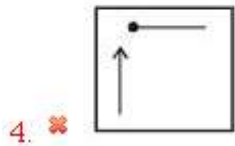
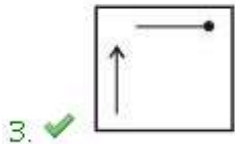
Correct Marks : 1 Wrong Marks : 0.25

नीचे दी गई श्रृंखला में प्रश्न चिह्न के स्थान पर क्या आएगा?



Options :

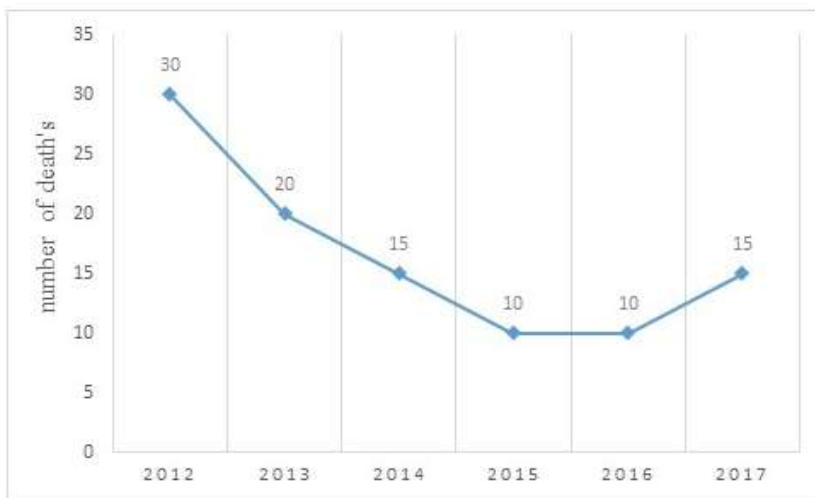




Question Number : 6 Question Id : 16794319796 Question Type : MCQ Option Shuffling : Yes Display Question Number : Yes
Single Line Question Option : No Option Orientation : Vertical

Correct Marks : 1 Wrong Marks : 0.25

The following graph shows information about the death rate because of dengue fever in a tribal village 'Z' for the past 6 years.



How many people died due to dengue fever in village 'Z' during 2015-2017?

Options :

1. ✗ 10

2. ✗ 25

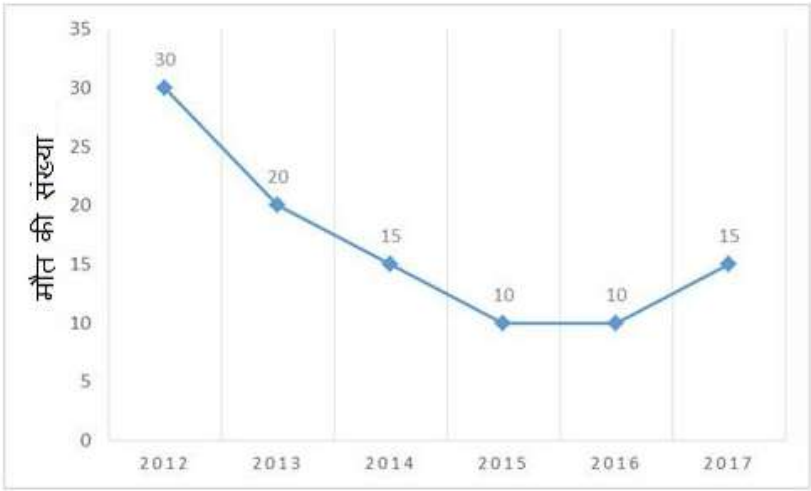
3. ✗ 30

4. ✓ 35

Question Number : 6 Question Id : 16794319796 Question Type : MCQ Option Shuffling : Yes Display Question Number : Yes
Single Line Question Option : No Option Orientation : Vertical

Correct Marks : 1 Wrong Marks : 0.25

निम्नलिखित ग्राफ में पिछले 6 वर्षों से आदिवासी गांव 'Z' में डेंगू बुखार की वजह से मृत्यु दर के बारे में जानकारी दी गई है।



2015-2017 के दौरान गांव 'जेड' में डेंगू बुखार के कारण कितने लोग मर गए?

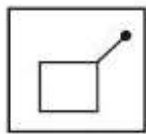
Options :

- 1. ✖ 10
- 2. ✖ 25
- 3. ✖ 30
- 4. ✔ 35

Question Number : 7 Question Id : 16794319797 Question Type : MCQ Option Shuffling : Yes Display Question Number : Yes Single Line Question Option : No Option Orientation : Vertical

Correct Marks : 1 Wrong Marks : 0.25

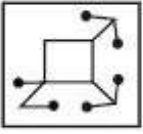
Spot the option figure that has the below figure embedded as part of it.



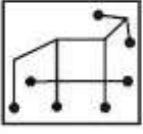
Options :

- 1. ✖
- 2. ✔

3.



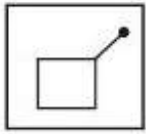
4.



Question Number : 7 Question Id : 16794319797 Question Type : MCQ Option Shuffling : Yes Display Question Number : Yes
Single Line Question Option : No Option Orientation : Vertical

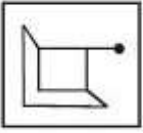
Correct Marks : 1 Wrong Marks : 0.25

उस विकल्प आकृति को चिन्हित करें जिसमे नीचे दी गई आकृति सन्निहित है।

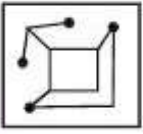


Options :

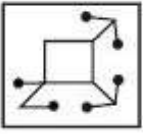
1.



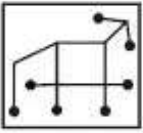
2.



3.



4.



Question Number : 8 Question Id : 16794319798 Question Type : MCQ Option Shuffling : Yes Display Question Number : Yes
Single Line Question Option : No Option Orientation : Vertical

Correct Marks : 1 Wrong Marks : 0.25

Study the following information carefully and answer the given questions.

For a recruitment process in an ACCOUNTING organization, the candidates need to possess the following qualifications criteria:

- (i) He/she should be a graduate in commerce with at least 60% marks.
- (ii) He/she must be of at least 24 years of age and not more than 40 years as on 1-7-2016.
- (iii) He/she must have a post-qualification work experience of at least 2 years.
- (iv) He/she should have secured 55% marks in the selection process.

However, if the candidate fulfills the above-mentioned criteria except:

(A) at (i), and if the candidate is not a graduate in commerce but has a post-graduation degree in finance with minimum of 60% marks, he/she should be referred to the Finance Manager of the organization.

(B) at (iii), and if the candidate fulfills all the eligibility criteria of post-qualification work experience but has secured 75% marks in the selection process, he/she may be referred to the Trainee Accountant.

Based on the above information, study carefully whether following candidates are eligible for the recruitment process and mark your answer as follows. You are not to assume anything other than the information provided in each question. All the cases are given to you as on 1-7-2016.

Nilesh Agarwal has done graduation in Commerce and has secured 67% marks in it. His date of birth is 6.7.1991. He has ranked fourth in the selection process and has secured 89% marks in it. He has three months of post-qualification work experience in accounts.

Options :

- 1. ✖ The candidate should be selected
- 2. ✖ The candidate is not to be selected
- 3. ✖ The candidate may be referred to the Finance Manager
- 4. ✔ The candidate may be referred to the Trainee Accountant

Question Number : 8 Question Id : 16794319798 Question Type : MCQ Option Shuffling : Yes Display Question Number : Yes
Single Line Question Option : No Option Orientation : Vertical

Correct Marks : 1 Wrong Marks : 0.25

नीचे दी गई जानकारी को ध्यानपूर्वक पढ़ें और दिए गए प्रश्नों का उत्तर दें।

एक लेखा संगठन में भर्ती प्रक्रिया के लिए, उम्मीदवारों के लिए निम्नलिखित योग्यता मानदंड की आवश्यकता है:

- (i) न्यूनतम 60% अंकों के साथ वाणिज्य में स्नातक।
- (ii) 1-7-2016 को उम्र कम से कम 24 साल और 40 साल से अधिक नहीं।
- (iii) उम्मीदवारों को शिक्षा के बाद कम से कम 2 वर्ष का कार्य अनुभव होना चाहिए।
- (iv) उम्मीदवारोंने चयन प्रक्रिया में 55% अंक प्राप्त करने चाहिए।

हालांकि, यदि उम्मीदवार उपर्युक्त मानदंडों को पूरा करता है तो इसे छोड़कर:

- (A) (i) के मामले में यदि उम्मीदवार वाणिज्य में स्नातक नहीं है लेकिन उसके पास वित्त में 60% अंक के साथ स्नातकोत्तर की डिग्री है, उसे संस्थान के वित्त प्रबंधक के पास संदर्भित किया जाना चाहिए।
- (B) (iii) के मामले में यदि उम्मीदवार शिक्षा के बाद कम से कम 2 वर्ष का कार्य अनुभव के पात्रता मापदंड को पूरा करता है, इतना ही नहीं वह चयन प्रक्रिया में 75% अंक अर्जित किया है, उसे प्रशिक्षु अकाउंटेंट के पास संदर्भित किया जाना चाहिए।

उपरोक्त सूचना के आधार पर ध्यानपूर्वक देखें कि निम्नलिखित उम्मीदवार चयन प्रक्रिया में पात्र हैं और अपने उत्तर नीचे अंकित करें। आपको नीचे हर प्रश्न दी गई सूचना के अलावा कुछ और नहीं सोचना है। आपको दिए गए सभी मामले 1-7-2016 के हैं।

नीलेश अग्रवाल ने वाणिज्य में स्नातक किया है और 67% अंक हासिल किया है। उसकी जन्म तिथि 6-7-1991 है। चयन प्रक्रिया में वह चौथे स्थान पर हैं और 89% अंक हासिल किये हैं। उसके पास तीन महीने का शिक्षा के बाद अकाउंटेंट्स का कार्यानुभव भी है।

Options :

- 1. ✖ उम्मीदवार का चयन किया जाना चाहिए
- 2. ✖ उम्मीदवार का चयन नहीं किया जाना चाहिए
- 3. ✖ उम्मीदवार को वित्त प्रबंधक के पास संदर्भित किया जा सकता है
- 4. ✔ उम्मीदवार को प्रशिक्षु अकाउंटेंट के पास संदर्भित किया जा सकता है

Correct Marks : 1 Wrong Marks : 0.25

You are invited for dinner at a reception party. Your friend asks you to eat one more sweet dish, but you are diabetic. What should be your most appropriate step?

Options :

1. ✖ Make a blunt refuse
2. ✖ Eat two more sweet dishes
3. ✔ Politely say that the food was too good and you have already eaten much
4. ✖ Shout at him

Question Number : 9 Question Id : 16794319799 Question Type : MCQ Option Shuffling : Yes Display Question Number : Yes
Single Line Question Option : No Option Orientation : Vertical

Correct Marks : 1 Wrong Marks : 0.25

आपको रिसेप्शन पार्टी में रात्रिभोज के लिए आमंत्रित किया जाता है। आपका दोस्त आपको एक और मीठा व्यंजन खाने के लिए कहता है, लेकिन आप मधुमेह के मरीज हैं। आपका सबसे उचित कदम क्या होना चाहिए?

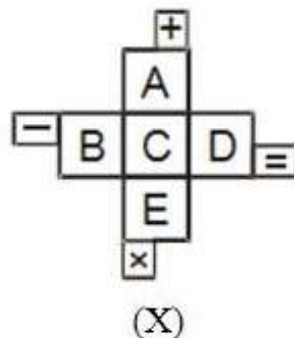
Options :

1. ✖ सीधे मना कर देना चाहिए
2. ✖ दो और मीठे व्यंजन खाना चाहिए
3. ✔ भोजन बहुत अच्छा था और आप पहले ही बहुत खा चुके हैं, शिष्टाचारपूर्वक यह कहना चाहिए
4. ✖ उस पर चिल्लाना चाहिए

Question Number : 10 Question Id : 16794319800 Question Type : MCQ Option Shuffling : Yes Display Question Number : Yes
Single Line Question Option : No Option Orientation : Vertical

Correct Marks : 1 Wrong Marks : 0.25

If a sheet of paper shown in figure (X) is folded to form a box, what will be the correct end result?



Options :

1. ✖ A & B are opposite faces

2. ✖ A & D are opposite faces

3. ✔

-	+
×	=

 & C are opposite faces

4. ✖

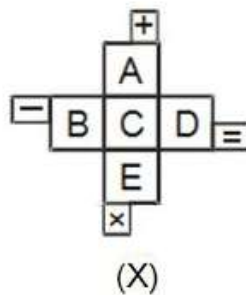
-	+
×	=

 & D are opposite faces

Question Number : 10 Question Id : 16794319800 Question Type : MCQ Option Shuffling : Yes Display Question Number : Yes
Single Line Question Option : No Option Orientation : Vertical

Correct Marks : 1 Wrong Marks : 0.25

यदि आकृति (X) में दिखाए गए पेपर शीट को बॉक्स बनाने के लिए मोड़ा गया है, तो सही अंत परिणाम क्या होगा?



Options :

1. ✖ A & B विपरीत फलक हैं

2. ✖ A & D विपरीत फलक हैं

3. ✔

-	+
×	=

 & C विपरीत फलक हैं

4. ✖

-	+
×	=

 & D विपरीत फलक हैं

Question Number : 11 Question Id : 16794319801 Question Type : MCQ Option Shuffling : Yes Display Question Number : Yes
Single Line Question Option : No Option Orientation : Vertical

Correct Marks : 1 Wrong Marks : 0.25

Identify the most appropriate option.

A book must contain:

Options :

1. ✖ Graphs

2. ✖ Equations and functions

3. ✖ Figures

4. ✔ Pages

Question Number : 11 Question Id : 16794319801 Question Type : MCQ Option Shuffling : Yes Display Question Number : Yes
Single Line Question Option : No Option Orientation : Vertical

Correct Marks : 1 Wrong Marks : 0.25

सबसे उपयुक्त विकल्प की पहचान करें।
एक पुस्तक में क्या होना चाहिए?

Options :

1. ✖ रेखांकन (ग्राफ)

2. ✖ समीकरण और फलन

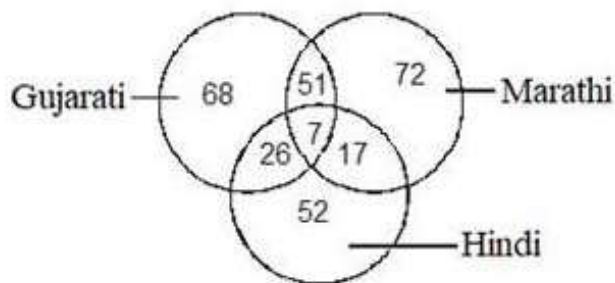
3. ✖ आंकड़े (फिगर्स)

4. ✔ पन्ने (पेज)

Question Number : 12 Question Id : 16794319802 Question Type : MCQ Option Shuffling : Yes Display Question Number : Yes
Single Line Question Option : No Option Orientation : Vertical

Correct Marks : 1 Wrong Marks : 0.25

Study the following Venn diagram carefully and answer the question.



How many persons speak all the three languages?

Options :

1. ✔ 7

2. ✖ 17

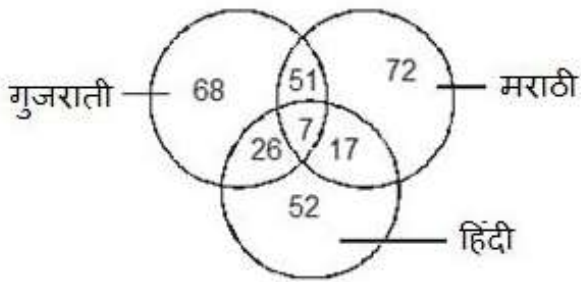
3. ✖ 26

4. ✖ 51

Question Number : 12 Question Id : 16794319802 Question Type : MCQ Option Shuffling : Yes Display Question Number : Yes
Single Line Question Option : No Option Orientation : Vertical

Correct Marks : 1 Wrong Marks : 0.25

निम्नलिखित वेन आरेख ध्यानपूर्वक अध्ययन करें और प्रश्न का उत्तर दें।



कितने लोग सभी तीन भाषाएं बोलते हैं।

Options :

1. ✔ 7

2. ✖ 17

3. ✖ 26

4. ✖ 51

Question Number : 13 Question Id : 16794319803 Question Type : MCQ Option Shuffling : Yes Display Question Number : Yes
Single Line Question Option : No Option Orientation : Vertical

Correct Marks : 1 Wrong Marks : 0.25

Pointing a man in the garden, Sita said "He is the son of my mother's son". How is the man related to her?

Options :

1. ✖ Brother

2. ✖ Uncle

3. ✔ Nephew

4. ✖ Son

Question Number : 13 Question Id : 16794319803 Question Type : MCQ Option Shuffling : Yes Display Question Number : Yes
Single Line Question Option : No Option Orientation : Vertical

Correct Marks : 1 Wrong Marks : 0.25

बगीचे में एक व्यक्ति की ओर इंगित करते हुए सीता ने कहा, "वह मेरी मां के पुत्र का पुत्र है।" वह आदमी उससे किस तरह संबंधित है?

Options :

1. ✖ भाई
2. ✖ चाचा
3. ✔ भतीजा
4. ✖ बेटा

Question Number : 14 Question Id : 16794319804 Question Type : MCQ Option Shuffling : Yes Display Question Number : Yes
Single Line Question Option : No Option Orientation : Vertical

Correct Marks : 1 Wrong Marks : 0.25

If 'When' means \times , 'You' means \div , 'Come' means $-$ and 'Will' means $+$, then what will be the value of $14\text{when}4\text{will}9\text{you}3\text{come}6?$

Options :

1. ✔ 53
2. ✖ 59
3. ✖ 60
4. ✖ 63

Question Number : 14 Question Id : 16794319804 Question Type : MCQ Option Shuffling : Yes Display Question Number : Yes
Single Line Question Option : No Option Orientation : Vertical

Correct Marks : 1 Wrong Marks : 0.25

यदि 'When' का अर्थ \times , 'You' का अर्थ \div , 'Come' का अर्थ $-$ और 'Will' का अर्थ $+$, तो $14\text{when}4\text{will}9\text{you}3\text{come}6$ का मान क्या होगा?

Options :

1. ✔ 53
2. ✖ 59
3. ✖ 60
4. ✖ 63

Question Number : 15 Question Id : 16794319805 Question Type : MCQ Option Shuffling : Yes Display Question Number : Yes
Single Line Question Option : No Option Orientation : Vertical

Correct Marks : 1 Wrong Marks : 0.25

A boy wears socks of two colours white and blue. He has altogether 10 white socks and 10 blue socks in a drawer. Suppose he has to take out the socks in the dark, how many socks must he take out to be sure that he has a matching pair?

Options :

- 1. ✖ 5
- 2. ✖ 12
- 3. ✔ 3
- 4. ✖ 7

Question Number : 15 Question Id : 16794319805 Question Type : MCQ Option Shuffling : Yes Display Question Number : Yes
Single Line Question Option : No Option Orientation : Vertical

Correct Marks : 1 Wrong Marks : 0.25

एक लड़का दो रंगों के मोजे पहनता है, सफेद और नीला। उसके पास दराज में 10 सफेद मोजे और 10 नीले मोजे हैं। मान लीजिए कि उसे अंधेरे में मोजे लेना है, यह सुनिश्चित करने के लिए कि उसके पास मैचिंग जोड़ी है उसे कितने मोजे लेना होगा?

Options :

- 1. ✖ 5
- 2. ✖ 12
- 3. ✔ 3
- 4. ✖ 7

Question Number : 16 Question Id : 16794319806 Question Type : MCQ Option Shuffling : Yes Display Question Number : Yes
Single Line Question Option : No Option Orientation : Vertical

Correct Marks : 1 Wrong Marks : 0.25

Today is Kavitha's birthday. One year from today, she will be twice as old as she was 14 years ago. How old is Kavitha today?

Options :

- 1. ✖ 20 years
- 2. ✖ 25 years
- 3. ✖ 32 years
- 4. ✔ 29 years

Question Number : 16 Question Id : 16794319806 Question Type : MCQ Option Shuffling : Yes Display Question Number : Yes
Single Line Question Option : No Option Orientation : Vertical

Correct Marks : 1 Wrong Marks : 0.25

आज कविता का जन्मदिन है। आज से एक साल बाद, उसकी उम्र 14 साल पहले की उम्र से दोगुनी हो जाएगी। कविता की उम्र आज कितनी है?

Options :

1. ✖ 20 साल
2. ✖ 25 साल
3. ✖ 32 साल
4. ✔ 29 साल

Question Number : 17 Question Id : 16794319807 Question Type : MCQ Option Shuffling : Yes Display Question Number : Yes
Single Line Question Option : No Option Orientation : Vertical

Correct Marks : 1 Wrong Marks : 0.25

Find the odd pair of words that does not have the same relation as the other pairs.

Options :

1. ✖ Jaggery : Sugarcane
2. ✖ Linen : Flax
3. ✔ Jewellery : Cotton
4. ✖ Prism : Glass

Question Number : 17 Question Id : 16794319807 Question Type : MCQ Option Shuffling : Yes Display Question Number : Yes
Single Line Question Option : No Option Orientation : Vertical

Correct Marks : 1 Wrong Marks : 0.25

शब्दों की विषम युग्म का पता लगाएं जिसमें अन्य युग्मों के समान संबंध नहीं है।

Options :

1. ✖ गुड़ : गन्ना
2. ✖ क्षोमवस्त्र : पटुआ (फ्लेक्स)
3. ✔ आभूषण : कपास
4. ✖ प्रिज्म : ग्लास

Question Number : 18 Question Id : 16794319808 Question Type : MCQ Option Shuffling : Yes Display Question Number : Yes
Single Line Question Option : No Option Orientation : Vertical

Correct Marks : 1 Wrong Marks : 0.25

Identify the odd pair of numerals that does not hold the same relation as the rest.

Options :

1. ✖ 8 : 32
2. ✔ 7 : 25
3. ✖ 10 : 50
4. ✖ 6 : 18

Question Number : 18 Question Id : 16794319808 Question Type : MCQ Option Shuffling : Yes Display Question Number : Yes
Single Line Question Option : No Option Orientation : Vertical

Correct Marks : 1 Wrong Marks : 0.25

अंकों की विषम जोड़ी का पता लगाएं जो बाकी के समान संबंध नहीं रखती है।

Options :

1. ✖ 8 : 32
2. ✔ 7 : 25
3. ✖ 10 : 50
4. ✖ 6 : 18

Question Number : 19 Question Id : 16794319809 Question Type : MCQ Option Shuffling : Yes Display Question Number : Yes
Single Line Question Option : No Option Orientation : Vertical

Correct Marks : 1 Wrong Marks : 0.25

What would be the next number in the below number series?

3, 4, 12, 48, 576, ?

Options :

1. ✔ 27648
2. ✖ 27982
3. ✖ 32007
4. ✖ 37592

Question Number : 19 Question Id : 16794319809 Question Type : MCQ Option Shuffling : Yes Display Question Number : Yes
Single Line Question Option : No Option Orientation : Vertical

Correct Marks : 1 Wrong Marks : 0.25


नीचे संख्या श्रृंखला में अगला नंबर क्या होगा?

3, 4, 12, 48, 576, ?

Options :

1.  27648

2.  27982

3.  32007

4.  37592

Question Number : 20 Question Id : 16794319810 Question Type : MCQ Option Shuffling : Yes Display Question Number : Yes
Single Line Question Option : No Option Orientation : Vertical

Correct Marks : 1 Wrong Marks : 0.25

Identify the missing term in the below series.

V, N, F, ?, P, H

Options :

1.  B

2.  D

3.  J

4.  X

Question Number : 20 Question Id : 16794319810 Question Type : MCQ Option Shuffling : Yes Display Question Number : Yes
Single Line Question Option : No Option Orientation : Vertical

Correct Marks : 1 Wrong Marks : 0.25

नीचे दी गई श्रृंखला में गायब शब्द की पहचान करें।

V, N, F, ?, P, H

Options :

1.  B

2.  D

3.  J

4.  X

General Awareness

Group Number :	2
Group Id :	167943755
Group Maximum Duration :	0
Group Minimum Duration :	0
Revisit allowed for view? :	No
Revisit allowed for edit? :	No
Break time:	0
Group Marks:	20
Revisit allowed for group Instructions? :	Yes
Maximum Instruction Time:	0
Minimum Instruction Time:	0

General Awareness

Section Id :	167943820
Section Number :	1
Section type :	Online
Mandatory or Optional:	Mandatory
Number of Questions:	20
Number of Questions to be attempted:	20
Section Marks:	20
Display Number Panel:	Yes
Group All Questions:	No




Sub-Section Number:	1
Sub-Section Id:	1679431262
Question Shuffling Allowed :	Yes

Question Number : 21 Question Id : 16794319811 Question Type : MCQ Option Shuffling : Yes Display Question Number : Yes
Single Line Question Option : No Option Orientation : Vertical

Correct Marks : 1 Wrong Marks : 0.25

Which of the following Acts provided for setting up of Supreme Court in India under the British Rule?

Options :

1.  The Regulating Act, 1773
2.  Pitt's India Act, 1784
3.  Charter Act, 1853
4.  Government of India Act, 1858

Question Number : 21 Question Id : 16794319811 Question Type : MCQ Option Shuffling : Yes Display Question Number : Yes
Single Line Question Option : No Option Orientation : Vertical

Correct Marks : 1 Wrong Marks : 0.25

ब्रिटिश शासन के तहत भारत में सुप्रीम कोर्ट की स्थापना के लिए निम्नलिखित में से कौन सा अधिनियम प्रदान किया गया था?

Options :

1. ☒ रेगुलेशन एक्ट, 1773
2. ☐ पिट्स इंडिया एक्ट, 1784
3. ☐ चार्टर अधिनियम, 1853
4. ☐ भारत सरकार अधिनियम, 1858

Question Number : 22 Question Id : 16794319812 Question Type : MCQ Option Shuffling : Yes Display Question Number : Yes
Single Line Question Option : No Option Orientation : Vertical

Correct Marks : 1 Wrong Marks : 0.25

The Harappan civilization is identified as a _____ civilization.

Options :

1. ☒ Bronze age
2. ☐ Stone age
3. ☐ Golden age
4. ☐ Silver age

Question Number : 22 Question Id : 16794319812 Question Type : MCQ Option Shuffling : Yes Display Question Number : Yes
Single Line Question Option : No Option Orientation : Vertical

Correct Marks : 1 Wrong Marks : 0.25

हड़प्पा सभ्यता को _____ सभ्यता के रूप में पहचाना जाता है।

Options :

1. ☒ कांस्य युग
2. ☐ पाषाण युग
3. ☐ स्वर्ण युग
4. ☐ चांदी युग

Question Number : 23 Question Id : 16794319813 Question Type : MCQ Option Shuffling : Yes Display Question Number : Yes
Single Line Question Option : No Option Orientation : Vertical

Correct Marks : 1 Wrong Marks : 0.25

In 2017, _____ was renamed as Deendayal Port Trust.

Options :

1. ☒ Kandla Port Trust
2. ☐ Jawaharlal Nehru Port Trust
3. ☐ Mumbai Port Trust
4. ☐ Chennai Port Trust

Question Number : 23 Question Id : 16794319813 Question Type : MCQ Option Shuffling : Yes Display Question Number : Yes
Single Line Question Option : No Option Orientation : Vertical

Correct Marks : 1 Wrong Marks : 0.25

2017 में, _____ का नाम बदलकर दीनदयाल पोर्ट ट्रस्ट रखा गया था।

Options :

1. ☒ कंदला पोर्ट ट्रस्ट
2. ☐ जवाहर लाल नेहरू पोर्ट ट्रस्ट
3. ☐ मुम्बई पोर्ट ट्रस्ट
4. ☐ चेन्नई पोर्ट ट्रस्ट

Question Number : 24 Question Id : 16794319814 Question Type : MCQ Option Shuffling : Yes Display Question Number : Yes
Single Line Question Option : No Option Orientation : Vertical

Correct Marks : 1 Wrong Marks : 0.25

In which year was statehood conferred on Arunachal Pradesh?

Options :

1. ☒ 1987
2. ☐ 1972
3. ☐ 1975
4. ☐ 1983

Question Number : 24 Question Id : 16794319814 Question Type : MCQ Option Shuffling : Yes Display Question Number : Yes
Single Line Question Option : No Option Orientation : Vertical

Correct Marks : 1 Wrong Marks : 0.25

अरुणाचल प्रदेश को किस वर्ष एक राज्य का दर्जा दिया गया था?

Options :

1. ✓ 1987
2. ✗ 1972
3. ✗ 1975
4. ✗ 1983

Question Number : 25 Question Id : 16794319815 Question Type : MCQ Option Shuffling : Yes Display Question Number : Yes
Single Line Question Option : No Option Orientation : Vertical

Correct Marks : 1 Wrong Marks : 0.25

The Committee formed under the Right to information Act to recommend the appointment of the Chief Information Commissioner does NOT consist of _____.

Options :

1. ✓ Lok Sabha Speaker
2. ✗ The Prime Minister
3. ✗ Leader of the Opposition / Single largest party in the Lok Sabha
4. ✗ A Union Cabinet Minister nominated by the Prime Minister

Question Number : 25 Question Id : 16794319815 Question Type : MCQ Option Shuffling : Yes Display Question Number : Yes
Single Line Question Option : No Option Orientation : Vertical

Correct Marks : 1 Wrong Marks : 0.25

मुख्य सूचना आयुक्त की नियुक्ति की सिफारिश करने के लिए सूचना अधिकार अधिनियम के तहत गठित समिति में _____ शामिल नहीं है।

Options :

1. ✓ लोकसभा सभापति
2. ✗ प्रधानमन्त्री
3. ✗ लोकसभा में विपक्ष के नेता / एकल सबसे बड़ी पार्टी के नेता
4. ✗ प्रधान मंत्री द्वारा मनोनीत एक केंद्रीय कैबिनेट मंत्री

Question Number : 26 Question Id : 16794319816 Question Type : MCQ Option Shuffling : Yes Display Question Number : Yes
Single Line Question Option : No Option Orientation : Vertical

Correct Marks : 1 Wrong Marks : 0.25

How many Generals of the Indian Army have been honoured with the rank of Field Marshal till the end of 2017?

Options :

1. ☒ 2

2. ☐ 3

3. ☐ 1

4. ☐ 4

Question Number : 26 Question Id : 16794319816 Question Type : MCQ Option Shuffling : Yes Display Question Number : Yes
Single Line Question Option : No Option Orientation : Vertical

Correct Marks : 1 Wrong Marks : 0.25

2017 के अंत तक भारतीय सेना के कितने जनरलों को फ़ील्ड मार्शल के पद से सम्मानित किया गया है?

Options :

1. ☒ 2

2. ☐ 3

3. ☐ 1

4. ☐ 4

Question Number : 27 Question Id : 16794319817 Question Type : MCQ Option Shuffling : Yes Display Question Number : Yes
Single Line Question Option : No Option Orientation : Vertical

Correct Marks : 1 Wrong Marks : 0.25

Who among the following did announce retirement from T20I format of cricket in August 2018?

Options :

1. ☒ Jhulan Goswami

2. ☐ Taniya Bhatia

3. ☐ Rajeshwari Gayakwad

4. ☐ Ekta Bisht

Question Number : 27 Question Id : 16794319817 Question Type : MCQ Option Shuffling : Yes Display Question Number : Yes
Single Line Question Option : No Option Orientation : Vertical

Correct Marks : 1 Wrong Marks : 0.25

निम्नलिखित में से किसने अगस्त 2018 में क्रिकेट के T20I प्रारूप से सेवानिवृत्ति की घोषणा की थी?

Options :

1. ☒ झूलन गोस्वामी
2. ☐ तानिया भाटिया
3. ☐ राजेश्वरी गायकवाड़
4. ☐ एकता बिष्ट

Question Number : 28 Question Id : 16794319818 Question Type : MCQ Option Shuffling : Yes Display Question Number : Yes
Single Line Question Option : No Option Orientation : Vertical

Correct Marks : 1 Wrong Marks : 0.25

One of the conditions to be eligible for Arjuna Award, a sportsperson should have had good performance over the previous _____ years at the International level.

Options :

1. ☒ Four
2. ☐ Three
3. ☐ Two
4. ☐ Five

Question Number : 28 Question Id : 16794319818 Question Type : MCQ Option Shuffling : Yes Display Question Number : Yes
Single Line Question Option : No Option Orientation : Vertical

Correct Marks : 1 Wrong Marks : 0.25

अर्जुन पुरस्कार के लिए पात्र होने की शर्तों में से एक, एक खिलाड़ी को अंतरराष्ट्रीय स्तर पर पिछले _____ वर्षों में अच्छा प्रदर्शन होना चाहिए था।

Options :

1. ☒ चार
2. ☐ तीन
3. ☐ दो
4. ☐ पाँच

Question Number : 29 Question Id : 16794319819 Question Type : MCQ Option Shuffling : Yes Display Question Number : Yes
Single Line Question Option : No Option Orientation : Vertical

Correct Marks : 1 Wrong Marks : 0.25

The Jataka stories contained events from the life of _____.

Options :

1. ✓ Buddha
2. ✗ Mahavir
3. ✗ Zoroaster
4. ✗ Guru Nanak

Question Number : 29 Question Id : 16794319819 Question Type : MCQ Option Shuffling : Yes Display Question Number : Yes
Single Line Question Option : No Option Orientation : Vertical

Correct Marks : 1 Wrong Marks : 0.25

जाटक कहानियों में _____ के जीवन से संबंधित घटनाएं शामिल थीं।

Options :

1. ✓ बुद्ध
2. ✗ महावीर
3. ✗ ज़रथुश्त्र (जारोस्टर)
4. ✗ गुरु नानक

Question Number : 30 Question Id : 16794319820 Question Type : MCQ Option Shuffling : Yes Display Question Number : Yes
Single Line Question Option : No Option Orientation : Vertical

Correct Marks : 1 Wrong Marks : 0.25

Which of one of the following caves is located in Karnataka?

Options :

1. ✓ Badami
2. ✗ Bhaja
3. ✗ Karla
4. ✗ Ellora

Question Number : 30 Question Id : 16794319820 Question Type : MCQ Option Shuffling : Yes Display Question Number : Yes
Single Line Question Option : No Option Orientation : Vertical

Correct Marks : 1 Wrong Marks : 0.25

कर्नाटक में निम्नलिखित में से कौन सी गुफा स्थित है?

Options :

1. ✓ बादामी

2. ✖ भाजा

3. ✖ कार्ला

4. ✖ एल्लोरा

Question Number : 31 Question Id : 16794319821 Question Type : MCQ Option Shuffling : Yes Display Question Number : Yes
Single Line Question Option : No Option Orientation : Vertical

Correct Marks : 1 Wrong Marks : 0.25

Which of the following rivers does run from east to west?

Options :

1. ✔ Tapti

2. ✖ Mahanadi

3. ✖ Cauveri (Kaveri)

4. ✖ Krishna

Question Number : 31 Question Id : 16794319821 Question Type : MCQ Option Shuffling : Yes Display Question Number : Yes
Single Line Question Option : No Option Orientation : Vertical

Correct Marks : 1 Wrong Marks : 0.25

निम्नलिखित में से कौन सी नदियां पूर्व से पश्चिम की ओर बहती हैं?

Options :

1. ✔ ताप्ती

2. ✖ महानदी

3. ✖ कावेरी

4. ✖ कृष्णा

Question Number : 32 Question Id : 16794319822 Question Type : MCQ Option Shuffling : Yes Display Question Number : Yes
Single Line Question Option : No Option Orientation : Vertical

Correct Marks : 1 Wrong Marks : 0.25

Fill up the blank with the most appropriate answer option.

_____ is also known as Usara soil.

Options :

1. ✔ Saline soil

- 2. ✖ Forest soil
- 3. ✖ Red soil
- 4. ✖ Yellow soil

Question Number : 32 Question Id : 16794319822 Question Type : MCQ Option Shuffling : Yes Display Question Number : Yes
Single Line Question Option : No Option Orientation : Vertical
Correct Marks : 1 Wrong Marks : 0.25

सबसे उपयुक्त उत्तर विकल्प के साथ रिक्त स्थान भरें:

_____ को उसर मिट्टी के रूप में भी जाना जाता है।

Options :

- 1. ✔ खारी (नमकीन) मिट्टी
- 2. ✖ जंगल की मिट्टी
- 3. ✖ लाल मिट्टी
- 4. ✖ पीली मिट्टी

Question Number : 33 Question Id : 16794319823 Question Type : MCQ Option Shuffling : Yes Display Question Number : Yes
Single Line Question Option : No Option Orientation : Vertical
Correct Marks : 1 Wrong Marks : 0.25

Fill up the blank with the most appropriate answer option.

IIP stands for 'Index of Industrial _____'.

Options :

- 1. ✔ Production
- 2. ✖ Products
- 3. ✖ Projects
- 4. ✖ Productivity

Question Number : 33 Question Id : 16794319823 Question Type : MCQ Option Shuffling : Yes Display Question Number : Yes
Single Line Question Option : No Option Orientation : Vertical
Correct Marks : 1 Wrong Marks : 0.25

रिक्त स्थान भरें:

आईआईपी का मतलब है 'इंडेक्स ऑफ इंडस्ट्रियल _____'।

Options :

1. ☒ प्रोडक्शन
2. ☐ प्रोडक्ट्स
3. ☐ प्रोजेक्ट्स
4. ☐ प्रोडक्टिविटी

Question Number : 34 Question Id : 16794319824 Question Type : MCQ Option Shuffling : Yes Display Question Number : Yes
Single Line Question Option : No Option Orientation : Vertical

Correct Marks : 1 Wrong Marks : 0.25

'Prompt Corrective Action (PCA)' framework is the supervisory tool used by _____.

Options :

1. ☒ RBI
2. ☐ SEBI
3. ☐ TRAI
4. ☐ IRDAI

Question Number : 34 Question Id : 16794319824 Question Type : MCQ Option Shuffling : Yes Display Question Number : Yes
Single Line Question Option : No Option Orientation : Vertical

Correct Marks : 1 Wrong Marks : 0.25

'प्रॉम्प्ट कॉररेक्टिव एक्शन (पीसीए)' ढांचा पर्यवेक्षी उपकरण है जो _____ द्वारा उपयोग किया जाता है।

Options :

1. ☒ RBI
2. ☐ SEBI
3. ☐ TRAI
4. ☐ IRDAI

Question Number : 35 Question Id : 16794319825 Question Type : MCQ Option Shuffling : Yes Display Question Number : Yes
Single Line Question Option : No Option Orientation : Vertical

Correct Marks : 1 Wrong Marks : 0.25

Fill up the blank with the most appropriate answer option.

_____ is NOT a cause of communicable diseases.

Options :

1. ✓ Metabolic risk factors
2. ✗ Droplet infection
3. ✗ Animal bite
4. ✗ Vector-borne infection

Question Number : 35 Question Id : 16794319825 Question Type : MCQ Option Shuffling : Yes Display Question Number : Yes
Single Line Question Option : No Option Orientation : Vertical

Correct Marks : 1 Wrong Marks : 0.25

रिक्त स्थान भरें:

_____ संक्रमणीय बीमारियों का कारण नहीं है।

Options :

1. ✓ चयापचय जोखिम कारक
2. ✗ बूंद संक्रमण
3. ✗ पशु का काटना
4. ✗ रोगवाहक-जनित (वेक्टर-बोर्न) संक्रमण

Question Number : 36 Question Id : 16794319826 Question Type : MCQ Option Shuffling : Yes Display Question Number : Yes
Single Line Question Option : No Option Orientation : Vertical

Correct Marks : 1 Wrong Marks : 0.25

Fill up the blank with the most appropriate answer option.

_____ is NOT a man-made fibre.

Options :

1. ✓ Silk
2. ✗ Acrylic
3. ✗ Rayon

4. ✖ Nylon

Question Number : 36 Question Id : 16794319826 Question Type : MCQ Option Shuffling : Yes Display Question Number : Yes
Single Line Question Option : No Option Orientation : Vertical
Correct Marks : 1 Wrong Marks : 0.25

रिक्त स्थान भरें:

_____ मानव निर्मित फाइबर नहीं है।

Options :

1. ✔ सिल्क

2. ✖ ऐक्रेलिक

3. ✖ रेयान

4. ✖ नायलॉन

Question Number : 37 Question Id : 16794319827 Question Type : MCQ Option Shuffling : Yes Display Question Number : Yes
Single Line Question Option : No Option Orientation : Vertical
Correct Marks : 1 Wrong Marks : 0.25

Parker Solar Probe mission was launched in August 2018 by _____.

Options :

1. ✔ National Aeronautics and Space Administration (NASA)

2. ✖ European Space Agency (ESA)

3. ✖ China National Space Administration (CNSA)

4. ✖ Russian Federal Space Agency (RFSA)

Question Number : 37 Question Id : 16794319827 Question Type : MCQ Option Shuffling : Yes Display Question Number : Yes
Single Line Question Option : No Option Orientation : Vertical
Correct Marks : 1 Wrong Marks : 0.25

रिक्त स्थान भरें:

पार्कर सौर जांच मिशन अगस्त 2018 में _____ द्वारा लॉन्च किया गया था।

Options :

1. ✔ नेशनल एयरोनॉटिक्स एंड स्पेस एडमिनिस्ट्रेशन (NASA)

2. ✖ यूरोपीय अंतरिक्ष एजेंसी (ESA)
3. ✖ चीन राष्ट्रीय अंतरिक्ष प्रशासन (CNSA)
4. ✖ रूसी संघीय अंतरिक्ष एजेंसी (RFSA)

Question Number : 38 Question Id : 16794319828 Question Type : MCQ Option Shuffling : Yes Display Question Number : Yes
Single Line Question Option : No Option Orientation : Vertical

Correct Marks : 1 Wrong Marks : 0.25

What is NOT true in regard to Antrix Corporation Limited (ACL)?

Options :

1. ✔ It is located in Hyderabad
2. ✖ It is a commercial arm of Indian Space Research Organisation
3. ✖ It is wholly owned by the Government of India
4. ✖ It was set up in 1992

Question Number : 38 Question Id : 16794319828 Question Type : MCQ Option Shuffling : Yes Display Question Number : Yes
Single Line Question Option : No Option Orientation : Vertical

Correct Marks : 1 Wrong Marks : 0.25

एंट्रिक्स कॉर्पोरेशन लिमिटेड (ACL) के संबंध में क्या सही नहीं है?

Options :

1. ✔ यह हैदराबाद में स्थित है
2. ✖ यह भारतीय अंतरिक्ष अनुसंधान संगठन की एक वाणिज्यिक शाखा है
3. ✖ यह पूरी तरह से भारत सरकार के स्वामित्व में है
4. ✖ यह 1992 में स्थापित हुआ है

Question Number : 39 Question Id : 16794319829 Question Type : MCQ Option Shuffling : Yes Display Question Number : Yes
Single Line Question Option : No Option Orientation : Vertical

Correct Marks : 1 Wrong Marks : 0.25

Which of the following is a non-statutory body?

Options :

1. ☒ Central Bureau of Investigation (CBI)
2. ☐ Reserve Bank of India (RBI)
3. ☐ Central Vigilance Commission (CVC)
4. ☐ National Green Tribunal (NGT)

Question Number : 39 Question Id : 16794319829 Question Type : MCQ Option Shuffling : Yes Display Question Number : Yes
Single Line Question Option : No Option Orientation : Vertical

Correct Marks : 1 Wrong Marks : 0.25

निम्नलिखित में से कौन एक गैर-सांविधिक संस्था है?

Options :

1. ☒ केंद्रीय जांच ब्यूरो (CBI)
2. ☐ भारतीय रिजर्व बैंक (RBI)
3. ☐ केंद्रीय सतर्कता आयोग (CVC)
4. ☐ राष्ट्रीय हरित अधिकरण (NGT)

Question Number : 40 Question Id : 16794319830 Question Type : MCQ Option Shuffling : Yes Display Question Number : Yes
Single Line Question Option : No Option Orientation : Vertical

Correct Marks : 1 Wrong Marks : 0.25

How many member countries were in the North Atlantic Treaty Organisation as at the end of 2017?

Options :

1. ☒ 29
2. ☐ 25
3. ☐ 32
4. ☐ 18

Question Number : 40 Question Id : 16794319830 Question Type : MCQ Option Shuffling : Yes Display Question Number : Yes
Single Line Question Option : No Option Orientation : Vertical

Correct Marks : 1 Wrong Marks : 0.25

2017 के अंत में उत्तरी अटलांटिक संधि संगठन में कितने सदस्य देश थे?

Options :

1. ✓ 29

2. ✗ 25

3. ✗ 32

4. ✗ 18

Arithmetic Ability

Group Number :	3
Group Id :	167943756
Group Maximum Duration :	0
Group Minimum Duration :	0
Revisit allowed for view? :	No
Revisit allowed for edit? :	No
Break time:	0
Group Marks:	20
Revisit allowed for group Instructions? :	Yes
Maximum Instruction Time:	0
Minimum Instruction Time:	0

Arithmetic Ability

Section Id :	167943821
Section Number :	1
Section type :	Online
Mandatory or Optional:	Mandatory
Number of Questions:	19
Number of Questions to be attempted:	19
Section Marks:	20
Display Number Panel:	Yes
Group All Questions:	No

Sub-Section Number:	1
Sub-Section Id:	1679431263
Question Shuffling Allowed :	Yes

Question Number : 41 Question Id : 16794319831 Question Type : MCQ Option Shuffling : Yes Display Question Number : Yes
Single Line Question Option : No Option Orientation : Vertical
Correct Marks : 1 Wrong Marks : 0.25

The value of $\frac{1.4 - 0.362}{0.31 + 0.123 - 0.0005}$ of $\frac{0.727 \times 0.727 - 0.273 \times 0.273}{0.5448}$ is:

Options :

1. ✗ 1

2. ✓ 2

3. ✗ 1.2

4. ✗ 2.4

Question Number : 41 Question Id : 16794319831 Question Type : MCQ Option Shuffling : Yes Display Question Number : Yes
Single Line Question Option : No Option Orientation : Vertical

Correct Marks : 1 Wrong Marks : 0.25

$\frac{0.727 \times 0.727 - 0.273 \times 0.273}{0.5448}$ का $\frac{1.4 - 0.362}{0.31 + 0.123 - 0.0005}$ का मान है:

Options :

1. ✗ 1

2. ✓ 2

3. ✗ 1.2

4. ✗ 2.4

Question Number : 42 Question Id : 16794319832 Question Type : MCQ Option Shuffling : Yes Display Question Number : Yes
Single Line Question Option : No Option Orientation : Vertical

Correct Marks : 1 Wrong Marks : 0.25

If $\frac{\sqrt{12} - \sqrt{147} + \sqrt{192}}{4\sqrt{3} - 3\sqrt{12} + 2\sqrt{75}} + \frac{\sqrt{2} + \sqrt{3}}{3\sqrt{2} - 2\sqrt{3}} = a + b\sqrt{6}$, then the value of $(8a - 6b)$ is:

Options :

1. ✗ 9

2. ✗ 11

3. ✓ 14

4. ✗ 19

Question Number : 42 Question Id : 16794319832 Question Type : MCQ Option Shuffling : Yes Display Question Number : Yes
Single Line Question Option : No Option Orientation : Vertical

Correct Marks : 1 Wrong Marks : 0.25

यदि $\frac{\sqrt{12} - \sqrt{147} + \sqrt{192}}{4\sqrt{3} - 3\sqrt{12} + 2\sqrt{75}} + \frac{\sqrt{2} + \sqrt{3}}{3\sqrt{2} - 2\sqrt{3}} = a + b\sqrt{6}$ है, तो $(8a - 6b)$ का मान है:

Options :

1. ✗ 9

2. ✖ 11

3. ✔ 14

4. ✖ 19

Question Number : 43 Question Id : 16794319833 Question Type : MCQ Option Shuffling : Yes Display Question Number : Yes
Single Line Question Option : No Option Orientation : Vertical

Correct Marks : 1 Wrong Marks : 0.25

The value of $\frac{9\left(3\frac{1}{3}-2\frac{1}{2}\right)\div\frac{5}{6}\text{ of }\frac{3}{8}}{2\frac{2}{3}\div\left(\frac{1}{2}+\frac{1}{4}\right)}\div\frac{8\div\frac{2}{3}\text{ of }\frac{4}{5}}{8\times\frac{2}{3}\div\frac{4}{5}}:$

Options :

1. ✔ 3

2. ✖ $\frac{1}{3}$

3. ✖ $2\frac{1}{4}$

4. ✖ $6\frac{3}{4}$

Question Number : 43 Question Id : 16794319833 Question Type : MCQ Option Shuffling : Yes Display Question Number : Yes
Single Line Question Option : No Option Orientation : Vertical

Correct Marks : 1 Wrong Marks : 0.25

$\frac{9\left(3\frac{1}{3}-2\frac{1}{2}\right)\div\frac{3}{8}\text{ का }\frac{5}{6}}{2\frac{2}{3}\div\left(\frac{1}{2}+\frac{1}{4}\right)}\div\frac{8\div\frac{4}{5}\text{ का }\frac{2}{3}}{8\times\frac{2}{3}\div\frac{4}{5}}$ का मान है:

Options :

1. ✔ 3

2. ✖ $\frac{1}{3}$

3. ✖ $2\frac{1}{4}$

4. ✖ $6\frac{3}{4}$

Question Number : 44 Question Id : 16794319834 Question Type : MCQ Option Shuffling : Yes Display Question Number : Yes
Single Line Question Option : No Option Orientation : Vertical

Correct Marks : 1 Wrong Marks : 0.25

Let x be the greatest number which when divides 1463, 2028 and 2819, the remainder in each case is y . When $(2x + y)$ is divided by 37 the remainder will be:

Options :

1. ✔ 0

2. ✖ 17

3. ✖ 11

4. ✖ 29

Question Number : 44 Question Id : 16794319834 Question Type : MCQ Option Shuffling : Yes Display Question Number : Yes
Single Line Question Option : No Option Orientation : Vertical

Correct Marks : 1 Wrong Marks : 0.25

x वह बड़ी से बड़ी संख्या है जिससे जब 1463, 2028 और 2819 को भाग दिया जाए, तो शेषफल प्रत्येक दशा में y है। जब $(2x + y)$ को 37 से भाग दिया जाए, तो शेषफल होगा:

Options :

1. ✔ 0

2. ✖ 17

3. ✖ 11

4. ✖ 29

Question Number : 45 Question Id : 16794319835 Question Type : MCQ Option Shuffling : Yes Display Question Number : Yes
Single Line Question Option : No Option Orientation : Vertical

Correct Marks : 1 Wrong Marks : 0.25

When the price of an article is increased by 16% and the sale of items is decreased by 12%, then what is the effect on its revenue received?

Options :

1. ✖ 2.04% decrease

2. ✖ 2.04% increase

3. ✖ 2.08% decrease

4. ✓ 2.08% increase

Question Number : 45 Question Id : 16794319835 Question Type : MCQ Option Shuffling : Yes Display Question Number : Yes
Single Line Question Option : No Option Orientation : Vertical

Correct Marks : 1 Wrong Marks : 0.25

जब किसी वस्तु के मूल्य में 16% की वृद्धि होती है, और वस्तुओं की बिक्री में 12% की कमी हो जाती है, तो बिक्री से प्राप्त धनराशि पर क्या प्रभाव पड़ेगा?

Options :

1. ✗ 2.04% कमी

2. ✗ 2.04% वृद्धि

3. ✗ 2.08% कमी

4. ✓ 2.08% वृद्धि

Question Number : 46 Question Id : 16794319836 Question Type : MCQ Option Shuffling : Yes Display Question Number : Yes
Single Line Question Option : No Option Orientation : Vertical

Correct Marks : 1 Wrong Marks : 0.25

A box has some oranges and apples only, out of which 60% of all oranges and $33\frac{1}{3}\%$ of all apples are rotten. The number of rotten oranges equals 75% of the number of apples. What percentage of total number of fruits in the box are not rotten? (nearest to an integer)

Options :

1. ✗ 48

2. ✗ 50

3. ✓ 52

4. ✗ 55

Question Number : 46 Question Id : 16794319836 Question Type : MCQ Option Shuffling : Yes Display Question Number : Yes
Single Line Question Option : No Option Orientation : Vertical

Correct Marks : 1 Wrong Marks : 0.25

किसी बक्से में केवल कुछ संतरे और सेब हैं, जिनमें से 60% संतरे तथा $33\frac{1}{3}\%$ सेब सड़े हुए हैं। सड़े हुए संतरों की संख्या सेबों की कुल संख्या के 75 % है। बक्से में कुल फलों की संख्या का कितना प्रतिशत फल सड़े हुए नहीं हैं? (निकटतम एक पूर्णांक तक)

Options :

1. ✗ 48

2. ✖ 50

3. ✔ 52

4. ✖ 55

Question Number : 47 Question Id : 16794319837 Question Type : MCQ Option Shuffling : Yes Display Question Number : Yes
Single Line Question Option : No Option Orientation : Vertical

Correct Marks : 1 Wrong Marks : 0.25

A sells an article to B at a gain of 20%, B sells to C at a gain of $12\frac{1}{2}\%$ and C sells it to D at a loss of 15%. If the difference between the profits incurred to A and B is ₹ 40, then what is the cost price of the article to D?

Options :

1. ✖ ₹ 981

2. ✔ ₹ 918

3. ✖ ₹ 920

4. ✖ ₹ 960

Question Number : 47 Question Id : 16794319837 Question Type : MCQ Option Shuffling : Yes Display Question Number : Yes
Single Line Question Option : No Option Orientation : Vertical

Correct Marks : 1 Wrong Marks : 0.25

A किसी वस्तु को B को 20% लाभ पर बेचता है, B उसे C को $12\frac{1}{2}\%$ लाभ पर बेचता है और C उसे D को 15% हानि पर बेचता है। A और B के लाभों में यदि ₹ 40 का अंतर है, तो D ने इसे किस मूल्य पर खरीदा?

Options :

1. ✖ ₹ 981

2. ✔ ₹ 918

3. ✖ ₹ 920

4. ✖ ₹ 960

Question Number : 48 Question Id : 16794319838 Question Type : MCQ Option Shuffling : Yes Display Question Number : Yes
Single Line Question Option : No Option Orientation : Vertical

Correct Marks : 1 Wrong Marks : 0.25

The marked price of an article is ₹ 40. After allowing a discount of 25% on the marked price, there is a loss of ₹ 6. What is the loss percent?

Options :

1. ✖ 20%

2. ✖ $11\frac{1}{9}\%$

3. ✔ $16\frac{2}{3}\%$

4. ✖ $16\frac{1}{3}\%$

Question Number : 48 Question Id : 16794319838 Question Type : MCQ Option Shuffling : Yes Display Question Number : Yes
Single Line Question Option : No Option Orientation : Vertical

Correct Marks : 1 Wrong Marks : 0.25

एक वस्तु का अंकित मूल्य ₹ 40 है। इस अंकित मूल्य पर 25% की छुट देने के पश्चात ₹ 6 की हानि होती है। हानि प्रतिशत है:

Options :

1. ✖ 20%

2. ✖ $11\frac{1}{9}\%$

3. ✔ $16\frac{2}{3}\%$

4. ✖ $16\frac{1}{3}\%$

Question Number : 49 Question Id : 16794319839 Question Type : MCQ Option Shuffling : Yes Display Question Number : Yes
Single Line Question Option : No Option Orientation : Vertical

Correct Marks : 1 Wrong Marks : 0.25

A sum of ₹ 6,000 invested at 20% per annum, when the interest is compounded semi-annually amounts to ₹ 7,986 in a certain time. What will be the compound interest on the same sum for the same period at the same rate when interest is compounded yearly?

Options :

1. ✖ ₹ 1,986

2. ✖ ₹ 1,950

3. ✖ ₹ 1,940

4. ✔ ₹ 1,920

Question Number : 49 Question Id : 16794319839 Question Type : MCQ Option Shuffling : Yes Display Question Number : Yes
Single Line Question Option : No Option Orientation : Vertical

Correct Marks : 1 Wrong Marks : 0.25

जब ब्याज अर्ध वार्षिक संयोजित होता है, तब ₹ 6,000 की एक राशि एक निश्चित समय में 20% वार्षिक दर से ₹ 7,986 को जाती है। उसी राशि पर उसी समय के लिए और उसी दर पर कितना चक्रवृद्धि ब्याज होगा यदि ब्याज वार्षिक संयोजित हो?

Options :

1. ✖ ₹ 1,986

2. ✖ ₹ 1,950

3. ✖ ₹ 1,940

4. ✔ ₹ 1,920

Question Number : 50 Question Id : 16794319840 Question Type : MCQ Option Shuffling : Yes Display Question Number : Yes
Single Line Question Option : No Option Orientation : Vertical

Correct Marks : 1 Wrong Marks : 0.25

The average weight of students in a class was 48 kg. Later on 6 students weighing 43.7 kg, 45.4 kg, 46.6 kg, 44.3 kg, 47.2 kg and 42.8 kg join the class. If the average weight of all the students now reduces by 1 kg, then what was the number of students in the class initially?

Options :

1. ✖ 10

2. ✔ 12

3. ✖ 15

4. ✖ 16

Question Number : 50 Question Id : 16794319840 Question Type : MCQ Option Shuffling : Yes Display Question Number : Yes
Single Line Question Option : No Option Orientation : Vertical

Correct Marks : 1 Wrong Marks : 0.25

किसी कक्षा में विद्यार्थियों का औसत भार 48 किग्रा था। बाद में 6 विद्यार्थी, जिनके भार 43.7 किग्रा, 45.4 किग्रा, 46.6 किग्रा, 44.3 किग्रा, 47.2 किग्रा और 42.8 किग्रा थे, कक्षा में सम्मिलित हो जाते हैं। यदि अब सभी विद्यार्थियों का औसत भार पहले से एक किग्रा कम हो जाता है, तो आरंभ में कक्षा में कितने विद्यार्थी थे?

Options :

1. ✖ 10

2. ✔ 12

3. ✖ 15

4. ✖ 16

Question Number : 51 Question Id : 16794319841 Question Type : MCQ Option Shuffling : Yes Display Question Number : Yes
Single Line Question Option : No Option Orientation : Vertical

Correct Marks : 1 Wrong Marks : 0.25

A sum of ₹ 9,780 is divided among A, B, C and D such that the ratio of shares of A and B is 3 : 4, that of B and C is 8 : 9 and that of C and D is 15 : 16. What is the difference between the combined share of A and B and the combined share of C and D?

Options :

1. ✖ ₹ 780

2. ✖ ₹ 960

3. ✔ ₹ 1,380

4. ✖ ₹ 1,560

Question Number : 51 Question Id : 16794319841 Question Type : MCQ Option Shuffling : Yes Display Question Number : Yes
Single Line Question Option : No Option Orientation : Vertical

Correct Marks : 1 Wrong Marks : 0.25

₹ 9,780 की एक राशि A, B, C और D में इस प्रकार बांटी जाती है की A और B के भागों में 3 : 4 का अनुपात, B और C के भागों में 8 : 9 का अनुपात और C तथा D के भागों में 15 : 16 का अनुपात है। A और B के संयुक्त भाग और C तथा D के संयुक्त भाग में क्या अंतर है?

Options :

1. ✖ ₹ 780

2. ✖ ₹ 960

3. ✔ ₹ 1,380

4. ✖ ₹ 1,560

Question Number : 52 Question Id : 16794319842 Question Type : MCQ Option Shuffling : Yes Display Question Number : Yes
Single Line Question Option : No Option Orientation : Vertical

Correct Marks : 1 Wrong Marks : 0.25

What is the ratio of third proportional to the numbers 0.5 and 2 to the mean proportional between 2.4 and 15?

Options :

1. ✖ 3 : 4

2. ✖ 3 : 8

3. ✓ 4 : 3

4. ✗ 8 : 3

Question Number : 52 Question Id : 16794319842 Question Type : MCQ Option Shuffling : Yes Display Question Number : Yes
Single Line Question Option : No Option Orientation : Vertical

Correct Marks : 1 Wrong Marks : 0.25

संख्याओं 0.5 और 2 के तृतीयानुपाती का 2.4 तथा 15 के मध्यानुपाती से अनुपात है:

Options :

1. ✗ 3 : 4

2. ✗ 3 : 8

3. ✓ 4 : 3

4. ✗ 8 : 3

Question Number : 53 Question Id : 16794319843 Question Type : MCQ Option Shuffling : Yes Display Question Number : Yes
Single Line Question Option : No Option Orientation : Vertical

Correct Marks : 1 Wrong Marks : 0.25

A conical vessel whose internal radius is 12 cm and height 50 cm is full of a liquid. The contents are emptied into a cylindrical vessel whose internal radius is 10 cm. The height (in cm) to which the liquid rises in the cylindrical vessel is:

Options :

1. ✓ 24

2. ✗ 20

3. ✗ 18

4. ✗ 12

Question Number : 53 Question Id : 16794319843 Question Type : MCQ Option Shuffling : Yes Display Question Number : Yes
Single Line Question Option : No Option Orientation : Vertical

Correct Marks : 1 Wrong Marks : 0.25

एक शंकवाकार बर्तन जिसकी आंतरिक त्रिज्या 12 सेमी और ऊँचाई 50 सेमी है, पूर्णतः एक द्रव्य से भरा हुआ है। इस द्रव्य को एक बेलनाकार बर्तन, जिसकी आंतरिक त्रिज्या 10 सेमी है, में उलट दिया जाता है। इस बर्तन में द्रव्य जिस ऊँचाई (सेमी में) तक ऊपर उठेगा, निम्नलिखित में से क्या है?

Options :

1. ✓ 24

2. ✗ 20

3. ✖ 18

4. ✖ 12

Question Number : 54 Question Id : 16794319844 Question Type : MCQ Option Shuffling : Yes Display Question Number : Yes
Single Line Question Option : No Option Orientation : Vertical

Correct Marks : 1 Wrong Marks : 0.25

The area of rhombus is 336 cm^2 and its perimeter is 80 cm. What is the difference between its diagonals?

Options :

1. ✖ 12

2. ✔ 16

3. ✖ 18

4. ✖ 15

Question Number : 54 Question Id : 16794319844 Question Type : MCQ Option Shuffling : Yes Display Question Number : Yes
Single Line Question Option : No Option Orientation : Vertical

Correct Marks : 1 Wrong Marks : 0.25

किसी समचतुर्भुज का क्षेत्रफल 336 सेमी^2 है और इसका परिमाप 80 सेमी है। इसके विकर्णों की लंबाईयों में अंतर है:

Options :

1. ✖ 12

2. ✔ 16

3. ✖ 18

4. ✖ 15

Question Number : 55 Question Id : 16794319845 Question Type : MCQ Option Shuffling : Yes Display Question Number : Yes
Single Line Question Option : No Option Orientation : Vertical

Correct Marks : 1 Wrong Marks : 0.25

A train crossed a person going at a speed of 6 km/h in the same direction. He could see the train for 1 minute. When the train disappeared from his sight, it was at a distance of 600 m from him. What was the speed in km/h of the train?

Options :

1. ✖ 54

2. ✖ 48

3. ✔ 42

4. ✖ 36

Question Number : 55 Question Id : 16794319845 Question Type : MCQ Option Shuffling : Yes Display Question Number : Yes
Single Line Question Option : No Option Orientation : Vertical

Correct Marks : 1 Wrong Marks : 0.25

एक रेलगाड़ी ने एक व्यक्ति को, जो 6 किमी/घं की गति से उसी दिशा में जा रहा है, पार किया। वह रेलगाड़ी को 1 मिनट तक देख सका। जब रेलगाड़ी उसकी दृष्टि से अदृश्य हो गई तो वह उससे 600 मी की दूरी पर था। रेलगाड़ी की गति (किमी/घं में) क्या थी?

Options :

1. ✖ 54

2. ✖ 48

3. ✔ 42

4. ✖ 36

Question Number : 56 Question Id : 16794319846 Question Type : MCQ Option Shuffling : Yes Display Question Number : Yes
Single Line Question Option : No Option Orientation : Vertical

Correct Marks : 1 Wrong Marks : 0.25

A boat takes 5 hours more to go upstream a distance of 24 km than to go the same distance downstream. The speed of boat in still water is $5\frac{1}{2}$ km/h. What must be the speed (in km/h) of the boat in still water so that it can go downstream the same distance 24 km in 4 hours?

Options :

1. ✖ $5\frac{1}{2}$

2. ✖ 5

3. ✖ 4

4. ✔ $3\frac{1}{2}$

Question Number : 56 Question Id : 16794319846 Question Type : MCQ Option Shuffling : Yes Display Question Number : Yes
Single Line Question Option : No Option Orientation : Vertical

Correct Marks : 1 Wrong Marks : 0.25

एक नाव को धारा के प्रतिकूल 24 किमी की दूरी तय करने में, धारा के अनुकूल उतनी ही दूरी तय करने से 5 घंटे का अधिक समय लगता है। शांत जल में नाव की गति $5\frac{1}{2}$ किमी/घं है। शांत जल में नाव की गति (किमी/घं में) क्या होनी चाहिए जिससे कि वह 24 किमी की दूरी धारा के अनुकूल 4 घंटे में तय कर सके?

Options :

1. ✖ $5\frac{1}{2}$

2. ✖ 5

3. ✖ 4

4. ✔ $3\frac{1}{2}$

Question Number : 57 Question Id : 16794319847 Question Type : MCQ Option Shuffling : Yes Display Question Number : Yes
Single Line Question Option : No Option Orientation : Vertical

Correct Marks : 1 Wrong Marks : 0.25

A is thrice as efficient as B and C is twice as efficient as B. The ratio of the number of days taken by A, B and C respectively, when they work individually is:

Options :

1. ✖ 3 : 1 : 2

2. ✖ 1 : 3 : 2

3. ✔ 2 : 6 : 3

4. ✖ 2 : 3 : 6

Question Number : 57 Question Id : 16794319847 Question Type : MCQ Option Shuffling : Yes Display Question Number : Yes
Single Line Question Option : No Option Orientation : Vertical

Correct Marks : 1 Wrong Marks : 0.25

A की कार्यक्षमता B से तिगुनी है और C की कार्यक्षमता B से दुगुनी है। जब वे अलग अलग काम करें तो उनके द्वारा काम पूरा करने में लगे दिनों में क्रमशः अनुपात है:

Options :

1. ✖ 3 : 1 : 2

2. ✖ 1 : 3 : 2

3. ✔ 2 : 6 : 3

4. ✖ 2 : 3 : 6

Question Number : 58 Question Id : 16794319848 Question Type : MCQ Option Shuffling : Yes Display Question Number : Yes
Single Line Question Option : No Option Orientation : Vertical

Correct Marks : 1 Wrong Marks : 0.25

4 men and 5 women can do a piece of work in 10 days whereas 6 men and 6 women can do it in 7 days. To complete the work in 14 days, how many women should assist 2 men?

Options :

- 1. ✖ 6
- 2. ✔ 7
- 3. ✖ 8
- 4. ✖ 9

Question Number : 58 Question Id : 16794319848 Question Type : MCQ Option Shuffling : Yes Display Question Number : Yes
Single Line Question Option : No Option Orientation : Vertical

Correct Marks : 1 Wrong Marks : 0.25

4 पुरुष और 5 महिलाएँ मिलकर एक काम को 10 दिन में पूरा कर सकते हैं, जबकि 6 पुरुष और 6 महिलाएँ मिलकर उस काम को 7 दिन में पूरा कर सकते हैं। उस काम को 14 दिन में पूरा करने के लिए, 2 पुरुष के साथ कितनी महिलाओं को काम करना होगा?

Options :

- 1. ✖ 6
- 2. ✔ 7
- 3. ✖ 8
- 4. ✖ 9

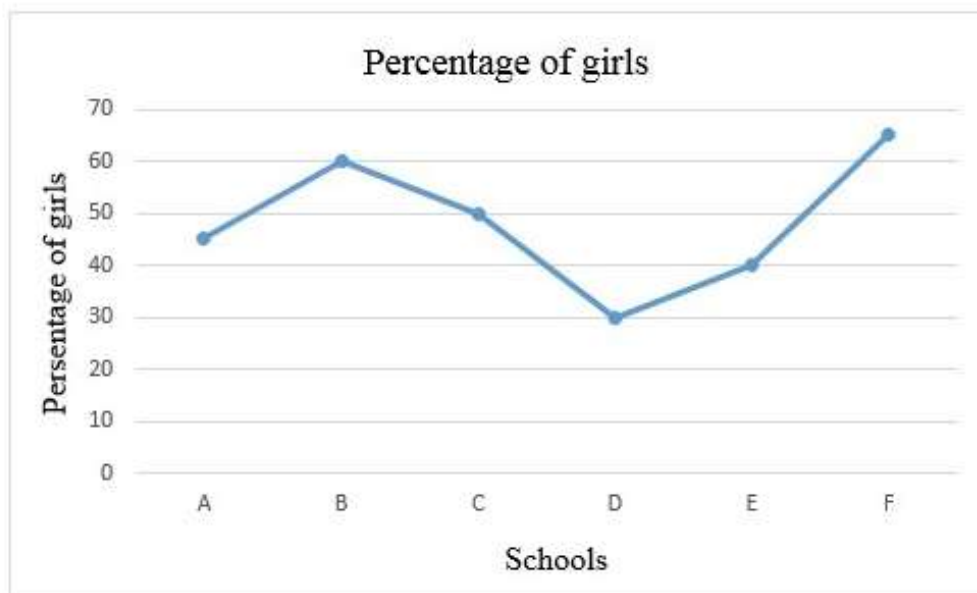
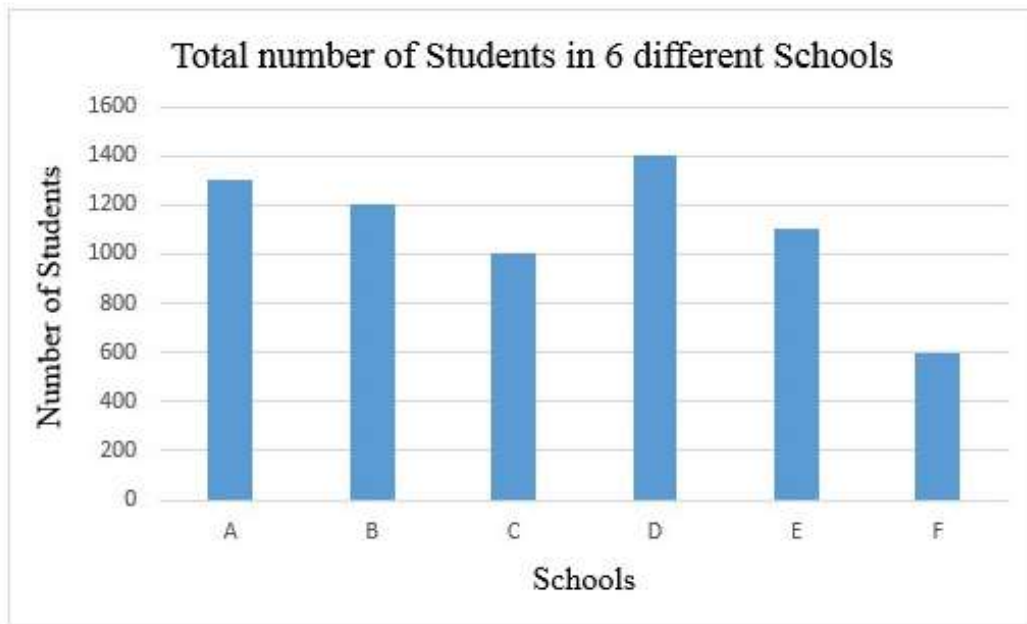
Sub-Section Number:	2
Sub-Section Id:	1679431264
Question Shuffling Allowed :	Yes

Question Id : 16794319849 Question Type : COMPREHENSION Sub Question Shuffling Allowed : Yes Group Comprehension Questions : No

Question Numbers : (59 to 60)

Question Label : Comprehension

Study the following graphs and answer the questions.



Sub questions

Question Number : 59 Question Id : 16794319850 Question Type : MCQ Option Shuffling : Yes Display Question Number : Yes Single Line Question Option : No Option Orientation : Vertical

Correct Marks : 1 Wrong Marks : 0.25

What is the ratio of the number of girls in schools

B, D and F combined to that of boys in schools

D and F combined?

Options :

1. ✖ 5 : 3

2. ✖ 8 : 5

3. ✔ 9 : 7

4. ✖ 9 : 8

Question Number : 60 Question Id : 16794319851 Question Type : MCQ Option Shuffling : Yes Display Question Number : Yes
Single Line Question Option : No Option Orientation : Vertical

Correct Marks : 1 Wrong Marks : 0.25

Total number of boys in all the six schools is approximately
what percent more than the total number of girls in all
schools?

Options :

1. ✖ 15.5

2. ✔ 16

3. ✖ 16.5

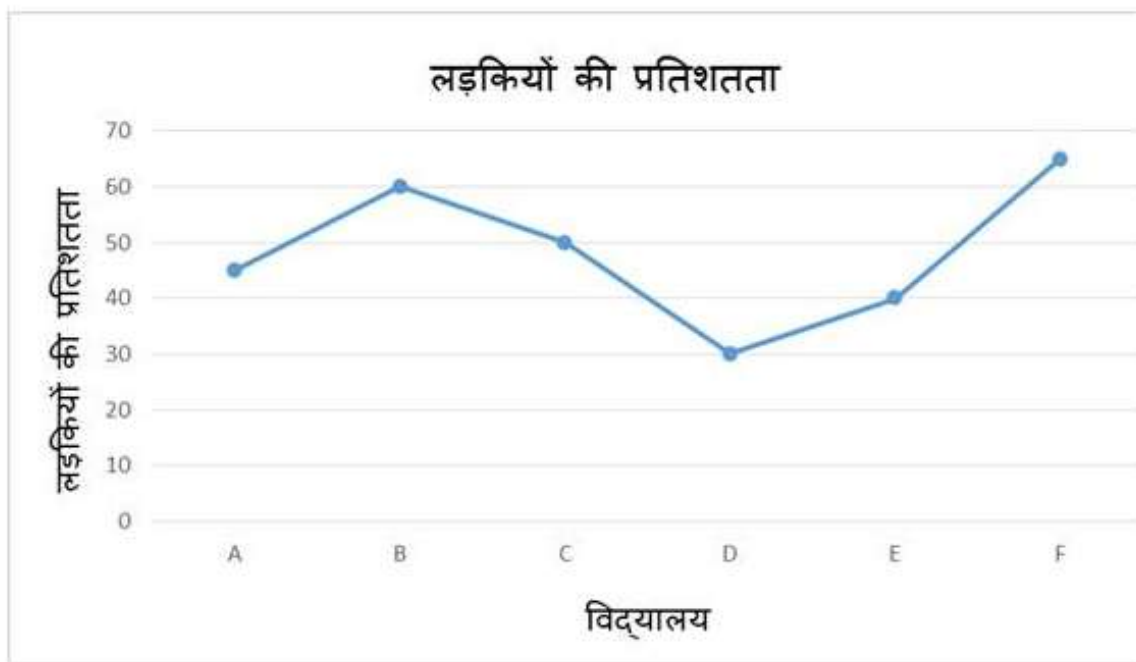
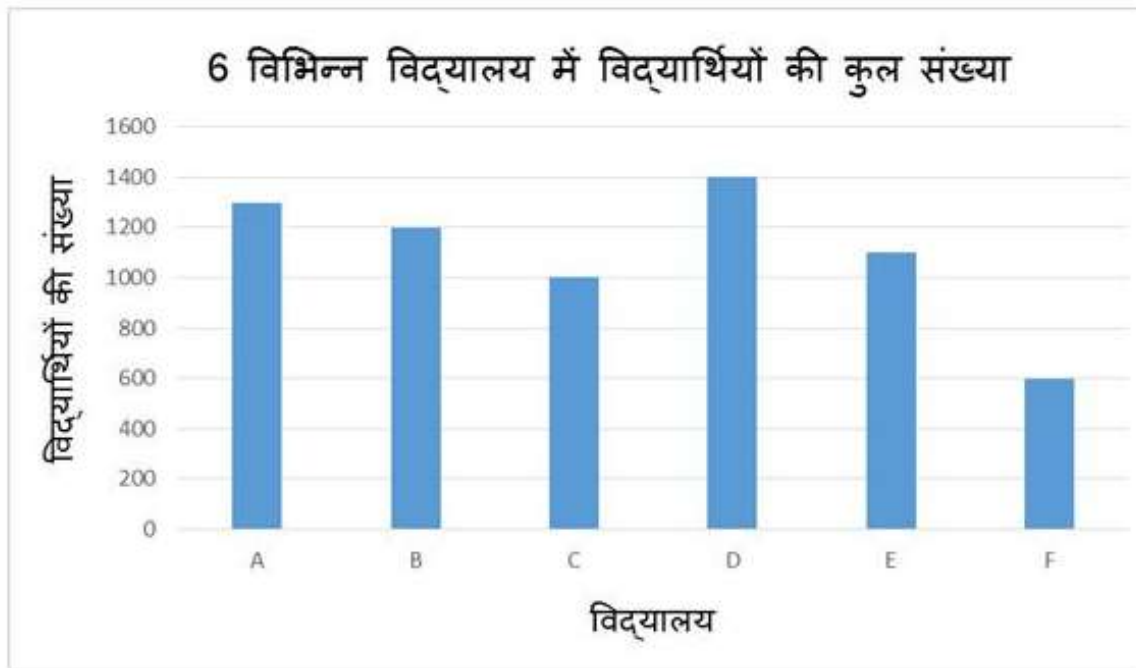
4. ✖ 18

Question Id : 16794319849 Question Type : COMPREHENSION Sub Question Shuffling Allowed : Yes Group Comprehension
Questions : No

Question Numbers : (59 to 60)

Question Label : Comprehension

निम्नलिखित आलेखों को पढ़िए और प्रश्नों के उत्तर दीजिए।



Sub questions

Question Number : 59 Question Id : 16794319850 Question Type : MCQ Option Shuffling : Yes Display Question Number : Yes
Single Line Question Option : No Option Orientation : Vertical

Correct Marks : 1 Wrong Marks : 0.25

विद्यालय B, D तथा F में कुल मिलाकर लड़कियों की संख्या का विद्यालय D और F में कुल मिलाकर लड़कों की संख्या से अनुपात है:

Options :

1. ✖ 5 : 3

2. ✖ 8 : 5

3. ✔ 9 : 7

4. ✖ 9 : 8

Question Number : 60 Question Id : 16794319851 Question Type : MCQ Option Shuffling : Yes Display Question Number : Yes
Single Line Question Option : No Option Orientation : Vertical

Correct Marks : 1 Wrong Marks : 0.25

छ: विद्यालय में लड़कों की कुल संख्या, उन सभी विद्यालयों में लड़कियों की कुल संख्या से लगभग कितने प्रतिशत अधिक है?

Options :

1. ✖ 15.5

2. ✔ 16

3. ✖ 16.5

4. ✖ 18

General English

Group Number :	4
Group Id :	167943757
Group Maximum Duration :	0
Group Minimum Duration :	0
Revisit allowed for view? :	No
Revisit allowed for edit? :	No
Break time:	0
Group Marks:	20
Revisit allowed for group Instructions? :	Yes
Maximum Instruction Time:	0
Minimum Instruction Time:	0

General English

Section Id :	167943822
Section Number :	1
Section type :	Online
Mandatory or Optional:	Mandatory
Number of Questions:	16
Number of Questions to be attempted:	16
Section Marks:	20
Display Number Panel:	Yes

Group All Questions:

No

Sub-Section Number:

1

Sub-Section Id:

1679431265

Question Shuffling Allowed :

Yes

Question Number : 61 Question Id : 16794319852 Question Type : MCQ Option Shuffling : Yes Display Question Number : Yes
Single Line Question Option : No Option Orientation : Vertical

Correct Marks : 1 Wrong Marks : 0.25

From the given options, choose the one that would mean the SAME as:

DARING

Options :

1. ✖ cooperate

2. ✔ fearless

3. ✖ coward

4. ✖ indifferent

Question Number : 61 Question Id : 16794319852 Question Type : MCQ Option Shuffling : Yes Display Question Number : Yes
Single Line Question Option : No Option Orientation : Vertical

Correct Marks : 1 Wrong Marks : 0.25

From the given options, choose the one that would mean the SAME as:

DARING

Options :

1. ✖ cooperate

2. ✔ fearless

3. ✖ coward

4. ✖ indifferent

Question Number : 62 Question Id : 16794319853 Question Type : MCQ Option Shuffling : Yes Display Question Number : Yes
Single Line Question Option : No Option Orientation : Vertical

Correct Marks : 1 Wrong Marks : 0.25

From the given options, choose the one that would mean the SAME as:

SHORTCOMING

Options :

1. ✖ consequence
2. ✖ excited
3. ✔ weakness
4. ✖ instrument

Question Number : 62 Question Id : 16794319853 Question Type : MCQ Option Shuffling : Yes Display Question Number : Yes
Single Line Question Option : No Option Orientation : Vertical

Correct Marks : 1 Wrong Marks : 0.25

From the given options, choose the one that would mean the SAME as:

SHORTCOMING

Options :

1. ✖ consequence
2. ✖ excited
3. ✔ weakness
4. ✖ instrument

Question Number : 63 Question Id : 16794319854 Question Type : MCQ Option Shuffling : Yes Display Question Number : Yes
Single Line Question Option : No Option Orientation : Vertical

Correct Marks : 1 Wrong Marks : 0.25

From the given options choose the one that means the OPPOSITE of.

FRAGRANCE

Options :

1. ✔ stink
2. ✖ warmth
3. ✖ edifice
4. ✖ blast

Question Number : 63 Question Id : 16794319854 Question Type : MCQ Option Shuffling : Yes Display Question Number : Yes
Single Line Question Option : No Option Orientation : Vertical

Correct Marks : 1 Wrong Marks : 0.25

From the given options choose the one that means the OPPOSITE of.

FRAGRANCE

Options :

1. ☒ stink
2. ☐ warmth
3. ☐ edifice
4. ☐ blast

Question Number : 64 Question Id : 16794319855 Question Type : MCQ Option Shuffling : Yes Display Question Number : Yes
Single Line Question Option : No Option Orientation : Vertical

Correct Marks : 1 Wrong Marks : 0.25

From the given options choose the one that means the OPPOSITE of:

ABUNDANCE.

Options :

1. ☐ hazardous
2. ☐ candid
3. ☒ shortage
4. ☐ plentiful

Question Number : 64 Question Id : 16794319855 Question Type : MCQ Option Shuffling : Yes Display Question Number : Yes
Single Line Question Option : No Option Orientation : Vertical

Correct Marks : 1 Wrong Marks : 0.25

From the given options choose the one that means the OPPOSITE of:

ABUNDANCE.

Options :

1. ☐ hazardous
2. ☐ candid
3. ☒ shortage
4. ☐ plentiful

Question Number : 65 Question Id : 16794319856 Question Type : MCQ Option Shuffling : Yes Display Question Number : Yes
Single Line Question Option : No Option Orientation : Vertical

Correct Marks : 1 Wrong Marks : 0.25

Choose the incorrectly spelt word from the given options.

Options :

1. ✖ meagre

2. ✔ hert

3. ✖ slur

4. ✖ balm

Question Number : 65 Question Id : 16794319856 Question Type : MCQ Option Shuffling : Yes Display Question Number : Yes
Single Line Question Option : No Option Orientation : Vertical

Correct Marks : 1 Wrong Marks : 0.25

Choose the incorrectly spelt word from the given options.

Options :

1. ✖ meagre

2. ✔ hert

3. ✖ slur

4. ✖ balm

Question Number : 66 Question Id : 16794319857 Question Type : MCQ Option Shuffling : Yes Display Question Number : Yes
Single Line Question Option : No Option Orientation : Vertical

Correct Marks : 1 Wrong Marks : 0.25

Given below is an incorrect sentence. From the given options, select the part that has an error.

With the approaching festival season, the overcrowded roads would be totally pollutant.

Options :

1. ✖ approaching

2. ✖ festival season

3. ✖ overcrowded roads

4. ✔ totally pollutant

Question Number : 66 Question Id : 16794319857 Question Type : MCQ Option Shuffling : Yes Display Question Number : Yes
Single Line Question Option : No Option Orientation : Vertical

Correct Marks : 1 Wrong Marks : 0.25

Given below is an incorrect sentence. From the given options, select the part that has an error.

With the approaching festival season, the overcrowded roads would be totally pollutant.

Options :

1. ✖ approaching
2. ✖ festival season
3. ✖ overcrowded roads
4. ✔ totally pollutant

Question Number : 67 Question Id : 16794319858 Question Type : MCQ Option Shuffling : Yes Display Question Number : Yes
Single Line Question Option : No Option Orientation : Vertical

Correct Marks : 1 Wrong Marks : 0.25

Given below is an incorrect sentence. From the given options, select the part that has an error.

On-line shopping were become all the rage at the moment.

Options :

1. ✖ On-line
2. ✔ were become
3. ✖ all the rage
4. ✖ the moment.

Question Number : 67 Question Id : 16794319858 Question Type : MCQ Option Shuffling : Yes Display Question Number : Yes
Single Line Question Option : No Option Orientation : Vertical

Correct Marks : 1 Wrong Marks : 0.25

Given below is an incorrect sentence. From the given options, select the part that has an error.

On-line shopping were become all the rage at the moment.

Options :

1. ✖ On-line
2. ✔ were become
3. ✖ all the rage
4. ✖ the moment.

Question Number : 68 Question Id : 16794319859 Question Type : MCQ Option Shuffling : Yes Display Question Number : Yes
Single Line Question Option : No Option Orientation : Vertical

Correct Marks : 1 Wrong Marks : 0.25

From the given options, select the one that represents the appropriate meaning of the underlined expression in the sentence given below.

I saw Irene in a very smart black pullover with a handsome gentleman in her new car.

Options :

1. ☒ a piece of black woollen jumper
2. ☐ a black car close to the side of the road
3. ☐ a black evening suit
4. ☐ an eye make-up in black colour

Question Number : 68 Question Id : 16794319859 Question Type : MCQ Option Shuffling : Yes Display Question Number : Yes
Single Line Question Option : No Option Orientation : Vertical

Correct Marks : 1 Wrong Marks : 0.25

From the given options, select the one that represents the appropriate meaning of the underlined expression in the sentence given below.

I saw Irene in a very smart black pullover with a handsome gentleman in her new car.

Options :

1. ☒ a piece of black woollen jumper
2. ☐ a black car close to the side of the road
3. ☐ a black evening suit
4. ☐ an eye make-up in black colour

Question Number : 69 Question Id : 16794319860 Question Type : MCQ Option Shuffling : Yes Display Question Number : Yes
Single Line Question Option : No Option Orientation : Vertical

Correct Marks : 1 Wrong Marks : 0.25

From the given options, select the word that can substitute the piece of text given below.

a book that gives instructions about a particular tool or machine

Options :

1. ☐ a handbill
2. ☐ a handbrake
3. ☒ a handbook

4. ✖ a handcuff

Question Number : 69 Question Id : 16794319860 Question Type : MCQ Option Shuffling : Yes Display Question Number : Yes
Single Line Question Option : No Option Orientation : Vertical

Correct Marks : 1 Wrong Marks : 0.25

From the given options, select the word that can substitute the piece of text given below.

a book that gives instructions about a particular tool or machine

Options :

1. ✖ a handbill

2. ✖ a handbrake

3. ✔ a handbook

4. ✖ a handcuff

Question Number : 70 Question Id : 16794319861 Question Type : MCQ Option Shuffling : Yes Display Question Number : Yes
Single Line Question Option : No Option Orientation : Vertical

Correct Marks : 1 Wrong Marks : 0.25

Fill in the blank in the sentence given below with the correct option.

I don't think I _____ be able to go to Jaisalmer with you during Diwali.

Options :

1. ✖ can

2. ✔ shall

3. ✖ should

4. ✖ ought to

Question Number : 70 Question Id : 16794319861 Question Type : MCQ Option Shuffling : Yes Display Question Number : Yes
Single Line Question Option : No Option Orientation : Vertical

Correct Marks : 1 Wrong Marks : 0.25

Fill in the blank in the sentence given below with the correct option.

I don't think I _____ be able to go to Jaisalmer with you during Diwali.

Options :

1. ✖ can

2. ✔ shall

3. ✖ should

4. ✖ ought to

Question Number : 71 Question Id : 16794319862 Question Type : MCQ Option Shuffling : Yes Display Question Number : Yes
Single Line Question Option : No Option Orientation : Vertical

Correct Marks : 1 Wrong Marks : 0.25

Fill in the blank in the sentence given below with the correct option.

Pushpa _____ able to complete the assignment on time as her cousin came suddenly.

Options :

1. ✖ isn't

2. ✖ hasn't

3. ✔ wasn't

4. ✖ didn't

Question Number : 71 Question Id : 16794319862 Question Type : MCQ Option Shuffling : Yes Display Question Number : Yes
Single Line Question Option : No Option Orientation : Vertical

Correct Marks : 1 Wrong Marks : 0.25

Fill in the blank in the sentence given below with the correct option.

Pushpa _____ able to complete the assignment on time as her cousin came suddenly.

Options :

1. ✖ isn't

2. ✖ hasn't

3. ✔ wasn't

4. ✖ didn't

Question Number : 72 Question Id : 16794319863 Question Type : MCQ Option Shuffling : Yes Display Question Number : Yes
Single Line Question Option : No Option Orientation : Vertical

Correct Marks : 1 Wrong Marks : 0.25

Fill in the blank in the sentence given below with the correct option.

It _____ since early morning. The streets of our neighbourhood _____ already water-logged.

Options :

1. ✖ rains; have

2. ✖ is raining; has
3. ✖ rained; was
4. ✔ has been raining; are

Question Number : 72 Question Id : 16794319863 Question Type : MCQ Option Shuffling : Yes Display Question Number : Yes
Single Line Question Option : No Option Orientation : Vertical
Correct Marks : 1 Wrong Marks : 0.25

Fill in the blank in the sentence given below with the correct option.

It ____ since early morning. The streets of our neighbourhood ____ already water-logged.

Options :

1. ✖ rains; have
2. ✖ is raining; has
3. ✖ rained; was
4. ✔ has been raining; are

Question Number : 73 Question Id : 16794319864 Question Type : MCQ Option Shuffling : Yes Display Question Number : Yes
Single Line Question Option : No Option Orientation : Vertical
Correct Marks : 1 Wrong Marks : 0.25

Combine the given sentences into a meaningful single sentence.

Roma is my youngest sister-in-law. She is admitted in a nursing home in Kolkata. Her hip bone is broken. She fell down in a neighbour's house.

Options :

1. ✔
Roma, my youngest sister- in- law, fell down in a neighbour's house and is admitted in a nursing home in Kolkata with a broken hip
2. ✖
Having broken her hip bone, Roma, my youngest sister-in-law is admitted in a nursing home in Kolkata that fell down in a neighbour's house.
3. ✖
After she fell down and broke her hip bone, my youngest sister-in-law, Roma, is admitted in her neighbour's house near a nursing home in Kolkata.
4. ✖
A nursing home in Kolkata admitted a neighbour of Roma, my youngest sister-in-law, and broke her hip bone.

Question Number : 73 Question Id : 16794319864 Question Type : MCQ Option Shuffling : Yes Display Question Number : Yes
Single Line Question Option : No Option Orientation : Vertical
Correct Marks : 1 Wrong Marks : 0.25

Combine the given sentences into a meaningful single sentence.

Roma is my youngest sister-in-law. She is admitted in a nursing home in Kolkata. Her hip bone is broken. She fell down in a neighbour's house.

Options :

1. ✓

Roma, my youngest sister-in-law, fell down in a neighbour's house and is admitted in a nursing home in Kolkata with a broken hip

2. ✗

Having broken her hip bone, Roma, my youngest sister-in-law is admitted in a nursing home in Kolkata that fell down in a neighbour's house.

3. ✗

After she fell down and broke her hip bone, my youngest sister-in-law, Roma, is admitted in her neighbour's house near a nursing home in Kolkata.

4. ✗

A nursing home in Kolkata admitted a neighbour of Roma, my youngest sister-in-law, and broke her hip bone.

Question Number : 74 Question Id : 16794319865 Question Type : MCQ Option Shuffling : Yes Display Question Number : Yes
Single Line Question Option : No Option Orientation : Vertical

Correct Marks : 1 Wrong Marks : 0.25

Select the option that represents the correct passive voice form to fill in the blank in the sentence given below.

Millions of dollars' worth of damage _____ as typhoon Manghunt swept over Philippines and South East Asia.

Options :

1. ✗ has caused

2. ✓ has been caused

3. ✗ will cause

4. ✗ having caused

Question Number : 74 Question Id : 16794319865 Question Type : MCQ Option Shuffling : Yes Display Question Number : Yes
Single Line Question Option : No Option Orientation : Vertical

Correct Marks : 1 Wrong Marks : 0.25

Select the option that represents the correct passive voice form to fill in the blank in the sentence given below.

Millions of dollars' worth of damage _____ as typhoon Manghunt swept over Philippines and South East Asia.

Options :

1. ✗ has caused

2. ✓ has been caused

3. ✗ will cause

4. ✖ having caused

Question Number : 75 Question Id : 16794319866 Question Type : MCQ Option Shuffling : Yes Display Question Number : Yes
Single Line Question Option : No Option Orientation : Vertical

Correct Marks : 1 Wrong Marks : 0.25

Select the indirect form of narration of the given sentence.

Shilpi said to Ruchi, "Don't forget to collect your cards when you come out of the library."

Options :

1. ✖ Shilpi told Ruchi to remember to collect her cards when she went to the library
2. ✖ Shilpi was told by Ruchi to definitely collect her cards when she went to the library.
3. ✖ Shilpi asked Ruchi to get her library cards when she goes there
4. ✔ Shilpi reminded Ruchi not to forget to collect the cards when she came out of the library

Question Number : 75 Question Id : 16794319866 Question Type : MCQ Option Shuffling : Yes Display Question Number : Yes
Single Line Question Option : No Option Orientation : Vertical

Correct Marks : 1 Wrong Marks : 0.25

Select the indirect form of narration of the given sentence.

Shilpi said to Ruchi, "Don't forget to collect your cards when you come out of the library."

Options :

1. ✖ Shilpi told Ruchi to remember to collect her cards when she went to the library
2. ✖ Shilpi was told by Ruchi to definitely collect her cards when she went to the library.
3. ✖ Shilpi asked Ruchi to get her library cards when she goes there
4. ✔ Shilpi reminded Ruchi not to forget to collect the cards when she came out of the library

Sub-Section Number:	2
Sub-Section Id:	1679431266
Question Shuffling Allowed :	Yes

Question Id : 16794319867 Question Type : COMPREHENSION Sub Question Shuffling Allowed : Yes Group Comprehension
Questions : No

Question Numbers : (76 to 80)

Question Label : Comprehension

Read the following passage and answer the questions given after it.

It all began with a birthday. On Saturday 23 June, 2018, Peerapat "Night" turned 17. To celebrate the occasion, Night decided to go out with his friends, the other members of local youth football team, the Wild Boars, and their 25-year-old assistant coach, "Ake". When their football practice ended, they raced through the rice paddies on their bicycles and up into the forested hills that lately had been blanketed in rain.

Their destination: the Tham Luang cave, a favourite meeting place for the boys. Once at the mouth of the cave, they stashed their bikes and bags by the entrance and clambered into the cave with just their torches, planning to be there for an hour.

However, the Wild Boars soon found themselves in trouble. It had been raining for the last few days, and all that water falling on the mountain was fast filling up the Tham Luang cave system. The boys became trapped deep inside a cave due to unexpected rising water, four kilometers from the cave entrance.

When the parents of the Wild Boars began to worry about their missing boys, they headed straight to the cave. They found the bikes, the bags, and some football shoes outside. They raised the alarm.

Underneath the mountain, deep inside the cave, the Wild Boars found themselves on a small rocky shelf. Surrounded by darkness, the boys and the coach soon lost all sense of time. But they were determined to survive. The group used rocks to dig five metre deeper into the shelf, to create a hollow where they could be together and keep warm. Coach Ake, a former monk, taught the boys meditation techniques - to help them stay calm and use as little air as possible - and told them to lie still to conserve their strength.

Outside the cave, a full-blown rescue operation was quickly unfolding. Authorities called in the elite Thai Navy Seals, the national police, and other rescue teams. Local volunteers also pitched in. The first international rescuers arrived on Thursday 28 June. These were US air force rescue specialists, and cave divers from the UK, Belgium, Australia, Scandinavia, and many other countries. Some had volunteered, and some were called in by Thai authorities.

Over the next few days, they and the Thai divers would fight a constant battle with the elements. They had to swim against strong currents, rising floodwaters in the dark and tight passageways with little oxygen in the air.

A week passed. The boys and their coach were still missing. However, on Monday July 2, two British divers, found the lost Wild Boars, all thirteen of them. The extraordinary encounter was recorded on the divers' cameras- and swiftly posted online. The joyous celebration was instant and worldwide.

On Sunday 7 July, the Thai authorities decided to bring out the children and their coach one by one. 100 Thai and foreign divers rescued the boys in three batches over the next three days as they needed time in between to refill air tanks. Those rescued were given oxygen before they were taken away in ambulances to a hospital in Chiang Rai city.

It was an astonishing feat - after two agonising weeks the Thai cave boys and their coach were finally out at last, safe and sound. Many had expected the story of the lost Wild Boars to end in tragedy. Instead, it became a story of hope and survival, of parents and sons reunited, of friendship, human endurance - and the lengths some people will go to save someone else's child.

Sub questions

Question Number : 76 Question Id : 16794319868 Question Type : MCQ Option Shuffling : Yes Display Question Number : Yes
Single Line Question Option : No Option Orientation : Vertical

Correct Marks : 1 Wrong Marks : 0.25

Complete the sentence with the correct option.

The Wild Boar football team along with the coach went to the Tham Luang cave complex to celebrate _____.

Options :

1. ✖ the birthday of coach Ake
2. ✖ their escape from their parents punishment
3. ✖ their rescue from the cave after two weeks
4. ✔ the birthday of Peerapat Night

Question Number : 77 Question Id : 16794319869 Question Type : MCQ Option Shuffling : Yes Display Question Number : Yes
Single Line Question Option : No Option Orientation : Vertical

Correct Marks : 1 Wrong Marks : 0.25

Choose the correct option that answers the question given below.

What made the parents realize that their children were missing?

Options :

1. ✖ The parents knew that the Tham Luang caves were often visited by their sons.
2. ✔ The parents found the bags, football shoes and bicycles near the cave entrance which meant the children were inside the caves.
3. ✖ One of Night's friends told the parents about the teams' plan to visit the caves.
4. ✖ Coach Ake had purposely left footmarks near the entrance of the cave.

Question Number : 78 Question Id : 16794319870 Question Type : MCQ Option Shuffling : Yes Display Question Number : Yes
Single Line Question Option : No Option Orientation : Vertical

Correct Marks : 1 Wrong Marks : 0.25

Choose the correct option to complete the sentence.

Realizing that they lacked the necessary expertise and resources to carry out the massive rescue operations, the Thai authorities sought help from _____.

Options :

1. ☒ European and other countries for expert cave divers, air force rescue specialists and others
2. ☐ friends and teachers of the boys of the Wild Boar team
3. ☐ journalists and media persons—both national and international
4. ☐ doctors, para-medics and ambulance drivers from all over the world

Question Number : 79 Question Id : 16794319871 Question Type : MCQ Option Shuffling : Yes Display Question Number : Yes
Single Line Question Option : No Option Orientation : Vertical

Correct Marks : 1 Wrong Marks : 0.25

Choose the INCORRECT option.

Coach Ake is a perfect exemplar of:

Options :

1. ☐ determination and willpower
2. ☐ cool headedness and courage.
3. ☐ tolerating hardships for long periods
4. ☒ selfishness and cowardice

Question Number : 80 Question Id : 16794319872 Question Type : MCQ Option Shuffling : Yes Display Question Number : Yes
Single Line Question Option : No Option Orientation : Vertical

Correct Marks : 1 Wrong Marks : 0.25

Choose a suitable title from the given options for the reading passage.

Options :

1. ☐ The Wild Boars—A Football Team Of Thailand
2. ☐ The Story Of A Football Playing Monk

3. ✓ The Ultimate Instance Of International Cooperation

The Pressure Created On Thai Authorities By
4. ✗ Worried Parents And Friends

Question Id : 16794319867 Question Type : COMPREHENSION Sub Question Shuffling Allowed : Yes Group Comprehension Questions : No

Question Numbers : (76 to 80)

Question Label : Comprehension

Read the following passage and answer the questions given after it.

It all began with a birthday. On Saturday 23 June, 2018, Peerapat "Night" turned 17. To celebrate the occasion, Night decided to go out with his friends, the other members of local youth football team, the Wild Boars, and their 25-year-old assistant coach, "Ake". When their football practice ended, they raced through the rice paddies on their bicycles and up into the forested hills that lately had been blanketed in rain.

Their destination: the Tham Luang cave, a favourite meeting place for the boys. Once at the mouth of the cave, they stashed their bikes and bags by the entrance and clambered into the cave with just their torches, planning to be there for an hour.

However, the Wild Boars soon found themselves in trouble. It had been raining for the last few days, and all that water falling on the mountain was fast filling up the Tham Luang cave system. The boys became trapped deep inside a cave due to unexpected rising water, four kilometers from the cave entrance.

When the parents of the Wild Boars began to worry about their missing boys, they headed straight to the cave. They found the bikes, the bags, and some football shoes outside. They raised the alarm.

Underneath the mountain, deep inside the cave, the Wild Boars found themselves on a small rocky shelf. Surrounded by darkness, the boys and the coach soon lost all sense of time. But they were determined to survive. The group used rocks to dig five metre deeper into the shelf, to create a hollow where they could be together and keep warm. Coach Ake, a former monk, taught the boys meditation techniques - to help them stay calm and use as little air as possible - and told them to lie still to conserve their strength.

Outside the cave, a full-blown rescue operation was quickly unfolding. Authorities called in the elite Thai Navy Seals, the national police, and other rescue teams. Local volunteers also pitched in. The first international rescuers arrived on Thursday 28 June. These were US air force rescue specialists, and cave divers from the UK, Belgium, Australia, Scandinavia, and many other countries. Some had volunteered, and some were called in by Thai authorities.

Over the next few days, they and the Thai divers would fight a constant battle with the elements. They had to swim against strong currents, rising floodwaters in the dark and tight passageways with little oxygen in the air.

A week passed. The boys and their coach were still missing. However, on Monday July 2, two British divers, found the lost Wild Boars, all thirteen of them. The extraordinary encounter was recorded on the divers' cameras- and swiftly posted online. The joyous celebration was instant and worldwide.

On Sunday 7 July, the Thai authorities decided to bring out the children and their coach one by one. 100 Thai and foreign divers rescued the boys in three batches over the next three days as they needed time in between to refill air tanks. Those rescued were given oxygen before they were taken away in ambulances to a hospital in Chiang Rai city.

It was an astonishing feat - after two agonising weeks the Thai cave boys and their coach were finally out at last, safe and sound. Many had expected the story of the lost Wild Boars to end in tragedy. Instead, it became a story of hope and survival, of parents and sons reunited, of friendship, human endurance - and the lengths some people will go to save someone else's child.

Sub questions

Question Number : 76 Question Id : 16794319868 Question Type : MCQ Option Shuffling : Yes Display Question Number : Yes
Single Line Question Option : No Option Orientation : Vertical

Correct Marks : 1 Wrong Marks : 0.25

Complete the sentence with the correct option.

The Wild Boar football team along with the coach
went to the Tham Luang cave complex to celebrate
_____.

Options :

1. ✖ the birthday of coach Ake
2. ✖ their escape from their parents punishment
3. ✖ their rescue from the cave after two weeks
4. ✔ the birthday of Peerapat Night

Question Number : 77 Question Id : 16794319869 Question Type : MCQ Option Shuffling : Yes Display Question Number : Yes
Single Line Question Option : No Option Orientation : Vertical

Correct Marks : 1 Wrong Marks : 0.25

Choose the correct option that answers the question
given below.

What made the parents realize that their children
were missing?

Options :

1. ✖ The parents knew that the Tham Luang caves were often visited by their sons.
2. ✔ The parents found the bags, football shoes and bicycles near the cave entrance which meant the children were inside the caves.
3. ✖ One of Night's friends told the parents about the teams' plan to visit the caves.
4. ✖ Coach Ake had purposely left footmarks near the entrance of the cave.

Question Number : 78 Question Id : 16794319870 Question Type : MCQ Option Shuffling : Yes Display Question Number : Yes
Single Line Question Option : No Option Orientation : Vertical

Correct Marks : 1 Wrong Marks : 0.25

Choose the correct option to complete the sentence.

Realizing that they lacked the necessary expertise and resources to carry out the massive rescue operations, the Thai authorities sought help from _____.

Options :

1. ☒ European and other countries for expert cave divers, air force rescue specialists and others
2. ☐ friends and teachers of the boys of the Wild Boar team
3. ☐ journalists and media persons—both national and international
4. ☐ doctors, para-medics and ambulance drivers from all over the world

Question Number : 79 Question Id : 16794319871 Question Type : MCQ Option Shuffling : Yes Display Question Number : Yes
Single Line Question Option : No Option Orientation : Vertical

Correct Marks : 1 Wrong Marks : 0.25

Choose the INCORRECT option.

Coach Ake is a perfect exemplar of:

Options :

1. ☐ determination and willpower
2. ☐ cool headedness and courage.
3. ☐ tolerating hardships for long periods
4. ☒ selfishness and cowardice

Question Number : 80 Question Id : 16794319872 Question Type : MCQ Option Shuffling : Yes Display Question Number : Yes
Single Line Question Option : No Option Orientation : Vertical

Correct Marks : 1 Wrong Marks : 0.25

Choose a suitable title from the given options for the reading passage.

Options :

1. ☐ The Wild Boars—A Football Team Of Thailand
2. ☐ The Story Of A Football Playing Monk

3. ✓ The Ultimate Instance Of International Cooperation

4. ✖ The Pressure Created On Thai Authorities By
Worried Parents And Friends

General Hindi

Group Number :	5
Group Id :	167943758
Group Maximum Duration :	0
Group Minimum Duration :	0
Revisit allowed for view? :	No
Revisit allowed for edit? :	No
Break time:	0
Group Marks:	20
Revisit allowed for group Instructions? :	Yes
Maximum Instruction Time:	0
Minimum Instruction Time:	0

General Hindi

Section Id :	167943823
Section Number :	1
Section type :	Online
Mandatory or Optional:	Mandatory
Number of Questions:	16
Number of Questions to be attempted:	16
Section Marks:	20
Display Number Panel:	Yes
Group All Questions:	No

Sub-Section Number:	1
Sub-Section Id:	1679431267
Question Shuffling Allowed :	Yes

Question Id : 16794319873 Question Type : COMPREHENSION Sub Question Shuffling Allowed : Yes Group Comprehension Questions : No

Question Numbers : (81 to 85)

Question Label : Comprehension

नीचे दिये गए गद्यांश को पढ़कर पूछे गये प्रश्नों के उत्तर दीजिए।

शुक्लानुवर्ती आलोचकों में पं विश्वनाथ प्रसाद मिश्र और पं कृष्ण शंकर शुक्ल उल्लेखनीय हैं। पं विश्वनाथ प्रसाद मिश्र की पुस्तक बिहारी की वाग्विभूति (1936) स्वाधीनता के पूर्व निकल चुकी थी। उनका काम विशेषतः संपादन और टीका के क्षेत्र में रहा। पं कृष्णशंकर शुक्ल ने रत्नाकर (1935) और केशव (1936) पर उल्लेखनीय कार्य किया। पं शांतिप्रिय द्विवेदी काव्योचित भाषा में आलोचना लिखते थे। उन्हें प्रभाववादी आलोचक माना जाता है। प्रसाद, निराला, पंत, महादेवी वर्मा ने भी अनेकों लेखों के माध्यम से काव्यालोचना करके हिन्दी समीक्षा को समृद्ध किया।

Sub questions

Question Number : 81 Question Id : 16794319874 Question Type : MCQ Option Shuffling : Yes Display Question Number : Yes
Single Line Question Option : No Option Orientation : Vertical

Correct Marks : 1 Wrong Marks : 0.25

‘बिहारी की वाग्विभूति’ पुस्तक के लेखक हैं:

Options :

1. ✖ रामचन्द्र शुक्ल
2. ✖ हजारीप्रसाद द्विवेदी
3. ✖ कृष्णशंकर शुक्ल
4. ✔ विश्वनाथ प्रसाद मिश्र

Question Number : 82 Question Id : 16794319875 Question Type : MCQ Option Shuffling : Yes Display Question Number : Yes
Single Line Question Option : No Option Orientation : Vertical

Correct Marks : 1 Wrong Marks : 0.25

कृष्ण शंकर शुक्ल ने किस पर उल्लेखनीय कार्य किया?

Options :

1. ✖ पद्माकर
2. ✔ रत्नाकर
3. ✖ बिहारी

4. ✖ घनानन्द

Question Number : 83 Question Id : 16794319876 Question Type : MCQ Option Shuffling : Yes Display Question Number : Yes
Single Line Question Option : No Option Orientation : Vertical

Correct Marks : 1 Wrong Marks : 0.25

काव्योचित भाषा में आलोचना लिखते थे:

Options :

1. ✖ विश्वनाथ प्रसाद मिश्र

2. ✖ कृष्णशंकर शुक्ल

3. ✔ शांतिप्रिय द्रविदेदी

4. ✖ रामचन्द्र शुक्ल

Question Number : 84 Question Id : 16794319877 Question Type : MCQ Option Shuffling : Yes Display Question Number : Yes
Single Line Question Option : No Option Orientation : Vertical

Correct Marks : 1 Wrong Marks : 0.25

शांतिप्रिय द्रविदेदी को कैसा आलोचक माना जाता है?

Options :

1. ✔ प्रभाववादी

2. ✖ साम्यवादी

3. ✖ मार्क्सवादी

4. ✖ समाजवादी

Question Number : 85 Question Id : 16794319878 Question Type : MCQ Option Shuffling : Yes Display Question Number : Yes
Single Line Question Option : No Option Orientation : Vertical

Correct Marks : 1 Wrong Marks : 0.25

गद्यांश में उल्लिखित पुस्तक 'केशव' का प्रकाशन वर्ष है:

Options :

1. ✖ 1934

2. ✖ 1935

3. ✔ 1936

4. ✖ 1937

Question Id : 16794319873 Question Type : COMPREHENSION Sub Question Shuffling Allowed : Yes Group Comprehension Questions : No

Question Numbers : (81 to 85)

Question Label : Comprehension

नीचे दिये गए गद्यांश को पढ़कर पूछे गये प्रश्नों के उत्तर दीजिए।

शुक्लानुवर्ती आलोचकों में पं विश्वनाथ प्रसाद मिश्र और पं कृष्ण शंकर शुक्ल उल्लेखनीय हैं। पं विश्वनाथ प्रसाद मिश्र की पुस्तक बिहारी की वाग्विभूति (1936) स्वाधीनता के पूर्व निकल चुकी थी। उनका काम विशेषतः संपादन और टीका के क्षेत्र में रहा। पं कृष्णशंकर शुक्ल ने रत्नाकर (1935) और केशव (1936) पर उल्लेखनीय कार्य किया। पं शांतिप्रिय द्विवेदी काव्योचित भाषा में आलोचना लिखते थे। उन्हें प्रभाववादी आलोचक माना जाता है। प्रसाद, निराला, पंत, महादेवी वर्मा ने भी अनेकों लेखों के माध्यम से काव्यालोचना करके हिन्दी समीक्षा को समृद्ध किया।

Sub questions

Question Number : 81 Question Id : 16794319874 Question Type : MCQ Option Shuffling : Yes Display Question Number : Yes Single Line Question Option : No Option Orientation : Vertical

Correct Marks : 1 Wrong Marks : 0.25

‘बिहारी की वाग्विभूति’ पुस्तक के लेखक हैं:

Options :

1. ✖ रामचन्द्र शुक्ल
2. ✖ हजारीप्रसाद द्विवेदी
3. ✖ कृष्णशंकर शुक्ल
4. ✔ विश्वनाथ प्रसाद मिश्र

Question Number : 82 Question Id : 16794319875 Question Type : MCQ Option Shuffling : Yes Display Question Number : Yes Single Line Question Option : No Option Orientation : Vertical

Correct Marks : 1 Wrong Marks : 0.25

कृष्ण शंकर शुक्ल ने किस पर उल्लेखनीय कार्य किया?

Options :

1. ✖ पद्माकर

2. ✔ रत्नाकर

3. ✖ बिहारी

4. ✖ घनानन्द

Question Number : 83 Question Id : 16794319876 Question Type : MCQ Option Shuffling : Yes Display Question Number : Yes
Single Line Question Option : No Option Orientation : Vertical

Correct Marks : 1 Wrong Marks : 0.25

काव्योचित भाषा में आलोचना लिखते थे:

Options :

1. ✖ विश्वनाथ प्रसाद मिश्र

2. ✖ कृष्णशंकर शुक्ल

3. ✔ शांतिप्रिय द्विवेदी

4. ✖ रामचन्द्र शुक्ल

Question Number : 84 Question Id : 16794319877 Question Type : MCQ Option Shuffling : Yes Display Question Number : Yes
Single Line Question Option : No Option Orientation : Vertical

Correct Marks : 1 Wrong Marks : 0.25

शांतिप्रिय द्विवेदी को कैसा आलोचक माना जाता है?

Options :

1. ✔ प्रभाववादी

2. ✖ साम्यवादी

3. ✖ मार्क्सवादी

4. ✖ समाजवादी

Question Number : 85 Question Id : 16794319878 Question Type : MCQ Option Shuffling : Yes Display Question Number : Yes
Single Line Question Option : No Option Orientation : Vertical

Correct Marks : 1 Wrong Marks : 0.25

गद्यांश में उल्लिखित पुस्तक 'केशव' का प्रकाशन वर्ष है:

Options :

1. ✖ 1934

2. ✖ 1935

3. ✔ 1936

4. ✖ 1937

Sub-Section Number: 2
Sub-Section Id: 1679431268
Question Shuffling Allowed : Yes

Question Number : 86 Question Id : 16794319879 Question Type : MCQ Option Shuffling : Yes Display Question Number : Yes
Single Line Question Option : No Option Orientation : Vertical

Correct Marks : 1 Wrong Marks : 0.25

निम्न में कौन सा शब्द तत्सम है?

Options :

1. ✖ मोर

2. ✖ मोती

3. ✖ मेढक

4. ✔ मेघ

Question Number : 86 Question Id : 16794319879 Question Type : MCQ Option Shuffling : Yes Display Question Number : Yes
Single Line Question Option : No Option Orientation : Vertical

Correct Marks : 1 Wrong Marks : 0.25

निम्न में कौन सा शब्द तत्सम है?

Options :

1. ✖ मोर

2. ✖ मोती

3. ✖ मेढक

4. ✔ मेघ

Question Number : 87 Question Id : 16794319880 Question Type : MCQ Option Shuffling : Yes Display Question Number : Yes
Single Line Question Option : No Option Orientation : Vertical

Correct Marks : 1 Wrong Marks : 0.25

निम्न में तद्भव शब्द कौन सा है?

Options :

1. ☒ बेल
2. ☐ विग्रह
3. ☐ विकार
4. ☐ विद्युत

Question Number : 87 Question Id : 16794319880 Question Type : MCQ Option Shuffling : Yes Display Question Number : Yes
Single Line Question Option : No Option Orientation : Vertical

Correct Marks : 1 Wrong Marks : 0.25

निम्न में तद्भव शब्द कौन सा है?

Options :

1. ☒ बेल
2. ☐ विग्रह
3. ☐ विकार
4. ☐ विद्युत

Question Number : 88 Question Id : 16794319881 Question Type : MCQ Option Shuffling : Yes Display Question Number : Yes
Single Line Question Option : No Option Orientation : Vertical

Correct Marks : 1 Wrong Marks : 0.25

निम्न में व्यक्तिवाचक संज्ञा कौन सी है?

Options :

1. ☐ तोता
2. ☒ अमेरिका
3. ☐ घड़ी
4. ☐ तूफान

Question Number : 88 Question Id : 16794319881 Question Type : MCQ Option Shuffling : Yes Display Question Number : Yes
Single Line Question Option : No Option Orientation : Vertical

Correct Marks : 1 Wrong Marks : 0.25

निम्न में व्यक्तिवाचक संज्ञा कौन सी है?

Options :

1. ✖ तोता
2. ✔ अमेरिका
3. ✖ घड़ी
4. ✖ तूफान

Question Number : 89 Question Id : 16794319882 Question Type : MCQ Option Shuffling : Yes Display Question Number : Yes
Single Line Question Option : No Option Orientation : Vertical

Correct Marks : 1 Wrong Marks : 0.25

मध्यम पुरुष सर्वनाम है:

Options :

1. ✖ हम
2. ✖ कौन
3. ✖ वह
4. ✔ तुम

Question Number : 89 Question Id : 16794319882 Question Type : MCQ Option Shuffling : Yes Display Question Number : Yes
Single Line Question Option : No Option Orientation : Vertical

Correct Marks : 1 Wrong Marks : 0.25

मध्यम पुरुष सर्वनाम है:

Options :

1. ✖ हम
2. ✖ कौन
3. ✖ वह
4. ✔ तुम

Question Number : 90 Question Id : 16794319883 Question Type : MCQ Option Shuffling : Yes Display Question Number : Yes
Single Line Question Option : No Option Orientation : Vertical

Correct Marks : 1 Wrong Marks : 0.25

निम्न में कौन सा शब्द अव्यय है?

Options :

1. ✖ समान
2. ✖ टिकाऊ
3. ✔ एवं
4. ✖ हरा

Question Number : 90 Question Id : 16794319883 Question Type : MCQ Option Shuffling : Yes Display Question Number : Yes
Single Line Question Option : No Option Orientation : Vertical

Correct Marks : 1 Wrong Marks : 0.25

निम्न में कौन सा शब्द अव्यय है?

Options :

1. ✖ समान
2. ✖ टिकाऊ
3. ✔ एवं
4. ✖ हरा

Question Number : 91 Question Id : 16794319884 Question Type : MCQ Option Shuffling : Yes Display Question Number : Yes
Single Line Question Option : No Option Orientation : Vertical

Correct Marks : 1 Wrong Marks : 0.25

‘निर्गुण’ का संधि-विच्छेद होगा:

Options :

1. ✖ नि + गुण
2. ✔ निः + गुण
3. ✖ नी + गुण
4. ✖ नीः + गुण

Question Number : 91 Question Id : 16794319884 Question Type : MCQ Option Shuffling : Yes Display Question Number : Yes
Single Line Question Option : No Option Orientation : Vertical

Correct Marks : 1 Wrong Marks : 0.25

‘निर्गुण’ का संधि-विच्छेद होगा:

Options :

1. ✖ नि + गुण
2. ✔ नि: + गुण
3. ✖ नी + गुण
4. ✖ नी: + गुण

Question Number : 92 Question Id : 16794319885 Question Type : MCQ Option Shuffling : Yes Display Question Number : Yes
Single Line Question Option : No Option Orientation : Vertical
Correct Marks : 1 Wrong Marks : 0.25

‘सरासर’ में समास है:

Options :

1. ✔ अव्ययीभाव
2. ✖ कर्मधारय
3. ✖ तत्पुरुष
4. ✖ बहुब्रीहि

Question Number : 92 Question Id : 16794319885 Question Type : MCQ Option Shuffling : Yes Display Question Number : Yes
Single Line Question Option : No Option Orientation : Vertical
Correct Marks : 1 Wrong Marks : 0.25

‘सरासर’ में समास है:

Options :

1. ✔ अव्ययीभाव
2. ✖ कर्मधारय
3. ✖ तत्पुरुष
4. ✖ बहुब्रीहि

Question Number : 93 Question Id : 16794319886 Question Type : MCQ Option Shuffling : Yes Display Question Number : Yes
Single Line Question Option : No Option Orientation : Vertical

Correct Marks : 1 Wrong Marks : 0.25

निम्न में कौन सा शब्द पुल्लिंग है?

Options :

1. ✖ इजाजत

2. ✖ इज्जत

3. ✖ इमारत

4. ✔ ईनाम

Question Number : 93 Question Id : 16794319886 Question Type : MCQ Option Shuffling : Yes Display Question Number : Yes
Single Line Question Option : No Option Orientation : Vertical

Correct Marks : 1 Wrong Marks : 0.25

निम्न में कौन सा शब्द पुल्लिंग है?

Options :

1. ✖ इजाजत

2. ✖ इज्जत

3. ✖ इमारत

4. ✔ ईनाम

Question Number : 94 Question Id : 16794319887 Question Type : MCQ Option Shuffling : Yes Display Question Number : Yes
Single Line Question Option : No Option Orientation : Vertical

Correct Marks : 1 Wrong Marks : 0.25

‘अभिनव’ में उपसर्ग है:

Options :

1. ✖ अ

2. ✖ आ

3. ✔ अभि

4. ✖ नव

Question Number : 94 Question Id : 16794319887 Question Type : MCQ Option Shuffling : Yes Display Question Number : Yes
Single Line Question Option : No Option Orientation : Vertical

Correct Marks : 1 Wrong Marks : 0.25

‘अभिनव’ में उपसर्ग है:

Options :

1. ✖ अ
2. ✖ आ
3. ✔ अभि
4. ✖ नव

Question Number : 95 Question Id : 16794319888 Question Type : MCQ Option Shuffling : Yes Display Question Number : Yes
Single Line Question Option : No Option Orientation : Vertical

Correct Marks : 1 Wrong Marks : 0.25

‘वार्षिक’ में प्रत्यय है:

Options :

1. ✔ इक
2. ✖ अक
3. ✖ क
4. ✖ वर्ष

Question Number : 95 Question Id : 16794319888 Question Type : MCQ Option Shuffling : Yes Display Question Number : Yes
Single Line Question Option : No Option Orientation : Vertical

Correct Marks : 1 Wrong Marks : 0.25

‘वार्षिक’ में प्रत्यय है:

Options :

1. ✔ इक
2. ✖ अक
3. ✖ क
4. ✖ वर्ष

Question Number : 96 Question Id : 16794319889 Question Type : MCQ Option Shuffling : Yes Display Question Number : Yes
Single Line Question Option : No Option Orientation : Vertical

Correct Marks : 1 Wrong Marks : 0.25

‘दुःख’ का पर्यायवाची नहीं है:

Options :

1. ✖ व्यथा
2. ✔ प्रमोद
3. ✖ शोक
4. ✖ वेदना

Question Number : 96 Question Id : 16794319889 Question Type : MCQ Option Shuffling : Yes Display Question Number : Yes
Single Line Question Option : No Option Orientation : Vertical

Correct Marks : 1 Wrong Marks : 0.25

‘दुःख’ का पर्यायवाची नहीं है:

Options :

1. ✖ व्यथा
2. ✔ प्रमोद
3. ✖ शोक
4. ✖ वेदना

Question Number : 97 Question Id : 16794319890 Question Type : MCQ Option Shuffling : Yes Display Question Number : Yes
Single Line Question Option : No Option Orientation : Vertical

Correct Marks : 1 Wrong Marks : 0.25

‘स्वप्न’ का विलोम होगा:

Options :

1. ✔ जागरण
2. ✖ निद्रा
3. ✖ कल्पना
4. ✖ यथार्थ

Question Number : 97 Question Id : 16794319890 Question Type : MCQ Option Shuffling : Yes Display Question Number : Yes
Single Line Question Option : No Option Orientation : Vertical

Correct Marks : 1 Wrong Marks : 0.25

‘स्वप्न’ का विलोम होगा:

Options :

1. ✓ जागरण

2. ✗ निद्रा

3. ✗ कल्पना

4. ✗ यथार्थ

Question Number : 98 Question Id : 16794319891 Question Type : MCQ Option Shuffling : Yes Display Question Number : Yes
Single Line Question Option : No Option Orientation : Vertical

Correct Marks : 1 Wrong Marks : 0.25

‘जिसके संबंध में संदेह हो’ के लिए एक शब्द होगा:

Options :

1. ✗ संदेह

2. ✓ संदिग्ध

3. ✗ चोर

4. ✗ अपराधी

Question Number : 98 Question Id : 16794319891 Question Type : MCQ Option Shuffling : Yes Display Question Number : Yes
Single Line Question Option : No Option Orientation : Vertical

Correct Marks : 1 Wrong Marks : 0.25

‘जिसके संबंध में संदेह हो’ के लिए एक शब्द होगा:

Options :

1. ✗ संदेह

2. ✓ संदिग्ध

3. ✗ चोर

4. ✗ अपराधी

Question Number : 99 Question Id : 16794319892 Question Type : MCQ Option Shuffling : Yes Display Question Number : Yes
Single Line Question Option : No Option Orientation : Vertical

Correct Marks : 1 Wrong Marks : 0.25

निम्न में शुद्ध वर्तनी वाला शब्द है:

Options :

1. ✖ पूज्यनीय
2. ✖ पूज्यनिय
3. ✖ पूजनिय
4. ✔ पूजनीय

Question Number : 99 Question Id : 16794319892 Question Type : MCQ Option Shuffling : Yes Display Question Number : Yes
Single Line Question Option : No Option Orientation : Vertical

Correct Marks : 1 Wrong Marks : 0.25

निम्न में शुद्ध वर्तनी वाला शब्द है:

Options :

1. ✖ पूज्यनीय
2. ✖ पूज्यनिय
3. ✖ पूजनिय
4. ✔ पूजनीय

Question Number : 100 Question Id : 16794319893 Question Type : MCQ Option Shuffling : Yes Display Question Number : Yes
Single Line Question Option : No Option Orientation : Vertical

Correct Marks : 1 Wrong Marks : 0.25

‘प्रत्येक श्रमिक को दो-दो रुपये मिले।’ वाक्य में अशुद्ध अंश है:

Options :

1. ✖ प्रत्येक
2. ✖ श्रमिक को
3. ✔ दो-दो रुपये
4. ✖ मिले।

Question Number : 100 Question Id : 16794319893 Question Type : MCQ Option Shuffling : Yes Display Question Number : Yes
Single Line Question Option : No Option Orientation : Vertical

Correct Marks : 1 Wrong Marks : 0.25

‘प्रत्येक श्रमिक को दो-दो रुपये मिले।’ वाक्य में अशुद्ध अंश है:

Options :

1. ✖ प्रत्येक
2. ✖ श्रमिक को
3. ✔ दो-दो रुपये
4. ✖ मिले।

Subject Related

Group Number :	6
Group Id :	167943759
Group Maximum Duration :	0
Group Minimum Duration :	0
Revisit allowed for view? :	No
Revisit allowed for edit? :	No
Break time:	0
Group Marks:	20
Revisit allowed for group Instructions? :	Yes
Maximum Instruction Time:	0
Minimum Instruction Time:	0

Subject Related

Section Id :	167943824
Section Number :	1
Section type :	Online
Mandatory or Optional:	Mandatory
Number of Questions:	20
Number of Questions to be attempted:	20
Section Marks:	20
Display Number Panel:	Yes
Group All Questions:	No

Sub-Section Number:	1
Sub-Section Id:	1679431269
Question Shuffling Allowed :	Yes

Question Number : 101 Question Id : 16794319894 Question Type : MCQ Option Shuffling : Yes Display Question Number : Yes
Single Line Question Option : No Option Orientation : Vertical

Correct Marks : 1 Wrong Marks : 0.25

Who created the cotton mill?

Options :

1. ✖ James Watt
2. ✖ Thomas Newcomen
3. ✖ Matthew Bolten
4. ✔ Richard Arkwright

Question Number : 101 Question Id : 16794319894 Question Type : MCQ Option Shuffling : Yes Display Question Number : Yes
Single Line Question Option : No Option Orientation : Vertical

Correct Marks : 1 Wrong Marks : 0.25

कपास मिल किसने बनाया?

Options :

1. ✖ जेम्स वॉट
2. ✖ थॉमस न्यूकॉमन
3. ✖ मैथ्यू बोल्टेन
4. ✔ रिचर्ड आर्क्राइट

Question Number : 102 Question Id : 16794319895 Question Type : MCQ Option Shuffling : Yes Display Question Number : Yes
Single Line Question Option : No Option Orientation : Vertical

Correct Marks : 1 Wrong Marks : 0.25

In Trinidad, the annual Muharram Procession was transformed into a riotous carnival called _____ in which workers of all races and religions joined.

Options :

1. ✔ Hosay
2. ✖ Rastafarianism
3. ✖ Chutney music
4. ✖ Jamaican reggae

Question Number : 102 Question Id : 16794319895 Question Type : MCQ Option Shuffling : Yes Display Question Number : Yes
Single Line Question Option : No Option Orientation : Vertical

Correct Marks : 1 Wrong Marks : 0.25

त्रिनिदाद में वार्षिक मुहर्रम जुलूस को _____ नामक एक दंगात्मक कार्निवल में बदल दिया गया था जिसमें सभी नस्लों और धर्मों के मजदूर शामिल हो गए थे।

Options :

1. ✓ होसे
2. ✗ रस्ताफरियनिज्म
3. ✗ चटनी म्यूजिक
4. ✗ जमैकन रेगी

Question Number : 103 Question Id : 16794319896 Question Type : MCQ Option Shuffling : Yes Display Question Number : Yes
Single Line Question Option : No Option Orientation : Vertical

Correct Marks : 1 Wrong Marks : 0.25

In which year did Cyrus McCormick invent the first mechanical reaper?

Options :

1. ✗ 1832
2. ✓ 1831
3. ✗ 1836
4. ✗ 1830

Question Number : 103 Question Id : 16794319896 Question Type : MCQ Option Shuffling : Yes Display Question Number : Yes
Single Line Question Option : No Option Orientation : Vertical

Correct Marks : 1 Wrong Marks : 0.25

साइरस मैक्रोमिक ने किस वर्ष में पहली यांत्रिक रस्सी का आविष्कार किया था?

Options :

1. ✗ 1832
2. ✓ 1831
3. ✗ 1836
4. ✗ 1830

Question Number : 104 Question Id : 16794319897 Question Type : MCQ Option Shuffling : Yes Display Question Number : Yes
Single Line Question Option : No Option Orientation : Vertical

Correct Marks : 1 Wrong Marks : 0.25

Who advocated the convergence theory?

Options :

1. ✗ Karl Marx

2. ✖ Max Weber

3. ✔ Clark Kerr

4. ✖ Emile Durkheim

Question Number : 104 Question Id : 16794319897 Question Type : MCQ Option Shuffling : Yes Display Question Number : Yes
Single Line Question Option : No Option Orientation : Vertical

Correct Marks : 1 Wrong Marks : 0.25

अभिसरण सिद्धांत की पैरवी किसने की थी?

Options :

1. ✖ कार्ल मार्क्स

2. ✖ मैक्स वेबर

3. ✔ क्लार्क केर

4. ✖ एमाइल दुर्खीम

Question Number : 105 Question Id : 16794319898 Question Type : MCQ Option Shuffling : Yes Display Question Number : Yes
Single Line Question Option : No Option Orientation : Vertical

Correct Marks : 1 Wrong Marks : 0.25

Who was the author of the influential pamphlet called 'What is the Third Estate?'

Options :

1. ✔ Abbe Sieyes

2. ✖ Mirabeau

3. ✖ Bailey

4. ✖ Louis David

Question Number : 105 Question Id : 16794319898 Question Type : MCQ Option Shuffling : Yes Display Question Number : Yes
Single Line Question Option : No Option Orientation : Vertical

Correct Marks : 1 Wrong Marks : 0.25

'व्हाट इज़ द थर्ड एस्टेट' नामक प्रभावशाली पुस्तिका (पेम्पलेट) का लेखक कौन था?

Options :

1. ✔ अबे सिएस

2. ✖ मीराब्यू

3. ✖ बैले

4. ✖ लुईस डेविड

Question Number : 106 Question Id : 16794319899 Question Type : MCQ Option Shuffling : Yes Display Question Number : Yes
Single Line Question Option : No Option Orientation : Vertical

Correct Marks : 1 Wrong Marks : 0.25

When did the National Assembly, recognised by Louis XVI, abolish the feudal system of obligations and taxes?

Options :

1. ✖ 5th September 1787

2. ✖ 4th November 1788

3. ✔ 4th August 1789

4. ✖ 5th July 1787

Question Number : 106 Question Id : 16794319899 Question Type : MCQ Option Shuffling : Yes Display Question Number : Yes
Single Line Question Option : No Option Orientation : Vertical

Correct Marks : 1 Wrong Marks : 0.25

लुईस XVI (लुई सोलहवें) द्वारा मान्यता प्राप्त नेशनल असेंबली ने कब सामंती व्यवस्था के दायित्वों और करों को समाप्त किया था?

Options :

1. ✖ 5 सितंबर 1787

2. ✖ 4 नवंबर 1788

3. ✔ 4 अगस्त 1789

4. ✖ 5 जुलाई 1787

Question Number : 107 Question Id : 16794319900 Question Type : MCQ Option Shuffling : Yes Display Question Number : Yes
Single Line Question Option : No Option Orientation : Vertical

Correct Marks : 1 Wrong Marks : 0.25

The symbol of a sceptre was used by Le Barbier to convey a part of content of the declaration of rights to the men and women of the 18th century. What does the sceptre represent?

Options :

1. ☒ A symbol of royal power
2. ☐ Personification of women
3. ☐ A symbol of eternity
4. ☐ A symbol of strength

Question Number : 107 Question Id : 16794319900 Question Type : MCQ Option Shuffling : Yes Display Question Number : Yes
Single Line Question Option : No Option Orientation : Vertical

Correct Marks : 1 Wrong Marks : 0.25

18 वीं शताब्दी में पुरुषों और महिलाओं के अधिकारों की घोषणा के मसौदे के एक हिस्से बताने के लिए ले बारबेर द्वारा राजदंड का प्रतीकात्मक उपयोग किया गया था। राजदंड किसका प्रतिनिधित्व करता है?

Options :

1. ☒ शाही शक्ति का प्रतीक
2. ☐ महिलाओं का मानवीकरण
3. ☐ शाश्वतता का प्रतीक
4. ☐ शक्ति का प्रतीक

Question Number : 108 Question Id : 16794319901 Question Type : MCQ Option Shuffling : Yes Display Question Number : Yes
Single Line Question Option : No Option Orientation : Vertical

Correct Marks : 1 Wrong Marks : 0.25

Identify a law that was introduced by Napoleon Bonaparte.

Options :

1. ☒ Protection of private property
2. ☐ Right to vote for women
3. ☐ Abolition of women's clubs
4. ☐ Equal rights for women

Question Number : 108 Question Id : 16794319901 Question Type : MCQ Option Shuffling : Yes Display Question Number : Yes
Single Line Question Option : No Option Orientation : Vertical

Correct Marks : 1 Wrong Marks : 0.25

नेपोलियन बोनापार्ट द्वारा बनाए किए गए कानून की पहचान करें।

Options :

1. ✓ निजी संपत्ति का संरक्षण
2. ✗ महिलाओं के लिए वोट का अधिकार
3. ✗ महिला क्लबों का उन्मूलन
4. ✗ महिलाओं के लिए समान अधिकार

Question Number : 109 Question Id : 16794319902 Question Type : MCQ Option Shuffling : Yes Display Question Number : Yes
Single Line Question Option : No Option Orientation : Vertical

Correct Marks : 1 Wrong Marks : 0.25

A lock-out took place in a factory located on the right bank of River Neva on 22nd February 1917. The workers of other factories on the next day called for a strike in sympathy. What did this day come to be called as?

Options :

1. ✗ International Labour Day
2. ✓ International Women's Day
3. ✗ International Workers Day
4. ✗ International Day of Workers' Union

Question Number : 109 Question Id : 16794319902 Question Type : MCQ Option Shuffling : Yes Display Question Number : Yes
Single Line Question Option : No Option Orientation : Vertical

Correct Marks : 1 Wrong Marks : 0.25

22 फरवरी 1917 को नदी नेवा के दाहिने किनारे पर स्थित कारखाने में लॉक-आउट हुआ। अगले दिन अन्य कारखानों के श्रमिकों ने सहानुभूति में हड़ताल की घोषणा की। इस दिन को क्या कहा जाता है?

Options :

1. ✗ अंतर्राष्ट्रीय श्रमिक दिवस
2. ✓ अंतर्राष्ट्रीय महिला दिवस
3. ✗ अंतर्राष्ट्रीय कार्यकर्ता दिवस
4. ✗ अंतर्राष्ट्रीय श्रमिक संघ दिवस

Question Number : 110 Question Id : 16794319903 Question Type : MCQ Option Shuffling : Yes Display Question Number : Yes
Single Line Question Option : No Option Orientation : Vertical

Correct Marks : 1 Wrong Marks : 0.25

Who headed the Military Revolutionary Committee by the Soviet to organise the socialist seizure of power in October 1917?

Options :

1. ✖ Joseph Stalin
2. ✖ Alexander Kerensky
3. ✔ Leon Trotsky
4. ✖ Vladimir Lenin

Question Number : 110 Question Id : 16794319903 Question Type : MCQ Option Shuffling : Yes Display Question Number : Yes
Single Line Question Option : No Option Orientation : Vertical

Correct Marks : 1 Wrong Marks : 0.25

अक्टूबर 1917 में सत्ता के समाजवादी अधिग्रहण को व्यवस्थित करने के लिए सोवियत द्वारा सैन्य क्रांतिकारी समिति की अध्यक्षता किसने की थी?

Options :

1. ✖ जोसेफ स्टालिन
2. ✖ अलेक्जेंडर केरेन्स्की
3. ✔ लियोन ट्रोट्स्की
4. ✖ व्लादमीर लेनिन

Question Number : 111 Question Id : 16794319904 Question Type : MCQ Option Shuffling : Yes Display Question Number : Yes
Single Line Question Option : No Option Orientation : Vertical

Correct Marks : 1 Wrong Marks : 0.25

Where did the Bolsheviks make a peace treaty with Germany in March 1918 despite opposition from the political allies?

Options :

1. ✖ Nevsky Prospekt
2. ✖ Rhineland
3. ✔ Brest Litovsk
4. ✖ Duma

Question Number : 111 Question Id : 16794319904 Question Type : MCQ Option Shuffling : Yes Display Question Number : Yes
Single Line Question Option : No Option Orientation : Vertical

Correct Marks : 1 Wrong Marks : 0.25

राजनीतिक सहयोगियों के विरोध के बावजूद बोल्शेविक ने मार्च 1918 में जर्मनी के साथ शांति संधि कहाँ की थी?

Options :

1. ✖ नेवस्की प्रॉस्पेक्ट
2. ✖ राइनलैंड
3. ✔ ब्रेस्ट लिटोवस्क
4. ✖ इयूमा

Question Number : 112 Question Id : 16794319905 Question Type : MCQ Option Shuffling : Yes Display Question Number : Yes
Single Line Question Option : No Option Orientation : Vertical

Correct Marks : 1 Wrong Marks : 0.25

Identify the name of the collective farms where in peasants were forced to cultivate under Stalin's collectivisation programme of 1929.

Options :

1. ✖ Kulak
2. ✖ Cheka first
3. ✖ Budeonovka
4. ✔ Kolkhoz

Question Number : 112 Question Id : 16794319905 Question Type : MCQ Option Shuffling : Yes Display Question Number : Yes
Single Line Question Option : No Option Orientation : Vertical

Correct Marks : 1 Wrong Marks : 0.25

उस सामूहिक खेतों के नाम की पहचान करें जिसमें किसानों को 1929 में स्टालिन के सामूहीकरण कार्यक्रम के तहत खेती करने के लिए मजबूर किया गया था।

Options :

1. ✖ कूलाक
2. ✖ चेका फर्स्ट
3. ✖ बुदेवनोवका
4. ✔ कोल्होज़

Question Number : 113 Question Id : 16794319906 Question Type : MCQ Option Shuffling : Yes Display Question Number : Yes
Single Line Question Option : No Option Orientation : Vertical

Correct Marks : 1 Wrong Marks : 0.25

Which famous book was written by S.D. Vidyalankar, an Indian inspired by the Russian Revolution?

Options :

1. ☒ The Rebirth of Russia
2. ☐ The Red Revolution
3. ☐ Lenin: His Life and His Thoughts
4. ☐ Russian Revolution

Question Number : 113 Question Id : 16794319906 Question Type : MCQ Option Shuffling : Yes Display Question Number : Yes
Single Line Question Option : No Option Orientation : Vertical

Correct Marks : 1 Wrong Marks : 0.25

रूसी क्रांति से प्रेरित एक भारतीय एस.डी. विद्यालंकर द्वारा कौन सी प्रसिद्ध पुस्तक लिखी गई थी?

Options :

1. ☒ द रिबर्थ ऑफ रशिया
2. ☐ द रेड रिवोल्यूशन
3. ☐ लेनिन: हिज लाइफ एंड हिज थॉट्स
4. ☐ रशियन रिवोल्यूशन

Question Number : 114 Question Id : 16794319907 Question Type : MCQ Option Shuffling : Yes Display Question Number : Yes
Single Line Question Option : No Option Orientation : Vertical

Correct Marks : 1 Wrong Marks : 0.25

Who said the following: "The whole place belongs to the workers.... Here the masses have not in the least been put in the shade by the gentlemen... those who lived in the background for ages have come forward in the open today... I thought of the peasants and the workers in my country"?

Options :

1. ☐ Mahatma Gandhi
2. ☐ D. Awasthi
3. ☒ Rabindranath Tagore
4. ☐ Jawaharlal Nehru

Question Number : 114 Question Id : 16794319907 Question Type : MCQ Option Shuffling : Yes Display Question Number : Yes
Single Line Question Option : No Option Orientation : Vertical

Correct Marks : 1 Wrong Marks : 0.25

निम्नलिखित कथन किसने कहा: " श्रमिकों से संबंधित सभी जगह...। यहां जनता को कम से कम सज्जनों द्वारा निष्प्रभ नहीं किया जाता है... जो लोग अब तक जमाने से पृष्ठभूमि में रहते थे वे आज खुले में सामने आ गए हैं... मैंने अपने देश के किसानों और श्रमिकों के बारे में सोचा है।"?

Options :

1. ✖ महात्मा गांधी
2. ✖ डी अवस्थी
3. ✔ रवींद्रनाथ टैगोर
4. ✖ जवाहर लाल नेहरू

Question Number : 115 Question Id : 16794319908 Question Type : MCQ Option Shuffling : Yes Display Question Number : Yes
Single Line Question Option : No Option Orientation : Vertical

Correct Marks : 1 Wrong Marks : 0.25

With the treaty of Versailles Germany lost its colonies, population, military as well as its coal and iron. What percentage of iron did it lose to its allies?

Options :

1. ✖ 73%
2. ✖ 76%
3. ✔ 75%
4. ✖ 77%

Question Number : 115 Question Id : 16794319908 Question Type : MCQ Option Shuffling : Yes Display Question Number : Yes
Single Line Question Option : No Option Orientation : Vertical

Correct Marks : 1 Wrong Marks : 0.25

वर्साय की संधि के साथ ही जर्मनी ने अपने उपनिवेशों, आबादी, सेना के साथ ही इसके कोयला और लौह खो दिया। उसने लोहे का कितना प्रतिशत अपने सहयोगियों से खोया?

Options :

1. ✖ 73%
2. ✖ 76%
3. ✔ 75%
4. ✖ 77%

Question Number : 116 Question Id : 16794319909 Question Type : MCQ Option Shuffling : Yes Display Question Number : Yes
Single Line Question Option : No Option Orientation : Vertical

Correct Marks : 1 Wrong Marks : 0.25

The Weimar Republic crushed an uprising that demanded the Soviet style of governance. This uprising was attempted with the help of war veterans. Identify the organisation that was crushed.

Options :

1. ☒ Free Corps
2. ☐ Bolsheviks
3. ☐ Spartacists
4. ☐ Socialist workers

Question Number : 116 Question Id : 16794319909 Question Type : MCQ Option Shuffling : Yes Display Question Number : Yes
Single Line Question Option : No Option Orientation : Vertical

Correct Marks : 1 Wrong Marks : 0.25

वीमर गणराज्य ने उस विद्रोह को कुचल दिया जिसने शासन की सोवियत शैली की मांग की थी। पुराने सैनिकों की मदद से इस विद्रोह का प्रयास किया गया था। कुचल दिए गए संगठन की पहचान करें।

Options :

1. ☒ फ्री कॉर्प्स
2. ☐ बोल्शेविक्स
3. ☐ स्पार्टासिस्ट्स
4. ☐ सोशलिस्ट वर्कर्स

Question Number : 117 Question Id : 16794319910 Question Type : MCQ Option Shuffling : Yes Display Question Number : Yes
Single Line Question Option : No Option Orientation : Vertical

Correct Marks : 1 Wrong Marks : 0.25

On 28th February 1933, there was an indefinite suspension of the civic rights given by the Weimar Republic. What led to this?

Options :

1. ☒ The Fire Decree
2. ☐ Concentration camps
3. ☐ Hitler becoming the Chancellor
4. ☐ The Enabling act

Question Number : 117 Question Id : 16794319910 Question Type : MCQ Option Shuffling : Yes Display Question Number : Yes
Single Line Question Option : No Option Orientation : Vertical

Correct Marks : 1 Wrong Marks : 0.25

28 फरवरी 1933 को, वीमर गणराज्य ने संविधान प्रदत्त नागरिक अधिकारों का अनिश्चितकाल के लिए निलंबन कर दिया था। यह किसके कारण हुआ था?

Options :

1. ☒ द फायर डिक्ली
2. ☐ कॉन्सेंट्रेशन कैम्प्स
3. ☐ हिटलर के चांसलर बनने से
4. ☐ द एनेबिलिंग एक्ट

Question Number : 118 Question Id : 16794319911 Question Type : MCQ Option Shuffling : Yes Display Question Number : Yes
Single Line Question Option : No Option Orientation : Vertical

Correct Marks : 1 Wrong Marks : 0.25

In which year did the British Parliament pass on the powers from East India Company to the British Crown?

Options :

1. ☒ 1858
2. ☐ 1857
3. ☐ 1859
4. ☐ 1860

Question Number : 118 Question Id : 16794319911 Question Type : MCQ Option Shuffling : Yes Display Question Number : Yes
Single Line Question Option : No Option Orientation : Vertical

Correct Marks : 1 Wrong Marks : 0.25

किस साल ब्रिटिश संसद ने ईस्ट इंडिया कंपनी से शक्ति का हस्तांतरण ब्रिटिश क्राउन (महारानी) को कर दिया था?

Options :

1. ☒ 1858
2. ☐ 1857
3. ☐ 1859
4. ☐ 1860

Question Number : 119 Question Id : 16794319912 Question Type : MCQ Option Shuffling : Yes Display Question Number : Yes
Single Line Question Option : No Option Orientation : Vertical

Correct Marks : 1 Wrong Marks : 0.25

Which policy devised by the British made Rani Laxmi Bai of Jhansi a rebel?

Options :

1. ✖ Confiscation of land
2. ✔ Doctrine of Lapse
3. ✖ Subsidiary alliance
4. ✖ Social reforms

Question Number : 119 Question Id : 16794319912 Question Type : MCQ Option Shuffling : Yes Display Question Number : Yes
Single Line Question Option : No Option Orientation : Vertical

Correct Marks : 1 Wrong Marks : 0.25

अंग्रेजों द्वारा बनाई गई किस नीति ने झांसी की रानी लक्ष्मी बाई को विद्रोही बना दिया था?

Options :

1. ✖ भूमि का अधिहरण
2. ✔ व्यपगत का सिद्धांत या हड़प नीति
3. ✖ अनुषंगी गठबंधन
4. ✖ समाज सुधार

Question Number : 120 Question Id : 16794319913 Question Type : MCQ Option Shuffling : Yes Display Question Number : Yes
Single Line Question Option : No Option Orientation : Vertical

Correct Marks : 1 Wrong Marks : 0.25

In which year was the Arms Act and the Vernacular Press Act passed by the British?

Options :

1. ✖ 1888
2. ✖ 1885
3. ✔ 1878
4. ✖ 1879

Question Number : 120 Question Id : 16794319913 Question Type : MCQ Option Shuffling : Yes Display Question Number : Yes
Single Line Question Option : No Option Orientation : Vertical

Correct Marks : 1 Wrong Marks : 0.25

किस वर्ष अंग्रेजों द्वारा शस्त्र अधिनियम और देशी प्रेस अधिनियम (वर्नाकुलर प्रेस एक्ट) पारित किया गया था?

Options :

1. ✖ 1888

2. ✖ 1885

3. ✔ 1878

4. ✖ 1879

Subject Related

Group Number :	7
Group Id :	167943760
Group Maximum Duration :	0
Group Minimum Duration :	0
Revisit allowed for view? :	No
Revisit allowed for edit? :	No
Break time:	0
Group Marks:	20
Revisit allowed for group Instructions? :	Yes
Maximum Instruction Time:	0
Minimum Instruction Time:	0

Subject Related

Section Id :	167943825
Section Number :	1
Section type :	Online
Mandatory or Optional:	Mandatory
Number of Questions:	20
Number of Questions to be attempted:	20
Section Marks:	20
Display Number Panel:	Yes
Group All Questions:	No

Sub-Section Number:	1
Sub-Section Id:	1679431270
Question Shuffling Allowed :	Yes

Question Number : 121 Question Id : 16794319914 Question Type : MCQ Option Shuffling : Yes Display Question Number : Yes
Single Line Question Option : No Option Orientation : Vertical
Correct Marks : 1 Wrong Marks : 0.25

Who wrote the book 'Poverty and Un-British Rule in India'? The book offered a scathing look at the impact of the British rule in India?

Options :

1. ✖ A. O. Hume
2. ✔ Dadabhai Naoroji
3. ✖ Badruddin Tyabji
4. ✖ Surendranath Banerjee

Question Number : 121 Question Id : 16794319914 Question Type : MCQ Option Shuffling : Yes Display Question Number : Yes
Single Line Question Option : No Option Orientation : Vertical

Correct Marks : 1 Wrong Marks : 0.25

‘पावर्टी एंड अन-ब्रिटिश रूल इन इंडिया’ किताब किसने लिखी थी? यह पुस्तक भारत में ब्रिटिश शासन के असर पर एक गंभीर जानकारी प्रस्तुत करती है।

Options :

1. ✖ ए. ओ. ह्यूम
2. ✔ दादाभाई नौरोजी
3. ✖ बदरुद्दीन तैयबजी
4. ✖ सुरेंद्रनाथ बनर्जी

Question Number : 122 Question Id : 16794319915 Question Type : MCQ Option Shuffling : Yes Display Question Number : Yes
Single Line Question Option : No Option Orientation : Vertical

Correct Marks : 1 Wrong Marks : 0.25

Bengal was partitioned by the British in 1905. Which of the following viceroys was responsible for this partition?

Options :

1. ✔ George Curzon
2. ✖ William Wilberforce Bird
3. ✖ Henry Hardinge
4. ✖ Ellenborough

Question Number : 122 Question Id : 16794319915 Question Type : MCQ Option Shuffling : Yes Display Question Number : Yes
Single Line Question Option : No Option Orientation : Vertical

Correct Marks : 1 Wrong Marks : 0.25

1905 में अंग्रेजों द्वारा बंगाल को विभाजित किया गया था। उस विभाजन के लिए निम्नलिखित में से कौन सा वाइसराय जिम्मेदार था?

Options :

1. ✓ जॉर्ज कर्ज़न
2. ✗ विलियम विल्बरफोर्स बर्ड
3. ✗ हेनरी हार्डिंग
4. ✗ एलेंबोरौग

Question Number : 123 Question Id : 16794319916 Question Type : MCQ Option Shuffling : Yes Display Question Number : Yes
Single Line Question Option : No Option Orientation : Vertical

Correct Marks : 1 Wrong Marks : 0.25

Identify the day on which Mahatma Gandhi asked Indians to observe a day of non-violent opposition to the Rowlatt Act. It was meant to be a day of "humiliation and prayer" and hartal.

Options :

1. ✗ 8th January 1919
2. ✓ 6th April 1919
3. ✗ 5th March 1919
4. ✗ 9th May 1919

Question Number : 123 Question Id : 16794319916 Question Type : MCQ Option Shuffling : Yes Display Question Number : Yes
Single Line Question Option : No Option Orientation : Vertical

Correct Marks : 1 Wrong Marks : 0.25

उस दिन की पहचान करें जिस दिन महात्मा गांधी ने भारतीयों से रोलट अधिनियम का अहिंसापूर्ण विरोध के रूप में मनाने का आह्वान किया था। इस दिन का मतलब "अपमान और प्रार्थना" और हड़ताल का दिन यह था।

Options :

1. ✗ 8 जनवरी 1919
2. ✓ 6 अप्रैल 1919
3. ✗ 5 मार्च 1919
4. ✗ 9 मई 1919

Question Number : 124 Question Id : 16794319917 Question Type : MCQ Option Shuffling : Yes Display Question Number : Yes
Single Line Question Option : No Option Orientation : Vertical

Correct Marks : 1 Wrong Marks : 0.25

Revolutionary nationalists such as Bhagat Singh founded the HSRA in 1928 at Ferozshah Kotla in Delhi. What is the full form of HSRA?

Options :

1. ✖ Hindustan Swaraj Restoring Association
2. ✔ Hindustan Socialist Republican Association
3. ✖ Hindustan Sampurna Rajya Association
4. ✖ Hindustan Swadeshi Revolt Association

Question Number : 124 Question Id : 16794319917 Question Type : MCQ Option Shuffling : Yes Display Question Number : Yes
Single Line Question Option : No Option Orientation : Vertical

Correct Marks : 1 Wrong Marks : 0.25

भगत सिंह जैसे क्रांतिकारी राष्ट्रवादियों ने 1928 में दिल्ली में फिरोजशाह कोटला में एच.एस.आर.ए. की स्थापना की। एच.एस.आर.ए. का पूरा रूप क्या है?

Options :

1. ✖ हिंदुस्तान स्वराज रीस्टोरिंग एसोसिएशन
2. ✔ हिंदुस्तान सोशलिस्ट रिपब्लिकन एसोसिएशन
3. ✖ हिंदुस्तान सम्पूर्ण राज्य एसोसिएशन
4. ✖ हिंदुस्तान स्वदेशी रिबोल्ट एसोसिएशन

Question Number : 125 Question Id : 16794319918 Question Type : MCQ Option Shuffling : Yes Display Question Number : Yes
Single Line Question Option : No Option Orientation : Vertical

Correct Marks : 1 Wrong Marks : 0.25

Women's participation in the national struggle for freedom gave an immense boost to India's fight for freedom. One such woman was from Karnataka who gave speeches, taught spinning and organised Prabhat Pheris. Who was this woman?

Options :

1. ✖ Sarojini Naidu
2. ✖ Gowramma Venkata Ramaiah
3. ✖ Sundaramma
4. ✔ Ambabai

Question Number : 125 Question Id : 16794319918 Question Type : MCQ Option Shuffling : Yes Display Question Number : Yes
Single Line Question Option : No Option Orientation : Vertical

Correct Marks : 1 Wrong Marks : 0.25

स्वतंत्रता के लिए राष्ट्रीय आंदोलन में महिलाओं की हिस्सेदारी से भारत के स्वतंत्रता संग्राम को काफी बढ़ावा मिला। ऐसी कर्नाटक की एक महिला जिसने भाषण दिए, कताई सिखाई और प्रभात फेरी का आयोजन किया उसका नाम क्या था?

Options :

1. ✖ सरोजिनी नायडू
2. ✖ गोवरामा वेंकट राम्याह
3. ✖ सुंदरम्मा
4. ✔ अंबाबाई

Question Number : 126 Question Id : 16794319919 Question Type : MCQ Option Shuffling : Yes Display Question Number : Yes
Single Line Question Option : No Option Orientation : Vertical

Correct Marks : 1 Wrong Marks : 0.25

What was the immediate cause of the Sepoy Mutiny?

Options :

1. ✖ Conversion to Christianity
2. ✖ Law to abolish Sati
3. ✔ Greased cartridges
4. ✖ Obligation to serve abroad

Question Number : 126 Question Id : 16794319919 Question Type : MCQ Option Shuffling : Yes Display Question Number : Yes
Single Line Question Option : No Option Orientation : Vertical

Correct Marks : 1 Wrong Marks : 0.25

सिपाही विद्रोह का तत्कालिक कारण क्या था?

Options :

1. ✖ ईसाई धर्मांतरण
2. ✖ सतीप्रथा उन्मूलन कानून
3. ✔ ग्रीज लगे कारतूस

4. ✖ विदेश सेवा का दायित्व

Question Number : 127 Question Id : 16794319920 Question Type : MCQ Option Shuffling : Yes Display Question Number : Yes
Single Line Question Option : No Option Orientation : Vertical

Correct Marks : 1 Wrong Marks : 0.25

On the evening of 3rd July 1857, rebels came from Bareilly, crossed River Jamuna, entered Delhi and attacked the British. This attack is referred to as _____.

Options :

1. ✖ the battle of Plassey
2. ✖ the battle of Meerut
3. ✔ the battle of Cavalry lines
4. ✖ the battle of firangies

Question Number : 127 Question Id : 16794319920 Question Type : MCQ Option Shuffling : Yes Display Question Number : Yes
Single Line Question Option : No Option Orientation : Vertical

Correct Marks : 1 Wrong Marks : 0.25

3 जुलाई 1857 की शाम विद्रोहियों ने बरेली से जमुना नदी पार करके दिल्ली में प्रवेश किया और अंग्रेजों पर हमला किया। इस हमले को किस रूप में जाना जाता है?

Options :

1. ✖ प्लासी का युद्ध
2. ✖ मेरठ का युद्ध
3. ✔ कैवेलरी लाइन्स का युद्ध
4. ✖ फ़िरंगीज़ का युद्ध

Question Number : 128 Question Id : 16794319921 Question Type : MCQ Option Shuffling : Yes Display Question Number : Yes
Single Line Question Option : No Option Orientation : Vertical

Correct Marks : 1 Wrong Marks : 0.25

Apart from the Sun, which of the following is the next nearest star to Earth?

Options :

1. ✔ Alpha Centauri
2. ✖ Sirius

3. ✖ Procyon

4. ✖ Cygnus Arm

Question Number : 128 Question Id : 16794319921 Question Type : MCQ Option Shuffling : Yes Display Question Number : Yes
Single Line Question Option : No Option Orientation : Vertical

Correct Marks : 1 Wrong Marks : 0.25

सूर्य के अलावा, निम्नलिखित में से कौन सा तारा पृथ्वी के सबसे करीब है?

Options :

1. ✔ अल्फा सेंटौरी

2. ✖ साइरियस

3. ✖ प्रोसियोन

4. ✖ सिग्नस आर्म

Question Number : 129 Question Id : 16794319922 Question Type : MCQ Option Shuffling : Yes Display Question Number : Yes
Single Line Question Option : No Option Orientation : Vertical

Correct Marks : 1 Wrong Marks : 0.25

Orion is a well-known constellation that can be seen during the winter in the late evenings. What is another term for the constellation?

Options :

1. ✖ Cassiopeia

2. ✖ Aquila

3. ✔ Hunter

4. ✖ Ceres

Question Number : 129 Question Id : 16794319922 Question Type : MCQ Option Shuffling : Yes Display Question Number : Yes
Single Line Question Option : No Option Orientation : Vertical

Correct Marks : 1 Wrong Marks : 0.25

ओरियन एक प्रसिद्ध नक्षत्र है जिसे सर्दियों के दौरान देर शाम को देखा जा सकता है। इस नक्षत्र के लिए एक और शब्द क्या है?

Options :

1. ✖ कैसिओपिया

2. ✖ अक्विला

3. ✓ हंटर

4. ✗ सायरस

Question Number : 130 Question Id : 16794319923 Question Type : MCQ Option Shuffling : Yes Display Question Number : Yes
Single Line Question Option : No Option Orientation : Vertical

Correct Marks : 1 Wrong Marks : 0.25

As per the International Astronomical Union's decision in August 2006, Pluto is now called a _____.

Options :

1. ✗ Mesoplanet

2. ✗ Planemo

3. ✓ Dwarf Planet

4. ✗ Double Planet

Question Number : 130 Question Id : 16794319923 Question Type : MCQ Option Shuffling : Yes Display Question Number : Yes
Single Line Question Option : No Option Orientation : Vertical

Correct Marks : 1 Wrong Marks : 0.25

अगस्त 2006 में लिए गए अंतर्राष्ट्रीय खगोलीय संघ के फैसले के अनुसार प्लूटो को अब _____ कहा जाता है।

Options :

1. ✗ मेसोपलानेट

2. ✗ पलनेमो

3. ✓ इवार्फ प्लेनेट

4. ✗ डबल प्लेनेट

Question Number : 131 Question Id : 16794319924 Question Type : MCQ Option Shuffling : Yes Display Question Number : Yes
Single Line Question Option : No Option Orientation : Vertical

Correct Marks : 1 Wrong Marks : 0.25

Who gave the theory of 'Nebular Hypothesis'?

Options :

1. ✗ Thomas Chamberlain

2. ✗ Sir James Jeans

3. ✓ Immanuel Kant

4. ✖ Sir Harold Jeffrey

Question Number : 131 Question Id : 16794319924 Question Type : MCQ Option Shuffling : Yes Display Question Number : Yes
Single Line Question Option : No Option Orientation : Vertical

Correct Marks : 1 Wrong Marks : 0.25

'नेबुलर हाइपोथिसिस' का सिद्धांत किसने दिया?

Options :

1. ✖ थॉमस चेम्बरलेन

2. ✖ सर जेम्स जीन्स

3. ✔ इम्मैनुएल कैंट

4. ✖ सर हैरोल्ड जेफरी

Question Number : 132 Question Id : 16794319925 Question Type : MCQ Option Shuffling : Yes Display Question Number : Yes
Single Line Question Option : No Option Orientation : Vertical

Correct Marks : 1 Wrong Marks : 0.25

Jupiter, Saturn, Uranus and Neptune are called outer planets.

Identify the other name for these planets.

Options :

1. ✔ Jovian planets

2. ✖ Terrestrial planets

3. ✖ Belt of asteroids

4. ✖ Geoid

Question Number : 132 Question Id : 16794319925 Question Type : MCQ Option Shuffling : Yes Display Question Number : Yes
Single Line Question Option : No Option Orientation : Vertical

Correct Marks : 1 Wrong Marks : 0.25

जूपिटर (बृहस्पति), सैटर्न (शनि), यूरेनस (अरुण ग्रह) और नेपच्यून (वरुण ग्रह) को बाहरी ग्रह कहा जाता है। इन ग्रहों के लिए दूसरे नाम की पहचान करें।

Options :

1. ✔ जोवियन ग्रह (प्लेनेट)

2. ✖ स्थलीय ग्रह (प्लेनेट)

3. ✖ बेल्ट ऑफ एस्टेराइड्स (छोटे तारों का समूह)

4. ✖ जिओएड

Question Number : 133 Question Id : 16794319926 Question Type : MCQ Option Shuffling : Yes Display Question Number : Yes
Single Line Question Option : No Option Orientation : Vertical

Correct Marks : 1 Wrong Marks : 0.25

The 'Big Bang' theory is also known as _____.

Options :

1. ✖ Cyclic Cosmology

2. ✖ Nebular Hypothesis

3. ✔ Expanding Universe Hypothesis

4. ✖ String theory

Question Number : 133 Question Id : 16794319926 Question Type : MCQ Option Shuffling : Yes Display Question Number : Yes
Single Line Question Option : No Option Orientation : Vertical

Correct Marks : 1 Wrong Marks : 0.25

'बिग बैंग' सिद्धांत को _____ भी कहा जाता है।

Options :

1. ✖ चक्रीय ब्रह्मांड विज्ञान (साइक्लिक कॉस्मोलॉजी)

2. ✖ नेबुलर हाइपोथिसिस

3. ✔ ब्रह्मांड परिकल्पना का विस्तार

4. ✖ स्ट्रिंग सिद्धांत

Question Number : 134 Question Id : 16794319927 Question Type : MCQ Option Shuffling : Yes Display Question Number : Yes
Single Line Question Option : No Option Orientation : Vertical

Correct Marks : 1 Wrong Marks : 0.25

There are three stages in the present day atmosphere. What is the third stage?

Options :

1. ✖ Primordial stage

2. ✖ Interior of the Earth

3. ✓ Photosynthesis

4. ✗ Layered structure

Question Number : 134 Question Id : 16794319927 Question Type : MCQ Option Shuffling : Yes Display Question Number : Yes
Single Line Question Option : No Option Orientation : Vertical

Correct Marks : 1 Wrong Marks : 0.25

वर्तमान दिन के वातावरण में तीन चरण हैं। तीसरा चरण क्या है?

Options :

1. ✗ आदिम चरण

2. ✗ पृथ्वी के अभ्यंतर

3. ✓ प्रकाश संश्लेषण

4. ✗ स्तरित संरचना

Question Number : 135 Question Id : 16794319928 Question Type : MCQ Option Shuffling : Yes Display Question Number : Yes
Single Line Question Option : No Option Orientation : Vertical

Correct Marks : 1 Wrong Marks : 0.25

Which of the following are related with Exogenic forces?

Options :

1. ✗ Landslides

2. ✗ Volcanos

3. ✗ Earthquakes

4. ✓ Erosional and Depositional

Question Number : 135 Question Id : 16794319928 Question Type : MCQ Option Shuffling : Yes Display Question Number : Yes
Single Line Question Option : No Option Orientation : Vertical

Correct Marks : 1 Wrong Marks : 0.25

निम्नलिखित में से कौन सी एक्सोजेनिक बलों से संबंधित है?

Options :

1. ✗ भूस्खलन

2. ✗ ज्वालामुखी

3. ✖ भूकंप

4. ✔ क्षरणदार और जमावट

Question Number : 136 Question Id : 16794319929 Question Type : MCQ Option Shuffling : Yes Display Question Number : Yes
Single Line Question Option : No Option Orientation : Vertical

Correct Marks : 1 Wrong Marks : 0.25

The place where the movement of an earthquake starts is called _____.

Options :

1. ✖ Epicenter

2. ✖ Crust

3. ✔ Focus

4. ✖ Seismic waves

Question Number : 136 Question Id : 16794319929 Question Type : MCQ Option Shuffling : Yes Display Question Number : Yes
Single Line Question Option : No Option Orientation : Vertical

Correct Marks : 1 Wrong Marks : 0.25

वह स्थान जहां भूकंप की गतिविधि शुरू होती है उसे क्या कहा जाता है?

Options :

1. ✖ उपरिकेंद्र (एपीसेंटर)

2. ✖ पपड़ी (क्रस्ट)

3. ✔ नाभि (फोकस)

4. ✖ भूकंपीय तरंगें (सिस्मिक वेव्स)

Question Number : 137 Question Id : 16794319930 Question Type : MCQ Option Shuffling : Yes Display Question Number : Yes
Single Line Question Option : No Option Orientation : Vertical

Correct Marks : 1 Wrong Marks : 0.25

Which one among the following is the highest waterfall in the world?

Options :

1. ✔ Angel Falls of Venezuela

2. ✖ Niagara Falls on the borders of America and Canada

3. ✖ Victoria Falls on the borders of Zimbabwe and Zambia

4. ✖ Tugela Falls in South Africa

Question Number : 137 Question Id : 16794319930 Question Type : MCQ Option Shuffling : Yes Display Question Number : Yes
Single Line Question Option : No Option Orientation : Vertical

Correct Marks : 1 Wrong Marks : 0.25

निम्नलिखित में से कौन सा दुनिया का सबसे बड़ा झरना (वाटरफॉल) है?

Options :

1. ✔ वेनेज़ुएला का एंजेल फॉल्स

2. ✖ अमेरिका-कनाडा सीमा पर नियाग्रा फॉल्स

3. ✖ ज़िम्बाब्वे-जाम्बिया सीमा पर विक्टोरिया फॉल्स

4. ✖ दक्षिण अफ्रीका का तुगेला फॉल्स

Question Number : 138 Question Id : 16794319931 Question Type : MCQ Option Shuffling : Yes Display Question Number : Yes
Single Line Question Option : No Option Orientation : Vertical

Correct Marks : 1 Wrong Marks : 0.25

What is the name of the mega-ocean that surrounded the super continent, as per Alfred Wegener's 'Continental Drift' theory?

Options :

1. ✖ Pangaea

2. ✔ Panthalassa

3. ✖ Panagae

4. ✖ Pannagea

Question Number : 138 Question Id : 16794319931 Question Type : MCQ Option Shuffling : Yes Display Question Number : Yes
Single Line Question Option : No Option Orientation : Vertical

Correct Marks : 1 Wrong Marks : 0.25

अल्फ्रेड वेगेनर के 'महाद्वीपीय बहाव' सिद्धांत के अनुसार, सुपर महाद्वीप जिससे घिरा है उस मेगा-ओशन (सागर) का नाम क्या है?

Options :

1. ✖ पैजिया

2. ✓ पन्थालसा

3. ✗ पनगे

4. ✗ पन्नजिया

Question Number : 139 Question Id : 16794319932 Question Type : MCQ Option Shuffling : Yes Display Question Number : Yes
Single Line Question Option : No Option Orientation : Vertical

Correct Marks : 1 Wrong Marks : 0.25

Who produced the map using a computer programme to find the best fit of the Atlantic margin?

Options :

1. ✓ Bullard

2. ✗ Abraham Ortelius

3. ✗ Antonio Pellegrini

4. ✗ Alfred Wegener

Question Number : 139 Question Id : 16794319932 Question Type : MCQ Option Shuffling : Yes Display Question Number : Yes
Single Line Question Option : No Option Orientation : Vertical

Correct Marks : 1 Wrong Marks : 0.25

अटलांटिक मार्जिन का सबसे अच्छा (बेस्ट फिट) लोकेशन खोजने के लिए कंप्यूटर प्रोग्राम का उपयोग करके मानचित्र किसने बनाया?

Options :

1. ✓ बुलार्ड

2. ✗ अब्राहम ओर्टेलिउस

3. ✗ एंटोनियो पेलेग्रिनी

4. ✗ अल्फ्रेड वेगेनर

Question Number : 140 Question Id : 16794319933 Question Type : MCQ Option Shuffling : Yes Display Question Number : Yes
Single Line Question Option : No Option Orientation : Vertical

Correct Marks : 1 Wrong Marks : 0.25

What are Tillites?

Options :

1. ✓ Sedimentary rocks formed out of glaciers

2. ✖ Formation of igneous rocks
3. ✖ Gold-bearing veins
4. ✖ Metamorphic rocks formation

Question Number : 140 Question Id : 16794319933 Question Type : MCQ Option Shuffling : Yes Display Question Number : Yes
 Single Line Question Option : No Option Orientation : Vertical
 Correct Marks : 1 Wrong Marks : 0.25

टिलाइट क्या हैं?

Options :

1. ✔ हिमनदों से बने अवशोषक चट्टाने
2. ✖ आग्नेय चट्टानों का गठन
3. ✖ स्वर्णवाहक नसे
4. ✖ कार्यांतरित शिला गठन

Subject Related

Group Number :	8
Group Id :	167943761
Group Maximum Duration :	0
Group Minimum Duration :	0
Revisit allowed for view? :	No
Revisit allowed for edit? :	No
Break time:	0
Group Marks:	20
Revisit allowed for group Instructions? :	Yes
Maximum Instruction Time:	0
Minimum Instruction Time:	0

Subject Related

Section Id :	167943826
Section Number :	1
Section type :	Online
Mandatory or Optional:	Mandatory
Number of Questions:	20
Number of Questions to be attempted:	20
Section Marks:	20
Display Number Panel:	Yes
Group All Questions:	No

Sub-Section Number: 1
Sub-Section Id: 1679431271
Question Shuffling Allowed : Yes

Question Number : 141 Question Id : 16794319934 Question Type : MCQ Option Shuffling : Yes Display Question Number : Yes
Single Line Question Option : No Option Orientation : Vertical
Correct Marks : 1 Wrong Marks : 0.25

The Pacific Rim is also known as _____.

Options :

1. ✖ IORA Rim
2. ✔ Rim of Fire
3. ✖ Continental Rim
4. ✖ Ocean Rim

Question Number : 141 Question Id : 16794319934 Question Type : MCQ Option Shuffling : Yes Display Question Number : Yes
Single Line Question Option : No Option Orientation : Vertical
Correct Marks : 1 Wrong Marks : 0.25

प्रशांत किनारे (रिम) को _____ भी कहा जाता है।

Options :

1. ✖ आई.ओ.आर.ए. रिम
2. ✔ आग की रिम
3. ✖ महाद्वीपीय रिम
4. ✖ महासागर रिम

Question Number : 142 Question Id : 16794319935 Question Type : MCQ Option Shuffling : Yes Display Question Number : Yes
Single Line Question Option : No Option Orientation : Vertical
Correct Marks : 1 Wrong Marks : 0.25

What is the composition of a tectonic plate?

Options :

1. ✖ Continental Lithosphere
2. ✖ Ocean Lithosphere

3. ✓ Both, Continental and Oceanic Lithosphere

4. ✗ Only Crust

Question Number : 142 Question Id : 16794319935 Question Type : MCQ Option Shuffling : Yes Display Question Number : Yes
Single Line Question Option : No Option Orientation : Vertical

Correct Marks : 1 Wrong Marks : 0.25

एक टेक्टोनिक प्लेट की संरचना क्या होती है?

Options :

1. ✗ महाद्वीपीय स्थलमंडल (लिथोस्फीयर)

2. ✗ महासागरीय स्थलमंडल (लिथोस्फीयर)

3. ✓ दोनों, महाद्वीपीय और महासागरीय स्थलमंडल (लिथोस्फीयर)

4. ✗ केवल पपड़ी (क्रस्ट)

Question Number : 143 Question Id : 16794319936 Question Type : MCQ Option Shuffling : Yes Display Question Number : Yes
Single Line Question Option : No Option Orientation : Vertical

Correct Marks : 1 Wrong Marks : 0.25

Identify a minor tectonic plate from among the following.

Options :

1. ✗ Eurasian plate

2. ✗ Antarctica plate

3. ✗ South American plate

4. ✓ Cocos plate

Question Number : 143 Question Id : 16794319936 Question Type : MCQ Option Shuffling : Yes Display Question Number : Yes
Single Line Question Option : No Option Orientation : Vertical

Correct Marks : 1 Wrong Marks : 0.25

निम्नलिखित में से एक हल्की टेक्टोनिक प्लेट की पहचान करें।

Options :

1. ✗ यूरेशियन प्लेट

2. ✗ अंटार्कटिका प्लेट

3. ✖ दक्षिण अमेरिकी प्लेट

4. ✔ कोकोस प्लेट

Question Number : 144 Question Id : 16794319937 Question Type : MCQ Option Shuffling : Yes Display Question Number : Yes
Single Line Question Option : No Option Orientation : Vertical

Correct Marks : 1 Wrong Marks : 0.25

The Mid-Atlantic Ridge is an example of which type of plate boundaries?

Options :

1. ✔ Divergent boundary

2. ✖ Convergent boundary

3. ✖ Transform boundary

4. ✖ Both, Convergent and Transform boundary

Question Number : 144 Question Id : 16794319937 Question Type : MCQ Option Shuffling : Yes Display Question Number : Yes
Single Line Question Option : No Option Orientation : Vertical

Correct Marks : 1 Wrong Marks : 0.25

मिड-अटलांटिक रिज किस प्रकार की प्लेट सीमा का उदाहरण है?

Options :

1. ✔ अपसारी सीमा

2. ✖ अभिसरण सीमा

3. ✖ रूपांतर सीमा

4. ✖ अभिसरण और रूपांतर सीमा दोनों

Question Number : 145 Question Id : 16794319938 Question Type : MCQ Option Shuffling : Yes Display Question Number : Yes
Single Line Question Option : No Option Orientation : Vertical

Correct Marks : 1 Wrong Marks : 0.25

Which gas is responsible for the greenhouse effect?

Options :

1. ✖ Nitrogen

2. ✖ Helium

3. ✖ Oxygen

4. ✔ Carbon dioxide

Question Number : 145 Question Id : 16794319938 Question Type : MCQ Option Shuffling : Yes Display Question Number : Yes
Single Line Question Option : No Option Orientation : Vertical

Correct Marks : 1 Wrong Marks : 0.25

ग्रीनहाउस प्रभाव के लिए कौन सी गैस ज़िम्मेदार है?

Options :

1. ✖ नाइट्रोजन

2. ✖ हीलियम

3. ✖ ऑक्सीजन

4. ✔ कार्बन डाइऑक्साइड

Question Number : 146 Question Id : 16794319939 Question Type : MCQ Option Shuffling : Yes Display Question Number : Yes
Single Line Question Option : No Option Orientation : Vertical

Correct Marks : 1 Wrong Marks : 0.25

Which zone separates the troposphere from the stratosphere?

Options :

1. ✖ Mesopause

2. ✔ Tropopause

3. ✖ Stratopause

4. ✖ Thermopause

Question Number : 146 Question Id : 16794319939 Question Type : MCQ Option Shuffling : Yes Display Question Number : Yes
Single Line Question Option : No Option Orientation : Vertical

Correct Marks : 1 Wrong Marks : 0.25

कौन सा जोन क्षोभमंडल (ट्रोपोस्फीयर) को समताप मंडल से अलग करता है?

Options :

1. ✖ मेसोपोस

2. ✔ ट्रोपोपोस

3. ✖ स्ट्राटोपोस

4. ✖ थर्मोपोस

Question Number : 147 Question Id : 16794319940 Question Type : MCQ Option Shuffling : Yes Display Question Number : Yes
Single Line Question Option : No Option Orientation : Vertical

Correct Marks : 1 Wrong Marks : 0.25

Which position of Earth is called 'aphelion'?

Options :

1. ✔ On 4th July, when Earth is far away from the Sun
2. ✖ On 3rd January, when Earth is nearest to the Sun
3. ✖ On 5th September, when Earth is neither near nor far from the Sun
4. ✖ On 7th October, when Earth is revolving around the Sun

Question Number : 147 Question Id : 16794319940 Question Type : MCQ Option Shuffling : Yes Display Question Number : Yes
Single Line Question Option : No Option Orientation : Vertical

Correct Marks : 1 Wrong Marks : 0.25

पृथ्वी की कौन सी स्थिति को 'अपसौर (एफेलियन)' कहा जाता है?

Options :

1. ✔ 4 जुलाई को, जब पृथ्वी सूर्य से बहुत दूर होती है
2. ✖ 3 जनवरी को, जब पृथ्वी सूर्य के सबसे नजदीक होती है
3. ✖ 5 सितंबर को, जब पृथ्वी न तो सूर्य से निकट न ही दूर होती है
4. ✖ 7 अक्टूबर को, जब पृथ्वी सूर्य के चारों ओर घूम रही होती है।

Question Number : 148 Question Id : 16794319941 Question Type : MCQ Option Shuffling : Yes Display Question Number : Yes
Single Line Question Option : No Option Orientation : Vertical

Correct Marks : 1 Wrong Marks : 0.25

Which of the following is important in the heating of lower layers of atmosphere?

Options :

1. ✖ Convection

- 2. ✓ Conduction
- 3. ✗ Advection
- 4. ✗ Both, Conduction and Advection

Question Number : 148 Question Id : 16794319941 Question Type : MCQ Option Shuffling : Yes Display Question Number : Yes
Single Line Question Option : No Option Orientation : Vertical

Correct Marks : 1 Wrong Marks : 0.25

वायुमंडल की निचली परतों के तापन (हीटिंग) में निम्नलिखित में से कौन सा महत्वपूर्ण है?

Options :

- 1. ✗ संवहन
- 2. ✓ प्रवाहकत्त्व
- 3. ✗ अभिवहन
- 4. ✗ प्रवाहकत्त्व और अभिवहन दोनों

Question Number : 149 Question Id : 16794319942 Question Type : MCQ Option Shuffling : Yes Display Question Number : Yes
Single Line Question Option : No Option Orientation : Vertical

Correct Marks : 1 Wrong Marks : 0.25

The rotation of the earth around its axis affects the direction of the wind. This force is called _____.

Options :

- 1. ✗ the pressure gradient force
- 2. ✗ the frictional force
- 3. ✓ Coriolis force
- 4. ✗ both, frictional force and Coriolis force

Question Number : 149 Question Id : 16794319942 Question Type : MCQ Option Shuffling : Yes Display Question Number : Yes
Single Line Question Option : No Option Orientation : Vertical

Correct Marks : 1 Wrong Marks : 0.25

पृथ्वी का अपने अपने घूर्णन के चारों ओर घूर्णन हवा दिशा को प्रभावित करता है। इस बल को _____ कहा जाता है।

Options :

- 1. ✗ दबाव प्रवणता बल
- 2. ✗ घर्षण बल

3. ✓ कोरिओलिस बल

4. ✗ दोनों, घर्षण बल और कोरिओलिस बल

Question Number : 150 Question Id : 16794319943 Question Type : MCQ Option Shuffling : Yes Display Question Number : Yes
Single Line Question Option : No Option Orientation : Vertical

Correct Marks : 1 Wrong Marks : 0.25

When two different air masses meet, the boundary zone between them is called _____.

Options :

1. ✗ Horizontal variation

2. ✗ High altitudes

3. ✓ Fronts

4. ✗ Maritime polar

Question Number : 150 Question Id : 16794319943 Question Type : MCQ Option Shuffling : Yes Display Question Number : Yes
Single Line Question Option : No Option Orientation : Vertical

Correct Marks : 1 Wrong Marks : 0.25

जब दो अलग-अलग वायु द्रव्यमान मिलते हैं, तो उनके बीच सीमा क्षेत्र को _____ कहा जाता है।

Options :

1. ✗ क्षैतिज विविधता

2. ✗ उँचा उन्नतांश

3. ✓ फ्रंट्स

4. ✗ समुद्री ध्रुवीय

Question Number : 151 Question Id : 16794319944 Question Type : MCQ Option Shuffling : Yes Display Question Number : Yes
Single Line Question Option : No Option Orientation : Vertical

Correct Marks : 1 Wrong Marks : 0.25

The coastline of which ocean is highly indented?

Options :

1. ✗ Pacific Ocean

2. ✓ Atlantic Ocean

3. ✖ Indian Ocean

4. ✖ Arctic Ocean

Question Number : 151 Question Id : 16794319944 Question Type : MCQ Option Shuffling : Yes Display Question Number : Yes
Single Line Question Option : No Option Orientation : Vertical

Correct Marks : 1 Wrong Marks : 0.25

किस महासागर की तट रेखा अत्यधिक दांतेदार (इंडेंट) है?

Options :

1. ✖ प्रशांत महासागर

2. ✔ अटलांटिक महासागर

3. ✖ हिंद महासागर

4. ✖ आर्कटिक महासागर

Question Number : 152 Question Id : 16794319945 Question Type : MCQ Option Shuffling : Yes Display Question Number : Yes
Single Line Question Option : No Option Orientation : Vertical

Correct Marks : 1 Wrong Marks : 0.25

Where does the Mariana Trench, the deepest part of the earth, lie?

Options :

1. ✖ Antarctica

2. ✖ Atlantic Ocean

3. ✖ Australia

4. ✔ Pacific Ocean

Question Number : 152 Question Id : 16794319945 Question Type : MCQ Option Shuffling : Yes Display Question Number : Yes
Single Line Question Option : No Option Orientation : Vertical

Correct Marks : 1 Wrong Marks : 0.25

पृथ्वी का सबसे गहरा हिस्सा, मारियाना ट्रेंच, कहाँ स्थित है?

Options :

1. ✖ अंटार्कटिका

2. ✖ अटलांटिक महासागर

3. ✖ ऑस्ट्रेलिया

4. ✔ प्रशांत महासागर

Question Number : 153 Question Id : 16794319946 Question Type : MCQ Option Shuffling : Yes Display Question Number : Yes
Single Line Question Option : No Option Orientation : Vertical

Correct Marks : 1 Wrong Marks : 0.25

In which type of forests are Mahogany trees found?

Options :

1. ✔ Tropical rain forests

2. ✖ Tropical dry deciduous forests

3. ✖ Tropical deciduous forests

4. ✖ Mangrove forests

Question Number : 153 Question Id : 16794319946 Question Type : MCQ Option Shuffling : Yes Display Question Number : Yes
Single Line Question Option : No Option Orientation : Vertical

Correct Marks : 1 Wrong Marks : 0.25

किस प्रकार के जंगलों में महोगनी के पेड़ पाए जाते हैं?

Options :

1. ✔ उष्णकटिबंधीय वर्षावन

2. ✖ उष्णकटिबंधीय शुष्क पर्णपाती वन

3. ✖ उष्णकटिबंधीय पर्णपाती वन

4. ✖ मैंग्रोव वन

Question Number : 154 Question Id : 16794319947 Question Type : MCQ Option Shuffling : Yes Display Question Number : Yes
Single Line Question Option : No Option Orientation : Vertical

Correct Marks : 1 Wrong Marks : 0.25

_____ regions are known as 'Orchards of the World'.

Options :

1. ✖ Tropical evergreen forests

2. ✖ Montane forests

3. ✓ Mediterranean regions

4. ✗ Coniferous forests

Question Number : 154 Question Id : 16794319947 Question Type : MCQ Option Shuffling : Yes Display Question Number : Yes
Single Line Question Option : No Option Orientation : Vertical
Correct Marks : 1 Wrong Marks : 0.25

_____ क्षेत्र को 'दुनिया के बाग' (ऑर्चर्ड ऑफ द वर्ल्ड) के रूप में जाना जाता है।

Options :

1. ✗ उष्णकटिबंधीय सदाबहार जंगल

2. ✗ मोंटेन वन

3. ✓ भूमध्यसागर क्षेत्र

4. ✗ शंकुधारी वन

Question Number : 155 Question Id : 16794319948 Question Type : MCQ Option Shuffling : Yes Display Question Number : Yes
Single Line Question Option : No Option Orientation : Vertical
Correct Marks : 1 Wrong Marks : 0.25

India's climate has characteristics of _____.

Options :

1. ✓ Tropical and Subtropical climate

2. ✗ Equatorial climate and Subtropical climate

3. ✗ Tropical and Mediterranean climate

4. ✗ Humid continental climate and Mediterranean climate

Question Number : 155 Question Id : 16794319948 Question Type : MCQ Option Shuffling : Yes Display Question Number : Yes
Single Line Question Option : No Option Orientation : Vertical
Correct Marks : 1 Wrong Marks : 0.25

भारत के जलवायु में _____ की विशेषताएं हैं।

Options :

1. ✓ उष्णकटिबंधीय और उपोष्णकटिबंधीय जलवायु

2. ✗ भूमध्यरेखीय जलवायु और उपोष्णकटिबंधीय जलवायु

3. ✖ उष्णकटिबंधीय और भूमध्य जलवायु

4. ✖ आर्द्र महाद्वीपीय जलवायु और भूमध्य जलवायु

Question Number : 156 Question Id : 16794319949 Question Type : MCQ Option Shuffling : Yes Display Question Number : Yes
Single Line Question Option : No Option Orientation : Vertical

Correct Marks : 1 Wrong Marks : 0.25

Which parts of India are influenced by the Western cyclonic disturbances?

Options :

1. ✖ North and North-eastern parts

2. ✖ North and South-eastern parts

3. ✔ North and North-western parts

4. ✖ North and South-western parts

Question Number : 156 Question Id : 16794319949 Question Type : MCQ Option Shuffling : Yes Display Question Number : Yes
Single Line Question Option : No Option Orientation : Vertical

Correct Marks : 1 Wrong Marks : 0.25

भारत का कौन सा हिस्सा पश्चिमी चक्रवात संबंधी गड़बड़ी से प्रभावित हैं?

Options :

1. ✖ उत्तर और उत्तर-पूर्वी भाग

2. ✖ उत्तर और दक्षिण-पूर्वी भाग

3. ✔ उत्तर और उत्तर-पश्चिमी भाग

4. ✖ उत्तर और दक्षिण-पश्चिमी भाग

Question Number : 157 Question Id : 16794319950 Question Type : MCQ Option Shuffling : Yes Display Question Number : Yes
Single Line Question Option : No Option Orientation : Vertical

Correct Marks : 1 Wrong Marks : 0.25

When did the National Forest Policy come into existence?

Options :

1. ✔ 1952

2. ✖ 1956

3. ✖ 1955

4. ✖ 1951

Question Number : 157 Question Id : 16794319950 Question Type : MCQ Option Shuffling : Yes Display Question Number : Yes
Single Line Question Option : No Option Orientation : Vertical

Correct Marks : 1 Wrong Marks : 0.25

राष्ट्रीय वन नीति कब अस्तित्व में आई?

Options :

1. ✔ 1952

2. ✖ 1956

3. ✖ 1955

4. ✖ 1951

Question Number : 158 Question Id : 16794319951 Question Type : MCQ Option Shuffling : Yes Display Question Number : Yes
Single Line Question Option : No Option Orientation : Vertical

Correct Marks : 1 Wrong Marks : 0.25

What is the typical type of soil of the Deccan traps?

Options :

1. ✖ Alluvial soil

2. ✖ Yellow soil

3. ✔ Black cotton soil

4. ✖ Red soil

Question Number : 158 Question Id : 16794319951 Question Type : MCQ Option Shuffling : Yes Display Question Number : Yes
Single Line Question Option : No Option Orientation : Vertical

Correct Marks : 1 Wrong Marks : 0.25

डेक्कन (ट्रैप) जाल की विशिष्ट प्रकार की मिट्टी कौन सी है?

Options :

1. ✖ कछार की मिट्टी

2. ✖ पीली मिट्टी

3. ✔ अश्वेत सूती मिट्टी

4. ✖ लाल मिट्टी

Question Number : 159 Question Id : 16794319952 Question Type : MCQ Option Shuffling : Yes Display Question Number : Yes
Single Line Question Option : No Option Orientation : Vertical
Correct Marks : 1 Wrong Marks : 0.25

What type of crops are suitable to be grown in red Laterite soil in Tamil Nadu, Andhra Pradesh and Kerala?

Options :

1. ✖ Cotton
2. ✖ Wheat
3. ✖ Sugar
4. ✔ Cashew

Question Number : 159 Question Id : 16794319952 Question Type : MCQ Option Shuffling : Yes Display Question Number : Yes
Single Line Question Option : No Option Orientation : Vertical
Correct Marks : 1 Wrong Marks : 0.25

तमिलनाडु, आंध्रप्रदेश और केरल में लाल लेटराइट मिट्टी में किस प्रकार की फसलें उगाई जा सकती हैं?

Options :

1. ✖ कपास
2. ✖ गेहूँ
3. ✖ चीनी
4. ✔ काजू

Question Number : 160 Question Id : 16794319953 Question Type : MCQ Option Shuffling : Yes Display Question Number : Yes
Single Line Question Option : No Option Orientation : Vertical
Correct Marks : 1 Wrong Marks : 0.25

When lines of trees are planted to give shelter to soil from getting eroded it is known as_____.

Options :

1. ✖ Contour ploughing
2. ✔ Shelter belts
3. ✖ Strip cropping
4. ✖ Dunes

Question Number : 160 Question Id : 16794319953 Question Type : MCQ Option Shuffling : Yes Display Question Number : Yes
Single Line Question Option : No Option Orientation : Vertical

Correct Marks : 1 Wrong Marks : 0.25

मिट्टी को घिसने से बचाने के लिए जब पेड़ों को लाइन में लगाया जाता है तो इसे _____ कहते हैं।

Options :

1. ✖ समोच्च जुताई
2. ✔ आश्रय बेल्ट
3. ✖ पट्टीदार खेती
4. ✖ टिब्बा

Subject Related	
Group Number :	9
Group Id :	167943762
Group Maximum Duration :	0
Group Minimum Duration :	0
Revisit allowed for view? :	No
Revisit allowed for edit? :	No
Break time:	0
Group Marks:	20
Revisit allowed for group Instructions? :	Yes
Maximum Instruction Time:	0
Minimum Instruction Time:	0

Subject Related	
Section Id :	167943827
Section Number :	1
Section type :	Online
Mandatory or Optional:	Mandatory
Number of Questions:	20
Number of Questions to be attempted:	20
Section Marks:	20
Display Number Panel:	Yes
Group All Questions:	No

Sub-Section Number:	1
Sub-Section Id:	1679431272
Question Shuffling Allowed :	Yes

Question Number : 161 Question Id : 16794319954 Question Type : MCQ Option Shuffling : Yes Display Question Number : Yes
Single Line Question Option : No Option Orientation : Vertical

Correct Marks : 1 Wrong Marks : 0.25

Who among the following fought to protect the Khejri trees in Khejarli village? After his/her death National Award for Wildlife Conservation by the Ministry of Environment, Climate and Forests for his/her contribution was started.

Options :

1. ☒ Amrita Devi Bishnoi
2. ☐ E. K. Janaki Ammal
3. ☐ Kailash Shankhala
4. ☐ Indira Priyadarshini

Question Number : 161 Question Id : 16794319954 Question Type : MCQ Option Shuffling : Yes Display Question Number : Yes
Single Line Question Option : No Option Orientation : Vertical

Correct Marks : 1 Wrong Marks : 0.25

खेजरली गांव में खेजरी पेड़ की रक्षा के लिए निम्नलिखित में से किसने लड़ाई लड़ी? उनकी मृत्यु के बाद पर्यावरण, जलवायु और वन मंत्रालय द्वारा वन्यजीव संरक्षण के क्षेत्र में उनके योगदान के लिए राष्ट्रीय पुरस्कार शुरू किया गया था।

Options :

1. ☒ अमृता देवी बिश्नोई
2. ☐ ई. के. जानकी अम्माल
3. ☐ कैलाश शंखाला
4. ☐ इंदिरा प्रियदर्शिनी

Question Number : 162 Question Id : 16794319955 Question Type : MCQ Option Shuffling : Yes Display Question Number : Yes
Single Line Question Option : No Option Orientation : Vertical

Correct Marks : 1 Wrong Marks : 0.25

In which village did the Chipko movement originate in the early 1970s?

Options :

1. ☐ Khejarli in Jodhpur
2. ☒ Reni in Garhwal
3. ☐ Sal in West Bengal
4. ☐ Godavari district in Andhra Pradesh

Question Number : 162 Question Id : 16794319955 Question Type : MCQ Option Shuffling : Yes Display Question Number : Yes
Single Line Question Option : No Option Orientation : Vertical

Correct Marks : 1 Wrong Marks : 0.25

1970 के दशक के आरंभ में चिपको आंदोलन किस गांव में हुआ था?

Options :

1. ✖ जोधपुर में खेजरली
2. ✔ गढ़वाल में रेनी
3. ✖ पश्चिम बंगाल में साल
4. ✖ आंध्र प्रदेश में गोदावरी जिला

Question Number : 163 Question Id : 16794319956 Question Type : MCQ Option Shuffling : Yes Display Question Number : Yes
Single Line Question Option : No Option Orientation : Vertical

Correct Marks : 1 Wrong Marks : 0.25

Which canal irrigation system in parts of Himachal Pradesh helps the people of the state in their planting season?

Options :

1. ✖ Bamboo irrigation
2. ✖ Check dams
3. ✔ Khuls
4. ✖ Guls

Question Number : 163 Question Id : 16794319956 Question Type : MCQ Option Shuffling : Yes Display Question Number : Yes
Single Line Question Option : No Option Orientation : Vertical

Correct Marks : 1 Wrong Marks : 0.25

हिमाचल प्रदेश के कुछ हिस्सों में कौन सी नहर सिंचाई प्रणाली राज्य के लोगों को अपने रोपण के मौसम में मदद करती है?

Options :

1. ✖ बांस सिंचाई
2. ✖ चेक डैम्स
3. ✔ खुल्स
4. ✖ गुल्स

Question Number : 164 Question Id : 16794319957 Question Type : MCQ Option Shuffling : Yes Display Question Number : Yes
Single Line Question Option : No Option Orientation : Vertical

Correct Marks : 1 Wrong Marks : 0.25

What is Golden Quadrilateral?

Options :

1. ✖ North-South Corridor
2. ✖ East-West Corridor
3. ✖ Ahmedabad-Vadodara express highway
4. ✔ Delhi-Kolkata-Chennai-Mumbai-Delhi roadway

Question Number : 164 Question Id : 16794319957 Question Type : MCQ Option Shuffling : Yes Display Question Number : Yes
Single Line Question Option : No Option Orientation : Vertical

Correct Marks : 1 Wrong Marks : 0.25

गोल्डन चतुर्भुज क्या है?

Options :

1. ✖ उत्तर-दक्षिण कॉरीडोर
2. ✖ पूर्व - पश्चिम कॉरीडोर
3. ✖ अहमदाबाद-वडोदरा एक्सप्रेस राजमार्ग
4. ✔ दिल्ली-कोलकाता-चेन्नई-मुंबई-दिल्ली रोडवे

Question Number : 165 Question Id : 16794319958 Question Type : MCQ Option Shuffling : Yes Display Question Number : Yes
Single Line Question Option : No Option Orientation : Vertical

Correct Marks : 1 Wrong Marks : 0.25

Under which programme are the rural roads linked with other villages and towns?

Options :

1. ✖ Saansad Adarsh Gram Yojana
2. ✔ Pradhan Mantri Grameen Sadak Yojana
3. ✖ Bharat Mala Pariyojana
4. ✖ Gram Sadak Yojana

Question Number : 165 Question Id : 16794319958 Question Type : MCQ Option Shuffling : Yes Display Question Number : Yes
Single Line Question Option : No Option Orientation : Vertical

Correct Marks : 1 Wrong Marks : 0.25

किस कार्यक्रम के तहत ग्रामीण सड़कों को अन्य गांवों और कस्बों से जोड़ा जा रहा है?

Options :

1. ✖ संसद आदर्श ग्राम योजना
2. ✔ प्रधानमंत्री ग्रामीण सड़क योजना
3. ✖ भारतमाला पारियोजना
4. ✖ ग्राम सड़क योजना

Question Number : 166 Question Id : 16794319959 Question Type : MCQ Option Shuffling : Yes Display Question Number : Yes
Single Line Question Option : No Option Orientation : Vertical

Correct Marks : 1 Wrong Marks : 0.25

What is the length of the Ganga Inland Waterways from Allahabad to Haldia?

Options :

1. ✔ 1620 km
2. ✖ 891 km
3. ✖ 1640 km
4. ✖ 990 km

Question Number : 166 Question Id : 16794319959 Question Type : MCQ Option Shuffling : Yes Display Question Number : Yes
Single Line Question Option : No Option Orientation : Vertical

Correct Marks : 1 Wrong Marks : 0.25

इलाहाबाद से हल्दिया तक गंगा अंतर्देशीय जलमार्ग की लंबाई कितनी है?

Options :

1. ✔ 1620 km
2. ✖ 891 km
3. ✖ 1640 km
4. ✖ 990 km

Question Number : 167 Question Id : 16794319960 Question Type : MCQ Option Shuffling : Yes Display Question Number : Yes
Single Line Question Option : No Option Orientation : Vertical

Correct Marks : 1 Wrong Marks : 0.25

Which of the following airports is located in Delhi?

Options :

1. ☒ Indira Gandhi International Airport
2. ☐ Netaji Subhash Chandra Bose Airport
3. ☐ Rajiv Gandhi International Airport
4. ☐ Meenambakkam Airport

Question Number : 167 Question Id : 16794319960 Question Type : MCQ Option Shuffling : Yes Display Question Number : Yes
Single Line Question Option : No Option Orientation : Vertical

Correct Marks : 1 Wrong Marks : 0.25

दिल्ली में निम्नलिखित में से कौन सा हवाई अड्डा स्थित है?

Options :

1. ☒ इंदिरा गांधी अंतरराष्ट्रीय हवाई अड्डा
2. ☐ नेताजी सुभाषचंद्र बोस हवाई अड्डा
3. ☐ राजीव गांधी अंतरराष्ट्रीय हवाई अड्डा
4. ☐ मीनांबक्कम हवाई अड्डा

Question Number : 168 Question Id : 16794319961 Question Type : MCQ Option Shuffling : Yes Display Question Number : Yes
Single Line Question Option : No Option Orientation : Vertical

Correct Marks : 1 Wrong Marks : 0.25

What are the major determinants of an earning of any individual in the market?

Options :

1. ☒ Education and skill
2. ☐ Skill and labour
3. ☐ Labour and employment
4. ☐ Employment and social security

Question Number : 168 Question Id : 16794319961 Question Type : MCQ Option Shuffling : Yes Display Question Number : Yes
Single Line Question Option : No Option Orientation : Vertical

Correct Marks : 1 Wrong Marks : 0.25

बाजार में किसी भी व्यक्ति की कमाई के प्रमुख निर्धारक क्या होता है?

Options :

1. ☒ शिक्षा और कौशल
2. ☐ कौशल और श्रम
3. ☐ श्रम और रोजगार
4. ☐ रोजगार और सामाजिक सुरक्षा

Question Number : 169 Question Id : 16794319962 Question Type : MCQ Option Shuffling : Yes Display Question Number : Yes
Single Line Question Option : No Option Orientation : Vertical

Correct Marks : 1 Wrong Marks : 0.25

According to World Bank what is the minimum availability of currency per person per day to use a uniform standard for the poverty line?

Options :

1. ☐ \$5
2. ☐ \$2
3. ☐ \$3
4. ☒ \$1

Question Number : 169 Question Id : 16794319962 Question Type : MCQ Option Shuffling : Yes Display Question Number : Yes
Single Line Question Option : No Option Orientation : Vertical

Correct Marks : 1 Wrong Marks : 0.25

विश्व बैंक के अनुसार गरीबी रेखा के लिए एक समान मानक का उपयोग करने के लिए प्रति दिन मुद्रा प्रति व्यक्ति की न्यूनतम प्राप्यता क्या होती है?

Options :

1. ☐ \$5
2. ☐ \$2
3. ☐ \$3
4. ☒ \$1

Question Number : 170 Question Id : 16794319963 Question Type : MCQ Option Shuffling : Yes Display Question Number : Yes
Single Line Question Option : No Option Orientation : Vertical

Correct Marks : 1 Wrong Marks : 0.25

What was the percentage of the people living below the poverty line in India, in 2011-12?

Options :

1. ✖ 30%
2. ✖ 29.1%
3. ✔ 21.9%
4. ✖ 29.4%

Question Number : 170 Question Id : 16794319963 Question Type : MCQ Option Shuffling : Yes Display Question Number : Yes
Single Line Question Option : No Option Orientation : Vertical
Correct Marks : 1 Wrong Marks : 0.25

2011-12 में गरीबी रेखा से नीचे रहने वाले लोगों का प्रतिशत कितना था?

Options :

1. ✖ 30%
2. ✖ 29.1%
3. ✔ 21.9%
4. ✖ 29.4%

Question Number : 171 Question Id : 16794319964 Question Type : MCQ Option Shuffling : Yes Display Question Number : Yes
Single Line Question Option : No Option Orientation : Vertical
Correct Marks : 1 Wrong Marks : 0.25

What is the new dimension added to food security by Amartya Sen?

Options :

1. ✖ Availability at all times
2. ✖ Individual availability
3. ✖ Nutritious food
4. ✔ Access of food through entitlements

Question Number : 171 Question Id : 16794319964 Question Type : MCQ Option Shuffling : Yes Display Question Number : Yes
Single Line Question Option : No Option Orientation : Vertical
Correct Marks : 1 Wrong Marks : 0.25

अमर्त्य सेन द्वारा खाद्य सुरक्षा में नया कौन सा आयाम जोड़ा गया है?

Options :

1. ✖ हर समय उपलब्धता

2. ✖ व्यक्तिगत उपलब्धता
3. ✖ पोषक भोजन
4. ✔ पात्रता के माध्यम से भोजन की पहुंच

Question Number : 172 Question Id : 16794319965 Question Type : MCQ Option Shuffling : Yes Display Question Number : Yes
Single Line Question Option : No Option Orientation : Vertical

Correct Marks : 1 Wrong Marks : 0.25

What does NHFS stand for?

Options :

1. ✔ National Health and Family Survey
2. ✖ National Human Financial and Family Survey
3. ✖ National Human Family and Financial Securities
4. ✖ National Health and Financial Survey

Question Number : 172 Question Id : 16794319965 Question Type : MCQ Option Shuffling : Yes Display Question Number : Yes
Single Line Question Option : No Option Orientation : Vertical

Correct Marks : 1 Wrong Marks : 0.25

एनएचएफएस का पूर्ण रूप क्या है?

Options :

1. ✔ नेशनल हेल्थ एंड फॅमिली सर्वे
2. ✖ नेशनल ह्यूमन फाइनेंसियल एंड फॅमिली सर्वे
3. ✖ नेशनल ह्यूमन फॅमिली एंड फाइनेंसियल सिक्योरिटीज
4. ✖ नेशनल हेल्थ एंड फाइनेंसियल सर्वे

Question Number : 173 Question Id : 16794319966 Question Type : MCQ Option Shuffling : Yes Display Question Number : Yes
Single Line Question Option : No Option Orientation : Vertical

Correct Marks : 1 Wrong Marks : 0.25

What is the consequence of inadequate diets persistently existing in terms of quality and quantity?

Options :

1. ✖ Seasonal Hunger

- 2. ✖ Hunger
- 3. ✖ Poverty
- 4. ✔ Chronic Hunger

Question Number : 173 Question Id : 16794319966 Question Type : MCQ Option Shuffling : Yes Display Question Number : Yes
Single Line Question Option : No Option Orientation : Vertical
Correct Marks : 1 Wrong Marks : 0.25

गुणवत्ता और मात्रा के मामले में अपर्याप्त आहार लगातार मौजूद होने का क्या परिणाम होता है?

Options :

- 1. ✖ मौसमी भूख
- 2. ✖ भूख
- 3. ✖ दरिद्रता
- 4. ✔ चिरकालिक भूख

Question Number : 174 Question Id : 16794319967 Question Type : MCQ Option Shuffling : Yes Display Question Number : Yes
Single Line Question Option : No Option Orientation : Vertical
Correct Marks : 1 Wrong Marks : 0.25

What is the classification of the sector in which the activities themselves do not produce a good but they are an aid or a support for the production process?

Options :

- 1. ✖ Primary sector
- 2. ✖ Secondary sector
- 3. ✔ Tertiary sector
- 4. ✖ Public sector

Question Number : 174 Question Id : 16794319967 Question Type : MCQ Option Shuffling : Yes Display Question Number : Yes
Single Line Question Option : No Option Orientation : Vertical
Correct Marks : 1 Wrong Marks : 0.25

उस क्षेत्र का वर्गीकरण क्या है जिसमें गतिविधियां स्वयं अच्छी नहीं होती हैं लेकिन वे उत्पादन प्रक्रिया के लिए सहायक होती हैं?

Options :

1. ✖ प्राथमिक क्षेत्र
2. ✖ द्वितीयक क्षेत्र
3. ✔ तृतीयक उद्योग
4. ✖ सार्वजनिक क्षेत्र

Question Number : 175 Question Id : 16794319968 Question Type : MCQ Option Shuffling : Yes Display Question Number : Yes
Single Line Question Option : No Option Orientation : Vertical

Correct Marks : 1 Wrong Marks : 0.25

A situation of unemployment where people are working, but they are made to work less than their potential, is called as _____.

Options :

1. ✖ Underemployment
2. ✖ Educational unemployment
3. ✔ Disguised unemployment
4. ✖ Seasonal unemployment

Question Number : 175 Question Id : 16794319968 Question Type : MCQ Option Shuffling : Yes Display Question Number : Yes
Single Line Question Option : No Option Orientation : Vertical

Correct Marks : 1 Wrong Marks : 0.25

बेरोजगारी की स्थिति जहां लोग कार्यशील होते हैं, लेकिन उन्हें अपनी क्षमता से कम काम करने को मिलता है, उसे _____ कहा जाता है।

Options :

1. ✖ अल्प रोजगार
2. ✖ शैक्षिक बेरोजगारी
3. ✔ प्रच्छन्न बेरोजगारी
4. ✖ मौसमी बेरोजगारी

Question Number : 176 Question Id : 16794319969 Question Type : MCQ Option Shuffling : Yes Display Question Number : Yes
Single Line Question Option : No Option Orientation : Vertical

Correct Marks : 1 Wrong Marks : 0.25

Who takes most of the decisions in a Self Help Groups (SHG)?

Options :

1. ✖ Banks
2. ✖ RBI
3. ✖ State government
4. ✔ Members

Question Number : 176 Question Id : 16794319969 Question Type : MCQ Option Shuffling : Yes Display Question Number : Yes
Single Line Question Option : No Option Orientation : Vertical

Correct Marks : 1 Wrong Marks : 0.25

स्व-सहायता समूहों (एस.एच.जी.) में अधिकांश निर्णय कौन लेता है?

Options :

1. ✖ बैंक
2. ✖ भारतीय रिजर्व बैंक
3. ✖ राज्य सरकार
4. ✔ सदस्य

Question Number : 177 Question Id : 16794319970 Question Type : MCQ Option Shuffling : Yes Display Question Number : Yes
Single Line Question Option : No Option Orientation : Vertical

Correct Marks : 1 Wrong Marks : 0.25

Informal sources of credit do NOT include _____.

Options :

1. ✖ Money lenders
2. ✖ Landlords
3. ✔ Banks
4. ✖ NGOs

Question Number : 177 Question Id : 16794319970 Question Type : MCQ Option Shuffling : Yes Display Question Number : Yes
Single Line Question Option : No Option Orientation : Vertical

Correct Marks : 1 Wrong Marks : 0.25

क्रेडिट (जमा धन) के अनौपचारिक स्रोतों में _____ शामिल नहीं है।

Options :

1. ✖ धन उधारदाता (महाजन)

2. ✖ जमींदार

3. ✔ बैंक

4. ✖ गैर सरकारी संगठन

Question Number : 178 Question Id : 16794319971 Question Type : MCQ Option Shuffling : Yes Display Question Number : Yes
Single Line Question Option : No Option Orientation : Vertical

Correct Marks : 1 Wrong Marks : 0.25

In which year did Sri Lanka pass an act to recognise Sinhala as the only official language of the country?

Options :

1. ✔ 1956

2. ✖ 1945

3. ✖ 1958

4. ✖ 1960

Question Number : 178 Question Id : 16794319971 Question Type : MCQ Option Shuffling : Yes Display Question Number : Yes
Single Line Question Option : No Option Orientation : Vertical

Correct Marks : 1 Wrong Marks : 0.25

श्रीलंका ने किस साल सिंहली भाषा को देश की एकमात्र आधिकारिक भाषा बनाने के लिए एक अधिनियम पारित किया था?

Options :

1. ✔ 1956

2. ✖ 1945

3. ✖ 1958

4. ✖ 1960

Question Number : 179 Question Id : 16794319972 Question Type : MCQ Option Shuffling : Yes Display Question Number : Yes
Single Line Question Option : No Option Orientation : Vertical

Correct Marks : 1 Wrong Marks : 0.25

In which year was one of the world's superpowers, USSR broken into several independent countries?

Options :

1. ✖ 1990

2. ✖ 1991

3. ✔ 1989

4. ✖ 1987

Question Number : 179 Question Id : 16794319972 Question Type : MCQ Option Shuffling : Yes Display Question Number : Yes
Single Line Question Option : No Option Orientation : Vertical

Correct Marks : 1 Wrong Marks : 0.25

किस वर्ष विश्व के महाशक्तियों में से एक यू.एस.एस.आर. कई स्वतंत्र देशों में विभाजित हो गया?

Options :

1. ✖ 1990

2. ✖ 1991

3. ✔ 1989

4. ✖ 1987

Question Number : 180 Question Id : 16794319973 Question Type : MCQ Option Shuffling : Yes Display Question Number : Yes
Single Line Question Option : No Option Orientation : Vertical

Correct Marks : 1 Wrong Marks : 0.25

The Concurrent List is a list of 52 items given in the Seventh Schedule to the Constitution of India. Identify the subjects included in the Concurrent List from the following.

Options :

1. ✖ Airways

2. ✖ Public health

3. ✖ Land

4. ✔ Trade Unions

Question Number : 180 Question Id : 16794319973 Question Type : MCQ Option Shuffling : Yes Display Question Number : Yes
Single Line Question Option : No Option Orientation : Vertical

Correct Marks : 1 Wrong Marks : 0.25

समवर्ती सूची भारत के संविधान की सातवीं अनुसूची में दी गई 52 विषयों की एक सूची है। निम्नलिखित से समवर्ती सूची में शामिल विषयों की पहचान करें।

Options :

1. ✖ वायुमार्ग

2. ✖ सार्वजनिक स्वास्थ्य

3. ✖ भूमि

4. ✔ ट्रेड यूनियन

Subject Related

Group Number :	10
Group Id :	167943763
Group Maximum Duration :	0
Group Minimum Duration :	120
Revisit allowed for view? :	No
Revisit allowed for edit? :	No
Break time:	0
Group Marks:	20
Revisit allowed for group Instructions? :	Yes
Maximum Instruction Time:	0
Minimum Instruction Time:	0

Subject Related

Section Id :	167943828
Section Number :	1
Section type :	Online
Mandatory or Optional:	Mandatory
Number of Questions:	20
Number of Questions to be attempted:	20
Section Marks:	20
Display Number Panel:	Yes
Group All Questions:	No

Sub-Section Number:	1
Sub-Section Id:	1679431273
Question Shuffling Allowed :	Yes

Question Number : 181 Question Id : 16794319974 Question Type : MCQ Option Shuffling : Yes Display Question Number : Yes
Single Line Question Option : No Option Orientation : Vertical

Correct Marks : 1 Wrong Marks : 0.25

What are Residuary Powers?

Options :

1. ✖ Such powers vest with states only

2. ✖ Such powers vest with both, states and centre

3. ✓ Union Legislature has only the power to legislate

4. ✗ Judiciary only can make laws

Question Number : 181 Question Id : 16794319974 Question Type : MCQ Option Shuffling : Yes Display Question Number : Yes
Single Line Question Option : No Option Orientation : Vertical

Correct Marks : 1 Wrong Marks : 0.25

अवशिष्ट शक्तियां क्या हैं?

Options :

1. ✗ ऐसी शक्तियां जो केवल राज्य के साथ निहित हैं

2. ✗ ऐसी शक्तियां जो राज्य और केंद्र दोनों के साथ निहित हैं

3. ✓ केवल संघीय विधानमंडल के पास कानून बनाने की शक्ति है

4. ✗ केवल न्यायपालिका कानून बना सकती है

Question Number : 182 Question Id : 16794319975 Question Type : MCQ Option Shuffling : Yes Display Question Number : Yes
Single Line Question Option : No Option Orientation : Vertical

Correct Marks : 1 Wrong Marks : 0.25

Which special privilege is given to the recognised parties by the election commission?

Options :

1. ✗ Equality

2. ✓ Unique symbol for all the official candidates of a particular party

3. ✗ Established parties

4. ✗ Increase in the budget

Question Number : 182 Question Id : 16794319975 Question Type : MCQ Option Shuffling : Yes Display Question Number : Yes
Single Line Question Option : No Option Orientation : Vertical

Correct Marks : 1 Wrong Marks : 0.25

निर्वाचन आयोग मान्यता-प्राप्त दलों को कौनसा विशेषाधिकार देता है?

Options :

1. ✗ समानता

2. ✓ किसी विशेष पार्टी के सभी आधिकारिक उम्मीदवारों के लिए खास चुनाव चिन्ह

3. ✖ स्थापित दल

4. ✖ बजट में वृद्धि

Question Number : 183 Question Id : 16794319976 Question Type : MCQ Option Shuffling : Yes Display Question Number : Yes
Single Line Question Option : No Option Orientation : Vertical

Correct Marks : 1 Wrong Marks : 0.25

The most important challenge that the political parties face in a democratic setup is _____.

Options :

1. ✔ lack of internal democracy

2. ✖ equality

3. ✖ established democracy

4. ✖ social disturbances

Question Number : 183 Question Id : 16794319976 Question Type : MCQ Option Shuffling : Yes Display Question Number : Yes
Single Line Question Option : No Option Orientation : Vertical

Correct Marks : 1 Wrong Marks : 0.25

लोकतांत्रिक व्यवस्था में राजनीतिक दलों को किस सबसे महत्वपूर्ण चुनौती का सामना करना पड़ता है?

Options :

1. ✔ आंतरिक लोकतंत्र का अभाव

2. ✖ समानता

3. ✖ स्थापित लोकतंत्र

4. ✖ सामाजिक गड़बड़ी

Question Number : 184 Question Id : 16794319977 Question Type : MCQ Option Shuffling : Yes Display Question Number : Yes
Single Line Question Option : No Option Orientation : Vertical


Correct Marks : 1 Wrong Marks : 0.25


What are the two houses in the German bicameral legislature?

Options :

1. ✖ Lok Sabha and Rajya Sabha

2. ✖ The Senate and the House of Representatives


3.  Federal Assembly and Federal Council


4.  House of Commons and House of Lords


Question Number : 184 Question Id : 16794319977 Question Type : MCQ Option Shuffling : Yes Display Question Number : Yes
Single Line Question Option : No Option Orientation : Vertical
Correct Marks : 1 Wrong Marks : 0.25


जर्मन द्विपक्षीय विधायिका में दो सदन क्या हैं?

Options :

1.  लोकसभा और राज्यसभा

2.  सीनेट और हाउस ऑफ रिप्रेजेंटेटिव्स

3.  फेडरल असेंबली और फेडरल काउंसिल


4.  हाउस ऑफ कॉमन्स और हाउस ऑफ लॉर्ड्स


Question Number : 185 Question Id : 16794319978 Question Type : MCQ Option Shuffling : Yes Display Question Number : Yes
Single Line Question Option : No Option Orientation : Vertical
Correct Marks : 1 Wrong Marks : 0.25


Identify the exclusive power of the Lok Sabha.

Options :

1.  Money bill

2.  Subject related to State list


3.  Election of President


4.  No confidence motion against the SC judges

Question Number : 185 Question Id : 16794319978 Question Type : MCQ Option Shuffling : Yes Display Question Number : Yes
Single Line Question Option : No Option Orientation : Vertical
Correct Marks : 1 Wrong Marks : 0.25

लोकसभा की विशेष शक्ति की पहचान करें।

Options :

1.  धन विधेयक

2.  राज्य सूची से संबंधित विषय

3. ✖ राष्ट्रपति का चुनाव

4. ✖ सर्वोच्च न्यायालय के न्यायाधीशों के खिलाफ अविश्वास प्रस्ताव

Question Number : 186 Question Id : 16794319979 Question Type : MCQ Option Shuffling : Yes Display Question Number : Yes
Single Line Question Option : No Option Orientation : Vertical

Correct Marks : 1 Wrong Marks : 0.25

In which year did the High Court of Delhi come into existence?

Options :

1. ✖ 1947

2. ✔ 1966

3. ✖ 1951

4. ✖ 1954

Question Number : 186 Question Id : 16794319979 Question Type : MCQ Option Shuffling : Yes Display Question Number : Yes
Single Line Question Option : No Option Orientation : Vertical

Correct Marks : 1 Wrong Marks : 0.25

दिल्ली में उच्च न्यायालय किस वर्ष अस्तित्व में आया?

Options :

1. ✖ 1947

2. ✔ 1966

3. ✖ 1951

4. ✖ 1954

Question Number : 187 Question Id : 16794319980 Question Type : MCQ Option Shuffling : Yes Display Question Number : Yes
Single Line Question Option : No Option Orientation : Vertical

Correct Marks : 1 Wrong Marks : 0.25

What is name of the place where the high court of four North-Eastern states of Assam, Nagaland, Mizoram and Arunachal Pradesh have?

Options :

1. ✖ Dispur

2. ✖ Kohima

3. ✖ Nagaland

4. ✓ Guwahati

Question Number : 187 Question Id : 16794319980 Question Type : MCQ Option Shuffling : Yes Display Question Number : Yes
Single Line Question Option : No Option Orientation : Vertical

Correct Marks : 1 Wrong Marks : 0.25

उस स्थान का नाम क्या है जहां असम, नागालैंड, मिजोरम और अरुणाचल प्रदेश जैसे पूर्वोत्तर के चार राज्यों का उच्च न्यायालय स्थित है?

Options :

1. ✗ दिसपुर
2. ✗ कोहिमा
3. ✗ नागालैंड
4. ✓ गुवाहाटी

Question Number : 188 Question Id : 16794319981 Question Type : MCQ Option Shuffling : Yes Display Question Number : Yes
Single Line Question Option : No Option Orientation : Vertical

Correct Marks : 1 Wrong Marks : 0.25

To increase access to justice the Supreme Court in the early 1980's devised a mechanism. Identify it.

Options :

1. ✗ FIR
2. ✗ Criminal Law
3. ✓ PIL
4. ✗ SAL

Question Number : 188 Question Id : 16794319981 Question Type : MCQ Option Shuffling : Yes Display Question Number : Yes
Single Line Question Option : No Option Orientation : Vertical

Correct Marks : 1 Wrong Marks : 0.25

1980 के दशक की शुरुआत में सर्वोच्च न्यायालय के न्याय तक पहुंच बढ़ाने के लिए तैयार किए गए तंत्र की पहचान करें।

Options :

1. ✗ प्रथम सूचना रिपोर्ट
2. ✗ फौजदारी कानून
3. ✓ जनहित याचिका

4. ✖ एस.ए.एल.

Question Number : 189 Question Id : 16794319982 Question Type : MCQ Option Shuffling : Yes Display Question Number : Yes
Single Line Question Option : No Option Orientation : Vertical

Correct Marks : 1 Wrong Marks : 0.25

Which article of the Constitution of India says the following: "The supreme court shall have power to review any judgement pronounced or order made by it"?

Options :

1. ✔ Article 137

2. ✖ Article 144

3. ✖ Article 21

4. ✖ Article 42

Question Number : 189 Question Id : 16794319982 Question Type : MCQ Option Shuffling : Yes Display Question Number : Yes
Single Line Question Option : No Option Orientation : Vertical

Correct Marks : 1 Wrong Marks : 0.25

भारत के संविधान का कौन सा अनुच्छेद कहता है: "सर्वोच्च न्यायालय के पास किसी भी दिए गए फैसले या आदेश की समीक्षा करने की शक्ति है।"?

Options :

1. ✔ अनुच्छेद 137

2. ✖ अनुच्छेद 144

3. ✖ अनुच्छेद 21

4. ✖ अनुच्छेद 42

Question Number : 190 Question Id : 16794319983 Question Type : MCQ Option Shuffling : Yes Display Question Number : Yes
Single Line Question Option : No Option Orientation : Vertical

Correct Marks : 1 Wrong Marks : 0.25

What is the famous Kesavananda Bharati case about?

Options :

1. ✖ Relations between parliament and executive

2. ✖ Relations between judiciary and executive

3. ✖ Relations between executive and states

4. ✓ Relations between parliament and judiciary

Question Number : 190 Question Id : 16794319983 Question Type : MCQ Option Shuffling : Yes Display Question Number : Yes
Single Line Question Option : No Option Orientation : Vertical
Correct Marks : 1 Wrong Marks : 0.25

मशहूर केशवनंद भारती मुकदमा किस के बारे में है?

Options :

1. ✗ संसद और कार्यपालिका के बीच संबंध
2. ✗ न्यायपालिका और कार्यपालिका के बीच संबंध
3. ✗ कार्यपालिका और राज्यों के बीच संबंध
4. ✓ संसद और न्यायपालिका के बीच संबंध

Sub-Section Number: 2
Sub-Section Id: 1679431274
Question Shuffling Allowed : Yes

Question Number : 191 Question Id : 16794319984 Question Type : MCQ Option Shuffling : Yes Display Question Number : Yes
Single Line Question Option : No Option Orientation : Vertical
Correct Marks : 1 Wrong Marks : 0.25

Knowledge comes under:

Options :

1. ✗ Psychomotor domain
2. ✓ Cognitive domain
3. ✗ Affective domain
4. ✗ Pedagogy

Question Number : 191 Question Id : 16794319984 Question Type : MCQ Option Shuffling : Yes Display Question Number : Yes
Single Line Question Option : No Option Orientation : Vertical
Correct Marks : 1 Wrong Marks : 0.25

ज्ञान निम्न में से किसके अंतर्गत आता है?

Options :

1. ✗ मनःप्रेरक ज्ञानक्षेत्र (साइकोमोटर डोमेन)

2. ✓ संज्ञानात्मक ज्ञानक्षेत्र (कॉग्निटिव डोमेन)

3. ✗ भाव-विषयक ज्ञानक्षेत्र (अफेक्टिव डोमेन)

4. ✗ शिक्षा शास्त्र

Question Number : 192 Question Id : 16794319985 Question Type : MCQ Option Shuffling : Yes Display Question Number : Yes
Single Line Question Option : No Option Orientation : Vertical

Correct Marks : 1 Wrong Marks : 0.25

Who had explored the long standing education exclusion of Dalit and adivasi children in Rajasthan and Madhypradesh?

Options :

1. ✗ Ramesh Gurunath

2. ✓ Ramya Subramanaian

3. ✗ Vishwanatham

4. ✗ Sarvepalli Radhakrishnan

Question Number : 192 Question Id : 16794319985 Question Type : MCQ Option Shuffling : Yes Display Question Number : Yes
Single Line Question Option : No Option Orientation : Vertical

Correct Marks : 1 Wrong Marks : 0.25

राजस्थान और मध्यप्रदेश में दलित और आदिवासी बच्चों की लंबी अवधि की शिक्षा बहिष्कार किसने खोजा था?

Options :

1. ✗ रमेश गुरुनाथ

2. ✓ राम्या सुब्रमण्यन

3. ✗ विश्वनाथम

4. ✗ सर्वपल्लि राधाकृष्णन

Question Number : 193 Question Id : 16794319986 Question Type : MCQ Option Shuffling : Yes Display Question Number : Yes
Single Line Question Option : No Option Orientation : Vertical

Correct Marks : 1 Wrong Marks : 0.25

The gap between the knowledge that students learn and the skills they need to succeed can be filled through:

Options :

1. ✓ Experiential learning

2. ✖ Social living
3. ✖ Distance learning
4. ✖ Life experiences

Question Number : 193 Question Id : 16794319986 Question Type : MCQ Option Shuffling : Yes Display Question Number : Yes
Single Line Question Option : No Option Orientation : Vertical
Correct Marks : 1 Wrong Marks : 0.25

छात्रों के ज्ञान और सफलता के लिए आवश्यक कौशल के बीच का अंतर इस प्रकार से भरा जा सकता है:

Options :

1. ✔ प्रायोगिक ज्ञान
2. ✖ सामाजिक जीवन
3. ✖ दूर - शिक्षण
4. ✖ जीवन के अनुभव

Question Number : 194 Question Id : 16794319987 Question Type : MCQ Option Shuffling : Yes Display Question Number : Yes
Single Line Question Option : No Option Orientation : Vertical
Correct Marks : 1 Wrong Marks : 0.25

Anthropology comes under:

Options :

1. ✔ Social studies
2. ✖ General science
3. ✖ Theory on ants
4. ✖ Biological sciences

Question Number : 194 Question Id : 16794319987 Question Type : MCQ Option Shuffling : Yes Display Question Number : Yes
Single Line Question Option : No Option Orientation : Vertical
Correct Marks : 1 Wrong Marks : 0.25

मानव विज्ञान निम्न में से किसके अंतर्गत आता है?

Options :

1. ✔ सामाजिक अध्ययन

2. ✖ सामान्य विज्ञान

3. ✖ चींटियों पर सिद्धांत

4. ✖ जैविक विज्ञान

Question Number : 195 Question Id : 16794319988 Question Type : MCQ Option Shuffling : Yes Display Question Number : Yes
Single Line Question Option : No Option Orientation : Vertical

Correct Marks : 1 Wrong Marks : 0.25

Who can learn a foreign language faster?

Options :

1. ✔ Women

2. ✖ Men

3. ✖ Foreigners

4. ✖ Adults

Question Number : 195 Question Id : 16794319988 Question Type : MCQ Option Shuffling : Yes Display Question Number : Yes
Single Line Question Option : No Option Orientation : Vertical

Correct Marks : 1 Wrong Marks : 0.25

एक विदेशी भाषा तेजी से कौन सीख सकता है?

Options :

1. ✔ महिला

2. ✖ पुरुष

3. ✖ विदेशी

4. ✖ वयस्क

Question Number : 196 Question Id : 16794319989 Question Type : MCQ Option Shuffling : Yes Display Question Number : Yes
Single Line Question Option : No Option Orientation : Vertical

Correct Marks : 1 Wrong Marks : 0.25

Male and female are the _____ of society.

Options :

1. ✖ Two facts

2. ✔ Two wings

3. ✖ Two fires

4. ✖ Two pillars

Question Number : 196 Question Id : 16794319989 Question Type : MCQ Option Shuffling : Yes Display Question Number : Yes
Single Line Question Option : No Option Orientation : Vertical
Correct Marks : 1 Wrong Marks : 0.25

पुरुष और महिला समाज के _____ हैं।

Options :

1. ✖ दो तथ्य

2. ✔ दो पंख

3. ✖ दो आग

4. ✖ दो खंभे

Question Number : 197 Question Id : 16794319990 Question Type : MCQ Option Shuffling : Yes Display Question Number : Yes
Single Line Question Option : No Option Orientation : Vertical
Correct Marks : 1 Wrong Marks : 0.25

“Top down model” and “Bottom up model “are the part of:

Options :

1. ✔ Reading behaviors

2. ✖ Interactive process

3. ✖ Writing skills

4. ✖ Teaching behavior

Question Number : 197 Question Id : 16794319990 Question Type : MCQ Option Shuffling : Yes Display Question Number : Yes
Single Line Question Option : No Option Orientation : Vertical
Correct Marks : 1 Wrong Marks : 0.25

"टॉप डाउन मॉडल" और "बॉटम अप मॉडल" _____ का हिस्सा हैं।

Options :

1. ✔ पढ़ने की गतिविधि

2. ✖ परस्पर संवादात्मक प्रक्रिया

3. ✖ लेखन कला

4. ✖ शिक्षण की गतिविधि

Question Number : 198 Question Id : 16794319991 Question Type : MCQ Option Shuffling : Yes Display Question Number : Yes
Single Line Question Option : No Option Orientation : Vertical

Correct Marks : 1 Wrong Marks : 0.25

Self-learning does not include:

Options :

1. ✖ Motivation

2. ✖ Self-monitoring

3. ✖ Self-management

4. ✔ Self-teaching

Question Number : 198 Question Id : 16794319991 Question Type : MCQ Option Shuffling : Yes Display Question Number : Yes
Single Line Question Option : No Option Orientation : Vertical

Correct Marks : 1 Wrong Marks : 0.25

आत्म-शिक्षण में क्या शामिल नहीं है?

Options :

1. ✖ प्रेरणा

2. ✖ स्वयं-निगरानी

3. ✖ स्व:-प्रबंधन

4. ✔ स्व-शिक्षण

Question Number : 199 Question Id : 16794319992 Question Type : MCQ Option Shuffling : Yes Display Question Number : Yes
Single Line Question Option : No Option Orientation : Vertical

Correct Marks : 1 Wrong Marks : 0.25

Making judgments based on reasoning is called as:

Options :

1. ✔ Critical thinking

2. ✖ Analytical thinking

3. ✖ Judgmental thinking

4. ✖ Self-learning

Question Number : 199 Question Id : 16794319992 Question Type : MCQ Option Shuffling : Yes Display Question Number : Yes
Single Line Question Option : No Option Orientation : Vertical

Correct Marks : 1 Wrong Marks : 0.25

तर्क के आधार पर निर्णय लेना किस नाम से जाना जाता है?

Options :

1. ✔ गहन सोच

2. ✖ विश्लेषणात्मक सोच

3. ✖ न्यायिक सोच

4. ✖ स्वयं सीखना

Question Number : 200 Question Id : 16794319993 Question Type : MCQ Option Shuffling : Yes Display Question Number : Yes
Single Line Question Option : No Option Orientation : Vertical

Correct Marks : 1 Wrong Marks : 0.25

Locomotor Impairment is:

Options :

1. ✔ Limited movement in body parts

2. ✖ Limited vision

3. ✖ Low hearing capacity

4. ✖ Learning disability

Question Number : 200 Question Id : 16794319993 Question Type : MCQ Option Shuffling : Yes Display Question Number : Yes
Single Line Question Option : No Option Orientation : Vertical

Correct Marks : 1 Wrong Marks : 0.25

लोकोमोटर क्षति है:

Options :

1. ✔ शरीर के अंगों में सीमित संचलन

2. ✖ सीमित दृष्टि

3. ✖ कम सुनने की क्षमता

4. ✖ सीखने की विकलांगता