



Question Paper Preview

Notations :

- Options shown in **green** color and with  icon are correct.
- Options shown in **red** color and with  icon are incorrect.

Question Paper Name:	TGT SOCIAL SCIENCE FEMALE 15th Oct 2018 Shift 3
Subject Name:	TGT SOCIAL SCIENCE FEMALE
Creation Date:	2018-10-15 19:29:43
Duration:	120
Total Marks:	200
Display Marks:	Yes
Share Answer Key With Delivery Engine:	Yes
Actual Answer Key:	Yes
Calculator:	None
Magnifying Glass Required?:	No
Ruler Required?:	No
Eraser Required?:	No
Scratch Pad Required?:	No
Rough Sketch/Notepad Required?:	No
Protractor Required?:	No
Show Watermark on Console?:	No
Highlighter:	No
Auto Save on Console?:	No

Mental Ability

Group Number :	1
Group Id :	167943794
Group Maximum Duration :	0
Group Minimum Duration :	0
Revisit allowed for view? :	No
Revisit allowed for edit? :	No
Break time:	0
Group Marks:	20
Revisit allowed for group Instructions? :	Yes
Maximum Instruction Time:	0
Minimum Instruction Time:	0

Mental Ability

Section Id :	167943859
Section Number :	1
Section type :	Online
Mandatory or Optional:	Mandatory
Number of Questions:	20
Number of Questions to be attempted:	20
Section Marks:	20

Display Number Panel:
Group All Questions:

Yes
No

Sub-Section Number: 1
Sub-Section Id: 1679431317
Question Shuffling Allowed : Yes

Question Number : 1 Question Id : 16794320603 Question Type : MCQ Option Shuffling : Yes Display Question Number : Yes
Single Line Question Option : No Option Orientation : Vertical
Correct Marks : 1 Wrong Marks : 0.25

Choose the odd pair out from the below options.

Options :

- 1. ✖ 36 : 6
- 2. ✖ 49 : 7
- 3. ✔ 81 : 10
- 4. ✖ 121 : 11

Question Number : 1 Question Id : 16794320603 Question Type : MCQ Option Shuffling : Yes Display Question Number : Yes
Single Line Question Option : No Option Orientation : Vertical
Correct Marks : 1 Wrong Marks : 0.25


नीचे दिए विकल्पों से विषम युग्म का चुन करें।

Options :

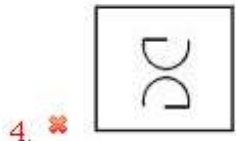
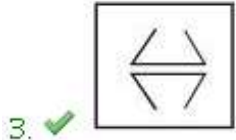
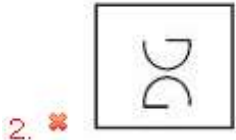
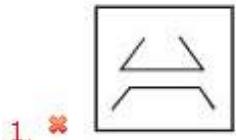
- 1. ✖ 36 : 6
- 2. ✖ 49 : 7
- 3. ✔ 81 : 10
- 4. ✖ 121 : 11

Question Number : 2 Question Id : 16794320604 Question Type : MCQ Option Shuffling : Yes Display Question Number : Yes
Single Line Question Option : No Option Orientation : Vertical
Correct Marks : 1 Wrong Marks : 0.25

Identify the option figure that is similar to the figures given below:



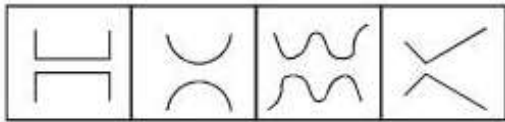
Options :



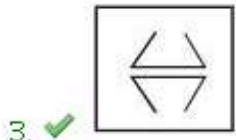
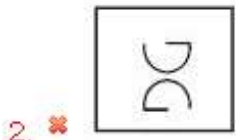

Question Number : 2 Question Id : 16794320604 Question Type : MCQ Option Shuffling : Yes Display Question Number : Yes
Single Line Question Option : No Option Orientation : Vertical

Correct Marks : 1 Wrong Marks : 0.25

नीचे की गई आकृतियों के समान विकल्प की पहचान करें।



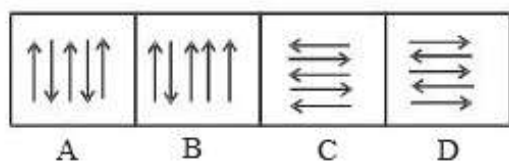
Options :



Question Number : 3 Question Id : 16794320605 Question Type : MCQ Option Shuffling : Yes Display Question Number : Yes
Single Line Question Option : No Option Orientation : Vertical

Correct Marks : 1 Wrong Marks : 0.25

Identify the image that is different among the given options.



Options :

1. ✖ A

2. ✔ B

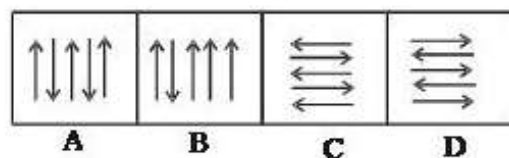
3. ✖ C

4. ✖ D

Question Number : 3 Question Id : 16794320605 Question Type : MCQ Option Shuffling : Yes Display Question Number : Yes
Single Line Question Option : No Option Orientation : Vertical

Correct Marks : 1 Wrong Marks : 0.25

दिए गए विकल्पों में सबसे अलग छवि की पहचान करें।



Options :

1. ✖ A

2. ✔ B

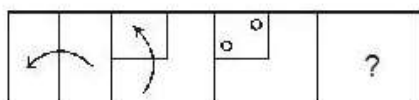
3. ✖ C

4. ✖ D

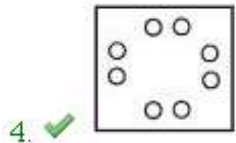
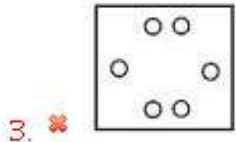
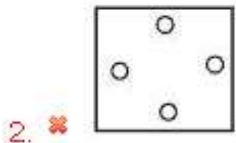
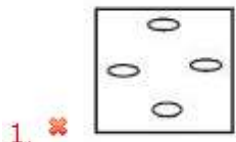
Question Number : 4 Question Id : 16794320606 Question Type : MCQ Option Shuffling : Yes Display Question Number : Yes
Single Line Question Option : No Option Orientation : Vertical

Correct Marks : 1 Wrong Marks : 0.25

A piece of paper is folded and cut as shown below in the question figures. From the given answer figure indicate how it would appear when unfolded.



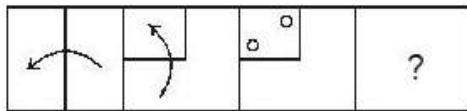
Options :



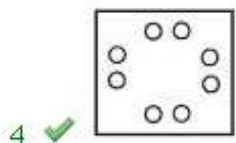
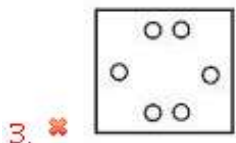
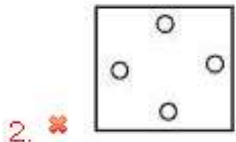
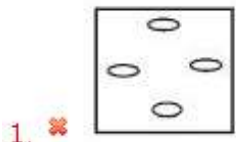
Question Number : 4 Question Id : 16794320606 Question Type : MCQ Option Shuffling : Yes Display Question Number : Yes
Single Line Question Option : No Option Orientation : Vertical

Correct Marks : 1 Wrong Marks : 0.25

कागज के एक टुकड़े को मोड़ा और नीचे दिखाई गई प्रश्न आकृति के अनुसार काटा जाता है। दिए गए उत्तर आंकड़े से संकेत मिलता है कि खोलने पर यह कैसा दिखाई देगा?



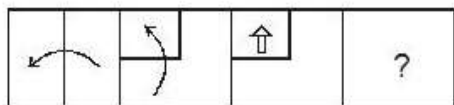
Options :



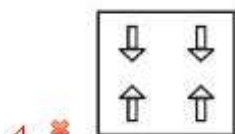
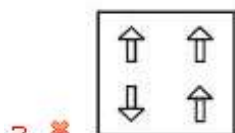
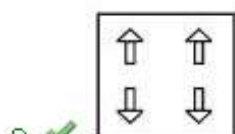
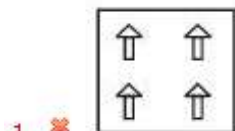
Question Number : 5 Question Id : 16794320607 Question Type : MCQ Option Shuffling : Yes Display Question Number : Yes
Single Line Question Option : No Option Orientation : Vertical

Correct Marks : 1 Wrong Marks : 0.25

A piece of paper is folded and cut as shown below in the question figures. From the given answer figure indicate how it would appear when unfolded.



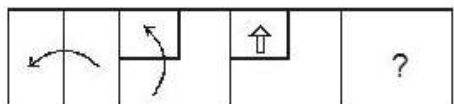
Options :



Question Number : 5 Question Id : 16794320607 Question Type : MCQ Option Shuffling : Yes Display Question Number : Yes
Single Line Question Option : No Option Orientation : Vertical

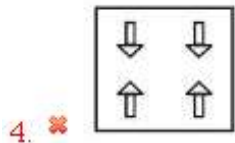
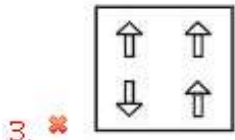
Correct Marks : 1 Wrong Marks : 0.25

कागज के एक टुकड़े को मोड़ा और नीचे दिखाई गई प्रश्न आकृति के अनुसार काटा जाता है। दिए गए उत्तर आंकड़े से संकेत मिलता है कि खोलने पर यह कैसा दिखाई देगा?



Options :

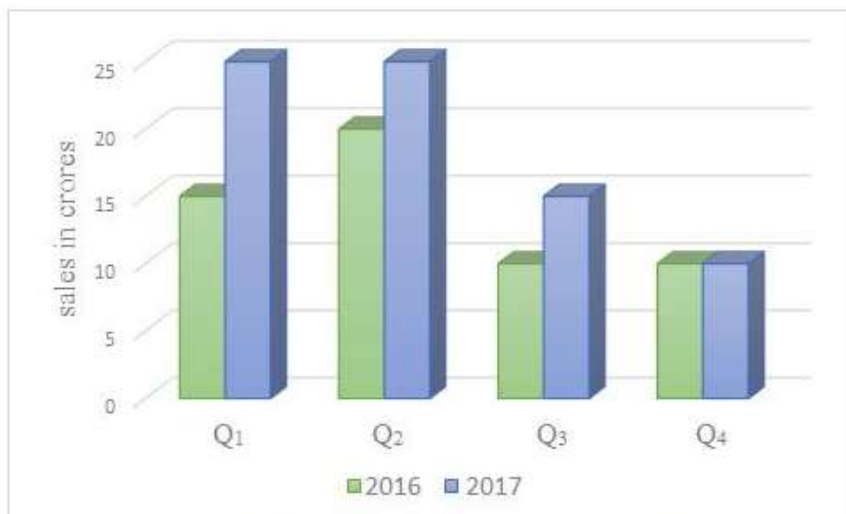




Question Number : 6 Question Id : 16794320608 Question Type : MCQ Option Shuffling : Yes Display Question Number : Yes
Single Line Question Option : No Option Orientation : Vertical

Correct Marks : 1 Wrong Marks : 0.25

The following chart shows information about the sales of the company 'XYZ' for the year 2016 & 2017.



What is the ratio of the sales of the company "XYZ" for the quarter 2 (Q_2) of 2016 to the sales of the company for quarter 2 (Q_2) of 2017?

Options :

1. ✔ 4 : 5

2. ✖ 4 : 3

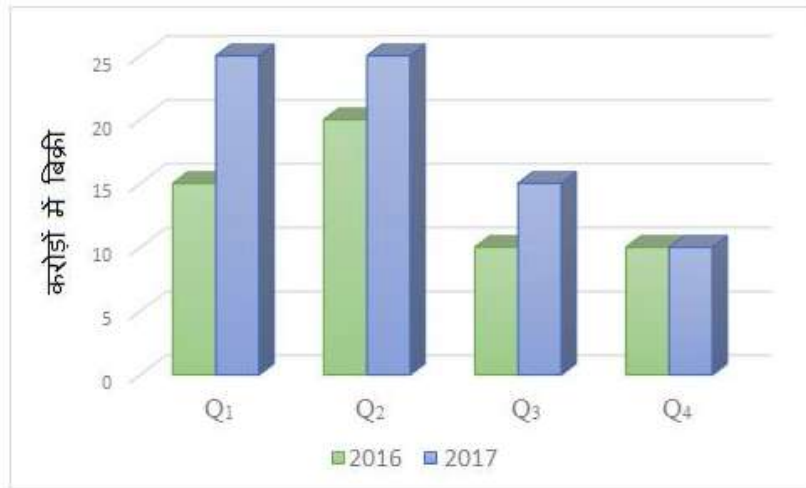
3. ✖ 5 : 5

4. ✖ 3 : 4

Question Number : 6 Question Id : 16794320608 Question Type : MCQ Option Shuffling : Yes Display Question Number : Yes
Single Line Question Option : No Option Orientation : Vertical

Correct Marks : 1 Wrong Marks : 0.25

निम्नलिखित चार्ट में वर्ष 2016 और 2017 के लिए कंपनी 'XYZ' की बिक्री के बारे में जानकारी दिखाई गई है।



कंपनी "XYZ" की 2017 की तिमाही 2 (Q₂) की बिक्री और 2016 की तिमाही 2 (Q₂) की बिक्री का अनुपात क्या है?

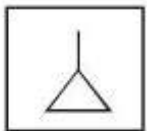
Options :

1. ✓ 4 : 5
2. ✗ 4 : 3
3. ✗ 5 : 5
4. ✗ 3 : 4

Question Number : 7 Question Id : 16794320609 Question Type : MCQ Option Shuffling : Yes Display Question Number : Yes
Single Line Question Option : No Option Orientation : Vertical

Correct Marks : 1 Wrong Marks : 0.25

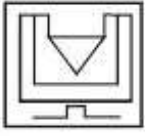
Spot the option figure that has the below figure embedded as part of it.



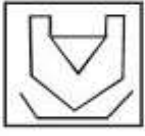
Options :

1. ✗
2. ✓

3.



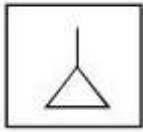
4.



Question Number : 7 Question Id : 16794320609 Question Type : MCQ Option Shuffling : Yes Display Question Number : Yes
Single Line Question Option : No Option Orientation : Vertical

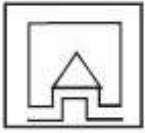
Correct Marks : 1 Wrong Marks : 0.25

आकृति में विकल्प आकृति को चिन्हित करें जिसे नीचे दी गई आकृति में सन्निहित किया गया है।

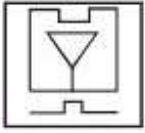


Options :

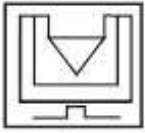
1.



2.



3.



4.



Question Number : 8 Question Id : 16794320610 Question Type : MCQ Option Shuffling : Yes Display Question Number : Yes
Single Line Question Option : No Option Orientation : Vertical

Correct Marks : 1 Wrong Marks : 0.25

Study the following information carefully and answer the given questions.

For a recruitment process in an ACCOUNTING organization, the candidates need to possess the following qualifications criteria:

- (i) He/she should be a graduate in commerce with at least 60% marks.
- (ii) He/she should be of at least 24 years of age and not more than 40 years as on 1 - 7 - 2016.
- (iii) He/she should have a post-qualification work experience of at least 2 years.
- (iv) He/she Should have secured 55% marks in the selection process.

However, if the candidate fulfills the above-mentioned criteria except:

(A) at (i), and if the candidate is not a graduate in commerce but has a post-graduation degree in finance with minimum of 60% marks, he/she should be referred to the Finance Manager of the organization.

(B) at (iii), and if the candidate fulfills all the eligibility criteria but of post-qualification work experience but has secured 75% marks in the selection process, he/she may be referred to the Trainee Accountant.

Based on the above information, study carefully whether following candidates are eligible for the recruitment process and mark your answer as follows. You are not to assume anything other than the information provided in each question. All the cases are given to you as on 1 - 7 - 2016.

Mamatha has done graduation in Mechanical Engineering with 59% marks. Her date of birth is 3 . 5 . 1991. She has qualified in the selection process and has secured 45% marks in it. She also has two years of post-qualification work experience.

Options :

- 1. ✖ The candidate should be selected
- 2. ✔ The candidate is not to be selected
- 3. ✖ The candidate may be referred to the Finance Manager
- 4. ✖ The candidate may be referred to the Trainee Accountant

Question Number : 8 Question Id : 16794320610 Question Type : MCQ Option Shuffling : Yes Display Question Number : Yes
Single Line Question Option : No Option Orientation : Vertical
Correct Marks : 1 Wrong Marks : 0.25

नीचे दी गई जानकारी को ध्यानपूर्वक पढ़ें और दिए गए प्रश्नों का उत्तर दें।

एक लेखा संगठन में भर्ती प्रक्रिया के लिए, उम्मीदवारों के लिए निम्नलिखित योग्यता मानदंड की आवश्यकता है:

- i) न्यूनतम 60% अंकों के साथ वाणिज्य में स्नातक।
- ii) 1-7-2016 को उम्र कम से कम 24 साल और 40 साल से अधिक नहीं।
- iii) उम्मीदवारों को शिक्षा के बाद कम से कम 2 वर्ष का कार्य अनुभव होना चाहिए।
- iv) उन्हें चयन प्रक्रिया में 55% अंक प्राप्त करना चाहिए था।

हालांकि, यदि उम्मीदवार उपर्युक्त मानदंडों को पूरा करता है तो इसे छोड़कर:

(A) (i) के मामले में यदि उम्मीदवार वाणिज्य में स्नातक नहीं है लेकिन उसके पास वित्त में 60% अंक के साथ स्नातकोत्तर की डिग्री है, उसे संस्थान के वित्त प्रबंधन के लिए संदर्भित करना चाहिए।

(B) (iii) के मामले में यदि उम्मीदवार शिक्षा के बाद कम से कम 2 वर्ष का कार्य अनुभव के पात्रता मापदंड को पूरा करता है, इतना ही नहीं वह चयन प्रक्रिया में 75% अंक अर्जित किया है, उसे प्रशिक्षु अकाउंटेंट के लिए संदर्भित किया जा सकता है।

उपरोक्त सूचना के आधार पर ध्यानपूर्वक देखें कि निम्नलिखित उम्मीदवार चयन प्रक्रिया में पात्र हैं और अपने उत्तर नीचे अंकित करें। आपको नीचे हर प्रश्न दी गई सूचना के अलावा कुछ और नहीं सोचना है। आपको दिए गए सभी मामले 1-7-2016 के हैं।

ममता ने मैकेनिकल इंजीनियरिंग में 59% अंकों के साथ स्नातक किया है। उसकी जन्म तिथि 3-5-1991 है। उसने चयन प्रक्रिया उत्तीर्ण की है और इसमें 45% अंक प्राप्त किए हैं। उसके पास दो साल के योग्यता कार्य अनुभव भी हैं:

Options :

- 1. ✖ उम्मीदवार का चयन किया जाना चाहिए
- 2. ✔ उम्मीदवार का चयन नहीं किया जाना चाहिए
- 3. ✖ उम्मीदवार को वित्त प्रबंधक के लिए संदर्भित किया जा सकता है
- 4. ✖ उम्मीदवार को प्रशिक्षु अकाउंटेंट के लिए संदर्भित किया जा सकता है

You are in the classroom and have not completed the home work that teacher had given the previous day. The teacher asks to show the status of the home work. What should be your most appropriate action?

Options :

1. ✖ Suddenly escape from the class.
2. ✖ Say lie as "forgot the home work book at the home".
3. ✖ Complain to the principal about the teacher.
4. ✔

Politely ask for apology for not completing homework and assure the work would be completed by next day

Question Number : 9 Question Id : 16794320611 Question Type : MCQ Option Shuffling : Yes Display Question Number : Yes
Single Line Question Option : No Option Orientation : Vertical

Correct Marks : 1 Wrong Marks : 0.25

आप कक्षा में हैं और आपने शिक्षक का पिछले दिन दिया गया गृहकार्य पूरा नहीं किया है। शिक्षक गृहकार्य की स्थिति बताने के लिए कहता है। आपकी सबसे उचित कार्रवाई क्या होनी चाहिए?

Options :

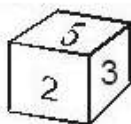
1. ✖ अचानक कक्षा से भाग जाना चाहिए
2. ✖ झूठ बोलना चाहिए कि "गृहकार्य पुस्तिका घर भूल गए"
3. ✖ शिक्षक की प्रिंसिपल से शिकायत करनी चाहिए।
4. ✔

गृहकार्य पूरा न करने के लिए माफी मांगना चाहिए और आश्वस्त करना चाहिए कि गृहकार्य अगले दिन पूरा हो जाएगा

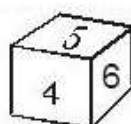
Question Number : 10 Question Id : 16794320612 Question Type : MCQ Option Shuffling : Yes Display Question Number : Yes
Single Line Question Option : No Option Orientation : Vertical

Correct Marks : 1 Wrong Marks : 0.25

Two positions of a dice are shown. When 5 is at the bottom, what will be the number on the side that is at the top?



(i)



(ii)

Options :

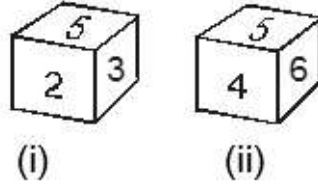
1. ✔ 1
2. ✖ 4 or 6
3. ✖ 2

4. ✖ 3 or 2

Question Number : 10 Question Id : 16794320612 Question Type : MCQ Option Shuffling : Yes Display Question Number : Yes
Single Line Question Option : No Option Orientation : Vertical

Correct Marks : 1 Wrong Marks : 0.25

एक पांसे की दो स्थिति दिखाई गई हैं। जब 5 तल पर है, तो शीर्ष फलक पर मौजूद संख्या क्या होगी?



Options :

1. ✔ 1

2. ✖ 4 या 6

3. ✖ 2

4. ✖ 3 या 2

Question Number : 11 Question Id : 16794320613 Question Type : MCQ Option Shuffling : Yes Display Question Number : Yes
Single Line Question Option : No Option Orientation : Vertical

Correct Marks : 1 Wrong Marks : 0.25

Select the most appropriate option.

A graph must have:

Options :

1. ✖ Parabola

2. ✖ Ellipse

3. ✖ Line

4. ✔ Axis

Question Number : 11 Question Id : 16794320613 Question Type : MCQ Option Shuffling : Yes Display Question Number : Yes
Single Line Question Option : No Option Orientation : Vertical

Correct Marks : 1 Wrong Marks : 0.25

सबसे उपयुक्त विकल्प का चयन करें।

किसी ग्राफ में क्या होना चाहिए?

Options :

1. ✖ परवलय

2. ✖ दीर्घवृत्त

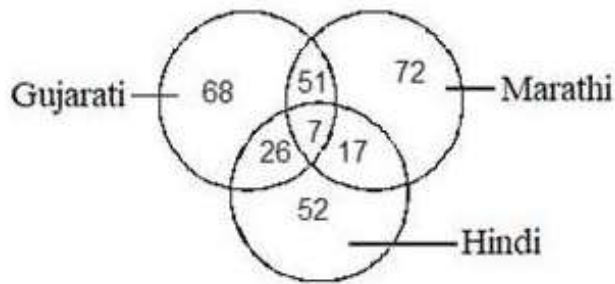
3. ✖ रेखा

4. ✔ अक्ष

Question Number : 12 Question Id : 16794320614 Question Type : MCQ Option Shuffling : Yes Display Question Number : Yes
Single Line Question Option : No Option Orientation : Vertical

Correct Marks : 1 Wrong Marks : 0.25

Study the following Venn diagram carefully and answer the question.



How many persons who speak either Gujarat or Marathi but not both?

Options :

1. ✖ 140

2. ✔ 183

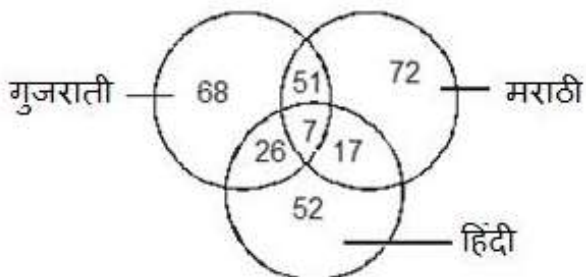
3. ✖ 166

4. ✖ 157

Question Number : 12 Question Id : 16794320614 Question Type : MCQ Option Shuffling : Yes Display Question Number : Yes
Single Line Question Option : No Option Orientation : Vertical

Correct Marks : 1 Wrong Marks : 0.25

निम्नलिखित वेन आरेख ध्यानपूर्वक अध्ययन करें और प्रश्न का उत्तर दें।



कितने लोग या तो गुजराती बोलते हैं या मराठी बोलते हैं लेकिन दोनों भाषा नहीं बोल सकते हैं?

Options :

1. ✖ 140

2. ✔ 183

3. ✖ 166

4. ✖ 157

Question Number : 13 Question Id : 16794320615 Question Type : MCQ Option Shuffling : Yes Display Question Number : Yes
Single Line Question Option : No Option Orientation : Vertical

Correct Marks : 1 Wrong Marks : 0.25

Pavitra's brother's father's mother is her:

Options :

1. ✔ Grandmother

2. ✖ Mother

3. ✖ Sister

4. ✖ Aunt

Question Number : 13 Question Id : 16794320615 Question Type : MCQ Option Shuffling : Yes Display Question Number : Yes
Single Line Question Option : No Option Orientation : Vertical

Correct Marks : 1 Wrong Marks : 0.25

पवित्रा के भाई के पिता की मां उसकी क्या होगी?

Options :

1. ✔ दादी

2. ✖ मां

3. ✖ बहन

4. ✖ चाची

Question Number : 14 Question Id : 16794320616 Question Type : MCQ Option Shuffling : Yes Display Question Number : Yes
Single Line Question Option : No Option Orientation : Vertical

Correct Marks : 1 Wrong Marks : 0.25

If + means −, − means ×, ÷ means + and × means ÷, then $18 - 6 + 12 \times 4 \div 2 = ?$

Options :

1. ✖ 110

2. ✖ 108

3. ✔ 107

4. ✖ 120

Question Number : 14 Question Id : 16794320616 Question Type : MCQ Option Shuffling : Yes Display Question Number : Yes
Single Line Question Option : No Option Orientation : Vertical

Correct Marks : 1 Wrong Marks : 0.25

यदि + का अर्थ -, - का अर्थ \times , \div का अर्थ + और \times का अर्थ \div , तो $18 - 6 + 12 \times 4 \div 2 = ?$

Options :

1. ✖ 110

2. ✖ 108

3. ✔ 107

4. ✖ 120

Question Number : 15 Question Id : 16794320617 Question Type : MCQ Option Shuffling : Yes Display Question Number : Yes
Single Line Question Option : No Option Orientation : Vertical

Correct Marks : 1 Wrong Marks : 0.25

At the end of a party, the eight people present all shake hands with each other once. How many handshakes will there be altogether?

Options :

1. ✖ 30

2. ✔ 28

3. ✖ 35

4. ✖ 43

Question Number : 15 Question Id : 16794320617 Question Type : MCQ Option Shuffling : Yes Display Question Number : Yes
Single Line Question Option : No Option Orientation : Vertical

Correct Marks : 1 Wrong Marks : 0.25

एक पार्टी के अंत में, आठ लोग एक दूसरे के साथ एक-दूसरे से हाथ मिलाते हैं। कुल कितने हाथ मिलाना (हैंडशेक) होंगे?

Options :

1. ✖ 30

2. ✔ 28

3. ✖ 35

4. ✖ 43

Question Number : 16 Question Id : 16794320618 Question Type : MCQ Option Shuffling : Yes Display Question Number : Yes
Single Line Question Option : No Option Orientation : Vertical

Correct Marks : 1 Wrong Marks : 0.25

The average age of a father and his two sons is 25 years. Father's age is 40 years and elder son is 3 years older than the younger son. Then what is the age of the younger son?

Options :

1. ✔ 16 years

2. ✖ 20 years

3. ✖ 18 years

4. ✖ 23 years

Question Number : 16 Question Id : 16794320618 Question Type : MCQ Option Shuffling : Yes Display Question Number : Yes
Single Line Question Option : No Option Orientation : Vertical

Correct Marks : 1 Wrong Marks : 0.25

एक पिता और उसके दो बेटों की औसत आयु 25 वर्ष है। पिता की उम्र 40 साल है और बड़ा बेटा, छोटे बेटे से 3 साल बड़ा है। तो छोटे बेटे की उम्र क्या होगी?

Options :

1. ✔ 16 वर्ष

2. ✖ 20 वर्ष

3. ✖ 18 वर्ष

4. ✖ 23 वर्ष

Question Number : 17 Question Id : 16794320619 Question Type : MCQ Option Shuffling : Yes Display Question Number : Yes
Single Line Question Option : No Option Orientation : Vertical

Correct Marks : 1 Wrong Marks : 0.25

Identify the odd pair of words among the group that does not hold the same relation as the rest of the pairs.

Options :

1. ✖ Spider : Web

2. ✖ Peasant : Cottage

3. ❌ Bee : Hive

4. ✅ Snake : Reptile

Question Number : 17 Question Id : 16794320619 Question Type : MCQ Option Shuffling : Yes Display Question Number : Yes
Single Line Question Option : No Option Orientation : Vertical

Correct Marks : 1 Wrong Marks : 0.25

समूह के बीच शब्दों के विषम युग्म की पहचान करें जो शेष जोड़े के समान संबंध नहीं रखता है।

Options :

1. ❌ मकड़ी : जाल

2. ❌ किसान : झोपड़ी

3. ❌ मधुमक्खी : छत्ता

4. ✅ सांप : सरीसृप

Question Number : 18 Question Id : 16794320620 Question Type : MCQ Option Shuffling : Yes Display Question Number : Yes
Single Line Question Option : No Option Orientation : Vertical

Correct Marks : 1 Wrong Marks : 0.25

Identify the odd pair of numerals among the group that does not hold the same relation as the rest of the pairs.

Options :

1. ✅ 3 : 19

2. ❌ 4 : 32

3. ❌ 7 : 42

4. ❌ 9 : 54

Question Number : 18 Question Id : 16794320620 Question Type : MCQ Option Shuffling : Yes Display Question Number : Yes
Single Line Question Option : No Option Orientation : Vertical

Correct Marks : 1 Wrong Marks : 0.25

समूह में अंकों की विषम युग्म की पहचान करें जो शेष युग्मों के समान संबंध नहीं रखती है।

Options :

1. ✅ 3 : 19

2. ❌ 4 : 32

3. ✖ 7 : 42

4. ✖ 9 : 54

Question Number : 19 Question Id : 16794320621 Question Type : MCQ Option Shuffling : Yes Display Question Number : Yes
Single Line Question Option : No Option Orientation : Vertical

Correct Marks : 1 Wrong Marks : 0.25

Consider the below arithmetic progressive series.

6, 10, 14, ...

What will be the 17th term in this series?

Options :

1. ✖ 75

2. ✖ 63

3. ✔ 70

4. ✖ 83

Question Number : 19 Question Id : 16794320621 Question Type : MCQ Option Shuffling : Yes Display Question Number : Yes
Single Line Question Option : No Option Orientation : Vertical

Correct Marks : 1 Wrong Marks : 0.25

नीचे अंकगणितीय प्रगतिशील श्रृंखला पर विचार करें।

6, 10, 14, ...

इस श्रृंखला में 17वां पद क्या होगा?

Options :

1. ✖ 75

2. ✖ 63

3. ✔ 70

4. ✖ 83

Question Number : 20 Question Id : 16794320622 Question Type : MCQ Option Shuffling : Yes Display Question Number : Yes
Single Line Question Option : No Option Orientation : Vertical

Correct Marks : 1 Wrong Marks : 0.25

What would be the next term in the below series?

GT, KR, OP, SN,?

Options :

1. ✖ GY

2. ✔ WL

3. ✖ LC

4. ✖ TA

Question Number : 20 Question Id : 16794320622 Question Type : MCQ Option Shuffling : Yes Display Question Number : Yes
Single Line Question Option : No Option Orientation : Vertical

Correct Marks : 1 Wrong Marks : 0.25

नीचे दी गई श्रृंखला में अगला शब्द क्या होगा?

GT, KR, OP, SN, ?

Options :

1. ✖ GY

2. ✔ WL

3. ✖ LC

4. ✖ TA

General Awareness

Group Number :	2
Group Id :	167943795
Group Maximum Duration :	0
Group Minimum Duration :	0
Revisit allowed for view? :	No
Revisit allowed for edit? :	No
Break time:	0
Group Marks:	20
Revisit allowed for group Instructions? :	Yes
Maximum Instruction Time:	0
Minimum Instruction Time:	0

Section Id :	167943860
Section Number :	1
Section type :	Online
Mandatory or Optional:	Mandatory
Number of Questions:	20
Number of Questions to be attempted:	20
Section Marks:	20
Display Number Panel:	Yes
Group All Questions:	No

Sub-Section Number:	1
Sub-Section Id:	1679431318
Question Shuffling Allowed :	Yes

Question Number : 21 Question Id : 16794320623 Question Type : MCQ Option Shuffling : Yes Display Question Number : Yes
Single Line Question Option : No Option Orientation : Vertical

Correct Marks : 1 Wrong Marks : 0.25

The famous epic Mahabharata was composed by _____.

Options :

1. ✖ Tulsidas
2. ✖ Maharishi Valmiki
3. ✔ Ved Vyasa
4. ✖ Kalidas

Question Number : 21 Question Id : 16794320623 Question Type : MCQ Option Shuffling : Yes Display Question Number : Yes
Single Line Question Option : No Option Orientation : Vertical

Correct Marks : 1 Wrong Marks : 0.25

प्रसिद्ध महाकाव्य महाभारत _____ द्वारा रचित था।

Options :

1. ✖ तुलसीदास
2. ✖ महर्षि वाल्मीकि
3. ✔ वेद व्यास
4. ✖ कालिदास

Question Number : 22 Question Id : 16794320624 Question Type : MCQ Option Shuffling : Yes Display Question Number : Yes
Single Line Question Option : No Option Orientation : Vertical

Correct Marks : 1 Wrong Marks : 0.25

How many Mahajanapadas were there in 600 B.C.?

Options :

- 1. ✖ 12
- 2. ✔ 16
- 3. ✖ 18
- 4. ✖ 24

Question Number : 22 Question Id : 16794320624 Question Type : MCQ Option Shuffling : Yes Display Question Number : Yes
Single Line Question Option : No Option Orientation : Vertical

Correct Marks : 1 Wrong Marks : 0.25

600 ई.स. पूर्व में कितने महाजनपद थे?

Options :

- 1. ✖ 12
- 2. ✔ 16
- 3. ✖ 18
- 4. ✖ 24

Question Number : 23 Question Id : 16794320625 Question Type : MCQ Option Shuffling : Yes Display Question Number : Yes
Single Line Question Option : No Option Orientation : Vertical

Correct Marks : 1 Wrong Marks : 0.25

Gautam Buddha's father was the chief of one of the ancient tribes of which state?

Options :

- 1. ✖ Lichhavi
- 2. ✖ Lumbini
- 3. ✔ Kapilvastu
- 4. ✖ Avanti

Question Number : 23 Question Id : 16794320625 Question Type : MCQ Option Shuffling : Yes Display Question Number : Yes
Single Line Question Option : No Option Orientation : Vertical

Correct Marks : 1 Wrong Marks : 0.25

गौतम बुद्ध के पिता किस राज्य की प्राचीन जनजातियों में से एक के प्रमुख थे?

Options :

1. ✖ लिच्छवि
2. ✖ लुंबिनी
3. ✔ कपिलवस्तु
4. ✖ अवन्ती

Question Number : 24 Question Id : 16794320626 Question Type : MCQ Option Shuffling : Yes Display Question Number : Yes
Single Line Question Option : No Option Orientation : Vertical

Correct Marks : 1 Wrong Marks : 0.25

The temples of Palitana are located in which state?

Options :

1. ✖ Punjab
2. ✔ Gujarat
3. ✖ Rajasthan
4. ✖ Haryana

Question Number : 24 Question Id : 16794320626 Question Type : MCQ Option Shuffling : Yes Display Question Number : Yes
Single Line Question Option : No Option Orientation : Vertical

Correct Marks : 1 Wrong Marks : 0.25

पालीताना के मंदिर किस राज्य में स्थित हैं?

Options :

1. ✖ पंजाब
2. ✔ गुजरात
3. ✖ राजस्थान
4. ✖ हरियाणा

Question Number : 25 Question Id : 16794320627 Question Type : MCQ Option Shuffling : Yes Display Question Number : Yes
Single Line Question Option : No Option Orientation : Vertical

Correct Marks : 1 Wrong Marks : 0.25

Thailand was known by which name earlier?

Options :

1. ✖ Malaya
2. ✖ Saigon
3. ✖ Manchukuo
4. ✔ Siam

Question Number : 25 Question Id : 16794320627 Question Type : MCQ Option Shuffling : Yes Display Question Number : Yes
Single Line Question Option : No Option Orientation : Vertical

Correct Marks : 1 Wrong Marks : 0.25

थाईलैंड पहले किस नाम से जाना जाता था?

Options :

1. ✖ मलाया
2. ✖ साइगॉन
3. ✖ मंचुको
4. ✔ सियाम

Question Number : 26 Question Id : 16794320628 Question Type : MCQ Option Shuffling : Yes Display Question Number : Yes
Single Line Question Option : No Option Orientation : Vertical

Correct Marks : 1 Wrong Marks : 0.25

'Office of CAG' in the Indian Constitution has been borrowed from which country?

Options :

1. ✔ Britain
2. ✖ Canada
3. ✖ Ireland
4. ✖ Australia

Question Number : 26 Question Id : 16794320628 Question Type : MCQ Option Shuffling : Yes Display Question Number : Yes
Single Line Question Option : No Option Orientation : Vertical

Correct Marks : 1 Wrong Marks : 0.25

भारतीय संविधान में 'सीएजी का कार्यालय' किस देश से अपनाया गया है?

Options :

1. ✔ ब्रिटेन

2. ✖ कनाडा
3. ✖ आयरलैंड
4. ✖ ऑस्ट्रेलिया

Question Number : 27 Question Id : 16794320629 Question Type : MCQ Option Shuffling : Yes Display Question Number : Yes
Single Line Question Option : No Option Orientation : Vertical

Correct Marks : 1 Wrong Marks : 0.25

Which Article provides for living wage etc. for workers?

Options :

1. ✖ Article 41
2. ✔ Article 43
3. ✖ Article 45
4. ✖ Article 48

Question Number : 27 Question Id : 16794320629 Question Type : MCQ Option Shuffling : Yes Display Question Number : Yes
Single Line Question Option : No Option Orientation : Vertical

Correct Marks : 1 Wrong Marks : 0.25

मज़दूरों के लिए कौन सा अनुच्छेद उचित मज़दूरी आदि प्रदान करता है?

Options :

1. ✖ अनुच्छेद 41
2. ✔ अनुच्छेद 43
3. ✖ अनुच्छेद 45
4. ✖ अनुच्छेद 48

Question Number : 28 Question Id : 16794320630 Question Type : MCQ Option Shuffling : Yes Display Question Number : Yes
Single Line Question Option : No Option Orientation : Vertical

Correct Marks : 1 Wrong Marks : 0.25

Which Part of the Indian Constitution provides for 'special provisions for certain classes'?

Options :

1. ✖ PART XIV

2. ✖ PART XV

3. ✔ PART XVI

4. ✖ PART XVII

Question Number : 28 Question Id : 16794320630 Question Type : MCQ Option Shuffling : Yes Display Question Number : Yes
Single Line Question Option : No Option Orientation : Vertical

Correct Marks : 1 Wrong Marks : 0.25

भारतीय संविधान का कौन सा हिस्सा 'कुछ वर्गों के लिए विशेष प्रावधान' प्रदान करता है?

Options :

1. ✖ भाग XIV

2. ✖ भाग XV

3. ✔ भाग XVI

4. ✖ भाग XVII

Question Number : 29 Question Id : 16794320631 Question Type : MCQ Option Shuffling : Yes Display Question Number : Yes
Single Line Question Option : No Option Orientation : Vertical

Correct Marks : 1 Wrong Marks : 0.25

Which bank's tag line is, "Badhti ka nam Zindagi."?

Options :

1. ✖ IDBI Bank

2. ✖ Citi Bank

3. ✖ HDFC Bank

4. ✔ Axis Bank

Question Number : 29 Question Id : 16794320631 Question Type : MCQ Option Shuffling : Yes Display Question Number : Yes
Single Line Question Option : No Option Orientation : Vertical

Correct Marks : 1 Wrong Marks : 0.25

"बढ़ती का नाम ज़िन्दगी।" किस बैंक की टैग लाइन है?

Options :

1. ✖ आईडीबीआई बैंक

2. ✖ सिटी बैंक

3. ✖ एचडीएफसी बैंक

4. ✔ एक्सिस बैंक

Question Number : 30 Question Id : 16794320632 Question Type : MCQ Option Shuffling : Yes Display Question Number : Yes
Single Line Question Option : No Option Orientation : Vertical

Correct Marks : 1 Wrong Marks : 0.25

India has fallen from _____ rank in 2017 to 11th rank in the FDI Confidence Index 2018 released by global consultancy firm A T Kearney.

Options :

1. ✖ 6th

2. ✔ 8th

3. ✖ 9th

4. ✖ 10th

Question Number : 30 Question Id : 16794320632 Question Type : MCQ Option Shuffling : Yes Display Question Number : Yes
Single Line Question Option : No Option Orientation : Vertical

Correct Marks : 1 Wrong Marks : 0.25

ग्लोबल कंसल्टेंसी फर्म ए टी कर्नी द्वारा जारी एफडीआई कॉन्फिडेंस इंडेक्स 2018 में भारत _____ रैंक से 2017 में 11वीं रैंक तक गिर गया।

Options :

1. ✖ 6वीं

2. ✔ 8वीं

3. ✖ 9वीं

4. ✖ 10वीं

Question Number : 31 Question Id : 16794320633 Question Type : MCQ Option Shuffling : Yes Display Question Number : Yes
Single Line Question Option : No Option Orientation : Vertical

Correct Marks : 1 Wrong Marks : 0.25

Who among the following is associated with Manipuri dance form?

Options :

1. ✖ Ananda Shankar Jayant

2. ✖ Sonal Mansingh

3. ✓ Rajkumar Singhajit Singh

4. ✗ Rukmini Devi Arundale

Question Number : 31 Question Id : 16794320633 Question Type : MCQ Option Shuffling : Yes Display Question Number : Yes
Single Line Question Option : No Option Orientation : Vertical

Correct Marks : 1 Wrong Marks : 0.25

निम्नलिखित कौन मणिपुरी नृत्य के साथ जुड़ा हुआ है?

Options :

1. ✗ आनंद शंकर जयंत

2. ✗ सोनल मानसिंह

3. ✓ राजकुमार सिंहजीत सिंह

4. ✗ रुक्मिणी देवी अरुंडले

Question Number : 32 Question Id : 16794320634 Question Type : MCQ Option Shuffling : Yes Display Question Number : Yes
Single Line Question Option : No Option Orientation : Vertical

Correct Marks : 1 Wrong Marks : 0.25

Who among the following is a famous 'Rudra Veena' player?

Options :

1. ✗ Bhajan Sopori

2. ✗ Pannalal Ghosh

3. ✗ Allauddin Khan

4. ✓ Asad Ali Khan

Question Number : 32 Question Id : 16794320634 Question Type : MCQ Option Shuffling : Yes Display Question Number : Yes
Single Line Question Option : No Option Orientation : Vertical

Correct Marks : 1 Wrong Marks : 0.25

निम्नलिखित में से कौन एक प्रसिद्ध 'रुद्र वीणा' वादक है?

Options :

1. ✗ भजन सोपोरी

2. ✗ पन्नालाल घोष

3. ✖ अलाउद्दीन खान

4. ✔ असद अली खान

Question Number : 33 Question Id : 16794320635 Question Type : MCQ Option Shuffling : Yes Display Question Number : Yes
Single Line Question Option : No Option Orientation : Vertical

Correct Marks : 1 Wrong Marks : 0.25

"Bathukamma" is the famous folk-dance of which state?

Options :

1. ✖ Karnataka

2. ✔ Telangana

3. ✖ Kerala

4. ✖ Tamil Nadu

Question Number : 33 Question Id : 16794320635 Question Type : MCQ Option Shuffling : Yes Display Question Number : Yes
Single Line Question Option : No Option Orientation : Vertical

Correct Marks : 1 Wrong Marks : 0.25

"बतुकम्म" किस राज्य का प्रसिद्ध लोक-नृत्य है?

Options :

1. ✖ कर्नाटक

2. ✔ तेलंगाना

3. ✖ केरल

4. ✖ तमिलनाडु

Question Number : 34 Question Id : 16794320636 Question Type : MCQ Option Shuffling : Yes Display Question Number : Yes
Single Line Question Option : No Option Orientation : Vertical

Correct Marks : 1 Wrong Marks : 0.25

Olympic Council of Asia (OCA) has chosen whom as the winner of 'Most Valuable Player' (MVP) Trophy Award in 2018 Jakarta and Palembang Asian Games.

Options :

1. ✖ Kosuke Kitajima

2. ✖ Kosuke Hagino

3. ✓ Rikako Ikee

4. ✗ Park Tae-hwan

Question Number : 34 Question Id : 16794320636 Question Type : MCQ Option Shuffling : Yes Display Question Number : Yes
Single Line Question Option : No Option Orientation : Vertical

Correct Marks : 1 Wrong Marks : 0.25

ओलंपिक काउंसिल ऑफ एशिया (OCA) ने 2018 जकार्ता और पालम्बांग एशियाई खेलों में 'सबसे मूल्यवान खिलाड़ी' (MVP) ट्रॉफी के विजेता के रूप में किसे चुना?

Options :

1. ✗ कोसुक किटाजिमा

2. ✗ कोसुक हैगिनो

3. ✓ रिकाको आईकी

4. ✗ पार्क ताई-ह्वान

Question Number : 35 Question Id : 16794320637 Question Type : MCQ Option Shuffling : Yes Display Question Number : Yes
Single Line Question Option : No Option Orientation : Vertical

Correct Marks : 1 Wrong Marks : 0.25

Which one of the following was not a mascot of the 2018 Asian Games?

Options :

1. ✗ Kaka (one horned rhino)

2. ✗ Bhin Bhin (bird of paradise)

3. ✗ Atung (deer)

4. ✓ Ezomon (flying squirrel)

Question Number : 35 Question Id : 16794320637 Question Type : MCQ Option Shuffling : Yes Display Question Number : Yes
Single Line Question Option : No Option Orientation : Vertical

Correct Marks : 1 Wrong Marks : 0.25

निम्नलिखित में से क्या 2018 एशियाई खेलों का शुभंकर नहीं था?

Options :

1. ✗ काका (एक सींग वाला गैंडा)

2. ✖ भिन भिन (स्वर्ग का पक्षी)
3. ✖ अतंग (हिरण)
4. ✔ एज़ोमन (उड़नेवाली गिलहरी)

Question Number : 36 Question Id : 16794320638 Question Type : MCQ Option Shuffling : Yes Display Question Number : Yes
Single Line Question Option : No Option Orientation : Vertical

Correct Marks : 1 Wrong Marks : 0.25

The temperature at which molecules stop moving?

Options :

1. ✔ -273.15°C
2. ✖ -270°C
3. ✖ Bose Einstein Condensate
4. ✖ Plank's Temperature

Question Number : 36 Question Id : 16794320638 Question Type : MCQ Option Shuffling : Yes Display Question Number : Yes
Single Line Question Option : No Option Orientation : Vertical

Correct Marks : 1 Wrong Marks : 0.25

तापमान जिस पर अणुओं की गति बंद हो जाता है:

Options :

1. ✔ -273.15° सेल्सियस
2. ✖ -270° सेल्सियस
3. ✖ बोस आइंस्टीन घनीभूत
4. ✖ प्लैंक का तापमान

Question Number : 37 Question Id : 16794320639 Question Type : MCQ Option Shuffling : Yes Display Question Number : Yes
Single Line Question Option : No Option Orientation : Vertical

Correct Marks : 1 Wrong Marks : 0.25

Where is the headquarter of 'Army Air Defence College' in India?

Options :

1. ✖ Jalahali

2. ✖ Dundigal

3. ✔ Gopalpur

4. ✖ Pune

Question Number : 37 Question Id : 16794320639 Question Type : MCQ Option Shuffling : Yes Display Question Number : Yes
Single Line Question Option : No Option Orientation : Vertical

Correct Marks : 1 Wrong Marks : 0.25

भारत में 'आर्मी एयर डिफेंस कॉलेज' का मुख्यालय कहाँ है?

Options :

1. ✖ जलहाली

2. ✖ डुंडीगल

3. ✔ गोपालपुर

4. ✖ पुणे

Question Number : 38 Question Id : 16794320640 Question Type : MCQ Option Shuffling : Yes Display Question Number : Yes
Single Line Question Option : No Option Orientation : Vertical

Correct Marks : 1 Wrong Marks : 0.25

Asian Development Bank (ADB) has approved financing package of \$245 million to implement project for providing safe, sustainable drinking water service to 1.65 million people in three districts affected by arsenic, fluoride, and salinity of which state?

Options :

1. ✖ Odisha

2. ✔ West Bengal

3. ✖ Rajasthan

4. ✖ Jharkhand

Question Number : 38 Question Id : 16794320640 Question Type : MCQ Option Shuffling : Yes Display Question Number : Yes
Single Line Question Option : No Option Orientation : Vertical

Correct Marks : 1 Wrong Marks : 0.25

एशियाई विकास बैंक (ADB) ने आर्सेनिक, फ्लोराइड एवं खारापन से प्रभावित तीन ज़िलों में 1.65 मिलियन लोगों को सुरक्षित, टिकाऊ पेयजल सेवा प्रदान करने के लिए परियोजना को कार्यान्वित करने के लिए किस राज्य के \$245 मिलियन के वित्तपोषण पैकेज को मंजूरी दी है?

Options :

1. ✖ ओडिशा
2. ✔ पश्चिम बंगाल
3. ✖ राजस्थान
4. ✖ झारखण्ड

Question Number : 39 Question Id : 16794320641 Question Type : MCQ Option Shuffling : Yes Display Question Number : Yes
Single Line Question Option : No Option Orientation : Vertical

Correct Marks : 1 Wrong Marks : 0.25

Which Indian Naval Ship reached Port of Darwin, Australia to participate in multilateral regional maritime exercise KAKADU 2018 conducted by Australia?

Options :

1. ✖ Shakti
2. ✖ Ganga
3. ✔ Sahyadri
4. ✖ Godavari

Question Number : 39 Question Id : 16794320641 Question Type : MCQ Option Shuffling : Yes Display Question Number : Yes
Single Line Question Option : No Option Orientation : Vertical

Correct Marks : 1 Wrong Marks : 0.25

भारतीय नौसेना का कौन सा जहाज़ डार्विन, ऑस्ट्रेलिया के बंदरगाह बहुपक्षीय क्षेत्रीय समुद्री व्यायाम ऑस्ट्रेलिया द्वारा आयोजित काकाडू 2018 में भाग लेने पहुंचा?

Options :

1. ✖ शक्ति
2. ✖ गंगा
3. ✔ सह्याद्रि
4. ✖ गोदावरी

Question Number : 40 Question Id : 16794320642 Question Type : MCQ Option Shuffling : Yes Display Question Number : Yes
Single Line Question Option : No Option Orientation : Vertical

Correct Marks : 1 Wrong Marks : 0.25

Union Government and European Union (EU) have collaborated for research programme named _____ to develop Next Generation Influenza to protect citizens across the globe.

Options :

1. ✖ Horizon 2022

2. ✖ Horizon 2021

3. ✖ Horizon 2019

4. ✔ Horizon 2020

Question Number : 40 Question Id : 16794320642 Question Type : MCQ Option Shuffling : Yes Display Question Number : Yes
Single Line Question Option : No Option Orientation : Vertical

Correct Marks : 1 Wrong Marks : 0.25

केंद्र सरकार और यूरोपीय संघ (EU) ने अगली पीढ़ी इंप्लूएंजा विकसित कर दुनिया भर में नागरिकों की रक्षा करने के लिए _____ नामक अनुसंधान कार्यक्रम के लिए सहयोग किया है।

Options :

1. ✖ होरिज़न 2022

2. ✖ होरिज़न 2021

3. ✖ होरिज़न 2019

4. ✔ होरिज़न 2020

Arithmetic Ability

Group Number :	3
Group Id :	167943796
Group Maximum Duration :	0
Group Minimum Duration :	0
Revisit allowed for view? :	No
Revisit allowed for edit? :	No
Break time:	0
Group Marks:	20
Revisit allowed for group Instructions? :	Yes
Maximum Instruction Time:	0
Minimum Instruction Time:	0

Arithmetic Ability

Section Id :	167943861
Section Number :	1
Section type :	Online
Mandatory or Optional:	Mandatory
Number of Questions:	19

Number of Questions to be attempted: 19
Section Marks: 20
Display Number Panel: Yes
Group All Questions: No

Sub-Section Number: 1
Sub-Section Id: 1679431319
Question Shuffling Allowed : Yes

Question Number : 41 Question Id : 16794320643 Question Type : MCQ Option Shuffling : Yes Display Question Number : Yes
Single Line Question Option : No Option Orientation : Vertical

Correct Marks : 1 Wrong Marks : 0.25

The value of $\frac{[9.5 \div (0.6 \times 0.75 + 0.8 \div 16) + 0.75] \div 31.6}{2.32 \div [1.4 \div 0.5 \text{ of } 0.7 + 2.4 \text{ of } 1.6 \div 8 \text{ of } 0.75]}$ is:

Options :

1. ✖ 1
2. ✔ 1.25
3. ✖ 2
4. ✖ 2.5

Question Number : 41 Question Id : 16794320643 Question Type : MCQ Option Shuffling : Yes Display Question Number : Yes
Single Line Question Option : No Option Orientation : Vertical

Correct Marks : 1 Wrong Marks : 0.25

$\frac{[9.5 \div (0.6 \times 0.75 + 0.8 \div 16) + 0.75] \div 31.6}{2.32 \div [1.4 \div 0.5 \text{ of } 0.7 + 2.4 \text{ of } 1.6 \div 8 \text{ of } 0.75]}$ का मान है:

Options :

1. ✖ 1
2. ✔ 1.25
3. ✖ 2
4. ✖ 2.5

Question Number : 42 Question Id : 16794320644 Question Type : MCQ Option Shuffling : Yes Display Question Number : Yes
Single Line Question Option : No Option Orientation : Vertical

Correct Marks : 1 Wrong Marks : 0.25

If $x = \frac{5\sqrt{3} - \sqrt{48} - 4\sqrt{2} + \sqrt{50}}{3 + \sqrt{6}}$ and $y = \sqrt{7 - 4\sqrt{3}}$ then the value of $(x - y)$ is closest to:

Options :

1. ✓ 0.3

2. ✗ 0.4

3. ✗ 0.6

4. ✗ 0.8

Question Number : 42 Question Id : 16794320644 Question Type : MCQ Option Shuffling : Yes Display Question Number : Yes
Single Line Question Option : No Option Orientation : Vertical

Correct Marks : 1 Wrong Marks : 0.25

यदि $x = \frac{5\sqrt{3}-\sqrt{48}-4\sqrt{2}+\sqrt{50}}{3+\sqrt{6}}$ और $y = \sqrt{7-4\sqrt{3}}$ है, तो $(x-y)$ का मान निम्नलिखित के निकटतम है:

Options :

1. ✓ 0.3

2. ✗ 0.4

3. ✗ 0.6

4. ✗ 0.8

Question Number : 43 Question Id : 16794320645 Question Type : MCQ Option Shuffling : Yes Display Question Number : Yes
Single Line Question Option : No Option Orientation : Vertical

Correct Marks : 1 Wrong Marks : 0.25

The value of $\frac{3^{\frac{2}{3}+\frac{11}{30}} \text{ of } 2^{\frac{2}{3}-\frac{1}{4}} \text{ of } 2^{\frac{1}{2}+\frac{3}{5}} \times 4^{\frac{4}{5}}}{\left(\frac{3}{4}+\frac{3}{5}\right) \text{ of } \left(\frac{5}{6}-\frac{5}{7}\right) \times \left(\frac{7}{8}-\frac{7}{9}\right) \text{ of } 5^{\frac{1}{3}}}$ is:

Options :

1. ✗ $\frac{5}{6}$

2. ✗ $\frac{6}{5}$

3. ✗ $\frac{1}{120}$

4. ✓ 120

Question Number : 43 Question Id : 16794320645 Question Type : MCQ Option Shuffling : Yes Display Question Number : Yes
Single Line Question Option : No Option Orientation : Vertical

Correct Marks : 1 Wrong Marks : 0.25

$$\frac{3\frac{2}{3} \div \frac{11}{30} \text{ of } 2\frac{1}{3} - \frac{1}{4} \text{ of } 2\frac{1}{2} \div \frac{3}{5} \times 4\frac{4}{5}}{\left(\frac{3}{4} + \frac{3}{5}\right) \text{ of } \left(\frac{5}{6} - \frac{5}{7}\right) \times \left(\frac{7}{8} - \frac{7}{9}\right) \text{ of } 5\frac{1}{3}}$$

का मान है:

Options :

1. ✖ $\frac{5}{6}$

2. ✖ $\frac{6}{5}$

3. ✖ $\frac{1}{120}$

4. ✔ 120

Question Number : 44 Question Id : 16794320646 Question Type : MCQ Option Shuffling : Yes Display Question Number : Yes
Single Line Question Option : No Option Orientation : Vertical

Correct Marks : 1 Wrong Marks : 0.25

In determining the HCF of two numbers by the method of long division, the last division is 59 and the successive quotients from the beginning to the end are 2, 2, 2 and 3, respectively. The difference between the numbers is:

Options :

1. ✖ 1239

2. ✖ 1357

3. ✔ 1416

4. ✖ 1475

Question Number : 44 Question Id : 16794320646 Question Type : MCQ Option Shuffling : Yes Display Question Number : Yes
Single Line Question Option : No Option Orientation : Vertical

Correct Marks : 1 Wrong Marks : 0.25

लंबी विभाजन विधि द्वारा दो संख्याओं का महत्तम समापवर्तक (HCF) निकालते समय अंतिम भाजक 59 है और उत्तरोत्तर शेषफल आरंभ से अंत तक क्रमशः 2, 2, 2, और 3 हैं, संख्याओं के बीच अंतर है:

Options :

1. ✖ 1239

2. ✖ 1357

3. ✔ 1416

4. ✖ 1475

Question Number : 45 Question Id : 16794320647 Question Type : MCQ Option Shuffling : Yes Display Question Number : Yes
Single Line Question Option : No Option Orientation : Vertical

Correct Marks : 1 Wrong Marks : 0.25

A is 20% more than B whereas B is 20% less than C, if D is 50% more than A, then which of the following is true?

Options :

1. ✖ C is 44% less than D
2. ✖ C is 20% more than B
3. ✖ C is 4% more than A
4. ✔ B is $55\frac{5}{9}$ % of D

Question Number : 45 Question Id : 16794320647 Question Type : MCQ Option Shuffling : Yes Display Question Number : Yes
Single Line Question Option : No Option Orientation : Vertical

Correct Marks : 1 Wrong Marks : 0.25

A, B से 20% अधिक है जबकि B, C से 20% कम है यदि D, A से 50% अधिक है, तो निम्नलिखित में से कौन सा सत्य है?

Options :

1. ✖ C, D से 44% कम है
2. ✖ C, B से 20% अधिक है
3. ✖ C, A से 4% अधिक है
4. ✔ B, D के $55\frac{5}{9}$ % के बराबर है

Question Number : 46 Question Id : 16794320648 Question Type : MCQ Option Shuffling : Yes Display Question Number : Yes
Single Line Question Option : No Option Orientation : Vertical

Correct Marks : 1 Wrong Marks : 0.25

30% of A's income is equal to 20% of B's income and 15% of B's income is equal to 25% of C's income. If C's income is ₹ 54000 then the total income of A and B is:

Options :

1. ✖ ₹ 114000
2. ✖ ₹ 144000
3. ✔ ₹ 150000
4. ✖ ₹ 156000

Question Number : 46 Question Id : 16794320648 Question Type : MCQ Option Shuffling : Yes Display Question Number : Yes
Single Line Question Option : No Option Orientation : Vertical

Correct Marks : 1 Wrong Marks : 0.25

A की आय का 30%, B की आय के 20% के बराबर है, और B की आय का 15%, C की आय के 25% के बराबर है यदि C की आय ₹ 54000 है तो A और C की कुल आय है:

Options :

1. ✖ ₹ 114000
2. ✖ ₹ 144000
3. ✔ ₹ 150000
4. ✖ ₹ 156000

Question Number : 47 Question Id : 16794320649 Question Type : MCQ Option Shuffling : Yes Display Question Number : Yes
Single Line Question Option : No Option Orientation : Vertical

Correct Marks : 1 Wrong Marks : 0.25

A trader sold articles at ₹ 1596 each after allowing 5% discount on labelled price. Had he not given any discount, he would have earned a profit of 12% on the cost price. The cost price of each article is:

Options :

1. ✖ ₹ 1200
2. ✔ ₹ 1500
3. ✖ ₹ 1560
4. ✖ ₹ 1600

Question Number : 47 Question Id : 16794320649 Question Type : MCQ Option Shuffling : Yes Display Question Number : Yes
Single Line Question Option : No Option Orientation : Vertical

Correct Marks : 1 Wrong Marks : 0.25

एक व्यापारी ने वस्तुओं के लेबल मूल्य पर 5% की छूट देकर प्रत्येक को ₹ 1596 पर बेचा यदि वह कोई छूट नहीं देता, तो उसे वस्तु के क्रयमूल्य पर 12% का लाभ प्राप्त होता, प्रत्येक वस्तु का क्रय मूल्य है:

Options :

1. ✖ ₹ 1200
2. ✔ ₹ 1500
3. ✖ ₹ 1560
4. ✖ ₹ 1600

Question Number : 48 Question Id : 16794320650 Question Type : MCQ Option Shuffling : Yes Display Question Number : Yes
Single Line Question Option : No Option Orientation : Vertical

Correct Marks : 1 Wrong Marks : 0.25

In a class of 80 students, 80% are girls and rest are boys. The average score of all the students in a test is 78. If the average score of boys is 20% more than that of the girls, then what is the average score of boys?

Options :

1. ✖ 85

2. ✖ 86

3. ✖ 88

4. ✔ 90

Question Number : 48 Question Id : 16794320650 Question Type : MCQ Option Shuffling : Yes Display Question Number : Yes
Single Line Question Option : No Option Orientation : Vertical

Correct Marks : 1 Wrong Marks : 0.25

80 विद्यार्थियों की एक कक्षा में 80% लड़कियाँ हैं और शेष लड़के हैं एक परीक्षा में सभी विद्यार्थियों का औसत प्राप्तांक 78 है यदि लड़कों का औसत प्राप्तांक लड़कियों के औसत प्राप्तांक से 20% अधिक है, तो लड़कों का औसत प्राप्तांक क्या है?

Options :

1. ✖ 85

2. ✖ 86

3. ✖ 88

4. ✔ 90

Question Number : 49 Question Id : 16794320651 Question Type : MCQ Option Shuffling : Yes Display Question Number : Yes
Single Line Question Option : No Option Orientation : Vertical

Correct Marks : 1 Wrong Marks : 0.25

The incomes of A, B and C are in the ratio 6 : 8 : 5 and their expenditures are in the ratio 5 : 7 : 4. If C saves 40% of her income, then the ratio of savings of A, B and C is:

Options :

1. ✖ 9 : 8 : 11

2. ✔ 9 : 11 : 8

3. ✖ 6 : 7 : 4

4. ✖ 1 : 1 : 1

Question Number : 49 Question Id : 16794320651 Question Type : MCQ Option Shuffling : Yes Display Question Number : Yes
Single Line Question Option : No Option Orientation : Vertical

Correct Marks : 1 Wrong Marks : 0.25

A, B और C की आयों में 6 : 8 : 5 का अनुपात है और उनके व्ययों में 5 : 7 : 4 का अनुपात है यदि C अपनी आय के 40% के बराबर बचत करता है तो A, B और C की बचतों में अनुपात है:

Options :

1. ✖ 9 : 8 : 11

2. ✔ 9 : 11 : 8

3. ✖ 6 : 7 : 4

4. ✖ 1 : 1 : 1

Question Number : 50 Question Id : 16794320652 Question Type : MCQ Option Shuffling : Yes Display Question Number : Yes
Single Line Question Option : No Option Orientation : Vertical

Correct Marks : 1 Wrong Marks : 0.25

If the mean proportional between 162 and 128 is x and the third proportional to 32 and 72 is y , then $x : y = ?$

Options :

1. ✔ 8 : 9

2. ✖ 4 : 3

3. ✖ 7 : 8

4. ✖ 9 : 16

Question Number : 50 Question Id : 16794320652 Question Type : MCQ Option Shuffling : Yes Display Question Number : Yes
Single Line Question Option : No Option Orientation : Vertical

Correct Marks : 1 Wrong Marks : 0.25

यदि 162 और 128 का मध्यनुपति x है और 32 और 72 का तृतीयानुपाती y है, तो $x : y = ?$

Options :

1. ✔ 8 : 9

2. ✖ 4 : 3

3. ✖ 7 : 8

4. ✖ 9 : 16

Question Number : 51 Question Id : 16794320653 Question Type : MCQ Option Shuffling : Yes Display Question Number : Yes
Single Line Question Option : No Option Orientation : Vertical

Correct Marks : 1 Wrong Marks : 0.25

The compound interest on a certain sum at $16\frac{2}{3}\%$ per annum for 3 years is ₹ 635. What will be the simple interest on the same sum at the same rate for double the time?

Options :

- 1. ✖ ₹ 540
- 2. ✖ ₹ 810
- 3. ✔ ₹ 1080
- 4. ✖ ₹ 1270

Question Number : 51 Question Id : 16794320653 Question Type : MCQ Option Shuffling : Yes Display Question Number : Yes
Single Line Question Option : No Option Orientation : Vertical

Correct Marks : 1 Wrong Marks : 0.25

किसी राशि पर $16\frac{2}{3}\%$ वार्षिक दर से 3 वर्ष का चक्रवृद्धि ब्याज ₹ 635 है उसी राशि पर उसी दर से दुगुने समय का साधारण ब्याज कितना होगा?

Options :

- 1. ✖ ₹ 540
- 2. ✖ ₹ 810
- 3. ✔ ₹ 1080
- 4. ✖ ₹ 1270

Question Number : 52 Question Id : 16794320654 Question Type : MCQ Option Shuffling : Yes Display Question Number : Yes
Single Line Question Option : No Option Orientation : Vertical

Correct Marks : 1 Wrong Marks : 0.25

A solid right circular cone of height 2.1 cm and the diameter of base as four times its height is melted and recast into a sphere. What is the surface area (in cm^2) of the sphere?

Options :

- 1. ✖ 8.82π
- 2. ✖ 5.88π
- 3. ✖ 13.23π
- 4. ✔ 17.64π

Question Number : 52 Question Id : 16794320654 Question Type : MCQ Option Shuffling : Yes Display Question Number : Yes
Single Line Question Option : No Option Orientation : Vertical

Correct Marks : 1 Wrong Marks : 0.25

एक लंब वृतीय ठोस शंकु, जिसकी ऊँचाई 2.1 सेमी और आधार का व्यास उसकी ऊँचाई के चार गुने के बराबर हैं, को पिघलाकर एक गोले के रूप में ढाला जाता है गोले का पृष्ठीय क्षेत्रफल (सेमी² में) क्या है?

Options :

1. ✖ 8.82π
2. ✖ 5.88π
3. ✖ 13.23π
4. ✔ 17.64π

Question Number : 53 Question Id : 16794320655 Question Type : MCQ Option Shuffling : Yes Display Question Number : Yes
Single Line Question Option : No Option Orientation : Vertical

Correct Marks : 1 Wrong Marks : 0.25

The area of circular park is 11 times the area of a triangular park where sides are 410 m, 280 m and 150 m. what is the perimeter of the circular park? ($\pi = \frac{22}{7}$)

Options :

1. ✖ 880 m
2. ✔ 1320 m
3. ✖ 1760 m
4. ✖ 1980 m

Question Number : 53 Question Id : 16794320655 Question Type : MCQ Option Shuffling : Yes Display Question Number : Yes
Single Line Question Option : No Option Orientation : Vertical

Correct Marks : 1 Wrong Marks : 0.25

एक वृताकार पार्क का क्षेत्रफल एक त्रिभुजाकार पार्क के क्षेत्रफल का 11 गुना है, जिसकी भुजाएँ 410 मी, 280 मी तथा 150 मी हैं वृताकार पार्क का परिमाण क्या है? (मान लीजिए $\pi = \frac{22}{7}$)

Options :

1. ✖ 880 मी
2. ✔ 1320 मी
3. ✖ 1760 मी
4. ✖ 1980 मी

Question Number : 54 Question Id : 16794320656 Question Type : MCQ Option Shuffling : Yes Display Question Number : Yes
Single Line Question Option : No Option Orientation : Vertical

Correct Marks : 1 Wrong Marks : 0.25

A certain number of persons can do a piece of work in 40 days. If there had been 45 persons more, the work could have been finished in 25 days. How many persons were employed to do the work initially?

Options :

1. ✖ 60

2. ✖ 64

3. ✔ 75

4. ✖ 80

Question Number : 54 Question Id : 16794320656 Question Type : MCQ Option Shuffling : Yes Display Question Number : Yes
Single Line Question Option : No Option Orientation : Vertical

Correct Marks : 1 Wrong Marks : 0.25

कुछ व्यक्ति मिलकर एक काम को 40 दिन में कर सकते हैं यदि 45 व्यक्ति और अधिक होते, तो काम 25 दिन में पूरा हो जाता है आरंभ में, कितने व्यक्ति काम पर लगाए गए थे?

Options :

1. ✖ 60

2. ✖ 64

3. ✔ 75

4. ✖ 80

Question Number : 55 Question Id : 16794320657 Question Type : MCQ Option Shuffling : Yes Display Question Number : Yes
Single Line Question Option : No Option Orientation : Vertical

Correct Marks : 1 Wrong Marks : 0.25

A and B together can do a piece of work in 8 days, B and C together can do it in 12 days, and A, B and C together can do it in 6 days. They started the work together. After 4 days, B left. The remaining work will be finished by A and C together in:

Options :

1. ✖ $2\frac{1}{3}$ days

2. ✔ $2\frac{2}{3}$ days

3. ✖ 3 days

4. ✖ 4 days

Question Number : 55 Question Id : 16794320657 Question Type : MCQ Option Shuffling : Yes Display Question Number : Yes
Single Line Question Option : No Option Orientation : Vertical

Correct Marks : 1 Wrong Marks : 0.25

A और B मिलकर एक काम को 8 दिन में कर सकते हैं, B और C मिलकर उसी काम को 12 दिन में पूरा कर सकते हैं और A, B तथा C मिलकर इसे 6 दिन में पूरा कर सकते हैं उन्होंने एक साथ मिलकर काम आरंभ किया 4 दिन पश्चात B काम छोड़कर चला गया A तथा C मिलकर शेष काम को कितने दिनों में पूरा करेंगे?

Options :

1. ✖ $2\frac{1}{3}$ दिन

2. ✔ $2\frac{2}{3}$ दिन

3. ✖ 3 दिन

4. ✖ 4 दिन

Question Number : 56 Question Id : 16794320658 Question Type : MCQ Option Shuffling : Yes Display Question Number : Yes
Single Line Question Option : No Option Orientation : Vertical

Correct Marks : 1 Wrong Marks : 0.25

A certain sum amounts to ₹ 12705 at 10% p.a compound interest after $2\frac{1}{2}$ years, when the interest is compounded yearly. If the same sum amounts to ₹ 14500 at the same rate is x years at simple interest then the value of x is:

Options :

1. ✔ $4\frac{1}{2}$

2. ✖ 4

3. ✖ 5

4. ✖ $5\frac{1}{2}$

Question Number : 56 Question Id : 16794320658 Question Type : MCQ Option Shuffling : Yes Display Question Number : Yes
Single Line Question Option : No Option Orientation : Vertical

Correct Marks : 1 Wrong Marks : 0.25

एक राशी चक्रवृद्धी ब्याज द्वारा 10% वार्षिक दर से $2\frac{1}{2}$ वर्ष पश्चात ₹ 12705 हो जाती है, जबकि ब्याज वार्षिक संयोजित है यदि वही राशी उसी दर से x वर्ष में साधारण ब्याज द्वारा ₹ 14500 हो जाती है, तो x का मान है:

Options :

1. ☒ $4\frac{1}{2}$

2. ☐ 4

3. ☐ 5

4. ☐ $5\frac{1}{2}$

Question Number : 57 Question Id : 16794320659 Question Type : MCQ Option Shuffling : Yes Display Question Number : Yes
Single Line Question Option : No Option Orientation : Vertical

Correct Marks : 1 Wrong Marks : 0.25

In a stream running at 2 km/h, a boat goes 10 km upstream and returns to the starting point in 55 minutes. How much time (in hours) will it take to cover a distance of 127.6 Km in still water?

Options :

1. ☐ 4.4

2. ☐ 4.8

3. ☐ 5.4

4. ☒ 5.8

Question Number : 57 Question Id : 16794320659 Question Type : MCQ Option Shuffling : Yes Display Question Number : Yes
Single Line Question Option : No Option Orientation : Vertical

Correct Marks : 1 Wrong Marks : 0.25

जब धारा की गति 2 किमी/घं है तब एक नाव को 10 किमी धारा के प्रतिकूल जाने में तथा फिर अपने आरंभिक बिंदु पर वापस आने में 55 मिनट का समय लगता है शांत जल में 127.6 किमी की दूरी तय करने के लिए नाव को कितना समय (घंटे में) लगेगा?

Options :

1. ☐ 4.4

2. ☐ 4.8

3. ☐ 5.4

4. ☒ 5.8

Question Number : 58 Question Id : 16794320660 Question Type : MCQ Option Shuffling : Yes Display Question Number : Yes
Single Line Question Option : No Option Orientation : Vertical

Correct Marks : 1 Wrong Marks : 0.25

Please A and B are 210 km apart on a highway. Two cars start simultaneously from A and B respectively. If they move in the same direction, they meet after $10\frac{1}{2}$ hours if they move towards each other, they meet after $2\frac{1}{2}$ hours. The difference between their speeds (in km/h) is:

Options :

1. ✖ 15

2. ✖ 16

3. ✔ 18

4. ✖ 20

Question Number : 58 Question Id : 16794320660 Question Type : MCQ Option Shuffling : Yes Display Question Number : Yes
Single Line Question Option : No Option Orientation : Vertical

Correct Marks : 1 Wrong Marks : 0.25

हाईवे पर A और B के बीच की दूरी 210 किमी है दो कारों A तथा B से एक साथ चलना आरंभ करती है यदि वे एक ही दिशा में चले तो वे $10\frac{1}{2}$ के पश्चात मिलती है और यदि एक दुसरे की और चलें तो $2\frac{1}{2}$ घंटे पश्चात मिलती हैं कारों की चालों में अंतर (किमी/घं में) हैं:

Options :

1. ✖ 15

2. ✖ 16

3. ✔ 18

4. ✖ 20

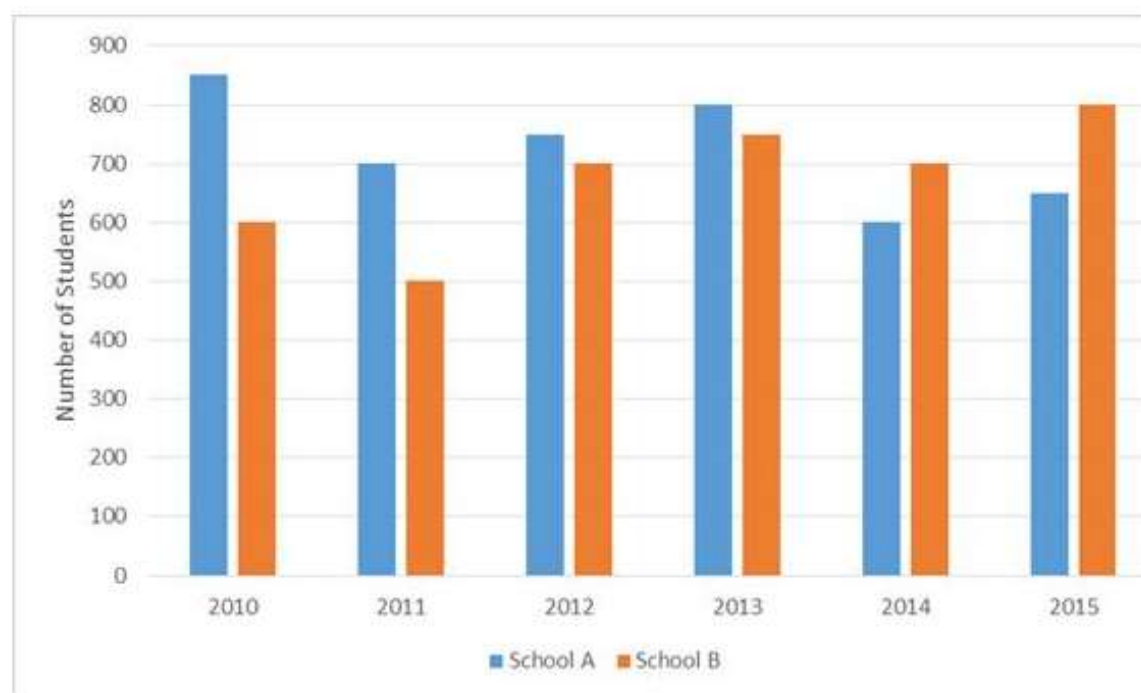
Sub-Section Number: 2
Sub-Section Id: 1679431320
Question Shuffling Allowed : Yes

Question Id : 16794320661 Question Type : COMPREHENSION Sub Question Shuffling Allowed : Yes Group Comprehension Questions : No

Question Numbers : (59 to 60)

Question Label : Comprehension

Study the following bar graph that shows the number of students from two schools who qualified in an examination in six years and the take and answer questions.



Percentage of (among who qualified)

Year	Boys (in A)	Girls (in B)
2010	48	56
2011	66	60
2012	72	45
2013	42	48
2014	57	81
2015	36	54

Sub questions

Question Number : 59 Question Id : 16794320662 Question Type : MCQ Option Shuffling : Yes Display Question Number : Yes Single Line Question Option : No Option Orientation : Vertical

Correct Marks : 1 Wrong Marks : 0.25

What is the ratio of total number of boys qualified in examination from school A in 2010, 2012 and 2014 to the total number of girls passed qualified from B in 2011 and 2013?

Options :

1. ✖ 25 : 22

2. ✖ 25 : 43

3. ✔ 43 : 22

4. ✖ 43 : 25

Question Number : 60 Question Id : 16794320663 Question Type : MCQ Option Shuffling : Yes Display Question Number : Yes
Single Line Question Option : No Option Orientation : Vertical

Correct Marks : 1 Wrong Marks : 0.25

Total number of girls qualified in the examination from school B in six years is what number of students qualified from A in six years in: (nearest to an integer)

Options :

1. ✖ 51

2. ✔ 53

3. ✖ 54

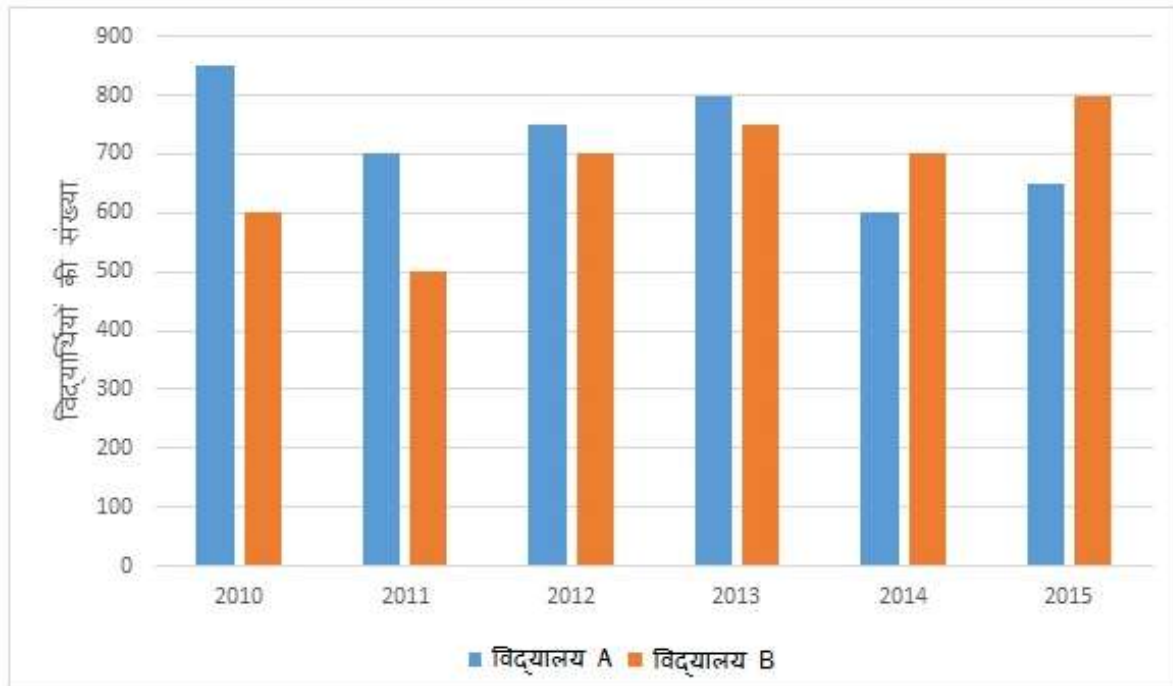
4. ✖ 61

Question Id : 16794320661 Question Type : COMPREHENSION Sub Question Shuffling Allowed : Yes Group Comprehension Questions : No

Question Numbers : (59 to 60)

Question Label : Comprehension

निम्नलिखित बार ग्राफ छ : विभिन्न वर्षों में एक परीक्षा में पास हुए दो विद्यालयों के विद्यार्थियों की संख्या को दर्शाता है ग्राफ तथा सारणी का अध्ययन कीजिए और प्रश्न के उत्तर दीजिए।



प्रतिशतता (जिन्होंने परीक्षा पास की)

वर्ष	लड़के (A में)	लड़कियां (B में)
2010	48	56
2011	66	60
2012	72	45
2013	42	48
2014	57	81
2015	36	54

Sub questions

Question Number : 59 Question Id : 16794320662 Question Type : MCQ Option Shuffling : Yes Display Question Number : Yes
Single Line Question Option : No Option Orientation : Vertical

Correct Marks : 1 Wrong Marks : 0.25

विद्यालय A से वर्ष 2010, 2012 तथा 2014 में परीक्षा में पास हुए लड़कों की कुल संख्या का विद्यालय B से 2011 तथा 2013 में पास हुए कुल लड़कियों की संख्या से अनुपात हैं:

Options :

1. ✖ 25 : 22

2. ✖ 25 : 43

3. ✔ 43 : 22

4. ✖ 43 : 25

Question Number : 60 Question Id : 16794320663 Question Type : MCQ Option Shuffling : Yes Display Question Number : Yes
Single Line Question Option : No Option Orientation : Vertical

Correct Marks : 1 Wrong Marks : 0.25

छः वर्षों में विद्यालय B से पास हुई लड़कियों की कुल संख्या छः वर्षों में विद्यालय A के पास हुए विद्यार्थियों की कुल संख्या का कितना प्रतिशत है? (एक पूर्णांक के निकटतम)

Options :

1. ✖ 51

2. ✔ 53

3. ✖ 54

4. ✖ 61

General English

Group Number :	4
Group Id :	167943797
Group Maximum Duration :	0
Group Minimum Duration :	0
Revisit allowed for view? :	No
Revisit allowed for edit? :	No
Break time:	0
Group Marks:	20
Revisit allowed for group Instructions? :	Yes
Maximum Instruction Time:	0
Minimum Instruction Time:	0

General English

Section Id :	167943862
Section Number :	1
Section type :	Online

Mandatory or Optional:	Mandatory
Number of Questions:	16
Number of Questions to be attempted:	16
Section Marks:	20
Display Number Panel:	Yes
Group All Questions:	No

Sub-Section Number:	1
Sub-Section Id:	1679431321
Question Shuffling Allowed :	Yes

Question Number : 61 Question Id : 16794320664 Question Type : MCQ Option Shuffling : Yes Display Question Number : Yes
Single Line Question Option : No Option Orientation : Vertical

Correct Marks : 1 Wrong Marks : 0.25

From the given options, choose the one that would mean the SAME as

aloof

Options :

1. ✖ amiable

2. ✖ alert

3. ✔ unfriendly

4. ✖ adjust

Question Number : 61 Question Id : 16794320664 Question Type : MCQ Option Shuffling : Yes Display Question Number : Yes
Single Line Question Option : No Option Orientation : Vertical

Correct Marks : 1 Wrong Marks : 0.25

From the given options, choose the one that would mean the SAME as

aloof

Options :

1. ✖ amiable

2. ✖ alert

3. ✔ unfriendly

4. ✖ adjust

Question Number : 62 Question Id : 16794320665 Question Type : MCQ Option Shuffling : Yes Display Question Number : Yes
Single Line Question Option : No Option Orientation : Vertical

Correct Marks : 1 Wrong Marks : 0.25

From the given options, choose the one that would mean the SAME as

candid

Options :

1. ✖ capable
2. ✖ captive
3. ✖ careful
4. ✔ frank

Question Number : 62 Question Id : 16794320665 Question Type : MCQ Option Shuffling : Yes Display Question Number : Yes
Single Line Question Option : No Option Orientation : Vertical

Correct Marks : 1 Wrong Marks : 0.25

From the given options, choose the one that would mean the SAME as

candid

Options :

1. ✖ capable
2. ✖ captive
3. ✖ careful
4. ✔ frank

Question Number : 63 Question Id : 16794320666 Question Type : MCQ Option Shuffling : Yes Display Question Number : Yes
Single Line Question Option : No Option Orientation : Vertical

Correct Marks : 1 Wrong Marks : 0.25

From the given options choose the one that means the OPPOSITE of

peace

Options :

1. ✖ pattern
2. ✔ war
3. ✖ pinnacle
4. ✖ harmony

Question Number : 63 Question Id : 16794320666 Question Type : MCQ Option Shuffling : Yes Display Question Number : Yes
Single Line Question Option : No Option Orientation : Vertical

Correct Marks : 1 Wrong Marks : 0.25

From the given options choose the one that means the OPPOSITE of

peace

Options :

1. ✖ pattern
2. ✔ war
3. ✖ pinnacle
4. ✖ harmony

Question Number : 64 Question Id : 16794320667 Question Type : MCQ Option Shuffling : Yes Display Question Number : Yes
Single Line Question Option : No Option Orientation : Vertical

Correct Marks : 1 Wrong Marks : 0.25

From the given options choose the one that means the OPPOSITE of

vigilant

Options :

1. ✔ inattentive
2. ✖ alert
3. ✖ virtuous
4. ✖ violent

Question Number : 64 Question Id : 16794320667 Question Type : MCQ Option Shuffling : Yes Display Question Number : Yes
Single Line Question Option : No Option Orientation : Vertical

Correct Marks : 1 Wrong Marks : 0.25

From the given options choose the one that means the OPPOSITE of

vigilant

Options :

1. ✔ inattentive
2. ✖ alert
3. ✖ virtuous

4. ✖ violent

Question Number : 65 Question Id : 16794320668 Question Type : MCQ Option Shuffling : Yes Display Question Number : Yes
Single Line Question Option : No Option Orientation : Vertical

Correct Marks : 1 Wrong Marks : 0.25

Choose the incorrectly spelt word from the given options.

Options :

1. ✖ emigrate

2. ✖ immigrate

3. ✖ immature

4. ✔ ignishun

Question Number : 65 Question Id : 16794320668 Question Type : MCQ Option Shuffling : Yes Display Question Number : Yes
Single Line Question Option : No Option Orientation : Vertical

Correct Marks : 1 Wrong Marks : 0.25

Choose the incorrectly spelt word from the given options.

Options :

1. ✖ emigrate

2. ✖ immigrate

3. ✖ immature

4. ✔ ignishun

Question Number : 66 Question Id : 16794320669 Question Type : MCQ Option Shuffling : Yes Display Question Number : Yes
Single Line Question Option : No Option Orientation : Vertical

Correct Marks : 1 Wrong Marks : 0.25

Given below is an incorrect sentence. From the given options, select the part that has an error.

In rush hours, traffic in New Delhi moves by a snail's pace.

Options :

1. ✖ In rush hours

2. ✖ traffic

3. ✖ moves

4. ✓ by a snail's pace.

Question Number : 66 Question Id : 16794320669 Question Type : MCQ Option Shuffling : Yes Display Question Number : Yes
Single Line Question Option : No Option Orientation : Vertical

Correct Marks : 1 Wrong Marks : 0.25

Given below is an incorrect sentence. From the given options, select the part that has an error.

In rush hours, traffic in New Delhi moves by a snail's pace.

Options :

1. ✗ In rush hours

2. ✗ traffic

3. ✗ moves

4. ✓ by a snail's pace.

Question Number : 67 Question Id : 16794320670 Question Type : MCQ Option Shuffling : Yes Display Question Number : Yes
Single Line Question Option : No Option Orientation : Vertical

Correct Marks : 1 Wrong Marks : 0.25

Given below is an incorrect sentence. From the given options, select the part that has an error.

I am having a very powerful telescope to watch the distant stars.

Options :

1. ✓ am having

2. ✗ powerful

3. ✗ to watch

4. ✗ distant stars.

Question Number : 67 Question Id : 16794320670 Question Type : MCQ Option Shuffling : Yes Display Question Number : Yes
Single Line Question Option : No Option Orientation : Vertical

Correct Marks : 1 Wrong Marks : 0.25

Given below is an incorrect sentence. From the given options, select the part that has an error.

I am having a very powerful telescope to watch the distant stars.

Options :

1. ✓ am having

2. ✖ powerful

3. ✖ to watch

4. ✖ distant stars.

Question Number : 68 Question Id : 16794320671 Question Type : MCQ Option Shuffling : Yes Display Question Number : Yes
Single Line Question Option : No Option Orientation : Vertical

Correct Marks : 1 Wrong Marks : 0.25

From the given options, select the one that represents the appropriate meaning of the underlined expression in the sentence given below.

It is very difficult to enjoy the silly serials served up by different T.V. channels day in and day out.

Options :

1. ✖ given to people at the beginning of a meal

2. ✔ entertainment presented to people

3. ✖ perform official duties

4. ✖ to throw up the ball or shuttlecock in tennis or badminton

Question Number : 68 Question Id : 16794320671 Question Type : MCQ Option Shuffling : Yes Display Question Number : Yes
Single Line Question Option : No Option Orientation : Vertical

Correct Marks : 1 Wrong Marks : 0.25

From the given options, select the one that represents the appropriate meaning of the underlined expression in the sentence given below.

It is very difficult to enjoy the silly serials served up by different T.V. channels day in and day out.

Options :

1. ✖ given to people at the beginning of a meal

2. ✔ entertainment presented to people

3. ✖ perform official duties

4. ✖ to throw up the ball or shuttlecock in tennis or badminton

Question Number : 69 Question Id : 16794320672 Question Type : MCQ Option Shuffling : Yes Display Question Number : Yes
Single Line Question Option : No Option Orientation : Vertical

Correct Marks : 1 Wrong Marks : 0.25

From the given options, select the word that can substitute the words given below.

the rearing of silkworms for production of silk

Options :

1. ✖ horticulture
2. ✖ pisciculture
3. ✔ sericulture
4. ✖ apiculture

Question Number : 69 Question Id : 16794320672 Question Type : MCQ Option Shuffling : Yes Display Question Number : Yes
Single Line Question Option : No Option Orientation : Vertical

Correct Marks : 1 Wrong Marks : 0.25

From the given options, select the word that can substitute the words given below.

the rearing of silkworms for production of silk

Options :

1. ✖ horticulture
2. ✖ pisciculture
3. ✔ sericulture
4. ✖ apiculture

Question Number : 70 Question Id : 16794320673 Question Type : MCQ Option Shuffling : Yes Display Question Number : Yes
Single Line Question Option : No Option Orientation : Vertical

Correct Marks : 1 Wrong Marks : 0.25

Fill in the blank in the sentence given below with the correct option.

Are the children old enough to look after_____?

Options :

1. ✖ himself
2. ✔ themselves
3. ✖ ourselves
4. ✖ myself

Question Number : 70 Question Id : 16794320673 Question Type : MCQ Option Shuffling : Yes Display Question Number : Yes
Single Line Question Option : No Option Orientation : Vertical

Correct Marks : 1 Wrong Marks : 0.25

Fill in the blank in the sentence given below with the correct option.

Are the children old enough to look after _____?

Options :

1. ✖ himself
2. ✔ themselves
3. ✖ ourselves
4. ✖ myself

Question Number : 71 Question Id : 16794320674 Question Type : MCQ Option Shuffling : Yes Display Question Number : Yes
Single Line Question Option : No Option Orientation : Vertical

Correct Marks : 1 Wrong Marks : 0.25

Fill in the blank in the sentence given below with the correct option.

My friends were completely exhausted. They _____ the whole day exploring the forest trail.

Options :

1. ✔ had been walking
2. ✖ are walking
3. ✖ will walk
4. ✖ are going to walk

Question Number : 71 Question Id : 16794320674 Question Type : MCQ Option Shuffling : Yes Display Question Number : Yes
Single Line Question Option : No Option Orientation : Vertical

Correct Marks : 1 Wrong Marks : 0.25

Fill in the blank in the sentence given below with the correct option.

My friends were completely exhausted. They _____ the whole day exploring the forest trail.

Options :

1. ✔ had been walking
2. ✖ are walking

3. ✖ will walk

4. ✖ are going to walk

Question Number : 72 Question Id : 16794320675 Question Type : MCQ Option Shuffling : Yes Display Question Number : Yes
Single Line Question Option : No Option Orientation : Vertical

Correct Marks : 1 Wrong Marks : 0.25

Fill in the blank in the sentence given below with the correct option.

A: Can you lend me _____ money?

B: Sorry, I don't have _____.

Options :

1. ✖ the ; that

2. ✔ some ; any

3. ✖ any ; some

4. ✖ this ; that

Question Number : 72 Question Id : 16794320675 Question Type : MCQ Option Shuffling : Yes Display Question Number : Yes
Single Line Question Option : No Option Orientation : Vertical

Correct Marks : 1 Wrong Marks : 0.25

Fill in the blank in the sentence given below with the correct option.

A: Can you lend me _____ money?

B: Sorry, I don't have _____.

Options :

1. ✖ the ; that

2. ✔ some ; any

3. ✖ any ; some

4. ✖ this ; that

Question Number : 73 Question Id : 16794320676 Question Type : MCQ Option Shuffling : Yes Display Question Number : Yes
Single Line Question Option : No Option Orientation : Vertical

Correct Marks : 1 Wrong Marks : 0.25

Combine the given sentences into a single meaningful sentence.

Children grow up very fast. You suddenly find the house silent and empty. The children are gone to some faraway place either to study or to work. It is the most depressing situation.

Options :

1.

Nothing can be more depressing than a silent and empty house with children grown up and gone to some faraway place either to study or to work.

2.

Children grow up very fast to go away to study and work in some faraway place thus emptying and silencing the house.

3.

Children grow up very fast to leave a depressed, silent and empty house and study or work in some faraway place.

4.

It is the most depressing situation because children grow up very fast and study or work faraway and the house is silent and empty.

Question Number : 73 Question Id : 16794320676 Question Type : MCQ Option Shuffling : Yes Display Question Number : Yes
Single Line Question Option : No Option Orientation : Vertical

Correct Marks : 1 Wrong Marks : 0.25

Combine the given sentences into a single meaningful sentence.

Children grow up very fast. You suddenly find the house silent and empty. The children are gone to some faraway place either to study or to work. It is the most depressing situation.

Options :

1.

Nothing can be more depressing than a silent and empty house with children grown up and gone to some faraway place either to study or to work.

2.

Children grow up very fast to go away to study and work in some faraway place thus emptying and silencing the house.

3.

Children grow up very fast to leave a depressed, silent and empty house and study or work in some faraway place.

4.

It is the most depressing situation because children grow up very fast and study or work faraway and the house is silent and empty.

Question Number : 74 Question Id : 16794320677 Question Type : MCQ Option Shuffling : Yes Display Question Number : Yes
Single Line Question Option : No Option Orientation : Vertical

Correct Marks : 1 Wrong Marks : 0.25

Select the option that represents the correct passive voice form to fill in the blank in the sentence given below.

The enemy forces _____ by our army.

Options :

1. successfully repelled

2. have been successfully repelled

3. repelled

4. ✖ have repelled

Question Number : 74 Question Id : 16794320677 Question Type : MCQ Option Shuffling : Yes Display Question Number : Yes
Single Line Question Option : No Option Orientation : Vertical

Correct Marks : 1 Wrong Marks : 0.25

Select the option that represents the correct passive voice form to fill in the blank in the sentence given below.

The enemy forces _____ by our army.

Options :

1. ✖ successfully repelled

2. ✔ have been successfully repelled

3. ✖ repelled

4. ✖ have repelled

Question Number : 75 Question Id : 16794320678 Question Type : MCQ Option Shuffling : Yes Display Question Number : Yes
Single Line Question Option : No Option Orientation : Vertical

Correct Marks : 1 Wrong Marks : 0.25

Select the indirect form of narration of the given sentence.

Ira said to me, "I am feeling feverish. I may not be able to go to the market with you tomorrow."

Options :

1. ✖

I told Ira that she was feverish. I further added that she cannot go to the market with me the next day.

2. ✖ Ira advised me not to go to the market with her as I was feverish.

3. ✔

Ira informed me that she was feeling feverish. She further added that she might not be able to go to the market with me the next day.

4. ✖ Ira stated that it was advisable not to go to the market tomorrow as both of us were feverish.

Question Number : 75 Question Id : 16794320678 Question Type : MCQ Option Shuffling : Yes Display Question Number : Yes
Single Line Question Option : No Option Orientation : Vertical

Correct Marks : 1 Wrong Marks : 0.25

Select the indirect form of narration of the given sentence.

Ira said to me, "I am feeling feverish. I may not be able to go to the market with you tomorrow."

Options :

1. ✖

I told Ira that she was feverish. I further added that she cannot go to the market with me the next day.

2. ✖ Ira advised me not to go to the market with her as I was feverish.

3. ✔

Ira informed me that she was feeling feverish. She further added that she might not be able to go to the market with me the next day.

4. ✖ Ira stated that it was advisable not to go to the market tomorrow as both of us were feverish.

Sub-Section Number:	2
Sub-Section Id:	1679431322
Question Shuffling Allowed :	Yes

Question Id : 16794320679 Question Type : COMPREHENSION Sub Question Shuffling Allowed : Yes Group Comprehension Questions : No

Question Numbers : (76 to 80)

Question Label : Comprehension

Read the following passage and answer the questions given after it.

Insomnia affects a lot of people, but sleeping pills aren't the only – or the best—answer. A good sleep routine, exercise and mindfulness are all options to get the restorative sleep you need.

Set up a daily sleep pattern by going to bed at the same time each night and waking up at the same time each morning. Yes, even on weekends.

Keep your bedroom peaceful, dark and on the cool side. Take out all electronics, and stop using them at least one hour before you turn in.

They emit a type of light that interferes with your natural body rhythms, prompting you to stay alert when you should be winding down.

Exercising vigorously in the morning leads to better sleep at night. But if your only free time is later in the day, such workouts don't seem to interfere with sleep as previously thought. Stubborn sleeplessness may respond to mindfulness meditation, which can focus specifically on insomnia or stress reduction.

According to research, working with a therapist and practicing meditation at home for 30 to 45 minutes nearly every day helps people get better sleep. By working with trained therapist, you'll learn how to change the negative thoughts that could be at the root of your sleep problem.

Getting a stipulated amount of sleep each day is crucial for a healthy life.

Sub questions

Question Number : 76 Question Id : 16794320680 Question Type : MCQ Option Shuffling : Yes Display Question Number : Yes
Single Line Question Option : No Option Orientation : Vertical

Correct Marks : 1 Wrong Marks : 0.25

Identify one word for the words given below:

inability / difficulty to sleep

Options :

1. ✖ anaemia
2. ✖ bulimia
3. ✖ claustrophobia
4. ✔ insomnia

Question Number : 77 Question Id : 16794320681 Question Type : MCQ Option Shuffling : Yes Display Question Number : Yes
Single Line Question Option : No Option Orientation : Vertical

Correct Marks : 1 Wrong Marks : 0.25

Choose the correct option to answer the question
given below.

What, according to the writer, do many people
usually do when they cannot sleep?

Options :

1. ✖ listen to music
2. ✖ read books of their choice
3. ✔ take sleeping pills
4. ✖ talk to friends on the phone

Question Number : 78 Question Id : 16794320682 Question Type : MCQ Option Shuffling : Yes Display Question Number : Yes
Single Line Question Option : No Option Orientation : Vertical




Correct Marks : 1 Wrong Marks : 0.25

Choose the correct option to answer the question
given below.

Why, according to the writer, should people not take
electronic items with them when they go to sleep?

Options :

- People should not use electronic items in dark and
cool rooms because that affects the brain/eyes.
1. ✖





2.  Electronic items emit harmful light that interfere with body rhythms and make people more alert instead of relaxed and wanting to rest.
3.  Electronic items are a big distraction and do not allow people to concentrate or focus on the work at hand.
4.  Electronic items are addictive and once engaged in them people lose track of time.

Question Number : 79 Question Id : 16794320683 Question Type : MCQ Option Shuffling : Yes Display Question Number : Yes
Single Line Question Option : No Option Orientation : Vertical
Correct Marks : 1 Wrong Marks : 0.25

Choose the INCORRECT option.

How can therapists help people to get the required amount of sleep?
They can help us by

Options :

1.  teaching techniques of mindfulness meditation
2.  making us aware of negative thought patterns
3.  teaching stress /anxiety reduction processes
4.  meditating for 35 to 40 minutes on our behalf.

Question Number : 80 Question Id : 16794320684 Question Type : MCQ Option Shuffling : Yes Display Question Number : Yes
Single Line Question Option : No Option Orientation : Vertical
Correct Marks : 1 Wrong Marks : 0.25

What, according to the writer, is sound advice for a sound sleep? Identify the INCORRECT statements.

1. Go to sleep everyday at the same time.
2. Sleep in a quiet, dark and cool room.
3. Sleep whenever you feel like.
4. Stop using electronic gadgets one hour prior to sleeping time.
5. Exercise everyday either in the morning or later.
6. Do not fuss about noise, lights or people in the room.
7. Practise mindfulness meditation.
8. Use anxiety/ stress reduction techniques, if someone is prone to be anxious or unnecessarily stressed.
9. Get rid of positive thoughts.
10. Take help of a therapist in case of chronic sleeplessness.

Options :

1. ✓ Statements 3, 6, 9
2. ✗ Statements 1, 3 and 10
3. ✗ Statements 5, 6 and 7
4. ✗ Statements 9 and 10

Question Id : 16794320679 Question Type : COMPREHENSION Sub Question Shuffling Allowed : Yes Group Comprehension Questions : No

Question Numbers : (76 to 80)

Question Label : Comprehension

Read the following passage and answer the questions given after it.

Insomnia affects a lot of people, but sleeping pills aren't the only – or the best—answer. A good sleep routine, exercise and mindfulness are all options to get the restorative sleep you need.

Set up a daily sleep pattern by going to bed at the same time each night and waking up at the same time each morning. Yes, even on weekends.

Keep your bedroom peaceful, dark and on the cool side. Take out all electronics, and stop using them at least one hour before you turn in.

They emit a type of light that interferes with your natural body rhythms, prompting you to stay alert when you should be winding down.

Exercising vigorously in the morning leads to better sleep at night. But if your only free time is later in the day, such workouts don't seem to interfere with sleep as previously thought. Stubborn sleeplessness may respond to mindfulness meditation, which can focus specifically on insomnia or stress reduction.

According to research, working with a therapist and practicing meditation at home for 30 to 45 minutes nearly every day helps people get better sleep. By working with trained therapist, you'll learn how to change the negative thoughts that could be at the root of your sleep problem.

Getting a stipulated amount of sleep each day is crucial for a healthy life.

Sub questions

Question Number : 76 Question Id : 16794320680 Question Type : MCQ Option Shuffling : Yes Display Question Number : Yes
Single Line Question Option : No Option Orientation : Vertical

Correct Marks : 1 Wrong Marks : 0.25

Identify one word for the words given below:

inability / difficulty to sleep

Options :

1. ❌ anaemia

2. ❌ bulimia

3. ❌ claustrophobia

4. ✅ insomnia

Question Number : 77 Question Id : 16794320681 Question Type : MCQ Option Shuffling : Yes Display Question Number : Yes
Single Line Question Option : No Option Orientation : Vertical

Correct Marks : 1 Wrong Marks : 0.25

Choose the correct option to answer the question given below.

What, according to the writer, do many people usually do when they cannot sleep?

Options :

1. ✖ listen to music
2. ✖ read books of their choice
3. ✔ take sleeping pills
4. ✖ talk to friends on the phone

Question Number : 78 Question Id : 16794320682 Question Type : MCQ Option Shuffling : Yes Display Question Number : Yes
Single Line Question Option : No Option Orientation : Vertical

Correct Marks : 1 Wrong Marks : 0.25

Choose the correct option to answer the question given below.

Why, according to the writer, should people not take electronic items with them when they go to sleep?

Options :

1. ✖ People should not use electronic items in dark and cool rooms because that affects the brain/eyes.
2. ✔ Electronic items emit harmful light that interfere with body rhythms and make people more alert instead of relaxed and wanting to rest.
3. ✖ Electronic items are a big distraction and do not allow people to concentrate or focus on the work at hand.
4. ✖ Electronic items are addictive and once engaged in them people lose track of time.

Question Number : 79 Question Id : 16794320683 Question Type : MCQ Option Shuffling : Yes Display Question Number : Yes
Single Line Question Option : No Option Orientation : Vertical

Correct Marks : 1 Wrong Marks : 0.25

Choose the INCORRECT option.

How can therapists help people to get the required amount of sleep?

They can help us by

Options :

1. ✖ teaching techniques of mindfulness meditation
2. ✖ making us aware of negative thought patterns
3. ✖ teaching stress /anxiety reduction processes
4. ✔ meditating for 35 to 40 minutes on our behalf.

Question Number : 80 Question Id : 16794320684 Question Type : MCQ Option Shuffling : Yes Display Question Number : Yes
Single Line Question Option : No Option Orientation : Vertical

Correct Marks : 1 Wrong Marks : 0.25

What, according to the writer, is sound advice for a sound sleep? Identify the INCORRECT statements.

1. Go to sleep everyday at the same time.
2. Sleep in a quiet, dark and cool room.
3. Sleep whenever you feel like.
4. Stop using electronic gadgets one hour prior to sleeping time.
5. Exercise everyday either in the morning or later.
6. Do not fuss about noise, lights or people in the room.
7. Practise mindfulness meditation.
8. Use anxiety/ stress reduction techniques, if someone is prone to be anxious or unnecessarily stressed.
9. Get rid of positive thoughts.
10. Take help of a therapist in case of chronic sleeplessness.

Options :

1. ✔ Statements 3, 6, 9
2. ✖ Statements 1, 3 and 10

3. ✖ Statements 5, 6 and 7

4. ✖ Statements 9 and 10

General Hindi

Group Number :	5
Group Id :	167943798
Group Maximum Duration :	0
Group Minimum Duration :	0
Revisit allowed for view? :	No
Revisit allowed for edit? :	No
Break time:	0
Group Marks:	20
Revisit allowed for group Instructions? :	Yes
Maximum Instruction Time:	0
Minimum Instruction Time:	0

General Hindi

Section Id :	167943863
Section Number :	1
Section type :	Online
Mandatory or Optional:	Mandatory
Number of Questions:	16
Number of Questions to be attempted:	16
Section Marks:	20
Display Number Panel:	Yes
Group All Questions:	No

Sub-Section Number:	1
Sub-Section Id:	1679431323
Question Shuffling Allowed :	Yes

Question Id : 16794320685 Question Type : COMPREHENSION Sub Question Shuffling Allowed : Yes Group Comprehension Questions : No

Question Numbers : (81 to 85)

Question Label : Comprehension

नीचे दिये गए गद्यांश को पढ़कर पूछे गये प्रश्नों के उत्तर दीजिए।

छायावाद का उल्लेख 1920 ई के आसपास मिलने लगता है। शुक्ल जी इसे रवीन्द्रनाथ ठाकुर की कविताओं के प्रभाव से आया हुआ मानकर इसका संबंध ईसाई संतों के फैंटेसमाटा (छायाभास) शब्द से जोड़ते थे। उन्होंने छायावाद को चित्र-भाषा शैली भी कहा। पं नंददुलारे वाजपेयी ने इसका संबंध युग-बोध से जोड़ते हुए भी इसे व्यक्त सौंदर्य में आध्यात्मिक छाया का भान कहा। डॉ नगेंद्र ने छायावाद को 'स्थूल के विरुद्ध सूक्ष्म का विद्रोह' माना। डॉ नामवर सिंह ने अपनी पुस्तक 'छायावाद' में विश्वसनीय तौर पर दिखाया कि छायावाद वस्तुतः कई काव्य प्रवृत्तियों का सामूहिक नाम है और वह 'उस राष्ट्रीय जागरण की काव्यात्मक अभिव्यक्ति है जो एक ओर पुरानी रूढ़ियों से मुक्ति पाना चाहता था और दूसरी ओर विदेशी पराधीनता से'।

Sub questions

Question Number : 81 Question Id : 16794320686 Question Type : MCQ Option Shuffling : Yes Display Question Number : Yes
Single Line Question Option : No Option Orientation : Vertical

Correct Marks : 1 Wrong Marks : 0.25

छायावाद का उल्लेख कब मिलने लगता है?

Options :

1. ✖ 1915

2. ✔ 1920

3. ✖ 1925

4. ✖ 1930

Question Number : 82 Question Id : 16794320687 Question Type : MCQ Option Shuffling : Yes Display Question Number : Yes
Single Line Question Option : No Option Orientation : Vertical

Correct Marks : 1 Wrong Marks : 0.25

छायावाद को चित्र-भाषा शैली किसने कहा?

Options :

1. ✔ रामचन्द्र शुक्ल

2. ✖ नन्ददुलारे वाजपेयी

3. ✖ डॉ. नगेंद्र

4. ✖ डॉ. नामवर सिंह

Question Number : 83 Question Id : 16794320688 Question Type : MCQ Option Shuffling : Yes Display Question Number : Yes
Single Line Question Option : No Option Orientation : Vertical

Correct Marks : 1 Wrong Marks : 0.25

‘आध्यात्मिक छाया का भान’ अवधारणा का सम्बद्ध किससे है?

Options :

1. ✖ रामचन्द्र शुक्ल

2. ✖ डॉ. नगेंद्र

3. ✔ नन्ददुलारे वाजपेयी

4. ✖ डॉ. नामवर सिंह

Question Number : 84 Question Id : 16794320689 Question Type : MCQ Option Shuffling : Yes Display Question Number : Yes
Single Line Question Option : No Option Orientation : Vertical

Correct Marks : 1 Wrong Marks : 0.25

छायावाद को ‘स्थूल के प्रति सूक्ष्म का विद्रोह’ किसने माना?

Options :

1. ✖ रामचन्द्र शुक्ल

2. ✖ नन्ददुलारे वाजपेयी

3. ✖ डॉ. नामवर सिंह

4. ✔ डॉ. नगेंद्र

Question Number : 85 Question Id : 16794320690 Question Type : MCQ Option Shuffling : Yes Display Question Number : Yes
Single Line Question Option : No Option Orientation : Vertical

Correct Marks : 1 Wrong Marks : 0.25

गद्यांश में उल्लिखित ‘छायावाद’ पुस्तक के लेखक हैं:

Options :

1. ✖ डॉ. नगेंद्र
2. ✔ डॉ. नामवर सिंह
3. ✖ नन्ददुलारे वाजपेयी
4. ✖ रामचन्द्र शुक्ल

Question Id : 16794320685 Question Type : COMPREHENSION Sub Question Shuffling Allowed : Yes Group Comprehension Questions : No

Question Numbers : (81 to 85)

Question Label : Comprehension

नीचे दिये गए गद्यांश को पढ़कर पूछे गये प्रश्नों के उत्तर दीजिए।

छायावाद का उल्लेख 1920 ई के आसपास मिलने लगता है। शुक्ल जी इसे रवीन्द्रनाथ ठाकुर की कविताओं के प्रभाव से आया हुआ मानकर इसका संबंध ईसाई संतों के फैटैसमाटा (छायाभास) शब्द से जोड़ते थे। उन्होंने छायावाद को चित्र-भाषा शैली भी कहा। पं नंददुलारे वाजपेयी ने इसका संबंध युग-बोध से जोड़ते हुए भी इसे व्यक्त सौंदर्य में आध्यात्मिक छाया का भान कहा। डॉ नगेंद्र ने छायावाद को 'स्थूल के विरुद्ध सूक्ष्म का विद्रोह' माना। डॉ नामवर सिंह ने अपनी पुस्तक 'छायावाद' में विश्वसनीय तौर पर दिखाया कि छायावाद वस्तुतः कई काव्य प्रवृत्तियों का सामूहिक नाम है और वह 'उस राष्ट्रीय जागरण की काव्यात्मक अभिव्यक्ति है जो एक ओर पुरानी रूढ़ियों से मुक्ति पाना चाहता था और दूसरी ओर विदेशी पराधीनता से'।

Sub questions

Question Number : 81 Question Id : 16794320686 Question Type : MCQ Option Shuffling : Yes Display Question Number : Yes Single Line Question Option : No Option Orientation : Vertical

Correct Marks : 1 Wrong Marks : 0.25

छायावाद का उल्लेख कब मिलने लगता है?

Options :

1. ✖ 1915
2. ✔ 1920

3. ✖ 1925

4. ✖ 1930

Question Number : 82 Question Id : 16794320687 Question Type : MCQ Option Shuffling : Yes Display Question Number : Yes
Single Line Question Option : No Option Orientation : Vertical

Correct Marks : 1 Wrong Marks : 0.25

छायावाद को चित्र-भाषा शैली किसने कहा?

Options :

1. ✔ रामचन्द्र शुक्ल

2. ✖ नन्ददुलारे वाजपेयी

3. ✖ डॉ. नगेंद्र

4. ✖ डॉ. नामवर सिंह

Question Number : 83 Question Id : 16794320688 Question Type : MCQ Option Shuffling : Yes Display Question Number : Yes
Single Line Question Option : No Option Orientation : Vertical

Correct Marks : 1 Wrong Marks : 0.25

‘आध्यात्मिक छाया का भान’ अवधारणा का सम्बद्ध किससे है?

Options :

1. ✖ रामचन्द्र शुक्ल

2. ✖ डॉ. नगेंद्र

3. ✔ नन्ददुलारे वाजपेयी

4. ✖ डॉ. नामवर सिंह

Question Number : 84 Question Id : 16794320689 Question Type : MCQ Option Shuffling : Yes Display Question Number : Yes
Single Line Question Option : No Option Orientation : Vertical

Correct Marks : 1 Wrong Marks : 0.25

छायावाद को ‘स्थूल के प्रति सूक्ष्म का विद्रोह’ किसने माना?

Options :

1. ✖ रामचन्द्र शुक्ल

2. ✖ नन्ददुलारे वाजपेयी

3. ✖ डॉ. नामवर सिंह

4. ✔ डॉ. नगेंद्र

Question Number : 85 Question Id : 16794320690 Question Type : MCQ Option Shuffling : Yes Display Question Number : Yes
Single Line Question Option : No Option Orientation : Vertical

Correct Marks : 1 Wrong Marks : 0.25

गद्यांश में उल्लिखित 'छायावाद' पुस्तक के लेखक हैं:

Options :

1. ✖ डॉ. नगेंद्र

2. ✔ डॉ. नामवर सिंह

3. ✖ नन्ददुलारे वाजपेयी

4. ✖ रामचन्द्र शुक्ल

Sub-Section Number: 2
Sub-Section Id: 1679431324
Question Shuffling Allowed : Yes

Question Number : 86 Question Id : 16794320691 Question Type : MCQ Option Shuffling : Yes Display Question Number : Yes
Single Line Question Option : No Option Orientation : Vertical

Correct Marks : 1 Wrong Marks : 0.25

निम्न में कौन सा शब्द तत्सम है?

Options :

1. ✔ मार्ग

2. ✖ माखन

3. ✖ माँ

4. ✖ माई

Question Number : 86 Question Id : 16794320691 Question Type : MCQ Option Shuffling : Yes Display Question Number : Yes
Single Line Question Option : No Option Orientation : Vertical

Correct Marks : 1 Wrong Marks : 0.25

निम्न में कौन सा शब्द तत्सम है?

Options :

1. ☒ मार्ग
2. ☐ माखन
3. ☐ माँ
4. ☐ माई

Question Number : 87 Question Id : 16794320692 Question Type : MCQ Option Shuffling : Yes Display Question Number : Yes
Single Line Question Option : No Option Orientation : Vertical
Correct Marks : 1 Wrong Marks : 0.25

निम्न में तद्भव शब्द कौन सा है?

Options :

1. ☐ वंश
2. ☐ बंधन
3. ☐ बाहु
4. ☒ बहू

Question Number : 87 Question Id : 16794320692 Question Type : MCQ Option Shuffling : Yes Display Question Number : Yes
Single Line Question Option : No Option Orientation : Vertical
Correct Marks : 1 Wrong Marks : 0.25

निम्न में तद्भव शब्द कौन सा है?

Options :

1. ☐ वंश
2. ☐ बंधन
3. ☐ बाहु
4. ☒ बहू

Question Number : 88 Question Id : 16794320693 Question Type : MCQ Option Shuffling : Yes Display Question Number : Yes
Single Line Question Option : No Option Orientation : Vertical
Correct Marks : 1 Wrong Marks : 0.25

निम्न में जातिवाचक संज्ञा कौन सी है?

Options :

1. ✖ दिवाली
2. ✖ सोमवार
3. ✔ मकान
4. ✖ चतुराई

Question Number : 88 Question Id : 16794320693 Question Type : MCQ Option Shuffling : Yes Display Question Number : Yes
Single Line Question Option : No Option Orientation : Vertical

Correct Marks : 1 Wrong Marks : 0.25

निम्न में जातिवाचक संज्ञा कौन सी है?

Options :

1. ✖ दिवाली
2. ✖ सोमवार
3. ✔ मकान
4. ✖ चतुराई

Question Number : 89 Question Id : 16794320694 Question Type : MCQ Option Shuffling : Yes Display Question Number : Yes
Single Line Question Option : No Option Orientation : Vertical

Correct Marks : 1 Wrong Marks : 0.25

अनिश्चयवाचक सर्वनाम है:

Options :

1. ✖ आप
2. ✖ वह
3. ✖ हम
4. ✔ कोई

Question Number : 89 Question Id : 16794320694 Question Type : MCQ Option Shuffling : Yes Display Question Number : Yes
Single Line Question Option : No Option Orientation : Vertical

Correct Marks : 1 Wrong Marks : 0.25

अनिश्चयवाचक सर्वनाम है:

Options :

1. ✖ आप

2. ✖ वह

3. ✖ हम

4. ✔ कोई

Question Number : 90 Question Id : 16794320695 Question Type : MCQ Option Shuffling : Yes Display Question Number : Yes
Single Line Question Option : No Option Orientation : Vertical

Correct Marks : 1 Wrong Marks : 0.25

निम्न में कौन सा शब्द अव्यय है?

Options :

1. ✖ ऊपरी

2. ✔ बल्कि

3. ✖ सुनहरा

4. ✖ सूखा

Question Number : 90 Question Id : 16794320695 Question Type : MCQ Option Shuffling : Yes Display Question Number : Yes
Single Line Question Option : No Option Orientation : Vertical

Correct Marks : 1 Wrong Marks : 0.25

निम्न में कौन सा शब्द अव्यय है?

Options :

1. ✖ ऊपरी

2. ✔ बल्कि

3. ✖ सुनहरा

4. ✖ सूखा

Question Number : 91 Question Id : 16794320696 Question Type : MCQ Option Shuffling : Yes Display Question Number : Yes
Single Line Question Option : No Option Orientation : Vertical

Correct Marks : 1 Wrong Marks : 0.25

‘भास्कर’ का संधि विच्छेद होगा:

Options :

1. ✖ भा + कर
2. ✖ भास् + कर
3. ✔ भाः + कर
4. ✖ भा + स्कर

Question Number : 91 Question Id : 16794320696 Question Type : MCQ Option Shuffling : Yes Display Question Number : Yes
Single Line Question Option : No Option Orientation : Vertical

Correct Marks : 1 Wrong Marks : 0.25

‘भास्कर’ का संधि विच्छेद होगा:

Options :

1. ✖ भा + कर
2. ✖ भास् + कर
3. ✔ भाः + कर
4. ✖ भा + स्कर

Question Number : 92 Question Id : 16794320697 Question Type : MCQ Option Shuffling : Yes Display Question Number : Yes
Single Line Question Option : No Option Orientation : Vertical

Correct Marks : 1 Wrong Marks : 0.25

‘रातोंरात’ में समास है:

Options :

1. ✔ अव्ययीभाव
2. ✖ तत्पुरुष
3. ✖ द्वन्द्व
4. ✖ द्विगु

Question Number : 92 Question Id : 16794320697 Question Type : MCQ Option Shuffling : Yes Display Question Number : Yes
Single Line Question Option : No Option Orientation : Vertical

Correct Marks : 1 Wrong Marks : 0.25

‘रातोंरात’ में समास है:

Options :

1. ✓ अव्ययीभाव

2. ✗ तत्पुरुष

3. ✗ द्वंद्व

4. ✗ द्विगु

Question Number : 93 Question Id : 16794320698 Question Type : MCQ Option Shuffling : Yes Display Question Number : Yes
Single Line Question Option : No Option Orientation : Vertical

Correct Marks : 1 Wrong Marks : 0.25

निम्न में कौन सा शब्द स्त्रीलिंग है?

Options :

1. ✗ आहार

2. ✗ आशीर्वाद

3. ✓ उम

4. ✗ आकाश

Question Number : 93 Question Id : 16794320698 Question Type : MCQ Option Shuffling : Yes Display Question Number : Yes
Single Line Question Option : No Option Orientation : Vertical

Correct Marks : 1 Wrong Marks : 0.25

निम्न में कौन सा शब्द स्त्रीलिंग है?

Options :

1. ✗ आहार

2. ✗ आशीर्वाद

3. ✓ उम

4. ✗ आकाश

Question Number : 94 Question Id : 16794320699 Question Type : MCQ Option Shuffling : Yes Display Question Number : Yes
Single Line Question Option : No Option Orientation : Vertical

Correct Marks : 1 Wrong Marks : 0.25

‘अवलोकन’ में उपसर्ग है:

Options :

1. ✖ अ
2. ✔ अव
3. ✖ लोकन
4. ✖ कन

Question Number : 94 Question Id : 16794320699 Question Type : MCQ Option Shuffling : Yes Display Question Number : Yes
Single Line Question Option : No Option Orientation : Vertical

Correct Marks : 1 Wrong Marks : 0.25

‘अवलोकन’ में उपसर्ग है:

Options :

1. ✖ अ
2. ✔ अव
3. ✖ लोकन
4. ✖ कन

Question Number : 95 Question Id : 16794320700 Question Type : MCQ Option Shuffling : Yes Display Question Number : Yes
Single Line Question Option : No Option Orientation : Vertical

Correct Marks : 1 Wrong Marks : 0.25

‘पक्षी’ में प्रत्यय है:

Options :

1. ✖ प
2. ✖ क्षी
3. ✖ इ
4. ✔ ई

Question Number : 95 Question Id : 16794320700 Question Type : MCQ Option Shuffling : Yes Display Question Number : Yes
Single Line Question Option : No Option Orientation : Vertical

Correct Marks : 1 Wrong Marks : 0.25

‘पक्षी’ में प्रत्यय है:

Options :

1. ✖ प

2. ✖ क्षी

3. ✖ इ

4. ✔ ई

Question Number : 96 Question Id : 16794320701 Question Type : MCQ Option Shuffling : Yes Display Question Number : Yes
Single Line Question Option : No Option Orientation : Vertical

Correct Marks : 1 Wrong Marks : 0.25

‘नौका’ का पर्यायवाची है:

Options :

1. ✔ तरी

2. ✖ रमणी

3. ✖ भारती

4. ✖ यामिनी

Question Number : 96 Question Id : 16794320701 Question Type : MCQ Option Shuffling : Yes Display Question Number : Yes
Single Line Question Option : No Option Orientation : Vertical

Correct Marks : 1 Wrong Marks : 0.25

‘नौका’ का पर्यायवाची है:

Options :

1. ✔ तरी

2. ✖ रमणी

3. ✖ भारती

4. ✖ यामिनी

Question Number : 97 Question Id : 16794320702 Question Type : MCQ Option Shuffling : Yes Display Question Number : Yes
Single Line Question Option : No Option Orientation : Vertical

Correct Marks : 1 Wrong Marks : 0.25

‘भद्र’ का विलोम होगा:

Options :

1. ✖ मूर्ख

2. ✖ विद्वान

3. ✔ अभद्र

4. ✖ संभ्रांत

Question Number : 97 Question Id : 16794320702 Question Type : MCQ Option Shuffling : Yes Display Question Number : Yes
Single Line Question Option : No Option Orientation : Vertical

Correct Marks : 1 Wrong Marks : 0.25

‘भद्र’ का विलोम होगा:

Options :

1. ✖ मूर्ख

2. ✖ विद्वान

3. ✔ अभद्र

4. ✖ संभ्रांत

Question Number : 98 Question Id : 16794320703 Question Type : MCQ Option Shuffling : Yes Display Question Number : Yes
Single Line Question Option : No Option Orientation : Vertical

Correct Marks : 1 Wrong Marks : 0.25

‘शिशु से संबन्धित’ के लिए एक शब्द होगा:

Options :

1. ✖ शैव

2. ✔ शैशव

3. ✖ वैष्णव

4. ✖ वात्सल्य

Question Number : 98 Question Id : 16794320703 Question Type : MCQ Option Shuffling : Yes Display Question Number : Yes
Single Line Question Option : No Option Orientation : Vertical

Correct Marks : 1 Wrong Marks : 0.25

‘शिशु से संबन्धित’ के लिए एक शब्द होगा:

Options :

1. ✖ शैव

2. ✓ शैशव

3. ✗ वैष्णव

4. ✗ वात्सल्य

Question Number : 99 Question Id : 16794320704 Question Type : MCQ Option Shuffling : Yes Display Question Number : Yes
Single Line Question Option : No Option Orientation : Vertical

Correct Marks : 1 Wrong Marks : 0.25

निम्न में शुद्ध वर्तनी वाला शब्द है:

Options :

1. ✗ तत्कालिक

2. ✗ तत्कालीक

3. ✗ तात्कलिक

4. ✓ तात्कालिक

Question Number : 99 Question Id : 16794320704 Question Type : MCQ Option Shuffling : Yes Display Question Number : Yes
Single Line Question Option : No Option Orientation : Vertical

Correct Marks : 1 Wrong Marks : 0.25

निम्न में शुद्ध वर्तनी वाला शब्द है:

Options :

1. ✗ तत्कालिक

2. ✗ तत्कालीक

3. ✗ तात्कलिक

4. ✓ तात्कालिक

Question Number : 100 Question Id : 16794320705 Question Type : MCQ Option Shuffling : Yes Display Question Number : Yes
Single Line Question Option : No Option Orientation : Vertical

Correct Marks : 1 Wrong Marks : 0.25

‘इनने आपका घर देखा है।’ वाक्य में अशुद्ध अंश है:

Options :

1. ✓ इनने

2. ✖ आपका

3. ✖ घर

4. ✖ देखा है।

Question Number : 100 Question Id : 16794320705 Question Type : MCQ Option Shuffling : Yes Display Question Number : Yes
Single Line Question Option : No Option Orientation : Vertical

Correct Marks : 1 Wrong Marks : 0.25

‘इनने आपका घर देखा है।’ वाक्य में अशुद्ध अंश है:

Options :

1. ✔ इनने

2. ✖ आपका

3. ✖ घर

4. ✖ देखा है।

Subject Related

Group Number :	6
Group Id :	167943799
Group Maximum Duration :	0
Group Minimum Duration :	0
Revisit allowed for view? :	No
Revisit allowed for edit? :	No
Break time:	0
Group Marks:	20
Revisit allowed for group Instructions? :	Yes
Maximum Instruction Time:	0
Minimum Instruction Time:	0

Subject Related

Section Id :	167943864
Section Number :	1
Section type :	Online
Mandatory or Optional:	Mandatory
Number of Questions:	20
Number of Questions to be attempted:	20
Section Marks:	20
Display Number Panel:	Yes
Group All Questions:	No

Sub-Section Number: 1
Sub-Section Id: 1679431325
Question Shuffling Allowed : Yes

Question Number : 101 Question Id : 16794320706 Question Type : MCQ Option Shuffling : Yes Display Question Number : Yes
Single Line Question Option : No Option Orientation : Vertical
Correct Marks : 1 Wrong Marks : 0.25

Which period of French revolution is known as region of Terror?

Options :

1. ✖ 1789 to 1792
2. ✖ 1794 to 1799
3. ✔ 1793 to 1794
4. ✖ 1799 to 1815

Question Number : 101 Question Id : 16794320706 Question Type : MCQ Option Shuffling : Yes Display Question Number : Yes
Single Line Question Option : No Option Orientation : Vertical
Correct Marks : 1 Wrong Marks : 0.25

फ्रांसीसी क्रांति के किस अवधि को आतंक का क्षेत्र के रूप में जाना जाता है?

Options :

1. ✖ 1789 से 1792
2. ✖ 1794 से 1799
3. ✔ 1793 से 1794
4. ✖ 1799 से 1815

Question Number : 102 Question Id : 16794320707 Question Type : MCQ Option Shuffling : Yes Display Question Number : Yes
Single Line Question Option : No Option Orientation : Vertical
Correct Marks : 1 Wrong Marks : 0.25

France went to war in 1792 with which country?

Options :

1. ✖ England
2. ✖ Germany
3. ✔ Austria

4. ✖ Spain

Question Number : 102 Question Id : 16794320707 Question Type : MCQ Option Shuffling : Yes Display Question Number : Yes
Single Line Question Option : No Option Orientation : Vertical

Correct Marks : 1 Wrong Marks : 0.25

फ्रांस का 1792 में किस देश के साथ युद्ध हुआ था?

Options :

1. ✖ इंग्लैंड

2. ✖ जर्मनी

3. ✔ ऑस्ट्रिया

4. ✖ स्पेन

Question Number : 103 Question Id : 16794320708 Question Type : MCQ Option Shuffling : Yes Display Question Number : Yes
Single Line Question Option : No Option Orientation : Vertical

Correct Marks : 1 Wrong Marks : 0.25

In which year Louis XVI was guillotined by the Republic Government?

Options :

1. ✔ 21 January, 1793

2. ✖ 21 February, 1793

3. ✖ 21 March, 1792

4. ✖ 21 March, 1793

Question Number : 103 Question Id : 16794320708 Question Type : MCQ Option Shuffling : Yes Display Question Number : Yes
Single Line Question Option : No Option Orientation : Vertical

Correct Marks : 1 Wrong Marks : 0.25

किस वर्ष लुईस XVI (सोलहवें) को गणराज्य सरकार द्वारा प्राणदंड दिया गया था?

Options :

1. ✔ 21 जनवरी, 1793

2. ✖ 21 फरवरी, 1793

3. ✖ 21 मार्च, 1792

4. ✖ 21 मार्च, 1793

Question Number : 104 Question Id : 16794320709 Question Type : MCQ Option Shuffling : Yes Display Question Number : Yes
Single Line Question Option : No Option Orientation : Vertical

Correct Marks : 1 Wrong Marks : 0.25

Mangal Pandey belong to which infantry?

Options :

1. ✖ 31 native infantry

2. ✖ 32 native infantry

3. ✖ 33 native infantry

4. ✔ 34 native infantry

Question Number : 104 Question Id : 16794320709 Question Type : MCQ Option Shuffling : Yes Display Question Number : Yes
Single Line Question Option : No Option Orientation : Vertical

Correct Marks : 1 Wrong Marks : 0.25

मंगल पांडे सेना की किस इंफेन्ट्री से संबंधित थे?

Options :

1. ✖ 31 नेटिव इंफेन्ट्री

2. ✖ 32 नेटिव इंफेन्ट्री

3. ✖ 33 नेटिव इंफेन्ट्री

4. ✔ 34 नेटिव इंफेन्ट्री

Question Number : 105 Question Id : 16794320710 Question Type : MCQ Option Shuffling : Yes Display Question Number : Yes
Single Line Question Option : No Option Orientation : Vertical

Correct Marks : 1 Wrong Marks : 0.25

Which Pair is not Correct?

Options :

1. ✔ Kunwar singh---Lukhnow

2. ✖ Laxmi Bai---Jhansi

3. ✖ Tatya Tope---Gwalior

4. ✖ Nana Sahib---Kanpur

Question Number : 105 Question Id : 16794320710 Question Type : MCQ Option Shuffling : Yes Display Question Number : Yes
Single Line Question Option : No Option Orientation : Vertical

Correct Marks : 1 Wrong Marks : 0.25

निम्नलिखित में से कौन सी जोड़ी सही नहीं है?

Options :

1. ✔ कुंवर सिंह---लखनऊ

2. ✖ लक्ष्मी बाई---झांसी

3. ✖ तात्या टोपे---ग्वालियर

4. ✖ नाना साहिब---कानपुर

Question Number : 106 Question Id : 16794320711 Question Type : MCQ Option Shuffling : Yes Display Question Number : Yes
Single Line Question Option : No Option Orientation : Vertical

Correct Marks : 1 Wrong Marks : 0.25

By which charter Act of Christian missionaries were allowed to spread Christianity in India?

Options :

1. ✖ Charter Act-1793

2. ✖ Charter Act-1833

3. ✖ Charter Act-1853

4. ✔ Charter Act-1813

Question Number : 106 Question Id : 16794320711 Question Type : MCQ Option Shuffling : Yes Display Question Number : Yes
Single Line Question Option : No Option Orientation : Vertical

Correct Marks : 1 Wrong Marks : 0.25

ईसाई मिशनरियों के किस चार्टर अधिनियम के द्वारा भारत में ईसाई धर्म के प्रसार की इजाजत दी गई थी?

Options :

1. ✖ चार्टर ऐक्ट-1793

2. ✖ चार्टर ऐक्ट-1833

3. ✖ चार्टर ऐक्ट-1853

4. ✓ चार्टर ऐक्ट-1813

Question Number : 107 Question Id : 16794320712 Question Type : MCQ Option Shuffling : Yes Display Question Number : Yes
Single Line Question Option : No Option Orientation : Vertical

Correct Marks : 1 Wrong Marks : 0.25

Nana Sahib was adopted son of which Peshwa?

Options :

1. ✗ Peshwa Baji Rao I
2. ✓ Peshwa Baji Rao II
3. ✗ Bala ji Vishavnath
4. ✗ Shivaji

Question Number : 107 Question Id : 16794320712 Question Type : MCQ Option Shuffling : Yes Display Question Number : Yes
Single Line Question Option : No Option Orientation : Vertical

Correct Marks : 1 Wrong Marks : 0.25

नाना साहिब किस पेशवा के दत्तक पुत्र थे?

Options :

1. ✗ पेशवा बाजी राव प्रथम
2. ✓ पेशवा बाजी राव द्वितीय
3. ✗ बालाजी विश्वनाथ
4. ✗ शिवाजी

Question Number : 108 Question Id : 16794320713 Question Type : MCQ Option Shuffling : Yes Display Question Number : Yes
Single Line Question Option : No Option Orientation : Vertical

Correct Marks : 1 Wrong Marks : 0.25

Who was the political Guru of Mahatma Gandhi?

Options :

1. ✗ Justice Ranade
2. ✗ Dada Bhai Naroji
3. ✓ Gopal Krishna Gokhale

4. ✖ Firoz Shah Mehta

Question Number : 108 Question Id : 16794320713 Question Type : MCQ Option Shuffling : Yes Display Question Number : Yes
Single Line Question Option : No Option Orientation : Vertical

Correct Marks : 1 Wrong Marks : 0.25

महात्मा गांधी के राजनीतिक गुरु कौन थे?

Options :

1. ✖ न्यायमूर्ति रानडे

2. ✖ दादाभाई नारोजी

3. ✔ गोपाल कृष्ण गोखले

4. ✖ फिरोज शाह मेहता

Question Number : 109 Question Id : 16794320714 Question Type : MCQ Option Shuffling : Yes Display Question Number : Yes
Single Line Question Option : No Option Orientation : Vertical

Correct Marks : 1 Wrong Marks : 0.25

Who among the following did not sign the Nehru Committee report?

Options :

1. ✖ Subash Chandra Bose

2. ✖ GR Pardhan

3. ✔ Jawahar Lala Nehru

4. ✖ Sardar Mangal Singh

Question Number : 109 Question Id : 16794320714 Question Type : MCQ Option Shuffling : Yes Display Question Number : Yes
Single Line Question Option : No Option Orientation : Vertical

Correct Marks : 1 Wrong Marks : 0.25

निम्नलिखित में से किसने नेहरू समिति की रिपोर्ट पर हस्ताक्षर नहीं किया?

Options :

1. ✖ सुभाष चंद्र बोस

2. ✖ जी.आर. प्रधान

3. ✔ जवाहर लाल नेहरू

4. ✖ सरदार मंगल सिंह

Question Number : 110 Question Id : 16794320715 Question Type : MCQ Option Shuffling : Yes Display Question Number : Yes
Single Line Question Option : No Option Orientation : Vertical

Correct Marks : 1 Wrong Marks : 0.25

Bal Gangadhar Tilak started the newspaper "Maharatta" in which language?

Options :

1. ✖ Marathi

2. ✖ Urdu

3. ✖ Hindi

4. ✔ English

Question Number : 110 Question Id : 16794320715 Question Type : MCQ Option Shuffling : Yes Display Question Number : Yes
Single Line Question Option : No Option Orientation : Vertical

Correct Marks : 1 Wrong Marks : 0.25

बाल गंगाधर तिलक ने किस भाषा में समाचार पत्र "मराठा" शुरू किया?

Options :

1. ✖ मराठी

2. ✖ उर्दू

3. ✖ हिंदी

4. ✔ अंग्रेज़ी

Question Number : 111 Question Id : 16794320716 Question Type : MCQ Option Shuffling : Yes Display Question Number : Yes
Single Line Question Option : No Option Orientation : Vertical

Correct Marks : 1 Wrong Marks : 0.25

Which act of British government provided Diarchy at the center?

Options :

1. ✖ Act of 1909

2. ✖ Act of 1919

3. ✖ Act of 1892

4. ✓ Act of 1935

Question Number : 111 Question Id : 16794320716 Question Type : MCQ Option Shuffling : Yes Display Question Number : Yes
Single Line Question Option : No Option Orientation : Vertical

Correct Marks : 1 Wrong Marks : 0.25

ब्रिटिश सरकार के किस अधिनियम ने केंद्र में द्वैध शासन-पद्धति (ड्राईआर्की) प्रदान की?

Options :

1. ✗ 1909 के अधिनियम

2. ✗ 1919 के अधिनियम

3. ✗ 1892 के अधिनियम

4. ✓ 1935 के अधिनियम

Question Number : 112 Question Id : 16794320717 Question Type : MCQ Option Shuffling : Yes Display Question Number : Yes
Single Line Question Option : No Option Orientation : Vertical

Correct Marks : 1 Wrong Marks : 0.25

Which newspaper supported the Indigo peasant movement of Champaran?

Options :

1. ✗ Madras Gazette

2. ✓ Hindu Patriot

3. ✗ The Telegraph

4. ✗ Bengal Gazette

Question Number : 112 Question Id : 16794320717 Question Type : MCQ Option Shuffling : Yes Display Question Number : Yes
Single Line Question Option : No Option Orientation : Vertical

Correct Marks : 1 Wrong Marks : 0.25

किस समाचार पत्र ने चंपारण के इंडिगो किसान आंदोलन का समर्थन किया?

Options :

1. ✗ मद्रास गजट

2. ✓ हिंदू पैट्रियॉट

3. ✗ द टेलिग्राफ

4. ✖ बंगाल गजट

Question Number : 113 Question Id : 16794320718 Question Type : MCQ Option Shuffling : Yes Display Question Number : Yes
Single Line Question Option : No Option Orientation : Vertical

Correct Marks : 1 Wrong Marks : 0.25

"The Only people who had any right in India are the British". For which government bill these lines were quoted?

Options :

1. ✔ Ilbert Bill
2. ✖ Pitts India Act
3. ✖ Cabinet mission plan
4. ✖ Simmon Commission

Question Number : 113 Question Id : 16794320718 Question Type : MCQ Option Shuffling : Yes Display Question Number : Yes
Single Line Question Option : No Option Orientation : Vertical

Correct Marks : 1 Wrong Marks : 0.25

"केवल वे लोग जिनके पास भारत में कोई अधिकार है, वे ब्रिटिश हैं"। किस सरकारी विधेयक में इन पंक्तियों को उद्धृत किया गया है?

Options :

1. ✔ इल्बर्ट बिल
2. ✖ पिट्स इंडिया एक्ट
3. ✖ कैबिनेट मिशन प्लान
4. ✖ साइमन कमीशन

Question Number : 114 Question Id : 16794320719 Question Type : MCQ Option Shuffling : Yes Display Question Number : Yes
Single Line Question Option : No Option Orientation : Vertical

Correct Marks : 1 Wrong Marks : 0.25

Which one of these is not related to UNO as Agencies?

Options :

1. ✖ UNESCO
2. ✔ A. BAMCEF
3. ✖ FAO

4. ✖ WHO

Question Number : 114 Question Id : 16794320719 Question Type : MCQ Option Shuffling : Yes Display Question Number : Yes
Single Line Question Option : No Option Orientation : Vertical

Correct Marks : 1 Wrong Marks : 0.25

निम्नलिखित में से कौन सा एक एजेंसी के रूप में यू.एन.ओ. से संबंधित नहीं है?

Options :

1. ✖ यूनेस्को
2. ✔ ए. बामसेफ
3. ✖ एफ.ए.ओ.
4. ✖ डब्ल्यू.एच.ओ.

Question Number : 115 Question Id : 16794320720 Question Type : MCQ Option Shuffling : Yes Display Question Number : Yes
Single Line Question Option : No Option Orientation : Vertical

Correct Marks : 1 Wrong Marks : 0.25

In 1945 How many countries signed the charter of UNO?

Options :

1. ✖ 50 Countries
2. ✔ 51 Countries
3. ✖ 52 Countries
4. ✖ 53 Countries

Question Number : 115 Question Id : 16794320720 Question Type : MCQ Option Shuffling : Yes Display Question Number : Yes
Single Line Question Option : No Option Orientation : Vertical

Correct Marks : 1 Wrong Marks : 0.25

1945 में यू.एन.ओ. के चार्टर पर कितने देशों ने हस्ताक्षर किए थे?

Options :

1. ✖ 50 देश
2. ✔ 51 देश
3. ✖ 52 देश

4. ✖ 53 देश

Question Number : 116 Question Id : 16794320721 Question Type : MCQ Option Shuffling : Yes Display Question Number : Yes
Single Line Question Option : No Option Orientation : Vertical

Correct Marks : 1 Wrong Marks : 0.25

On the morning of August 6, 1945. America released Atom bomb on Japan named?

Options :

- 1. ✖ Little girl
- 2. ✖ Little Secret
- 3. ✔ Little boy
- 4. ✖ Little dwarf

Question Number : 116 Question Id : 16794320721 Question Type : MCQ Option Shuffling : Yes Display Question Number : Yes
Single Line Question Option : No Option Orientation : Vertical

Correct Marks : 1 Wrong Marks : 0.25

6 अगस्त, 1945 की सुबह अमेरिका ने जापान पर कौन सा एटम बम गिराया था?

Options :

- 1. ✖ लिटिल गर्ल
- 2. ✖ लिटिल सिक्नेट
- 3. ✔ लिटिल बॉय
- 4. ✖ लिटिल इवार्फ

Question Number : 117 Question Id : 16794320722 Question Type : MCQ Option Shuffling : Yes Display Question Number : Yes
Single Line Question Option : No Option Orientation : Vertical

Correct Marks : 1 Wrong Marks : 0.25

Which of the following battles Hitler lost to USSR ?

Options :

- 1. ✖ War of Dunkrik
- 2. ✖ War of Narmandy
- 3. ✖ War on Poland

4. ✓ War of Stalingrad

Question Number : 117 Question Id : 16794320722 Question Type : MCQ Option Shuffling : Yes Display Question Number : Yes
Single Line Question Option : No Option Orientation : Vertical

Correct Marks : 1 Wrong Marks : 0.25

निम्नलिखित में से किस लड़ाई में हिटलर यू.एस.एस.आर. से हार गया था?

Options :

1. ✗ डंक्रीक का युद्ध
2. ✗ नर्मंडी का युद्ध
3. ✗ पोलैंड का युद्ध
4. ✓ स्टेलिनग्राड का युद्ध

Question Number : 118 Question Id : 16794320723 Question Type : MCQ Option Shuffling : Yes Display Question Number : Yes
Single Line Question Option : No Option Orientation : Vertical

Correct Marks : 1 Wrong Marks : 0.25

Who said this "We shall fight in the seas and oceans"?

Options :

1. ✗ Hittler
2. ✗ Mussolini
3. ✗ Rasewelt
4. ✓ Churchill

Question Number : 118 Question Id : 16794320723 Question Type : MCQ Option Shuffling : Yes Display Question Number : Yes
Single Line Question Option : No Option Orientation : Vertical

Correct Marks : 1 Wrong Marks : 0.25

यह किसने कहा "हम समुद्रों और महासागरों में लड़ेंगे"?

Options :

1. ✗ हिटलर
2. ✗ मुसोलिनी

3. ✖ रूसवेल्ट

4. ✔ चर्चिल

Question Number : 119 Question Id : 16794320724 Question Type : MCQ Option Shuffling : Yes Display Question Number : Yes
Single Line Question Option : No Option Orientation : Vertical

Correct Marks : 1 Wrong Marks : 0.25

In year _____ VD Savarkar organized "Abhinav Bharat"?

Options :

1. ✖ 1902

2. ✔ 1904

3. ✖ 1903

4. ✖ 1905

Question Number : 119 Question Id : 16794320724 Question Type : MCQ Option Shuffling : Yes Display Question Number : Yes
Single Line Question Option : No Option Orientation : Vertical

Correct Marks : 1 Wrong Marks : 0.25

वर्ष में _____ वी.डी. सावरकर ने "अभिनव भारत" का आयोजन किया था?

Options :

1. ✖ 1902

2. ✔ 1904

3. ✖ 1903

4. ✖ 1905

Question Number : 120 Question Id : 16794320725 Question Type : MCQ Option Shuffling : Yes Display Question Number : Yes
Single Line Question Option : No Option Orientation : Vertical

Correct Marks : 1 Wrong Marks : 0.25

Which of the following is first leader of Indian community in North America to start a paper called "Free Hindustan"?

Options :

1. ✖ Lala Hardyay

2. ✖ Sohan Singh Bhakna

3. ✖ Kartar Singh Sarabha

4. ✓ Tarak Nath Das

Question Number : 120 Question Id : 16794320725 Question Type : MCQ Option Shuffling : Yes Display Question Number : Yes
Single Line Question Option : No Option Orientation : Vertical

Correct Marks : 1 Wrong Marks : 0.25

उत्तरी अमेरिका में "फ्री हिंदुस्तान" नामक अखबार शुरू करने वाले भारतीय समुदाय के पहले नेता कौन थे?

Options :

1. ✗ लाला हरदयाल

2. ✗ सोहन सिंह भकना

3. ✗ करतार सिंह साराभा

4. ✓ तारक नाथ दास

Subject Related

Group Number :	7
Group Id :	167943800
Group Maximum Duration :	0
Group Minimum Duration :	0
Revisit allowed for view? :	No
Revisit allowed for edit? :	No
Break time:	0
Group Marks:	20
Revisit allowed for group Instructions? :	Yes
Maximum Instruction Time:	0
Minimum Instruction Time:	0

Subject Related

Section Id :	167943865
Section Number :	1
Section type :	Online
Mandatory or Optional:	Mandatory
Number of Questions:	20
Number of Questions to be attempted:	20
Section Marks:	20
Display Number Panel:	Yes
Group All Questions:	No

Sub-Section Number:	1
Sub-Section Id:	1679431326
Question Shuffling Allowed :	Yes

Question Number : 121 Question Id : 16794320726 Question Type : MCQ Option Shuffling : Yes Display Question Number : Yes
Single Line Question Option : No Option Orientation : Vertical

Correct Marks : 1 Wrong Marks : 0.25

“Quit India” resolution was moved by which leader?

Options :

1. ✖ Subash Chandra Bose
2. ✖ Mahatma Gandhi
3. ✖ Maulana Abul Kalam Azad
4. ✔ Jawahar Lal Nehru

Question Number : 121 Question Id : 16794320726 Question Type : MCQ Option Shuffling : Yes Display Question Number : Yes
Single Line Question Option : No Option Orientation : Vertical

Correct Marks : 1 Wrong Marks : 0.25

"भारत छोड़ो" प्रस्ताव किस नेता द्वारा प्रस्तुत किया गया था?

Options :

1. ✖ सुभाष चंद्र बोस
2. ✖ महात्मा गांधी
3. ✖ मौलाना अबुल कलाम आज़ाद
4. ✔ जवाहर लाल नेहरू

Question Number : 122 Question Id : 16794320727 Question Type : MCQ Option Shuffling : Yes Display Question Number : Yes
Single Line Question Option : No Option Orientation : Vertical

Correct Marks : 1 Wrong Marks : 0.25

Kanpur conspiracy case was framed against whom in 1924?

Options :

1. ✖ Congress
2. ✖ Muslim League
3. ✔ Newbie Communist
4. ✖ Hindu Maha sabha

Question Number : 122 Question Id : 16794320727 Question Type : MCQ Option Shuffling : Yes Display Question Number : Yes
Single Line Question Option : No Option Orientation : Vertical

Correct Marks : 1 Wrong Marks : 0.25

कानपुर षड़यंत्र में किसके खिलाफ 1924 में मुकदमा चलाया गया था?

Options :

1. ✖ कांग्रेस
2. ✖ मुस्लिम लीग
3. ✔ नौसिखिया कम्युनिस्ट
4. ✖ हिंदू महासभा

Question Number : 123 Question Id : 16794320728 Question Type : MCQ Option Shuffling : Yes Display Question Number : Yes
Single Line Question Option : No Option Orientation : Vertical

Correct Marks : 1 Wrong Marks : 0.25

Who gave "Father of the Nation title" to Mahatma Gandhi?

Options :

1. ✖ Rabindra Nath Tagore
2. ✖ G K Gokhale
3. ✖ Jawahar Lal Nehru
4. ✔ Subash Chandra Bose

Question Number : 123 Question Id : 16794320728 Question Type : MCQ Option Shuffling : Yes Display Question Number : Yes
Single Line Question Option : No Option Orientation : Vertical

Correct Marks : 1 Wrong Marks : 0.25

महात्मा गांधी को "राष्ट्रपिता की उपाधि" किसने दी?

Options :

1. ✖ रबींद्र नाथ टैगोर
2. ✖ जी.के. गोखले
3. ✖ जवाहर लाल नेहरू
4. ✔ सुभाष चंद्र बोस

Question Number : 124 Question Id : 16794320729 Question Type : MCQ Option Shuffling : Yes Display Question Number : Yes
Single Line Question Option : No Option Orientation : Vertical

Correct Marks : 1 Wrong Marks : 0.25

How many members were in cabinet mission plan?

Options :

1. ✖ 4 member
2. ✖ 2 member
3. ✔ 3 member
4. ✖ 5 member

Question Number : 124 Question Id : 16794320729 Question Type : MCQ Option Shuffling : Yes Display Question Number : Yes
Single Line Question Option : No Option Orientation : Vertical

Correct Marks : 1 Wrong Marks : 0.25

कैबिनेट मिशन प्लान में कितने सदस्य थे?

Options :

1. ✖ 4 सदस्य
2. ✖ 2 सदस्य
3. ✔ 3 सदस्य
4. ✖ 5 सदस्य

Question Number : 125 Question Id : 16794320730 Question Type : MCQ Option Shuffling : Yes Display Question Number : Yes
Single Line Question Option : No Option Orientation : Vertical

Correct Marks : 1 Wrong Marks : 0.25

In First round table conference which of these members participated as Hindu Maha sabha members?

Options :

1. ✖ C Y Chintamani and T.V. Saprui
2. ✖ K T paul and Sampurn Singh
3. ✔ Jaikar and BS Munje
4. ✖ Dr. B R Ambedkar

Question Number : 125 Question Id : 16794320730 Question Type : MCQ Option Shuffling : Yes Display Question Number : Yes
Single Line Question Option : No Option Orientation : Vertical

Correct Marks : 1 Wrong Marks : 0.25

प्रथम गोलमेज सम्मेलन में इनमें से किस सदस्य ने हिंदू महा सभा के सदस्य के रूप में भाग लिया था?

Options :

1. ✖ सी.वाई. चिंतामणि और टी.वी. सप्रू
2. ✖ के.टी. पॉल और सम्पूर्ण सिंह
3. ✔ जयकर और बी.एस. मुंजे
4. ✖ डॉ. बी.आर. अंबेडकर

Question Number : 126 Question Id : 16794320731 Question Type : MCQ Option Shuffling : Yes Display Question Number : Yes
Single Line Question Option : No Option Orientation : Vertical

Correct Marks : 1 Wrong Marks : 0.25

Civil disobedience moment was taken back in which year?

Options :

1. ✔ 7 April, 1934
2. ✖ 7 April, 1932
3. ✖ 6 April, 1934
4. ✖ 6 April, 1932

Question Number : 126 Question Id : 16794320731 Question Type : MCQ Option Shuffling : Yes Display Question Number : Yes
Single Line Question Option : No Option Orientation : Vertical

Correct Marks : 1 Wrong Marks : 0.25

सविनय अवज्ञा आंदोलन को किस वर्ष वापस ले लिया गया था?

Options :

1. ✔ 7 अप्रैल, 1934
2. ✖ 7 अप्रैल, 1932
3. ✖ 6 अप्रैल, 1934
4. ✖ 6 अप्रैल, 1932

Question Number : 127 Question Id : 16794320732 Question Type : MCQ Option Shuffling : Yes Display Question Number : Yes
Single Line Question Option : No Option Orientation : Vertical

Correct Marks : 1 Wrong Marks : 0.25

Industrial Society “ May truly be said to be a miserly, selfish system” which socialist thinker wrote these words in 1857?

Options :

1. ✖ Friedrich engles
2. ✖ Pierre Joseph Proudhan
3. ✔ Robertowen
4. ✖ Karlmarx

Question Number : 127 Question Id : 16794320732 Question Type : MCQ Option Shuffling : Yes Display Question Number : Yes
Single Line Question Option : No Option Orientation : Vertical

Correct Marks : 1 Wrong Marks : 0.25

औद्योगिक समाज "वास्तव में एक कृपण, स्वार्थी प्रणाली कहा जा सकता है।" किस समाजवादी विचारक ने 1857 में इन शब्दों को लिखा था?

Options :

1. ✖ फ्रेडरिक एंजेल्स
2. ✖ पियरे जोसेफ प्रॉउधान
3. ✔ राबर्टोवेन
4. ✖ कार्ल मार्क्स

Question Number : 128 Question Id : 16794320733 Question Type : MCQ Option Shuffling : Yes Display Question Number : Yes
Single Line Question Option : No Option Orientation : Vertical

Correct Marks : 1 Wrong Marks : 0.25

“Workers of the world unite! You have nothing to lose but your chains” who wrote these lines?

Options :

1. ✖ Voltare
2. ✖ Lenin
3. ✖ Maximgorkey
4. ✔ Karl Marx

Question Number : 128 Question Id : 16794320733 Question Type : MCQ Option Shuffling : Yes Display Question Number : Yes
Single Line Question Option : No Option Orientation : Vertical

Correct Marks : 1 Wrong Marks : 0.25

"दुनियाभर के कर्मचारी, एकजुट हैं! आपके पास खोने के लिए कुछ भी नहीं है सिवाये आपकी चेन के" किसने इन पंक्तियों को लिखा था?

Options :

1. ✖ वाल्टेयर
2. ✖ लेनिन
3. ✖ मैक्सम गोर्की
4. ✔ कार्ल मार्क्स

Question Number : 129 Question Id : 16794320734 Question Type : MCQ Option Shuffling : Yes Display Question Number : Yes
Single Line Question Option : No Option Orientation : Vertical

Correct Marks : 1 Wrong Marks : 0.25

Karl Marx used which word for factory owning middle class?

Options :

1. ✖ Proletariat
2. ✖ Surfs
3. ✔ Bourgeoisie
4. ✖ Lores

Question Number : 129 Question Id : 16794320734 Question Type : MCQ Option Shuffling : Yes Display Question Number : Yes
Single Line Question Option : No Option Orientation : Vertical

Correct Marks : 1 Wrong Marks : 0.25

कार्ल मार्क्स ने कारखाने के स्वामित्व वाले मध्यम वर्ग के लिए कौन सा शब्द इस्तेमाल किया?

Options :

1. ✖ सर्वहारा
2. ✖ सफर्स
3. ✔ बुर्जुआ
4. ✖ लॉर्स (बुद्धिमान)

Question Number : 130 Question Id : 16794320735 Question Type : MCQ Option Shuffling : Yes Display Question Number : Yes
Single Line Question Option : No Option Orientation : Vertical

Correct Marks : 1 Wrong Marks : 0.25

When Did Germany invade Poland?

Options :

1. ☒ Sept 1939
2. ☐ Nov 1939
3. ☐ Oct 1939
4. ☐ Dec 1939

Question Number : 130 Question Id : 16794320735 Question Type : MCQ Option Shuffling : Yes Display Question Number : Yes
Single Line Question Option : No Option Orientation : Vertical
Correct Marks : 1 Wrong Marks : 0.25

जर्मनी ने पोलैंड पर कब आक्रमण किया?

Options :

1. ☒ सितंबर 1939
2. ☐ नवंबर 1939
3. ☐ अक्टूबर 1939
4. ☐ दिसंबर 1939

Question Number : 131 Question Id : 16794320736 Question Type : MCQ Option Shuffling : Yes Display Question Number : Yes
Single Line Question Option : No Option Orientation : Vertical
Correct Marks : 1 Wrong Marks : 0.25

When Was Rome Berlin Axis signed?

Options :

1. ☐ Nov 1935
2. ☐ Oct 1935
3. ☐ Nov 1936
4. ☒ Oct 1936

Question Number : 131 Question Id : 16794320736 Question Type : MCQ Option Shuffling : Yes Display Question Number : Yes
Single Line Question Option : No Option Orientation : Vertical
Correct Marks : 1 Wrong Marks : 0.25

रोम बर्लिन एक्सिस पर हस्ताक्षर किस तिथि को किया गया था?

Options :

1. ✖ नवंबर 1935
2. ✖ अक्टूबर 1935
3. ✖ नवंबर 1936
4. ✔ अक्टूबर 1936

Question Number : 132 Question Id : 16794320737 Question Type : MCQ Option Shuffling : Yes Display Question Number : Yes
Single Line Question Option : No Option Orientation : Vertical

Correct Marks : 1 Wrong Marks : 0.25

Who was the King of Russia During Russian Revolution of 1917?

Options :

1. ✖ Alexander III
2. ✔ Nicholas II
3. ✖ Lenin
4. ✖ Stalin

Question Number : 132 Question Id : 16794320737 Question Type : MCQ Option Shuffling : Yes Display Question Number : Yes
Single Line Question Option : No Option Orientation : Vertical

Correct Marks : 1 Wrong Marks : 0.25

1917 की रूसी क्रांति के समय रूस का राजा कौन था?

Options :

1. ✖ अलेक्जेंडर तृतीय
2. ✔ निकोलस द्वितीय
3. ✖ लेनिन
4. ✖ स्टालिन

Question Number : 133 Question Id : 16794320738 Question Type : MCQ Option Shuffling : Yes Display Question Number : Yes
Single Line Question Option : No Option Orientation : Vertical

Correct Marks : 1 Wrong Marks : 0.25

Who wrote these lines "All our Palaces, all our theatres, all these riches of ours, we owe to the effort of these same hungry People, who make these things"?

Options :

1. ✖ Maxim Gorkey
2. ✖ Anton Chekhov
3. ✖ Lenin
4. ✔ Leo Tolstoy

Question Number : 133 Question Id : 16794320738 Question Type : MCQ Option Shuffling : Yes Display Question Number : Yes
Single Line Question Option : No Option Orientation : Vertical

Correct Marks : 1 Wrong Marks : 0.25

इन पंक्तियों को किसने लिखा "हमारे सभी महल, हमारे सभी सिनेमाघर, हमारे सभी धनवान, हम इन भूखे लोगों के प्रयासों को श्रेय देते हैं, जो इन चीजों को बनाते हैं"?

Options :

1. ✖ मैक्सिम गोर्की
2. ✖ एंटोन चेखव
3. ✖ लेनिन
4. ✔ लियो टॉल्स्टॉय

Question Number : 134 Question Id : 16794320739 Question Type : MCQ Option Shuffling : Yes Display Question Number : Yes
Single Line Question Option : No Option Orientation : Vertical

Correct Marks : 1 Wrong Marks : 0.25

What was the position of the "Mensheviks" in 1903?

Options :

1. ✖ Majority
2. ✖ Popular
3. ✖ Moderate
4. ✔ Minority

Question Number : 134 Question Id : 16794320739 Question Type : MCQ Option Shuffling : Yes Display Question Number : Yes
Single Line Question Option : No Option Orientation : Vertical

Correct Marks : 1 Wrong Marks : 0.25

1903 में "मेन्शेविक्स" की स्थिति क्या थी?

Options :

1. ✖ बहुमत
2. ✖ लोकप्रिय
3. ✖ औसत
4. ✔ अल्पसंख्यक

Question Number : 135 Question Id : 16794320740 Question Type : MCQ Option Shuffling : Yes Display Question Number : Yes
Single Line Question Option : No Option Orientation : Vertical

Correct Marks : 1 Wrong Marks : 0.25

By which law Nazi deprived Jews of German Citizenship?

Options :

1. ✖ Enabling act
2. ✔ Nuremberg Laws
3. ✖ Mein Kamph
4. ✖ Treaty of versailles

Question Number : 135 Question Id : 16794320740 Question Type : MCQ Option Shuffling : Yes Display Question Number : Yes
Single Line Question Option : No Option Orientation : Vertical

Correct Marks : 1 Wrong Marks : 0.25

किस कानून से नाज़ियों ने यहूदियों को जर्मन नागरिकता से वंचित कर दिया था?

Options :

1. ✖ एनेब्लिंग ऐक्ट
2. ✔ नूर्नबर्ग लॉ
3. ✖ मेन काम्फ
4. ✖ ट्रिटी ऑफ वर्साय

Question Number : 136 Question Id : 16794320741 Question Type : MCQ Option Shuffling : Yes Display Question Number : Yes
Single Line Question Option : No Option Orientation : Vertical

Correct Marks : 1 Wrong Marks : 0.25

Who gave the slogan "Peace, Land and Bread"?

Options :

1. ✖ Stalin
2. ✖ Karl Max
3. ✔ Lenin
4. ✖ Trotasky

Question Number : 136 Question Id : 16794320741 Question Type : MCQ Option Shuffling : Yes Display Question Number : Yes
Single Line Question Option : No Option Orientation : Vertical

Correct Marks : 1 Wrong Marks : 0.25

"शांति, भूमि और रोटी" नारा किसने दिया?

Options :

1. ✖ स्टालिन
2. ✖ कार्ल मैक्स
3. ✔ लेनिन
4. ✖ ट्रोट्स्की

Question Number : 137 Question Id : 16794320742 Question Type : MCQ Option Shuffling : Yes Display Question Number : Yes
Single Line Question Option : No Option Orientation : Vertical

Correct Marks : 1 Wrong Marks : 0.25

Arch Duke Franz Ferdinand was killed on which date?

Options :

1. ✖ 27 June 1914
2. ✔ 28 June 1914
3. ✖ 27 July 1914
4. ✖ 28 July 1914

Question Number : 137 Question Id : 16794320742 Question Type : MCQ Option Shuffling : Yes Display Question Number : Yes
Single Line Question Option : No Option Orientation : Vertical

Correct Marks : 1 Wrong Marks : 0.25

आर्क ड्यूक फ्रांज फर्डिनेंड की हत्या किस तारीख को हुई थी?

Options :

1. ✖ 27 जून, 1914
2. ✔ 28 जून, 1914
3. ✖ 27 जुलाई, 1914
4. ✖ 28 जुलाई, 1914

Question Number : 138 Question Id : 16794320743 Question Type : MCQ Option Shuffling : Yes Display Question Number : Yes
Single Line Question Option : No Option Orientation : Vertical

Correct Marks : 1 Wrong Marks : 0.25

USA entered in First World war in Which year?

Options :

1. ✔ April, 1917
2. ✖ April, 1916
3. ✖ March, 1916
4. ✖ March, 1917

Question Number : 138 Question Id : 16794320743 Question Type : MCQ Option Shuffling : Yes Display Question Number : Yes
Single Line Question Option : No Option Orientation : Vertical

Correct Marks : 1 Wrong Marks : 0.25

संयुक्त राज्य अमेरिका किस वर्ष में प्रथम विश्व युद्ध में शामिल हुआ?

Options :

1. ✔ अप्रैल, 1917
2. ✖ अप्रैल, 1916
3. ✖ मार्च, 1916
4. ✖ मार्च, 1917

Question Number : 139 Question Id : 16794320744 Question Type : MCQ Option Shuffling : Yes Display Question Number : Yes
Single Line Question Option : No Option Orientation : Vertical

Correct Marks : 1 Wrong Marks : 0.25

Who declared "Either they will give us the government or we shall take it by descending on Rome"?

Options :

1. ✖ Adalf Hittler
2. ✖ General Franko
3. ✔ Mussolini
4. ✖ F.D. Rarewelt

Question Number : 139 Question Id : 16794320744 Question Type : MCQ Option Shuffling : Yes Display Question Number : Yes
Single Line Question Option : No Option Orientation : Vertical

Correct Marks : 1 Wrong Marks : 0.25

किसने घोषित किया था "या तो वे हमें सरकार देंगे या हम इसे रोम से उतार ले जाएंगे"?

Options :

1. ✖ एडल्फ हिटलर
2. ✖ जनरल फ्रैंको
3. ✔ मुसोलिनी
4. ✖ एफ.डी. रारवेल्ड

Question Number : 140 Question Id : 16794320745 Question Type : MCQ Option Shuffling : Yes Display Question Number : Yes
Single Line Question Option : No Option Orientation : Vertical

Correct Marks : 1 Wrong Marks : 0.25

Lord Canning was the Governor General of India from?

Options :

1. ✔ 1856 to 1862
2. ✖ 1855 to 1861
3. ✖ 1857 to 1863
4. ✖ 1858 to 1862

Question Number : 140 Question Id : 16794320745 Question Type : MCQ Option Shuffling : Yes Display Question Number : Yes
Single Line Question Option : No Option Orientation : Vertical

Correct Marks : 1 Wrong Marks : 0.25

लॉर्ड कैनिंग कब से कब तक भारत के गवर्नर जनरल रहे?

Options :

1. ✓ 1856 से 1862 तक

2. ✗ 1855 से 1861 तक

3. ✗ 1857 से 1863 तक

4. ✗ 1858 से 1862 तक

Subject Related

Group Number :	8
Group Id :	167943801
Group Maximum Duration :	0
Group Minimum Duration :	0
Revisit allowed for view? :	No
Revisit allowed for edit? :	No
Break time:	0
Group Marks:	20
Revisit allowed for group Instructions? :	Yes
Maximum Instruction Time:	0
Minimum Instruction Time:	0

Subject Related

Section Id :	167943866
Section Number :	1
Section type :	Online
Mandatory or Optional:	Mandatory
Number of Questions:	20
Number of Questions to be attempted:	20
Section Marks:	20
Display Number Panel:	Yes
Group All Questions:	No

Sub-Section Number:	1
Sub-Section Id:	1679431327
Question Shuffling Allowed :	Yes

Question Number : 141 Question Id : 16794320746 Question Type : MCQ Option Shuffling : Yes Display Question Number : Yes
Single Line Question Option : No Option Orientation : Vertical

Correct Marks : 1 Wrong Marks : 0.25

Who has the power to implement fundamental right?

Options :

1. ✗ All courts of India

- 2. ✖ Parliament
- 3. ✖ President
- 4. ✔ Supreme and High Court

Question Number : 141 Question Id : 16794320746 Question Type : MCQ Option Shuffling : Yes Display Question Number : Yes
Single Line Question Option : No Option Orientation : Vertical

Correct Marks : 1 Wrong Marks : 0.25

मौलिक अधिकार को लागू करने की शक्ति किसके पास है?

Options :

- 1. ✖ भारत की सभी अदालतें
- 2. ✖ संसद
- 3. ✖ राष्ट्रपति
- 4. ✔ सर्वोच्च कोर्ट और उच्च न्यायालय

Question Number : 142 Question Id : 16794320747 Question Type : MCQ Option Shuffling : Yes Display Question Number : Yes
Single Line Question Option : No Option Orientation : Vertical

Correct Marks : 1 Wrong Marks : 0.25

By which Article of constitution untouchability was removed by constitution?

Options :

- 1. ✖ Article –14
- 2. ✖ Article – 21
- 3. ✔ Article – 17
- 4. ✖ Article – 19

Question Number : 142 Question Id : 16794320747 Question Type : MCQ Option Shuffling : Yes Display Question Number : Yes
Single Line Question Option : No Option Orientation : Vertical

Correct Marks : 1 Wrong Marks : 0.25

संविधान के किस अनुच्छेद द्वारा संविधान द्वारा अस्पृश्यता को हटा दिया गया था?

Options :

- 1. ✖ अनुच्छेद - 14

2. ✖ अनुच्छेद - 21

3. ✔ अनुच्छेद - 17

4. ✖ अनुच्छेद - 19

Question Number : 143 Question Id : 16794320748 Question Type : MCQ Option Shuffling : Yes Display Question Number : Yes
Single Line Question Option : No Option Orientation : Vertical

Correct Marks : 1 Wrong Marks : 0.25

Right to Constitutional Remedies is mentioned in which article of constitution?

Options :

1. ✖ Article 30

2. ✖ Article 23

3. ✖ Article 14

4. ✔ Article 32

Question Number : 143 Question Id : 16794320748 Question Type : MCQ Option Shuffling : Yes Display Question Number : Yes
Single Line Question Option : No Option Orientation : Vertical

Correct Marks : 1 Wrong Marks : 0.25

संविधान के किस अनुच्छेद में संवैधानिक उपाय के अधिकार का वर्णन है?

Options :

1. ✖ अनुच्छेद 30

2. ✖ अनुच्छेद 23

3. ✖ अनुच्छेद 14

4. ✔ अनुच्छेद 32

Question Number : 144 Question Id : 16794320749 Question Type : MCQ Option Shuffling : Yes Display Question Number : Yes
Single Line Question Option : No Option Orientation : Vertical

Correct Marks : 1 Wrong Marks : 0.25

On _____ Pt. Jawaharlal Nehru introduced the "Objectives Resolution" in constituent Assembly.

Options :

1. ✖ 15th January 1946

2. ✓ 13th December 1946

3. ✗ 12th November 1946

4. ✗ 11th October 1946

Question Number : 144 Question Id : 16794320749 Question Type : MCQ Option Shuffling : Yes Display Question Number : Yes
Single Line Question Option : No Option Orientation : Vertical

Correct Marks : 1 Wrong Marks : 0.25

_____ को पं. जवाहरलाल नेहरू ने संविधान सभा में "उद्देश्यों का संकल्प" पेश किया।

Options :

1. ✗ 15 जनवरी, 1946

2. ✓ 13 दिसंबर, 1946

3. ✗ 12 नवंबर, 1946

4. ✗ 11 अक्टूबर, 1946

Question Number : 145 Question Id : 16794320750 Question Type : MCQ Option Shuffling : Yes Display Question Number : Yes
Single Line Question Option : No Option Orientation : Vertical

Correct Marks : 1 Wrong Marks : 0.25

In Indian council act 1909 (Minto-marle act) seats of legislative council was increased to:

Options :

1. ✗ 50

2. ✗ 40

3. ✓ 60

4. ✗ 70

Question Number : 145 Question Id : 16794320750 Question Type : MCQ Option Shuffling : Yes Display Question Number : Yes
Single Line Question Option : No Option Orientation : Vertical

Correct Marks : 1 Wrong Marks : 0.25

भारतीय परिषद अधिनियम में 1909 (मिंटो-मार्ले एक्ट) में विधायी परिषद की कितनी सीटों में वृद्धि हुई थी?

Options :

1. ✗ 50

2. ✗ 40

3. ✓ 60

4. ✗ 70

Question Number : 146 Question Id : 16794320751 Question Type : MCQ Option Shuffling : Yes Display Question Number : Yes
Single Line Question Option : No Option Orientation : Vertical

Correct Marks : 1 Wrong Marks : 0.25

By which Act Federal structure was introduced by British?

Options :

1. ✓ Act of 1935

2. ✗ Act of 1919

3. ✗ Act of 1909

4. ✗ Ramsay Macdonald Award

Question Number : 146 Question Id : 16794320751 Question Type : MCQ Option Shuffling : Yes Display Question Number : Yes
Single Line Question Option : No Option Orientation : Vertical

Correct Marks : 1 Wrong Marks : 0.25

ब्रिटिश द्वारा किस अधिनियम द्वारा संघीय व्यवस्था शुरू की गई थी?

Options :

1. ✓ 1935 के अधिनियम

2. ✗ 1919 के अधिनियम

3. ✗ 1909 के अधिनियम

4. ✗ रामसे मैकडोनाल्ड पुरस्कार

Question Number : 147 Question Id : 16794320752 Question Type : MCQ Option Shuffling : Yes Display Question Number : Yes
Single Line Question Option : No Option Orientation : Vertical

Correct Marks : 1 Wrong Marks : 0.25

“Separate Electorate system” was introduced in which Act?

Options :

1. ✗ Act 1861

2. ✗ Pitt's India Act

3. ✗ Regulating Act

4. ✓ Act 1909

Question Number : 147 Question Id : 16794320752 Question Type : MCQ Option Shuffling : Yes Display Question Number : Yes
Single Line Question Option : No Option Orientation : Vertical

Correct Marks : 1 Wrong Marks : 0.25

निम्नलिखित में से किस अधिनियम में "पृथक निर्वाचक मंडल" पेश किया गया था?

Options :

1. ✗ अधिनियम, 1861

2. ✗ पिट्स इंडिया एक्ट

3. ✗ रेगुलेटिंग एक्ट

4. ✓ अधिनियम, 1909

Question Number : 148 Question Id : 16794320753 Question Type : MCQ Option Shuffling : Yes Display Question Number : Yes
Single Line Question Option : No Option Orientation : Vertical

Correct Marks : 1 Wrong Marks : 0.25

Lord Pethick-Lawrence, Sir Stafford Cripps, A.V. Alexander are related to which of the following?

Options :

1. ✗ Wavell plan

2. ✗ Mount Beaton plan

3. ✓ Cabinet mission plan

4. ✗ Cripps mission

Question Number : 148 Question Id : 16794320753 Question Type : MCQ Option Shuffling : Yes Display Question Number : Yes
Single Line Question Option : No Option Orientation : Vertical

Correct Marks : 1 Wrong Marks : 0.25

लॉर्ड पेथिक-लॉरेंस, सर स्टैफोर्ड क्रिप्स, ए.वी. अलेक्जेंडर निम्नलिखित में से किससे संबंधित हैं?

Options :

1. ✗ वावेल प्लान

2. ✗ माउंट बीटन प्लान

3. ✓ कैबिनेट मिशन प्लान

4. ✖ क्रिप्स मिशन

Question Number : 149 Question Id : 16794320754 Question Type : MCQ Option Shuffling : Yes Display Question Number : Yes
Single Line Question Option : No Option Orientation : Vertical

Correct Marks : 1 Wrong Marks : 0.25

According to which Amendment, words “socialist and secular” were added on preamble of Indian constitution.

Options :

1. ✔ 42 Amendment
2. ✖ 44 Amendment
3. ✖ 78 Amendment
4. ✖ None of these

Question Number : 149 Question Id : 16794320754 Question Type : MCQ Option Shuffling : Yes Display Question Number : Yes
Single Line Question Option : No Option Orientation : Vertical

Correct Marks : 1 Wrong Marks : 0.25

किस संशोधन के अनुसार, भारतीय संविधान के प्रस्तावना में "समाजवादी और धर्मनिरपेक्ष" शब्द जोड़े गए थे?

Options :

1. ✔ 42 संशोधन
2. ✖ 44 संशोधन
3. ✖ 78 संशोधन
4. ✖ इनमें से कोई नहीं

Question Number : 150 Question Id : 16794320755 Question Type : MCQ Option Shuffling : Yes Display Question Number : Yes
Single Line Question Option : No Option Orientation : Vertical

Correct Marks : 1 Wrong Marks : 0.25

Which provision of Constitution provide power to parliament to establish a new state?

Options :

1. ✔ Article 2 & 3
2. ✖ Article 3 & 4
3. ✖ Article 4 & 5
4. ✖ Article 5 & 6

Question Number : 150 Question Id : 16794320755 Question Type : MCQ Option Shuffling : Yes Display Question Number : Yes
Single Line Question Option : No Option Orientation : Vertical

Correct Marks : 1 Wrong Marks : 0.25

संविधान का कौन सा प्रावधान संसद को एक नया राज्य बनाने के लिए शक्ति प्रदान करता है?

Options :

1. ☒ अनुच्छेद 2 और 3

2. ☐ अनुच्छेद 3 और 4

3. ☐ अनुच्छेद 4 और 5

4. ☐ अनुच्छेद 5 और 6

Question Number : 151 Question Id : 16794320756 Question Type : MCQ Option Shuffling : Yes Display Question Number : Yes
Single Line Question Option : No Option Orientation : Vertical

Correct Marks : 1 Wrong Marks : 0.25

Which of the following states has the highest Lok sabha seats?

Options :

1. ☐ West Bengal

2. ☐ Bihar

3. ☒ Maharashtra

4. ☐ Andhra Pradesh

Question Number : 151 Question Id : 16794320756 Question Type : MCQ Option Shuffling : Yes Display Question Number : Yes
Single Line Question Option : No Option Orientation : Vertical

Correct Marks : 1 Wrong Marks : 0.25

निम्नलिखित में से किस राज्य में लोकसभा सीटें सर्वाधिक हैं?

Options :

1. ☐ पश्चिम बंगाल

2. ☐ बिहार

3. ☒ महाराष्ट्र

4. ☐ आंध्र प्रदेश

Question Number : 152 Question Id : 16794320757 Question Type : MCQ Option Shuffling : Yes Display Question Number : Yes
Single Line Question Option : No Option Orientation : Vertical

Correct Marks : 1 Wrong Marks : 0.25

Which one of the is not the power of Parliament?

Options :

1. ✖ Parliament can increase or decrease area of any state.
2. ✖ It can change the boundaries of any state.
3. ✖ Can change the name of any state.
4. ✔ Can impose any language in the state.

Question Number : 152 Question Id : 16794320757 Question Type : MCQ Option Shuffling : Yes Display Question Number : Yes
Single Line Question Option : No Option Orientation : Vertical

Correct Marks : 1 Wrong Marks : 0.25

निम्नलिखित में से कौन संसद की शक्ति नहीं है?

Options :

1. ✖ संसद किसी भी राज्य के क्षेत्र को बढ़ा या घटा सकती है
2. ✖ यह किसी भी राज्य की सीमाओं को बदल सकती है
3. ✖ किसी भी राज्य का नाम बदल सकती है
4. ✔ राज्य में किसी भी भाषा को थोप सकती है

Question Number : 153 Question Id : 16794320758 Question Type : MCQ Option Shuffling : Yes Display Question Number : Yes
Single Line Question Option : No Option Orientation : Vertical

Correct Marks : 1 Wrong Marks : 0.25

Below is the list of Rajya Sabha Seats for different states which one of these is correct?

Options :

Andhra Pradesh-18

Gujarat – 18

Tamil nadu – 12

1. ✖ Rajasthan – 31

Andhra Pradesh- 11

Gujarat – 11

Tamil nadu – 18

2. ✔ Rajasthan – 10

- Andhra Pradesh- 16
Gujarat – 18
Tamil nadu – 10
3. ✖ Rajasthan – 19

- Andhra Pradesh- 11
Gujarat – 16
Tamil nadu – 18
4. ✖ Rajasthan – 19

Question Number : 153 Question Id : 16794320758 Question Type : MCQ Option Shuffling : Yes Display Question Number : Yes
Single Line Question Option : No Option Orientation : Vertical

Correct Marks : 1 Wrong Marks : 0.25

अलग-अलग राज्यों के लिए राज्यसभा के सीटों की सूची नीचे दी गई है, इनमें से कौन एक सही है?

Options :

- आंध्र प्रदेश -18
गुजरात - 18
तमिलनाडु - 12
1. ✖ राजस्थान - 31

- आंध्र प्रदेश - 11
गुजरात - 11
तमिलनाडु - 18
2. ✔ राजस्थान - 10

- आंध्र प्रदेश -16
गुजरात - 18
तमिलनाडु - 10
3. ✖ राजस्थान - 19

- आंध्र प्रदेश - 11
गुजरात - 16
तमिलनाडु - 18
4. ✖ राजस्थान - 19

Question Number : 154 Question Id : 16794320759 Question Type : MCQ Option Shuffling : Yes Display Question Number : Yes
Single Line Question Option : No Option Orientation : Vertical

Correct Marks : 1 Wrong Marks : 0.25

What is the duration of Question hour in Lok sabha and Rajya Sabha?

Options :

1. ☒ 1 hour before session
2. ☐ 2 hour before session
3. ☐ 1 hour 30 minute before session
4. ☐ 30 minute before session

Question Number : 154 Question Id : 16794320759 Question Type : MCQ Option Shuffling : Yes Display Question Number : Yes
Single Line Question Option : No Option Orientation : Vertical

Correct Marks : 1 Wrong Marks : 0.25

लोकसभा और राज्यसभा में प्रश्नकाल की अवधि क्या है?

Options :

1. ☒ सत्र से 1 घंटा पहले
2. ☐ सत्र से 2 घंटे पहले
3. ☐ सत्र से 1 घंटे 30 मिनट पहले
4. ☐ सत्र से 30 मिनट पहले

Question Number : 155 Question Id : 16794320760 Question Type : MCQ Option Shuffling : Yes Display Question Number : Yes
Single Line Question Option : No Option Orientation : Vertical

Correct Marks : 1 Wrong Marks : 0.25

By Which amendment of constitution the panchayati Raj system's sub- article was added?

Options :

1. ☐ Article 71 & 72
2. ☐ Article 70 & 71
3. ☒ Article 73 & 74
4. ☐ None of these

Question Number : 155 Question Id : 16794320760 Question Type : MCQ Option Shuffling : Yes Display Question Number : Yes
Single Line Question Option : No Option Orientation : Vertical

Correct Marks : 1 Wrong Marks : 0.25

संविधान के किस संशोधन से पंचायती राज प्रणाली की उप-धारा जोड़ी गई थी?

Options :

1. ✖ अनुच्छेद 71 और 72
2. ✖ अनुच्छेद 70 और 71
3. ✔ अनुच्छेद 73 और 74
4. ✖ इनमें से कोई नहीं

Question Number : 156 Question Id : 16794320761 Question Type : MCQ Option Shuffling : Yes Display Question Number : Yes
Single Line Question Option : No Option Orientation : Vertical

Correct Marks : 1 Wrong Marks : 0.25

Different arguments are usually put forth in favor of and against power sharing.

Identify those which are in favor of power sharing:

- A) Reduced conflict among different communities.
- B) Decrease the possibility of arbitrariness.
- C) Delay decision making process.
- D) Accommodates diversities.
- E) Increases inability and divisiveness.
- F) Strengthen the unity of the country.
- G) Divided the people.

Options :

1. ✔ A, B, D, F
2. ✖ A, C, E, F
3. ✖ A, B, D, G
4. ✖ B, C, D, G

Question Number : 156 Question Id : 16794320761 Question Type : MCQ Option Shuffling : Yes Display Question Number : Yes
Single Line Question Option : No Option Orientation : Vertical

Correct Marks : 1 Wrong Marks : 0.25

आमतौर पर शक्ति साझाकरण के पक्ष और विपक्ष में अलग-अलग तर्क दिए जाते हैं। उन लोगों की पहचान करें जो शक्ति साझा करने के पक्ष में हैं।

- A) विभिन्न समुदायों के बीच संघर्ष कम करना
- B) मध्यस्थता की संभावना कम करना
- C) निर्णय लेने की प्रक्रिया में देरी करना
- D) विविधता को समायोजित करना
- E) अक्षमता और विभाजन को बढ़ाना
- F) देश की एकता को सुदृढ़ करना
- G) लोगों को विभाजित करना

Options :

- 1. ☒ A, B, D, F
- 2. ☐ A, C, E, F
- 3. ☐ A, B, D, G
- 4. ☐ B, C, D, G

Question Number : 157 Question Id : 16794320762 Question Type : MCQ Option Shuffling : Yes Display Question Number : Yes
Single Line Question Option : No Option Orientation : Vertical
Correct Marks : 1 Wrong Marks : 0.25

In _____ year an act was passed to recognize Sinhala as the only official language in Sri Lanka.

Options :

- 1. ☐ 1948 AD
- 2. ☐ 1965 AD
- 3. ☒ 1956 AD
- 4. ☐ 1962 AD

Question Number : 157 Question Id : 16794320762 Question Type : MCQ Option Shuffling : Yes Display Question Number : Yes
Single Line Question Option : No Option Orientation : Vertical
Correct Marks : 1 Wrong Marks : 0.25

_____ वर्ष में सिंहल को श्रीलंका में एकमात्र आधिकारिक भाषा के रूप में पहचानने के लिए एक अधिनियम पारित किया गया था।

Options :

- 1. ☐ 1948 ईसवी

2. ✖ 1965 ईसवी

3. ✔ 1956 ईसवी

4. ✖ 1962 ईसवी

Question Number : 158 Question Id : 16794320763 Question Type : MCQ Option Shuffling : Yes Display Question Number : Yes
Single Line Question Option : No Option Orientation : Vertical

Correct Marks : 1 Wrong Marks : 0.25

Among the following which country suffered disintegration due to political fights on the basis of religious and ethnic identities?

Options :

1. ✖ Belgium

2. ✔ Yugoslavia

3. ✖ Germany

4. ✖ Netherland

Question Number : 158 Question Id : 16794320763 Question Type : MCQ Option Shuffling : Yes Display Question Number : Yes
Single Line Question Option : No Option Orientation : Vertical

Correct Marks : 1 Wrong Marks : 0.25

निम्नलिखित में से किस देश को धार्मिक और जातीय पहचान के आधार पर हुए राजनीतिक झगड़े के कारण विघटन का सामना करना पड़ा?

Options :

1. ✖ बेल्जियम

2. ✔ यूगोस्लाविया

3. ✖ जर्मनी

4. ✖ नीदरलैंड

Question Number : 159 Question Id : 16794320764 Question Type : MCQ Option Shuffling : Yes Display Question Number : Yes
Single Line Question Option : No Option Orientation : Vertical

Correct Marks : 1 Wrong Marks : 0.25

Which of the following countries have two party system?

Options :

1. ✖ China
2. ✔ USA
3. ✖ India
4. ✖ Pakistan

Question Number : 159 Question Id : 16794320764 Question Type : MCQ Option Shuffling : Yes Display Question Number : Yes
Single Line Question Option : No Option Orientation : Vertical

Correct Marks : 1 Wrong Marks : 0.25

निम्नलिखित में से किन देशों में दो पार्टी व्यवस्था है?

Options :

1. ✖ चीन
2. ✔ अमेरीका
3. ✖ इंडिया
4. ✖ पाकिस्तान

Question Number : 160 Question Id : 16794320765 Question Type : MCQ Option Shuffling : Yes Display Question Number : Yes
Single Line Question Option : No Option Orientation : Vertical

Correct Marks : 1 Wrong Marks : 0.25

Communist Party of India Marxist was founded in which year?

Options :

1. ✖ 1925
2. ✖ 1980
3. ✖ 1984
4. ✔ 1964

Question Number : 160 Question Id : 16794320765 Question Type : MCQ Option Shuffling : Yes Display Question Number : Yes
Single Line Question Option : No Option Orientation : Vertical

Correct Marks : 1 Wrong Marks : 0.25

भारती कम्युनिस्ट पार्टी मार्क्सवादी की स्थापना किस वर्ष हुई थी?

Options :

1. ✖ 1925

2. ✖ 1980

3. ✖ 1984

4. ✔ 1964

Subject Related

Group Number :	9
Group Id :	167943802
Group Maximum Duration :	0
Group Minimum Duration :	0
Revisit allowed for view? :	No
Revisit allowed for edit? :	No
Break time:	0
Group Marks:	20
Revisit allowed for group Instructions? :	Yes
Maximum Instruction Time:	0
Minimum Instruction Time:	0

Subject Related

Section Id :	167943867
Section Number :	1
Section type :	Online
Mandatory or Optional:	Mandatory
Number of Questions:	20
Number of Questions to be attempted:	20
Section Marks:	20
Display Number Panel:	Yes
Group All Questions:	No

Sub-Section Number:	1
Sub-Section Id:	1679431328
Question Shuffling Allowed :	Yes

Question Number : 161 Question Id : 16794320766 Question Type : MCQ Option Shuffling : Yes Display Question Number : Yes
Single Line Question Option : No Option Orientation : Vertical

Correct Marks : 1 Wrong Marks : 0.25

Identify what kind of democratic challenge is this Iraq wide spread sectarian violence as the new government fails to establish its authority.

Options :

1. ✔ Foundational challenge of democracy

2. ✖ Challenge of expansion

3. ✖ Deepening of democracy

4. ✖ None of these

Question Number : 161 Question Id : 16794320766 Question Type : MCQ Option Shuffling : Yes Display Question Number : Yes
Single Line Question Option : No Option Orientation : Vertical

Correct Marks : 1 Wrong Marks : 0.25

यह बताएं कि इराक इस समय किस तरह के लोकतांत्रिक चुनौतियों का सामना कर रहा है, क्योंकि सांप्रदायिक हिंसा के प्रसार से नई सरकार अपना अधिकार स्थापित करने में विफल रही है।

Options :

1. ✔ लोकतंत्र की मौलिक चुनौती

2. ✖ विस्तार की चुनौती

3. ✖ लोकतंत्र की गहराई

4. ✖ इनमें से कोई नहीं

Question Number : 162 Question Id : 16794320767 Question Type : MCQ Option Shuffling : Yes Display Question Number : Yes
Single Line Question Option : No Option Orientation : Vertical

Correct Marks : 1 Wrong Marks : 0.25

When was popular movement started in Nepal?

Options :

1. ✔ April 2006

2. ✖ February 2006

3. ✖ March 1990

4. ✖ March 2005

Question Number : 162 Question Id : 16794320767 Question Type : MCQ Option Shuffling : Yes Display Question Number : Yes
Single Line Question Option : No Option Orientation : Vertical

Correct Marks : 1 Wrong Marks : 0.25

नेपाल में लोकप्रिय जन आंदोलन कब शुरू हुआ था?

Options :

1. ✔ अप्रैल 2006

2. ✖ फरवरी 2006

3. ✖ मार्च 1990

4. ✖ मार्च 2005

Question Number : 163 Question Id : 16794320768 Question Type : MCQ Option Shuffling : Yes Display Question Number : Yes
Single Line Question Option : No Option Orientation : Vertical

Correct Marks : 1 Wrong Marks : 0.25

Narmada Bachao Andolan is a good example of _____.

Options :

1. ✖ Interest group

2. ✖ Political party

3. ✖ Pressure Group

4. ✔ Movement

Question Number : 163 Question Id : 16794320768 Question Type : MCQ Option Shuffling : Yes Display Question Number : Yes
Single Line Question Option : No Option Orientation : Vertical

Correct Marks : 1 Wrong Marks : 0.25

नर्मदा बचाओ आंदोलन _____ का एक अच्छा उदाहरण है।

Options :

1. ✖ आपसी हित समूह

2. ✖ राजनीतिक दल

3. ✖ दबाव समूह

4. ✔ आंदोलन

Question Number : 164 Question Id : 16794320769 Question Type : MCQ Option Shuffling : Yes Display Question Number : Yes
Single Line Question Option : No Option Orientation : Vertical

Correct Marks : 1 Wrong Marks : 0.25

Which of these is not correctly matched?

Options :

1. ✖ Nepal - SPA

2. ✖ Bolivia - FEDECOR

3. ✔ BAMCEF - USA

4. ✖ None of these

Question Number : 164 Question Id : 16794320769 Question Type : MCQ Option Shuffling : Yes Display Question Number : Yes
Single Line Question Option : No Option Orientation : Vertical

Correct Marks : 1 Wrong Marks : 0.25

इनमें से कौन सा सही मिलान नहीं हुआ है?

Options :

1. ✖ नेपाल - एस.पी.ए.

2. ✖ बोलीविया - फेडेकोर

3. ✔ बामसेफ - यू.एस.ए

4. ✖ इनमें से कोई नहीं

Question Number : 165 Question Id : 16794320770 Question Type : MCQ Option Shuffling : Yes Display Question Number : Yes
Single Line Question Option : No Option Orientation : Vertical

Correct Marks : 1 Wrong Marks : 0.25

The Green belt movement of Kenya was led by _____.

Options :

1. ✖ Nelson Mandela

2. ✖ Baba Amte

3. ✖ Thambu Mabiki

4. ✔ Wangari Maathai

Question Number : 165 Question Id : 16794320770 Question Type : MCQ Option Shuffling : Yes Display Question Number : Yes
Single Line Question Option : No Option Orientation : Vertical

Correct Marks : 1 Wrong Marks : 0.25

केनिया के ग्रीन बेल्ट आंदोलन का नेतृत्व _____ ने किया था।

Options :

1. ✖ नेल्सन मंडेला

- 2. ✖ बाबा आमटे
- 3. ✖ थंबू मबिकी
- 4. ✔ वांगारी माथाई

Question Number : 166 Question Id : 16794320771 Question Type : MCQ Option Shuffling : Yes Display Question Number : Yes
Single Line Question Option : No Option Orientation : Vertical

Correct Marks : 1 Wrong Marks : 0.25

Which one of these is not a Pressure group?

Options :

- 1. ✖ AITUC
- 2. ✖ INTUC
- 3. ✖ ABVP
- 4. ✔ INC

Question Number : 166 Question Id : 16794320771 Question Type : MCQ Option Shuffling : Yes Display Question Number : Yes
Single Line Question Option : No Option Orientation : Vertical

Correct Marks : 1 Wrong Marks : 0.25

इनमें से कौन सा दबाव समूह नहीं है?

Options :

- 1. ✖ ए.आई.टी.यु.सी.
- 2. ✖ आई.एन.टी.यु.सी.
- 3. ✖ ए.बी.वी.पी.
- 4. ✔ आई.एन.सी.

Question Number : 167 Question Id : 16794320772 Question Type : MCQ Option Shuffling : Yes Display Question Number : Yes
Single Line Question Option : No Option Orientation : Vertical

Correct Marks : 1 Wrong Marks : 0.25

In which of the following Articles of Indian constitution the Election Provision are mentioned?

Options :

- 1. ✔ 324-329

2. ✖ 329-334

3. ✖ 334-329

4. ✖ 339-334

Question Number : 167 Question Id : 16794320772 Question Type : MCQ Option Shuffling : Yes Display Question Number : Yes
Single Line Question Option : No Option Orientation : Vertical

Correct Marks : 1 Wrong Marks : 0.25

भारतीय संविधान के निम्नलिखित किस अनुच्छेद में चुनावी प्रावधान का उल्लेख किया गया है?

Options :

1. ✔ 324-329

2. ✖ 329-334

3. ✖ 334-329

4. ✖ 339-334

Question Number : 168 Question Id : 16794320773 Question Type : MCQ Option Shuffling : Yes Display Question Number : Yes
Single Line Question Option : No Option Orientation : Vertical

Correct Marks : 1 Wrong Marks : 0.25

According to B.R. Ambedkar which of the following provisions is a part of one of the criticisms of Indian Constitutions?

Options :

1. ✖ Fedral System

2. ✖ Fundamental Duties

3. ✔ Fundamental rights

4. ✖ Directive principles of state policy

Question Number : 168 Question Id : 16794320773 Question Type : MCQ Option Shuffling : Yes Display Question Number : Yes
Single Line Question Option : No Option Orientation : Vertical

Correct Marks : 1 Wrong Marks : 0.25

बी.आर. अंबेडकर के मुताबिक निम्नलिखित प्रावधानों में से कौन सा भारतीय संविधान के आलोचना का एक हिस्सा है?

Options :

1. ✖ संघीय प्रणाली

2. ✖ मौलिक कर्तव्यों
3. ✔ मौलिक अधिकार
4. ✖ राज्य नीति के निर्देशक सिद्धांत

Question Number : 169 Question Id : 16794320774 Question Type : MCQ Option Shuffling : Yes Display Question Number : Yes
Single Line Question Option : No Option Orientation : Vertical

Correct Marks : 1 Wrong Marks : 0.25

"I am in favor of strong center" who said these words?

Options :

1. ✖ Sardar Vallabh Bhai Patel
2. ✖ Jawahar Lal Nehru
3. ✖ Dr. Rajendra Prasad
4. ✔ B.R. Ambedkar

Question Number : 169 Question Id : 16794320774 Question Type : MCQ Option Shuffling : Yes Display Question Number : Yes
Single Line Question Option : No Option Orientation : Vertical

Correct Marks : 1 Wrong Marks : 0.25

"मैं मजबूत केंद्र सरकार के पक्ष में हूँ" इन शब्दों को किसने कहा था?

Options :

1. ✖ सरदार वल्लभ भाई पटेल
2. ✖ जवाहर लाल नेहरू
3. ✖ डॉ. राजेंद्र प्रसाद
4. ✔ बी.आर. अंबेडकर

Question Number : 170 Question Id : 16794320775 Question Type : MCQ Option Shuffling : Yes Display Question Number : Yes
Single Line Question Option : No Option Orientation : Vertical

Correct Marks : 1 Wrong Marks : 0.25

73rd and 74th amendment for Panchayati Raj was not mandatory for which below mention states and Union territories?

Options :

1. ✓

2. ✖

3. ✖

4. ✖

Correct Marks : 1 Wrong Marks : 0.25

Options :

1. ✓

2. ✖

लक्षद्वीप
दीव
चंडीगढ़
3. ✖ दिल्ली

गोवा
चंडीगढ़
दीव
4. ✖ दिल्ली

Question Number : 171 Question Id : 16794320776 Question Type : MCQ Option Shuffling : Yes Display Question Number : Yes
Single Line Question Option : No Option Orientation : Vertical

Correct Marks : 1 Wrong Marks : 0.25

In which year Nagarjunasagar project was launched?

Options :

1. ✖ 1975

2. ✖ 1965

3. ✔ 1956

4. ✖ 1967

Question Number : 171 Question Id : 16794320776 Question Type : MCQ Option Shuffling : Yes Display Question Number : Yes
Single Line Question Option : No Option Orientation : Vertical

Correct Marks : 1 Wrong Marks : 0.25

किस वर्ष नागार्जुनसागर परियोजना शुरू की गई थी?

Options :

1. ✖ 1975

2. ✖ 1965

3. ✔ 1956

4. ✖ 1967

Question Number : 172 Question Id : 16794320777 Question Type : MCQ Option Shuffling : Yes Display Question Number : Yes
Single Line Question Option : No Option Orientation : Vertical

Correct Marks : 1 Wrong Marks : 0.25

What is the total area of Andaman and Nicobar Islands?

Options :

1. ✖ 8921 sqkm
2. ✔ 8249 sqkm
3. ✖ 8532 sqkm
4. ✖ 8191 sqkm

Question Number : 172 Question Id : 16794320777 Question Type : MCQ Option Shuffling : Yes Display Question Number : Yes
Single Line Question Option : No Option Orientation : Vertical

Correct Marks : 1 Wrong Marks : 0.25

अंदमान और निकोबार द्वीप समूह का कुल क्षेत्रफल कितना है?

Options :

1. ✖ 8921 वर्गकिमी
2. ✔ 8249 वर्गकिमी
3. ✖ 8532 वर्गकिमी
4. ✖ 8191 वर्गकिमी

Question Number : 173 Question Id : 16794320778 Question Type : MCQ Option Shuffling : Yes Display Question Number : Yes
Single Line Question Option : No Option Orientation : Vertical

Correct Marks : 1 Wrong Marks : 0.25

What is the full form of NRSA?

Options :

1. ✖ The National Research and Science Agency.
2. ✖ The Non-Religious and Secular Association.
3. ✔ The National Remote Sensing Agency.
4. ✖ The National Remote Sensing Association.

Question Number : 173 Question Id : 16794320778 Question Type : MCQ Option Shuffling : Yes Display Question Number : Yes
Single Line Question Option : No Option Orientation : Vertical

Correct Marks : 1 Wrong Marks : 0.25

एन.आर.एस.ए का पूरा रूप क्या है?

Options :

1. ✖ द नेशनल रिसर्च एंड साइंस एजेंसी
2. ✖ द नॉन-रीलिजियस एंड सेक्यूलर एसोसिएशन
3. ✔ द नेशनल रिमोट सेंसिंग एजेंसी
4. ✖ द नेशनल रिमोट सेंसिंग एसोसिएशन

Question Number : 174 Question Id : 16794320779 Question Type : MCQ Option Shuffling : Yes Display Question Number : Yes
Single Line Question Option : No Option Orientation : Vertical

Correct Marks : 1 Wrong Marks : 0.25

Match The Columns:

- | | |
|--------------|--------------------|
| A) Horizon A | i) Sub-soil |
| B) Horizon B | ii) Bedrock |
| C) Horizon C | iii) True soil |
| D) Horizon D | iv) weathered soil |

Options :

1. ✔ A (iii), B (i), C (iv), D (ii)
2. ✖ A (iv), B (ii), C (iii), D (i)
3. ✖ A (iii), B (iv), C (i), D (ii)
4. ✖ A (ii), B (iv), C (iii), D (i)

Question Number : 174 Question Id : 16794320779 Question Type : MCQ Option Shuffling : Yes Display Question Number : Yes
Single Line Question Option : No Option Orientation : Vertical

Correct Marks : 1 Wrong Marks : 0.25

कॉलम का मिलान करें।

- | | |
|--------------|----------------------|
| A) क्षितिज A | i) उप-मिट्टी |
| B) क्षितिज B | ii) तलशिला |
| C) क्षितिज C | iii) सही मिट्टी |
| D) क्षितिज D | iv) ऋतुक्षरित मिट्टी |

Options :

1. ✔ A(iii), B(i), C(iv), D(ii)

2. ✖ A(iv), B(ii), C(iii), D(i)

3. ✖ A(iii), B(iv), C(i), D(ii)

4. ✖ A(ii), B(iv), C(iii), D(i)

Question Number : 175 Question Id : 16794320780 Question Type : MCQ Option Shuffling : Yes Display Question Number : Yes
Single Line Question Option : No Option Orientation : Vertical

Correct Marks : 1 Wrong Marks : 0.25

Which of the following is the first corporatized port of India?

Options :

1. ✖ Kandla Port

2. ✖ Tutikorian Port

3. ✔ Ennore Port

4. ✖ Paradeep Port

Question Number : 175 Question Id : 16794320780 Question Type : MCQ Option Shuffling : Yes Display Question Number : Yes
Single Line Question Option : No Option Orientation : Vertical

Correct Marks : 1 Wrong Marks : 0.25

निम्नलिखित में से कौन सा भारत का पहला निगमीकृत बंदरगाह है?

Options :

1. ✖ कांडला बंदरगाह

2. ✖ तूतीकोरिन बंदरगाह

3. ✔ एन्नोर बंदरगाह

4. ✖ पारादीप बंदरगाह

Question Number : 176 Question Id : 16794320781 Question Type : MCQ Option Shuffling : Yes Display Question Number : Yes
Single Line Question Option : No Option Orientation : Vertical

Correct Marks : 1 Wrong Marks : 0.25

Which of the following is correct statement related to Biomass?

Options :

1. ✖ Quantity or weight of living matter per unit area and per unit time.

2. ✖ Comprised of plants and animals.

3. ✔

Both Quantity or weight of living matter per unit area and per unit time, and Comprised of plants and animals are correct.

4. ✖

Both Quantity or weight of living matter per unit area and per unit time, and Comprised of plants and animals are incorrect.

Question Number : 176 Question Id : 16794320781 Question Type : MCQ Option Shuffling : Yes Display Question Number : Yes
Single Line Question Option : No Option Orientation : Vertical

Correct Marks : 1 Wrong Marks : 0.25

बायोमास के संबंध में निम्नलिखित में से कौन सा सही कथन है?

Options :

1. ✖ प्रति यूनिट क्षेत्र और प्रति इकाई समय में रहने वाले पदार्थ की मात्रा या वजन।

2. ✖ पौधों और जानवरों का समाविष्ट।

3. ✔

प्रति यूनिट क्षेत्र और प्रति इकाई समय में रहने वाले पदार्थ की मात्रा या वजन और पौधों और जानवरों का समाविष्ट दोनों विकल्प सही हैं।

4. ✖

प्रति यूनिट क्षेत्र और प्रति इकाई समय में रहने वाले पदार्थ की मात्रा या वजन और पौधों और जानवरों का समाविष्ट दोनों विकल्प गलत हैं।

Question Number : 177 Question Id : 16794320782 Question Type : MCQ Option Shuffling : Yes Display Question Number : Yes
Single Line Question Option : No Option Orientation : Vertical

Correct Marks : 1 Wrong Marks : 0.25

Considering the following statements, which of the following statements is/are correct.

1. Natural gas occurs in the Gondwana beds.
2. Mica occurs in abundance in Kodarma.
3. Dharwars are famous for petroleum.

Which of the statement given above is/are correct?

Options :

1. ✖ I & II

2. ✔ II only

3. ✖ II & III

4. ✖ III only

Question Number : 177 Question Id : 16794320782 Question Type : MCQ Option Shuffling : Yes Display Question Number : Yes
Single Line Question Option : No Option Orientation : Vertical

Correct Marks : 1 Wrong Marks : 0.25

निम्नलिखित कथनों को ध्यान में रखते हुए, निम्नलिखित में से कौन सा कथन सही है/हैं?

I. गोंडवाना बेड्स में प्राकृतिक गैस होती है।

II. कोडरमा में बहुतायत में मीका मिलता है।

III. धारवार पेट्रोलियम के लिए प्रसिद्ध हैं।

ऊपर दिए गए बयान में से कौन सा सही है/हैं?

Options :

1. ✖ I और II

2. ✔ केवल II

3. ✖ II और III

4. ✖ केवल III

Question Number : 178 Question Id : 16794320783 Question Type : MCQ Option Shuffling : Yes Display Question Number : Yes
Single Line Question Option : No Option Orientation : Vertical

Correct Marks : 1 Wrong Marks : 0.25

What is Khamsin?

Options :

1. ✖ Precipitation

2. ✖ Stable air mass

3. ✔ Local winds

4. ✖ Tropical monsoon climate

Question Number : 178 Question Id : 16794320783 Question Type : MCQ Option Shuffling : Yes Display Question Number : Yes
Single Line Question Option : No Option Orientation : Vertical

Correct Marks : 1 Wrong Marks : 0.25

खामसिन क्या है?

Options :

1. ✖ अवक्षेपण

2. ✖ स्थिर वायु द्रव्यमान

3. ✔ स्थानीय हवाएं

4. ✖ उष्णकटिबंधीय मानसून जलवायु

Question Number : 179 Question Id : 16794320784 Question Type : MCQ Option Shuffling : Yes Display Question Number : Yes
Single Line Question Option : No Option Orientation : Vertical

Correct Marks : 1 Wrong Marks : 0.25

What is the Position of Moon in Perigee?

Options :

1. ✖ Nearest to quarter

2. ✖ Nearest to poles

3. ✔ Nearest to earth

4. ✖ Farthest to earth

Question Number : 179 Question Id : 16794320784 Question Type : MCQ Option Shuffling : Yes Display Question Number : Yes
Single Line Question Option : No Option Orientation : Vertical

Correct Marks : 1 Wrong Marks : 0.25

भू-समीपक में चंद्रमा की स्थिति क्या है?

Options :

1. ✖ चतुर्थश के नज़दीक

2. ✖ ध्रुवों के नज़दीक

3. ✔ पृथ्वी के नज़दीक

4. ✖ पृथ्वी से सबसे दूर

Question Number : 180 Question Id : 16794320785 Question Type : MCQ Option Shuffling : Yes Display Question Number : Yes
Single Line Question Option : No Option Orientation : Vertical

Correct Marks : 1 Wrong Marks : 0.25

Seiche is the type of ____.

Options :

1. ✖ A glacier
2. ✖ A current
3. ✔ A wave
4. ✖ Natural vegetation

Question Number : 180 Question Id : 16794320785 Question Type : MCQ Option Shuffling : Yes Display Question Number : Yes
Single Line Question Option : No Option Orientation : Vertical

Correct Marks : 1 Wrong Marks : 0.25

जलदोहन (सीच) _____ का प्रकार है।

Options :

1. ✖ एक ग्लेशियर
2. ✖ एक लहर
3. ✔ एक तरंग
4. ✖ प्राकृतिक वनस्पति

Subject Related

Group Number :	10
Group Id :	167943803
Group Maximum Duration :	0
Group Minimum Duration :	120
Revisit allowed for view? :	No
Revisit allowed for edit? :	No
Break time:	0
Group Marks:	20
Revisit allowed for group Instructions? :	Yes
Maximum Instruction Time:	0
Minimum Instruction Time:	0

Subject Related

Section Id :	167943868
Section Number :	1
Section type :	Online
Mandatory or Optional:	Mandatory
Number of Questions:	20
Number of Questions to be attempted:	20
Section Marks:	20

Display Number Panel:

Yes

Group All Questions:

No

Sub-Section Number:

1

Sub-Section Id:

1679431329

Question Shuffling Allowed :

Yes

Question Number : 181 Question Id : 16794320786 Question Type : MCQ Option Shuffling : Yes Display Question Number : Yes
Single Line Question Option : No Option Orientation : Vertical

Correct Marks : 1 Wrong Marks : 0.25

What is Moose?

Options :

1. ✖ Type of natural vegetation
2. ✔ Type of animals
3. ✖ Type of wind
4. ✖ Type of glacier

Question Number : 181 Question Id : 16794320786 Question Type : MCQ Option Shuffling : Yes Display Question Number : Yes
Single Line Question Option : No Option Orientation : Vertical

Correct Marks : 1 Wrong Marks : 0.25

मूस क्या है?

Options :

1. ✖ प्राकृतिक वनस्पति का प्रकार
2. ✔ जानवरों का प्रकार
3. ✖ हवा का प्रकार
4. ✖ ग्लेशियर का प्रकार

Question Number : 182 Question Id : 16794320787 Question Type : MCQ Option Shuffling : Yes Display Question Number : Yes
Single Line Question Option : No Option Orientation : Vertical

Correct Marks : 1 Wrong Marks : 0.25

Who said, "Give me detailed map of country and I shall conquer it"?

Options :

1. ✖ Mackinder
2. ✖ Humbolt

3. ✓ Hitler

4. ✗ Wegner

Question Number : 182 Question Id : 16794320787 Question Type : MCQ Option Shuffling : Yes Display Question Number : Yes
Single Line Question Option : No Option Orientation : Vertical

Correct Marks : 1 Wrong Marks : 0.25

किसने कहा, "मुझे देश का विस्तृत नक्शा दें और मैं इसे जीत लूंगा"?

Options :

1. ✗ मैकिंडर

2. ✗ हम्बोल्ट

3. ✓ हिटलर

4. ✗ वेग्नर

Question Number : 183 Question Id : 16794320788 Question Type : MCQ Option Shuffling : Yes Display Question Number : Yes
Single Line Question Option : No Option Orientation : Vertical

Correct Marks : 1 Wrong Marks : 0.25

When was the Survey of India established?

Options :

1. ✗ 1867

2. ✗ 1864

3. ✓ 1767

4. ✗ 1764

Question Number : 183 Question Id : 16794320788 Question Type : MCQ Option Shuffling : Yes Display Question Number : Yes
Single Line Question Option : No Option Orientation : Vertical

Correct Marks : 1 Wrong Marks : 0.25

सर्वे ऑफ इंडिया (भारत का सर्वेक्षण) कब स्थापित किया गया था?

Options :

1. ✗ 1867

2. ✗ 1864

3. ✓ 1767

4. ✖ 1764

Question Number : 184 Question Id : 16794320789 Question Type : MCQ Option Shuffling : Yes Display Question Number : Yes
Single Line Question Option : No Option Orientation : Vertical

Correct Marks : 1 Wrong Marks : 0.25

What is the relative humidity of Griffith Taylor's climograph?

Options :

1. ✖ 10% to 70%

2. ✖ 10% to 60%

3. ✖ 20% to 70%

4. ✔ 20% to 80%

Question Number : 184 Question Id : 16794320789 Question Type : MCQ Option Shuffling : Yes Display Question Number : Yes
Single Line Question Option : No Option Orientation : Vertical

Correct Marks : 1 Wrong Marks : 0.25

ग्रिफिथ टेलर के क्लाइमोग्राफ (जलवायु आरेख) की सापेक्ष आर्द्रता क्या है?

Options :

1. ✖ 10% से 70%

2. ✖ 10% से 60%

3. ✖ 20% से 70%

4. ✔ 20% से 80%

Question Number : 185 Question Id : 16794320790 Question Type : MCQ Option Shuffling : Yes Display Question Number : Yes
Single Line Question Option : No Option Orientation : Vertical

Correct Marks : 1 Wrong Marks : 0.25

What is the surface temperature of sun?

Options :

1. ✖ 9940k

2. ✔ 5778k

3. ✖ 3550k

4. ✖ 4290k

Question Number : 185 Question Id : 16794320790 Question Type : MCQ Option Shuffling : Yes Display Question Number : Yes
Single Line Question Option : No Option Orientation : Vertical

Correct Marks : 1 Wrong Marks : 0.25

सूर्य की सतह का तापमान कितना है?

Options :

1. ✖ 9940k

2. ✔ 5778k

3. ✖ 3550k

4. ✖ 4290k

Question Number : 186 Question Id : 16794320791 Question Type : MCQ Option Shuffling : Yes Display Question Number : Yes
Single Line Question Option : No Option Orientation : Vertical

Correct Marks : 1 Wrong Marks : 0.25

Prasar Bharati came into existence in:

Options :

1. ✖ 1991

2. ✖ 1994

3. ✔ 1997

4. ✖ 1999

Question Number : 186 Question Id : 16794320791 Question Type : MCQ Option Shuffling : Yes Display Question Number : Yes
Single Line Question Option : No Option Orientation : Vertical

Correct Marks : 1 Wrong Marks : 0.25

प्रसार भारती अस्तित्व में कब आया?

Options :

1. ✖ 1991

2. ✖ 1994

3. ✔ 1997

4. ✖ 1999

Question Number : 187 Question Id : 16794320792 Question Type : MCQ Option Shuffling : Yes Display Question Number : Yes
Single Line Question Option : No Option Orientation : Vertical

Correct Marks : 1 Wrong Marks : 0.25

Which of the following latitudes are known as “Horse latitudes”?

Options :

1. ✖ 0 – 25 degrees north and south of the equator
2. ✔ 25 – 35 degrees north and south of the equator
3. ✖ 45 – 65 degrees north and south of the equator
4. ✖ 75 – 90 degrees north and south of the equator

Question Number : 187 Question Id : 16794320792 Question Type : MCQ Option Shuffling : Yes Display Question Number : Yes
Single Line Question Option : No Option Orientation : Vertical

Correct Marks : 1 Wrong Marks : 0.25

निम्नलिखित में से कौन सा अक्षांश "हॉर्स अक्षांश" के रूप में जाना जाता है?

Options :

1. ✖ 0 - 25 डिग्री भूमध्य रेखा के उत्तर और दक्षिण
2. ✔ 25 - 35 डिग्री भूमध्य रेखा के उत्तर और दक्षिण
3. ✖ 45 - 65 डिग्री भूमध्य रेखा के उत्तर और दक्षिण
4. ✖ 75 - 90 डिग्री भूमध्य रेखा के उत्तर और दक्षिण

Question Number : 188 Question Id : 16794320793 Question Type : MCQ Option Shuffling : Yes Display Question Number : Yes
Single Line Question Option : No Option Orientation : Vertical

Correct Marks : 1 Wrong Marks : 0.25

Expand TPDS:

Options :

1. ✖ Total Population Distributed in States
2. ✔ Targeted Public Distribution System
3. ✖ Target People Development System
4. ✖ Total Public Diverse Society

Question Number : 188 Question Id : 16794320793 Question Type : MCQ Option Shuffling : Yes Display Question Number : Yes
Single Line Question Option : No Option Orientation : Vertical

Correct Marks : 1 Wrong Marks : 0.25

टी.पी.डी.एस. का विस्तार करें।

Options :

1. ✖ टोटल पॉपुलेशन डिस्ट्रिब्यूटेड इन स्टेट्स
2. ✔ टारगेटेड पब्लिक डिस्ट्रिब्यूशन सिस्टम
3. ✖ टारगेट पीपल डेवलपमेंट सिस्टम
4. ✖ टोटल पब्लिक डाइवर्स सोसाइटी

Question Number : 189 Question Id : 16794320794 Question Type : MCQ Option Shuffling : Yes Display Question Number : Yes
Single Line Question Option : No Option Orientation : Vertical

Correct Marks : 1 Wrong Marks : 0.25

Which of the following mountain range is in Maharashtra?

Options :

1. ✖ Abor range
2. ✖ Dalma range
3. ✔ Bannoli range
4. ✖ Barail range

Question Number : 189 Question Id : 16794320794 Question Type : MCQ Option Shuffling : Yes Display Question Number : Yes
Single Line Question Option : No Option Orientation : Vertical

Correct Marks : 1 Wrong Marks : 0.25

महाराष्ट्र में निम्नलिखित में से कौन सी पर्वत श्रृंखला है?

Options :

1. ✖ अबोर पर्वत श्रृंखला
2. ✖ दल्मा पर्वत श्रृंखला
3. ✔ बमनोली पर्वत श्रृंखला
4. ✖ बैरेल पर्वत श्रृंखला

Question Number : 190 Question Id : 16794320795 Question Type : MCQ Option Shuffling : Yes Display Question Number : Yes
Single Line Question Option : No Option Orientation : Vertical

Correct Marks : 1 Wrong Marks : 0.25

National urban livelihoods mission was launched in which of the following five-year plan?

Options :

1. ✖ 10th five year plan
2. ✖ 11th five year plan
3. ✔ 12th five year plan
4. ✖ 13th five year plan

Question Number : 190 Question Id : 16794320795 Question Type : MCQ Option Shuffling : Yes Display Question Number : Yes
Single Line Question Option : No Option Orientation : Vertical

Correct Marks : 1 Wrong Marks : 0.25

राष्ट्रीय शहरी आजीविका मिशन किस पंच वर्षीय योजना में शुरू की गई?

Options :

1. ✖ 10^{वीं} पंचवर्षीय योजना
2. ✖ 11^{वीं} पंचवर्षीय योजना
3. ✔ 12^{वीं} पंचवर्षीय योजना
4. ✖ 13^{वीं} पंचवर्षीय योजना

Sub-Section Number: 2
Sub-Section Id: 1679431330
Question Shuffling Allowed : Yes

Question Number : 191 Question Id : 16794320796 Question Type : MCQ Option Shuffling : Yes Display Question Number : Yes
Single Line Question Option : No Option Orientation : Vertical

Correct Marks : 1 Wrong Marks : 0.25

In which year the general assembly has adopted the UN convention on the Rights of the Child?

Options :

1. ✖ 1999
2. ✖ 2000
3. ✖ 1930

4. ✓ 1989

Question Number : 191 Question Id : 16794320796 Question Type : MCQ Option Shuffling : Yes Display Question Number : Yes
Single Line Question Option : No Option Orientation : Vertical

Correct Marks : 1 Wrong Marks : 0.25

किस वर्ष में आम सभा ने बाल अधिकारों पर संयुक्त राष्ट्र सम्मेलन अपनाया है?

Options :

1. ✗ 1999

2. ✗ 2000

3. ✗ 1930

4. ✓ 1989

Question Number : 192 Question Id : 16794320797 Question Type : MCQ Option Shuffling : Yes Display Question Number : Yes
Single Line Question Option : No Option Orientation : Vertical

Correct Marks : 1 Wrong Marks : 0.25

Who is influenced by educational debates in colonial period?

Options :

1. ✓ Jawaharlal Nehru

2. ✗ Mahatma Gandhi

3. ✗ Bhagat Singh

4. ✗ Lal Bahadur Shastri

Question Number : 192 Question Id : 16794320797 Question Type : MCQ Option Shuffling : Yes Display Question Number : Yes
Single Line Question Option : No Option Orientation : Vertical

Correct Marks : 1 Wrong Marks : 0.25

औपनिवेशिक काल में शैक्षिक बहस से कौन प्रभावित है?

Options :

1. ✓ जवाहर लाल नेहरू

2. ✗ महात्मा गांधी

3. ✗ भगत सिंह

4. ✖ लाल बहादुर शास्त्री

Question Number : 193 Question Id : 16794320798 Question Type : MCQ Option Shuffling : Yes Display Question Number : Yes
Single Line Question Option : No Option Orientation : Vertical

Correct Marks : 1 Wrong Marks : 0.25

In what type of education teachers should involved?

Options :

- 1. ✖ Initial education
- 2. ✖ Primary education
- 3. ✔ Tertiary education
- 4. ✖ Secondary education

Question Number : 193 Question Id : 16794320798 Question Type : MCQ Option Shuffling : Yes Display Question Number : Yes
Single Line Question Option : No Option Orientation : Vertical

Correct Marks : 1 Wrong Marks : 0.25

किस तरह के शिक्षा शिक्षकों में शामिल होना चाहिए?

Options :

- 1. ✖ प्रारंभिक शिक्षा
- 2. ✖ प्राथमिक शिक्षा
- 3. ✔ तृतीयक शिक्षा
- 4. ✖ माध्यमिक शिक्षा

Question Number : 194 Question Id : 16794320799 Question Type : MCQ Option Shuffling : Yes Display Question Number : Yes
Single Line Question Option : No Option Orientation : Vertical

Correct Marks : 1 Wrong Marks : 0.25

For how many years that primes had attracted students and mathematicians?

Options :

- 1. ✖ 1000 years
- 2. ✔ 10,000 years
- 3. ✖ 5000 years

4. ✖ 2000 years

Question Number : 194 Question Id : 16794320799 Question Type : MCQ Option Shuffling : Yes Display Question Number : Yes
Single Line Question Option : No Option Orientation : Vertical

Correct Marks : 1 Wrong Marks : 0.25

कितने वर्षों से प्राइम्स ने छात्रों और गणितज्ञों को आकर्षित किया था?

Options :

1. ✖ 1000 वर्ष

2. ✔ 10,000 वर्ष

3. ✖ 5000 वर्ष

4. ✖ 2000 वर्ष

Question Number : 195 Question Id : 16794320800 Question Type : MCQ Option Shuffling : Yes Display Question Number : Yes
Single Line Question Option : No Option Orientation : Vertical

Correct Marks : 1 Wrong Marks : 0.25

How many school aged girls currently in our society are not en-rolled in school?

Options :

1. ✖ 80 million

2. ✖ 50 million

3. ✖ 10 million

4. ✔ 60 million

Question Number : 195 Question Id : 16794320800 Question Type : MCQ Option Shuffling : Yes Display Question Number : Yes
Single Line Question Option : No Option Orientation : Vertical

Correct Marks : 1 Wrong Marks : 0.25

वर्तमान में हमारे समाज में कितने स्कूल वृद्ध लड़कियां स्कूल में नहीं हैं?

Options :

1. ✖ 80 मिलियन

2. ✖ 50 मिलियन

3. ✖ 10 मिलियन

4. ✓ 60 मिलियन

Question Number : 196 Question Id : 16794320801 Question Type : MCQ Option Shuffling : Yes Display Question Number : Yes
Single Line Question Option : No Option Orientation : Vertical

Correct Marks : 1 Wrong Marks : 0.25

What are filled with facts that students are expected to memorize?

Options :

1. ✗ Note books
2. ✗ Running notes
3. ✓ Text books
4. ✗ Rough books

Question Number : 196 Question Id : 16794320801 Question Type : MCQ Option Shuffling : Yes Display Question Number : Yes
Single Line Question Option : No Option Orientation : Vertical

Correct Marks : 1 Wrong Marks : 0.25

तथ्यों से भरा क्या है कि छात्रों को याद रखने की उम्मीद है?

Options :

1. ✗ नोट किताबें
2. ✗ चल रहा नोट्स
3. ✓ पाठ्य पुस्तकें
4. ✗ असहज किताबें

Question Number : 197 Question Id : 16794320802 Question Type : MCQ Option Shuffling : Yes Display Question Number : Yes
Single Line Question Option : No Option Orientation : Vertical

Correct Marks : 1 Wrong Marks : 0.25

What is the collaboration that teacher need to build among students?

Options :

1. ✓ Meaningful collaboration
2. ✗ Art of collaboration
3. ✗ Collaboration about public services

4. ✖ Education collaboration

Question Number : 197 Question Id : 16794320802 Question Type : MCQ Option Shuffling : Yes Display Question Number : Yes
Single Line Question Option : No Option Orientation : Vertical

Correct Marks : 1 Wrong Marks : 0.25

छात्रों के बीच शिक्षक को क्या सहयोग करना है?

Options :

1. ✔ अर्थपूर्ण सहयोग

2. ✖ सहयोग की कला

3. ✖ सार्वजनिक सेवाओं के बारे में सहयोग

4. ✖ शिक्षा सहयोग

Question Number : 198 Question Id : 16794320803 Question Type : MCQ Option Shuffling : Yes Display Question Number : Yes
Single Line Question Option : No Option Orientation : Vertical

Correct Marks : 1 Wrong Marks : 0.25

At which age a student can able to expand scenarios into simple dramatic scripts?

Options :

1. ✖ 10

2. ✖ 8

3. ✔ 11

4. ✖ 15

Question Number : 198 Question Id : 16794320803 Question Type : MCQ Option Shuffling : Yes Display Question Number : Yes
Single Line Question Option : No Option Orientation : Vertical

Correct Marks : 1 Wrong Marks : 0.25

किस उम्र में एक छात्र परिदृश्य को सरल नाटकीय लिपियों में विस्तारित करने में सक्षम हो सकता है?

Options :

1. ✖ 10

2. ✖ 8

3. ✔ 11

4. ✖ 15

Question Number : 199 Question Id : 16794320804 Question Type : MCQ Option Shuffling : Yes Display Question Number : Yes
Single Line Question Option : No Option Orientation : Vertical

Correct Marks : 1 Wrong Marks : 0.25

All children who come to school are born with:

Options :

1. ✖ A desire of studies
2. ✔ A desire of knowledge
3. ✖ A desire of entertainment
4. ✖ A desire of living

Question Number : 199 Question Id : 16794320804 Question Type : MCQ Option Shuffling : Yes Display Question Number : Yes
Single Line Question Option : No Option Orientation : Vertical

Correct Marks : 1 Wrong Marks : 0.25

स्कूल में आने वाले सभी बच्चे _____ पैदा हुए हैं।

Options :

1. ✖ अध्ययन की इच्छा
2. ✔ ज्ञान की इच्छा
3. ✖ मनोरंजन की इच्छा
4. ✖ रहने की इच्छा

Question Number : 200 Question Id : 16794320805 Question Type : MCQ Option Shuffling : Yes Display Question Number : Yes
Single Line Question Option : No Option Orientation : Vertical

Correct Marks : 1 Wrong Marks : 0.25

The Standard of denying inclusive education to a student is:

Options :

1. ✖ Low
2. ✖ Average
3. ✖ Very low
4. ✔ Very high

Question Number : 200 Question Id : 16794320805 Question Type : MCQ Option Shuffling : Yes Display Question Number : Yes
Single Line Question Option : No Option Orientation : Vertical

Correct Marks : 1 Wrong Marks : 0.25

एक छात्र को समावेशी शिक्षा से इंकार करने का मानक _____ है।

Options :

1. ✖ कम

2. ✖ औसत

3. ✖ बहुत कम

4. ✔ बहुत ऊँचा