

DSSSB Exam August 2025

Participant ID	[REDACTED]
Participant Name	[REDACTED]
Test Center Name	iON Digital Zone iDZ 1 Sector 62
Test Date	24/08/2025
Test Time	1:00 PM - 3:00 PM
Subject	TGT English

Section : General intelligence and Reasoning Ability

Q.1 Rajesh starts from point X and drives 10 km towards the west. He takes a left turn and drives 3 km, takes a right turn, and drives 4 km. He takes a left turn and drives 4 km and takes a final left turn and drives 14 km to reach point Y. How far (shortest distance) and towards which direction should he drive in order to reach Point X again?
(All turns are 90-degree turns only unless specified.)

- Ans
- 1. 8 km north
 - 2. 7 km north
 - 3. 10 km north
 - 4. 7 km south

Question ID : 441009879276
Option 1 ID : 4410093470759
Option 2 ID : 4410093470758
Option 3 ID : 4410093470760
Option 4 ID : 4410093470757

Q.2 Based on the English alphabetical order, three of the following four letter-clusters are alike in a certain way and thus form a group. Which letter-cluster DOES NOT belong to that group?
(Note: The odd one out is not based on the number of consonants/vowels or their position in the letter-cluster.)

- Ans
- 1. DHK
 - 2. AEG
 - 3. LPS
 - 4. MQT

Question ID : 441009981466
Option 1 ID : 4410093878331
Option 2 ID : 4410093878330
Option 3 ID : 4410093878333
Option 4 ID : 4410093878332

Q.3 Seven boxes A, B, C, D, K, L and M are kept one over the other but not necessarily in the same order. Only three boxes are kept below D. Only two boxes are kept between D and M. Only A is kept above L. C is kept at some place below B and at some place above K. Which box is kept at the second position from the bottom?

- Ans
- 1. M
 - 2. K
 - 3. A
 - 4. C

Question ID : 441009981608
Option 1 ID : 4410093878901
Option 2 ID : 4410093878900
Option 3 ID : 4410093878898
Option 4 ID : 4410093878899

Q.4 This question is based on the five, three-digit numbers given below.

(Left) 895 512 214 265 654 (Right)

(Example- 697 – First digit = 6, second digit = 9 and third digit = 7)

(NOTE: All operations to be done from left to right.)

What will be the resultant if the second digit of the lowest number is added to the third digit of the highest number?

- Ans
- 1. 4
 - 2. 8
 - 3. 9
 - 4. 6

Question ID : 441009981075
Option 1 ID : 4410093876766
Option 2 ID : 4410093876768
Option 3 ID : 4410093876769
Option 4 ID : 4410093876767

Q.5 What will come in the place of the question mark (?) in the following equation, if '÷' and '-' are interchanged and 'x' and '+' are interchanged?

$$12 \times 35 - 5 + 15 \div 21 = ?$$

- Ans
- 1. 96
 - 2. 86
 - 3. 106
 - 4. 76

Question ID : 441009980508
Option 1 ID : 4410093874512
Option 2 ID : 4410093874511
Option 3 ID : 4410093874513
Option 4 ID : 4410093874510

Q.6 In a certain code language,

'A & B' means 'A is the son of B',

'A @ B' means 'A is the brother of B',

'A ÷ B' means 'A is the wife of B' and

'A - B' means 'A is the father of B'.

Based on the above, how is A related to M if 'A - D ÷ G @ K & M'?

- Ans
- 1. Son's wife's brother
 - 2. Wife's brother
 - 3. Son's wife's father
 - 4. Wife's father

Question ID : 441009809922
Option 1 ID : 4410093193812
Option 2 ID : 4410093193814
Option 3 ID : 4410093193811
Option 4 ID : 4410093193813

Q.7 In a certain code language, 'POND' is coded as '5296' and 'DROP' is coded as '5697'. What is the code for 'R' in that language?

- Ans
- 1. 5
 - 2. 6
 - 3. 9
 - 4. 7

Question ID : 441009981585
Option 1 ID : 4410093878807
Option 2 ID : 4410093878808
Option 3 ID : 4410093878809
Option 4 ID : 4410093878806

Q.8 In a row of 103 students facing north, ABC is 16th from the left end. If PQR is 64th to the right of ABC, what is PQR's position from the right end of the row?

- Ans
- 1. 27th
 - 2. 24th
 - 3. 29th
 - 4. 21st

Question ID : 441009981430
Option 1 ID : 4410093878188
Option 2 ID : 4410093878187
Option 3 ID : 4410093878189
Option 4 ID : 4410093878186

Q.9 Based on the English alphabetical order, three of the following four letter-cluster pairs are alike in a certain way and thus form a group. Which letter-cluster pair DOES NOT belong to that group?
(Note: The odd one out is not based on the number of consonants/vowels or their position in the letter-cluster.)

- Ans
- 1. AF - IN
 - 2. EJ - MR
 - 3. CH - KP
 - 4. HJ - OM

Question ID : 441009981393
Option 1 ID : 4410093878038
Option 2 ID : 4410093878040
Option 3 ID : 4410093878039
Option 4 ID : 4410093878041

Q.10 Given below is a statement followed by two possible reasons numbered I and II. Read the statement carefully and decide which of the two reasons explain(s) the event/observation/information given in the statement.

Statement:

Most of the world's trade and goods transfer occurs through seaways.

Reasons:

- I) Ships have large capacities when compared to other modes of transport thereby making bulk goods transportation cheaper.
II) Seaways provide efficient delivery of goods when compared to other modes of transport thereby making logistic cost cheaper.

- Ans 1. Only II is a possible reason.
 2. Neither I nor II is a possible reason.
 3. Only I is a possible reason.
 4. Both I and II are possible reasons.

Question ID : 441009477680
Option 1 ID : 4410091866126
Option 2 ID : 4410091866127
Option 3 ID : 4410091866125
Option 4 ID : 4410091866128

Q.11 This question is based on the five, three-digit numbers given below.

(Left) 102 159 189 109 201 (Right)

(Example- 697 – First digit = 6, second digit = 9 and third digit = 7)

(NOTE: All operations to be done from left to right.)

What will be the resultant if the first digit of the highest number is added to the third digit of the lowest number?

- Ans 1. 5
 2. 4
 3. 8
 4. 3

Question ID : 441009981072
Option 1 ID : 4410093876756
Option 2 ID : 4410093876755
Option 3 ID : 4410093876757
Option 4 ID : 4410093876754

Q.12 What will come in place of the question mark (?) in the following equation, if '+' and '-' are interchanged and 'x' and '÷' are interchanged?

$$12 \div 2 + 21 \times 7 - 7 = ? + 33362$$

- Ans 1. 28
 2. 31
 3. 33
 4. 36

Question ID : 441009553827
Option 1 ID : 4410092170622
Option 2 ID : 4410092170623
Option 3 ID : 4410092170624
Option 4 ID : 4410092170625

Q.13 What should come in place of the question mark (?) in the given series?

A3B C6D E9F ?

- Ans
- 1. K12P
 - 2. L12P
 - 3. G12H
 - 4. K12Q

Question ID : 441009732186
Option 1 ID : 4410092882497
Option 2 ID : 4410092882498
Option 3 ID : 4410092882499
Option 4 ID : 4410092882496

Q.14 What should come in place of the question mark (?) in the given series based on the English alphabetical order?

YRU WPS UNQ SLO ?

- Ans
- 1. QJN
 - 2. QIM
 - 3. QJM
 - 4. QIN

Question ID : 4410091133791
Option 1 ID : 4410094470478
Option 2 ID : 4410094470479
Option 3 ID : 4410094470477
Option 4 ID : 4410094470480

Q.15 Two sets of numbers are given below. In each set of numbers, certain mathematical operation(s) on the first number result(s) in the second number. Similarly, certain mathematical operation(s) on the second number result(s) in the third number and so on. Which of the given options follows the same set of operations as in the given sets?

(NOTE: A two/three digit number cannot be broken into individual digits for operations e.g. if 37 is followed by 10, the operation cannot be $3 + 7$ as a two digit number cannot be broken into individual digits.)

5 - 14 - 24 - 31 ; 8 - 17 - 30 - 37

- Ans
- 1. 12 - 21 - 38 - 45
 - 2. 4 - 13 - 30 - 37
 - 3. 7 - 16 - 28 - 21
 - 4. 11 - 20 - 44 - 51

Question ID : 441009590024
Option 1 ID : 4410092315210
Option 2 ID : 4410092315212
Option 3 ID : 4410092315211
Option 4 ID : 4410092315209

Q.16 A, B, C, D, E, F and G are sitting around a circular table facing the centre. Only three people sit between B and F, when counted from the left of B. Only three people sit between D and E, when counted from the right of E. C sits to the immediate right of D. A is an immediate neighbour of E as well as F. How many people sit between B and D, when counted from the right of D?

- Ans 1. 1
 2. 2
 3. 4
 4. 3

Question ID : 441009804000
Option 1 ID : 4410093170123
Option 2 ID : 4410093170124
Option 3 ID : 4410093170126
Option 4 ID : 4410093170125

Q.17 What should come in place of the question mark (?) in the given series?

33, 38, 43, 48, 53, ?

- Ans 1. 57
 2. 58
 3. 55
 4. 59

Question ID : 441009584736
Option 1 ID : 4410092294071
Option 2 ID : 4410092294070
Option 3 ID : 4410092294073
Option 4 ID : 4410092294072

Q.18 Read the given statements and conclusions carefully. Assuming that the information given in the statements is true, even if it appears to be at variance with commonly known facts, decide which of the given conclusions logically follow(s) from the statements.

Statements:

All slippers are crows.
All slippers are drums.
Some drums are pins.

Conclusions:

(I) Some pins are slippers.
(II) Some drums are crows.

- Ans 1. Only conclusion (II) follows.
 2. Neither conclusion (I) nor (II) follows.
 3. Only conclusion (I) follows.
 4. Both conclusions (I) and (II) follow.

Question ID : 441009809003
Option 1 ID : 4410093190136
Option 2 ID : 4410093190137
Option 3 ID : 4410093190135
Option 4 ID : 4410093190138

Q.19 SDFL is related to WILP in a certain way based on the English alphabetical order. In the same way, IXDB is related to MCJF. To which of the given options is UVMN related, following the same logic?

- Ans 1. YRBR
 2. YTRE
 3. YBRT
 4. YBRR

Question ID : 441009815009
Option 1 ID : 4410093214160
Option 2 ID : 4410093214159
Option 3 ID : 4410093214162
Option 4 ID : 4410093214161

Q.20 Two sets of numbers are given below. In each set of numbers, certain mathematical operation(s) on the first number result(s) in the second number. Similarly, certain mathematical operation(s) on the second number result(s) in the third number and so on. Which of the given options follows the same set of operations as in the given sets? (NOTE: Operations should be performed on the whole numbers, without breaking down the numbers into their constituent digits. E.g. 13 – Operations on 13 such as adding to/subtracting from/multiplying with 13 can be performed. Breaking down 13 into 1 and 3 and then performing mathematical operations on 1 and 3 is not allowed.)

24-104-164-204 ; 42-122-182-2221790

- Ans 1. 93-173-223-273
 2. 48-128-188-268
 3. 86-166-226-246
 4. 38-118-178-218

Question ID : 441009552255
Option 1 ID : 4410092164336
Option 2 ID : 4410092164334
Option 3 ID : 4410092164337
Option 4 ID : 4410092164335

Section : General Awareness

Q.1 According to Census 2011, the decadal (2001-2011) growth rate of India's population was

- Ans 1. 21.2%
 2. 14.3%
 3. 17.7%
 4. 19.6%

Question ID : 441009974977
Option 1 ID : 4410093852950
Option 2 ID : 4410093852951
Option 3 ID : 4410093852949
Option 4 ID : 4410093852952

Q.2 The main carbohydrates found in our food are in the form of _____.

- Ans 1. sugar and starch
 2. protein and sugar
 3. fat
 4. starch and protein

Question ID : 4410091050735
Option 1 ID : 4410094152010
Option 2 ID : 4410094152011
Option 3 ID : 4410094152012
Option 4 ID : 4410094152009

Q.3 Who among the following became the first Speaker of the Lok Sabha in 1952?

- Ans 1. Hukam Singh
 2. Neelam Sanjiva Reddy
 3. MA Ayyangar
 4. GV Mavalankar

Question ID : 441009973742
Option 1 ID : 4410093848011
Option 2 ID : 4410093848012
Option 3 ID : 4410093848010
Option 4 ID : 4410093848009

Q.4 The aggregate _____ received by the firms is paid out to the factors of production it takes the form of aggregate _____.

- Ans 1. production ; consumption
 2. inflow ; outflow
 3. revenue ; income
 4. goods ; services

Question ID : 441009974023
Option 1 ID : 4410093849133
Option 2 ID : 4410093849136
Option 3 ID : 4410093849135
Option 4 ID : 4410093849134

Q.5 In which of the following years did Rama Raya lead his army into a battle at Rakshasi-Tangadi (Talikota)?

- Ans 1. 1559 AD
 2. 1565 AD
 3. 1569 AD
 4. 1570 AD

Question ID : 441009973088
Option 1 ID : 4410093845395
Option 2 ID : 4410093845393
Option 3 ID : 4410093845394
Option 4 ID : 4410093845396

Q.6 What is Tribhanga in Indian classical dance?

- Ans
- 1. Three different styles of Kathakali
 - 2. Three abhinaya postures of Kathak
 - 3. Three different forms of Kathak
 - 4. Three bends in the body posture

Question ID : 441009632463
Option 1 ID : 4410092483996
Option 2 ID : 4410092483998
Option 3 ID : 4410092483997
Option 4 ID : 4410092483995

Q.7 What is the purpose of using the 'least-cost combination of inputs' concept in production analysis?

- Ans
- 1. To minimise total cost for a given level of output
 - 2. To maximise economies of scale through increased production
 - 3. To optimise profit margins by reducing variable costs
 - 4. To maximise total revenue generated from production

Question ID : 441009974357
Option 1 ID : 4410093850469
Option 2 ID : 4410093850472
Option 3 ID : 4410093850471
Option 4 ID : 4410093850470

Q.8 In which of the following years was the Ramakrishna Mission, a Hindu religious society, founded by Swami Vivekananda?

- Ans
- 1. 1899
 - 2. 1879
 - 3. 1897
 - 4. 1888

Question ID : 441009973096
Option 1 ID : 4410093845428
Option 2 ID : 4410093845425
Option 3 ID : 4410093845426
Option 4 ID : 4410093845427

Q.9 What is the purpose of the 'lender of last resort' function performed by central banks in the context of money and banking?

- Ans
- 1. To promote financial inclusion through microcredit schemes
 - 2. To enforce strict capital adequacy requirements on commercial banks
 - 3. To provide emergency liquidity assistance to solvent banks
 - 4. To regulate interest rates in the banking sector

Question ID : 441009974366
Option 1 ID : 4410093850508
Option 2 ID : 4410093850506
Option 3 ID : 4410093850505
Option 4 ID : 4410093850507

Q.10 Sattriya dance belongs to which of the following states in India?

- Ans 1. Assam
 2. Uttar Pradesh
 3. Himachal
 4. Karnataka

Question ID : 441009609452
Option 1 ID : 4410092392928
Option 2 ID : 4410092392927
Option 3 ID : 4410092392926
Option 4 ID : 4410092392925

Q.11 World Ozone Day was celebrated to commemorate the signing of which international environmental treaty in New Delhi on 16 September 2024?

- Ans 1. Nagoya Protocol
 2. Montreal Protocol
 3. Kyoto Protocol
 4. Geneva Protocol

Question ID : 441009995068
Option 1 ID : 4410093932297
Option 2 ID : 4410093932295
Option 3 ID : 4410093932294
Option 4 ID : 4410093932296

Q.12 A particle executes SHM of amplitude 'a'. At what distance from the mean position is its kinetic energy maximum?

- Ans 1. $\frac{a}{2}$
 2. $\frac{a}{4}$
 3. 0
 4. $\frac{a}{2}$

Question ID : 441009624406
Option 1 ID : 4410092451758
Option 2 ID : 4410092451759
Option 3 ID : 4410092451756
Option 4 ID : 4410092451757

Q.13 According to Census 2011, there were _____ females for every 1000 males.

- Ans 1. 943
 2. 957
 3. 921
 4. 912

Question ID : 441009974976
Option 1 ID : 4410093852946
Option 2 ID : 4410093852945
Option 3 ID : 4410093852947
Option 4 ID : 4410093852948

Q.14 In which of the following schedules of the Constitution of India are the official languages defined?

- Ans 1. 8th
 2. 6th
 3. 3rd
 4. 4th

Question ID : 441009972535
Option 1 ID : 4410093843184
Option 2 ID : 4410093843183
Option 3 ID : 4410093843181
Option 4 ID : 4410093843182

Q.15 What are petroglyphs?

- Ans 1. Paintings on cave walls
 2. Jewellery made from natural materials
 3. Engravings, bruising, hammering, chiselling or scooping on rock surfaces
 4. Sculptures made of stone

Question ID : 441009973080
Option 1 ID : 4410093845362
Option 2 ID : 4410093845361
Option 3 ID : 4410093845364
Option 4 ID : 4410093845363

Q.16 In May 2025, PKM1, a variety of Moringa oleifera, made a global impact in which regions?

- Ans 1. Australia, New Zealand and Fiji in Oceania regions
 2. Brazil, Argentina and Chile in South American regions
 3. Senegal, Rwanda and Madagascar in the African continent
 4. China, Japan and South Korea in East Asian regions

Question ID : 441009995134
Option 1 ID : 4410093932558
Option 2 ID : 4410093932560
Option 3 ID : 4410093932561
Option 4 ID : 4410093932559

Q.17 In which of the following Articles of the Indian Constitution are the provisions related to 'Right against Exploitation' mentioned?

- Ans 1. Articles 45 and 46
 2. Articles 199 and 200
 3. Articles 239 and 240
 4. Articles 23 and 24

Question ID : 441009973847
Option 1 ID : 4410093848432
Option 2 ID : 4410093848431
Option 3 ID : 4410093848430
Option 4 ID : 4410093848429

Q.18 As per Census 2011, what was the female adult literacy rate (age 15 years and above) in India?

- Ans
- 1. 69.3%
 - 2. 49.3%
 - 3. 59.3%
 - 4. 39.3%

Question ID : 441009974943
Option 1 ID : 4410093852816
Option 2 ID : 4410093852814
Option 3 ID : 4410093852815
Option 4 ID : 4410093852813

Q.19 How many total medals were won by India in the Paris Paralympics 2024?

- Ans
- 1. 20
 - 2. 31
 - 3. 23
 - 4. 29

Question ID : 441009995659
Option 1 ID : 4410093934657
Option 2 ID : 4410093934660
Option 3 ID : 4410093934658
Option 4 ID : 4410093934659

Q.20 Zero Hour is an Indian innovation in parliamentary procedures and has been in existence since the year _____.

- Ans
- 1. 1962
 - 2. 1964
 - 3. 1960
 - 4. 1958

Question ID : 441009973816
Option 1 ID : 4410093848307
Option 2 ID : 4410093848308
Option 3 ID : 4410093848306
Option 4 ID : 4410093848305

Section : Arithmetical and Numerical Ability

Q.1 Pipe A can fill an empty cistern alone in 19 hours and pipe B can fill the same cistern alone in 27 hours. The time taken by them to fill half of the cistern by operating together will be:

Ans

✓ 1. $5\frac{53}{92}$ hours

✗ 2. $8\frac{53}{92}$ hours

✗ 3. $2\frac{53}{92}$ hours

✗ 4. $3\frac{53}{92}$ hours

Question ID : 441009913398

Option 1 ID : 4410093607843

Option 2 ID : 4410093607845

Option 3 ID : 4410093607846

Option 4 ID : 4410093607844

Q.2 A sells a laptop to B at a loss of 25% and B sells the laptop to C at a profit of 15%. If C purchased the laptop for ₹7,452, then what was the cost (in ₹) of the laptop for A?2545

Ans ✓ 1. 8640

✗ 2. 8758

✗ 3. 8715

✗ 4. 8681

Question ID : 441009566119

Option 1 ID : 4410092219596

Option 2 ID : 4410092219597

Option 3 ID : 4410092219599

Option 4 ID : 4410092219598

Q.3 In what time (in years) will ₹5,000 fetch an interest of ₹1,000 at 5% per year simple interest?

Ans ✓ 1. 4

✗ 2. 6

✗ 3. 7

✗ 4. 5

Question ID : 441009852424

Option 1 ID : 4410093362668

Option 2 ID : 4410093362670

Option 3 ID : 4410093362671

Option 4 ID : 4410093362669

Q.4 A grocer has 100 kg rice, a part of which he sells at 18% profit and the remaining at 73% profit. He gains 29% on the whole. What is the quantity of rice sold at 73% profit?7565

Ans ✗ 1. 22 kg

✗ 2. 18 kg

✗ 3. 23 kg

✓ 4. 20 kg

Question ID : 441009545892

Option 1 ID : 4410092138965

Option 2 ID : 4410092138967

Option 3 ID : 4410092138966

Option 4 ID : 4410092138964

Q.5 A number, when decreased by 2%, gives 2450. The number is _____.

- Ans
- 1. 7500
 - 2. 2500
 - 3. 5000
 - 4. 2800

Question ID : 441009895615
Option 1 ID : 4410093536533
Option 2 ID : 4410093536530
Option 3 ID : 4410093536531
Option 4 ID : 4410093536532

Q.6 The value of $8^2 + \sqrt{9^2} - 7\sqrt{100} - 5$ is :

- Ans
- 1. 4
 - 2. -2
 - 3. -1
 - 4. -7

Question ID : 441009910706
Option 1 ID : 4410093597077
Option 2 ID : 4410093597075
Option 3 ID : 4410093597078
Option 4 ID : 4410093597076

Q.7 Find the mean proportional of 52 and 117.5730

- Ans
- 1. 81
 - 2. 78
 - 3. 77
 - 4. 80

Question ID : 441009899043
Option 1 ID : 4410093550245
Option 2 ID : 4410093550242
Option 3 ID : 4410093550244
Option 4 ID : 4410093550243

Q.8 A, B and C invested their capitals in the ratio 4 : 7 : 10. The ratio of months for which they invested is 2 : 3 : 4, respectively. If the difference between the profit shares of B and A is ₹36,855, then C's share of profit (in ₹) is:

- Ans
- 1. 1,13,400
 - 2. 1,18,700
 - 3. 1,15,200
 - 4. 1,10,500

Question ID : 441009986994
Option 1 ID : 4410093900266
Option 2 ID : 4410093900268
Option 3 ID : 4410093900267
Option 4 ID : 4410093900265

Q.9 The length, breadth and height of a cuboid are in the ratio 4 : 5 : 6. If the length is increased by 150%, the breadth by 140% and the height by 150%, then by what percentage does the volume of the cuboid increase compared to its original volume?

- Ans
- 1. 1600%
 - 2. 1400%
 - 3. 1500%
 - 4. 1300%

Question ID : 441009620817
Option 1 ID : 4410092437403
Option 2 ID : 4410092437400
Option 3 ID : 4410092437401
Option 4 ID : 4410092437402

Q.10 During a sale, 60% of the goods are sold at 21% profit, 20% of the remaining goods are sold at 50% profit and the still remaining goods are sold at a loss of 20%. If there is an overall profit of x%, then what is the value of x?

- Ans
- 1. 10.2
 - 2. 12.5
 - 3. 13
 - 4. 11.5

Question ID : 441009915059
Option 1 ID : 4410093614487
Option 2 ID : 4410093614488
Option 3 ID : 4410093614489
Option 4 ID : 4410093614490

Q.11 Sulekha takes 5 hours and 30 minutes to go a distance in a boat upstream, but it takes her 4 hours to travel the same distance downstream. What is the ratio of the boat's speed to the water current's speed?¹⁰⁶¹⁴

- Ans
- 1. 17 : 5
 - 2. 11 : 6
 - 3. 19 : 3
 - 4. 8 : 9

Question ID : 441009548941
Option 1 ID : 4410092151161
Option 2 ID : 4410092151162
Option 3 ID : 4410092151160
Option 4 ID : 4410092151163

Q.12 The population of a village council in 2022 was 40,000. If the annual growth rate is 2.5%, what will be the population of the village council at the end of 2024?

- Ans
- 1. 41,075
 - 2. 42,025
 - 3. 42,125
 - 4. 42,000

Question ID : 441009986492
Option 1 ID : 4410093898258
Option 2 ID : 4410093898259
Option 3 ID : 4410093898257
Option 4 ID : 4410093898260

Q.13 The average price of three items of furniture is ₹17,775. If their prices are in the ratio 3 : 5 : 7, the price of the cheapest item (in ₹) is:

- Ans
- 1. 8,295
 - 2. 3,555
 - 3. 5,925
 - 4. 10,665

Question ID : 441009910478
Option 1 ID : 4410093596166
Option 2 ID : 4410093596164
Option 3 ID : 4410093596165
Option 4 ID : 4410093596163

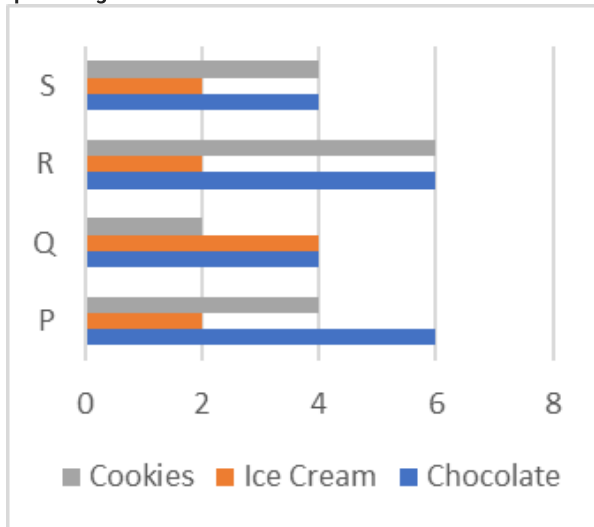
Q.14 Pipe P can fill $\frac{5}{6}$ part of a tank in 15 hours and pipe Q can fill $\frac{2}{3}$ part 2 hours, then both were closed. Pipe R was then opened and emptied opened together, how long will they take to fill the empty tank?
9443

- Ans
- 1. 25 hours
 - 2. 27 hours
 - 3. 18 hours
 - 4. 6 hours

Question ID : 441009547770
Option 1 ID : 4410092146478
Option 2 ID : 4410092146477
Option 3 ID : 4410092146476
Option 4 ID : 4410092146479

Telegram - @TeachingExam

Q.15 The following graph shows the number of items (in thousands) of Cookies, Ice cream, and Chocolate produced by different companies. Study the graph carefully and answer the question given below.



What is the difference between the average production of Cookies and the average production of Chocolate (by all the companies)?

- Ans
- 1. 800
 - 2. 1000
 - 3. 1400
 - 4. 1200

Question ID : 441009986758
 Option 1 ID : 4410093899323
 Option 2 ID : 4410093899321
 Option 3 ID : 4410093899324
 Option 4 ID : 4410093899322

Q.16 Two students appeared in an examination. One of them secured 5 marks more than the other and his marks were 52% of the sum of their marks. The sum of the marks obtained by them was:

- Ans
- 1. 130
 - 2. 120
 - 3. 125
 - 4. 126

Question ID : 441009895473
 Option 1 ID : 4410093535965
 Option 2 ID : 4410093535964
 Option 3 ID : 4410093535962
 Option 4 ID : 4410093535963

Q.17 Anil got a new curtain at a 15% discount. If Anil did not get any discount, Anil would have had to pay ₹414 extra. So how much did Anil pay for the curtain?

- Ans
- 1. ₹2,346
 - 2. ₹2,348
 - 3. ₹2,347
 - 4. ₹2,344

Question ID : 441009893837
 Option 1 ID : 4410093529418
 Option 2 ID : 4410093529420
 Option 3 ID : 4410093529419
 Option 4 ID : 4410093529421

Q.18

The value of $5^3 - 6^2 + \left(\frac{40}{2}\right)^2 - 9 + 5 \times 4 = \underline{\hspace{2cm}}$.

- Ans
- 1. 496
 - 2. 500
 - 3. 491
 - 4. 503

Question ID : 441009913152
Option 1 ID : 4410093606860
Option 2 ID : 4410093606859
Option 3 ID : 4410093606862
Option 4 ID : 4410093606861

Q.19 The diagonals of a rhombus are 76 cm and 82 cm, respectively. The area of the rhombus (in cm^2) is:

- Ans
- 1. 3112
 - 2. 3116
 - 3. 3120
 - 4. 3076

Question ID : 441009593420
Option 1 ID : 4410092328798
Option 2 ID : 4410092328797
Option 3 ID : 4410092328800
Option 4 ID : 4410092328799

Q.20 While going to a shopping mall, Anjali travels at a speed of 45 km/hr and on her way back, she travels at a speed of 63 km/hr. What is her average speed (in km/hr) for the whole journey?¹¹³³⁹

- Ans
- 1. 46.7
 - 2. 62.8
 - 3. 60.5
 - 4. 52.5

Question ID : 441009549666
Option 1 ID : 4410092154063
Option 2 ID : 4410092154062
Option 3 ID : 4410092154061
Option 4 ID : 4410092154060

Section : Test of English Language and Comprehension

Q.1 Select the most appropriate homonym to fill in the blank.

Hurricane _____ havoc on the coastal cities.

- Ans
- 1. reik
 - 2. reek
 - 3. wreak
 - 4. wreck

Question ID : 4410091052203
Option 1 ID : 4410094157882
Option 2 ID : 4410094157881
Option 3 ID : 4410094157883
Option 4 ID : 4410094157884

Q.2 Select the most appropriate adjective to fill in the blank.

You won't find a _____ hotel than this for a night.

- Ans
- 1. cheapest
 - 2. more cheap
 - 3. cheaper
 - 4. more cheaper

Question ID : 4410091005854
Option 1 ID : 4410093975015
Option 2 ID : 4410093975018
Option 3 ID : 4410093975016
Option 4 ID : 4410093975017

Q.3 Select the option that can be used as a one-word substitute for the given group of words.

Someone who believes that no principles or beliefs have any meaning

- Ans
- 1. Fatalist
 - 2. Optimist
 - 3. Nihilist
 - 4. Idealist

Question ID : 4410091061805
Option 1 ID : 4410094195736
Option 2 ID : 4410094195738
Option 3 ID : 4410094195739
Option 4 ID : 4410094195737

Q.4 Select the most appropriate option to fill in the blanks.

I visited _____ park near my house to view _____ solar eclipse yesterday.

- Ans
- 1. no article required; the
 - 2. the; no article required
 - 3. the; a
 - 4. the; the

Question ID : 4410091006324
Option 1 ID : 4410093976896
Option 2 ID : 4410093976897
Option 3 ID : 4410093976898
Option 4 ID : 4410093976895

Q.5 Select the option that lists all the INCORRECTLY spelt words in the following passage.

The intermittant variances in readings were linked to extraneous environmental influences rather than inherent fault lines in the system. Experts proposed recalibraeting the devices and reassessing the experimental parametres. Although the findings were rigorously documented, the final assessment was deemed insufficiently decisive for immediate implementation.

- Ans
- 1. variances, parametres, implementation, fault lines
 - 2. recalibraeting, extraneous, parametres, intermittent
 - 3. recalibraeting, parametres, decisive, influences
 - 4. recalibraeting, extraneous, intermittant, parametres

Question ID : 441009198591
Option 1 ID : 441009781910
Option 2 ID : 441009781911
Option 3 ID : 441009781912
Option 4 ID : 441009781909

Q.6 Sentences of a paragraph are given below in jumbled order. Arrange the sentences in the correct order to form a meaningful and coherent paragraph.

- P. Social media platforms have revolutionised how people connect and communicate.
Q. However, concerns about data privacy and misinformation continue to grow.
R. They offer users instant access to global conversations and real-time updates.
S. As their influence expands, debates on regulation and ethical use have intensified.

- Ans 1. P R Q S
 2. P Q S R
 3. R P Q S
 4. Q R S P

Question ID : 441009229085
Option 1 ID : 441009895977
Option 2 ID : 441009895979
Option 3 ID : 441009895978
Option 4 ID : 441009895980

Q.7 Select the most appropriate article to fill in the blank.

The seniors have an obligation to always help ____ juniors.

- Ans 1. No article required
 2. an
 3. the
 4. a

Question ID : 4410096074
Option 1 ID : 44100924076
Option 2 ID : 44100924075
Option 3 ID : 44100924073
Option 4 ID : 44100924074

Q.8 Select the option that lists all the INCORRECTLY spelt words in the following passage.

The anthropologist's treatise was lauded for its lucid exposition, yet critiqued for occasional lapses into tendencious interpretation. Some reviewers found the ethonographic methodology inadequite, while others praised its granularity. The appendices, though seemingly superflous, provided ancillary insights that enriched the discourse.

- Ans 1. tendencious, inadequite, appendices
 2. tendencious, ethonographic, superflous
 3. exposition, tendencious, granularity, inadequite
 4. ethonographic, inadequite, superflous

Question ID : 441009198581
Option 1 ID : 441009781869
Option 2 ID : 441009781870
Option 3 ID : 441009781872
Option 4 ID : 441009781871

Q.9 Select the most appropriate option to fill in the blank.

Meera and Rahul live in a _____ house.

- Ans
- 1. spaciouly
 - 2. spacious
 - 3. space
 - 4. spacy

Question ID : 4410091005796
Option 1 ID : 4410093974785
Option 2 ID : 4410093974783
Option 3 ID : 4410093974784
Option 4 ID : 4410093974786

Q.10 Select the most appropriate option to substitute the underlined segment in the given sentence.

Parvathy's experience in marketing came in handy during the product launch.⁴⁹

- Ans
- 1. turned out to be useless
 - 2. turned out to be boring
 - 3. turned out to be beneficial
 - 4. turned out to be innovative

Question ID : 4410091052106
Option 1 ID : 4410094157494
Option 2 ID : 4410094157496
Option 3 ID : 4410094157493
Option 4 ID : 4410094157495

Q.11 Select the most appropriate adjective to fill in the blank.

His Ph.D. entrance exam score is (the) _____ of all the exams he has taken till now.

- Ans
- 1. worst
 - 2. badder
 - 3. bad
 - 4. baddest

Question ID : 4410091005856
Option 1 ID : 4410093975024
Option 2 ID : 4410093975026
Option 3 ID : 4410093975023
Option 4 ID : 4410093975025

Q.12 Select the most appropriate option to fill in the blank.

Her speech was _____, capturing the audience's attention from start to finish.⁹⁸³

- Ans
- 1. lengthy
 - 2. enthralling
 - 3. monotonous
 - 4. tedious

Question ID : 4410091061255
Option 1 ID : 4410094193703
Option 2 ID : 4410094193701
Option 3 ID : 4410094193700
Option 4 ID : 4410094193702

Q.13 Sentences of a paragraph are given below in jumbled order. Arrange the sentences in the correct order to form a meaningful and coherent paragraph.

- P. He was a well-known figure in the scientific community for his contributions to quantum mechanics.
Q. His research, however, was often ahead of its time, and it faced skepticism from many of his peers.
R. Over the years, his work gained acceptance, and he became one of the most respected physicists.
S. Initially, many dismissed his ideas as overly theoretical and impractical.

- Ans 1. PSRQ
 2. SPQR
 3. PQSR
 4. PRSQ

Question ID : 441009229066
Option 1 ID : 441009895905
Option 2 ID : 441009895907
Option 3 ID : 441009895904
Option 4 ID : 441009895906

Q.14 Select the most appropriate meaning of the given idiom.

Meet halfway³⁹

- Ans 1. To reach the pinnacle
 2. To reach a compromise
 3. To have a tug of war
 4. To end the meeting

Question ID : 4410091052096
Option 1 ID : 4410094157456
Option 2 ID : 4410094157455
Option 3 ID : 4410094157454
Option 4 ID : 4410094157453

Q.15 Select the most appropriate homonym to fill in the blank.

Matthew held the _____ in his hand.

- Ans 1. rains
 2. reigns
 3. reins
 4. riegn

Question ID : 4410091052204
Option 1 ID : 4410094157886
Option 2 ID : 4410094157885
Option 3 ID : 4410094157887
Option 4 ID : 4410094157888

Comprehension:

Read the given passage and answer the questions that follow.

Lobotomy, a controversial surgical procedure, was a surgery used in the past to treat serious mental illnesses. It was created in the 1930s by a Portuguese doctor named António Egas Moniz. The surgery involved severing connections in the prefrontal cortex of the brain. The aim was to reduce symptoms of conditions like schizophrenia, severe depression, and obsessive-compulsive disorder. At first, lobotomy was seen as a big breakthrough, and it quickly became popular in Europe and the United States. However, the procedure was crude and often caused severe side effects. Many patients went through major personality changes, had trouble thinking clearly, and lost their emotional depth. Some even ended up permanently disabled or died. As doctors learned more about the brain, the use of lobotomy decreased. New medications for mental illnesses, developed in the 1950s, provided a safer and more effective treatment. Today, lobotomy is viewed as outdated and unethical. This history highlights the need for ethical practices and ongoing progress in medical science.

SubQuestion No : 16

Q.16 Select the most appropriate title for the given passage.

- Ans
- 1. Exploring Lobotomy's Contribution to Modern Neurosurgery
 - 2. Understanding Lobotomy's Permanent Popularity in Psychiatry
 - 3. Examining Lobotomy's Role in Enhancing Cognitive Abilities
 - 4. Investigating Lobotomy's Historical Impact on Mental Health

Question ID : 4410091062017

Option 1 ID : 4410094196480

Option 2 ID : 4410094196481

Option 3 ID : 4410094196479

Option 4 ID : 4410094196478

Comprehension:

Read the given passage and answer the questions that follow.

Lobotomy, a controversial surgical procedure, was a surgery used in the past to treat serious mental illnesses. It was created in the 1930s by a Portuguese doctor named António Egas Moniz. The surgery involved severing connections in the prefrontal cortex of the brain. The aim was to reduce symptoms of conditions like schizophrenia, severe depression, and obsessive-compulsive disorder. At first, lobotomy was seen as a big breakthrough, and it quickly became popular in Europe and the United States. However, the procedure was crude and often caused severe side effects. Many patients went through major personality changes, had trouble thinking clearly, and lost their emotional depth. Some even ended up permanently disabled or died. As doctors learned more about the brain, the use of lobotomy decreased. New medications for mental illnesses, developed in the 1950s, provided a safer and more effective treatment. Today, lobotomy is viewed as outdated and unethical. This history highlights the need for ethical practices and ongoing progress in medical science.

SubQuestion No : 17

Q.17 According to the passage, which of the following options is a fact?

- Ans
- 1. Lobotomy did not result in significant improvements in the treatment of mental illnesses.
 - 2. The advent of antipsychotic medications revolutionised the treatment of mental disorders.
 - 3. Lobotomy had no adverse effects on patients' cognitive functions or emotional states.
 - 4. António Egas Moniz was not a prominent figure in the medical community during his time.

Question ID : 4410091062018

Option 1 ID : 4410094196485

Option 2 ID : 4410094196483

Option 3 ID : 4410094196482

Option 4 ID : 4410094196484

Comprehension:

Read the given passage and answer the questions that follow.

Lobotomy, a controversial surgical procedure, was a surgery used in the past to treat serious mental illnesses. It was created in the 1930s by a Portuguese doctor named António Egas Moniz. The surgery involved severing connections in the prefrontal cortex of the brain. The aim was to reduce symptoms of conditions like schizophrenia, severe depression, and obsessive-compulsive disorder. At first, lobotomy was seen as a big breakthrough, and it quickly became popular in Europe and the United States. However, the procedure was crude and often caused severe side effects. Many patients went through major personality changes, had trouble thinking clearly, and lost their emotional depth. Some even ended up permanently disabled or died. As doctors learned more about the brain, the use of lobotomy decreased. New medications for mental illnesses, developed in the 1950s, provided a safer and more effective treatment. Today, lobotomy is viewed as outdated and unethical. This history highlights the need for ethical practices and ongoing progress in medical science.

SubQuestion No : 18

Q.18 Identify the correct inference that can be drawn from the passage.

- Ans 1. Lobotomy was a widely accepted and successful treatment for mild mental disorders.
2. The inventor of lobotomy, Moniz, was celebrated as a hero in the medical community.
3. Lobotomy remained the primary treatment for many mental illnesses until recent times.
4. Advances in medicine led to the decline of lobotomy and the rise of safer treatments.

Question ID : 4410091062019

Option 1 ID : 4410094196486

Option 2 ID : 4410094196487

Option 3 ID : 4410094196489

Option 4 ID : 4410094196488

Comprehension:

Read the given passage and answer the questions that follow.

Lobotomy, a controversial surgical procedure, was a surgery used in the past to treat serious mental illnesses. It was created in the 1930s by a Portuguese doctor named António Egas Moniz. The surgery involved severing connections in the prefrontal cortex of the brain. The aim was to reduce symptoms of conditions like schizophrenia, severe depression, and obsessive-compulsive disorder. At first, lobotomy was seen as a big breakthrough, and it quickly became popular in Europe and the United States. However, the procedure was crude and often caused severe side effects. Many patients went through major personality changes, had trouble thinking clearly, and lost their emotional depth. Some even ended up permanently disabled or died. As doctors learned more about the brain, the use of lobotomy decreased. New medications for mental illnesses, developed in the 1950s, provided a safer and more effective treatment. Today, lobotomy is viewed as outdated and unethical. This history highlights the need for ethical practices and ongoing progress in medical science.

SubQuestion No : 19

Q.19 Identify the tone of the passage.

- Ans 1. The author's tone is sceptical.
2. The author's tone is objective.
3. The author's tone is indifferent.
4. The author's tone is accusatory.

Question ID : 4410091062020

Option 1 ID : 4410094196490

Option 2 ID : 4410094196493

Option 3 ID : 4410094196492

Option 4 ID : 4410094196491

Comprehension:

Read the given passage and answer the questions that follow.

Lobotomy, a controversial surgical procedure, was a surgery used in the past to treat serious mental illnesses. It was created in the 1930s by a Portuguese doctor named António Egas Moniz. The surgery involved severing connections in the prefrontal cortex of the brain. The aim was to reduce symptoms of conditions like schizophrenia, severe depression, and obsessive-compulsive disorder. At first, lobotomy was seen as a big breakthrough, and it quickly became popular in Europe and the United States. However, the procedure was crude and often caused severe side effects. Many patients went through major personality changes, had trouble thinking clearly, and lost their emotional depth. Some even ended up permanently disabled or died. As doctors learned more about the brain, the use of lobotomy decreased. New medications for mental illnesses, developed in the 1950s, provided a safer and more effective treatment. Today, lobotomy is viewed as outdated and unethical. This history highlights the need for ethical practices and ongoing progress in medical science.

SubQuestion No : 20

Q.20 Select the most appropriate ANTONYM of the word 'severing' as used in the given passage.

- Ans 1. Disconnecting
 2. Dividing
 3. Cutting
 4. Joining

Question ID : 4410091062021
Option 1 ID : 4410094196494
Option 2 ID : 4410094196495
Option 3 ID : 4410094196496
Option 4 ID : 4410094196497

Section : Test of Hindi Language and Comprehension

Q.1 गाँव के मनुष्य मेहनती होते हैं। वाक्य का शुद्ध रूप क्या है?

- Ans 1. गाँव के व्यक्तियों मेहनती होते हैं।
 2. गाँव के लोगों मेहनती होते हैं।
 3. गाँव के लोग मेहनती होते हैं।
 4. गाँव के मनुष्यों मेहनती होते हैं।

Question ID : 4410091004315
Option 1 ID : 4410093968844
Option 2 ID : 4410093968845
Option 3 ID : 4410093968843
Option 4 ID : 4410093968846

**Q.2 निम्नलिखित वाक्यांश के लिए दिए गए विकल्पों में सही सार्थक शब्द चुनें।
'जिसका प्रतिपादन न किया गया हो।'**

- Ans 1. अप्रतिपादित
 2. पर्याप्त
 3. प्रतिपादित
 4. प्रतिरक्षक

Question ID : 4410091051675
Option 1 ID : 4410094155770
Option 2 ID : 4410094155772
Option 3 ID : 4410094155769
Option 4 ID : 4410094155771

Q.3 निम्नलिखित वाक्य का सही क्रम क्या होगा ?

- Ans
- 1. गणमान्य पिताजी थे व्यक्ति एक ।
 - 2. पिताजी व्यक्ति एक गणमान्य थे ।
 - 3. पिताजी एक गणमान्य व्यक्ति थे ।
 - 4. पिताजी गणमान्य थे व्यक्ति एक ।

Question ID : 4410091051597

Option 1 ID : 4410094155460

Option 2 ID : 4410094155458

Option 3 ID : 4410094155457

Option 4 ID : 4410094155459

Q.4 निम्नलिखित वाक्य में रेखांकित शब्द का पर्यायवाची बताइये।
जबसे वह विख्यात हुआ है उसका व्यवहार बदल गया है।

- Ans
- 1. बड़ा
 - 2. प्रसिद्ध
 - 3. कुख्यात
 - 4. बीमार

Question ID : 4410091056250

Option 1 ID : 4410094174011

Option 2 ID : 4410094174009

Option 3 ID : 4410094174010

Option 4 ID : 4410094174012

Q.5 उपयुक्त विकल्प का चयन कर नीचे दिए गये वाक्य को पूर्ण कीजिए--

जया ने रामकिशोर ज़ोर से आवाज दी।'

- Ans
- 1. ने
 - 2. द्वारा
 - 3. पर
 - 4. को

Question ID : 4410091004382

Option 1 ID : 4410093969112

Option 2 ID : 4410093969114

Option 3 ID : 4410093969113

Option 4 ID : 4410093969111

Q.6 वाक्य के किस भाग में त्रुटि है ?
पगड़ी पहानकर आना है । 256

- Ans
- 1. पगड़ी
 - 2. आना
 - 3. पहानकर
 - 4. है

Question ID : 4410091058041

Option 1 ID : 4410094181173

Option 2 ID : 4410094181175

Option 3 ID : 4410094181174

Option 4 ID : 4410094181176

Q.7 'ओखली में सिर देना' मुहावरे का क्या अर्थ है?

- Ans
- 1. अहित सोचना
 - 2. सिर में चोट लगना
 - 3. मूर्खता
 - 4. जोखिम मोल लेना

Question ID : 4410091058496
Option 1 ID : 4410094182996
Option 2 ID : 4410094182993
Option 3 ID : 4410094182995
Option 4 ID : 4410094182994

Q.8 जो कोई भी गयी हो, लौट आये। वाक्य का शुद्ध रूप क्या है?

- Ans
- 1. जो कोई भी जाये हो, लौट आये।
 - 2. जो कोई भी गया हो, लौट आये।
 - 3. जो कोई भी जाएँगे हो, लौट आये।
 - 4. जो कोई भी जाए हो, लौट आइये।

Question ID : 4410091004311
Option 1 ID : 4410093968828
Option 2 ID : 4410093968827
Option 3 ID : 4410093968829
Option 4 ID : 4410093968830

Q.9 कपोत एक प्रकार का घरेलू पक्षी है। वाक्य में प्रयुक्त शब्द 'कपोत' का पर्यायवाची दिए गए विकल्पों में से चुनें
-1267

- Ans
- 1. रक्तलोचन
 - 2. काग
 - 3. शुक
 - 4. बाज

Question ID : 4410091058052
Option 1 ID : 4410094181220
Option 2 ID : 4410094181217
Option 3 ID : 4410094181218
Option 4 ID : 4410094181219

Q.10 उपयुक्त विकल्प का चयन कर नीचे दिए गये वाक्य को पूर्ण करें-----
'पढ़ाई न करने के कारण पिता ने पुत्र कोसा ।'

- Ans
- 1. द्वारा
 - 2. के
 - 3. ने
 - 4. को

Question ID : 4410091004386
Option 1 ID : 4410093969129
Option 2 ID : 4410093969130
Option 3 ID : 4410093969127
Option 4 ID : 4410093969128

Q.11 वाक्य के किस भाग में त्रुटि है -

केदारनाथ धाम का मार्ग अत्यन्त दुरगम है।1254

- Ans
- 1. धाम का
 - 2. केदारनाथ
 - 3. दुरगम है
 - 4. मार्ग अत्यन्त

Question ID : 4410091058039
Option 1 ID : 4410094181166
Option 2 ID : 4410094181165
Option 3 ID : 4410094181168
Option 4 ID : 4410094181167

Q.12 'इसके पेट में दाढ़ी है' लोकोक्ति का सही अर्थ क्या है ?162

- Ans
- 1. पेट में दाढ़ी उग जाना
 - 2. उम्र कम बुद्धि अधिक
 - 3. बुद्धि का भ्रष्ट होना
 - 4. पेट में दर्द का उठना

Question ID : 4410091054708
Option 1 ID : 4410094167841
Option 2 ID : 4410094167843
Option 3 ID : 4410094167844
Option 4 ID : 4410094167842

Q.13 निम्नलिखित वाक्य का सही क्रम क्या होगा ?1

- Ans
- 1. खेल उत्साह बड़े से जारी था ।
 - 2. खेल बड़े उत्साह से जारी था ।
 - 3. बड़े खेल उत्साह से जारी था ।
 - 4. से जारी था खेल उत्साह बड़े ।

Question ID : 4410091051595
Option 1 ID : 4410094155451
Option 2 ID : 4410094155450
Option 3 ID : 4410094155449
Option 4 ID : 4410094155452

Q.14 उपयुक्त विकल्प का चयन कर नीचे दिए गये वाक्य को पूर्ण करें--

'कल अमृता ने अपने शराबी पति पुलिस से पकड़वा दिया'

- Ans
- 1. से
 - 2. की
 - 3. ने
 - 4. को

Question ID : 4410091004385
Option 1 ID : 4410093969124
Option 2 ID : 4410093969126
Option 3 ID : 4410093969123
Option 4 ID : 4410093969125

Q.15 'जो संविधान के अनुकूल न हो' वाक्यांश के लिए सार्थक शब्द होगा-49

- Ans
- 1. असामाजिक
 - 2. अनैतिक
 - 3. असंवैधानिक
 - 4. गैर कानूनी

Question ID : 4410091050883

Option 1 ID : 4410094152604

Option 2 ID : 4410094152603

Option 3 ID : 4410094152601

Option 4 ID : 4410094152602

Comprehension:

दिए गए गद्यांश के आधार पर निम्नांकित प्रश्नों के उत्तर दीजिए --

इतिहासकारों ने दक्षिण भारत में भक्ति के उदय की व्याख्या सामाजिक ऐतिहासिक संदर्भों में की है। उनके अनुसार जो स्थिति उत्तर भारत में 13वीं - 14वीं सदी में उत्पन्न हुई वह दक्षिण भारत में पहली सदी के बाद ही पैदा हो गई थी। दक्षिण भारत में पहली शताब्दी के बाद कई शताब्दियों तक राजसत्ता अनेक पराक्रमी शासकों के हाथ में रही। केंद्रीय सत्ता के मजबूत होने के परिणामस्वरूप व्यापार और कृषि में उन्नति स्वाभाविक है। दक्षिण में चोलवंशी शासक करिकाल ने कावेरी जल को नियंत्रित कर सिंचाई की व्यवस्था की। इसका सीधा फायदा किसानों को हुआ। कृषि के उत्पादन में काफी बढ़ोत्तरी हुई। उसी समय श्रीलंका को युद्ध में पराजित कर युद्धबंदियों के माध्यम से कावेरी के मुहाने पर पुहार का प्रसिद्ध बंदरगाह निर्मित कराया गया। इससे विदेशों से व्यापार का रास्ता खुल गया। दक्षिण भारत से मसाले का व्यापार काफी लाभप्रद हुआ। कृषि, व्यापार और उद्योग में अभूतपूर्व उन्नति हुई। 7वीं - 8वीं शताब्दी में पल्लव शासकों ने स्थापत्य को बढ़ावा दिया। चित्रकला का विकास हुआ। कांचीपुरम में बुनकरों को वैश्यों-व्यापारियों के जैसा सम्मान प्राप्त हुआ। कुल मिलाकर देखें तो यहाँ भी पूँजीवादी संबंधों का प्रसार हुआ और सामंती व्यवस्था में जो वर्ण, जातियाँ पिछड़ी हुई थीं उनमें आर्थिक सुधार हुआ। 8

SubQuestion No : 16

Q.16 निम्न में से 'पराक्रमी' का विलोम शब्द होगा- 9

- Ans
- 1. उद्यमी
 - 2. मेहनती
 - 3. पुरुषार्थी
 - 4. डरपोक

Question ID : 4410091064880

Option 1 ID : 4410094206179

Option 2 ID : 4410094206182

Option 3 ID : 4410094206180

Option 4 ID : 4410094206181

Comprehension:

दिए गए गद्यांश के आधार पर निम्नांकित प्रश्नों के उत्तर दीजिए --

इतिहासकारों ने दक्षिण भारत में भक्ति के उदय की व्याख्या सामाजिक ऐतिहासिक संदर्भों में की है। उनके अनुसार जो स्थिति उत्तर भारत में 13वीं - 14वीं सदी में उत्पन्न हुई वह दक्षिण भारत में पहली सदी के बाद ही पैदा हो गई थी। दक्षिण भारत में पहली शताब्दी के बाद कई शताब्दियों तक राजसत्ता अनेक पराक्रमी शासकों के हाथ में रही। केंद्रीय सत्ता के मजबूत होने के परिणामस्वरूप व्यापार और कृषि में उन्नति स्वाभाविक है। दक्षिण में चोलवंशी शासक करिकाल ने कावेरी जल को नियंत्रित कर सिंचाई की व्यवस्था की। इसका सीधा फायदा किसानों को हुआ। कृषि के उत्पादन में काफी बढ़ोत्तरी हुई। उसी समय श्रीलंका को युद्ध में पराजित कर युद्धबंदियों के माध्यम से कावेरी के मुहाने पर पुहार का प्रसिद्ध बंदरगाह निर्मित कराया गया। इससे विदेशों से व्यापार का रास्ता खुल गया। दक्षिण भारत से मसाले का व्यापार काफी लाभप्रद हुआ। कृषि, व्यापार और उद्योग में अभूतपूर्व उन्नति हुई। 7वीं - 8वीं शताब्दी में पल्लव शासकों ने स्थापत्य को बढ़ावा दिया। चित्रकला का विकास हुआ। कांचीपुरम में बुनकरों को वैश्यों-व्यापारियों के जैसा सम्मान प्राप्त हुआ। कुल मिलाकर देखें तो यहाँ भी पूँजीवादी संबंधों का प्रसार हुआ और सामंती व्यवस्था में जो वर्ण, जातियाँ पिछड़ी हुई थीं उनमें आर्थिक सुधार हुआ। 8

SubQuestion No : 17

Q.17 गद्यांश में दक्षिण भारत की उत्तर भारत से भिन्नता किस आधार पर दर्शायी गयी है? 10

- Ans 1. दक्षिण में छोटे राज्यों का वर्चस्व
 2. दक्षिण में सशक्त केंद्रीयसत्ता का होना
 3. दक्षिण में पराक्रमी शासकों का अभाव
 4. दक्षिण में विकेंद्रितकृत शासन का होना

Question ID : 4410091064881

Option 1 ID : 4410094206186

Option 2 ID : 4410094206183

Option 3 ID : 4410094206185

Option 4 ID : 4410094206184

Comprehension:

दिए गए गद्यांश के आधार पर निम्नांकित प्रश्नों के उत्तर दीजिए --

इतिहासकारों ने दक्षिण भारत में भक्ति के उदय की व्याख्या सामाजिक ऐतिहासिक संदर्भों में की है। उनके अनुसार जो स्थिति उत्तर भारत में 13वीं - 14वीं सदी में उत्पन्न हुई वह दक्षिण भारत में पहली सदी के बाद ही पैदा हो गई थी। दक्षिण भारत में पहली शताब्दी के बाद कई शताब्दियों तक राजसत्ता अनेक पराक्रमी शासकों के हाथ में रही। केंद्रीय सत्ता के मजबूत होने के परिणामस्वरूप व्यापार और कृषि में उन्नति स्वाभाविक है। दक्षिण में चोलवंशी शासक करिकाल ने कावेरी जल को नियंत्रित कर सिंचाई की व्यवस्था की। इसका सीधा फायदा किसानों को हुआ। कृषि के उत्पादन में काफी बढ़ोत्तरी हुई। उसी समय श्रीलंका को युद्ध में पराजित कर युद्धबंदियों के माध्यम से कावेरी के मुहाने पर पुहार का प्रसिद्ध बंदरगाह निर्मित कराया गया। इससे विदेशों से व्यापार का रास्ता खुल गया। दक्षिण भारत से मसाले का व्यापार काफी लाभप्रद हुआ। कृषि, व्यापार और उद्योग में अभूतपूर्व उन्नति हुई। 7वीं - 8वीं शताब्दी में पल्लव शासकों ने स्थापत्य को बढ़ावा दिया। चित्रकला का विकास हुआ। कांचीपुरम में बुनकरों को वैश्यों-व्यापारियों के जैसा सम्मान प्राप्त हुआ। कुल मिलाकर देखें तो यहाँ भी पूँजीवादी संबंधों का प्रसार हुआ और सामंती व्यवस्था में जो वर्ण, जातियाँ पिछड़ी हुई थीं उनमें आर्थिक सुधार हुआ। 8

SubQuestion No : 18

Q.18 दक्षिण भारत का विदेशी व्यापार सर्वाधिक किस उत्पाद पर आश्रित था? 11

- Ans 1. मसाले
 2. कपड़ा
 3. चाय
 4. मूर्तियाँ

Question ID : 4410091064882

Option 1 ID : 4410094206187

Option 2 ID : 4410094206189

Option 3 ID : 4410094206190

Option 4 ID : 4410094206188

Comprehension:

दिए गए गद्यांश के आधार पर निम्नांकित प्रश्नों के उत्तर दीजिए --

इतिहासकारों ने दक्षिण भारत में भक्ति के उदय की व्याख्या सामाजिक ऐतिहासिक संदर्भों में की है। उनके अनुसार जो स्थिति उत्तर भारत में 13वीं - 14वीं सदी में उत्पन्न हुई वह दक्षिण भारत में पहली सदी के बाद ही पैदा हो गई थी। दक्षिण भारत में पहली शताब्दी के बाद कई शताब्दियों तक राजसत्ता अनेक पराक्रमी शासकों के हाथ में रही। केंद्रीय सत्ता के मज़बूत होने के परिणामस्वरूप व्यापार और कृषि में उन्नति स्वाभाविक है। दक्षिण में चोलवंशी शासक करिकाल ने कावेरी जल को नियंत्रित कर सिंचाई की व्यवस्था की। इसका सीधा फायदा किसानों को हुआ। कृषि के उत्पादन में काफी बढ़ोत्तरी हुई। उसी समय श्रीलंका को युद्ध में पराजित कर युद्धबंदियों के माध्यम से कावेरी के मुहाने पर पुहार का प्रसिद्ध बंदरगाह निर्मित कराया गया। इससे विदेशों से व्यापार का रास्ता खुल गया। दक्षिण भारत से मसाले का व्यापार काफी लाभप्रद हुआ। कृषि, व्यापार और उद्योग में अभूतपूर्व उन्नति हुई। 7वीं - 8वीं शताब्दी में पल्लव शासकों ने स्थापत्य को बढ़ावा दिया। चित्रकला का विकास हुआ। कांचीपुरम में बुनकरों को वैश्यों-व्यापारियों के जैसा सम्मान प्राप्त हुआ। कुल मिलाकर देखें तो यहाँ भी पूँजीवादी संबंधों का प्रसार हुआ और सामंती व्यवस्था में जो वर्ण, जातियाँ पिछड़ी हुई थीं उनमें आर्थिक सुधार हुआ। 8

SubQuestion No : 19

Q.19 राजा करिकाल के संदर्भ में असत्य कथन है-- 12

- Ans
- 1. इन्होंने कावेरी नदी के जल को नियंत्रित कर सिंचाई की व्यवस्था की।
 - 2. इन्होंने श्रीलंका को युद्ध में पराजित कर युद्धबंदी बनाए।
 - 3. इन्होंने किसानों की प्रगति की ओर विशेष ध्यान नहीं दिया।
 - 4. इन्होंने कावेरी नदी के मुहाने पर पुहार का बंदरगाह निर्मित कराया।

Question ID : 4410091064883

Option 1 ID : 4410094206191

Option 2 ID : 4410094206192

Option 3 ID : 4410094206194

Option 4 ID : 4410094206193

Comprehension:

दिए गए गद्यांश के आधार पर निम्नांकित प्रश्नों के उत्तर दीजिए --

इतिहासकारों ने दक्षिण भारत में भक्ति के उदय की व्याख्या सामाजिक ऐतिहासिक संदर्भों में की है। उनके अनुसार जो स्थिति उत्तर भारत में 13वीं - 14वीं सदी में उत्पन्न हुई वह दक्षिण भारत में पहली सदी के बाद ही पैदा हो गई थी। दक्षिण भारत में पहली शताब्दी के बाद कई शताब्दियों तक राजसत्ता अनेक पराक्रमी शासकों के हाथ में रही। केंद्रीय सत्ता के मज़बूत होने के परिणामस्वरूप व्यापार और कृषि में उन्नति स्वाभाविक है। दक्षिण में चोलवंशी शासक करिकाल ने कावेरी जल को नियंत्रित कर सिंचाई की व्यवस्था की। इसका सीधा फायदा किसानों को हुआ। कृषि के उत्पादन में काफी बढ़ोत्तरी हुई। उसी समय श्रीलंका को युद्ध में पराजित कर युद्धबंदियों के माध्यम से कावेरी के मुहाने पर पुहार का प्रसिद्ध बंदरगाह निर्मित कराया गया। इससे विदेशों से व्यापार का रास्ता खुल गया। दक्षिण भारत से मसाले का व्यापार काफी लाभप्रद हुआ। कृषि, व्यापार और उद्योग में अभूतपूर्व उन्नति हुई। 7वीं - 8वीं शताब्दी में पल्लव शासकों ने स्थापत्य को बढ़ावा दिया। चित्रकला का विकास हुआ। कांचीपुरम में बुनकरों को वैश्यों-व्यापारियों के जैसा सम्मान प्राप्त हुआ। कुल मिलाकर देखें तो यहाँ भी पूँजीवादी संबंधों का प्रसार हुआ और सामंती व्यवस्था में जो वर्ण, जातियाँ पिछड़ी हुई थीं उनमें आर्थिक सुधार हुआ। 8

SubQuestion No : 20

Q.20 निम्न में से पल्लव शासकों की उपलब्धि नहीं थी-- 13

- Ans
- 1. चित्रकला का विकास
 - 2. कपड़ा बुनकरों का सामाजिक उत्थान
 - 3. पिछड़ी जातियों का आर्थिक पतन
 - 4. स्थापत्य कला का विकास

Question ID : 4410091064884

Option 1 ID : 4410094206196

Option 2 ID : 4410094206197

Option 3 ID : 4410094206198

Option 4 ID : 4410094206195

Q.1 John Dryden's Mac Flecknoe is a:

- Ans 1. Personal Satire
 2. Miltonic Sonnet
 3. Pastoral Elegy
 4. Pindaric Ode

Question ID : 441009996734
Option 1 ID : 4410093938928
Option 2 ID : 4410093938927
Option 3 ID : 4410093938925
Option 4 ID : 4410093938926

Q.2 What is the main theme of "A Tale of Two Cities"?

- Ans 1. The conflict between science and religion
 2. The adventures of a heroic knight
 3. The consequences of unrequited love
 4. The struggle for social justice and personal sacrifice

Question ID : 441009996597
Option 1 ID : 4410093938377
Option 2 ID : 4410093938380
Option 3 ID : 4410093938378
Option 4 ID : 4410093938379

Q.3 Which of the following poems do the given lines belong to?

"Fade far away, dissolve, and quite forget
What thou among the leaves hast never known,
The weariness, the fever, and the fret"

- Ans 1. Ode on Melancholy
 2. Ode to a Nightingale
 3. Ode on a Grecian Urn
 4. La Belle Dame sans Merci

Question ID : 441009350364
Option 1 ID : 4410091367805
Option 2 ID : 4410091367804
Option 3 ID : 4410091367802
Option 4 ID : 4410091367803

Q.4 What is the main trait of the character Shadwell in "Mac Flecknoe"?

- Ans 1. Laziness
 2. Bravery
 3. Stupidity
 4. Wisdom

Question ID : 441009997127
Option 1 ID : 4410093940498
Option 2 ID : 4410093940499
Option 3 ID : 4410093940497
Option 4 ID : 4410093940500

Q.5 Consider the following statements and select the correct option.

A. Eliot's "The Wasteland" projects mental, emotional and spiritual aridity of his time.
B. This is because human beings had lost faith in God and religion, along with experiencing a growing alienation from Victorian morality. In the absence of any strong anchor to hold on to, they had become ruthless and corrupted without any passion for the sublime fragments of life.

- Ans
- 1. Both A and B are true, but B is not the correct explanation of A.
 - 2. A is false but B is true.
 - 3. Both A and B are true, and B is the correct explanation of A.
 - 4. A is true but B is false.

Question ID : 441009996790
Option 1 ID : 4410093939152
Option 2 ID : 4410093939150
Option 3 ID : 4410093939151
Option 4 ID : 4410093939149

Q.6 What role does Doctor Manette play in "A Tale of Two Cities"?

- Ans
- 1. A wrongfully imprisoned man who is reunited with his daughter
 - 2. A wealthy aristocrat
 - 3. A heroic soldier
 - 4. A revolutionary leader

Question ID : 441009996598
Option 1 ID : 4410093938383
Option 2 ID : 4410093938384
Option 3 ID : 4410093938382
Option 4 ID : 4410093938381

Q.7 In which Canto of 'The Rape of the Lock', written by Alexander Pope, is the Card game played?

- Ans
- 1. Canto III
 - 2. Canto IV
 - 3. Canto V
 - 4. Canto II

Question ID : 441009350388
Option 1 ID : 4410091367901
Option 2 ID : 4410091367900
Option 3 ID : 4410091367899
Option 4 ID : 4410091367898

Q.8 Which collection of poems written by William Wordsworth and ST Coleridge is often designated by scholars as a signal of the beginning of 'English Romanticism'?

- Ans
- 1. Lyrical Ballads
 - 2. The Marriage of Heaven
 - 3. Darkness
 - 4. She Walks in Beauty

Question ID : 441009350382
Option 1 ID : 4410091367876
Option 2 ID : 4410091367875
Option 3 ID : 4410091367874
Option 4 ID : 4410091367877

Q.9 Which of the following works of Percy Bysshe Shelley is written in terza rima?

- Ans 1. Ode to the West Wind
 2. The Witch of Atlas
 3. Ozymandias
 4. Julian and Maddalo

Question ID : 441009350365
Option 1 ID : 4410091367807
Option 2 ID : 4410091367808
Option 3 ID : 4410091367806
Option 4 ID : 4410091367809

Q.10 Which of the following is a form of a Shakespearean sonnet?

- Ans 1. Three quatrains and a couplet
 2. Two quatrains and a couplet
 3. Two quatrains and two tercets
 4. Four quatrains and a sestet

Question ID : 441009997149
Option 1 ID : 4410093940587
Option 2 ID : 4410093940586
Option 3 ID : 4410093940585
Option 4 ID : 4410093940588

Q.11 Match the following authors with their major prose works.

Authors	Works
1. Samuel Richardson	A. Tom Jones
2. Henry Fielding	B. Tristram Shandy
3. Laurence Sterne	C. Pamela
4. Tobias Smollett	D. Roderick Random

- Ans 1. 1-C, 2-A, 3-B, 4-D
 2. 1-A, 2-D, 3-C, 4-B
 3. 1-B, 2-C, 3-D, 4-A
 4. 1-D, 2-B, 3-A, 4-C

Question ID : 441009829185
Option 1 ID : 4410093270279
Option 2 ID : 4410093270280
Option 3 ID : 4410093270281
Option 4 ID : 4410093270282

Q.12 In An Essay on Man, what is the primary philosophical theme that Pope explores?

- Ans 1. The virtues of religious asceticism
 2. The joys of romantic love
 3. The corrupt nature of political institutions
 4. The place of humanity in the great chain of being and the limits of human knowledge

Question ID : 441009830131
Option 1 ID : 4410093274063
Option 2 ID : 4410093274065
Option 3 ID : 4410093274062
Option 4 ID : 4410093274064

Q.13 Which literary device is most commonly associated with modernist fiction?

- Ans 1. Stream of consciousness and interior monologue
 2. Rhymed couplets and formal stanza structures
 3. Omniscient third-person narration with moral commentary
 4. Allegorical simplicity and didactic tone

Question ID : 441009828718
Option 1 ID : 4410093268413
Option 2 ID : 4410093268414
Option 3 ID : 4410093268411
Option 4 ID : 4410093268412

Q.14 Milton's "Lycidas" is a/an:

- Ans 1. pastoral eclogue
 2. pastoral elegy
 3. epithalamium
 4. public elegy

Question ID : 441009997021
Option 1 ID : 4410093940073
Option 2 ID : 4410093940075
Option 3 ID : 4410093940076
Option 4 ID : 4410093940074

Q.15 Match List-I with List-II.

List-I List-II

A Romeo and Juliet I Comedy

B As You Like It II History Play

C The Winter's Tale III Tragicomedy

D Richard III IV Tragedy

- Ans 1. A-III, B-II, C-I, D-IV
 2. A-IV, B-I, C-III, D-II
 3. A-II, B-III, C-IV, D-I
 4. A-I, B-IV, C-II, D-III

Question ID : 441009996719
Option 1 ID : 4410093938865
Option 2 ID : 4410093938867
Option 3 ID : 4410093938866
Option 4 ID : 4410093938868

Q.16 Identify the work written by John Webster from the options given.

- Ans 1. King Lear
 2. The Waste Land
 3. The White Devil
 4. The Faerie Queene

Question ID : 441009996630
Option 1 ID : 4410093938512
Option 2 ID : 4410093938511
Option 3 ID : 4410093938509
Option 4 ID : 4410093938510

Q.17 What is a primary theme in 'The Duchess of Malfi'?

- Ans
- 1. The pursuit of love
 - 2. The tyranny and corruption of power
 - 3. The conflict between ambition and duty
 - 4. The beauty of nature

Question ID : 441009996628
Option 1 ID : 4410093938501
Option 2 ID : 4410093938503
Option 3 ID : 4410093938502
Option 4 ID : 4410093938504

Q.18 Which of the following pairs correctly matches a Shakespearean comedy with a Shakespearean tragedy?

- Ans
- 1. Julius Caesar - Romeo and Juliet
 - 2. The Comedy of Errors - The Taming of the Shrew
 - 3. A Midsummer Night's Dream - Love's Labour's Lost
 - 4. Two Gentlemen of Verona - Hamlet

Question ID : 441009997151
Option 1 ID : 4410093940595
Option 2 ID : 4410093940594
Option 3 ID : 4410093940596
Option 4 ID : 4410093940593

Q.19 Which of the following poems is attributed to John Milton?

- Ans
- 1. Hymn to Adversity
 - 2. On the Late Massacre in Piedmont
 - 3. To the Evening Star
 - 4. To the Skylark

Question ID : 441009997018
Option 1 ID : 4410093940063
Option 2 ID : 4410093940061
Option 3 ID : 4410093940062
Option 4 ID : 4410093940064

Q.20 Identify the lines from Tennyson's poem, 'Ulysses'.

A: I cannot rest from travel: I will drink
Life to the lees: All times I have enjoy'd
Greatly, have suffer'd greatly, both with those
That loved me, and alone, on shore, and when
Thro' scudding drifts the rainy Hyades
Vext the dim sea: I am become a name
B: A land of streams! Some, like a downward smoke,
Slow- dropping veils of thinnest lawn, did go;
And some thro' wavering lights and shadows broke,
Rolling a slumbrous sheet of foam below.
C: Willows whiten, aspens shiver
The sunbeam showers break and quiver
In the stream that runneth ever
By the island in the river
Flowing down to Camelot
D: And the stately ships go on
To their haven under the hill;
But O for the touch of vanish'd hand
And the sound of a voice that is still

- Ans 1. A
 2. D
 3. C
 4. B

Question ID : 441009996104
Option 1 ID : 4410093936406
Option 2 ID : 4410093936405
Option 3 ID : 4410093936407
Option 4 ID : 4410093936408

Section : Discipline2

Q.1 Match the poets with their notable modern poems and select the correct option.

Poets	Poems
1. Wallace Stevens	A. The Thought-Fox
2. Sylvia Plath	B. The Emperor of Ice-Cream
3. Ted Hughes	C. Digging
4. Seamus Heaney	D. Daddy

- Ans 1. 1-B, 2-D, 3-A, 4-C
 2. 1-C, 2-A, 3-B, 4-D
 3. 1-D, 2-B, 3-C, 4-A
 4. 1-A, 2-C, 3-D, 4-B

Question ID : 441009828677
Option 1 ID : 4410093268247
Option 2 ID : 4410093268250
Option 3 ID : 4410093268249
Option 4 ID : 4410093268248

Q.2 In the 'Prelude' written by William Wordsworth, the boy of Winander is affected by which of the following?

- Ans 1. Tuberculosis
 2. Muteness
 3. Dumbness
 4. Polio

Question ID : 441009350384
Option 1 ID : 4410091367885
Option 2 ID : 4410091367883
Option 3 ID : 4410091367882
Option 4 ID : 4410091367884

Q.3 Which of the following is a characteristic feature of Emily Dickinson's poetry?

- Ans 1. Use of quatrains and couplets
 2. Frequent use of slant rhyme
 3. Extensive use of free verse
 4. Extensive use of iambic pentameter

Question ID : 441009996998
Option 1 ID : 4410093939984
Option 2 ID : 4410093939983
Option 3 ID : 4410093939981
Option 4 ID : 4410093939982

Q.4 In the play 'Duchess of Malfi' written by John Webster, Antonio, during his conversation with Delio, reveals that the Duchess's brothers _____.

- Ans 1. are honest and noble
 2. are very talented and kind-hearted
 3. are loyal and very down to earth
 4. are conniving, jealous and despicable

Question ID : 441009996355
Option 1 ID : 4410093937409
Option 2 ID : 4410093937410
Option 3 ID : 4410093937411
Option 4 ID : 4410093937412

Q.5 "If the red slayer think he slays, / Or if the slain think he is slain". What does Emerson suggest in these lines?

- Ans 1. Killing is deemed appropriate.
 2. Fear of death is natural.
 3. Life and death are illusions.
 4. Life and death are certain.

Question ID : 441009997136
Option 1 ID : 4410093940533
Option 2 ID : 4410093940536
Option 3 ID : 4410093940535
Option 4 ID : 4410093940534

Q.6 How does the character of Moorthy represent the integration of Gandhian principles into a spiritual and social worldview in Raja Rao's Kanthapura?

- Ans
- 1. He rejects social reforms and focuses solely on individual spiritual enlightenment.
 - 2. He embodies a fusion of Gandhian ideas and spiritual awakening, striving for both social justice and personal morality.
 - 3. He advocates for political violence to achieve independence.
 - 4. He avoids any social engagement and focuses only on intellectual development.

Question ID : 441009670207
Option 1 ID : 4410092634801
Option 2 ID : 4410092634802
Option 3 ID : 4410092634803
Option 4 ID : 4410092634804

Q.7 What is the major theme of Nadine Gordimer's novels?

- Ans
- 1. Art and culture
 - 2. Love and communalism
 - 3. Metaphysical
 - 4. Exile and alienation

Question ID : 441009996283
Option 1 ID : 4410093937122
Option 2 ID : 4410093937124
Option 3 ID : 4410093937121
Option 4 ID : 4410093937123

Q.8 Which of the following is a common characteristic of a short story?

- Ans
- 1. Multiple plot lines and a large cast of characters
 - 2. Expansive building of atmosphere and detailed flashbacks
 - 3. Lengthy dialogues and complex subplots
 - 4. Development of a single incident or the central character

Question ID : 441009997061
Option 1 ID : 4410093940234
Option 2 ID : 4410093940236
Option 3 ID : 4410093940235
Option 4 ID : 4410093940233

Q.9 "When I and the bull of the Bharatas Bhishma are near, no foul play ordained by fate can possibly occur."

Who is 'I' referred to in the given sentence?

- Ans
- 1. Dhritarashtra
 - 2. Vidura
 - 3. Duryodhana
 - 4. Sakuni

Question ID : 441009997186
Option 1 ID : 4410093940736
Option 2 ID : 4410093940735
Option 3 ID : 4410093940733
Option 4 ID : 4410093940734

Q.10 'Bacchus', according to the 'In Metamorphoses, Book 3', was a son of 'Semele', a beautiful mortal, and _____.

- Ans
- 1. Ariel, king of Alphanso
 - 2. Jupiter, king of Gods
 - 3. Kingston, the Ruler of Venus
 - 4. Marsh, king of Heavens

Question ID : 441009996697
Option 1 ID : 4410093938777
Option 2 ID : 4410093938779
Option 3 ID : 4410093938780
Option 4 ID : 4410093938778

Q.11 Which of the following was the first play written by Kalidasa?

- Ans
- 1. Vikramorvasiyam
 - 2. Malvikagnimitram
 - 3. Abhijnana Shakuntala
 - 4. Kumarasambhavam

Question ID : 441009997196
Option 1 ID : 4410093940774
Option 2 ID : 4410093940775
Option 3 ID : 4410093940773
Option 4 ID : 4410093940776

Q.12 What aspect of 'The Way of the World' by William Congreve is primarily highlighted?

- Ans
- 1. The exploration of religious themes
 - 2. The portrayal of political corruption
 - 3. The depiction of romantic and social satire
 - 4. The use of allegory and symbolism

Question ID : 441009996620
Option 1 ID : 4410093938472
Option 2 ID : 4410093938470
Option 3 ID : 4410093938471
Option 4 ID : 4410093938469

Q.13 What can be inferred about Keats's portrayal of the season of autumn from the given lines?

And sometimes like a gleaner thou dost keep
Steady thy laden head across a brook;
Or by a cider-press, with patient look,
Thou watchest the last oozings hours by hours.

- Ans
- 1. Autumn is associated with youth and spontaneity.
 - 2. Autumn is depicted as slow, rich and full of mature beauty.
 - 3. Autumn is portrayed as violent and harsh.
 - 4. Autumn is shown to be a time of anxiety and preparation.

Question ID : 441009822829
Option 1 ID : 4410093245419
Option 2 ID : 4410093245418
Option 3 ID : 4410093245416
Option 4 ID : 4410093245417

Q.14 In column A names of some characters are given and in Column B titles of the short stories from where these characters are taken. Match the characters with their respective stories.

No	A		B
I	Dikeledi Mokipi	A	The Green Leaves'
I	Nana	B	The Collector of Treasures
III	Nyagar	C	The Girl Who Can

- Ans
- 1. I- B, II- A, III- C,
 - 2. I- C, II- B, III- A,
 - 3. I- C, II- A, III- B
 - 4. I- B, II- C, III- A

Question ID : 441009996306
Option 1 ID : 4410093937213
Option 2 ID : 4410093937214
Option 3 ID : 4410093937215
Option 4 ID : 4410093937216

Q.15 Which of the following poems do the given lines belong to?

"I see a lily on thy brow,
With anguish moist and fever-dew,
And on thy cheeks a fading rose
Fast withereth too."

- Ans
- 1. La Belle Dame sans Merci
 - 2. To His Coy Mistress
 - 3. The Garden of Love
 - 4. She Walks in Beauty

Question ID : 441009350360
Option 1 ID : 4410091367788
Option 2 ID : 4410091367786
Option 3 ID : 4410091367789
Option 4 ID : 4410091367787

Q.16 "Beauty is truth, truth beauty,—that is all
Ye know on earth, and all ye need to know."

Which of the following poems do these lines belong to?

- Ans
- 1. Ode to Psyche
 - 2. Ode on Indolence
 - 3. Ode to a Nightingale
 - 4. Ode on a Grecian Urn

Question ID : 441009350361
Option 1 ID : 4410091367790
Option 2 ID : 4410091367791
Option 3 ID : 4410091367793
Option 4 ID : 4410091367792

Q.17 Match the authors listed in column 1 with their popular works listed in column 2.

Column 1	Column 2
1. JK Rowling	a. The Hobbit
2. Agatha Christie	b. Murder on the Orient Express
3. Rudyard Kipling	c. Harry Potter and the Philosopher's Stone
4. JRR Tolkien	d. The Jungle Book

- Ans
- 1. 1-d, 2-c, 3-a, 4-b
 - 2. 1-c, 2-b, 3-d, 4-a
 - 3. 1-c, 2-d, 3-b, 4-a
 - 4. 1-b, 2-a, 3-c, 4-d

Question ID : 441009996632
Option 1 ID : 4410093938518
Option 2 ID : 4410093938517
Option 3 ID : 4410093938520
Option 4 ID : 4410093938519

Q.18 In Ovid's "Metamorphoses," what event leads to the tragic deaths of Pyramus and Thisbe?

- Ans
- 1. A war between their families
 - 2. A misunderstanding involving a lioness
 - 3. A curse from the gods
 - 4. A shipwreck

Question ID : 441009996387
Option 1 ID : 4410093937539
Option 2 ID : 4410093937537
Option 3 ID : 4410093937538
Option 4 ID : 4410093937540

Q.19 Which of the following poems do the given lines belong to?

"Where are the songs of spring? Ay, Where are they?
Think not of them, thou hast thy music too"

- Ans
- 1. The Eve of Saint Mark
 - 2. To Autumn
 - 3. When I Have Fears
 - 4. Mutability

Question ID : 441009350357
Option 1 ID : 4410091367774
Option 2 ID : 4410091367775
Option 3 ID : 4410091367776
Option 4 ID : 4410091367777

Q.20 Which of the following best describes the main characteristic of science fiction?

- Ans
- 1. Depiction of ordinary life in rural settings
 - 2. Exploration of historical events and figures
 - 3. Speculative concepts based on scientific principles and futuristic settings
 - 4. Focus on magical and supernatural elements

Question ID : 441009996631
Option 1 ID : 4410093938516
Option 2 ID : 4410093938513
Option 3 ID : 4410093938515
Option 4 ID : 4410093938514

Section : Discipline3

Q.1 "Thou on whose stream, mid the steep sky's commotion,
Loose clouds like earth's decaying leaves are shed"

Which poem do these famous lines belong to?

- Ans
- 1. Prometheus Unbound
 - 2. Ode to the West Wind
 - 3. I Wandered Lonely as a Cloud
 - 4. The Rime of the Ancient Mariner

Question ID : 441009350372
Option 1 ID : 4410091367836
Option 2 ID : 4410091367837
Option 3 ID : 4410091367834
Option 4 ID : 4410091367835

Q.2 Select the genre which is NOT a part of popular literature.

- Ans
- 1. Chick Literature
 - 2. Comics
 - 3. Spy Fiction
 - 4. Newspaper

Question ID : 441009996674
Option 1 ID : 4410093938686
Option 2 ID : 4410093938685
Option 3 ID : 4410093938687
Option 4 ID : 4410093938688

Q.3 Where was Nadine Gordimer born?

- Ans
- 1. London, United Kingdom
 - 2. Rome, Italy
 - 3. Gaunteng, South Africa
 - 4. Paris, France

Question ID : 441009996277
Option 1 ID : 4410093937098
Option 2 ID : 4410093937100
Option 3 ID : 4410093937097
Option 4 ID : 4410093937099

Q.4 Which poem of Indira Sant gives us the realistic picture of an Indian widow?

- Ans 1. Her Dream
 2. Malan Gatha
 3. Bahulya
 4. Wamsh Kusum

Question ID : 441009996278
Option 1 ID : 4410093937101
Option 2 ID : 4410093937104
Option 3 ID : 4410093937102
Option 4 ID : 4410093937103

Q.5 Which of the following is a theme of 'Tintern Abbey' by Wordsworth?

- Ans 1. Urbanisation and its significance
 2. Critique of ruralism
 3. Celebration of city life
 4. Restorative power of nature

Question ID : 441009996022
Option 1 ID : 4410093936083
Option 2 ID : 4410093936082
Option 3 ID : 4410093936084
Option 4 ID : 4410093936081

Q.6 What is the profession of the central character Shan Te in the play 'The Good Woman of Setzuan'?

- Ans 1. Prostitute
 2. Housewife
 3. Actor
 4. Dancer

Question ID : 441009996212
Option 1 ID : 4410093936839
Option 2 ID : 4410093936838
Option 3 ID : 4410093936837
Option 4 ID : 4410093936840

Q.7 In the light of the following statements labelled A and B, choose the correct option.

(A) Oedipus Rex moves on a linear scale, which means that past events are inadvertently knitted with the present.

(B) However, the play ends on a cyclic movement through the knowledge, assertion, and realisation of the Delphic Oracle.

- Ans 1. Both A and B are true but B is not the central plotline of the play.
 2. A is true but B is false
 3. Both A and B are true and B is the central plotline of the play.
 4. A is false but B is true

Question ID : 441009997096
Option 1 ID : 4410093940376
Option 2 ID : 4410093940373
Option 3 ID : 4410093940375
Option 4 ID : 4410093940374

Q.8 Match the following writers with their stories.

- (i) Grace Ogot A. The Collector of Treasurers
- (ii) Ama Ata Adioo B. The Green Leaves
- (iii) Bessie Head C. The Girl Who Can

- Ans
- 1. (i)-B, (ii)-C, (iii)-A
 - 2. (i)-A, (ii)-B, (iii)-C
 - 3. (i)-B, (ii)-A, (iii)-C
 - 4. (i)-A, (ii)-C, (iii)-B

Question ID : 441009996219
Option 1 ID : 4410093936865
Option 2 ID : 4410093936868
Option 3 ID : 4410093936867
Option 4 ID : 4410093936866

Q.9 Match the following poets with their poems and select the correct option.

Poets	Poems
A. Samuel Taylor Coleridge	1. The Mask of Anarchy
B. Lord Byron	2. Vision of Judgement
C. Percy Bysshe Shelley	3. The Suicide's Argument
D. William Blake	4. The Voice of the Ancient Bard

- Ans
- 1. A-1, B-4, C-3, D-2
 - 2. A-3, B-2, C-1, D-4
 - 3. A-4, B-1, C-2, D-3
 - 4. A-2, B-3, C-4, D-1

Question ID : 441009822810
Option 1 ID : 4410093245351
Option 2 ID : 4410093245348
Option 3 ID : 4410093245350
Option 4 ID : 4410093245349

Q.10 Which of the following is a prominent characteristic of Romantic age in British Literature?

- Ans
- 1. Intellectualism
 - 2. Gaudy diction
 - 3. Imagination
 - 4. Imitation

Question ID : 441009996031
Option 1 ID : 4410093936118
Option 2 ID : 4410093936120
Option 3 ID : 4410093936117
Option 4 ID : 4410093936119

Q.11 Identify the themes from Pablo Neruda's poem 'Tonight I Can Write'.

A: 'Tonight I Can Write' delves into memories of a lost love and the accompanying heartache. Reflecting on his emotional distance from the past, he admits, "Tonight I can write the saddest lines", indicating that his previous grief had stifled any attempt to recall or describe his past love.

B: Although his pain once hindered his creative expression, he never finds solace in writing about their relationships.

C: The poem vividly conveys the speaker's profound affection for a woman with whom he shared an intense romance.

D: Neruda uses nature imagery to convey the speaker's spiritual perception of his relationship with his lover.

E: The speaker equates his memories of his passionate relationship with his lover with his current state of alienation and loneliness without her.

Ans 1. A, B, C

2. A, C, D

3. C, D, E

4. B, C, D

Question ID : 441009996084

Option 1 ID : 4410093936325

Option 2 ID : 4410093936327

Option 3 ID : 4410093936328

Option 4 ID : 4410093936326

Q.12 Which of the following best describes the style and structure of Henrik Ibsen's 'Ghosts'?

Ans 1. A traditional five-act play using poetic language and mythological references

2. A three-act play written in prose, utilising realistic dialogue and contemporary social issues

3. A one-act play with a non-linear structure, emphasising absurdity and existential themes

4. A two-act play using lyrical monologues and symbolism to explore romantic ideals

Question ID : 441009996123

Option 1 ID : 4410093936481

Option 2 ID : 4410093936482

Option 3 ID : 4410093936483

Option 4 ID : 4410093936484

Q.13 From which perspective is the novel Ice-Candy-Man deeply political in its retelling of the events of the partition?

Ans 1. Only the English perspective

2. Indian perspective

3. Only the Pakistani perspective

4. Both the English and Pakistani perspectives

Question ID : 441009670190

Option 1 ID : 4410092634735

Option 2 ID : 4410092634734

Option 3 ID : 4410092634733

Option 4 ID : 4410092634736

Q.14 Who is the author of the novel "Talking of Muskaan"?

- Ans
- 1. Payal Dhar
 - 2. Himanjali Sankar
 - 3. Ranjit Lal
 - 4. Sara Zarr

Question ID : 441009996358
Option 1 ID : 4410093937422
Option 2 ID : 4410093937423
Option 3 ID : 4410093937424
Option 4 ID : 4410093937421

Q.15 Which of the following is an epic poem dedicated to Queen Elizabeth?

- Ans
- 1. Epithalamion
 - 2. The Faerie Queene
 - 3. Amoretti
 - 4. Astrophel

Question ID : 441009997059
Option 1 ID : 4410093940228
Option 2 ID : 4410093940227
Option 3 ID : 4410093940226
Option 4 ID : 4410093940225

Q.16 Who gave the following definition of Popular Literature/Fiction?

"Contemporary popular fiction is the product of a huge entertainment industry."

- Ans
- 1. JR Lowell
 - 2. Scott McCracken
 - 3. George Saintsbury
 - 4. Roland Barthes

Question ID : 441009996672
Option 1 ID : 4410093938680
Option 2 ID : 4410093938679
Option 3 ID : 4410093938677
Option 4 ID : 4410093938678

Q.17 Which of the following is NOT a theme of 'The Rime of the Ancient Mariner'?

- Ans
- 1. Redemption
 - 2. Childhood
 - 3. Storytelling
 - 4. Supernaturalism

Question ID : 441009996024
Option 1 ID : 4410093936089
Option 2 ID : 4410093936092
Option 3 ID : 4410093936090
Option 4 ID : 4410093936091

Q.18 Select the option from where the following lines are taken from.

But thou, meek lover of the good!
Find me, and turn thy back on heaven.

- Ans 1. Brahma
 2. Forbearance
 3. Boston Hymn
 4. Terminus

Question ID : 441009997031
Option 1 ID : 4410093940115
Option 2 ID : 4410093940116
Option 3 ID : 4410093940113
Option 4 ID : 4410093940114

Q.19 Match the characters in List-I with the stories in List-II.

List-I List-II

- A. Dikeledi Mokopi I. The Green Leaves
B. Adjoa II. The Girl Who can
C. Nyagar III. The Collector of Treasures

- Ans 1. A-III, B-I, C-II
 2. A-II, B-III, C-I
 3. A-III, B-II, C-I
 4. A-I, B-II, C-III

Question ID : 441009996743
Option 1 ID : 4410093938961
Option 2 ID : 4410093938964
Option 3 ID : 4410093938962
Option 4 ID : 4410093938963

Q.20 How does the transformation of the character of the Brahmin woman, who initially resists Gandhian ideals, reflect the impact of Gandhian thought in Kanthapura by Raja Rao?

- Ans 1. She becomes an ardent supporter of the British, opposing Gandhian ideals.
 2. She keeps away from all forms of social change and refuses to support the movement.
 3. She gradually adopts Gandhian values, recognising the importance of social equality and participating in the movement.
 4. She becomes indifferent to the political struggle and disengages from the community.

Question ID : 441009670208
Option 1 ID : 4410092634806
Option 2 ID : 4410092634805
Option 3 ID : 4410092634807
Option 4 ID : 4410092634808

Q.1 What made Duhsanta an example of the king neglecting his duty and forgetting his heroic conduct?

- Ans
- 1. Societal Approval
 - 2. Traditional Marriage
 - 3. Formal Marriage
 - 4. Ghandharva marriage

Question ID : 441009997193
Option 1 ID : 4410093940764
Option 2 ID : 4410093940763
Option 3 ID : 4410093940762
Option 4 ID : 4410093940761

Q.2 Match the following writers with their works.

- (i) Bessie Head A) The Collector of Treasures
(ii) Ama Ata Aidoo B) The Girl Who Can
(iii) Grace Ogot C) The Green Leaves

- Ans
- 1. (i)-A, (ii)-B, (iii)-C
 - 2. (i)-B, (ii)-A, (iii)-C
 - 3. (i)-C, (ii)-B, (iii)-A
 - 4. (i)-B, (ii)-C, (iii)-A

Question ID : 441009996220
Option 1 ID : 4410093936869
Option 2 ID : 4410093936871
Option 3 ID : 4410093936872
Option 4 ID : 4410093936870

Q.3 Which of the following is not a legacy left by Angeline in the story 'The Legacy' written by Virginia Woolf?

- Ans
- 1. Burnt love letters and divorce file for Gilbert
 - 2. Legacy to Gilbert of her fidelity to B.M
 - 3. Pearl brooch for sissy
 - 4. Necklaces, rings and Chinese boxes for her friends

Question ID : 441009996201
Option 1 ID : 4410093936795
Option 2 ID : 4410093936794
Option 3 ID : 4410093936793
Option 4 ID : 4410093936796

Q.4 From which poem is the following line taken?

If winter comes, can spring be far behind?

- Ans
- 1. 'Christabel' by ST Coleridge
 - 2. 'Ode to the West Wind' by PB Shelley
 - 3. 'Ode to an Autumn' by John Keats
 - 4. 'The Prelude' by William Wordsworth

Question ID : 441009996029
Option 1 ID : 4410093936112
Option 2 ID : 4410093936110
Option 3 ID : 4410093936109
Option 4 ID : 4410093936111

Q.5 What are the eight forms mentioned in order as the play opens with a benediction or a prayer to Lord Shiva?

- Ans
- 1. Water, Fire, The Priest, Sun and Moon, Stars, Earth, Air
 - 2. Water, Fire, The King, Sun and Moon, Space, Earth, Air
 - 3. Water, Fire, The Priest, Sun and Moon, Space, Earth, Air
 - 4. Water, Fire, The universe, Sun and Moon, Space, Earth, Air

Question ID : 441009997189
Option 1 ID : 4410093940746
Option 2 ID : 4410093940748
Option 3 ID : 4410093940745
Option 4 ID : 4410093940747

Q.6 Who requests Duhsanta to fight on behalf of the gods against demons bent on destroying them?

- Ans
- 1. Kanva
 - 2. Marica
 - 3. Matali
 - 4. Madhavaya

Question ID : 441009997188
Option 1 ID : 4410093940744
Option 2 ID : 4410093940742
Option 3 ID : 4410093940743
Option 4 ID : 4410093940741

Q.7 Match the writers and their work given below.

A B

- (i) Nathaniel Hawthorne a) The Gold Bug
- (ii) Hemingway b) Snows of Kilimanjaro
- (iii) O Henry c) After Twenty years
- (iv) Edgar Allan Poe d) The Scarlet Letter
- (v) Willa Cather e) On the Gull's Road

- Ans
- 1. (i) a (ii) b (iii) c (iv) d (v) e
 - 2. (i) d (ii) b (iii) c (iv) a (v) e
 - 3. (i) d (ii) b (iii) e (iv) a (v) c
 - 4. (i) a (ii) e (iii) b (iv) d (v) c

Question ID : 441009997141
Option 1 ID : 4410093940556
Option 2 ID : 4410093940555
Option 3 ID : 4410093940553
Option 4 ID : 4410093940554

Q.8 Identify the form of Shakespearean Sonnets.

- Ans
- 1. Three quatrains and a couplet
 - 2. Octave and Sestet
 - 3. Seven heroic couplets and one iambic pentameter line
 - 4. Three stanzas structured as strophe, antistrophe and epode

Question ID : 441009996718
Option 1 ID : 4410093938864
Option 2 ID : 4410093938861
Option 3 ID : 4410093938862
Option 4 ID : 4410093938863

Q.9 In the Mahabharata, who was treated as an object or thing that can be either won or lost?

- Ans
- 1. Madri
 - 2. Gandhari
 - 3. Kunti
 - 4. Draupadi

Question ID : 441009997185
Option 1 ID : 4410093940732
Option 2 ID : 4410093940730
Option 3 ID : 4410093940729
Option 4 ID : 4410093940731

Q.10 Match the lines from the plays with their corresponding authors.

Lines from the Plays

1. I'm haunted by ghosts... It's not only the things we've inherited from our fathers and mothers that live on in us, but all sorts of dead ideas and old dead beliefs
2. You contradict yourself. What oppresses you - solitude, or the company of others? You consider yourself a thinker, yet you're devoid of logic.
3. We wait. We are bored. No, don't protest, we are bored to death, there's no denying it.
4. I want to go with the one I love. I do not want to calculate the cost.

Authors of the Plays

- a. Eugene Ionesco
- b. Bertolt Brecht
- c. Henrik Ibsen
- d. Samuel Beckett

- Ans
- 1. 1-d, 2-a, 3-b, 4-c
 - 2. 1-b, 2-c, 3-d, 4-a
 - 3. 1-d, 2-c, 3-b, 4-a
 - 4. 1-c, 2-a, 3-d, 4-b

Question ID : 441009996796
Option 1 ID : 4410093939175
Option 2 ID : 4410093939176
Option 3 ID : 4410093939174
Option 4 ID : 4410093939173

Q.11 Match the stories in List I with their writers in List II.

List-I List-II

- A. The Girl Who Can I. Bessie Head
B. The Green Leaves II. Ama Ata Aidoo
C. The Collector of Treasures III. Grace Ogot

- Ans
- 1. A-II, B-III, C-I
 - 2. A-II, B-I, C-III
 - 3. A-III, B-II, C-I
 - 4. A-I, B-II, C-III

Question ID : 441009996744
Option 1 ID : 4410093938965
Option 2 ID : 4410093938968
Option 3 ID : 4410093938966
Option 4 ID : 4410093938967

Q.12 Match the writers with their corresponding stories, and select the correct option.

1. Bessie Head A: The Girl Who Can
2. Ama Ata Aidoo B: The Green Leaves
3. Grace Ogot C: An Occurrence at Owl Creek Bridge
4. Ambrose Bierce D: The Collector of Treasures

- Ans
- 1. 1-C,2-A, 3-D, 4-B
 - 2. 1-D, 2-A, 3-B, 4-C
 - 3. 1-C, 2-B, 3-D, 4-A
 - 4. 1-A, 2-B, 3-C, 4-D

Question ID : 441009996086
Option 1 ID : 4410093936336
Option 2 ID : 4410093936333
Option 3 ID : 4410093936335
Option 4 ID : 4410093936334

Q.13 Which of the following genres is NOT typically considered a part of popular literature?

- Ans
- 1. Literary Fiction
 - 2. Science Fiction
 - 3. Mystery
 - 4. Romance

Question ID : 441009996255
Option 1 ID : 4410093937011
Option 2 ID : 4410093937012
Option 3 ID : 4410093937010
Option 4 ID : 4410093937009

Q.14 Select the most appropriate option to fill in the blank.

Ovid's 'Pyramus and Thisbe' is written in _____ verse.

- Ans
- 1. Pentameter
 - 2. Diameter
 - 3. Hectometer
 - 4. Hexameter

Question ID : 441009996649
Option 1 ID : 4410093938586
Option 2 ID : 4410093938587
Option 3 ID : 4410093938588
Option 4 ID : 4410093938585

Q.15 According to Duryodhana's narrative, what characteristics of Arjuna and Bhima were particularly highlighted?

- Ans
- 1. Their innocence and prowess among the five brothers
 - 2. Their wittiness among the five brothers
 - 3. Their strength and prowess among the five brothers
 - 4. Their cunningness among the five brothers

Question ID : 441009997187
Option 1 ID : 4410093940738
Option 2 ID : 4410093940739
Option 3 ID : 4410093940737
Option 4 ID : 4410093940740

Q.16 Match the authors with their corresponding works and select the correct option.

Authors	Works
1. JK Rowling	A. The Hunger Games
2. George Orwell	B. 1984
3. Ruskin Bond	C. A Season of Ghosts
4. Suzanne Collins	D. Harry Potter series

Ans 1. 1-D, 2-B, 3-C, 4-A

2. 1-B, 2-A, 3-D, 4-C

3. 1-D, 2-C, 3-B, 4-A

4. 1-B, 2-C, 3-D, 4-A

Question ID : 441009996851
Option 1 ID : 4410093939395
Option 2 ID : 4410093939396
Option 3 ID : 4410093939394
Option 4 ID : 4410093939393

Q.17 Who among the following characters from Plautus' Pot of Gold is a cunning slave who, though loyal to his master, trades his freedom from him in exchange for returning the stolen gold?

Ans 1. Megadorus

2. Lyconides

3. Staphyla

4. Strobilus

Question ID : 441009997093
Option 1 ID : 4410093940364
Option 2 ID : 4410093940362
Option 3 ID : 4410093940361
Option 4 ID : 4410093940363

Q.18 From which poem are the following lines taken?

"Oh, lift me as a wave, a leaf, a cloud!
I fall upon the thorns of life! I bleed!"

Ans 1. Ode to the West Wind

2. Ode to Autumn

3. Ode to a Skylark

4. Ode to a Nightingale

Question ID : 441009996028
Option 1 ID : 4410093936107
Option 2 ID : 4410093936106
Option 3 ID : 4410093936108
Option 4 ID : 4410093936105

Q.19 Who is the author of the novel 'The Hunger Games' (Series)?

Ans 1. Robert Frost

2. Suzanne Collins

3. Michael Huxley

4. Aldous Huxley

Question ID : 441009996356
Option 1 ID : 4410093937415
Option 2 ID : 4410093937413
Option 3 ID : 4410093937416
Option 4 ID : 4410093937414

Q.20 Which of the following are the works of Alexander Pope?

1. An Essay on Criticism
2. The Rape of the Lock
3. The Dunciad
4. An Essay on Man

- Ans 1. 1, 2, 3 and 4
2. 1, 3 and 4 only
3. 2, 3 and 4 only
4. 1, 2 and 3 only

Question ID : 441009997131
Option 1 ID : 4410093940514
Option 2 ID : 4410093940513
Option 3 ID : 4410093940516
Option 4 ID : 4410093940515

Section : Discipline5

Q.1 Match the following poets with their poems and select the correct option.

Column A (Poets)	Column B (Poems)
A. PB Shelley	1. Elegiac Stanzas
B. William Wordsworth	2. The Eve of St. Agnes
C. Lord Byron	3. Adonais
D. John Keats	4. Don Juan

- Ans 1. A-4, B-3, C-1, D-2
2. A-3, B-1, C-4, D-2
3. A-1, B-2, C-3, D-4
4. A-2, B-4, C-1, D-3

Question ID : 441009677077
Option 1 ID : 4410092662488
Option 2 ID : 4410092662487
Option 3 ID : 4410092662486
Option 4 ID : 4410092662485

Q.2 Match the writers in List I with their works in List II.

List I (Writers)	List II (Works)
I. Henrik Ibsen	1. Rhinoceros
II. Bertolt Brecht	2. Waiting for Godot
III. Samuel Beckett	3. The Good Woman of Szechuan
IV. Eugene Ionesco	4. Ghosts

- Ans 1. I-4, II-3, III-2, IV-1
2. I-1, II-2, III-3, IV-4
3. I-2, II-4, III-1, IV-3
4. I-3, II-1, III-4, IV-2

Question ID : 441009996258
Option 1 ID : 4410093937021
Option 2 ID : 4410093937022
Option 3 ID : 4410093937023
Option 4 ID : 4410093937024

Q.3 Which of the following is NOT a theme of "Tonight I will write the saddest lines" by Pablo Neruda?

- Ans 1. Love
 2. Pain
 3. Union
 4. Loss

Question ID : 441009996221
Option 1 ID : 4410093936873
Option 2 ID : 4410093936876
Option 3 ID : 4410093936875
Option 4 ID : 4410093936874

Q.4 Match the writers in List I with their corresponding works in List II and select the correct option.

List I (Writers)	List II (Works)
I. Nathaniel Hawthorne	1. The Fall of the House of Usher
II. Mark Twain	2. The House of the Seven Gables
III. Arthur Miller	3. A Connecticut Yankee in King Arthur's Court
IV. Edgar Allan Poe	4. Death of a Salesman

- Ans 1. I - 1, II - 3, III - 4, IV - 2
 2. I - 2, II - 4, III - 3, IV - 1
 3. I - 3, II - 2, III - 4, IV - 1
 4. I - 2, II - 3, III - 4, IV - 1

Question ID : 441009997057
Option 1 ID : 4410093940218
Option 2 ID : 4410093940220
Option 3 ID : 4410093940217
Option 4 ID : 4410093940219

Q.5 What object plays a significant role in "After Twenty Years"?

- Ans 1. A ring
 2. A letter
 3. A book
 4. A watch

Question ID : 441009996999
Option 1 ID : 4410093939987
Option 2 ID : 4410093939985
Option 3 ID : 4410093939988
Option 4 ID : 4410093939986

Q.6 In Ice-Candy-Man's suggestion, what are artificially created and deliberately fostered during the partition?

- Ans 1. Economic inequalities between regions
 2. Geographical boundaries of provinces
 3. Religious and cultural differences
 4. Linguistic barriers among communities

Question ID : 441009670189
Option 1 ID : 4410092634729
Option 2 ID : 4410092634731
Option 3 ID : 4410092634732
Option 4 ID : 4410092634730

Q.7 Which of the following is the characteristics of Emily Dickinson's poems?

- Ans
- 1. Spontaneity and objectivity
 - 2. Happy, vintage inspired themes
 - 3. Excessive use of terza rima
 - 4. Dramatisation of death and grave

Question ID : 441009996706
Option 1 ID : 4410093938814
Option 2 ID : 4410093938816
Option 3 ID : 4410093938813
Option 4 ID : 4410093938815

Q.8 Which political character was satirised by Swift in the description of Chief Minister in the novel Gulliver's Travels?

- Ans
- 1. Sir Robert Walpole
 - 2. Sir Roger De Coverley
 - 3. Roxana
 - 4. Lord WS Landor

Question ID : 441009996691
Option 1 ID : 4410093938755
Option 2 ID : 4410093938756
Option 3 ID : 4410093938753
Option 4 ID : 4410093938754

Q.9 Which of the following is a prominent theme of 'The Rime of the Ancient Mariner'?

- Ans
- 1. Poverty and struggle
 - 2. Sin and penance
 - 3. Childhood nostalgia and reminiscence
 - 4. Gender and its power struggle

Question ID : 441009996025
Option 1 ID : 4410093936096
Option 2 ID : 4410093936094
Option 3 ID : 4410093936093
Option 4 ID : 4410093936095

Q.10 When was Nadine Gordimer born?

- Ans
- 1. 28 February 1929
 - 2. 20 November 1923
 - 3. 20 December 1930
 - 4. 12 November 1923

Question ID : 441009996279
Option 1 ID : 4410093937108
Option 2 ID : 4410093937106
Option 3 ID : 4410093937107
Option 4 ID : 4410093937105

Q.1 A curriculum development team is designing a new secondary school unit on global ethics. Their goal is to define clear learning objectives, develop measurable outcomes, and structure activities that build specific ethical reasoning skills in a step-by-step manner. Which curriculum approach primarily guides this team's design philosophy?

- Ans
- 1. Intellectual-academic
 - 2. Reconceptualist
 - 3. Managerial-systems
 - 4. Behavioural-rational

Question ID : 4410091079369
Option 1 ID : 4410094254753
Option 2 ID : 4410094254752
Option 3 ID : 4410094254750
Option 4 ID : 4410094254751

Q.2 When teaching children with intellectual disabilities, what type of objects or materials should initially be used for introducing new concepts?

- Ans
- 1. Written descriptions
 - 2. Real objects
 - 3. Abstract symbols
 - 4. Complex diagrams

Question ID : 4410091079518
Option 1 ID : 4410094255357
Option 2 ID : 4410094255355
Option 3 ID : 4410094255354
Option 4 ID : 4410094255356

Q.3 In project-based learning (PBL), which aspect is most critical to the success of the learning experience?

- Ans
- 1. Focusing exclusively on individual assignments and tests rather than collaborative projects.
 - 2. Emphasising rote memorisation of facts related to the project topic.
 - 3. Engaging students in real-world, complex projects that require critical thinking, collaboration, and problem-solving over an extended period.
 - 4. Providing a detailed set of instructions and expecting students to follow them without deviation.

Question ID : 441009998595
Option 1 ID : 4410093946261
Option 2 ID : 4410093946264
Option 3 ID : 4410093946262
Option 4 ID : 4410093946263

Q.4 In the context of social cognitive theory, what role does self-efficacy play in learning and motivation?

- Ans
- 1. Higher self-efficacy leads to greater motivation, persistence, and resilience in the face of challenges.
 - 2. Self-efficacy is irrelevant to learning; only external rewards and punishments are significant motivators.
 - 3. Self-efficacy is a static trait that does not change over time and does not impact learning outcomes.
 - 4. Low self-efficacy enhances performance by motivating individuals to seek help and guidance.

Question ID : 441009998597
Option 1 ID : 4410093946270
Option 2 ID : 4410093946269
Option 3 ID : 4410093946271
Option 4 ID : 4410093946272

Q.5 While human development generally follows predictable patterns, educators consistently observe that no two students, even those of the same age, learn or behave identically. This core concept, acknowledging the unique combination of physical, intellectual, emotional and social attributes in each person, is known as:

- Ans
- 1. universal development
 - 2. holistic growth
 - 3. personality
 - 4. developmental stages

Question ID : 4410091079547
Option 1 ID : 4410094255472
Option 2 ID : 4410094255473
Option 3 ID : 4410094255471
Option 4 ID : 4410094255470

Q.6 According to the provided educational theory, how is a first language primarily acquired by children?

- Ans
- 1. By being 'caught' from environment
 - 2. Through formal classroom teaching
 - 3. By systematic grammar rules
 - 4. Through deliberate instruction

Question ID : 4410091079207
Option 1 ID : 4410094254120
Option 2 ID : 4410094254121
Option 3 ID : 4410094254119
Option 4 ID : 4410094254118

Q.7 What is one major psychological advantage of being multilingual?

- Ans
- 1. Reduced creativity
 - 2. Decreased social skills
 - 3. Lower linguistic aptitude
 - 4. Improved ability to adapt in thinking

Question ID : 4410091079195
Option 1 ID : 4410094254070
Option 2 ID : 4410094254071
Option 3 ID : 4410094254073
Option 4 ID : 4410094254072

Q.8 Which of the following is a key feature of development?

- Ans
- 1. It ends after teenage years.
 - 2. It avoids social influence.
 - 3. It is a qualitative change.
 - 4. It is limited to body height.

Question ID : 4410091079414
Option 1 ID : 4410094254930
Option 2 ID : 4410094254932
Option 3 ID : 4410094254933
Option 4 ID : 4410094254931

Q.9 A curriculum review committee notes that despite a rich array of historical documents and primary sources being available, students frequently report that the history curriculum feels disconnected and abstract, leading to low intrinsic motivation. This suggests a critical deficiency in which aspect of learning resource integration?

- Ans
- 1. Experiential linkage
 - 2. Comprehensiveness
 - 3. Durability
 - 4. Accessibility

Question ID : 4410091079362
Option 1 ID : 4410094254724
Option 2 ID : 4410094254723
Option 3 ID : 4410094254725
Option 4 ID : 4410094254722

Q.10 A school aims to design a new science curriculum that specifically encourages students to explore real-world environmental issues and propose sustainable solutions, moving beyond traditional textbook learning. Which curriculum design approach would be most appropriate for achieving this holistic, problem-solving objective?

- Ans
- 1. Learner-centered
 - 2. Subject-centered
 - 3. Problem-centered
 - 4. Broad fields

Question ID : 4410091079353
Option 1 ID : 4410094254689
Option 2 ID : 4410094254686
Option 3 ID : 4410094254688
Option 4 ID : 4410094254687

Telegram - @TeachingExam

DSSSB , KVS, CTET, EMRS, NVS , BPSC , RPSC , UPTET , AEES , AWES , CHANDIGRAH , ALL STATE TETs EXAM & Other Departments Related NTT PRT TGT & PGT सभी Teaching Jobs और Others Non-Teaching Govt. Jobs की Updates & FREE NOTES प्राप्त कर सकते हैं . Follow us on social media -


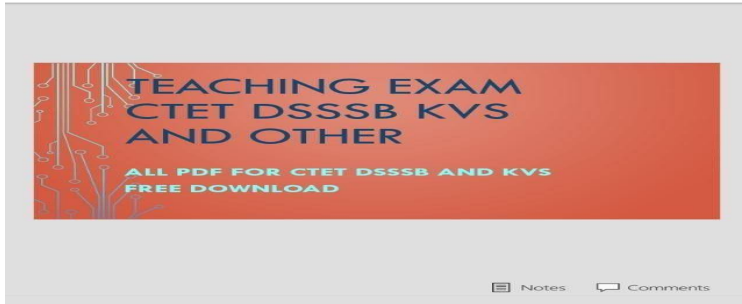
FOR ALL TEACHING EXAM UPDATES & PDF - <https://t.me/Teachingexam>

FOR KVS NVS EMRS UPDATE & FREE NOTES - <https://t.me/forKVSexam>

CTET & All STATE TET EXAM- <https://t.me/CTETEXAM2024PREPARATION>

JOIN WHATSAPP CHANNEL FOR EVERY UPDATE LINK - <https://whatsapp.com/channel/0029Va8gvx7Fy72BDgJYIf1V>

CLICK HERE TO JOIN FOR FREE NOTES & PDF -



FOR - ALL TEACHING EXAM

CTET & STATE TETs



FOR - NVS



EMRS



KVS



DSSSB PREVIOUS YEAR PAPER - CLICK HERE

DSSSB , KVS, CTET, EMRS, NVS , BPSC , RPSC , UPTET , AEES , AWES , CHANDIGRAH , ALL STATE TETs EXAM & Other Departments Related NTT PRT TGT & PGT सभी Teaching Jobs और Others Non-Teaching Govt. Jobs की Updates प्राप्त कर सकते हैं . JOIN for FREE NOTES & PDF.



JOIN WHATSAPP CHANNEL - CLICK HERE

